

A black and white background image showing a molecular structure with spheres representing atoms and lines representing bonds, set against a dark, textured background.

THIRD EDITION

**A TEXTBOOK OF
PHYSICAL
CHEMISTRY**

**APPLICATIONS OF
THERMODYNAMICS
(SI UNITS)**

VOLUME 3

K L KAPOOR

thermodynamics

A Textbook of Physical Chemistry

Volume 3

(SI Units)

Applications of Thermodynamics

Third Edition



K. L. KAPOOR





© K.L. Kapoor, 1980, 2001, 2012

All rights reserved. No part of this publication may be reproduced or transmitted, in any form or by any means, without permission. Any person who does any unauthorised act in relation to this publication may be liable to criminal prosecution and civil claims for damages.

First published, 1980

Reprinted, 1986, 1991, 1997, 1999

Second edition, 2001

Reprinted, 2002, 2004, 2005 (twice), 2007, 2008, 2009, 2010

Third edition, 2012, 2013

MACMILLAN PUBLISHERS INDIA LTD

Delhi Bangalore Chennai Kolkata Mumbai
Bhopal Chandigarh Coimbatore Cuttack Guwahati
Hubli Hyderabad Jaipur Lucknow Madurai Nagpur
Patna Pune Raipur Thiruvananthapuram Visakhapatnam

Associated companies throughout the world

ISBN: 978-935-059-022-5

Published by Amitabh Nagpal for Macmillan Publishers India Ltd,
3A, 5th Floor, DLF Corporate Park, Gurgaon 122 002 (Haryana), India


Lasertypeset by Sara Assignments
A-4/B-49, Joshi Colony, Patparganj Extn., Delhi 110 092

Printed at Sanat Printers
312 EPIP, Kundli, Haryana 131028

This book is meant for educational and learning purposes. The author(s) of the book has/have taken all reasonable care to ensure that the contents of the book do not violate any existing copyright or other intellectual property rights of any person in any manner whatsoever. In the event the author(s) has/have been unable to track any source and if any copyright has been inadvertently infringed, please notify the publisher in writing for corrective action.

*To the memory of
my parents*





Preface to the Third Edition

This edition of the book has been designed to incorporate the latest recommendations in the field of Physical Chemistry. A few modifications in this book are mentioned here.


- The book is restructured so as to include the application of principle and equations in the form of solved examples. There are about 150 such examples in this textbook.
- The entire subject matter has been presented with proper sub-headings to facilitate the reader to understand the text in a more systematic manner.
- Chapters on Equilibrium between Phases, Colligative Properties and Solutions have been rewritten.
- In the chapter of Colligative Properties, interconversion of concentration units (amount fraction, molarity and molality) along with solved examples has been added.
- A brief description of activity and its relation with molality has been added in the chapter of Electrochemical Cells.
- SI units are used throughout.
- The standard-state pressure is changed from 101.325 kPa to 1 bar as recommended by IUPAC.

Volume 3 describes the applications of thermodynamics to the equilibria between phases, Colligative properties, phase rule, solutions, phase diagrams of one-, two-, and three-component systems and electrochemical cells.

I wish to extend my appreciation to the students and teachers of Delhi university for the constructive suggestions in bringing out this edition of the book. I also wish to thank my children Saurabh and Surabhi for many useful suggestions in improving the presentation of the book.

New Delhi
October, 2011

K.L. KAPOOR



Preface to the First Edition

In recent years the teaching curriculum of physical chemistry in many Indian universities has been restructured with a greater emphasis on a theoretical and conceptual methodology and the applications of the underlying basic concepts and principles. The shift in the emphasis, as I have observed, has unduly frightened the undergraduates whose performance in physical chemistry has been otherwise generally far from satisfactory. This poor performance is partly because of the nonavailability of a comprehensive textbook which also lays adequate stress on the logical deduction and solution of numericals and related problems. Naturally, the students find themselves unduly constrained when they are forced to refer to various books to collect the necessary reading material. It is primarily to help these students that I have ventured to present a textbook which provides a systematic and comprehensive coverage of the theory as well as of the illustration of the applications thereof.

The present book grew out of more than a decade of classroom teaching through lecture-notes and assignments prepared for my students of B.Sc. (General) and B.Sc. (Hons). The schematic structure of the book is assigned to cover the major topics of physical chemistry in four different volumes. Volume I discusses the states of matter and ions in solutions. It comprises five chapters on the gaseous state, physical properties of liquids, solid state, ionic equilibria and conductance. Volume II describes the basic principles of thermodynamics and chemical equilibrium in seven chapters, viz., introduction and mathematical background, zeroth and first laws of thermodynamics, thermochemistry, second law of thermodynamics, criteria for equilibrium and A and G functions, systems of variable composition, and thermodynamics of chemical reactions. Volume III seeks to present the applications of thermodynamics to the equilibria between phases, colligative properties, phase rule, solutions, phase diagrams of one-, two- and three-component systems, and electrochemical cells. Volume IV deals with quantum chemistry and the dynamics of chemical reactions: it focuses on atomic structure, chemical bonding, electrical and magnetic properties, molecular spectroscopy, adsorption, chemical kinetics, catalysis and photochemistry.

The study of physical chemistry is incomplete if the student confines himself to the ambit of theoretical discussions of the subject. He must grasp the practical significance of the basic theory in all its ramifications and develop a clear perspective to appreciate various problems and how they can be solved. It is here that this book merits mention. Apart from having a lucid style and simplicity of expression, the book has a wealth of carefully selected examples and solved illustrations. Further, three types of problems with different objectives in view are listed at the end of each chapter: (1) Revisionary Problems (2) Try Yourself Problems and (3) Numerical Problems. Under Revisionary Problems, only those problems pertaining to the text are included which should afford an opportunity to the students in self-evaluation. In Try Yourself Problems, the problems related to the text but not highlighted therein are provided. Such problems will help the students

extend their knowledge of the chapter to closely related problems. Finally, unsolved numericals are pieced together for the practice of the students.

Though the present textbook is written on the basis of the syllabi prescribed for undergraduate courses of the University of Delhi, it will also prove useful to students of other universities, since the content of physical chemistry remains the same everywhere. In general, the SI units (*Systeme International d' unite's*) along with some of the common non-Si units such as atm, mmHg, etc., have been used in the book.

I wish to acknowledge my greatest indebtedness to my teacher, Prof. R.P. Mitra, who instilled in me the spirit of scientific inquiry. I also record my sense of appreciation to my students and colleagues at Hindu College, University of Delhi, for their comments, constructive criticism and valuable suggestions towards improvement of the book. I would also like to thank Dr. M. Katyai for his valuable suggestions and keen interest in the publication of the book. I thank Mr. Puran Singh for typing the manuscript. Finally, my special thanks go to my wife Pratima for her encouragement, patience and understanding.

The author takes the entire responsibility for any error or ambiguity in fact or opinion that may have found their way into this book. Comments and criticism from readers will therefore be highly appreciated and incorporated in subsequent editions.

New Delhi
September, 1984

K.L. KAPOOR

lly, unsolved

oi prescribed
ve useful to
remains the
vite's) along
been used in

, Prof. R.P.
my sense of
ty of Delhi,
ns towards
his valuable
Mr. Puran
ife Pratima

ty in fact or
d criticism
subsequent

KAPOOR

Contents

<i>Preface to the Third Edition</i>	vii
<i>Preface to the First Edition</i>	ix
1. EQUILIBRIUM BETWEEN PHASES	1
1.1 Thermodynamic Criterion of Phase Equilibria	1
1.2 Chemical Potential Versus Temperature Graphs of a Pure Substance	3
1.3 Effect of Pressure on the Chemical Potential Versus Temperature Graphs	4
1.4 Clapeyron Equation	6
1.5 Application of Clapeyron Equation	7
1.6 First- and Second-order Phase Transitions	23
1.7 Effect of Pressure on the Vapour Pressure of a Liquid	26
2. COLLIGATIVE PROPERTIES	34
2.1 Solution	34
2.2 Methods of Expressing Concentration of a Solution	34
2.3 Lowering of Vapour Pressure – Experimental Observations	41
2.4 Relative Lowering of Vapour Pressure	43
2.5 Chemical Potentials of Solute and Solvent in an Ideal Liquid Solution	45
2.6 Origin of Colligative Properties	47
2.7 Elevation of Boiling Point	50
2.8 Depression of Freezing Point	57
2.9 Osmosis and Osmotic Pressure	64
2.10 Relations Between Different Colligative Properties	72
2.11 Colligative Properties of Strong and Weak Electrolytes	75
2.12 Solubility of a Solute in an Ideal Solution	83
3. PHASE RULE	95
3.1 Introduction and Definitions	95
3.2 Derivation of Phase Rule	98
3.3 Some Typical Examples to Compute the Number of Components	104

4. SOLUTIONS	112
4.1 Ideal Solubility of Gases in Liquids	112
4.2 Effect of Pressure and Temperature on the Solubility of Gases	115
4.3 Henry's Law and Raoult's Law	120
4.4 Raoult's Law for Solvent and Henry's Law for Solute	124
4.5 Derivations of Raoult's and Henry's Laws from Kinetic-Molecular Theory	126
4.6 Ideal and Ideally Dilute Solutions	128
4.7 Variation of Henry's Law Constant with Temperature	129
4.8 Thermodynamics of Ideal Solutions of Liquid in Liquid	130
4.9 Vapour Pressure of an Ideal Binary Liquid Solution	134
4.10 Vapour Pressure-Composition Diagram of a Binary Liquid Solution	139
4.11 Isothermal Fractional Distillation of an Ideal Binary Solution	144
4.12 Temperature-Composition Diagram of a Binary Liquid Solution	152
4.13 Isobaric Fractional Distillation of an Ideal Binary Solution	157
4.14 Nonideal Solutions of Liquid in Liquid	162
4.15 The Duhem-Margules Equation	167
4.16 Temperature-Composition Diagrams of Nonideal Solutions	172
4.17 Konowaloff's Rule - Revisited	175
4.18 Partially Miscible Liquids	179
4.19 Completely Immiscible Liquids (Steam Distillation)	192
4.20 Distribution of a Solute Between Two Immiscible Liquids - The Nernst Distribution Law	194
5. PHASE DIAGRAMS OF ONE-COMPONENT SYSTEMS	217
5.1 Application of the Phase Rule	217
5.2 Qualitative Discussion of a Phase Diagram	217
5.3 Phase Diagram of Water	220
5.4 Polymorphism	225
6. PHASE DIAGRAMS OF TWO-COMPONENT SYSTEMS	245
6.1 Application of the Phase Rule	245
6.2 Classification of Diagrams	246
6.3 Thermal Analysis	246
6.4 Crystallization of Pure Components - Simple Eutectic Phase Diagram	250

- 6.5 Crystallization of Pure Components and One of the Solids Exists in More than One Crystalline Form 261
- 6.6 Formation of a Compound Stable up to Its Melting Point 266
- 6.7 Formation of a Compound which Decomposes Before Attaining its Melting Point 272
- 6.8 Formation of a Complete Series of Solid Solutions 284
- 6.9 Formation of Partial Miscibility in the Solid State Leading to Stable Solid Solutions 296
- 6.10 Formation of Partial Miscibility in the Solid Phase Leading to Solid Solutions Stable up to a Transition Temperature 301
- 6.11 Formation of Partial Miscibility in the Liquid Phase and Crystallization of Pure Components 307
- 6.12 Phase Diagrams of Aqueous Solutions of Salts 311

7. PHASE DIAGRAMS OF THREE-COMPONENT SYSTEMS 336

- 7.1 Application of the Phase Rule 336
- 7.2 Scheme of Triangular Plot 336
- 7.3 Systems of Three Liquid Components Exhibiting Partial Miscibility 345
- 7.4 Triangular Plots of a Ternary System Depicting Crystallization of its Components at Various Temperatures 358
- 7.5 Ternary Systems of Two Solid Components and a Liquid 373
- 7.6 Crystallization of Pure Components Only 373
- 7.7 Formation of Binary Compounds such as Hydrates 379
- 7.8 Formation of a Double Salt 382
- 7.9 Formation of a Ternary Compound 389
- 7.10 Formation of Solid Solutions 392
- 7.11 Formation of Solid Solutions with Partial Miscibility 395
- 7.12 Salting out Phenomenon 396
- 7.13 Experimental Methods Employed for Obtaining Triangular Plots 397

8. ELECTROCHEMICAL CELLS 409

- 8.1 Introduction 409
- 8.2 Reversible and Irreversible Cells 413
- 8.3 Electromotive Force and its Measurement 414
- 8.4 Formulation of a Galvanic Cell 417
- 8.5 Electrical and Electrochemical Potentials 418
- 8.6 Different Types of Half-Cells and Their Reduction Potentials 419

8.7 The EMF of a Cell and its Cell Reaction 426

8.8 Determination of Standard Potentials 434

8.9 Significance of Standard Half-Cell Potentials 436

8.10 Influence of Ionic Activity on Reduction Potential 450

8.11 Effect of Complex Formation on Reduction Potential 452

8.12 Relation Between Metal-metal Ion Half-Cell
and the Corresponding Metal-Insoluble
Salt-Anion Half-Cell 454

8.13 Cell Reaction and its Relation with Cell Potential 458

8.14 Calculation of Standard Potential for an Unknown
Half-Cell Reaction 460

8.15 Reference Half-Cells 462

8.16 Expression of E_{cell} in the Unit of Molality 464

8.17 Determination of Accurate Value of Half-Cell
Potential 467

8.18 Applications of Electrochemical Cells 470

8.19 Construction of Potentiometric Titration Curves 495

8.20 Concentration Cells without Liquid Junction
Potential 514

8.21 Concentration Cells with Liquid Junction Potential 519

8.22 Commercial Cells 528

8.23 Solved Problems 530

Annexure I: Concept of Activity 559

Annexure II: Derivation of Debye-Hückel Law 563

Annexure III: Operational Definition of pH 570

Appendix I: Units and Conversion Factors 571

1.1 THE
An Exar
a Subst:
Distribu
Two Ph:

1

Equilibrium Between Phases

1.1 THERMODYNAMIC CRITERION OF PHASE EQUILIBRIA

An Example of a Substance Distributed Between Two Phases

Consider a system in which a pure substance B is present in two phases in equilibrium with each other. Let $\mu_{B(\alpha)}$ and $\mu_{B(\beta)}$ denote the chemical potentials of the substance in phase α and phase β , respectively. The Gibbs function of the system is given by

$$G = f(T, p, n_{B(\alpha)}, n_{B(\beta)}) \quad (1.1.1)^\dagger$$

where $n_{B(\alpha)}$ and $n_{B(\beta)}$ are the amounts of the substance B in phases α and β , respectively. The change in Gibbs function of the system as a result of changes in T , p , $n_{B(\alpha)}$ and $n_{B(\beta)}$ is given by

$$dG = \left(\frac{\partial G}{\partial T} \right)_{p, n_{B(\alpha)}, n_{B(\beta)}} dT + \left(\frac{\partial G}{\partial p} \right)_{T, n_{B(\alpha)}, n_{B(\beta)}} dp \\ + \left(\frac{\partial G}{\partial n_{B(\alpha)}} \right)_{T, p, n_{B(\beta)}} dn_{B(\alpha)} + \left(\frac{\partial G}{\partial n_{B(\beta)}} \right)_{T, p, n_{B(\alpha)}} dn_{B(\beta)}$$

or

$$dG = \left(\frac{\partial G}{\partial T} \right)_{p, n_{B(\alpha)}, n_{B(\beta)}} dT + \left(\frac{\partial G}{\partial p} \right)_{T, n_{B(\alpha)}, n_{B(\beta)}} dp \\ + \mu_{B(\alpha)} dn_{B(\alpha)} + \mu_{B(\beta)} dn_{B(\beta)} \quad (1.1.2)$$

If the amount dn_B of the substance is transferred from phase α to phase β at constant temperature and pressure, then from Eq. (1.1.2), we have

$$dG = \mu_{B(\alpha)} (-dn_B) + \mu_{B(\beta)} (dn_B) \\ = (\mu_{B(\beta)} - \mu_{B(\alpha)}) dn_B \quad (1.1.3)$$

If the above transfer takes place reversibly, then

$$dG = 0$$

[†] Throughout this book, phase is written within brackets drawn immediately after the substance.

and Eq. (1.1.3) reduces to

$$(\mu_{B(\beta)} - \mu_{B(\alpha)}) dn_B = 0 \quad (1.1.4)$$

Since $dn_B \neq 0$, it follows that

$$\mu_{B(\alpha)} = \mu_{B(\beta)} \quad (1.1.5)$$

that is, if a substance is in equilibrium between two phases, its chemical potential must have the same value in both the phases.

Generalized Treatment

The above criterion of a substance present in two phases in equilibrium may be generalized for a system containing more than one phase and each phase containing more than one substance. Let us consider a closed system at a given temperature and pressure containing the amounts n_1, n_2, n_3, \dots of components 1, 2, 3, \dots , respectively. The differential of the Gibbs function of each phase at constant temperature and pressure may be written as

$$\begin{aligned} dG_{(\alpha)} &= \mu_{1(\alpha)} dn_{1(\alpha)} + \mu_{2(\alpha)} dn_{2(\alpha)} + \mu_{3(\alpha)} dn_{3(\alpha)} + \dots \\ dG_{(\beta)} &= \mu_{1(\beta)} dn_{1(\beta)} + \mu_{2(\beta)} dn_{2(\beta)} + \mu_{3(\beta)} dn_{3(\beta)} + \dots \\ dG_{(\gamma)} &= \mu_{1(\gamma)} dn_{1(\gamma)} + \mu_{2(\gamma)} dn_{2(\gamma)} + \mu_{3(\gamma)} dn_{3(\gamma)} + \dots \end{aligned} \quad (1.1.6)$$

The total change of Gibbs function is given by

$$dG = dG_{(\alpha)} + dG_{(\beta)} + dG_{(\gamma)} + \dots = 0 \quad (1.1.7)$$

(This is zero because of equilibrium between the phases.)

Since the system over all is a closed system, the sum of changes of the substances in various phases must be zero. Thus, we have

$$\begin{aligned} dn_{1(\alpha)} + dn_{1(\beta)} + dn_{1(\gamma)} + \dots &= 0 \\ dn_{2(\alpha)} + dn_{2(\beta)} + dn_{2(\gamma)} + \dots &= 0 \\ dn_{3(\alpha)} + dn_{3(\beta)} + dn_{3(\gamma)} + \dots &= 0 \end{aligned} \quad (1.1.8)$$

Equation (1.1.8) can be rewritten as

$$\begin{aligned} dn_{1(\alpha)} &= -(dn_{1(\beta)} + dn_{1(\gamma)} + \dots) \\ dn_{2(\alpha)} &= -(dn_{2(\beta)} + dn_{2(\gamma)} + \dots) \\ dn_{3(\alpha)} &= -(dn_{3(\beta)} + dn_{3(\gamma)} + \dots) \end{aligned}$$

Substituting these in Eq. (1.1.7) and rearranging, we get

$$\begin{aligned} &(\mu_{1(\beta)} - \mu_{1(\alpha)}) dn_{1(\beta)} + (\mu_{1(\gamma)} - \mu_{1(\alpha)}) dn_{1(\gamma)} + \dots \\ &+ (\mu_{2(\beta)} - \mu_{2(\alpha)}) dn_{2(\beta)} + (\mu_{2(\gamma)} - \mu_{2(\alpha)}) dn_{2(\gamma)} + \dots \\ &+ (\mu_{3(\beta)} - \mu_{3(\alpha)}) dn_{3(\beta)} + (\mu_{3(\gamma)} - \mu_{3(\alpha)}) dn_{3(\gamma)} + \dots = 0 \end{aligned}$$

1.2 CHE
Factor D
the Slop

Diagr
Repre
Conc

Since all dn_s are independent variables, we must have

$$(1.1.4) \quad \mu_{1(\alpha)} = \mu_{1(\beta)} = \mu_{1(\gamma)} = \dots$$

$$(1.1.5) \quad \mu_{2(\alpha)} = \mu_{2(\beta)} = \mu_{2(\gamma)} = \dots$$

$$(1.1.5) \quad \mu_{3(\alpha)} = \mu_{3(\beta)} = \mu_{3(\gamma)} = \dots$$

$$\dots\dots\dots (1.1.9)$$

that is, if the system is in equilibrium, the chemical potential of any one component must have the same value in each phase in which it exists.

1.2 CHEMICAL POTENTIAL VERSUS TEMPERATURE GRAPHS OF A PURE SUBSTANCE

Factor Determining the Slope of Graph

For a pure substance, we have

$$d\mu = -S_m dT + V_m dp \quad (1.2.1)$$

where S_m and V_m are its molar entropy and volume, respectively. The expression for the slope of μ versus T curve at a constant pressure as obtained from Eq. (1.2.1) is

$$1.1.6) \quad \left(\frac{\partial\mu}{\partial T}\right)_p = -S_m \quad (1.2.2)$$

Now S_m of a given substance in any phase, i.e. solid(s), liquid(l) or gas(g), is always positive with the result that the slope of μ versus T curve at a constant pressure is always negative

1.1.7) For the three phases of a given substance, we have

$$f \text{ the } \left(\frac{\partial\mu_s}{\partial T}\right)_p = -S_{m,s}; \quad \left(\frac{\partial\mu_l}{\partial T}\right)_p = -S_{m,l}; \quad \left(\frac{\partial\mu_g}{\partial T}\right)_p = -S_{m,g}$$

At any temperature, since

$$S_{m,s} < S_{m,l} \ll S_{m,g}$$

it follows that

$$8) \quad -S_{m,s} > -S_{m,l} \gg -S_{m,g} \quad (1.2.3)$$

In other words, we have:

- The slope of μ versus T curve for a substance in the solid phase has a small negative value as $S_{m,s}$ has a small value.
- The slope of μ versus T curve for the liquid phase is slightly more negative than that of the solid phase.
- The slope of μ versus T curve for the gaseous phase has a large negative value as $S_{m,g}$ is very much larger than that of the liquid.

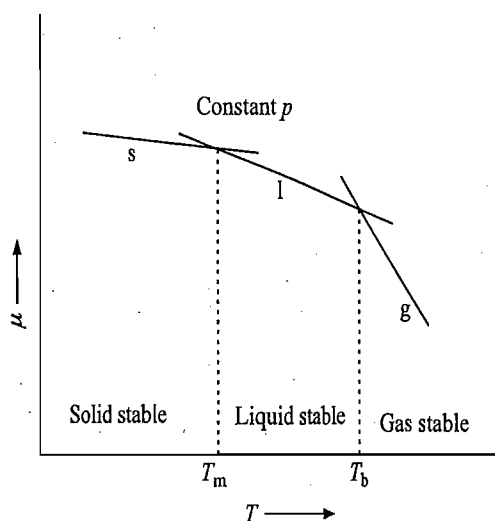
Diagrammatic Representation

The above characteristics are shown in Fig. 1.2.1:

Conclusion

It will be seen from Fig. 1.2.1 that the curve for the solid and liquid phases intersect each other at temperature T_m . At this temperature, the chemical potential

Fig. 1.2.1 Chemical potential versus temperature graphs of solid, liquid and gaseous phases of a pure substance



of the substance is same in both the phases and, consequently, it represents the solid-liquid equilibrium. The temperature T_m is the melting point (m.pt.) of the solid. Similarly, the curves for the liquid and gaseous phases intersect each other at temperature T_b where $\mu_l = \mu_g$. At this point, the liquid and gaseous phases coexist in equilibrium with each other. The temperature T_b is the boiling point (b.pt.) of the liquid.

The state of the system at any temperature can be obtained from Fig. 1.2.1. Thus, we have:

- (i) $T < T_m$: μ_s has the lowest value and thus the solid phase is stable.
- (ii) $T = T_m$: $\mu_s = \mu_l$; solid and liquid phases are in equilibrium.
- (iii) $T_b > T > T_m$: μ_l has the lowest value and thus the liquid phase is stable.
- (iv) $T = T_b$: $\mu_l = \mu_g$; liquid and gaseous phases are in equilibrium.
- (v) $T > T_b$: μ_g has the lowest value and thus the gaseous phase is stable.

1.3 EFFECT OF PRESSURE ON THE CHEMICAL POTENTIAL VERSUS TEMPERATURE GRAPHS

Factor Determining the Slope of Graph

It can be seen from Eq. (1.2.1) that at constant temperature

$$\left(\frac{\partial \mu}{\partial p}\right)_T = V_m \tag{1.3.1}$$

Since V_m is always positive, it follows that $d\mu$ has the same sign as that of dp , i.e. $d\mu$ is positive if dp is positive and it is negative if dp is negative.

If the pressure is changed by an infinitesimal amount dp at constant temperature, the change in the chemical potential is given by

$$d\mu = V_m dp \tag{1.3.2}$$

Since for most substances

$$V_{m,g} \gg V_{m,l} > V_{m,s}$$

it follows that the order of change in chemical potential is

$$|d\mu_g| \gg |d\mu_l| > |d\mu_s| \tag{1.3.3}$$

Diagramm:
Represent:

Fig. 1.3.1
pressure
potential
temperat
substance
 $V_{m,l} > V_{m,s}$

Conclu

Condit
Sublin
Substa

Diagrammatic Representation

Figure 1.3.1 shows qualitatively the effects which are produced on the chemical potential (shown by dotted lines) of a substance in the three phases when pressure of the system is reduced. The decrease at a given temperature is smallest for the solid phase and largest for the gaseous phase (Eq. 1.3.3). For example, at a temperature T , the decrease in chemical potential for solid is from a to a' , for liquid from b to b' and that for gas from c to c' . The decrease c to c' is much larger than from a to a' and b to b' .

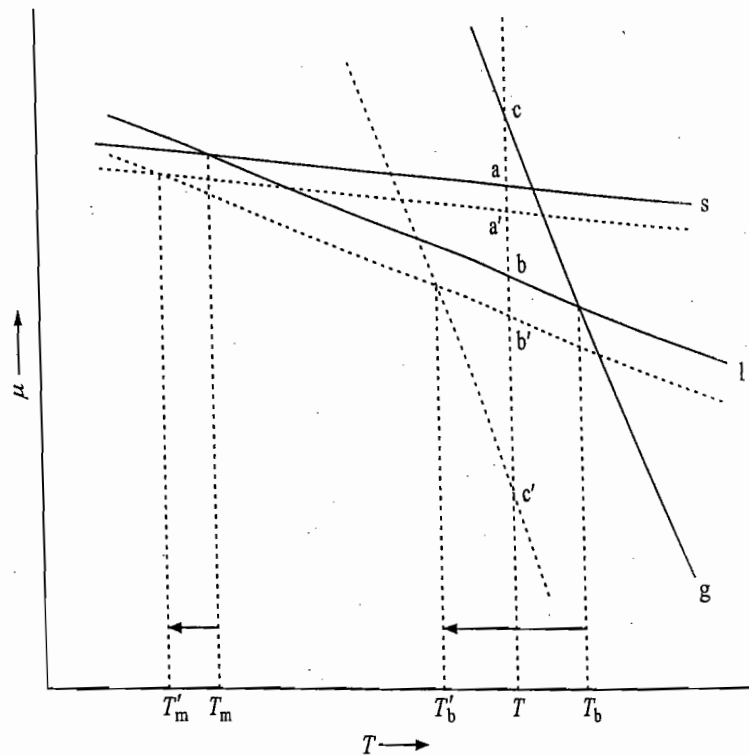


Fig. 1.3.1 Effect of pressure on the chemical potential versus temperature plots of a substance having $V_{m,l} > V_{m,s}$

Conclusion

The following conclusions may be drawn from Fig. 1.3.1.

The melting point as well as the boiling point shifts to a lower value as the pressure is decreased; the shift is relatively larger for boiling point.

Condition for Sublimation of a Substance

The temperature difference between T_m and T_b decreases with decrease in pressure. This indicates that the temperature range over which the liquid phase can exist is decreased. If the pressure is decreased to a sufficiently low value, it may happen that the liquid is not formed, the solid directly passes over to the gaseous form. This happens when the boiling point of the liquid falls below the melting point of the solid as shown in Fig. 1.3.2.

The temperature T_s is the sublimation temperature and is found to be very sensitive to changes in pressure.

From Fig. 1.3.2, it may be concluded that if:

- (i) $T < T_s$: μ_s has the lowest value and thus the solid phase is stable,
- (ii) $T = T_s$: $\mu_s = \mu_g$, both solid and gaseous phases coexist in equilibrium,
- (iii) $T > T_s$: μ_g has the lowest value and thus the gaseous phase is stable.

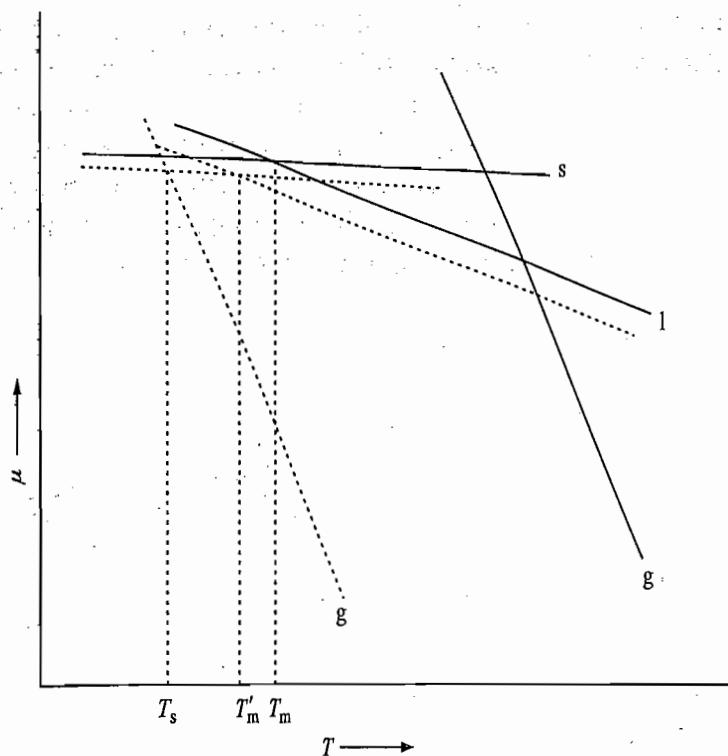


Fig. 1.3.2 Effect of a large decrease in pressure on μ versus T plots

Fig. 1.3.3 pressure potentialia tempera substan $V_{m,1} <$

The effects which are produced when the pressure is increased are exactly opposite to those described above. There is an increase in melting point as well as boiling point of the substance; the increase in boiling point is relatively larger, and this enhances the stability of the liquid phase.

Effect on a Substance Involving a Decrease in Volume on Melting

The effect of pressure on the melting and boiling points of a substance which shows a decrease in volume on melting can likewise be discussed. In this case, the decrease of chemical potential of the solid will be larger than that of the liquid as shown in Fig. 1.3.3. It is obvious from Fig. 1.3.3 that there occurs an increase instead of a decrease in the melting point of the solid as the pressure is decreased. The increase in pressure will consequently decrease the melting point of such type of substances. Examples include water, bismuth and antimony.

1.4 CLAPEYRON EQUATION

Derivation of Clapeyron Equation

Let us consider a system in which a pure substance B is present in two phases α and β . The two phases may be either solid and liquid, or solid and vapour, or liquid and vapour. At equilibrium, we will have

$$\mu_{B(\alpha)} = \mu_{B(\beta)} \tag{1.4.1}$$

Now let the temperature of the system be changed by an infinitesimal amount. When the equilibrium is re-established, the pressure also undergoes a change by an infinitesimal amount. Under these conditions, the chemical potentials $\mu_{B(\alpha)}$ and $\mu_{B(\beta)}$ also change by infinitesimal amounts $d\mu_{B(\alpha)}$ and $d\mu_{B(\beta)}$, respectively. Since the system is again in equilibrium, it follows that

$$\mu_{B(\alpha)} + d\mu_{B(\alpha)} = \mu_{B(\beta)} + d\mu_{B(\beta)} \tag{1.4.2}$$

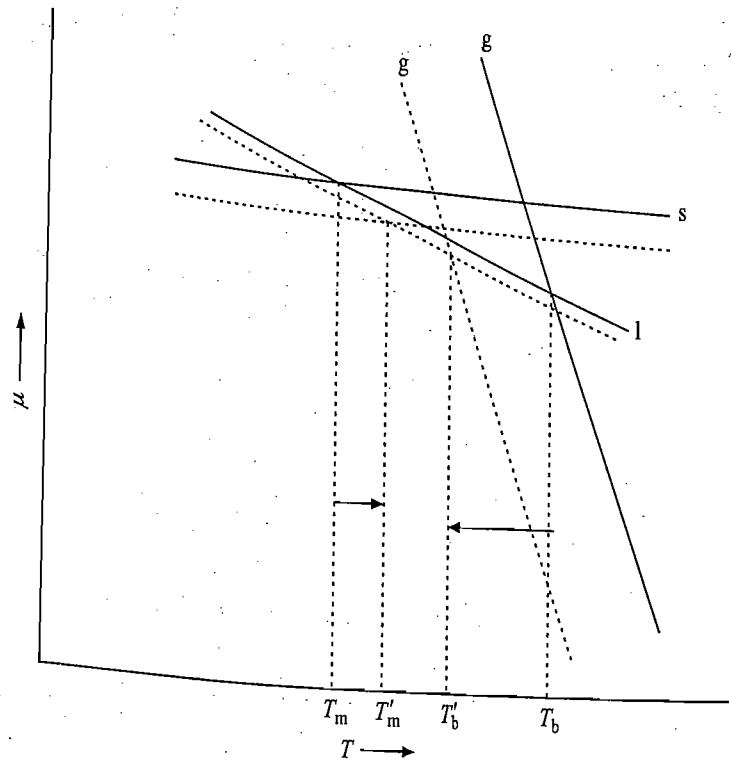


Fig. 1.3.3 Effect of pressure on chemical potential versus temperature plot of a substance having $V_{m,1} < V_{m,s}$

Making use of Eq. (1.4.1), this reduces to

$$d\mu_{B(\alpha)} = d\mu_{B(\beta)} \quad (1.4.3)$$

Writing $d\mu_s$ in the explicit form in terms of dT and dp , we get

$$\begin{aligned} d\mu_{B(\alpha)} &= -S_{m,B(\alpha)} dT + V_{m,B(\alpha)} dp \\ d\mu_{B(\beta)} &= -S_{m,B(\beta)} dT + V_{m,B(\beta)} dp \end{aligned} \quad (1.4.4)$$

where $S_{m,B(\alpha)}$ and $V_{m,B(\alpha)}$ are molar entropy and molar volume of the substance B in the phase α , respectively, and $S_{m,B(\beta)}$ and $V_{m,B(\beta)}$ are those in the phase β . Substituting Eq. (1.4.4) in Eq. (1.4.3), we get

$$-S_{m,B(\alpha)} dT + V_{m,B(\alpha)} dp = -S_{m,B(\beta)} dT + V_{m,B(\beta)} dp$$

Rearranging, we get

$$\frac{dp}{dT} = \frac{S_{m,B(\beta)} - S_{m,B(\alpha)}}{V_{m,B(\beta)} - V_{m,B(\alpha)}} = \frac{\Delta_{\text{trs}} S_{m,B}}{\Delta_{\text{trs}} V_{m,B}} \quad (1.4.5)$$

where $\Delta_{\text{trs}} S_{m,B}$ and $\Delta_{\text{trs}} V_{m,B}$ are the respective changes in entropy and volume of the system when 1 mol of pure substance B is transferred from the phase α to the phase β .

Equation (1.4.5) is known as the *Clapeyron equation*.

1.5 APPLICATION OF CLAPEYRON EQUATION

In this section, we consider the application of Clapeyron equation to the two-phase equilibria involving solid and liquid, solid and vapour, liquid and vapour, and solid and solid.

Solid-Liquid Equilibrium

If one mole of the substance B is transformed from the solid phase to the liquid phase, then we have

$$\Delta_{\text{trs}} S_{m, B} = S_{m, B(l)} - S_{m, B(s)} = \Delta_{\text{fus}} S_{m, B} \quad (1.5.1)$$

$$\Delta_{\text{trs}} V_{m, B} = V_{m, B(l)} - V_{m, B(s)} = \Delta_{\text{fus}} V_{m, B} \quad (1.5.2)$$

At the equilibrium temperature, the transformation of the substance from solid to liquid is reversible, hence

$$\Delta_{\text{fus}} S_{m, B} = \Delta_{\text{fus}} H_{m, B} / T \quad (1.5.3)$$

Substituting Eq. (1.5.3) in Eq. (1.4.5), we get

$$\frac{dp}{dT} = \frac{\Delta_{\text{fus}} S_{m, B}}{\Delta_{\text{fus}} V_{m, B}} = \frac{\Delta_{\text{fus}} H_{m, B}}{T \Delta_{\text{fus}} V_{m, B}} \quad (1.5.4)$$

The transformation of solid to liquid is always an endothermic process and hence $\Delta_{\text{fus}} H_m$ is a positive quantity. The term $\Delta_{\text{fus}} V_m$ may be positive or negative depending upon which one (whether solid or liquid) is more dense. For most substances, ρ_s is greater than ρ_l and hence $\Delta_{\text{fus}} V_m$ is positive. For substances such as water, bismuth and antimony, $\Delta_{\text{fus}} V_m$ is negative as the solid phase is less dense than the liquid phase.

Magnitude of dp/dT for Fusion Process

The ordinary magnitudes of the quantities $\Delta_{\text{fus}} S_m$ and $\Delta_{\text{fus}} V_m$ are

$$\Delta_{\text{fus}} S_m = 8 \text{ to } 25 \text{ J K}^{-1} \text{ mol}^{-1} \text{ and } \Delta_{\text{fus}} V_m = \pm (1 \text{ to } 10) \text{ cm}^3 \text{ mol}^{-1}$$

Taking the typical values of

$$\Delta_{\text{fus}} S_m = 20 \text{ J K}^{-1} \text{ mol}^{-1} \text{ and } \Delta_{\text{fus}} V_m = \pm 5 \text{ cm}^3 \text{ mol}^{-1}$$

we get

$$\begin{aligned} \frac{dp}{dT} &= \frac{20 \text{ J K}^{-1} \text{ mol}^{-1}}{\pm 5 \text{ cm}^3 \text{ mol}^{-1}} = \pm 4 \text{ J K}^{-1} \text{ cm}^{-3} = \pm 4 (\text{MPa cm}^3) \text{ K}^{-1} \text{ cm}^{-3} \\ &= \pm 4 \text{ MPa K}^{-1} = \pm 4 \times 10^3 \text{ kPa K}^{-1} = \pm 4 \times 10^3 \left(\frac{1}{101.325} \text{ atm} \right) \text{ K}^{-1} \\ &= \pm 39.5 \text{ atm K}^{-1} \end{aligned} \quad (1.5.5)$$

That is, the slope of pressure versus temperature graph for solid-liquid equilibrium has a large value. The graph is almost vertical. It is slightly tilted to the left (negative slope) if $\Delta_{\text{fus}} V_m$ is negative (Fig. 1.5.1).

Diagrammatic Representation of Pressure Variation with Temperature

The line of Fig. 1.5.1 represents equilibrium temperatures of solid-liquid equilibrium at various pressures, i.e. along the line solid and liquid phases coexist in a state of equilibrium with each other. A point lying anywhere on the left of the line corresponds to temperature below the melting point of the substance, and thus in this region only the solid form exists. A point on the right of the line corresponds to temperature above the melting point, and hence in this region only the liquid form exists.

Fig. 1.5.1
versus T
equilibrium
(a) $\Delta_{\text{fus}} V_m$
(b) $\Delta_{\text{fus}} V_m$

Integr
Clape

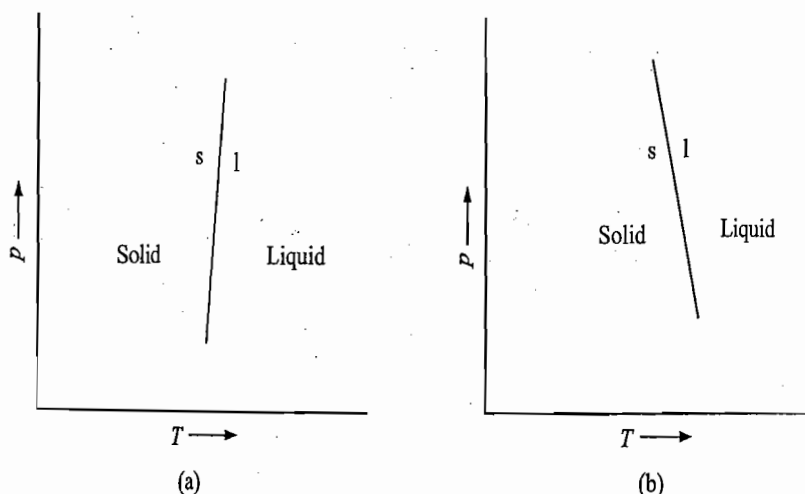


Fig. 1.5.1 Plot of p versus T for solid-liquid equilibrium, when
 (a) $\Delta_{\text{fus}}V_m = +ve$, and
 (b) $\Delta_{\text{fus}}V_m = -ve$

Now inverting Eq. (1.5.5), we get

$$\frac{dT}{dp} = \pm \frac{1}{39.5} \text{ K atm}^{-1} = \pm 0.025 \text{ K atm}^{-1}$$

Thus, change in the melting point of a solid with variation of external pressure is very small. The plus sign is meant for those substances which show an increase in volume on melting whereas the negative sign is meant for those substances where a decrease in volume on melting is observed. For most substances, $\rho_s > \rho_l$, and thus an increase in the melting point is observed with increase in external pressure. In case of substances for which volume decreases on melting (i.e. $\rho_s < \rho_l$), a decrease in the melting point occurs when the external pressure increases. Examples include ice, bismuth and antimony.

Integrated Form of Clapeyron Equation

The Clapeyron equation (Eq. 1.5.4) can be written as

$$dp = \frac{\Delta_{\text{fus}}H_m}{\Delta_{\text{fus}}V_m} \frac{dT}{T} \tag{1.5.6}$$

Integrating Eq. (1.5.6), we get

$$\int_{p_1}^{p_2} dp = \int_{T_m}^{T'_m} \frac{\Delta_{\text{fus}}H_m}{\Delta_{\text{fus}}V_m} \frac{dT}{T}$$

where T_m and T'_m are the melting points at pressures p_1 and p_2 , respectively. If $\Delta_{\text{fus}}H_m$ and $\Delta_{\text{fus}}V_m$ are considered independent of temperature and pressure, the above equation becomes

$$p_2 - p_1 = \frac{\Delta_{\text{fus}}H_m}{\Delta_{\text{fus}}V_m} \ln \left(\frac{T'_m}{T_m} \right)$$

Since the difference $T'_m - T_m$ is usually small, the logarithm term can be approximated to

$$\begin{aligned} \ln \left(\frac{T'_m}{T_m} \right) &= \ln \left(\frac{T_m + T'_m - T_m}{T_m} \right) = \ln \left(1 + \frac{T'_m - T_m}{T_m} \right) \\ &\approx \frac{T'_m - T_m}{T_m} = \frac{\Delta T}{T_m} \end{aligned}$$

Thus, we have

$$p_2 - p_1 = \Delta p = \frac{\Delta_{\text{fus}} H_m}{\Delta_{\text{fus}} V_m} \frac{\Delta T}{T_m} \quad (1.5.7)$$

Equation (1.5.7) describes variation in the melting point of a substance with the change in external pressure. The form of Eq. (1.5.7) is identical to that of Eq. (1.5.6) except that the infinitesimal changes dp and dT are replaced by finite changes Δp and ΔT , respectively.

Conclusion

It may be pointed out once again here that for a given increase in external pressure (i.e. Δp positive), the sign of ΔT depends on the sign of $\Delta_{\text{fus}} V_m$. Thus, we will have

ΔT positive if $\Delta_{\text{fus}} V_m$ is positive

ΔT negative if $\Delta_{\text{fus}} V_m$ is negative.

Example 1.5.1

The melting point of mercury is 234.5 K at 1.01325 bar pressure and it increases 5.033×10^{-3} K per bar increase in pressure. The densities of solid and liquid mercury are 14.19 and 13.70 g cm^{-3} , respectively, (a) Determine the molar enthalpy of fusion, (b) Calculate the pressure required to raise the melting point to 273 K.

Solution

(a) Since $\Delta p = (\Delta_{\text{fus}} H_m / \Delta_{\text{fus}} V_m) (\Delta T / T_m)$, we have

$$\Delta_{\text{fus}} H_m = \frac{(\Delta_{\text{fus}} V_m) T_m}{(\Delta T / \Delta p)}$$

$$\text{where } \Delta_{\text{fus}} V_m = V_{m,l} - V_{m,s} = M \left(\frac{1}{\rho_l} - \frac{1}{\rho_s} \right)$$

From the given data, we get

$$\begin{aligned} \Delta_{\text{fus}} V_m &= (200.59 \text{ g mol}^{-1}) \left(\frac{1}{13.70 \text{ g cm}^{-3}} - \frac{1}{14.19 \text{ g cm}^{-3}} \right) \\ &= 0.51 \text{ cm}^3 \text{ mol}^{-1} = 0.51 \times 10^{-3} \text{ dm}^3 \text{ mol}^{-1} \end{aligned}$$

$$\begin{aligned} \text{Hence, } \Delta_{\text{fus}} H_m &= \frac{(\Delta_{\text{fus}} V_m) T_m}{(\Delta T / \Delta p)} = \frac{(0.51 \times 10^{-3} \text{ dm}^3 \text{ mol}^{-1}) (234.5 \text{ K})}{(5.033 \times 10^{-3} \text{ K bar}^{-1})} \\ &= 23.30 \text{ dm}^3 \text{ bar mol}^{-1} \\ &= (23.30 \text{ dm}^3 \text{ bar mol}^{-1}) \left(\frac{100 \text{ kPa}}{1 \text{ bar}} \right) = 23.30 \times 10^2 \text{ J mol}^{-1} \\ &= 2.33 \text{ kJ mol}^{-1} \end{aligned}$$

(b) Substituting the given data in the expression

$$\Delta p = \frac{\Delta_{\text{fus}} H_m}{\Delta_{\text{fus}} V_m} \frac{\Delta T}{T_m}$$

$$\begin{aligned} \text{we get } \Delta p &= \frac{(23.30 \text{ dm}^3 \text{ bar mol}^{-1}) (38.5 \text{ K})}{(0.51 \times 10^{-3} \text{ dm}^3 \text{ mol}^{-1}) (234.5 \text{ K})} \\ &= 7501 \text{ bar} \end{aligned}$$

Liquid-Vapour Equilibrium

(1.5.7)

For the liquid-vapour equilibrium of the substance B, we have

$$\Delta_{\text{vap}} S_{m, B} = S_{m, B(g)} - S_{m, B(l)} = \frac{\Delta_{\text{vap}} H_m}{T} \quad (1.5.8)$$

$$\Delta_{\text{vap}} V_{m, B} = V_{m, B(g)} - V_{m, B(l)}$$

where $\Delta_{\text{vap}} S_{m, B}$ and $\Delta_{\text{vap}} V_{m, B}$ are the respective changes in entropy and volume during the vaporization of one mole of liquid B at its boiling point T . Since both $\Delta_{\text{vap}} S_m$ and $\Delta_{\text{vap}} V_m$ are positive, the quantity dp/dT is always positive, i.e. the slope of p versus T is always positive.

A Specific Illustration

For most substances, $\Delta_{\text{vap}} S_m \approx 90 \text{ J K}^{-1} \text{ mol}^{-1}$ (Trouton's rule) and $\Delta_{\text{vap}} V_m = 24.0 \text{ dm}^3 \text{ mol}^{-1}$, the quantity dp/dT has a value of the order of 0.037 atm K^{-1} as shown in the following.

$$\begin{aligned} \frac{dp}{dT} &= \frac{90 \text{ J K}^{-1} \text{ mol}^{-1}}{24.0 \text{ dm}^3 \text{ mol}^{-1}} = 3.75 \text{ kPa K}^{-1} \\ &= (3.75 \text{ kPa K}^{-1}) \left(\frac{1 \text{ atm}}{101.325 \text{ kPa}} \right) = 0.037 \text{ atm K}^{-1} \end{aligned}$$

This value is much smaller than that of the solid-liquid equilibrium.

Solid-Vapour Equilibrium

For the solid-vapour equilibrium of the substance B, we have

$$\Delta_{\text{sub}} S_{m, B} = S_{m, B(g)} - S_{m, B(s)} = \frac{\Delta_{\text{sub}} H_m}{T}; T \text{ is the sublimation temperature}$$

$$\Delta_{\text{sub}} V_{m, B} = V_{m, B(g)} - V_{m, B(s)}$$

where the subscript 'sub' stands for the sublimation process. Since both $\Delta_{\text{sub}} S_m$ and $\Delta_{\text{sub}} V_m$ are positive, the value of dp/dT is also positive.

Important Conclusion

At the triple point, where the three curves solid-liquid, solid-vapour and liquid vapour meet one another (Fig. 1.5.2), the slope of the solid-vapour curve is steeper than that of the liquid-vapour curve. This can be seen from the following analysis.

At the triple point

$$\Delta_{\text{sub}} H_m = \Delta_{\text{fus}} H_m + \Delta_{\text{vap}} H_m$$

and the slopes of the two curves are

$$\left(\frac{dp}{dT} \right)_{l \rightleftharpoons v} = \frac{\Delta_{\text{vap}} H_m}{T \Delta_{\text{vap}} V_m} \quad \text{and} \quad \left(\frac{dp}{dT} \right)_{s \rightleftharpoons v} = \frac{\Delta_{\text{sub}} H_m}{T \Delta_{\text{sub}} V_m}$$

Since $\Delta_{\text{sub}} H_m > \Delta_{\text{vap}} H_m$, it follows that

$$\left(\frac{dp}{dT} \right)_{s \rightleftharpoons v} > \left(\frac{dp}{dT} \right)_{l \rightleftharpoons v} \quad (1.5.9)$$

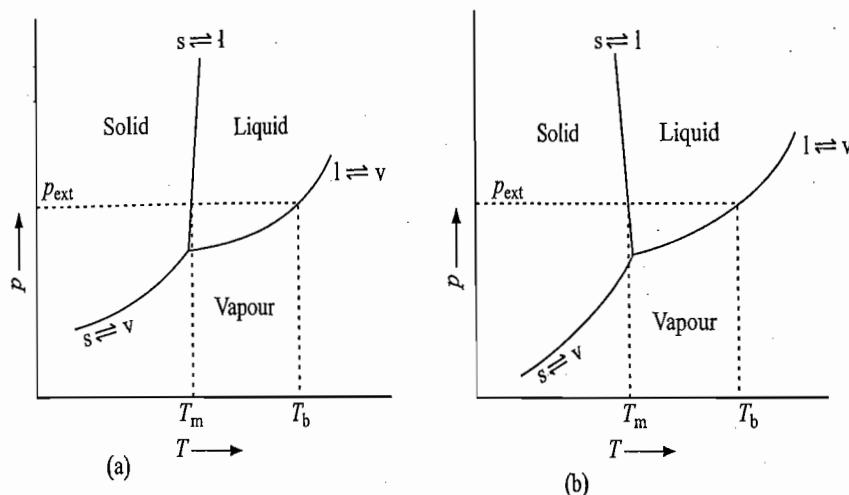


Fig. 1.5.2 Phase diagrams (a) carbon dioxide where $V_{m,1} > V_{m,s}$ and (b) water where $V_{m,1} < V_{m,s}$

Depiction of Phase Diagram

The three curves representing $s \rightleftharpoons l$, $l \rightleftharpoons v$ and $s \rightleftharpoons v$ are shown together in Fig. 1.5.2. This diagram, known as the *phase diagram*, shows the region of stability of different phases. It also depicts at a glance properties of the substance such as melting point, boiling point, transition points, triple points, etc. The melting point, boiling point and transition temperature (if any) are represented by the intersection points of a line drawn horizontally from the given external pressure with those of $s \rightleftharpoons l$, $l \rightleftharpoons v$ and $s \rightleftharpoons v$ curves, respectively. The state of the system at various temperatures for a given pressure (say, 1 atm) can also be predicted from the phase diagram. For example, in Fig. 1.5.2, we have

- $T < T_m$; only solid phase
- $T = T_m$; solid and liquid phases in equilibrium
- $T_b > T > T_m$; only liquid phase
- $T = T_b$; liquid and vapour phases in equilibrium
- $T > T_b$; only vapour phase.

The $l \rightleftharpoons v$ curve extends only up to a limit of critical pressure and temperature, because above these conditions, it is not possible to distinguish the vapour phase from the liquid phase.

We will show in Chapter 3 that the triple point of a given substance is observed at definite values of temperature and pressure. At this point, all the three phases are at equilibrium. For water, the triple point is observed at 4.58 Torr and 0.009 8 °C and that for CO₂ at 5.11 atm and -56.6 °C.

Integrated Form of Clapeyron Equation (Clausius-Clapeyron Equation)

The Clapeyron equation is

$$\frac{dp}{dT} = \frac{\Delta_{\text{trs}} S_{m,B}}{\Delta_{\text{trs}} V_{m,B}} \tag{Eq. 1.4.5}$$

At the transformation temperature T , the above expression becomes

$$\frac{dp}{dT} = \frac{\Delta_{\text{trs}} H_{m,B}}{T \Delta_{\text{trs}} V_{m,B}} \tag{1.5.10}$$

where $\Delta_{\text{trs}} H_{m,B}$ is either the molar enthalpy of vaporization of the liquid or the molar enthalpy of sublimation of the solid and $\Delta_{\text{trs}} V_{m,B}$ is given by

$$\Delta_{\text{trs}} V_{m,B} = V_{m,B(g)} - V_{m,B(s \text{ or } l)} \tag{1.5.11}$$

Clausii
Simpli

Integ
Claus
Equa

Dia
Del
Eq.

Op
Eq

Clausius Simplification

Clausius simplifies Eq. (1.5.11) by introducing the following two approximations.

1. $V_{m, B(g)} - V_{m, B(s \text{ or } l)} \approx V_{m, B(g)}$; since $V_{m, B(s \text{ or } l)} \ll V_{m, B(g)}$.
2. If the gaseous phase is assumed to be ideal, the molar volume of the gaseous phase may be replaced by RT/p .

With these approximations, the Clapeyron equation becomes

$$\frac{dp}{dT} = \frac{\Delta_{\text{trs}} H_m}{RT^2} p \quad \text{or} \quad \frac{dp}{p} = \frac{\Delta_{\text{trs}} H_m}{R} \frac{dT}{T^2} \quad (1.5.12)$$

Equation (1.5.12) is known as the Clausius-Clapeyron equation. It relates the vapour pressure of a condensed phase (solid or liquid) with its molar enthalpy of phase transformation (sublimation or vaporization) and the temperature of transformation.

Integrated Form of Clausius-Clapeyron Equation

Integration of Eq. (1.5.12) gives

$$\int_{p_1}^{p_2} \frac{dp}{p} = \int_{T_1}^{T_2} \frac{\Delta_{\text{trs}} H_m}{R} \frac{dT}{T^2}$$

where p_1 and p_2 are the vapour pressures of the condensed phase (solid or liquid) at temperatures T_1 and T_2 , respectively. If $\Delta_{\text{trs}} H_m$ is assumed to be independent of temperature, we get

$$\ln \left(\frac{p_2}{p_1} \right) = - \frac{\Delta_{\text{trs}} H_m}{R} \left(\frac{1}{T_2} - \frac{1}{T_1} \right) \quad (1.5.13)$$

If $p_1 = 1$ bar, then T_1 represents the normal sublimation (or boiling) point of the solid (or liquid) phase. Representing this by T^* , we get

$$\ln \left(\frac{p_2}{1 \text{ bar}} \right) = - \frac{\Delta_{\text{trs}} H_m}{R} \left(\frac{1}{T_2} - \frac{1}{T^*} \right)$$

Dropping the subscript 2, we get

$$\ln \left(\frac{p}{1 \text{ bar}} \right) = - \frac{\Delta_{\text{trs}} H_m}{R} \left(\frac{1}{T} - \frac{1}{T^*} \right) \quad (1.5.14)$$

Diagrammatic Depiction of Eq. (1.5.14)

If we plot $\ln(p/\text{atm})$ (or $\log p/\text{atm}$) versus $1/T$, we get a linear curve with slope equal to $-\Delta_{\text{trs}} H_m/R$ (or $-\Delta_{\text{trs}} H_m/2.303R$) as shown in Fig. 1.5.3. The intercept at $1/T=0$ yields the value of $\Delta_{\text{trs}} H_m/RT^*$ (or $\Delta_{\text{trs}} H_m/2.303RT^*$). From the determined values of slope and intercept, we can determine both $\Delta_{\text{trs}} H_m$ and T^* of the substance under study.

Open Integration of Eq. (1.5.12)

Dividing the numerator and denominator of left side of Eq. (1.5.12) by the unit vapour pressure (represented by p^\ominus), we get

$$\frac{(1/p^\ominus) dp}{(p/p^\ominus)} = \frac{\Delta_{\text{trs}} H_m}{R} \frac{dT}{T^2}$$

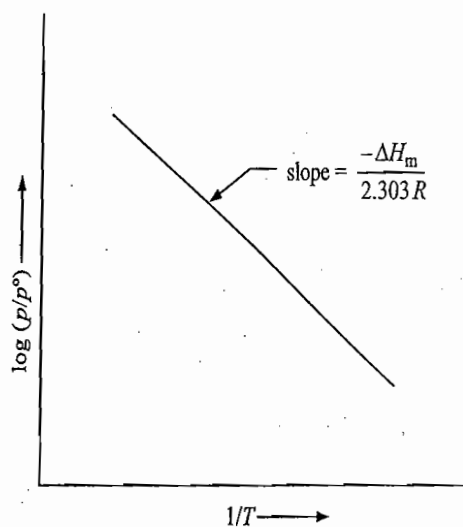


Fig. 1.5.3 Plot of $\log (p/p^\circ)$ versus $1/T$ for the condensed phase-vapour equilibria

The open integration of this expression gives

$$\ln \left(\frac{p}{p^\circ} \right) = - \frac{\Delta_{\text{trs}} H_m}{R} \frac{1}{T} + I \quad (1.5.15)$$

where I is a integration constant. Its values may be determined if the value of vapour pressure p at some known temperature T is known. In terms of common logarithm, Eq. (1.5.15) becomes

$$\log \left(\frac{p}{p^\circ} \right) = - \frac{\Delta_{\text{trs}} H_m}{20.303 R} \frac{1}{T} + I' \quad (1.5.16)$$

Note that the value of slope of Eq. (1.5.16) is independent of the unit of p° .

Example 1.5.2

At 373.15 K and 1 bar, the specific volume of water vapour is $1696 \text{ cm}^3 \text{ g}^{-1}$ and the value of dp/dT is $0.0362 \text{ bar K}^{-1}$. Calculate $\Delta_{\text{vap}} H_m$.

Solution

The given data are

$$T = 373.15 \text{ K}$$

$$V_g = 1696 \text{ cm}^3 \text{ g}^{-1} = (1696 \times 18) \text{ cm}^3 \text{ mol}^{-1} = 1.696 \times 18 \text{ dm}^3 \text{ mol}^{-1}$$

$$p = 1 \text{ bar}$$

$$\frac{dp}{dT} = 0.0362 \text{ bar K}^{-1}$$

From the expression

$$\frac{dp}{dT} = \frac{\Delta_{\text{vap}} H_m}{T \Delta_{\text{vap}} V_m} = \frac{\Delta_{\text{vap}} H_m}{TV_{m,v}}$$

$$\begin{aligned} \text{we get } \Delta_{\text{vap}} H_m &= \left(\frac{dp}{dT} \right) TV_{m,v} \\ &= (0.0362 \text{ bar K}^{-1}) (373.15 \text{ K}) (1.696 \times 18 \text{ dm}^3 \text{ mol}^{-1}) \\ &= 412.37 \text{ bar dm}^3 \text{ mol}^{-1} = 41237 \text{ kPa dm}^3 \text{ mol}^{-1} \\ &= 41237 \text{ J mol}^{-1} \end{aligned}$$

Example 1.5.3

The vapour pressure of toluene is 0.078 8 bar at 313.75 K and 0.398 bar at 353.15 K. Calculate the molar enthalpy of vaporization.

Solution

The given data are

$$\begin{aligned} T_1 &= 313.75 \text{ K} & T_2 &= 353.15 \text{ K} \\ p_1 &= 0.078 \text{ 8 bar} & p_2 &= 0.398 \text{ bar} \end{aligned}$$

Substituting these values in the expression

$$\ln \frac{p_2}{p_1} = -\frac{\Delta_{\text{vap}} H_m}{R} \left(\frac{1}{T_2} - \frac{1}{T_1} \right)$$

we get
$$\ln \left(\frac{0.398 \text{ bar}}{0.078 \text{ 8 bar}} \right) = -\frac{\Delta_{\text{vap}} H_m}{(8.314 \text{ J K}^{-1} \text{ mol}^{-1})} \left(\frac{1}{353.15 \text{ K}} - \frac{1}{313.75 \text{ K}} \right)$$

Thus
$$\Delta_{\text{vap}} H_m = \frac{(8.314 \text{ J K}^{-1} \text{ mol}^{-1}) (353.15 \text{ K}) (313.75 \text{ K})}{(353.15 \text{ K} - 313.75 \text{ K})} \ln \left(\frac{0.398}{0.078 \text{ 8}} \right)$$

$$= 37 \text{ 675 J mol}^{-1}$$

Example 1.5.4

A certain liquid has a boiling point of 338.15 K at 1.013 25 bar pressure. Using Trouton's rule (a) estimate the vapour pressure at 325.15 K, (b) estimate the boiling point at a pressure of 0.267 bar, and (c) obtain an equation for the vapour pressure in bar of this liquid as a function of temperature.

Solution

(a) The given data are

$$\begin{aligned} T_1 &= 338.15 \text{ K} & p_1 &= 1.013 \text{ 25 bar} \\ T_2 &= 325.15 \text{ K} & p_2 &=? \\ \Delta_{\text{vap}} H_m &\approx 10.5 RT_1 & & \text{(Trouton's rule)} \end{aligned}$$

Substituting the given data in the expression

$$\ln \frac{p_2}{p_1} = -\frac{\Delta_{\text{vap}} H_m}{R} \left(\frac{1}{T_2} - \frac{1}{T_1} \right)$$

we get
$$\ln \frac{p_2}{p_1} = -(10.5 T_1) \left(\frac{1}{T_2} - \frac{1}{T_1} \right) = -(10.5) \left(\frac{T_1}{T_2} - 1 \right)$$

i.e.
$$\ln \left(\frac{p_2}{1.013 \text{ 25 bar}} \right) = -(10.5) \left(\frac{338.15 \text{ K}}{325.15 \text{ K}} - 1 \right)$$

$$= -0.42$$

or
$$p_2 = (e^{-0.42}) (1.013 \text{ 25 bar}) = (0.657) (1.013 \text{ 25 bar})$$

$$= 0.666 \text{ bar}$$

(b) In this case, we have

$$\ln \left(\frac{0.267 \text{ bar}}{1.013 \text{ 25 bar}} \right) = -(10.5) \left(\frac{338.15 \text{ K}}{T_2} - 1 \right)$$

$$-1.334 = -(10.5) \left(\frac{338.15 \text{ K}}{T_2} - 1 \right)$$

$$\text{or } \frac{338.15 \text{ K}}{T_2} = \frac{1.334}{10.5} + 1 = \frac{11.834}{10.5}$$

$$\text{or } T_2 = \left(\frac{10.5}{11.834} \right) (338.15 \text{ K}) = 300.00 \text{ K}$$

(c) Substituting the values of T_1 and p_1 in the expression

$$\ln \frac{p_2}{p_1} = - (10.5) \left(\frac{T_1}{T_2} - 1 \right)$$

$$\text{we get } \ln \left(\frac{p_2}{1.01325 \text{ bar}} \right) = - (10.5) \left(\frac{338.15 \text{ K}}{T_2} - 1 \right)$$

$$\begin{aligned} \text{or } \ln \left(\frac{p_2}{\text{bar}} \right) &= \ln (1.01325) - \frac{3550.58 \text{ K}}{T_2} + 10.5 \\ &= 0.0132 - \frac{3550.58 \text{ K}}{T_2} + 10.5 = 10.51 - \frac{3550.58 \text{ K}}{T_2} \end{aligned}$$

$$\text{or } \log \left(\frac{p_2}{\text{bar}} \right) = 4.564 - \frac{1541.72 \text{ K}}{T_2}$$

Example 1.5.5

The vapour pressure of a liquid which obeys Trouton's rule rises by 52 Torr between temperatures 1 K below and 1 K above the normal boiling point. Determine the value of the normal boiling point and the molar enthalpy of vaporization of the liquid.

Solution

The given data are

$$dp = 52 \text{ Torr} \quad dT = 2 \text{ K}$$

$$\frac{\Delta_{\text{vap}} H_m}{RT_b} = 10.5 \quad \text{i.e.} \quad \Delta_{\text{vap}} H_m = (10.5) RT_b \quad (\text{Trouton's rule})$$

The Clapeyron equation becomes

$$\frac{dp}{dT} = \frac{\Delta_{\text{vap}} H_m}{T_b \Delta_{\text{vap}} V_m} = \frac{(10.5) R}{V_{m,v}} = \frac{(10.5) R}{(RT_b/p)} = \frac{(10.5) p}{T_b}$$

This gives

$$T_b = \frac{(10.5) p}{dp/dT} = \frac{(10.5) (760 \text{ Torr})}{(52 \text{ Torr})/(2 \text{ K})} = 306.9 \text{ K}$$

$$\begin{aligned} \text{Also } \Delta_{\text{vap}} H_m &= (10.5) RT_b = (10.5) (8.314 \text{ J K}^{-1} \text{ mol}^{-1}) (306.9 \text{ K}) \\ &= 26791 \text{ J mol}^{-1} \end{aligned}$$

Example 1.5.6

If the enthalpy of vaporization of water is assumed to be constant at 2255 kJ g^{-1} , calculate the temperature at which water will boil under a pressure of 77.0 cmHg, the boiling point of water being 373.15 K at 76.0 cmHg. The specific volume of water vapour at 373.15 K and 76 cmHg is $1644 \text{ cm}^3 \text{ g}^{-1}$ and that of liquid water is $1 \text{ cm}^3 \text{ g}^{-1}$.

Solut

Exan

Solut

Solution

The given data are

$$T_1 = 373.15 \text{ K} \quad p_1 = 76.0 \text{ cmHg}$$

$$T_2 = ? \quad p_2 = 77.0 \text{ cmHg}$$

$$\Delta_{\text{vap}}H_m = (2255 \text{ J g}^{-1})(18 \text{ g mol}^{-1}) = 40590 \text{ J mol}^{-1}$$

$$V_{m,v} = (1664 \times 18) \text{ cm}^3 \text{ mol}^{-1} = 29952 \text{ cm}^3 \text{ mol}^{-1}$$

$$= 29.952 \text{ dm}^3 \text{ mol}^{-1}$$

$$V_{m,l} = 1 \times 18 \text{ cm}^3 \text{ mol}^{-1} = 0.018 \text{ dm}^3 \text{ mol}^{-1}$$

Using the expression

$$\ln \left(\frac{p_2}{p_1} \right) = - \frac{\Delta_{\text{vap}}H_m}{R} \left(\frac{1}{T_2} - \frac{1}{T_1} \right)$$

we get $2.303 \log \left(\frac{77.0 \text{ cmHg}}{76.0 \text{ cmHg}} \right) = - \frac{(40590 \text{ J mol}^{-1})}{(8.314 \text{ J K}^{-1} \text{ mol}^{-1})} \left(\frac{1}{T_2} - \frac{1}{373.15 \text{ K}} \right)$

$$0.01307 = -(4882.1 \text{ K}) \left(\frac{1}{T_2} - \frac{1}{373.15 \text{ K}} \right)$$

$$\frac{1}{T_2} = - \frac{0.01307}{4882.1 \text{ K}} + \frac{1}{373.15 \text{ K}} = (-2.677 \times 10^{-6} + 2.680 \times 10^{-3}) \text{ K}^{-1}$$

$$= 2.677 \times 10^{-3} \text{ K}^{-1}$$

$$T_2 = \frac{1}{(2.677 \times 10^{-3} \text{ K}^{-1})} = 373.5 \text{ K}$$

Example 1.5.7

The mean enthalpy of vaporization of water in the temperature range between 363.15 K and 373.15 K is 2268 J g^{-1} . Calculate the vapour pressure of water at 363.15 K, its value at 373.15 K is being 76.0 cmHg.

Solution

The given data are

$$T_1 = 373.15 \text{ K} \quad p_1 = 76.0 \text{ cmHg}$$

$$T_2 = 363.15 \text{ K} \quad p_2 = ?$$

$$\Delta_{\text{vap}}H_m = 2268 \times 18 \text{ J mol}^{-1} = 40824 \text{ J mol}^{-1}$$

Using the expression

$$\log \left(\frac{p_2}{p_1} \right) = - \frac{\Delta_{\text{vap}}H_m}{2.303 R} \left(\frac{1}{T_2} - \frac{1}{T_1} \right)$$

we get $\log \left(\frac{p_2}{76.0 \text{ cmHg}} \right) = - \frac{40824 \text{ J mol}^{-1}}{(2.303)(8.314 \text{ J K}^{-1} \text{ mol}^{-1})} \left(\frac{1}{363.15 \text{ K}} - \frac{1}{373.15 \text{ K}} \right)$

$$= - \frac{(40824)(10)}{(2.303)(8.314)(363.15)(373.15)} = -0.1573$$

$$\frac{p_2}{76.0 \text{ cmHg}} = 0.696 \quad \text{i.e.} \quad p_2 = (0.696)(76.0 \text{ cmHg}) = 52.9 \text{ cmHg}$$

Example 1.5.8

Iodine boils at 456.15 K and the vapour pressure at 389.65 K is 100 Torr. The enthalpy of fusion is 15.65 kJ mol⁻¹ and the vapour pressure of the solid is 1 Torr at 311.85 K. Calculate the triple point temperature and pressure.

Solution

The given data are

Liquid-Vapour Equilibrium

$$\begin{aligned} T_1 &= 456.15 \text{ K} & p_1 &= 760 \text{ Torr} \\ T_2 &= 389.65 \text{ K} & p_2 &= 100 \text{ Torr} \end{aligned}$$

Solid-Liquid Equilibrium

$$\Delta_{\text{fus}}H_m = 15.65 \text{ kJ mol}^{-1}$$

Solid-Vapour Equilibrium

$$T = 311.85 \text{ K} \quad p = 1 \text{ Torr}$$

Calculation of $\Delta_{\text{vap}}H_m$: Using the Clausius-Clapeyron equation

$$\log \left(\frac{p_2}{p_1} \right) = - \frac{\Delta_{\text{vap}}H_m}{2.303 R} \left(\frac{1}{T_2} - \frac{1}{T_1} \right)$$

we get
$$\log \left(\frac{100}{760} \right) = - \frac{\Delta_{\text{vap}}H_m}{(2.303)(8.314 \text{ J K}^{-1} \text{ mol}^{-1})} \left[\frac{1}{389.65 \text{ K}} - \frac{1}{456.15 \text{ K}} \right]$$

This gives
$$\Delta_{\text{vap}}H_m = \frac{(2.303)(8.314 \text{ J K}^{-1} \text{ mol}^{-1})(389.65 \text{ K})(456.15 \text{ K})}{(456.15 \text{ K} - 389.65 \text{ K})} \log \left(\frac{760}{100} \right)$$

$$= 45\,076 \text{ J mol}^{-1}$$

Value of $\Delta_{\text{sub}}H_m$: We have

$$\begin{aligned} \Delta_{\text{sub}}H_m &= \Delta_{\text{fus}}H_m + \Delta_{\text{vap}}H_m = 15.65 \times 10^3 \text{ J mol}^{-1} + 45\,076 \text{ J mol}^{-1} \\ &= 60\,726 \text{ J mol}^{-1} \end{aligned}$$

Calculation of Triple Point Temperature and Triple Point Pressure

Let p and T be the pressure and temperature at the triple point, respectively. At this point, the vapour pressure of liquid will be the same as that of solid. Hence, applying Clapeyron equation at the triple point to liquid-vapour and solid-vapour equilibria, we get

Liquid-Vapour Equilibrium

$$\begin{aligned} \log \left(\frac{p}{100 \text{ Torr}} \right) &= - \left(\frac{45\,076 \text{ J mol}^{-1}}{(2.303)(8.314 \text{ J K}^{-1} \text{ mol}^{-1})} \right) \left(\frac{1}{T} - \frac{1}{389.65 \text{ K}} \right) \\ &= - (2\,354.2 \text{ K}) \left(\frac{1}{T} - \frac{1}{389.65 \text{ K}} \right) \end{aligned} \quad (1)$$

Solid-Vapour Equilibrium

$$\begin{aligned} \log \left(\frac{p}{1 \text{ Torr}} \right) &= - \left(\frac{60\,726 \text{ J mol}^{-1}}{(2.303)(8.314 \text{ J K}^{-1} \text{ mol}^{-1})} \right) \left(\frac{1}{T} - \frac{1}{311.85 \text{ K}} \right) \\ &= - (3\,171.5 \text{ K}) \left(\frac{1}{T} - \frac{1}{311.85 \text{ K}} \right) \end{aligned} \quad (2)$$

e enthalpy
311.85 K.

Subtracting Eq. (1) from Eq. (2), we get

$$\begin{aligned}\log(100) &= -\frac{3171.5 \text{ K}}{T} + \frac{3171.5}{311.85} + \frac{2354.5 \text{ K}}{T} - \frac{2354.2}{389.65} \\ 2.00 &= \frac{1}{T} (-3171.5 \text{ K} + 2354.2 \text{ K}) + (10.170 - 6.042) \\ T &= \frac{-817.3 \text{ K}}{-2.128} = 384.07 \text{ K}\end{aligned}$$

Substituting the value of T in Eq. (1), we get

$$\begin{aligned}\log\left(\frac{p}{100 \text{ Torr}}\right) &= -(2354.2 \text{ K})\left(\frac{1}{384.07 \text{ K}} - \frac{1}{389.65 \text{ K}}\right) \\ &= -0.0878 \\ p &= (0.817)(100 \text{ Torr}) = 81.7 \text{ Torr}\end{aligned}$$

Example 1.5.9

The vapour pressures of solid and liquid white phosphorus are given by the expressions

$$\log\left(\frac{p_2}{\text{atm}}\right) = -\frac{(2875 \text{ K})}{T} + 5.36 \quad \text{and} \quad \log\left(\frac{p_1}{\text{atm}}\right) = -\frac{(2740 \text{ K})}{T} + 4.95$$

respectively. Calculate (a) the temperature and pressure of the triple point of phosphorus, and (b) the molar enthalpy and molar entropy of fusion of phosphorus at the triple point.

Solution

(a) At triple point, the vapour pressures of solid and liquid will be identical. Equating the expressions of vapour pressure, we have

$$\log\left(\frac{p_2}{\text{atm}}\right) = \log\left(\frac{p_1}{\text{atm}}\right)$$

$$\text{or} \quad -\frac{(2875 \text{ K})}{T} + 5.36 = -\frac{(2740 \text{ K})}{T} + 4.95$$

$$\text{or} \quad \frac{(2875 \text{ K})}{T} - \frac{(2740 \text{ K})}{T} = 5.36 - 4.95$$

$$\text{or} \quad \frac{(135 \text{ K})}{T} = 0.41 \quad \text{or} \quad T = \frac{(135 \text{ K})}{0.41} = 329.3 \text{ K}$$

The vapour pressure at the triple point can be obtained by substituting this temperature in either of the vapour pressure expressions. Thus, we have

$$\log\left(\frac{p_2}{\text{atm}}\right) = -\frac{(2875 \text{ K})}{(329.3 \text{ K})} + 5.36 = -8.732 + 5.36 = -3.372$$

$$\text{Hence,} \quad p_2 = 4.246 \times 10^{-4} \text{ atm}$$

(b) The expression of variation of vapour pressure with temperature is given by

$$\ln\left(\frac{p}{\text{atm}}\right) = -\frac{\Delta H_m}{RT} + I \quad \text{i.e.} \quad \log\left(\frac{p}{\text{atm}}\right) = -\frac{\Delta H_m}{2.303 RT} + I'$$

0
0

is point,
lapeyron

(1)

(2)

Comparing this expression with the given expressions of vapour pressure, we get

$$\frac{\Delta_{\text{sub}}H_m}{2.303 R} = 2875 \text{ K} \quad \text{and} \quad \frac{\Delta_{\text{vap}}H_m}{2.303 R} = 2740 \text{ K}$$

$$\begin{aligned} \text{Thus} \quad \Delta_{\text{sub}}H_m &= (2.303)(8.314 \text{ J K}^{-1} \text{ mol}^{-1})(2875 \text{ K}) = 55048 \text{ J mol}^{-1} \\ \Delta_{\text{vap}}H_m &= (2.303)(8.314 \text{ J K}^{-1} \text{ mol}^{-1})(2740 \text{ K}) = 52463 \text{ J mol}^{-1} \end{aligned}$$

$$\begin{aligned} \text{Hence} \quad \Delta_{\text{fus}}H_m &= \Delta_{\text{sub}}H_m - \Delta_{\text{vap}}H_m = (55048 - 52463) \text{ J mol}^{-1} \\ &= 2585 \text{ J mol}^{-1} \end{aligned}$$

Since $\Delta G = 0$ for the fusion at equilibrium temperature, therefore

$$\Delta_{\text{fus}}S_m = \frac{\Delta_{\text{fus}}H_m}{T} = \frac{2585 \text{ J mol}^{-1}}{329.3 \text{ K}} = 7.85 \text{ J K}^{-1} \text{ mol}^{-1}$$

Example 1.5.10

The vapour pressure of a liquid changes with temperature according to the expression

$$\log \left(\frac{p}{\text{mmHg}} \right) = 11.36 - \frac{273 \text{ K}}{T}$$

Calculate the enthalpy of vaporization per mole of the liquid.

Solution

The variation of vapour pressure with temperature is given by

$$\ln \left(\frac{p}{p^\circ} \right) = - \frac{\Delta_{\text{vap}}H_m}{RT} + I' \quad \text{or} \quad \log \left(\frac{p}{p^\circ} \right) = - \frac{\Delta_{\text{vap}}H_m}{2.303 RT} + I'$$

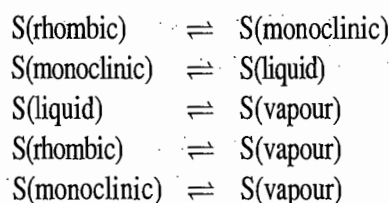
Comparing this with the given expression, we get

$$\frac{\Delta_{\text{vap}}H_m}{2.303 R} = 273 \text{ K}$$

$$\begin{aligned} \text{or} \quad \Delta_{\text{vap}}H_m &= (2.303 R)(273 \text{ K}) = (2.303 \times 8.314 \text{ J K}^{-1} \text{ mol}^{-1})(273 \text{ K}) \\ &= 5227 \text{ J mol}^{-1} \end{aligned}$$

Solid-Solid Equilibrium

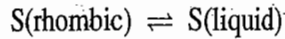
This type of equilibrium is observed if a substance exists in more than one allotropic form. The typical example is that of sulphur, which exists in two allotropic forms. At ordinary temperatures and under 1 atm pressure, its rhombic form is stable. However, it passes over to the monoclinic form at 95.4 °C if heated slowly. Above 95.4 °C, the monoclinic form is stable, until at 119 °C, where it melts to give liquid sulphur. We can have the following equilibria in the sulphur system:



Pha
Sulph

Fig.
Phas
sulph

Besides the above equilibria, we can also have



This represents the metastable equilibrium and is observed only when the heating of rhombic sulphur is done quickly. For 1 atm external pressure, the above metastable equilibrium is observed at 114 °C.

The slope of the curve representing the allotropic transformation can be obtained from the Clapeyron equation

$$\frac{dp}{dT} = \frac{\Delta_{\text{trs}} S_m}{\Delta_{\text{trs}} V_m} = \frac{\Delta_{\text{trs}} H_m}{T \Delta_{\text{trs}} V_m}$$

The slope is usually quite large because of the small change in the molar volume of transformation.

Phase Diagram of Sulphur

The phase diagram for the sulphur system is shown in Fig. 1.5.4. The metastable equilibria are shown by dotted lines.

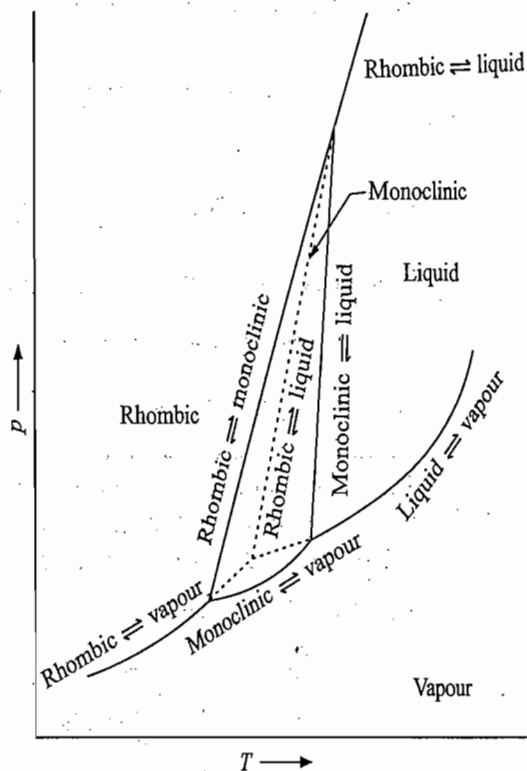


Fig. 1.5.4 Schematic Phase diagram of sulphur

There are three stable and one metastable triple points:

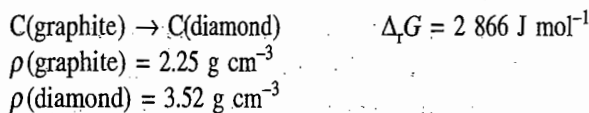
- | | |
|-----------------|---|
| (i) at 95.4 °C | $\mu_{\text{rhomb}} = \mu_{\text{mono}} = \mu_{\text{v}}$ |
| (ii) at 119 °C | $\mu_{\text{mono}} = \mu_{\text{l}} = \mu_{\text{v}}$ |
| (iii) at 151 °C | $\mu_{\text{rhomb}} = \mu_{\text{mono}} = \mu_{\text{l}}$ |
| (iv) at 114 °C | $\mu_{\text{rhomb}} = \mu_{\text{l}} = \mu_{\text{v}}$ |

Example 1.5.11

The density of diamond is 3.52 g cm^{-3} , while that of graphite is 2.25 g cm^{-3} . At 298 K, the free energy of formation of diamond from graphite is $2.866 \text{ kJ mol}^{-1}$. At 298 K, what pressure must be applied to bring diamond and graphite into equilibrium?

Solution

The given data are



Since at equilibrium $\Delta_r G$ of the reaction is zero, it is obvious that we would have to decrease $\Delta_r G$ of the reaction by $2.866 \text{ kJ mol}^{-1}$ by increasing the external pressure. We start with the relation

$$\left(\frac{\partial(\Delta_r G)}{\partial p} \right)_T = \Delta_{\text{trs}} V_m$$

or
$$d(\Delta_r G) = (\Delta_{\text{trs}} V_m) dp \quad (T \text{ constant})$$

$$= M_{\text{carbon}} \left(\frac{1}{\rho_{\text{diamond}}} - \frac{1}{\rho_{\text{graphite}}} \right) (p_2 - p_1)$$

Substituting the given data, we get

$$(-2.866 \text{ kJ mol}^{-1}) = (12 \text{ g mol}^{-1}) \left(\frac{1}{3.52 \text{ g cm}^{-3}} - \frac{1}{2.25 \text{ g cm}^{-3}} \right) (p_2 - 1 \text{ bar})$$

or
$$(p_2 - 1 \text{ bar}) = \frac{-2.866 \text{ kJ mol}^{-1}}{(3.409 - 5.333) (\text{cm}^3 \text{ mol}^{-1})} = 1.489.6 \text{ J cm}^{-3}$$

Now, since $1 \text{ J} = 1 \text{ kPa dm}^3 = 10^{-2} \text{ bar dm}^3 = 10 \text{ bar cm}^3$, we get

$$p_2 - 1 \text{ bar} = 14.896 \text{ bar}$$

or
$$p_2 = 14.897 \text{ bar}$$

Example 1.5.12

The density of ice II is 1.21 g cm^{-3} , that of ice III is 1.10 g cm^{-3} . Calculate $\Delta_{\text{trs}} H_m$ for the conversion of 1 mol of ice II into ice III, if these two phases are in equilibrium at 3.260 atm and 298.15 K and at 2.450 atm and 242.15 K.

Solution

The Clapeyron equation is

$$\frac{dp}{dT} = \frac{\Delta_{\text{trs}} S_m}{\Delta_{\text{trs}} V_m} = \frac{\Delta_{\text{trs}} H_m}{T \Delta_{\text{trs}} V_m}$$

or
$$dp = \frac{\Delta_{\text{trs}} H_m}{T \Delta_{\text{trs}} V_m} dT$$

For a finite change, we have

$$\Delta p = \frac{\Delta_{\text{trs}} H_m}{T \Delta_{\text{trs}} V_m} \Delta T$$

or
$$\Delta_{\text{trs}} H_m = \frac{(\Delta p) T \Delta_{\text{trs}} V_m}{\Delta T} = \frac{(p_2 - p_1) T_1 [V_{m, \text{ice(III)}} - V_{m, \text{ice(II)}}]}{(T_2 - T_1)}$$

Substituting the given data, we get

$$\begin{aligned}\Delta_{\text{trs}} H_m &= \frac{(3\,260\text{ atm} - 2\,450\text{ atm})(242.15\text{ K}) \left(\frac{18\text{ g mol}^{-1}}{1.1\text{ g cm}^{-3}} - \frac{18\text{ g mol}^{-1}}{1.21\text{ g cm}^{-3}} \right)}{(6\text{ K})} \\ &= \frac{(810\text{ atm})(242.15\text{ K})(1.488\text{ cm}^3\text{ mol}^{-1})}{(6\text{ K})} \\ &= 48\,643\text{ atm cm}^3\text{ mol}^{-1} = 48.643\text{ atm dm}^3\text{ mol}^{-1} \\ &= (48.643\text{ atm dm}^3\text{ mol}^{-1}) \left(\frac{8.314\text{ J}}{0.082\text{ atm dm}^3} \right) \\ &= 4\,932\text{ J mol}^{-1}\end{aligned}$$

Example 1.5.13

The specific volume of monoclinic sulphur which is stable above the transition temperature is greater than that of rhombic sulphur by $0.0126\text{ cm}^3\text{ g}^{-1}$. The transition point at one atm pressure is 368.65 K and it increases at the rate of 0.035 K atm^{-1} . Calculate the molar enthalpy of transition.

Solution

The given data are

$$p = 1\text{ atm}$$

$$T_i = 368.65\text{ K}$$

$$\begin{aligned}\Delta_{\text{trs}} V_m &= V_{\text{m, monoclinic}} - V_{\text{m, rhombic}} = 0.0126\text{ cm}^3\text{ g}^{-1} \\ &= (0.0126 \times 32)\text{ cm}^3\text{ mol}^{-1} = 0.0126 \times 32 \times 10^{-3}\text{ dm}^3\text{ mol}^{-1} \\ &= 4.032 \times 10^{-4}\text{ dm}^3\text{ mol}^{-1}\end{aligned}$$

$$dT/dp = 0.035\text{ K atm}^{-1} \quad \text{i.e.} \quad dp/dT = 28.57\text{ atm K}^{-1}$$

Using the Clapeyron equation $dp/dT = \Delta_{\text{trs}} H_m / (T \Delta_{\text{trs}} V_m)$, we get

$$\begin{aligned}\Delta_{\text{trs}} H_m &= T_i \Delta_{\text{trs}} V_m (dp/dT) \\ &= (368.65\text{ K})(4.032 \times 10^{-4}\text{ dm}^3\text{ mol}^{-1})(28.57\text{ atm K}^{-1}) \\ &= 4.247\text{ dm}^3\text{ atm mol}^{-1} = 4.247\text{ dm}^3(101.325\text{ kPa})\text{ mol}^{-1} \\ &= 430.3\text{ J mol}^{-1}\end{aligned}$$

1.6 FIRST- AND SECOND-ORDER PHASE TRANSITIONS

First-Order Phase Transition

A given phase transition of a substance may be classified into first-order or second-order depending upon the following characteristics.

A first-order phase transition of a substance is accompanied with changes in the values of enthalpy and volume of the substance, i.e. $\Delta_{\text{trs}} H$ and $\Delta_{\text{trs}} V$ are nonzero. Examples include familiar phase transitions such as solid to liquid, solid to vapour, and liquid to vapour.

For a substance B, we have

$$\left(\frac{\partial \mu_B}{\partial p} \right)_T = V_{\text{m,B}} \quad \text{and} \quad \left(\frac{\partial \mu_B}{\partial T} \right)_p = -S_{\text{m,B}}$$

If the substance B undergoes phase transition $\alpha \rightarrow \beta$, we will have

$$\Delta_{\text{trs}} V_{m,B} = \left(\frac{\partial \Delta \mu_B}{\partial p} \right)_T = \left(\frac{\partial \mu_{B(\beta)}}{\partial p} \right)_T - \left(\frac{\partial \mu_{B(\alpha)}}{\partial p} \right)_T \neq 0 \quad (1.6.1)$$

and

$$\begin{aligned} \Delta_{\text{trs}} H_{m,B} &= T \Delta_{\text{trs}} S_{m,B} = -T \left(\frac{\partial \Delta \mu_B}{\partial T} \right)_p \\ &= -T \left\{ \left(\frac{\partial \mu_{B(\beta)}}{\partial T} \right)_p - \left(\frac{\partial \mu_{B(\alpha)}}{\partial T} \right)_p \right\} \neq 0 \end{aligned} \quad (1.6.2)$$

Equations (1.6.1) and (1.6.2) imply that the derivatives $(\partial \mu_B / \partial p)_T$ and $(\partial \mu_B / \partial T)_p$ have different values on either side of the transition or in other words, these derivatives are discontinuous.

Main Characteristics of First-Order Transitions

Thus the main characteristics of first-order transitions are:

- (1) The chemical potential is a continuous function of temperature.
- (2) The derivatives of chemical potential are discontinuous.

These characteristics are illustrated in Fig. 1.6.1.

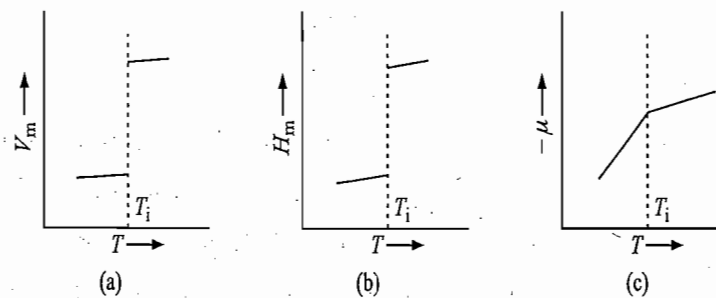
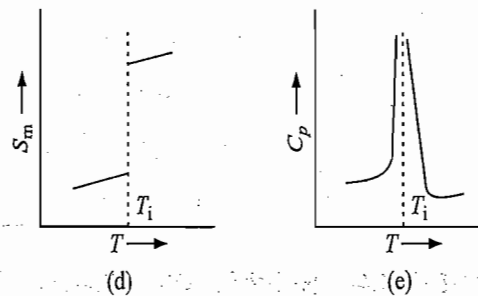


Fig. 1.6.1 Typical variations of
 (a) V_m versus T ,
 (b) H_m versus T ,
 (c) $-\mu$ versus T ,
 (d) S_m versus T , and
 (e) C_p versus T of first-order transition



The fact that $(\partial \mu_B / \partial T)_p$ is discontinuous at the transition point leads to another important characteristic that the first-order transition is accompanied by an infinite heat capacity at the transition point. This may be understood from the following analysis.

The heat capacity of the substance B is given by the relation

$$C_{p,B} = \left(\frac{\partial H_B}{\partial T} \right)_p$$

Now since the transition takes place at constant temperature, the heat supplied to the system is used in driving the transition (that is why H is discontinuous)

rather than in raising the temperature of the system. Thus at the transition point, we have

$$(1.6.1) \quad \begin{aligned} (\partial H_B)_p &= \text{positive} \\ (\partial T)_p &= 0 \end{aligned}$$

$$(1.6.2) \quad \text{Hence } C_{p,B} = \frac{(\partial H_B)_p}{(\partial T)_p} = \frac{\text{positive}}{0} = \infty$$

The variation of C_p of the system with temperature is also illustrated in Fig. 1.6.1.

Second-Order Phase Transition

In a second-order phase transition of a substance B, the chemical potential and its derivatives $(\partial \mu_B / \partial T)_p$ and $(\partial \mu_B / \partial p)_T$ are continuous functions of temperature whereas the second derivatives are discontinuous.

The fact that the first derivatives are continuous implies that changes in the values of enthalpy and volume during transition are zero. In other words, the entropy, the enthalpy and the volume of the system do not change when the transition occurs.

Although the entropy of the substance changes in a continuous manner with temperature, yet the rate of change in disorder (i.e. dS_B) alters at the phase transition point. Hence, the first derivative $(\partial S_{m,B} / \partial T)_p$ is a discontinuous function of temperature. Since

$$-\left(\frac{\partial^2 \mu_B}{\partial T^2}\right)_p = \left(\frac{\partial S_{m,B}}{\partial T}\right)_p = \frac{C_{p,m,B}}{T}$$

it follows that the second derivative of μ_B and $C_{p,m,B}$ are discontinuous functions of temperature.

Similarly, from the relations

$$-\left(\frac{\partial^2 \mu_B}{\partial p^2}\right)_p = -\left(\frac{\partial V_{m,B}}{\partial p}\right)_T = \kappa_T V_{m,B} \quad (\kappa_T \text{ is isothermal compressibility})$$

$$\frac{\partial^2 \mu_B}{\partial T \partial p} = \left(\frac{\partial V_{m,B}}{\partial T}\right)_p = \alpha V_{m,B} \quad (\alpha \text{ is cubic expansion coefficient})$$

and the fact that the rates of variation of V_m with T and p alter at the phase transition, indicate that the second derivatives $(\partial^2 \mu_B / \partial p^2)$ and $(\partial^2 \mu_B / \partial T \partial p)$ are discontinuous.

Diagrammatic Depiction of Characteristics

The various characteristics of second-order transition discussed above are illustrated in Fig. 1.6.2. The heat capacity versus temperature curve often has the shape of Greek λ , and because of this reason the second-order transition is frequently referred to as a λ -transition.

Examples of second-order transitions include order-disorder transitions in alloys and the fluid-superfluid transition in helium (line AB in Fig. 1.6.3).

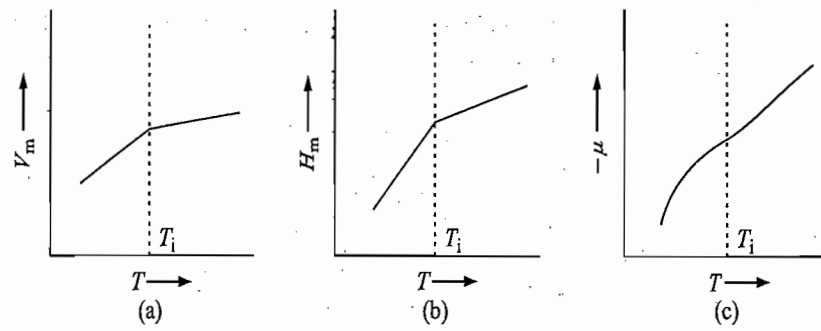


Fig. 1.6.2 Typical variations of
 (a) V_m versus T ,
 (b) H_m versus T ,
 (c) $-\mu$ versus T ,
 (d) S_m versus T , and
 (e) $C_{p,m}$ versus T of second-order transition

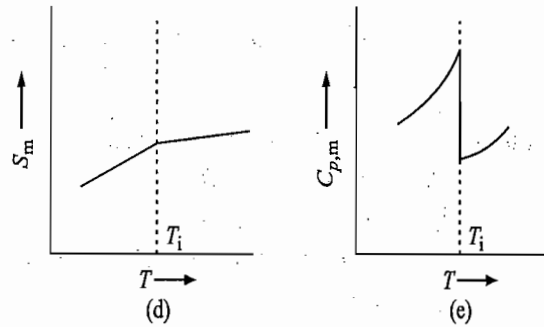
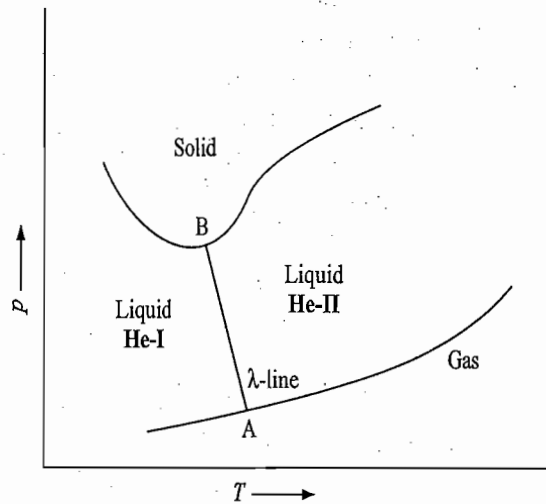


Fig. 1.6.3 λ -transition of helium. Solid helium is never in equilibrium with the gas phase



1.7 EFFECT OF PRESSURE ON THE VAPOUR PRESSURE OF A LIQUID

Qualitative Prediction

The variation in chemical potential of a liquid B (or solid B) with change in the external pressure is given by

$$\left(\frac{\partial \mu_{B(l)}}{\partial p}\right)_p = V_{m,B(l)} \quad \text{(Eq. 1.3.1)}$$

Since $V_{m,B(l)}$ is positive, it follows that the chemical potential (or the escaping tendency) of the liquid B is increased on increasing the external pressure.

For a liquid B in equilibrium with its vapour, we have

$$\mu_{B(l)} = \mu_{B(v)}$$

Moreover, the chemical potential of vapours of B is related to its pressure by the relation

$$\mu_{B(v)} = \mu_{B(v)}^\circ + RT \ln (p/p^\circ)$$

Deri
Exp

where p° represents the standard unit pressure. From the above expressions, it follows that the increased value of $\mu_{B(l)}$ (or $\mu_{B(v)}$) due to increase in the external pressure is associated with increase in the vapour pressure of the liquid B (or solid B).

Derivation of Expression

To determine the actual relation between the vapour pressure of the liquid and the total external pressure on the liquid phase, we proceed as follows. The thermodynamic condition of equilibrium is

$$\mu_{B(v)}(T, p) = \mu_{B(l)}(T, P) \quad (1.7.1)$$

Equation (1.7.1) implies that at constant temperature, vapour pressure p is a function of the external pressure P . To determine the relation between these, we differentiate Eq. (1.7.1) with respect to P , such that

$$\left(\frac{\partial \mu_{B(v)}}{\partial p} \right)_T \left(\frac{\partial p}{\partial P} \right)_T = \left(\frac{\partial \mu_{B(l)}}{\partial P} \right)_T$$

$$\text{or} \quad \left(\frac{\partial p}{\partial P} \right)_T = \frac{(\partial \mu_{B(l)} / \partial P)_T}{(\partial \mu_{B(v)} / \partial p)_T} = \frac{V_{m,B(l)}}{V_{m,B(v)}} \quad (1.7.2)$$

where $V_{m,B(v)}$ is the molar volume of vapour at pressure p . Since both $V_{m,B(l)}$ and $V_{m,B(v)}$ are positive, it follows that the derivative $(\partial p / \partial P)_T$ is positive and hence vapour pressure p increases with increase in external pressure P . However, the rate of increase is small as $V_{m,B(l)} \ll V_{m,B(v)}$.

If the vapour is assumed to be ideal, we have

$$\left(\frac{\partial p}{\partial P} \right)_T = \frac{V_{m,B(l)}}{RT/p}$$

$$\text{or} \quad RT \frac{dp}{p} = V_{m,B(l)} dP \quad (T \text{ constant}) \quad (1.7.3)$$

On integrating the above expression, we get

$$\int_{p_1}^{p_2} RT \frac{dp}{p} = \int_{P_1}^{P_2} V_{m,B(l)} dP$$

If $V_{m,B(l)}$ is assumed to be independent of pressure, we get

$$RT \ln \frac{p_2}{p_1} = V_{m,B(l)}(P_2 - P_1) \quad (1.7.4)$$

where p_1 and p_2 are the vapour pressures of the liquid under the external pressures P_1 and P_2 , respectively. If one of the external pressures on the liquid is its own vapour pressure p^* , then Eq. (1.7.4) reduces to

$$RT \ln \frac{p_2}{p^*} = V_{m,B(l)}(P_2 - p^*) \quad (1.7.5)$$

Expressions for the variation of vapour pressure of a solid phase with the external pressure can be derived similarly and is given by

$$RT \ln \frac{P_2}{P_1} = V_{m, B(s)}(P_2 - P_1) \quad (1.7.6)$$

Example 1.7.1

What is the vapour pressure of ice at 263.15 K due to the pressure of air at atmospheric pressure? The density of ice is 0.920 g cm^{-3} and its vapour pressure at 263.15 K is $2.6 \times 10^{-3} \text{ bar}$.

Solution

The given data are

$$T = 263.15 \text{ K} \quad p^* = 2.6 \times 10^{-3} \text{ bar}$$

$$P_2 = 1.01325 \text{ bar} \quad p_2 = ?$$

$$\rho(\text{ice}) = 0.920 \text{ g cm}^{-3}$$

The molar volume of solid ice is

$$V_{m,s} = \frac{M}{\rho} = \frac{18.0 \text{ g mol}^{-1}}{0.920 \text{ g cm}^{-3}} = 19.57 \text{ cm}^3 \text{ mol}^{-1} = 19.57 \times 10^{-3} \text{ dm}^3 \text{ mol}^{-1}$$

Substituting the given data in the expression

$$RT \ln \frac{P_2}{p^*} = V_{m,s}(P_2 - p^*)$$

$$\begin{aligned} \text{we get } (0.08314 \text{ dm}^3 \text{ bar K}^{-1} \text{ mol}^{-1})(263.15 \text{ K}) \ln \left(\frac{P_2}{2.6 \times 10^{-3} \text{ bar}} \right) \\ = (19.57 \times 10^{-3} \text{ dm}^3 \text{ mol}^{-1})(1.01325 \text{ bar} - 2.6 \times 10^{-3} \text{ bar}) \end{aligned}$$

$$\ln \left(\frac{P_2}{2.6 \times 10^{-3} \text{ bar}} \right) = \frac{(19.57 \times 10^{-3})(1.01065)}{(0.08314)(263.15)} = 9.0 \times 10^{-4}$$

$$\frac{P_2}{(2.6 \times 10^{-3} \text{ bar})} = 1.0009$$

$$\text{i.e. } p_2 = (1.0009)(2.6 \times 10^{-3} \text{ bar}) = 2.602 \times 10^{-3} \text{ bar}$$

Example 1.7.2

Vapour pressure of water at 303.15 K is 0.0424 bar when exposed to an insoluble gas at 1.01325 bar pressure. What will be the vapour pressure if the gas pressure were increased to 101.325 bar? Density of water is 0.996 g cm^{-3} and it may be assumed to be incompressible.

Solution

The given data are

$$P_1 = 1.01325 \text{ bar} \quad p_1 = 0.0424 \text{ bar}$$

$$P_2 = 101.325 \text{ bar} \quad p_2 = ?$$

$$\rho_{\text{water}} = 0.996 \text{ g cm}^{-3}$$

The molar volume of liquid water is

$$V_{m,l} = \frac{M}{\rho} = \frac{18 \text{ g mol}^{-1}}{0.996 \text{ g cm}^{-3}} = 18.072 \text{ cm}^3 \text{ mol}^{-1} = 18.072 \times 10^{-3} \text{ dm}^3 \text{ mol}^{-1}$$

Substituting the given data in the expression

$$(1.7.6) \quad RT \ln \frac{P_1}{P_2} = V_{m,\text{water}}(P_1 - P_2)$$

we get $(0.08314 \text{ dm}^3 \text{ bar K}^{-1} \text{ mol}^{-1})(303.15 \text{ K}) \ln \left(\frac{P_1}{0.0424 \text{ bar}} \right)$
 $= (19.57 \times 10^{-3} \text{ dm}^3 \text{ mol}^{-1})(101.325 \text{ bar} - 1.01325 \text{ bar})$

or $\ln \left(\frac{P_1}{0.0424 \text{ bar}} \right) = \frac{(19.57 \times 10^{-3})(100.312)}{(0.08314)(303.15)} = 0.07789$

or $\frac{P_1}{0.0424 \text{ bar}} = 1.081$ or $P_1 = (1.081)(0.0424 \text{ bar}) = 0.0458 \text{ bar}$

REVISIONARY PROBLEMS

- 1.1 Show that the chemical potential of a substance present in more than one phase in equilibrium with each other has the same value in all the phases.
- 1.2 (a) Show that the slope of μ versus T curve for a pure substance is equal to $-S_m$ and hence show that this slope is always negative.
 (b) Show that the slope of μ versus T curve of a pure substance B follows the order

$$\left(\frac{\partial \mu_{B(s)}}{\partial T} \right)_p > \left(\frac{\partial \mu_{B(l)}}{\partial T} \right)_p \gg \left(\frac{\partial \mu_{B(v)}}{\partial T} \right)_p$$

and hence draw a schematic diagram of μ versus T curves for the above-mentioned three phases. Locate the melting point and the boiling point of the substance on the diagram.

(c) What is the effect of pressure on the μ versus T curves? Show that the shift in the curves due to the change in pressure follows the order

$$d\mu_{B(v)} \gg d\mu_{B(l)} > d\mu_{B(s)}$$

and hence show the shift in the melting point and the boiling point with increase in the external pressure.

(d) Show qualitatively that on increasing the external pressure the melting point of a substance increases when melting results in an increase in volume, but a decrease is observed when melting results in a decrease in volume.

- 1.3 (a) Derive the Clapeyron equation

$$\frac{dp}{dT} = \frac{\Delta_{\text{trs}} S_m}{\Delta_{\text{trs}} V_m}$$

as applicable to the phase transformation $\alpha \rightarrow \beta$, where $\Delta_{\text{trs}} S_m$ and $\Delta_{\text{trs}} V_m$ are the respective changes in molar entropy and molar volume accompanying the phase transformation.

(b) Show that:

- (i) The slope dp/dT of solid to liquid transformation has a very high positive (or negative) value.
- (ii) At the triple point, the slope dp/dT of solid to vapour transformation is steeper than that of liquid to vapour transformation.

(c) On what factors does the sign of the slope dp/dT of solid to liquid transformation depend?

(d) Show that the integrated form of Clapeyron equation as applicable to solid-solid and solid-liquid transformations is

$$\frac{\Delta p}{\Delta T} = \frac{1}{T_{\text{trs}}} \frac{\Delta_{\text{trs}} H_{\text{m}}}{\Delta_{\text{trs}} V_{\text{m}}}$$

- 1.4 (a) Discuss the Clausius simplifications to the Clapeyron equation and hence derive the Clausius-Clapeyron equation as applicable to the condensed phase-gas equilibrium. Does this relation hold good for the solid-liquid equilibrium?
 (b) Draw a schematic plot of $\log(p/p^\circ)$ versus $1/T$. What will be its slope and intercept? Do the values of slope and intercept depend upon the units in which pressure is expressed?
 (c) Is the relation

$$\Delta_{\text{sub}} H_{\text{m}} = \Delta_{\text{fus}} H_{\text{m}} + \Delta_{\text{vap}} H_{\text{m}}$$

for a substance true at all conditions of temperature and pressure?

- (d) Show qualitatively that the shift in the boiling point due to the given pressure change is relatively larger than that of the melting point.
 (e) Under what circumstances can the solid pass directly to the gaseous form without the formation of liquid state?
 1.5 What do you understand by the first-order and second-order phase transitions? What are their main characteristics?
 1.6 Derive the relation

$$RT \ln \frac{P}{p^*} = V_{\text{m, cond. phase}} (P - p^*)$$

where p is the vapour pressure under a pressure of P and p^* is the vapour pressure when the condensed phase and vapour are under the same pressure. From this relation, show that the vapour pressure of the condensed phase increases on increasing the total external pressure.

- 1.7 (a) For the liquid-vapour transformation, derive the following form of Clausius-Clapeyron equation:

$$\ln \left(\frac{p}{p^*} \right) = - \frac{\Delta_{\text{vap}} H_{\text{m}}}{R} \left(\frac{1}{T} - \frac{1}{T^*} \right)$$

where T^* is the normal boiling of the liquid where $p^* = 1$ atm; p is the vapour pressure at temperature T and $\Delta_{\text{vap}} H_{\text{m}}$ is the temperature-independent molar enthalpy change of the transformation.

- (b) Draw a schematic plot of $\log(p/\text{atm})$ versus $1/T$. What do the slope and intercept of such a graph represent? How are the slope and intercept affected if p is expressed in cmHg?

TRY YOURSELF PROBLEMS

- 1.1 Trouton's rule says that the molar entropy of vaporization of liquids is about $87.86 \text{ J K}^{-1} \text{ mol}^{-1}$ at the normal boiling point T^* . From this show that the boiling point at pressure p can be corrected to 760 mmHg by the relation

$$\Delta T_{\text{b}} = 0.000125 T^* (760 - p/\text{mmHg}).$$

$$\left\{ \text{Hint. } \frac{\Delta p}{\Delta T} = \frac{\Delta_{\text{trs}} S_{\text{m}}}{\Delta_{\text{trs}} V_{\text{m}}} = \frac{\Delta_{\text{trs}} S_{\text{m}}}{V_{\text{m}}} = \frac{\Delta_{\text{trs}} S_{\text{m}}}{RT/p} = \frac{\Delta_{\text{trs}} S_{\text{m}}}{T^*} \left(\frac{760 \text{ mmHg}}{R} \right) \right\}$$

- 1.2 (a) In deriving Eq. (1.5.13), it has been assumed that ΔH_m of the system is independent of temperature. Suppose ΔH_m depends upon the temperature and is given by

$$\Delta H_m = \Delta H_0 + (\Delta a)T + \left(\frac{\Delta b}{2}\right)T^2 + \frac{(\Delta c)T^3}{3} + \dots$$

where ΔH_0 , (Δa) , (Δb) , . . . , etc., are constants. Show that with this expression of ΔH_m , the Clausius-Clapeyron equation is given by

$$R \ln \left(\frac{p_2}{p_1} \right) = \frac{\Delta H_0 (T_2 - T_1)}{T_2 T_1} + (\Delta a) \ln \frac{T_2}{T_1} + \frac{(\Delta b)}{2} (T_2 - T_1) + \frac{\Delta c}{6} (T_2^2 - T_1^2) + \dots$$

(b) Show that with the expression of ΔH_m given in part (a), the open integration of Clausius-Clapeyron equation yields

$$R \ln \left(\frac{p}{p^\circ} \right) = -\frac{\Delta H_0}{T} + \Delta a \ln (T/K) + \frac{\Delta b}{2} T + \frac{\Delta c}{6} T^2 + \dots + I$$

where I is the constant of integration.

- 1.3 For the condensed phase-vapour equilibrium, it is known that $K_{eq} = p$, where p is the pressure of the vapour. Show that on substituting this relation in the Clausius-Clapeyron equation, we get

$$\ln \frac{K_2}{K_1} = \frac{\Delta H_m}{R} \left[\frac{1}{T_1} - \frac{1}{T_2} \right]$$

- 1.4 The vapour pressure of a particular liquid varies with temperature as follows:

$$\log \left(\frac{p}{\text{atm}} \right) = -\frac{(4849 \text{ K})}{T} - 14.70 \log \left(\frac{T}{\text{K}} \right) + 50.24$$

How does the enthalpy of vaporization vary with temperature?

- 1.5 The melting points of mercury at external pressures of 10 atm and 3 540 atm are 234.3 K and 257.2 K, respectively. Predict whether the transformation solid Hg \rightarrow liquid Hg involves an increase or a decrease of volume.

(Ans. Increase)

- 1.6 (a) A solid substance directly passes to the gaseous form at STP conditions. State the conditions under which the liquid form of the substance can be obtained.

(b) For a given substance, $\rho_s = \rho_l$. Predict the nature of solid to liquid equilibrium line in its phase diagram.

- 1.7 (a) The rate of change of chemical potential with temperature [i.e. $(\partial\mu/\partial T)_p$] is an important quantity in the discussion of phase transitions. What is the difference in slope on either side of (i) the freezing point of water, and (ii) the normal boiling point of water? Given: $\Delta_{\text{vap}}H_m = 40.59 \text{ kJ mol}^{-1}$ and $\Delta_{\text{fus}}H_m = 6.008 \text{ kJ mol}^{-1}$.

(Ans. $22 \text{ J K}^{-1} \text{ mol}^{-1}$, $109 \text{ J K}^{-1} \text{ mol}^{-1}$)

(b) The gradient $(\partial\mu/\partial p)_T$ is also an important quantity in order to decide the nature of transition. What is the difference of this quantity on either side of the two transitions referred to in part (a)? Given: $\rho(\text{ice}) = 0.917 \text{ g cm}^{-3}$, $\rho(\text{liquid water}) = 1.0 \text{ g cm}^{-3}$ at 0°C and $\rho(\text{liquid water}) = 0.958 \text{ g cm}^{-3}$ and $\rho(\text{steam}) = 0.598 \text{ kg m}^{-3}$ at 100°C .

solid-solid

we derive equilibrium.

intercept? pressure is

pressure

without

is? What

pressure from this increasing

Clausius-

pressure change of

intercept expressed

is about boiling point

mHg

- 1.8 Combine the barometric formula for the dependence of pressure on altitude with the Clausius-Clapeyron equation, and predict how the boiling point of a liquid depends on altitude.

$$\left[\text{Ans. } \frac{1}{T} = \frac{1}{T^*} + \left(\frac{Mgh}{T^* \Delta_{\text{vap}} H_m} \right) \right]$$

- 1.9 Why is the following relation not applicable for graphite-diamond transformation?

$$\ln \frac{p_2}{p_1} = \frac{\Delta_{\text{us}} H_m}{R} \left(\frac{1}{T_1} - \frac{1}{T_2} \right)$$

- 1.10 How do the slopes of G_m versus p curves for a liquid and its vapour vary as the temperature of the liquid is increased towards its critical temperature?

NUMERICAL PROBLEMS

- 1.1 The melting point of benzene increases by about 0.03 K/atm. If the specific gravities of solid and liquid benzene are 1.02 and 0.89 at the melting point of 278.65 K at 1 atm, what is the molar enthalpy of fusion of benzene? (Ans. 10.52 kJ mol⁻¹)
- 1.2 For uranium hexafluoride the vapour pressures for the solid and liquid are given by

$$\log (p_s/\text{Torr}) = 10.648 - 2559.5/(T/\text{K})$$

$$\log (p_l/\text{Torr}) = 7.540 - 1511.3/(T/\text{K})$$

Calculate (i) the temperature and pressure of the triple point and (ii) the molar enthalpy of fusion of UF₆.

(Ans. 337.2 K, 1122 Torr, 20.08 kJ mol⁻¹)

- 1.3 What is the boiling point of water on a mountain where the barometric reading is 500 Torr? The enthalpy of vaporization of water may be taken as 2.259 kJ g⁻¹.
(Ans. 362 K)
- 1.4 The densities of α - and β -sulphur are 2.00 and 1.95 g cm⁻³, respectively, at their transition temperature 369 K. The transition temperature changes by 0.036 K for every atmosphere rise in pressure. Determine the molar enthalpy of transition.
(Ans. 426.4 J mol⁻¹)
- 1.5 A particular liquid obeys both Clausius-Clapeyron equation and Trouton's rule. With this information calculate the vapour pressure of the liquid in atm, at a temperature equal to one-third of the normal boiling point.
(Ans. 6.4×10^{-10} atm)
- 1.6 NH₄NO₃ undergoes a transition from one solid modification to another at 398.65 K and 1 atm, and at 408.15 K and 1 000 atm pressure. The form stable at higher temperatures has an average volume of 0.012 6 cm³ g⁻¹ greater than the other modification over the pressure range studied. From these data, calculate the molar enthalpy of transition.
(Ans. 4.284 kJ mol⁻¹)
- 1.7 AgI exists in two forms, α and β , which are in equilibrium at 419.65 K at 1 atm pressure. For the change of α to β , $\Delta_{\text{us}} H_m = 6.40$ kJ mol⁻¹, while $\Delta_{\text{us}} V_m = -2.2$ cm³ mol⁻¹. Find the pressure at which the transition temperature will be 418.15 K.
(Ans. 67.37 atm)
- 1.8 Propene has the following vapour pressures:

T/K	150	200	250	300
p/Torr	3.82	198.0	2 074	10 040

From these data calculate (a) the molar enthalpy of vaporization, (b) the normal boiling point, and (c) the vapour pressure at 225 K

(Ans. (a) 19.54 kJ mol⁻¹, (b) 741 Torr)

1.9 (a) The boiling point of *n*-butyl chloride is 77.96 °C. Without using any other data, determine the boiling point at vapour pressure 650 Torr. (Ans. 72.8 °C)

(b) The variation of vapour pressure of *n*-butyl chloride is also given by the empirical equation

$$\log \left(\frac{p}{\text{Torr}} \right) = - \frac{(1763 \text{ K})}{T} + 7.912$$

Calculate the molar enthalpy of vaporization from this equation.

(Ans. 33.76 kJ mol⁻¹)

1.10 The vapour pressure of a given liquid varies with temperature according to the following expression

$$\log \left(\frac{p}{\text{Torr}} \right) = - \frac{(4849.3 \text{ K})}{T} - 14.701 \log \left(\frac{T}{\text{K}} \right) + 53.118 \left(\frac{T}{\text{K}} \right)$$

Determine the molar enthalpy of vaporization at 298 K and at 423 K.

(Ans. 39.23 kJ mol⁻¹, 79.04 kJ mol⁻¹)

1.11 Find out the difference in the freezing points of ice at 1 atm pressure and under its own vapour pressure. The vapour pressure of ice at 273 K is 4.579 mmHg. The densities of ice and water at 273 K are 1.000 and 0.916 g cm⁻³, respectively, and the enthalpy of fusion of ice is 6.009 kJ mol⁻¹. (Ans. 0.0075 K)

1.12 From the following data at 298 K, determine (i) the free energy change of transition from graphite to diamond at 1 atm and 298 K, (ii) direction of spontaneous process of graphite to diamond conversion, (iii) the pressure at which the two forms would be in equilibrium at 298 K and at 1273 K. Assume densities to be independent of pressure.

Form	$\Delta_c H_m$ (kJ mol ⁻¹)	$S_m / \text{J K}^{-1} \text{ mol}^{-1}$	Density (g cm ⁻³)
diamond	-395.32	2.439	3.513
graphite	-393.42	5.694	2.260

2

Colligative Properties

2.1 SOLUTION

Definition

A solution may be defined as a homogeneous mixture of a single phase containing one or more of the chemical species dispersed on a molecular scale. The characteristics of any one section of the homogeneous solution will be completely identical to those of any other section of the solution. Depending upon the total constituents present in the solution, it is called the binary solution (two constituents), ternary solution (three constituents), quaternary solution (four constituents), and so on.

Classification of Solute and Solvent

By convention, the constituent present in the largest amount is called the *solvent* and the constituents present in relatively small amounts are called the *solutes*. However, this classification is completely arbitrary, since it is not possible to classify the two constituents of a binary solution into solute and solvent when both of them are present in equal amounts. Any one of the two constituents may be classified as the solute or the solvent. Thus this classification is a matter of convenience only.

Colligative Properties

In this chapter, we shall consider only those properties which result because of the dissolution of a nonvolatile solute in a volatile liquid solvent. These are, the relative lowering of vapour pressure, elevation of boiling point, depression of freezing point and the osmotic pressure. These are collectively known as the *colligative*[†] properties as they depend only on the number of species present in the solution and not on their nature. Before considering these properties, it is worth reviewing the units in which the composition of the solution can be expressed.

2.2 METHODS OF EXPRESSING CONCENTRATION OF A SOLUTION

Introduction

There are many ways of expressing the concentration of a solution which are used for different purposes. Some of these are:

- Mass percentage.
- Volume percentage.
- Mass of a solute in a definite mass of solvent.
- Mass of a solute per definite mass of solution.

[†]Colligative, a latin word; *co*, together; *ligare*, to bind.

- Molarity; amount (in moles) of solute per dm^3 of solution.
- Normality; amount (in equivalents) of solute per dm^3 of solution.
- Molality; amount (in moles) of solute per kg of solvent.
- Amount (or mole) fraction; amount (in moles) of a given substance divided by the total amount (in moles) of all constituents of a solution.

Since the density of a solution varies with temperature, presumably due to the variation of volume, it is obvious that the concentration c_2 , which is expressed as mol dm^{-3} of the solution, varies with temperature. On the other hand, molality and amount fraction are independent of temperature.

Example 2.2.1

Calculate the amount fraction, molal and molar concentrations of a solution containing 20 per cent acetic acid by mass in water, if the density of the solution at 20°C is 1.026 g cm^{-3} .

Solution

In 100 g of the solution, we have

$$\text{Mass of acetic acid, } m_2 = 20\text{ g}$$

$$\text{Mass of water, } m_1 = 80\text{ g}$$

$$\text{Molar mass of acetic acid, } M_2 = 60\text{ g mol}^{-1}$$

$$\text{Amount of acetic acid, } n_2 = \frac{m_2}{M_2} = \frac{20\text{ g}}{60\text{ g mol}^{-1}} = 0.333\text{ mol}$$

$$\text{Amount of water, } n_1 = \frac{m_1}{M_1} = \frac{80\text{ g}}{18\text{ g mol}^{-1}} = 4.444\text{ mol}$$

$$\begin{aligned} \text{Amount fraction of acetic acid, } x_2 &= \frac{n_2}{n_2 + n_1} = \frac{0.333\text{ mol}}{0.333\text{ mol} + 4.444\text{ mol}} \\ &= \frac{0.333}{4.777} = 0.0697 \end{aligned}$$

$$\text{Molality of acetic acid solution, } m = \frac{n_2}{m_1} = \frac{0.333\text{ mol}}{(80/1000)\text{ kg}} = 4.163\text{ mol kg}^{-1}$$

Volume of the solution containing 20 per cent acetic acid by mass is

$$V = \frac{\text{mass}}{\text{density}} = \frac{100\text{ g}}{1.026\text{ g cm}^{-3}} = 97.45\text{ cm}^3$$

$$\text{Molarity of acetic acid solution, } M = \frac{n_2}{V} = \frac{0.333\text{ mol}}{(97.45/1000)\text{ dm}^3} = 3.417\text{ mol dm}^{-3}$$

Of the various units, molality, molarity and amount fraction are commonly employed to express the composition of a solution. Quite often, we require the interconversion of these concentration units.[†] These can be carried out as shown in the following.

[†]Throughout this chapter, solvent is represented by the subscript 1, solute is represented by the subscript 2. To avoid any confusion between the symbol m used simultaneously for mass and molality, we use subscripted m for mass whereas unsubscripted m for molality of the solution. To be specific, m_1 and m_2 represent masses of solvent and solute, respectively, whereas m represents molality of the solution.

Amount Fraction into Molarity

By definition, we have

$$x_1 = \frac{n_1}{n_1 + n_2}; \quad x_2 = \frac{n_2}{n_1 + n_2} \quad \text{and} \quad M = \frac{n_2}{V}$$

We will have

$$M = \frac{n_2}{V} = \frac{n_2}{m/\rho} = \frac{n_2}{(n_1M_1 + n_2M_2)/\rho}$$

Dividing numerator and denominator by $n_1 + n_2$ we get

$$M = \frac{x_2\rho}{x_1M_1 + x_2M_2} \quad (2.2.1)$$

For a dilute solution $x_2M_2 \ll x_1M_1$, $x_1 \rightarrow 1$ and $\rho_{\text{solution}} \rightarrow \rho_{\text{solvent}}$. Under these approximations, Eq. (2.2.1) may be written as

$$M \approx \frac{x_2\rho}{M_1} \quad \text{i.e.} \quad M \propto x_2 \quad (2.2.2)$$

that is, molarity of the solution is directly proportional to the amount fraction of solute in the solution.

Example 2.2.2

The amount fraction of methanol in aqueous solution is 0.02 and its density is 0.994 g mL^{-1} . Determine the molarity of the solution.

Solution

Let there be 1 mol of total amount of solvent and solute in the solution. We will have

$$\text{Amount of solute, } n_2 = 0.02 \text{ mol}$$

$$\text{Amount of solvent, } n_1 = 0.98 \text{ mol}$$

$$\begin{aligned} \text{Mass of solution, } m &= \text{mass of (solvent + solute)} = n_1M_1 + n_2M_2 \\ &= (0.98 \times 18 + 0.02 \times 32) \text{ g} = 18.28 \text{ g} \end{aligned}$$

$$\text{Volume of solution, } V = \frac{m}{\rho} = \frac{18.28 \text{ g}}{0.994 \text{ g cm}^{-3}} = 18.39 \text{ cm}^3$$

Finally, the molarity of solution would be

$$M = \frac{n_2}{V} = \frac{0.02 \text{ mol}}{18.39 \times 10^{-3} \text{ dm}^3} = 1.088 \text{ mol dm}^{-3} \quad (V \text{ expressed in dm}^3)$$

Alternatively, using the conversion formula directly, we get

$$M = \frac{x_2\rho}{x_1M_1 + x_2M_2} = \frac{(0.02)(0.994 \text{ g cm}^{-3})}{(0.98)(18 \text{ g mol}^{-1}) + (0.02)(32 \text{ g mol}^{-1})}$$

Molar
Amount

Exam

Solut

$$= 1.088 \times 10^{-3} \text{ mol cm}^{-3} = 1.088 \times 10^{-3} \text{ mol (10}^{-1} \text{ dm)}^{-3}$$

$$= 1.088 \text{ mol dm}^{-3}$$

Molarity into Amount Fraction

The expression relating molarity (M) with amount fraction (x_1 and x_2) is

$$M = \frac{x_2 \rho}{x_1 M_1 + x_2 M_2}$$

(M_1 and M_2 are molar masses of solvent and solute, respectively.)

Since $x_2 = 1 - x_1$, we get

$$(2.2.1) \quad M = \frac{x_2 \rho}{(1 - x_2) M_1 + x_2 M_2}$$

which on rearranging gives

$$(2.2.2) \quad x_2 = \frac{M M_1}{\rho + M(M_1 - M_2)} \quad (2.2.3)$$

Example 2.2.3

The molarity of NH_3 in aqueous solution is 11.8 mol dm^{-3} . Calculate the amount fraction of NH_3 in solution. The density of solution is 0.916 g cm^{-3} .

Solution

Let the volume of solution be 1 dm^3 . We will have

$$\text{Amount of } \text{NH}_3, n_2 = 11.8 \text{ mol}$$

$$\text{Volume of solution, } V = 1 \text{ dm}^3$$

$$\text{Mass of } 1 \text{ dm}^3 \text{ solution, } m = V\rho = (10^3 \text{ cm}^3)(0.916 \text{ g cm}^{-3}) = 916 \text{ g}$$

$$\text{Mass of } \text{NH}_3 \text{ in } 1 \text{ dm}^3 \text{ solution, } m_2 = n_2 M_2 = (11.8 \text{ mol})(17 \text{ g mol}^{-1})$$

$$= 200.6 \text{ g}$$

$$\text{Mass of solvent in } 1 \text{ dm}^3 \text{ solution, } m_1 = \text{mass of (solution - solute)}$$

$$= 916 \text{ g} - 200.6 \text{ g} = 715.4 \text{ g}$$

$$\text{Amount of solvent in } 1 \text{ dm}^3 \text{ solution, } n_1 = \frac{m_1}{M_1} = \frac{715.4 \text{ g}}{18 \text{ g mol}^{-1}} = 39.74 \text{ mol}$$

$$\text{Amount fraction of } \text{NH}_3 \text{ in solution, } x_2 = \frac{n_2}{n_1 + n_2} = \frac{11.8}{39.74 + 11.8} = 0.229$$

Alternatively, using the conversion formula, we get

$$x_2 = \frac{M M_1}{\rho + M(M_1 - M_2)}$$

$$= \frac{(11.8 \text{ mol dm}^{-3})(18 \text{ g mol}^{-1})}{(0.916 \times 10^3 \text{ g dm}^{-3}) + (11.8 \text{ mol dm}^{-3})\{(18 - 17) \text{ g mol}^{-1}\}}$$

$$= \frac{212.4}{916 + 11.8} = \frac{212.4}{927.8} = 0.229$$

Amount Fraction into Molality

By definition

$$x_1 = \frac{n_1}{n_1 + n_2}; \quad x_2 = \frac{n_2}{n_1 + n_2}; \quad m = \frac{n_2}{m_1}$$

We will have

$$m = \frac{n_2}{m_1} = \frac{n_2}{n_1 M_1}$$

Dividing numerator and denominator by $n_1 + n_2$, we get

$$m = \frac{x_2}{x_1 M_1} \quad (2.2.4)$$

For a dilute solution $x_1 \rightarrow 1$. With this approximation, Eq. (2.2.4) may be written as

$$m \approx \frac{x_2}{M_1} \quad \text{or} \quad m \propto x_2 \quad (2.2.5)$$

that is, molality of solution is directly proportional to the amount fraction of solute in the solution.

Example 2.2.4

The amount fraction of methanol in aqueous solution is 0.02. Determine the molality of methanol in solution.

Solution

Let there be 1 mol of total amount of solvent and solute. Then

$$\text{Amount of solute, } n_2 = 0.02 \text{ mol}$$

$$\text{Amount of solvent, } n_1 = 0.98 \text{ mol}$$

$$\text{Mass of solvent, } m_1 = n_1 M_1 = (0.98 \text{ mol}) (18 \text{ g mol}^{-1}) = 17.64 \text{ g}$$

Finally, the molality of solution is

$$m = \frac{n_2}{m_1} = \frac{0.02 \text{ mol}}{17.64 \times 10^{-3} \text{ kg}} = 1.134 \text{ mol kg}^{-1} \quad (m_1 \text{ expressed in kg})$$

Alternatively, using the conversion expression directly, we get

$$\begin{aligned} m &= \frac{x_2}{x_1 M_1} = \frac{0.02}{(0.98) (18 \text{ g mol}^{-1})} \\ &= 1.134 \times 10^{-3} \text{ mol g}^{-1} = 1.134 \times 10^{-3} \text{ mol } (10^{-3} \text{ kg})^{-1} \\ &= 1.134 \text{ mol kg}^{-1} \end{aligned}$$

Molality into Amount FractionThe expression relating amount fractions (x_1 and x_2) and molality (m) is

$$m = \frac{x_2}{x_1 M_1} \quad (M_1 \text{ is the molar mass of solvent})$$

Replacing $x_1 = 1 - x_2$ and rearranging, we get

$$x_2 = \frac{m M_1}{1 + m M_1} \quad (2.2.6)$$

Exam

Solu

Mo
Mo

Example 2.2.5

An aqueous solution is 1.133 molal in methanol. Determine the amount fractions of methanol and water.

Solution

Let the mass of solvent be 1 kg. We will have

$$\text{Amount of solute, } n_2 = 1.133 \text{ mol}$$

$$\text{Mass of solvent, } m_1 = 1 \text{ kg} = 1000 \text{ g}$$

$$\text{Amount of solute, } n_1 = \frac{m_1}{M_1} = \frac{1000 \text{ g}}{18 \text{ g mol}^{-1}} = 55.56 \text{ mol}$$

Amount fraction of solute (i.e. methanol) is

$$x_2 = \frac{n_2}{n_1 + n_2} = \frac{1.133}{55.56 + 1.133} = 0.02$$

Amount fraction of solvent (i.e. water) is

$$x_1 = 1 - x_2 = 1 - 0.02 = 0.98$$

Alternatively, using the formula directly, we get

$$\begin{aligned} x_2 &= \frac{mM_1}{1 + mM_1} = \frac{(1.133 \text{ mol kg}^{-1})(18 \times 10^{-3} \text{ kg mol}^{-1})}{1 + (1.133 \text{ mol kg}^{-1})(18 \times 10^{-3} \text{ kg mol}^{-1})} \\ &= \frac{0.020394}{1 + 0.020394} = 0.02 \\ x_1 &= 1 - x_2 = 1 - 0.02 = 0.98 \end{aligned}$$

Molarity into Molality

Since molarity is given as $M = n_2/V$, we assume that

$$\text{Amount of solute} = n_2$$

$$\text{Volume of solution} = V$$

$$\text{Mass of solute, } m_2 = n_2M_2 \quad (M_2 \text{ is molar mass of solute})$$

If ρ is the density of solution, then

$$\text{Mass of solution} = V\rho$$

$$\text{Now Mass of solvent, } m_1 = \text{mass of (solution - solute)} = V\rho - n_2M_2$$

Finally, molality of solution is

$$\text{molality} = \frac{\text{amount of solute}}{\text{mass of solvent expressed in kg}}$$

$$\text{i.e. } m = \frac{n_2}{V\rho - n_2M_2}$$

Dividing numerator and denominator of the right side by V , we get

$$m = \frac{(n_2/V)}{\rho - (n_2/V)M_2} = \frac{M}{\rho - MM_2} \quad (2.2.7)$$

Example 2.2.6

The density of 1.35 M solution of acetic acid is 1.012 g cm^{-3} . Calculate its molality.

Solution

Let the volume of solution be 1 dm^3 . We have

$$\text{Amount of solute, } n_2 = 1.35 \text{ mol}$$

$$\text{Volume of solution, } V = 1 \text{ dm}^3$$

$$\text{Mass of solute, } m_2 = n_2 M_2 = (1.35 \text{ mol}) (60 \text{ g mol}^{-1}) = 81 \text{ g}$$

$$\text{Mass of solution} = V\rho = (10^3 \text{ cm}^3) (1.012 \text{ g cm}^{-3}) = 1012 \text{ g}$$

$$\begin{aligned} \text{Mass of solvent, } m_1 &= \text{Mass of (solution - solute)} = (1012 - 81) \text{ g} \\ &= 931 \text{ g} = 0.931 \text{ kg} \end{aligned}$$

Finally, the molality of solution is

$$m = \frac{n_2}{m_1} = \frac{1.35 \text{ mol}}{0.931 \text{ kg}} = 1.45 \text{ mol kg}^{-1} \quad (m_1 \text{ expressed in kg})$$

Alternatively, using the conversion formula directly, we get

$$\begin{aligned} m &= \frac{M}{\rho - MM_2} = \frac{(1.35 \text{ mol dm}^{-3})}{(1.012 \text{ g cm}^{-3}) - (1.35 \text{ mol dm}^{-3})(60 \text{ g mol}^{-1})} \\ &= \frac{1.35 \text{ mol dm}^{-3}}{\{1.012 (10^{-3} \text{ kg})(10^{-1} \text{ dm})^{-3}\} - (1.35 \text{ mol dm}^{-3})\{60 (10^{-3} \text{ kg}) \text{ mol}^{-1}\}} \\ &= \frac{1.35}{1.012 - 1.35 \times 60 \times 10^{-3}} \text{ mol kg}^{-1} = 1.45 \text{ mol kg}^{-1} \end{aligned}$$

Molality into Molarity

The expression relating molality (m) and molarity (M) is

$$m = \frac{M}{\rho - MM_2} \quad (\rho \text{ is density of solution and } M_2 \text{ is molar mass of solute)}$$

Rearranging this expression, we get

$$M = \frac{m\rho}{1 + mM_2} \quad (2.2.8)$$

Example 2.2.7

The density of 1.450 molal solution of acetic acid is 1.012 g cm^{-3} . Calculate its molarity.

Solution

Let the mass of solvent be 1 kg. We have

$$\text{Amount of solute, } n_2 = 1.450 \text{ mol}$$

$$\text{Mass of solvent, } m_1 = 1 \text{ kg}$$

$$\text{Mass of solute, } m_2 = n_2 M_2 = (1.450 \text{ mol}) (60 \text{ g mol}^{-1}) = 87.0 \text{ g}$$

$$\text{Mass of solution, } m_{\text{soln}} = \text{mass of (solvent + solute)}$$

$$= 1000 \text{ g} + 87.0 \text{ g} = 1087 \text{ g}$$

$$\text{Volume of solution, } V = \frac{m_{\text{soln}}}{\rho} = \frac{1087 \text{ g}}{1.012 \text{ g cm}^{-3}} = 1074.1 \text{ cm}^3$$

2.3

Expe

Qual
ExplExp
Obs
Vari
Vap

Finally, molarity of solution is

$$M = \frac{n_2}{V} = \frac{1.450 \text{ mol}}{1.074 \text{ dm}^3} = 1.35 \text{ mol dm}^{-3} \quad (V \text{ expressed in dm}^3)$$

Alternatively, using the conversion formula directly, we get

$$\begin{aligned} M &= \frac{m\rho}{1 + mM_2} = \frac{(1.450 \text{ mol kg}^{-1})(1.012 \text{ g cm}^{-3})}{1 + (1.450 \text{ mol kg}^{-1})(60 \text{ g mol}^{-1})} \\ &= \frac{(1.450 \text{ mol kg}^{-1})\{1.012(10^{-3} \text{ kg})(10^{-1} \text{ dm})^{-3}\}}{1 + (1.450 \text{ mol kg}^{-1})\{60(10^{-3} \text{ kg}) \text{ mol}^{-1}\}} \\ &= \frac{1.450 \times 1.012}{1 + 1.450 \times 60 \times 10^{-3}} \text{ mol dm}^{-3} \\ &= 1.35 \text{ mol dm}^{-3} \end{aligned}$$

2.3 LOWERING OF VAPOUR PRESSURE — EXPERIMENTAL OBSERVATIONS

Experimental Fact

It is observed that when a nonvolatile solute is dissolved in a volatile solvent, vapour pressure of the latter is lowered.

Qualitative Explanation

If a liquid is placed in an evacuated vessel, there occurs migration of solvent molecules from the liquid surface to the empty space above and vice versa. The system attains an equilibrium when the rates of these two migrations become equal. At this stage, the pressure recorded at the space above the liquid is known as the *vapour pressure* of the liquid. In the presence of a nonvolatile solute, the number of solvent molecules available for migration from surface of solution relative to those present in the pure solvent is decreased. As a consequence of this, the vapour pressure of the solution is lesser than that of the pure solvent.

Experimental Observation of Variation in the Vapour Pressure

Let p^* be the vapour pressure of the pure solvent and p be that of a solution. Experimentally, it is found that the decrease in vapour pressure $p^* - p$ depends upon the concentration of the solute in the solution. Figure 2.3.1 shows the vapour pressure of the solvent when plotted against the amount fraction of the solute in the solution. It can be seen from the figure that the vapour pressure of the solution approaches the dashed line connecting $p^*(x_2 = 0)$ to zero ($x_2 = 1$) in the lower concentration region (x_2 near zero). At higher concentration region, the observed pressure is found to lie below the dashed line—the deviation becoming more as x_2 increases.†

The above experimental observation at $x_2 \rightarrow 0$ can be summarized as follows.

The vapour pressure of the solution approaches that of the dashed line as the concentration decreases. In the lower concentration range ($x_2 \rightarrow 0$), the

†The case discussed here is the negative deviation from the straight-dashed line. Examples with positive deviation, i.e. the actual vapour pressure line lies above the dashed line are also known. These lines show the characteristic of approaching dashed line as $x_2 \rightarrow 0$. The dashed-line plot is exhibited by the so-called ideal solutions.

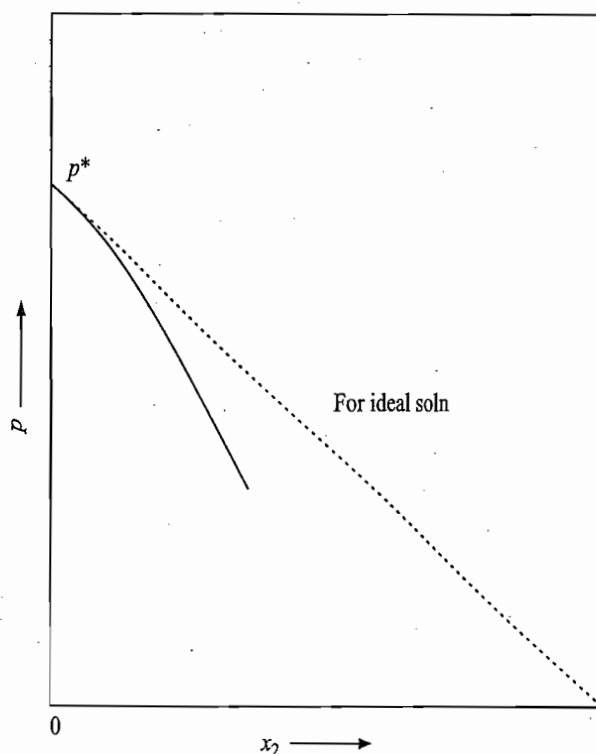


Fig. 2.3.1 Variation in vapour pressure of a solution with the amount fraction of solute in the solution

vapour pressure curve is tangent to the dashed line. In other words, the dashed line represents the behaviour of a solution when its concentration is very small.

Postulating an Ideal Solution

The above behaviour is exactly parallel to that observed in case of real gases. It is found that the real gases deviate from the experimental gas laws such as Boyle's law, Charles law, etc. The deviation from these laws becomes less and less as the pressure decreases and it is only in the very low pressure region as $p \rightarrow 0$, the real gases follow the experimental gas laws. There we have imagined an ideal gas, which is supposed to follow these gas laws under all conditions of temperature and pressure. The real gas behaves like an ideal gas only in the low pressure region and exactly as an ideal gas only when $p \rightarrow 0$. Thus the characteristics of an ideal gas can be obtained from the characteristics of a real gas by extrapolation to $p = 0$. In a similar way, we can define an *ideal solution* which is supposed to follow the dashed line for variation of vapour pressure of the solution with the concentration of the solute. Since for real solutions, this dashed line is approached only when the concentration of the solution is small (i.e. in dilute solution), it, therefore, follows that only the dilute solution for which $x_2 \rightarrow 0$ behaves like an ideal solution. The characteristics of an ideal solution can be obtained by extrapolating the characteristics of a real solution to $x_2 = 0$.

Raoult's Law

The dashed line can be represented by an equation of straight line of the type

$$p = b + mx_2 \quad (2.3.1)$$

with the characteristics of

$$p = p^* \text{ at } x_2 = 0$$

and $p = 0 \text{ at } x_2 = 1.$

2.4

Defir

Exam

Solu

A C
Pro

With these characteristics, Eq. (2.3.1) modifies to

$$p = (1 - x_2)p^* = x_1p^* \quad (2.3.2)$$

that is, the vapour pressure of the solution containing a nonvolatile solute is equal to the vapour pressure of the pure solvent multiplied by the amount fraction of the solvent in the solution. This law, which is a limiting law, was discovered by P.M. Raoult and is known as the *Raoult's law*.[†] It is followed by an ideal solution over the entire range of concentrations, whereas for a real solution it is followed only when the concentration of solute approaches zero (i.e. ideally dilute solution).[‡]

2.4 RELATIVE LOWERING OF VAPOUR PRESSURE

Definition

According to Raoult's law, the lowering of vapour pressure of a solvent is given by

$$p^* - p = p^* - x_1p^* = p^*(1 - x_1) = p^*x_2$$

Thus
$$\frac{p^* - p}{p^*} = x_2 \quad (2.4.1)$$

The expression $(p^* - p)/p^*$ is known as the relative lowering of vapour pressure and according to Eq. (2.4.1), this is equal to the amount fraction of the solute in the solution.

Example 2.4.1

Exactly 100 g water contains 1.0 g urea and 2.0 g sucrose at 298 K. The vapour pressure of water at 298 K is 0.031 67 bar. Predict the vapour pressure of the solution.

Solution

Amount fraction of solvent

$$\begin{aligned} &= \frac{\text{Amount of solvent}}{\text{Amount of (solvent + solute)}} \\ &= \frac{(100 \text{ g}/18 \text{ g mol}^{-1})}{(100 \text{ g}/18 \text{ g mol}^{-1}) + (1 \text{ g}/60 \text{ g mol}^{-1}) + (2 \text{ g}/342 \text{ g mol}^{-1})} \\ &= \frac{5.556}{5.577} \end{aligned}$$

According to Raoult's law

$$p_1 = p_1^*x_1 = (0.031 67 \text{ bar})(5.556/5.577) = 0.031 55 \text{ bar}$$

A Colligative Property

The amount fraction x_2 of solute is given by

$$\begin{aligned} x_2 &= \frac{n_2}{n_1 + n_2} = \frac{n_2N_A}{n_1N_A + n_2N_A} \\ &= \frac{\text{Number of molecules of solute}}{\text{Total number of molecules of solute and solvent}} \end{aligned}$$

[†]See Section 4.3 for the kinetic-molecular treatment of Raoult's law.

[‡]Raoult's law applicable to solvent in a nonideal solution may be written as $p = a_1p^*$, where a_1 is the activity of solvent in the solution. See also, Section 4.14.

dashed
small.

l gases.
such as
ess and
gion as
ragined
tions of
the low
rus the
f a real
solution
ssure of
ms, this
is small
r which
solution
x₂ = 0.

he type
(2.3.1)

Since x_2 involves only the number of solute molecules relative to all the molecules present and not on their individual nature, it is obvious that the relative lowering of vapour pressure is a colligative property.

Determination of Molar Mass of the Solute

By definition,

$$\frac{p_1^* - p_1}{p_1^*} = x_2 \quad (\text{Eq. 2.4.1})$$

where x_2 , the amount fraction of the solute, is given by

$$x_2 = \frac{m_2/M_2}{(m_1/M_1) + (m_2/M_2)} \quad (2.4.2)$$

where m_2 is the mass of solute (molar mass M_2) that is dissolved in the solvent (molar mass M_1) of mass m_1 . Substituting Eq. (2.4.2) in Eq. (2.4.1), we get

$$\frac{p_1^* - p_1}{p_1^*} = \frac{m_2/M_2}{(m_1/M_1) + (m_2/M_2)} \quad (2.4.3)$$

Equation (2.4.3) can be employed to determine the molar mass of a solute if all other quantities are known. However, a simplified expression can be used if the solution is dilute. In this case since $m_2/M_2 \ll m_1/M_1$, we have

$$\frac{p_1^* - p_1}{p_1^*} \approx \frac{m_2/M_2}{m_1/M_1}$$

$$\text{i.e. } M_2 = \left(\frac{m_2}{m_1} M_1 \right) \left(\frac{p_1^*}{p_1^* - p_1} \right) \quad (2.4.4)$$

Example 2.4.2

Ten grams of a solute was dissolved in 80 g of acetone at 303 K. The vapour pressure of the solution was found to be 271 Torr. Calculate the molar mass of the solute. Given: Vapour pressure of pure acetone at 303 K is 283 Torr.

Solution

The given data are

$$m_1 = 10 \text{ g}, \quad m_2 = 80 \text{ g}, \quad p_1 = 271 \text{ Torr}, \quad p_1^* = 283 \text{ Torr},$$

$$M_1 = 58 \text{ g mol}^{-1}, \quad M_2 = ?$$

Substituting the data in the expression

$$\frac{p_1^* - p_1}{p_1^*} = \frac{m_2/M_2}{(m_1/M_1) + (m_2/M_2)}$$

$$\text{we get } \frac{283 \text{ Torr} - 271 \text{ Torr}}{283 \text{ Torr}} = \frac{(10 \text{ g}/M_2)}{(80 \text{ g}/58 \text{ g mol}^{-1}) + (10 \text{ g}/M_2)}$$

$$0.0424 = \frac{(10 \text{ g}/M_2)}{(1.379 \text{ mol}) + (10 \text{ g}/M_2)}$$

$$\text{This gives } M_2 = \frac{(10 \text{ g})(1 - 0.0424)}{(0.0424)(1.379 \text{ mol})} = 163.7 \text{ g mol}^{-1}$$

Exampl

Solutio

2.5

Chem
of So

Example 2.4.3

When 2 g of a nonvolatile hydrocarbon containing 94.4 per cent carbon is dissolved in 100 g benzene, the vapour pressure of benzene at 20 °C is lowered from 0.099 54 bar to 0.098 67 bar. Calculate the molecular formula of the hydrocarbon.

Solution

The given data are

$$m_1 = 100 \text{ g}, \quad m_2 = 2 \text{ g}, \quad p_1^* = 0.099 \text{ 54 bar}, \quad p_1 = 0.098 \text{ 67 bar}$$

$$M_1 = 78 \text{ mol}^{-1}, \quad M_2 = ?$$

Substituting the given data in the expression

$$(2.4.2) \quad \frac{p_1^* - p_1}{p_1^*} = x_2 = \frac{(m_2/M_2)}{(m_1/M_1) + (m_2/M_2)}$$

we get

$$\frac{0.099 \text{ 54 bar} - 0.098 \text{ 67 bar}}{0.099 \text{ 54 bar}} = \frac{(2 \text{ g}/M_2)}{(100 \text{ g}/78 \text{ g mol}^{-1}) + (2 \text{ g}/M_2)}$$

$$(2.4.3) \quad 0.008 \text{ 740} = \frac{(2 \text{ g}/M_2)}{(1.282 \text{ mol}) + (2 \text{ g}/M_2)}$$

This gives $M_2 = \frac{(2 \text{ g})(1 - 0.008 \text{ 740})}{(0.008 \text{ 740})(1.282 \text{ mol})} = 176.9 \text{ g mol}^{-1}$

Given mass ratio is $m_C : m_H :: 94.4 : 5.6$

Thus, atomic ratio is

$$N_C : N_H :: \frac{94.4}{12} : \frac{5.6}{1} \Rightarrow 7.87 : 5.6 \Rightarrow 1.4 : 1 \Rightarrow 7 : 5$$

(2.4.4) Hence, Empirical formula : C_7H_5
 Empirical molar mass : $(12 \times 7 + 5 \times 1) \text{ g mol}^{-1} = 89 \text{ g mol}^{-1}$
 Number of units of C_7H_5 present in the given molecule

$$n = \frac{\text{Molar mass}}{\text{Empirical molar mass}} = \frac{176.9 \text{ g mol}^{-1}}{89 \text{ g mol}^{-1}} = 2$$

Thus, Molecular formula: $C_{14}H_{10}$
 The substance is anthracene.

2.5 CHEMICAL POTENTIALS OF SOLUTE AND SOLVENT IN AN IDEAL LIQUID SOLUTION**Chemical Potential of Solvent**

For the equilibrium

Solvent molecules in solution \rightleftharpoons Solvent molecules in vapour
 the thermodynamic condition of equilibrium is

$$\mu_{1(\text{sol})} = \mu_{1(\text{v})}^* \quad (2.5.1)$$

If the vapour is assumed to be an ideal gas, the chemical potential of vapour in terms of its pressure is given by

$$\mu_{1(\text{v})}^* = \mu_{1(\text{v})}^\circ + RT \ln(p/p^\circ) \quad (2.5.2)$$

where $\mu_{1(v)}^\circ$ is the standard chemical potential of the solvent vapour and p is the vapour pressure of the solution. Substituting Eq. (2.5.2) in Eq. (2.5.1), we have

$$\mu_{1(\text{sol})} = \mu_{1(v)}^\circ + RT \ln (p/p^\circ) \quad (2.5.3)$$

Using Raoult's law ($p = x_1 p_1^*$), we get

$$\begin{aligned} \mu_{1(\text{sol})} &= \mu_{1(v)}^\circ + RT \ln (x_1 p_1^*/p^\circ) \\ &= \mu_{1(v)}^\circ + RT \ln (p_1^*/p^\circ) + RT \ln x_1 \end{aligned} \quad (2.5.4)$$

If in the above expression $x_1 = 1$ (i.e. pure liquid solvent), we will have

$$\mu_{1(l)}^* = \mu_{1(v)}^\circ + RT \ln (p_1^*/p^\circ) \quad (2.5.5)$$

With this, Eq. (2.5.4) becomes

$$\mu_{1(\text{sol})} = \mu_{1(l)}^* + RT \ln x_1 \quad (2.5.6)$$

The form of Eq. (2.5.6) is exactly the same as that of an ideal gas in a mixture of gases.

Chemical Potential of Solute

The expression of chemical potential for the solute in a binary ideal solution can be obtained by making use of the Gibbs-Duhem equation:

$$n_1 d\mu_{1(\text{sol})} + n_2 d\mu_{2(\text{sol})} = 0 \quad (\text{constant } T \text{ and } p) \quad (2.5.7)$$

Rearranging Eq. (2.5.7), we get

$$d\mu_{2(\text{sol})} = - \left(\frac{n_1}{n_2} \right) d\mu_{1(\text{sol})} \quad (2.5.8)$$

Since $n_1/n_2 = x_1/x_2$, we have

$$d\mu_{2(\text{sol})} = - \left(\frac{x_1}{x_2} \right) d\mu_{1(\text{sol})} \quad (2.5.9)$$

For the solvent, we have

$$\mu_{1(\text{sol})} = \mu_{1(l)}^* + RT \ln x_1 \quad (\text{Eq. 2.5.6})$$

Therefore, at constant T and p , we have

$$d\mu_{1(\text{sol})} = \frac{RT}{x_1} dx_1 \quad (2.5.10)$$

Substituting this relation in Eq. (2.5.9), we have

$$\begin{aligned} d\mu_{2(\text{sol})} &= - \left(\frac{x_1}{x_2} \right) \left(\frac{RT}{x_1} \right) dx_1 \\ &= - RT \frac{dx_1}{x_2} \end{aligned} \quad (2.5.11)$$

Con

2.6

Qu
Ex

and p is the
pressure, we have

$$(2.5.3)$$

Now, since $x_1 + x_2 = 1$, therefore

$$dx_1 + dx_2 = 0 \quad \text{or} \quad dx_1 = -dx_2$$

With this, Eq. (2.5.11) becomes

$$d\mu_{2(\text{sol})} = RT \frac{dx_2}{x_2} \quad (2.5.12)$$

Equation (2.5.12) is similar in form as Eq. (2.5.10). Integrating Eq. (2.5.12), we have

$$\mu_{2(\text{sol})} = RT \ln x_2 + I \quad (2.5.13)$$

where I is the constant of integration. For pure liquid solute $x_2 = 1$. Thus $I = \mu_{2(1)}^*$ and Eq. (2.5.13) becomes

$$\mu_{2(\text{sol})} = \mu_{2(1)}^* + RT \ln x_2 \quad (2.5.14)$$

a form similar to that of the solvent.

Thus, we conclude that the expression

$$\mu_{i(\text{sol})} = \mu_{i(1)}^* + RT \ln x_i \quad (2.5.15)$$

is applicable to both the constituents of an ideal solution. Since x_1 or x_2 is less than one, it is obvious that


$$\mu_{i(\text{sol})} < \mu_{i(1)}^* \quad (2.5.16)$$

2.6 ORIGIN OF COLLIGATIVE PROPERTIES

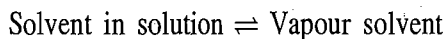
Qualitative Explanation

The depression of freezing point and the elevation of boiling point when a nonvolatile solute is dissolved in a volatile solvent can be explained qualitatively by plotting μ versus T curves. For a pure substance in solid, liquid and vapour phases, the variations of μ^* with T are shown by solid lines in Fig. 2.6.1. The point of intersection of the μ_s^* line with the μ_l^* line and that of the μ_l^* line with the μ_v^* line represent, respectively, the freezing point and the boiling point of the solvent.

Consider now a solution formed by the dissolution of a nonvolatile solute in the above solvent. At the freezing point, we have the separation of the solid solvent from the solution and thus an equilibrium of the type



exists at the freezing point of the solution. Similarly at the boiling point of the solution, the equilibrium of the type



exists. Since the solute is nonvolatile, the vapour will not contain any solute molecules.

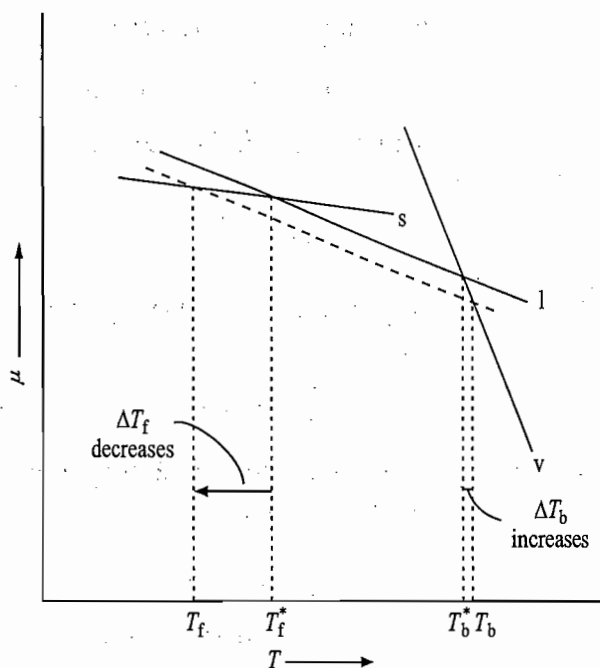


Fig. 2.6.1 The elevation of boiling point and the depression of freezing point on the basis of μ versus T curves

Since the solid which separates at the freezing point of the solution and the vapour which appears at the boiling point are of pure solvent, the variations of chemical potentials for these two phases with temperature remain unaltered and thus are represented by the same solid and vapour lines in Fig. 2.6.1. However, the chemical potential of the liquid solvent will be decreased by an amount $RT \ln x_1$ (Eq. 2.5.6). This decrease is shown by the broken line in Fig. 2.6.1. This line intersects μ_{solid}^* and μ_{vapour}^* curves at points T_f and T_b and are, therefore, the respective freezing and boiling points of the solutions. It can be seen from Fig. 2.6.1 that:

- The boiling point of the solution is higher than that of the solvent ($T_b > T_b^*$) and thus there occurs an elevation of the boiling point.
- The freezing point of the solution is smaller than that of the solvent ($T_f < T_f^*$) and thus there occurs a depression of the freezing point.
- The depression of freezing point for a solution of a given concentration is greater in magnitude than the corresponding elevation of the boiling point.

Display on the Phase Diagram

The elevation of boiling point and the depression of freezing point can also be illustrated on the phase diagram. Let the solvent chosen be water. Its phase diagram is represented by the solid lines in Fig. 2.6.2.

Now if a nonvolatile solute is added to it, the vapour pressure is lowered at every temperature. The new liquid-vapour equilibrium curve will lie below the corresponding liquid-vapour curve of the pure solvent. The new solid-liquid equilibrium curve can be drawn from the point where the new liquid-vapour curve meets the solid-vapour curve of the pure solvent. The freezing point and the boiling point can be obtained from the intersections of a line drawn horizontally from the given external pressure to the solid-liquid and liquid-vapour curves, respectively. From Fig. 2.6.2, it is obvious that the boiling point is elevated, whereas the freezing point is depressed on adding a nonvolatile solute in a volatile solvent.

Fig. 2 of the the d point phase

Expl Osm

Fig. pres

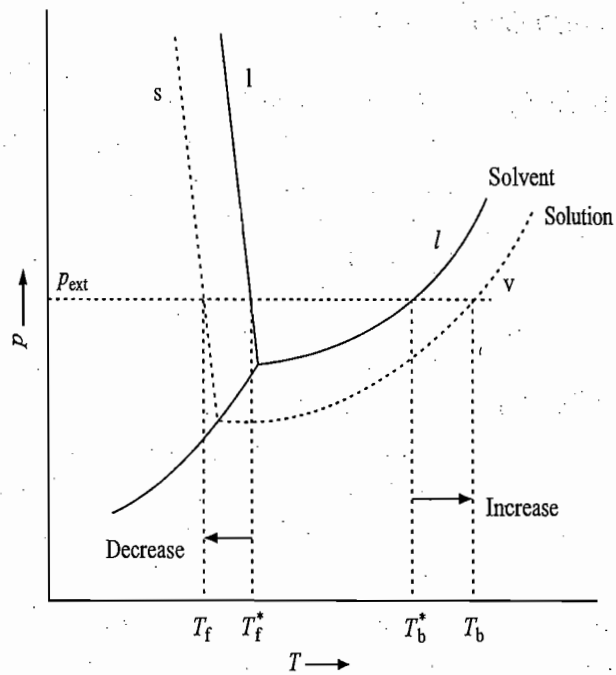


Fig. 2.6.2 The elevation of the boiling point and the depression of freezing point on the basis of phase diagram

Explanation of Osmotic Pressure

The third colligative property, the osmotic pressure, arises because of the equilibrium between the solvent in solution and the pure liquid solvent. Let the given solution be separated from the pure solvent by a semipermeable membrane (Fig. 2.6.3) which allows only the flow of solvent molecules from one side to the other. Since

$$\mu_{1(\text{sol})} < \mu_{1(\text{l})}^*$$

therefore, the situation shown in Fig. 2.6.3 will not be at equilibrium. The solvent will flow from the region of high chemical potential (pure solvent) to the region of low chemical potential (solution). This can, however, be stopped either by raising the chemical potential of the solvent in the solution by increasing the external pressure on the solution or by lowering the chemical potential of the pure solvent by decreasing the external pressure on the pure solvent till the chemical potential of the solvent becomes the same on both sides of the membrane. This excessive pressure on the solution side or the lowering of external pressure on the solvent side which is just sufficient to equate the chemical potential of solvent on both sides is known as the *osmotic pressure* of the solution.

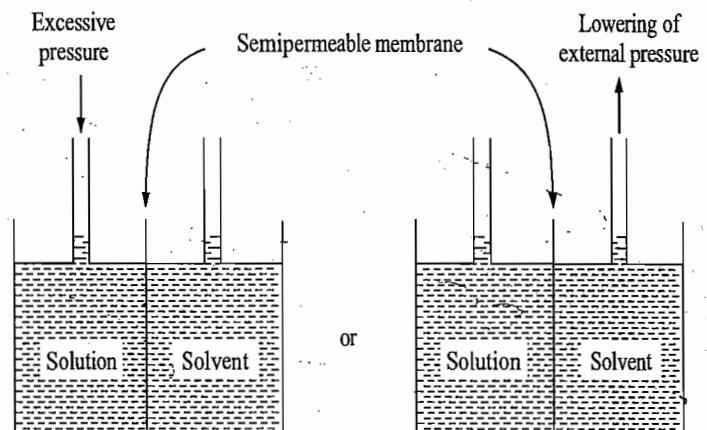


Fig. 2.6.3 Osmotic pressure of the solution

on and the variations of filtered and however, the at $RT \ln x_1$ This line before, the from Fig.

$(T_b > T_b^*)$

solvent it. tration is ng point.

n also be lts phase

lowered ie below id-liquid d-vapour oint and e drawn l liquid- ng point volatile

2.7 ELEVATION OF BOILING POINT

Definition of Boiling Point

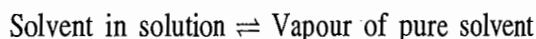
A liquid starts boiling when its vapour pressure becomes equal to the external pressure. The temperature at which this occurs is known as the boiling point of the liquid. If the external pressure is 1 atm, this temperature is known as the normal boiling point of the liquid. When a nonvolatile solute is added to a liquid solvent, the boiling point of the resultant solution is increased.

Qualitative Explanation of Elevation of Boiling Point

The vapour pressure of the solution is comparatively smaller than that of the pure solvent (Raoult's law). Consequently, the temperature at which the vapour pressure of solution becomes equal to the external pressure, will be greater than that of pure solvent, thus raising its boiling point. Since the decrease in vapour pressure is directly proportional to the amount fraction of the solute in the solution, it is, therefore, expected that the corresponding increase in the boiling point also depends on the amount fraction of the solute in the solution.

Thermodynamic Expression of Boiling Point of a Solution

The quantitative relation between the elevation of boiling point and the concentration of the solution can be derived thermodynamically. Consider a solution which is in equilibrium with the vapour of the pure solvent. Basically, we have the following equilibrium at the boiling point of the solution.



The thermodynamic condition of equilibrium is

$$\mu_{1(\text{sol})}(T_b, p) = \mu_{1(\text{v})}^*(T_b, p) \quad (2.7.1)$$

where T_b is the boiling point of the solution. At constant pressure, this temperature is a function of x_1 , the amount fraction of the solvent in solution. For an ideal solution, we have

$$\mu_{1(\text{sol})} = \mu_{1(l)}^* + RT_b \ln x_1 \quad (\text{Eq. 2.5.6})$$

Substituting the above relation in Eq. (2.7.1) and rearranging, we have

$$\ln x_1 = \frac{\mu_{1(\text{v})}^* - \mu_{1(l)}^*}{RT_b} \quad (2.7.2)$$

$$\text{or} \quad \ln x_1 = \frac{\Delta_{\text{vap}}\mu_1^*}{RT_b} \quad (2.7.3)$$

where $\Delta_{\text{vap}}\mu_1^* = \mu_{1(\text{v})}^* - \mu_{1(l)}^*$ and is the molar free energy of evaporation of the pure solvent at temperature T_b and pressure p . Equation (2.7.3) is the required relation between the composition of the solution and the boiling point.

Alternative Expression of Boiling Point

As stated above $T_b = f(x_1)$. The actual relation between T_b and x_1 can be determined by differentiating Eq. (2.7.3) with respect to x_1 at constant p , such that

$$\frac{1}{x_1} = \frac{1}{R} \left\{ \frac{\partial(\Delta_{\text{vap}}\mu_1^*/T_b)}{\partial T_b} \right\}_p \left(\frac{\partial T_b}{\partial x_1} \right)_p$$

Using the Gibbs-Helmholtz equation

$$\left\{ \frac{\partial(\Delta\mu/T)}{\partial T} \right\}_p = -\frac{\Delta H_m}{T^2}$$

we get
$$\frac{1}{x_1} = -\frac{\Delta_{\text{vap}}H_{1,m}}{RT_b^2} \left(\frac{\partial T_b}{\partial x_1} \right)_p \quad (2.7.4)$$

or
$$\frac{dx_1}{x_1} = -\frac{\Delta_{\text{vap}}H_{1,m}}{RT_b^2} dT_b \quad (p \text{ constant}) \quad (2.7.5)$$

where $\Delta_{\text{vap}}H_{1,m}$ is the molar enthalpy of vaporization of the pure solvent at temperature T_b .

The relation between boiling point (T_b) and amount fraction of solvent (x_1) can be obtained by integrating Eq. (2.7.5). Thus, we have

$$\int_1^{x_1} \frac{dx_1}{x_1} = -\int_{T_b^*}^{T_b} \frac{\Delta_{\text{vap}}H_{1,m}}{R} \frac{dT_b}{T_b^2} \quad (2.7.6)$$

where T_b and T_b^* are the boiling points of solution and pure solvent, respectively. If $\Delta_{\text{vap}}H_{1,m}$ is assumed to be independent of over the temperature range T_b and T_b^* , Eq. (2.7.6) on integrating gives

$$\ln x_1 = -\frac{\Delta_{\text{vap}}H_{1,m}}{R} \left(-\frac{1}{T_b} + \frac{1}{T_b^*} \right) \quad (2.7.7)$$

i.e.
$$\frac{1}{T_b} = \frac{1}{T_b^*} + \frac{R \ln x_1}{\Delta_{\text{vap}}H_{1,m}} \quad (2.7.8)$$

Equation (2.7.8) can be used to compute the boiling point of a solution in which the amount fraction of solvent is x_1 , T_b^* and $\Delta_{\text{vap}}H_{1,m}$ are the boiling point and the molar enthalpy of vaporization of the pure solvent, respectively.

Boiling Point Related to Molality of Solution

By definition, we have

$$x_1 = \frac{n_1}{n_1 + n_2} = \frac{m_1/M_1}{(m_1/M_1) + n_2} = \frac{1}{1 + (n_2/m_1)M_1} = \frac{1}{1 + mM_1}$$

where m is the molality of the solution.

Hence,
$$\ln x_1 = \ln \left(\frac{1}{1 + mM_1} \right) = -\ln (1 + mM_1)$$

Differentiating this expression, we get

$$\frac{dx_1}{x_1} = -\frac{1}{1 + mM_1} M_1 dm$$

Substituting this in Eq. (2.7.5), we get

$$-\frac{1}{1+mM_1}M_1 dm = -\frac{\Delta_{\text{vap}}H_{1,m}}{RT_b^2} dT_b$$

$$\text{or } dT_b = \left(\frac{RT_b^2}{\Delta_{\text{vap}}H_{1,m}} \right) \left(\frac{M_1}{1+mM_1} \right) dm \quad (2.7.9)$$

Definition of Ebullioscopic Constant

For a dilute solution, as $m \rightarrow 0$, $T_b \rightarrow T_b^*$. Thus, the limiting value of the derivative $\partial T_b / \partial m$ at zero molality is

$$\left(\frac{\partial T_b}{\partial m} \right)_{m \rightarrow 0} = \frac{RM_1 T_b^{*2}}{\Delta_{\text{vap}}H_{1,m}} \quad (2.7.10)$$

From Eq. (2.7.10), it follows that the limiting value of $(\partial T_b / \partial m)$ depends only on the characteristics of the solvent. The derivative $(\partial T_b / \partial m)_{m \rightarrow 0}$ is known as the **boiling point elevation constant** or the **ebullioscopic constant** and is represented by the symbol K_b .

Equation (2.7.9) may be written as

$$dT_b = K_b dm \quad (p \text{ constant, very dilute solution}) \quad (2.7.11)$$

For a finite value of dm , we have

$$\Delta T_b = K_b m \quad (2.7.12)^\dagger$$

Unit of K_b

The unit of K_b may be worked out as follows.

$$\text{unit of } K_b = \frac{\text{unit of } \Delta T_b}{\text{unit of } m} = \frac{\text{K}}{\text{mol kg}^{-1}} = \text{K kg mol}^{-1}$$

Value of K_b for Water

The numerical value of K_b for a given solvent can be determined from its T_b^* and $\Delta_{\text{vap}}H_m$ values. For example, for water we have

$$\begin{aligned} K_b &= \frac{M_1 RT_b^{*2}}{\Delta_{\text{vap}}H_m} = \frac{(18 \times 10^{-3} \text{ kg mol}^{-1})(8.314 \text{ J K}^{-1} \text{ mol}^{-1})(373 \text{ K})^2}{(40658 \text{ J mol}^{-1})} \\ &= 0.51 \text{ K kg mol}^{-1} \end{aligned}$$

Values of K_b for Some Solvents

The values of K_b for other commonly used solvents are given in Table 2.7.1.

[†]Equation (2.7.12) may be derived directly from Eq. (2.7.8) by invoking the following approximations.

$$\begin{aligned} \ln x_1 &= -\ln(1+mM_1) \approx -mM_1 \\ T_b T_b^* &\approx T_b^{*2} \end{aligned}$$

Pro

Sol

Fig
Cla
apl
vap

Table 2.7.1 Boiling-Point Elevation Constants

Solvent	Molar mass		$K_b / (\text{K kg mol}^{-1})$
	g mol ⁻¹		
Water	18.0	100	0.51
Methyl alcohol	32.0	64.7	0.86
Ethyl alcohol	46.1	78.5	1.23
Acetone	58.1	56.1	1.71
Benzene	78.1	80.2	2.53
Cyclohexane	84.2	81.3	2.79
Chloroform	119.5	61.3	3.63
Carbon tetrachloride	154.0	76.8	5.03

Problem 2.7.1

The expression $\Delta T_b = K_b m$ for the boiling point elevation can also be obtained by applying the Clausius-Clapeyron equation to the solution-vapour equilibrium curves. Derive the relation by drawing the necessary diagram.

Solution

The variations in vapour pressure of the solvent and that of the solution with temperature are given by the respective solvent-vapour and solution-vapour curves of the phase diagram (Fig. 2.7.1).

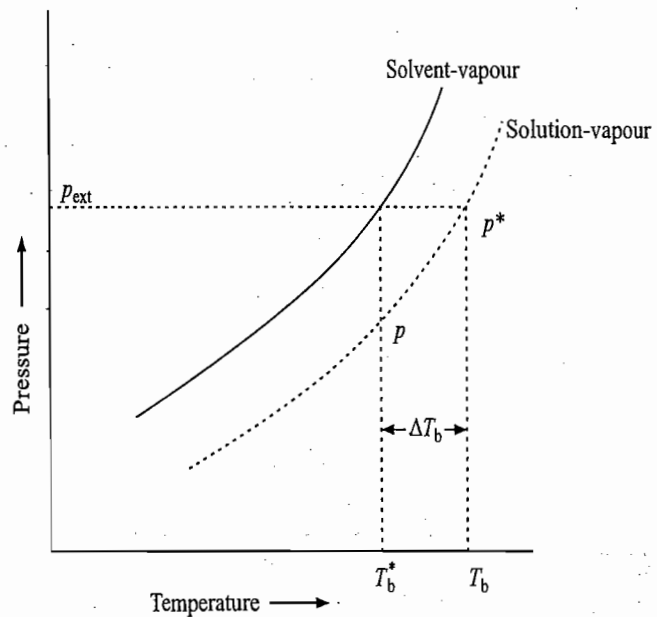


Fig. 2.7.1 Clausius-Clapeyron equation as applied to the solution-vapour curve

For a given value of the external pressure p_{ext} , the pure solvent will boil at temperature T_b^* and the solution at temperature T_b . Let p_{ext} be equal to p^* , the vapour pressure of pure solvent. Let p be the vapour pressure of the solution at temperature T_b^* .

Applying the Clausius-Clapeyron equation to the solution-vapour equilibrium for two values of p , T_b^* and p^* , T_b , we have

$$\ln \frac{p^*}{p} = \frac{\Delta_{\text{vap}} H_{1,m}}{R} \left(\frac{1}{T_b^*} - \frac{1}{T_b} \right) = \frac{\Delta_{\text{vap}} H_{1,m}}{R} \frac{\Delta T_b}{T_b^* T_b} \quad (2.7.13)$$

where $\Delta T_b = T_b - T_b^*$, the elevation of boiling point. For a dilute solution, Eq. (2.7.13) may be simplified under the following approximations.

(1) T_b will be very near to T_b^* , so that the term $T_b T_b^*$ can be replaced by T_b^{*2} , i.e.

$$T_b^* T_b \approx T_b^{*2} \quad (2.7.14)$$

(2) The term $\ln p^*/p$ can be written as

$$\ln \frac{p^*}{p} = -\ln \frac{p}{p^*} = -\ln \left(\frac{p^* - p^* + p}{p^*} \right) = -\ln \left(1 - \frac{p^* - p}{p^*} \right)$$

The term $(p^* - p)/p^*$, the relative lowering of vapour pressure, is very small in comparison to 1, thus the term $-\ln(1 - (p^* - p)/p^*)$ can be approximated to

$$-\ln \left(1 - \frac{p^* - p}{p^*} \right) \approx - \left(- \frac{p^* - p}{p^*} \right) = \frac{p^* - p}{p^*}$$

Hence
$$\ln \frac{p^*}{p} \approx \frac{p^* - p}{p^*}$$

(3) According to Raoult's law, we have

$$\frac{p^* - p}{p^*} = x_2 = \frac{n_2}{n_1 + n_2}$$

For a dilute solution $n_2 \ll n_1$, and, therefore, n_2 can be neglected in comparison to n_1 . Thus, we have

$$\ln \frac{p^*}{p} \approx \frac{p^* - p}{p^*} \approx \frac{n_2}{n_1} = \frac{n_2}{m_1/M_1} \quad (2.7.15)$$

Substituting Eqs (2.7.14) and (2.7.15) in Eq. (2.7.13), we get

$$\frac{n_2}{m_1/M_1} = \frac{\Delta_{\text{vap}} H_{1,m}}{R} \frac{\Delta T_b}{T_b^{*2}}$$

Rearranging this, we get

$$\Delta T_b = \left(\frac{M_1 R T_b^{*2}}{\Delta_{\text{vap}} H_{1,m}} \right) \left(\frac{n_2}{m_1} \right) = K_b m$$

Problem 2.7.2

According to Raoult's law $p_1 = x_1 p_1^*$ or $\ln(p_1/p^\circ) = \ln x_1 + \ln(p_1^*/p^\circ)$. If $p_1 = p_{\text{ext}} = \text{constant}$, then

$$\frac{d \ln(p_1/p^\circ)}{dT_b} = 0 = \frac{d \ln x_1}{dT_b} + \frac{d \ln(p_1^*/p^\circ)}{dT_b}$$

Now if the Clapeyron equation

$$\frac{d \ln(p_1/p^\circ)}{dT} = \frac{\Delta_{\text{vap}} H_m}{RT^2}$$

is introduced in the previous expression, show that it leads to the expression $\Delta T_b = K_b m$ for a dilute solution.

Solution

Substituting the Clapeyron equation $\frac{d \ln(p_1^*/p^\circ)}{dT_b^*} = \frac{\Delta_{\text{vap}} H_{1,m}}{RT_b^{*2}}$ in the expression

i.e.

2.7.14)

$$\frac{d \ln x_1}{dT_b^*} = - \frac{d \ln (p_1^*/p_1^{\circ})}{dT_b^*},$$

$$\text{we get } \frac{d \ln x_1}{dT_b^*} = - \frac{\Delta_{\text{vap}} H_{1,m}}{RT_b^{*2}} \quad \text{or} \quad \frac{d \ln (1-x_2)}{dT_b^*} = - \frac{\Delta_{\text{vap}} H_{1,m}}{RT_b^{*2}}$$

Integrating within the limits, we get

arison

$$\int_0^{x_2} d \ln (1-x_2) = - \int_{T_b^*}^{T_b} \frac{\Delta_{\text{vap}} H_{1,m}}{R} \frac{dT_b^*}{T_b^{*2}}$$

$$\text{i.e. } \ln (1-x_2) = - \frac{\Delta_{\text{vap}} H_{1,m}}{R} \left(\frac{1}{T_b} + \frac{1}{T_b^*} \right)$$

For a dilute solution, we will have

$$\ln (1-x_2) \approx -x_2 = - \frac{n_2}{n_1+n_2} \approx - \frac{n_2}{n_1} = - \frac{n_2}{m_1} M_1 = -mM_1$$

$$T_b \approx T_b^* \quad \text{so that } T_b T_b^* \approx T_b^{*2}$$

With these, the previous expression becomes

on to

$$-mM_1 = - \frac{\Delta_{\text{vap}} H_{1,m}}{R} \frac{\Delta T_b}{T_b^{*2}}$$

.15)

$$\text{or } \Delta T_b = \left(\frac{M_1 R T_b^{*2}}{\Delta_{\text{vap}} H_{1,m}} \right) m = K_b m$$

Example 2.7.1

A solution containing 0.5126 g of naphthalene (molar mass 128.2 g mol⁻¹) in 50 g CCl₄, yields a boiling point elevation of 0.402 K, while a solution of 0.6216 g of an unknown solute in the same mass of the solvent gives a boiling point elevation of 0.647 K. Find K_b of the solvent the molar mass of the unknown solute.

Solution

Mass of dissolved naphthalene = 0.5126 g

Mass of solvent = 50 g

ext

$$\text{Molality of the solution, } m = \frac{n_2}{m_1} = \frac{m_2/M_2}{m_1} = \frac{(0.5126 \text{ g}/128.2 \text{ g mol}^{-1})}{(0.050 \text{ kg})}$$

$$= 0.07997 \text{ mol kg}^{-1}$$

From the relation, $\Delta T_b = K_b m$, we get

$$K_b = \frac{\Delta T_b}{m} = \frac{0.402 \text{ K}}{0.07997 \text{ mol kg}^{-1}} = 5.027 \text{ K kg mol}^{-1}$$

m

Let M_2 be the molar mass of the unknown substance. The molality of solution containing unknown compound is

n

$$m = \frac{m_2/M_2}{m_1} = \frac{(0.6216 \text{ g})/M_2}{0.050 \text{ kg}} = \frac{12.432}{M_2} \text{ g kg}^{-1}$$

Substituting the above molality along with $\Delta T_b = 0.647$ K in the relation $\Delta T_b = K_b m$, we get

$$0.647 \text{ K} = (5.027 \text{ K mol}^{-1} \text{ kg}) \left(\frac{12.432}{M_2} \text{ g kg}^{-1} \right)$$

$$\text{or } M_2 = \frac{5.027 \times 12.432}{0.647} \text{ g mol}^{-1} = 96.59 \text{ g mol}^{-1}$$

Example 2.7.2

A complex compound of unknown molar mass is known to dissolve in benzene without association or dissociation. A solution of this compound in benzene has a vapour pressure of 100 Torr at 300.15 K. Pure benzene boils at 353.15 K at 760 Torr pressure; its entropy of vaporization is $87.03 \text{ J K}^{-1} \text{ mol}^{-1}$. What would be the amount fraction of the complex compound in this solution and the boiling point of the solution?

Solution

Vapour Pressure of the Pure Solvent at 300.15 K The given data are

$$\begin{aligned} p_2 &= 760 \text{ Torr} & T_2 &= 353.15 \text{ K} \\ p_1 &=? & T_1 &= 300.15 \text{ K} \end{aligned}$$

The Clausius-Clapeyron equation is

$$\ln \frac{p_2}{p_1} = \frac{\Delta_{\text{vap}} H_m}{R} \left(\frac{1}{T_1} - \frac{1}{T_2} \right) = \left(\frac{\Delta_{\text{vap}} H_m}{R} \right) \left(\frac{\Delta T_b}{T_1 T_2} \right)$$

But $\Delta_{\text{vap}} H_m = T_2 \Delta_{\text{vap}} S_m$, therefore

$$\log \frac{p_2}{p_1} = \left(\frac{\Delta_{\text{vap}} S_m}{2.303 R} \right) \left(\frac{\Delta T_b}{T_1} \right)$$

Substituting the given data, we get

$$\log \left(\frac{760 \text{ Torr}}{p_1} \right) = \left[\frac{(87.03 \text{ J K}^{-1} \text{ mol}^{-1})}{(2.303)(8.314 \text{ J K}^{-1} \text{ mol}^{-1})} \right] \left[\frac{(53 \text{ K})}{(300.15 \text{ K})} \right]$$

$$= 0.8026$$

$$\text{or } \frac{760 \text{ Torr}}{p_1} = 6.35 \text{ or } p_1 = \frac{760 \text{ Torr}}{6.35} = 119.7 \text{ Torr}$$

Amount Fraction of the Solute According to the relative lowering of vapour pressure, we get

$$x_2 = \frac{p^* - p}{p^*} = \frac{119.7 \text{ Torr} - 100 \text{ Torr}}{119.7 \text{ Torr}} = 0.1646$$

Boiling Point of the Solution Substituting the data in the expression

$$\frac{1}{T_b} = \frac{1}{T_b^*} + \frac{R \ln x_1}{\Delta_{\text{vap}} H_{l,m}} \quad \text{i.e.} \quad \frac{1}{T_b} = \frac{1}{T_b^*} + \frac{R \ln(1-x_2)}{T_b^* \Delta_{\text{vap}} S_{l,m}}$$

$$\begin{aligned} \text{we get } \frac{1}{T_b} &= \frac{1}{353.15 \text{ K}} + \frac{(8.314 \text{ J K}^{-1} \text{ mol}^{-1}) \ln(1-0.1646)}{(353.15 \text{ K})(87.03 \text{ J K}^{-1} \text{ mol}^{-1})} \\ &= 0.002832 \text{ K}^{-1} - 0.0000486 \text{ K}^{-1} = 0.002783 \text{ K}^{-1} \\ T_b &= 359.3 \text{ K} \end{aligned}$$

Exam

Soluti

2.8

The
Expi
Free
of a

Example 2.7.3

For a solution of 3.795 g sulphur in 100 g CS₂ the boiling point was 319.81 K. For pure CS₂, the boiling point is 319.45 K and the enthalpy of vaporization is 351.87 J g⁻¹. What is the molar mass and formula of sulphur in CS₂?

Solution

The given data are

$$m_2 = 3.795 \text{ g} \quad m_1 = 100 \text{ g} \quad M_{\text{CS}_2} = 76 \text{ g mol}^{-1}$$

$$T_b = 319.81 \text{ K} \quad T_b^* = 319.45 \text{ K}$$

$$\Delta_{\text{vap}}H_{1,m} = 351.87 \times 76 \text{ J mol}^{-1}$$

Determination of $K_b(\text{CS}_2)$

$$K_b = \frac{M_1 R T_b^{*2}}{\Delta_{\text{vap}}H_{1,m}} = \frac{(76 \times 10^{-3} \text{ kg mol}^{-1})(8.314 \text{ J K}^{-1} \text{ mol}^{-1})(319.45 \text{ K})^2}{(351.87 \times 76 \text{ J mol}^{-1})}$$

$$= 2.41 \text{ K kg mol}^{-1}$$

Molality of the given solution

$$m = \frac{\Delta T_b}{K_b} = \frac{T_b - T_b^*}{K_b} = \frac{(319.81 \text{ K} - 319.45 \text{ K})}{(2.41 \text{ K kg mol}^{-1})} = 0.149 \text{ mol kg}^{-1}$$

Molar mass of solute Since $m = (m_2/M_2)/m_1$, we get

$$M_2 = \frac{m_2}{mm_1} = \frac{(3.795 \text{ g})}{(0.149 \text{ mol kg}^{-1})(100 \text{ g})} = 0.255 \text{ kg mol}^{-1}$$

$$= 255 \text{ g mol}^{-1}$$

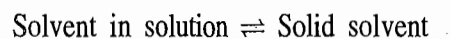
$$\text{Number of sulphur atoms in 1 molecule of sulphur} = \frac{(255 \text{ g mol}^{-1})}{(32 \text{ g mol}^{-1})} \approx 8$$

Hence, Molecular formula = S₈

2.8 DEPRESSION OF FREEZING POINT**Thermodynamic Expression of Freezing Point of a Solution**

We have seen in Section 2.6 that when a nonvolatile solute is dissolved in a volatile solvent, the freezing point of the resultant solution is lowered relative to that of the pure solvent. The quantitative relation between the depression of freezing point and the concentration of the solution can be derived thermodynamically following the sequence of steps adopted in the derivation of expression for the elevation of boiling point.

Basically, at the freezing point of the solution, we have the equilibrium



The condition of equilibrium is

$$\mu_{1(\text{sol})}(T_f, p) = \mu_{1(\text{s})}^*(T_f, p) \quad (2.8.1)$$

where T_f is the freezing point of the solution. At a constant pressure, this temperature will be a function of x_1 , the amount fraction of the solvent in solution. If the solution is ideal, then

$$\mu_{1(\text{sol})} = \mu_{1(l)}^* + RT_f \ln x_1$$

Substituting the above relation in Eq. (2.8.1) and rearranging, we have

$$\ln x_1 = -\frac{\mu_{1(l)}^* - \mu_{1(s)}^*}{RT_f} \quad (2.8.2)$$

or
$$\ln x_1 = -\frac{\Delta_{\text{fus}}\mu_1^*}{RT_f} \quad (2.8.3)$$

where $\Delta_{\text{fus}}\mu_1^*$ is the molar free energy of fusion of the pure solvent at temperature T_f and pressure p .

Alternative Expression of Freezing Point

In order to derive the relation governing the freezing point of a solution with its composition, we differentiate Eq. (2.8.3) with respect to x_1 at constant pressure, such that

$$\frac{1}{x_1} = -\frac{1}{R} \left[\frac{\partial(\Delta_{\text{fus}}\mu_1^*/T_f)}{\partial T_f} \right]_p \left(\frac{\partial T_f}{\partial x_1} \right)_p$$

Using the Gibbs-Helmholtz equation

$$\left[\frac{\partial(\Delta\mu/T)}{\partial T} \right]_p = -\frac{\Delta H_m}{T^2}$$

we get
$$\frac{1}{x_1} = \frac{\Delta_{\text{fus}}H_{1,m}}{RT_f^2} \left(\frac{\partial T_f}{\partial x_1} \right)_p \quad (2.8.4)$$

or
$$\frac{dx_1}{x_1} = \frac{\Delta_{\text{fus}}H_{1,m}}{RT_f^2} dT_f \quad (p \text{ constant}) \quad (2.8.5)$$

where $\Delta_{\text{fus}}H_{1,m}$ is the molar enthalpy of fusion of the pure solvent at temperature T_f .

The relation between freezing point (T_f) and amount fraction of solvent (x_1) can be obtained by integrating Eq. (2.8.5). Thus, we have

$$\int_1^{x_1} \frac{dx_1}{x_1} = \int_{T_f^*}^{T_f} \frac{\Delta_{\text{fus}}H_{1,m}}{R} \frac{dT_f}{T_f^2} \quad (2.8.6)$$

where T_f and T_f^* are the freezing points of solution and pure solvent, respectively. If $\Delta_{\text{fus}}H_{1,m}$ is assumed to be independent over the temperature range T_f and T_f^* , Eq. (2.8.6) on integrating gives

$$\ln x_1 = \frac{\Delta_{\text{fus}}H_{1,m}}{R} \left(-\frac{1}{T_f} + \frac{1}{T_f^*} \right) \quad (2.8.7)$$

i.e.
$$\frac{1}{T_f} = \frac{1}{T_f^*} - \frac{R \ln x_1}{\Delta_{\text{fus}}H_{1,m}} \quad (2.8.8)$$

Equation (2.8.8) can be used to compute the freezing point of a solution in which the amount fraction of solvent is x_1 ; T_f^* and $\Delta_{\text{fus}}H_{1,m}$ are the freezing point and the molar enthalpy of fusion of the pure solvent, respectively.

Freezing Point Related to Molality of Solution

By definition, we have

$$x_1 = \frac{n_1}{n_1 + n_2} = \frac{m_1/M_1}{(m_1/M_1) + n_2} = \frac{1}{1 + (n_2/m_1)M_1} = \frac{1}{1 + mM_1}$$

where m is the molality of the solution.

$$\text{Hence, } \ln x_1 = \ln \left(\frac{1}{1 + mM_1} \right) = -\ln(1 + mM_1)$$

Differentiating this expression, we get

$$\frac{dx_1}{x_1} = -\frac{1}{1 + mM_1} M_1 dm$$

Substituting this in Eq. (2.8.5), we get

$$-\frac{1}{1 + mM_1} M_1 dm = \frac{\Delta_{\text{fus}}H_{1,m}}{RT_f^2} dT_f$$

$$\text{or } dT_f = -\left(\frac{RT_f^2}{\Delta_{\text{fus}}H_{1,m}} \right) \left(\frac{M_1}{1 + mM_1} \right) dm \quad (2.8.9)$$

Definition of Cryoscopic Constant

For a dilute solution, as $m \rightarrow 0$, $T_f \rightarrow T_f^*$. Thus, the limiting value of the derivative $\partial T_f / \partial m$ at zero molality is

$$\left(\frac{\partial T_f}{\partial m} \right)_{m \rightarrow 0} = \frac{RM_1 T_f^{*2}}{\Delta_{\text{fus}}H_{1,m}} \quad (2.8.10)$$

From Eq. (2.8.10), it follows that the limiting value of $(\partial T_f / \partial m)$ depends only on the characteristics of the solvent. The derivative $(\partial T_f / \partial m)_{m \rightarrow 0}$ is known as the freezing point depression constant or the cryoscopic constant of the solvent and is represented by the symbol K_f .

Equation (2.8.9) may be written as

$$-dT_f = K_f dm \quad (p \text{ constant, very dilute solution}) \quad (2.8.11)$$

For a finite value of dm , we have

$$-\Delta T_f = K_f m \quad (2.8.12)^\dagger$$

[†]Equation (2.8.12) may be derived directly from Eq. (2.8.8) by invoking the following approximations.

$$\ln x_1 = -\ln(1 + mM_1) = -mM_1$$

$$T_f T_f^* = T_f^{*2}$$

Unit of K_f

The unit of K_f may be worked out as follows.

$$\text{unit of } K_f = \frac{\text{unit of } \Delta T_f}{\text{unit of } m} = \frac{\text{K}}{\text{mol kg}^{-1}} = \text{K kg mol}^{-1}$$

Value of K_f for Water

The numerical value of K_f for a given solvent can be determined from its T_f^* and $\Delta_{\text{fus}}H_{1,m}$ values. For example, for water, we have

$$K_f = \frac{M_1 R T_f^{*2}}{\Delta_{\text{fus}} H_{1,m}} = \frac{(18 \times 10^{-3} \text{ kg mol}^{-1})(8.314 \text{ J K}^{-1} \text{ mol}^{-1})(273 \text{ K})^2}{(6009.5 \text{ J mol}^{-1})}$$

$$= 1.86 \text{ K kg mol}^{-1}$$

Values of K_f for Some Solvents

The values of K_f for other commonly used solvents are given in Table 2.8.1.

Table 2.8.1 Freezing Point Depression Constants

Solvent	Molar mass g mol ⁻¹	m. pt./°C	K_f K kg mol ⁻¹
Water	18.0	0	1.86
Acetic acid	60.0	16.6	3.57
Benzene	78.1	5.45	5.07
Cyclohexane	84.2	6.5	20.0
Dioxane	88.1	11.7	4.71
Naphthalene	128.3	80.1	6.98
Camphor	152.2	178.4	37.7

Problem 2.8.1

The expression $-\Delta T_f = K_f m$ for the freezing point depression can also be obtained from the shift in triple point of a solvent on forming a solution[†] of the substance and by applying the Clausius-Clapeyron equation to the solid-vapour and the solution-vapour equilibria. Derive the relation by drawing the necessary diagram.

Solution

The solution-vapour curve will lie below that of the solvent-vapour curve and thus it intersects the solid-vapour curve at a temperature (triple temperature) smaller than the corresponding intersection temperature for the solvent-vapour curve. This is shown in Fig. 2.8.1. There occurs a depression in the triple point of the substance when a nonvolatile solute is dissolved in it.

Applying the Clausius-Clapeyron equation to the solution-vapour equilibrium for the two values of p_2, T and p_1, T_f^* , we have

$$\ln \frac{p_1}{p_2} = \frac{\Delta_{\text{vap}} H_{1,m}}{R} \left(\frac{1}{T} - \frac{1}{T_f^*} \right) = \frac{\Delta_{\text{vap}} H_{1,m} (-\Delta T_f)}{R T T_f^*} \quad (2.8.13)$$

where $\Delta T_f = T - T_f^*$

[†]The effect of pressure on the equilibrium temperature of solid to liquid equilibrium is usually very small and thus the triple point may be taken as the freezing point. Take, for example, the triple point of water system, it lies at 0.0075 °C and 4.6 mmHg. The normal freezing point of water is 0 °C (at 1 atm).

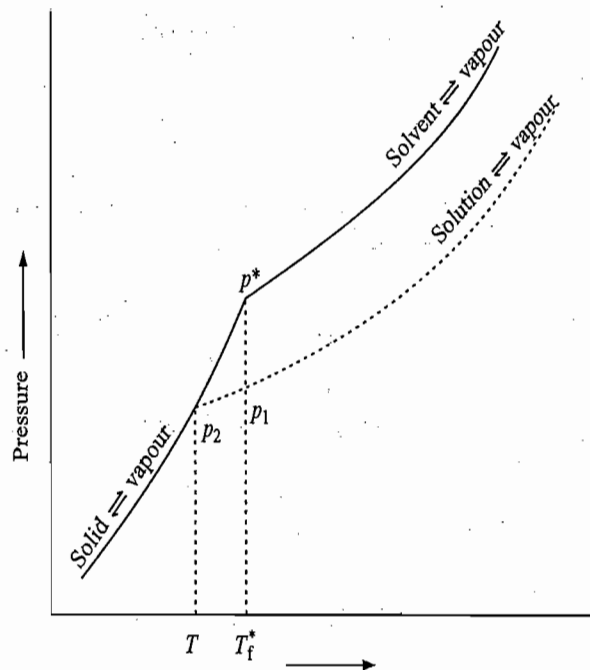


Fig. 2.8.1 Clausius-Clapeyron equation as applied to the depression of triple point

Applying now the Clausius-Clapeyron equation to the solid-vapour equilibrium for the two values of p_2 , T and p^* , T_f^* , we have

$$\ln \frac{p^*}{p_2} = \frac{\Delta_{\text{sub}} H_{1,m}}{R} \left(\frac{1}{T} - \frac{1}{T_f^*} \right) = \frac{\Delta_{\text{sub}} H_{1,m}}{R} \left(\frac{-\Delta T_f}{TT_f^*} \right) \quad (2.8.14)$$

Subtracting Eq. (2.8.13) from Eq. (2.8.14), we get

$$\ln \frac{p^*}{p_2} - \ln \frac{p_1}{p_2} = \frac{\Delta_{\text{sub}} H_{1,m}}{R} \left(\frac{-\Delta T_f}{TT_f^*} \right) - \frac{\Delta_{\text{vap}} H_{1,m}}{R} \left(\frac{-\Delta T_f}{TT_f^*} \right)$$

$$\text{or} \quad \ln \frac{p^*}{p_1} = \frac{-\Delta T_f}{TT_f^* R} (\Delta_{\text{sub}} H_{1,m} - \Delta_{\text{vap}} H_{1,m}) = \frac{-\Delta T_f}{TT_f^* R} (\Delta_{\text{fus}} H_{1,m}) \quad (2.8.15)$$

Equation (2.8.15) can be simplified under the following approximations.

(i) T will be very near T_f^* , so that the term TT_f^* may be replaced by T_f^{*2} , i.e.

$$TT_f^* \approx T_f^{*2} \quad (2.8.16)$$

(ii) The term $\ln p^*/p_1$ can be written as

$$\ln \frac{p^*}{p_1} = -\ln \frac{p_1}{p^*} = -\ln \left(\frac{p^* - p^* + p_1}{p^*} \right) = -\ln \left(1 - \frac{p^* - p_1}{p^*} \right)$$

Since the term $(p^* - p_1)/p^*$, the relative lowering of vapour pressure at temperature T_f^* , is very small in comparison to 1, the term $-\ln(1 - (p^* - p_1)/p^*)$ can be approximated as

$$-\ln \left(1 - \frac{p^* - p_1}{p^*} \right) = - \left(- \frac{p^* - p_1}{p^*} \right) = \frac{p^* - p_1}{p^*}$$

(iii) According to Raoult's law

$$\frac{p^* - p_1}{p^*} = x_2 = \frac{n_2}{n_1 + n_2}$$

For a dilute solution $n_2 \ll n_1$, and therefore n_2 can be neglected in comparison to n_1 . Thus, we have

$$\ln \frac{p^*}{p_1} \approx \frac{p^* - p_1}{p^*} \approx \frac{n_2}{n_1} = \frac{m_2/M_2}{m_1/M_1} \quad (2.8.17)$$

Substituting Eqs (2.8.16) and (2.8.17) in Eq. (2.8.15), we get

$$\frac{m_2/M_2}{m_1/M_1} = \frac{\Delta_{\text{fus}}H_{1,m}}{R} \frac{(-\Delta T_f)}{T_f^{*2}}$$

Rearranging this, we get

$$(-\Delta T_f) = \frac{M_1 R T_f^{*2}}{\Delta_{\text{fus}}H_{1,m}} \left(\frac{m_2/M_2}{m_1} \right) = K_f m \quad (2.8.18)$$

Example 2.8.1

A sample of camphor used in the Rast method for the determination molar mass had melting point of 451.55 K. The melting point of a solution containing 0.522 g camphor and 0.038 6 g of an unknown compound was 433.85 K. If the unknown compound was a hydrocarbon containing 7.7% H, find its molecular formula. The molar mass of camphor is 152.2 g mol⁻¹ and its $\Delta_{\text{fus}}H_{1,m} = 6.844$ kJ mol⁻¹.

Solution

The given data are

$$m_1 = 0.522 \text{ g}, \quad m_2 = 0.038 \text{ 6 g}, \quad T_f = 433.85 \text{ K}, \quad T_f^* = 451.55 \text{ K}, \\ M_1 = 152.2 \text{ g mol}^{-1}, \quad \Delta_{\text{fus}}H_{1,m} = 6.844 \text{ kJ mol}^{-1}$$

Calculation of K_f

$$K_f = \frac{M_1 R T_f^{*2}}{\Delta_{\text{fus}}H_{1,m}} = \frac{(152.2 \times 10^{-3} \text{ kg mol}^{-1})(8.314 \text{ J K}^{-1} \text{ mol}^{-1})(451.55 \text{ K})^2}{(6.844 \times 10^3 \text{ J mol}^{-1})} \\ = 37.7 \text{ K kg mol}^{-1}$$

Calculation of molality of solution

$$m = \frac{-\Delta T_f}{K_f} = \frac{-(T_f - T_f^*)}{K_f} = \frac{-(433.85 \text{ K} - 451.55 \text{ K})}{(37.7 \text{ K kg mol}^{-1})} = 0.47 \text{ mol kg}^{-1}$$

Calculation of molar mass of solute Since $m = (m_2/M_2)/m_1$, we get

$$M_2 = \frac{m_2}{mm_1} = \frac{(0.038 \text{ 6 g})}{(0.47 \text{ mol kg}^{-1})(0.522 \text{ g})} = 0.157 \text{ kg mol}^{-1}$$

Ext

Sol

Determination of molecular formula

The given mass ratio is $m_C : m_H :: 92.3 : 7.7$

The atomic ratio is $N_C : N_H :: \frac{92.3}{12} : \frac{7.7}{1} \Rightarrow 7.7 : 7.7 \Rightarrow 1 : 1$

Hence, Empirical formula : CH

Empirical molar mass = 13 g mol⁻¹

$$\text{Number of units of CH} = \frac{\text{molar mass}}{\text{empirical molar mass}} = \frac{157 \text{ g}}{13 \text{ g}} \approx 12$$

Hence, Molecular formula = C₁₂H₁₂

Example 2.8.2

A solution comprising 0.1 mol of naphthalene and 0.9 mol of benzene is cooled until some solid benzene freezes out. The solution is then decanted off from the solid, and warmed to 353 K, where its vapour pressure is found to be 670 Torr. The freezing and normal boiling points of benzene are 278.5 K and 353 K, respectively, and its enthalpy of fusion is 10.67 kJ mol⁻¹. Calculate the temperature to which the solution was cooled originally and the amount of benzene that must have frozen out. Assume conditions of ideal solution.

Solution

The given data are:

$$n_1 = 0.9 \text{ mol}, \quad n_2 = 0.1 \text{ mol}, \quad T_f^* = 278.5 \text{ K}, \quad T_b^* = 353 \text{ K},$$

$$p^* = 760 \text{ Torr}, \quad p = 670 \text{ Torr}, \quad \Delta_{\text{fus}}H_{1,m} = 10.67 \text{ kJ mol}^{-1}$$

From the relative lowering of vapour pressure, we obtain the amount fraction of the solute (i.e. naphthalene).

$$x_2 = \frac{p^* - p}{p^*} = \frac{760 \text{ Torr} - 670 \text{ Torr}}{760 \text{ Torr}} = 0.1185$$

Since $x_2 = n_2/(n_1 + n_2)$, we get

$$n_1 + n_2 = \frac{n_2}{x_2} = \frac{0.1 \text{ mol}}{0.1185} = 0.844 \text{ mol}$$

Since $n_2 = 0.1 \text{ mol}$, we get

$$n_1 = 0.844 \text{ mol} - n_2 = 0.844 \text{ mol} - 0.1 \text{ mol} = 0.744 \text{ mol}$$

Hence, the amount of benzene frozen out = 0.9 mol - 0.744 mol = 0.156 mol

The freezing point depression constant of benzene is

$$K_f = \frac{M_1 R T_f^{*2}}{\Delta_{\text{fus}}H_{1,m}} = \frac{(0.078 \text{ kg mol}^{-1})(8.314 \text{ J K}^{-1} \text{ mol}^{-1})(278.5 \text{ K})^2}{(10670 \text{ J mol}^{-1})}$$

$$= 4.714 \text{ K kg mol}^{-1}$$

Molality of the solution is

$$m = \frac{n_2}{m_1} = \frac{n_2}{n_1 M_1} = \frac{(0.1 \text{ mol})}{(0.744 \text{ mol})(0.078 \text{ kg mol}^{-1})} = 1.723 \text{ mol kg}^{-1}$$

Finally $-\Delta T_f = K_f m = (4.714 \text{ K kg mol}^{-1})(1.723 \text{ mol kg}^{-1}) = 8.12 \text{ K}$

$$T_f = T_f^* + \Delta T_f = 278.5 \text{ K} - 8.12 \text{ K} = 270.38 \text{ K}$$

2.9 OSMOSIS AND OSMOTIC PRESSURE

Phenomenon of Osmosis

We have seen in Section 2.6 that a solution when separated from the pure solvent with the help of a semipermeable membrane, the flow of solvent molecules from the pure solvent side to the solution side takes place. This flow of solvent molecules from a region of higher concentration (i.e. pure solvent) to the region of lower concentration (i.e. solution) of solvent molecules is known as the phenomenon of osmosis.

Osmotic Pressure

As a result of osmosis, level of the solution in the tube rises, whereas that of the pure solvent falls (Fig. 2.9.1). After some time an equilibrium is reached where the level of the solution in the tube does not rise further. At this stage, the excessive hydrostatic pressure created on the solution side exactly balances the tendency of the solvent to pass through the membrane as shown in Fig. 2.9.1. This excessive hydrostatic pressure is known as the osmotic pressure of the solution and is represented by the symbol Π .

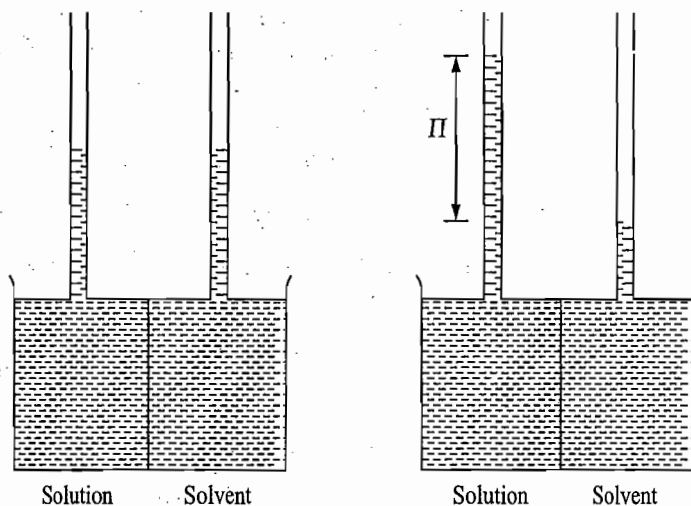


Fig. 2.9.1 The phenomenon of osmosis and generation of osmotic pressure

Alternative way of Checking Osmosis

The phenomenon of osmosis can also be checked by increasing the external pressure on the solution by an amount equivalent to the hydrostatic pressure Π as shown in Fig. 2.9.2.[†]

Alternatively, this can also be checked by reducing the external pressure on the solvent side by an amount equivalent to this hydrostatic pressure.

Thermodynamic Derivation of Osmotic Pressure

The osmotic pressure of a solution depends on its concentration—larger the concentration larger the osmotic pressure. The expression relating the osmotic pressure with concentration of the solution can be derived thermodynamically.

Initially, there exists a difference of chemical potential of the solvent on either sides of the membrane and thus the solvent flows from the pure solvent side to the solution side. This flow of solvent to the solution side generates an

[†]If the applied excessive pressure becomes larger than the osmotic pressure, the reverse of osmosis is observed, i.e. solvent molecules will flow from the solution to the solvent side. This is due to larger increase of chemical potential than the required value.

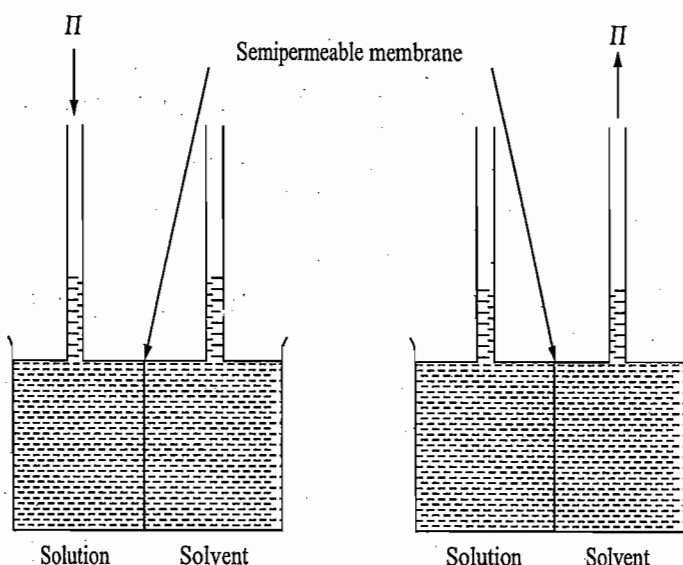
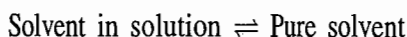


Fig. 2.9.2 An alternative way of stopping the phenomenon of osmosis

excessive hydrostatic pressure on the solution side, which in turn increases the chemical potential of the solvent in solution. Consequently, the difference of chemical potential of solvent on either sides is decreased. After some time, enough solvent has flown into the solution side so that the difference of chemical potential is altogether eliminated and thus osmosis stops. At this stage, the system is in equilibrium and no more solvent flows from the solvent to the solution. Basically, in the present case we have equilibrium of the type



The thermodynamic condition of equilibrium is

$$\mu_{1(\text{sol})}(T, p + \Pi) = \mu_{1(1)}^*(T, p) \quad (2.9.1)$$

where Π is the excessive hydrostatic pressure. At constant temperature, Π is a function of x_1 , the amount fraction of the solvent in solution. If the solution is assumed to be ideal, we have

$$\mu_{1(\text{sol})}(T, p + \Pi) = \mu_{1(1)}^*(T, p + \Pi) + RT \ln x_1 \quad (2.9.2)$$

Substituting Eq. (2.9.2) in Eq. (2.9.1), we get

$$\mu_{1(1)}^*(T, p + \Pi) + RT \ln x_1 = \mu_{1(1)}^*(T, p)$$

$$\text{or} \quad \mu_{1(1)}^*(T, p + \Pi) - \mu_{1(1)}^*(T, p) = -RT \ln x_1 \quad (2.9.3)$$

The left side of Eq. (2.9.3) represents the difference in chemical potentials of the pure solvent under the two different pressures $p + \Pi$ and p . This difference may be evaluated by employing the relation

$$\left(\frac{\partial \mu_{1(1)}^*}{\partial p} \right)_T = V_{1,m}^* \quad (2.9.4)$$

where $V_{1,m}^*$ is the molar volume of the pure solvent. Rewriting Eq. (2.9.4), we have

$$d\mu_{1(l)}^* = V_{1,m}^* dp \quad (T \text{ constant})$$

Integrating the above relation within the limits p and $p + \Pi$, we get

$$\int_p^{p+\Pi} d\mu_{1(l)}^* = \int_p^{p+\Pi} V_{1,m}^* dp \quad (T \text{ constant})$$

or
$$\mu_{1(l)}^*(T, p + \Pi) - \mu_{1(l)}^*(T, p) = \int_p^{p+\Pi} V_{1,m}^* dp$$

If the solvent is incompressible, $V_{1,m}^*$ is independent of pressure and can be removed from the integral. Thus, we have

$$\mu_{1(l)}^*(T, p + \Pi) - \mu_{1(l)}^*(T, p) = V_{1,m}^* \Pi \quad (2.9.5)$$

Substituting Eq. (2.9.5) in Eq. (2.9.3), we get

$$V_{1,m}^* \Pi = -RT \ln x_1 \quad (2.9.6)$$

Expression of Osmotic Pressure for a Dilute Solution (van't Hoff Equation)

For a dilute solution, Eq. (2.9.6) can be simplified under the following approximations.

(i) Since the solution is dilute, $x_2 \ll 1$, the term $\ln x_1$ can be approximated as

$$\ln x_1 = \ln(1 - x_2) \approx -x_2 \quad (2.9.7)$$

(ii) The amount fraction of the solute is given as

$$x_2 = \frac{n_2}{n_1 + n_2} \approx \frac{n_2}{n_1} \quad (\text{since } n_2 \ll n_1) \quad (2.9.8)$$

(iii) For a solution, the total volume V can be written in terms of the partial molar volumes following the additivity rule

$$V = n_1 V_1 + n_2 V_2$$

where V_1 is the partial molar volume of the solvent and V_2 is the corresponding volume of the solute. For a dilute solution, we assume that:

(a) Partial molar volume of the solvent in the solution is the same as that of the pure solvent, i.e. $V_1 = V_{1,m}^*$

(b) The factor $n_2 V_2 \ll n_1 V_1$ since $n_2 \ll n_1$ and can, therefore, be neglected. Thus we have

$$V \approx n_1 V_1 = n_1 V_{1,m}^* \quad (2.9.9)$$

Substituting Eqs (2.9.7)-(2.9.9) in Eq. (2.9.6), we have

$$\frac{V}{n_1} \Pi = -RT(-x_2) = RTx_2$$

or
$$\frac{V}{n_1} \Pi = RT \frac{n_2}{n_1}$$

Para
Idea

Pro

So

constant)

$$\text{or } \Pi = n_2 RT$$

constant)

$$\text{or } \Pi = \left(\frac{n_2}{V} \right) RT = cRT \quad (2.9.10)$$

where c is the molar concentration of solute in the solution. Equation (2.9.10) is known as the **van't Hoff equation** for osmotic pressure of the solution.

Parallelism with Ideal Gas Equation

The form of van't Hoff equation is exactly identical to that of the ideal gas equation except that Π replaces the gas pressure p . This striking resemblance suggests that the solute molecules are dispersed in the solvent the way the gas molecules are dispersed in the empty space. Thus the solute is analogous to the gas molecules and the solvent is analogous to the empty space between the gas molecules.

d can be

(2.9.5)

(2.9.6)

ollowing

imated as

(2.9.7)

(2.9.8)

Problem 2.9.1

(a) Show that the difference in chemical potential of the solvent on either side of semipermeable membrane shown in Fig. 2.9.1 is given by

$$\mu_1^*(T, p^*) - \mu_{1(\text{sol})}(T, p) = -RT \ln x_1$$

(b) The osmotic pressure of a solution may be defined as the excessive pressure which needs to be applied on the solution side so as to prevent osmosis. Using this fact, derive the relation

$$V_1 \Pi = -RT \ln x_1$$

where V_1 is the partial molar volume of solvent in solution.

(c) The osmotic pressure of a solution may be defined as the pressure which needs to be lowered on the solvent side so as to prevent osmosis. Using this fact, show that

$$V_{1,m}^* \Pi = -RT \ln x_1$$

Solution

(a) Let p^* and p be the vapour pressures of pure solvent and solution, respectively. In Fig. 2.9.1, we have the following two equilibria.

Solvent in solution \rightleftharpoons Solvent vapour at pressure p

Pure solvent \rightleftharpoons Solvent vapour at pressure p^*

The thermodynamic relations for these two equilibria are:

$$\mu_{1(\text{sol})}(T, p) = \mu_{1(\text{v})}^*(T, p) = \mu_{1(\text{v})}^\circ + RT \ln (p/p^\circ)$$

$$\mu_1^*(T, p^*) = \mu_{1(\text{v})}^*(T, p^*) = \mu_{1(\text{v})}^\circ + RT \ln (p^*/p^\circ)$$

$$\text{Hence } \mu_1^*(T, p^*) - \mu_{1(\text{sol})}(T, p) = RT \ln (p^*/p^\circ) - RT \ln (p/p^\circ) = RT \ln \frac{p^*}{p}$$

For an ideal solution $p = p^* x_1$. With this, the above expression becomes

$$\mu_1^*(T, p^*) - \mu_{1(\text{sol})}(T, p) = RT \ln (1/x_1) = -RT \ln x_1$$

(b) By applying the pressure Π on the solution side, the osmosis is prevented. At this stage, we will have

$$\mu_1^*(T, p^*) = \mu_{1(\text{sol})}(T, p + \Pi)$$

tial molar

sponding

ne as that

eglected.

(2.9.9)

Substituting this expression in the expression derived in part (a), we get

$$\mu_{1(\text{sol})}(T, p + \Pi) - \mu_{1(\text{sol})}(T, p) = -RT \ln x_1 \quad (1)$$

Now
$$\left(\frac{\partial \mu_{1(\text{sol})}}{\partial p} \right)_T = V_1$$

where V_1 is the partial molar volume of solvent in the solution. Rewriting and integrating within the limits p and $p + \Pi$, we get

$$\int_p^{p+\Pi} d\mu_{1(\text{sol})} = \int_p^{p+\Pi} V_1 dp$$

Assuming V_1 to be independent of pressure, we get

$$\begin{aligned} \mu_{1(\text{sol})}(T, p + \Pi) - \mu_{1(\text{sol})}(T, p) &= V_1(p + \Pi - p) \\ &= V_1 \Pi \end{aligned}$$

Hence Eq. (1) becomes

$$V_1 \Pi = -RT \ln x_1$$

(c) By lowering the pressure on the solvent side by an amount Π , the phenomenon of osmosis is prevented. At this stage, we will have

$$\mu_1^*(T, p^* - \Pi) = \mu_{1(\text{sol})}(T, p)$$

Substituting this in the expression derived in part (a), we get

$$\mu_1^*(T, p^*) - \mu_1^*(T, p^* - \Pi) = -RT \ln x_1 \quad (2)$$

Now
$$\left(\frac{\partial \mu_1^*}{\partial p} \right)_T = V_{1,m}^*$$

or
$$d\mu_1^* = V_{1,m}^* dp; \quad (T \text{ constant})$$

Thus
$$\int_{p^* - \Pi}^{p^*} d\mu_1^* = \int_{p^* - \Pi}^{p^*} V_{1,m}^* dp; \quad (T \text{ constant})$$

Assuming $V_{1,m}^*$ to be independent of pressure, we have

$$\mu_1^*(T, p^*) - \mu_1^*(T, p^* - \Pi) = V_{1,m}^* \{p^* - (p^* - \Pi)\} = V_{1,m}^* \Pi$$

Hence Eq. (2) becomes

$$V_{1,m}^* \Pi = -RT \ln x_1$$

Determination of Molar Mass

The principal application of osmotic pressure measurement is in the determination of the molar mass of a substance which is either slightly soluble or has a very high molar mass such as proteins, polymers of various types and colloids. This is due to the fact that even a very small concentration of the solution produces fairly large magnitude of the osmotic pressure. In the laboratory, the concentrations

usually employed are of the order of $0.001 \text{ mol dm}^{-3}$. At concentration of $0.001 \text{ mol dm}^{-3}$, the magnitude of osmotic pressure at 298 K is

$$\begin{aligned}\Pi &= cRT = (0.001 \text{ mol dm}^{-3})(8.314 \text{ J K}^{-1} \text{ mol}^{-1}) 298 \text{ K} \\ &= 2.4776 \text{ J dm}^{-3} = 2477.6 \text{ J m}^{-3} = 2477.6 \text{ Pa} \\ &= 0.0245 \text{ atm} = 18.58 \text{ Torr}\end{aligned}$$

At this concentration, the values of other colligative properties such as the boiling point elevation and the freezing point depression are too small to be determined experimentally.

The van't Hoff equation is expected to be valid only at infinite dilution or to a very dilute solution where the solute-solute interaction is negligible. This, however, might not be applicable to a substance of high molar mass at concentrations which are usually employed for experimental measurements. The method of extrapolation can be employed for such type of substances. The van't Hoff equation can be written as

$$\Pi = \frac{n_2}{V} RT = \frac{(m_2/M_2)}{V} RT = \left(\frac{m_2}{V}\right) \left(\frac{RT}{M_2}\right) = \rho \left(\frac{RT}{M_2}\right)$$

i.e.
$$\frac{\Pi}{\rho} = \frac{RT}{M_2}$$

where ρ is the density of the solution. The limiting value of Π/ρ at infinite dilution can be determined by plotting Π/ρ versus ρ and determining the intercept when $\rho \rightarrow 0$. This limiting value of $(\Pi/\rho)_{\rho \rightarrow 0}$ will be equal to RT/M_2 .

Thus
$$M_2 = \frac{RT}{(\Pi/\rho)_{\rho \rightarrow 0}}$$

Number and Mass Average Molar Masses

The molar mass determined from any of the colligative properties is the number average molar mass, designated as \bar{M}_n and is given by

$$\bar{M}_n = \frac{N_1 M_1 + N_2 M_2 + \dots}{N_1 + N_2 + \dots} = \frac{\sum_i N_i M_i}{\sum_i N_i}$$

where N_i is the number of molecules having molar mass M_i . The above average gives equal weightage to large and small molecules and simply counts the number of molecules. It is thus independent of the individual characteristics of the molecules. For example, all the polymer molecules in any sample do not contain the same number of units in every chain, and, therefore, there will be a range of molecular masses in the polymer sample. The molar mass determined with the help of colligative property will be the number average molar mass.

A second average molar mass is the mass average molar mass, \bar{M}_m , and is defined as

$$\bar{M}_m = \frac{N_1 M_1^2 + N_2 M_2^2 + \dots}{N_1 M_1 + N_2 M_2 + \dots} = \frac{\sum_i N_i M_i^2}{\sum_i N_i M_i}$$

This average gives more weightage to the heavier molecules as compared to the number average molar mass. This mass can be determined from the property which depends upon the individual characteristics of the molecules, such as the light-scattering measurements.

Example 2.9.1

The osmotic pressure values of various concentrations of polyisobutylene in two different solvents at 298 K are given below. Calculate the molar mass of polyisobutylene by the method of extrapolation to the infinite dilution.

$\rho/\text{g cm}^{-3}$	0.020 0	0.015 0	0.010 0	0.007 5	0.005 0	0.002 5
Π/atm in benzene	0.002 08	0.001 52	0.000 99		0.000 49	
in cyclohexane	0.011 7	0.006 6	0.003 0	0.001 73	0.000 9	0.000 35

Solution

The values of $(\Pi/\rho)/(\text{atm g}^{-1} \text{cm}^3)$ are as follows.

$\rho/\text{g cm}^{-3}$	0.020 0	0.015 0	0.010 0	0.007 5	0.005 0	0.002 5
Π/ρ in benzene	0.104	0.101	0.099		0.098	
in cyclohexane	0.585	0.440	0.300	0.230	0.18	0.140

The plots of Π/ρ versus ρ are shown in Fig. 2.9.3.

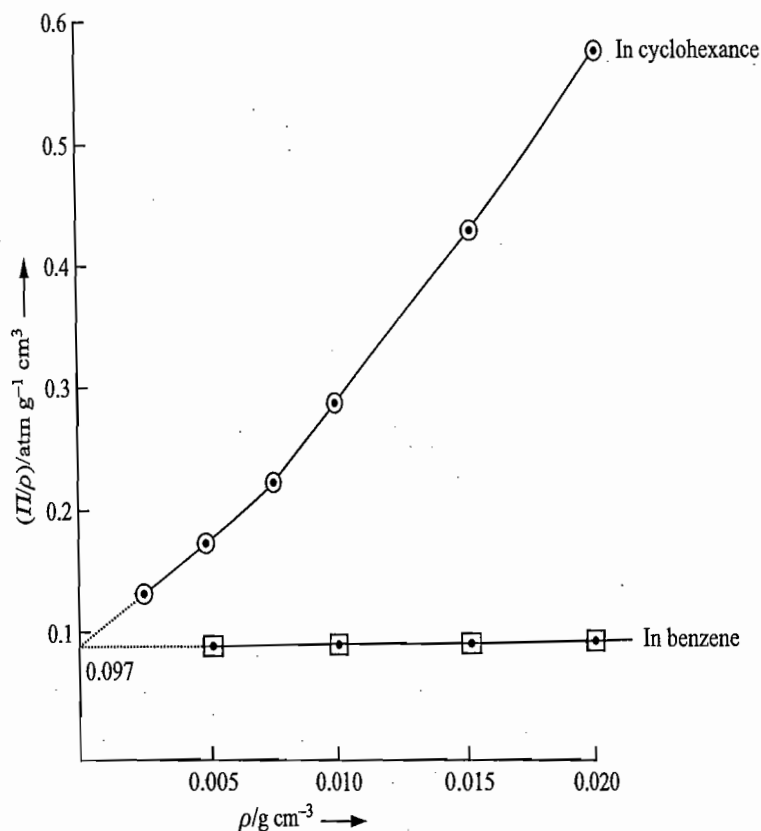


Fig. 2.9.3 Plot of Π/ρ versus ρ for polyisobutylene in benzene and cyclohexane

$$\begin{aligned} \text{Thus Molar mass of polyisobutylene} &= \frac{RT}{(\Pi/\rho)_{\rho \rightarrow 0}} = \frac{(82.0 \text{ cm}^3 \text{ atm K}^{-1} \text{ mol}^{-1})(298 \text{ K})}{(0.097 \text{ atm g}^{-1} \text{ cm}^3)} \\ &\approx 250\,000 \text{ g mol}^{-1} \end{aligned}$$

Example 2.9.2

One gram of serum albumin dissolved in 1 dm³ of water gives a solution height of 3.9 mm when separated from pure water by a semipermeable membrane at 25 °C. What is the molar mass of serum albumin? Density of the solution may be taken as 1.0 g cm⁻³.

Solution

Osmotic pressure of the solution is

$$\begin{aligned}\Pi &= h\rho g = (3.9 \times 10^{-3} \text{ m})(10^3 \text{ kg m}^{-3})(9.81 \text{ m s}^{-2}) \\ &= 38.26 \text{ N m}^{-2}\end{aligned}$$

$$\begin{aligned}\text{Now } M_2 &= \frac{m_2 RT}{\Pi V} = \frac{(10^{-3} \text{ kg})(8.314 \text{ J K}^{-1} \text{ mol}^{-1})(298 \text{ K})}{(38.26 \text{ N m}^{-2})(10^{-3} \text{ m}^3)} \\ &= 64.78 \text{ kg mol}^{-1}\end{aligned}$$

Example 2.9.3

The osmotic pressure is measured between water and a solution containing 1 g of glucose C₆H₁₂O₆ and 1 g of sucrose C₁₂H₂₂O₁₁ in 1 000 g of water, the temperature being maintained at 25 °C, and $\rho(\text{soln}) = 1 \text{ g cm}^{-3}$.

- Calculate osmotic pressure of the solution.
- If this pressure were measured and if the nature of solutes were not known, what molar mass would have been calculated?
- The measurement of the osmotic pressure (and other colligative properties) gives an average molar mass of the solute. What kind of average (i.e. number or mass) is this? Verify the answer.

Solution

$$\text{(a) Total amount of solutes} = \left(\frac{1 \text{ g}}{180 \text{ g mol}^{-1}} + \frac{1 \text{ g}}{342 \text{ g mol}^{-1}} \right) = 0.008 479 \text{ mol}$$

Since $\Pi V = n_2 RT$, we have

$$\begin{aligned}\Pi &= \frac{n_2 RT}{V} = \frac{(0.008 479 \text{ mol})(8.314 \text{ J K}^{-1} \text{ mol}^{-1})(298 \text{ K})}{(10^{-3} \text{ m}^3)} \\ &= 2.101 \times 10^4 \text{ J m}^{-3} \equiv 2.101 \times 10^4 \text{ N m}^{-2}\end{aligned}$$

(b) Solution will contain a total of 2 g of the solute. Let the molar mass of solute be M .

$$\text{Thus } \Pi V = nRT = \frac{m}{M} RT$$

$$\begin{aligned}\text{or } M &= \frac{mRT}{\Pi V} = \frac{(2 \times 10^{-3} \text{ kg})(8.314 \text{ J K}^{-1} \text{ mol}^{-1})(298 \text{ K})}{(2.101 \times 10^4 \text{ N m}^{-2})(10^{-3} \text{ m}^3)} \\ &= 0.236 \text{ kg mol}^{-1}\end{aligned}$$

(c) It is the number average molar mass as may be seen from the following calculations.

$$\begin{aligned}\bar{M}_n &= \frac{N_1 M_1 + N_2 M_2}{N_1 + N_2} = \frac{n_1 M_1 + n_2 M_2}{n_1 + n_2} = \frac{m_1 + m_2}{n_1 + n_2} \\ &= \frac{10^{-3} \text{ kg} + 10^{-3} \text{ kg}}{0.008 479 \text{ mol}} = 0.236 \text{ kg mol}^{-1}\end{aligned}$$

2.10 RELATIONS BETWEEN DIFFERENT COLLIGATIVE PROPERTIES

The different colligative properties can be correlated with each other through the following expressions.

$$\frac{p^* - p}{p^*} = x_2 \quad (\text{Eq. 2.4.1})$$

$$\ln x_1 = -\frac{\Delta_{\text{vap}}H_{1,m}}{R} \left(\frac{1}{T_b^*} - \frac{1}{T_b} \right) \quad (\text{Eq. 2.7.7})$$

$$\ln x_1 = \frac{\Delta_{\text{fus}}H_{1,m}}{R} \left(\frac{1}{T_f^*} - \frac{1}{T_f} \right) \quad (\text{Eq. 2.8.7})$$

and $VII = -RT \ln x_1 \quad (\text{Eq. 2.9.6})$

where $V = V_{1,m}^*$. For dilute solutions, Eqs (2.7.7), (2.8.7) and (2.9.6) may be approximated as shown in the following.

(i) Replacing x_1 by $1 - x_2$ in Eq. (2.7.7), we get

$$\ln(1 - x_2) = -\frac{\Delta_{\text{vap}}H_{1,m}}{R} \left(\frac{T_b - T_b^*}{T_b T_b^*} \right)$$

Since $x_2 \ll 1$ and $T_b \approx T_b^*$, we may write

$$x_2 \approx \frac{\Delta_{\text{vap}}H_{1,m}}{R} \left(\frac{\Delta T_b}{T_b^{*2}} \right) \quad (\text{2.10.1})$$

(ii) Replacing x_1 by $1 - x_2$ in Eq. (2.8.7), we get

$$\ln(1 - x_2) = \frac{\Delta_{\text{fus}}H_{1,m}}{R} \left(\frac{T_f - T_f^*}{T_f T_f^*} \right)$$

Since $x_2 \ll 1$ and $T_f \approx T_f^*$, we may write

$$x_2 = \frac{\Delta_{\text{fus}}H_{1,m}}{R} \left(\frac{-\Delta T_f}{T_f^{*2}} \right) \quad (\text{2.10.2})$$

(iii) Replacing x_1 by $1 - x_2$ in Eq. (2.9.6), we get

$$VII = -RT \ln(1 - x_2)$$

Since $x_2 \ll 1$, we may write

$$VII \approx RT x_2 \quad (\text{2.10.3})$$

With I
BoilinWith I
FreezWith
PressWith
Free:With
Pres

Relations Of Relative Lowering Of Vapour Pressure With Other Colligative Properties

With Elevation of Boiling Point

Comparing Eq. (2.4.1) with Eq. (2.10.1), we get

(Eq. 2.4.1)

$$\frac{p^* - p}{p^*} = x_2 = \frac{\Delta_{\text{vap}} H_{1,m}}{R} \left(\frac{\Delta T_b}{T_b^{*2}} \right) \quad (2.10.4)$$

With Depression of Freezing Point

Comparing Eq. (2.4.1) with Eq. (2.10.2), we get

(Eq. 2.7.7)

$$\frac{p^* - p}{p^*} = x_2 = \frac{\Delta_{\text{fus}} H_{1,m}}{R} \left(\frac{-\Delta T_f}{T_f^{*2}} \right) \quad (2.10.5)$$

With Osmotic Pressure

Comparing Eq. (2.4.1) with Eq. (2.10.3), we get

(Eq. 2.8.7)

$$\frac{p^* - p}{p^*} = x_2 = \frac{V\Pi}{RT} \quad (2.10.6)$$

(Eq. 2.9.6)

9.6) may be

Relations Of Elevation Of Boiling Point With Other Colligative Properties

With Depression of Freezing Point

Comparing Eq. (2.10.1) with Eq. (2.10.2), we get

$$\frac{\Delta_{\text{vap}} H_{1,m}}{R} \left(\frac{\Delta T_b}{T_b^{*2}} \right) = x_2 = \frac{\Delta_{\text{fus}} H_{1,m}}{R} \left(\frac{-\Delta T_f}{T_f^{*2}} \right) \quad (2.10.7)$$

$$\text{or} \quad \frac{\Delta T_b}{(-\Delta T_f)} = \frac{\Delta_{\text{fus}} H_{1,m}}{T_f^{*2}} \frac{T_b^{*2}}{\Delta_{\text{vap}} H_{1,m}} \quad (2.10.8)$$

(2.10.1)

With Osmotic Pressure

Comparing Eq. (2.10.1) with Eq. (2.10.3), we get

$$\frac{\Delta_{\text{vap}} H_{1,m}}{R} \left(\frac{\Delta T_b}{T_b^{*2}} \right) = x_2 = \frac{\Pi V}{RT}$$

$$\text{or} \quad \Pi = \left(\frac{T \Delta_{\text{vap}} H_{1,m}}{V T_b^{*2}} \right) \Delta T_b \quad (2.10.9)$$

(2.10.2)

$$\text{or} \quad \Delta T_b = \left(\frac{V T_b^{*2}}{T \Delta_{\text{vap}} H_{1,m}} \right) \Pi \quad (2.10.10)$$

Relations Of Depression Of Freezing Point With Osmotic Pressure

Comparing Eq. (2.10.2) with Eq. (2.10.3), we get

(2.10.3)

$$\frac{\Delta_{\text{fus}} H_{1,m}}{R} \left(\frac{-\Delta T_f}{T_f^{*2}} \right) = x_2 = \frac{\Pi V}{RT} \quad (2.10.11)$$

$$\text{or } \Pi = \left(\frac{T \Delta_{\text{fus}} H_{1,m}}{V T_f^{*2}} \right) (-\Delta T_f) \quad (2.10.12)$$

$$\text{or } -\Delta T_f = \left(\frac{V T_f^{*2}}{T \Delta_{\text{fus}} H_{1,m}} \right) \Pi \quad (2.10.13)$$

Example 2.10.1

The osmotic pressure of an aqueous solution of sucrose at 303 K is 2.47 atm; the molar volume of water at this temperature is 18.10 cm^3 . Calculate the elevation of boiling point of this solution. Given: $\Delta_{\text{vap}} H_{1,m} = 539 \text{ cal g}^{-1}$.

Solution

The given data are

$$\Pi = 2.47 \text{ atm} = 2.47 \times 101325 \text{ N m}^{-2} = 250273 \text{ N m}^{-2}$$

$$\Delta_{\text{vap}} H_{1,m} = (539 \times 18 \text{ cal mol}^{-1}) \left(\frac{8.314 \text{ J}}{1.987 \text{ cal}} \right) = 40595 \text{ J mol}^{-1}$$

$$T = 303 \text{ K} \quad T_b^* = 373 \text{ K} \quad V_{1,m}^* = 18.1 \times 10^{-6} \text{ m}^3 \text{ mol}^{-1}$$

Substituting the data in the expression

$$\Delta T_b = \frac{\Pi V_{1,m}^* T_b^{*2}}{T \Delta_{\text{vap}} H_{1,m}}$$

$$\begin{aligned} \text{we get } \Delta T_b &= \frac{(250273 \text{ N m}^{-2})(18.1 \times 10^{-6} \text{ m}^3 \text{ mol}^{-1})(373 \text{ K})^2}{(303 \text{ K})(40595 \text{ J mol}^{-1})} \\ &= 0.051 \text{ K} \end{aligned}$$

Example 2.10.2

The addition of 3 g of a substance to 100 g of CCl_4 raises the boiling point of CCl_4 by 0.60 K, $K_b = 5.03 \text{ K mol}^{-1} \text{ kg}$. Calculate the freezing point depression ($K_f = 31.8 \text{ K kg mol}^{-1}$); the relative vapour pressure lowering; the osmotic pressure of the solution at 298 K, and the molar mass of the substance. The density of CCl_4 is 1.59 g cm^{-3} .

Solution

The given data are

$$\begin{aligned} m_1 &= 100 \text{ g}, \quad m_2 = 3 \text{ g}, \quad \Delta T_b = 0.60 \text{ K}, \quad \rho_1(\text{CCl}_4) = 1.59 \text{ g cm}^{-3}, \\ K_b &= 5.03 \text{ K kg mol}^{-1}, \quad K_f = 31.8 \text{ K kg mol}^{-1}, \quad M_1(\text{CCl}_4) = 154 \text{ g mol}^{-1} \end{aligned}$$

Since $\Delta T_b = K_b m$, we get

$$m = \frac{\Delta T_b}{K_b} = \frac{0.60 \text{ K}}{(5.03 \text{ K kg mol}^{-1})} = 0.12 \text{ mol kg}^{-1}$$

Since $m = n_2/m_1 = (m_2/M_2)/m_1$, we get

$$M_2 = \frac{m_2}{m m_1} = \frac{(3 \text{ g})}{(0.12 \text{ mol kg}^{-1})(100 \text{ g})} = 0.25 \text{ kg mol}^{-1}$$

$$\text{Now } -\Delta T_f = K_f m = (31.8 \text{ K kg mol}^{-1})(0.12 \text{ mol kg}^{-1}) = 3.82 \text{ K}$$

(2.10.12)

$$\begin{aligned} \frac{\Delta p}{p^*} = x_2 &= \frac{n_2}{n_1 + n_2} = \frac{(m_2/M_2)}{(m_1/M_1) + (m_2/M_2)} \\ &= \frac{(0.003 \text{ kg}/0.25 \text{ kg mol}^{-1})}{(0.1 \text{ kg}/0.154 \text{ kg mol}^{-1}) + (0.003 \text{ kg}/0.25 \text{ kg mol}^{-1})} = 0.018 \end{aligned}$$

(2.10.13)

$$V_{1,m}^* = \frac{m_1}{\rho_1} = \frac{0.1 \text{ kg}}{1.59 \text{ kg dm}^{-3}} = 0.0629 \text{ dm}^3$$

$$\begin{aligned} \Pi &= \frac{n_2 RT}{V_{1,m}^*} = \frac{(3 \text{ g}/250 \text{ g mol}^{-1})(8.314 \text{ J K}^{-1} \text{ mol}^{-1})(298 \text{ K})}{(0.0629 \text{ dm}^3)} \\ &= 472.67 \text{ kPa} \equiv 4.66 \text{ atm} \end{aligned}$$

2.11 COLLIGATIVE PROPERTIES OF STRONG AND WEAK ELECTROLYTES

Colligative Properties of a Strong Electrolyte

The colligative properties of an electrolytic solution of a given concentration are found to be larger than those of a nonelectrolytic solution of the same concentration. This is due to the fact that an electrolyte in solution dissociates to give positive and negative charged ions in such a manner that the sum of the charges on positive ions is equal to the sum of the charges on negative ions (condition of electroneutrality). The net result is that the total number of species irrespective of their nature is increased. Since colligative properties depend only on the number of species and not on their nature, it is obvious that the colligative effects produced by an electrolytic solution will be larger than those produced by a nonelectrolytic solution of the same concentration. The colligative properties of a dilute solution of a strong electrolyte which undergoes complete dissociation are found to be approximately an integral multiple of the corresponding values of a nonelectrolytic solution of the same concentration. The value of the integral number is equal to the total number of ions that are produced on dissociation of a molecule of the strong electrolyte.

Colligative Properties of a Weak Electrolyte

The colligative properties produced by a solution of a weak electrolyte of known concentration are found to lie between the corresponding properties produced by the same concentration of a nonelectrolytic solution and of a strong electrolytic solution; the stoichiometry of the strong electrolyte is the same as that of the weak electrolyte. This indicates that the weak electrolyte is partially dissociated in the solution.

Van't Hoff Factor

The colligative properties of an electrolytic solution can be expressed in terms of those of a nonelectrolytic solution by use of the van't Hoff factor i . It is defined as the ratio of colligative effect produced by a given concentration of an electrolytic solution and of a nonelectrolytic solution of the same concentration, i.e.

$$i = \frac{\text{Colligative effect produced by a given concentration of an electrolytic solution}}{\text{Colligative effect produced by the same concentration of a nonelectrolytic solution}} \quad (2.11.1)$$

CCl_4 by
0.8 K kg
at 298 K,

cm^{-3} ,
 mol^{-1}

the molar
boiling point

Thus we may write

$$i = \frac{-\Delta T_f}{(-\Delta T_f)_0} = \frac{\Delta T_b}{(\Delta T_b)_0} = \frac{\Pi}{(\Pi)_0} = \frac{\Delta p}{(\Delta p)_0} \quad (2.11.2)$$

where the quantities without subscript refer to electrolytic solution and those with subscript refer to nonelectrolytic solution of the same concentration. Writing Eq. (2.11.2) more explicitly, we have

$$\begin{aligned} -\Delta T_f &= i(-\Delta T_f)_0 = i K_f m \\ \Delta T_b &= i(\Delta T_b)_0 = i K_b m \\ \Pi &= i(\Pi)_0 = i c_2 RT \end{aligned} \quad (2.11.3)$$

The value of i must be calculated from the experimental data for each electrolyte at various concentrations.

Variation of van't Hoff Factor with Dilution

For a Strong Electrolyte

It is found that for a solution of strong electrolyte, the value of i increases on dilution and approaches the limit of an integral number equal to the ions produced by a molecule of the electrolyte. A few examples are given below.

Substance	Limiting value of i
(1) HCl, HNO ₃ , NH ₄ Cl, CuSO ₄ NaCl	2
(2) H ₂ SO ₄ , CoCl ₂ , K ₂ SO ₄	3
(3) K ₃ [Fe(CN) ₆]	4
(4) K ₄ [Fe(CN) ₆]	5

For a Weak Electrolyte

The variation of i for a solution of a weak electrolyte is more wide in nature, i.e. it increases more rapidly with dilution and attains the limiting value only at infinite dilution.

Explanation for Weak Electrolytes

The variation of van't Hoff factor i for a weak electrolyte can be explained on the basis of Arrhenius theory of electrolytic dissociation. According to this theory, a weak electrolyte is in equilibrium with its ions. Thus, for A_xB_y, we have



Let α be the degree of dissociation, then the molalities of various species at equilibrium will be

$$m(A_x B_y) = m(1 - \alpha); \quad m(A^{y+}) = m(x\alpha); \quad m(B^{x-}) = m(y\alpha)$$

where m is the original molality of the electrolyte.

The total molality m_t of substances of all types present in the solution is

$$\begin{aligned} m_t &= m(1 - \alpha) + m(x\alpha) + m(y\alpha) = m[1 + \alpha(x + y - 1)] \\ &= m[1 + \alpha(v - 1)] \end{aligned} \quad (2.11.5)$$

where v is the total number of ions that are produced when an electrolytic molecule completely dissociates in the solution and is equal to $(x + y)$.

Explai
Stron!

The value of α increases on dilution (Ostwald dilution law) and thus the molality of the solution increases on dilution. Consequently, the colligative effects also increase on dilution. Taking, for example, the depression of freezing point, we have

$$-\Delta T_f = K_f m_t = K_f m [1 + \alpha(v - 1)]$$

Solving for α , we obtain

$$\alpha = \frac{(-\Delta T_f / K_f m) - 1}{v - 1} = \frac{(-\Delta T_f) - K_f m}{(v - 1) K_f m} \quad (2.11.6)$$

The degree of dissociation α can also be written in terms of van't Hoff factor i . Since for an electrolytic solution

$$-\Delta T_f = i K_f m = K_f m_t$$

$$\text{Hence } i m = m_t = m [1 + \alpha(v - 1)]$$

$$\text{or } i = 1 + \alpha(v - 1)$$

$$\text{Thus } \alpha = \frac{i - 1}{v - 1} \quad (2.11.7)$$

In fact, Eq. (2.11.7) is applicable to any of the colligative properties and can equally be derived from other colligative properties. This equation provides a method to calculate the degree of dissociation from the van't Hoff factor i for a given weak electrolyte.

Explanation for Strong Electrolytes

The variation of colligative effects of a solution of a strong electrolyte on dilution is not due to the increase in number of species on dilution since it is known that strong electrolyte is already present in the completely ionized form. The variation, however, can be explained on the basis of Debye-Hückel theory of interionic-attraction according to which each ion in the solution is surrounded on an average with more of the oppositely charged ions than like charges. In other words, there exists an ionic atmosphere around each and every ion whose net charge is opposite to that of the central ion. The properties of the electrolyte are determined by the interaction of the central ion with its atmosphere. For a given solvent and at a fixed temperature, the interaction between the ions depend only on the charges of the ions and their concentrations and not at all on their nature.

The interaction of the ions can be represented by a quantity, called the *ionic strength* of the solution. It is defined as

$$\mu = \frac{1}{2} \sum_i c_i z_i^2 \quad (2.11.8)$$

where c_i is the concentration of the i th ions in mol per dm^3 and z_i is its charge number. The summation is to be carried over all types of ions present in the solution.

Debye-Hückel showed that the variation of van't Hoff factor on dilution is due to the variation in ionic strength of the solution on dilution. The expression relating these two is

$$i = \nu(1 - 0.375 z_+ |z_-| \sqrt{\mu/\mu^\circ}) \quad (2.11.9)$$

where ν is the number of ions yielded by a given molecule of electrolyte.

The agreement between the calculated values of i and the experimental values is good for very dilute solutions up to molarity equal to 0.01 mol dm^{-3} . The deviations increase rapidly when molarity is greater than 0.01 mol dm^{-3} and are larger for electrolytes with higher values of $z_+ |z_-|$.

Example 2.11.1

A solution containing 0.122 kg of benzoic acid in 1 kg of benzene (b. pt. 353 K) boils at 354.5 K. Determine the apparent molar mass of benzoic acid (which dimerizes) in the solution and the degree of dimerization. Given: $\Delta_{\text{vap}}H_{\text{m}}(\text{benzene}) = 394.57 \text{ J g}^{-1}$.

Solution

The given data are

$$m_1 = 1 \text{ kg}, \quad m_2 = 0.122 \text{ kg}, \quad T_b^* = 353 \text{ K}, \quad T_b = 354.5 \text{ K},$$

$$M_1 = 78 \text{ g mol}^{-1}, \quad \Delta_{\text{vap}}H_{\text{1,m}} = 394.57 \times 78 \text{ J mol}^{-1}$$

The value of $K_b(\text{benzene})$ is

$$K_b = \frac{M_1 R T_b^{*2}}{\Delta_{\text{vap}}H_{\text{1,m}}} = \frac{(0.078 \text{ kg mol}^{-1})(8.314 \text{ J K}^{-1} \text{ mol}^{-1})(353 \text{ K})^2}{(394.57 \times 78 \text{ J mol}^{-1})}$$

$$= 2.626 \text{ K kg mol}^{-1}$$

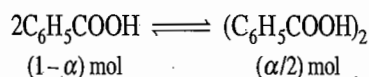
The molality of the solution is

$$m = \frac{\Delta T_b}{K_b} = \frac{T_b - T_b^*}{K_b} = \frac{(354.5 \text{ K} - 353 \text{ K})}{(2.626 \text{ K kg mol}^{-1})} = 0.57 \text{ mol kg}^{-1}$$

Since $m = n_2/m_1 = (m_2/M_2)/m_1$, we get

$$M_2 = \frac{m_2}{mm_1} = \frac{0.122 \text{ kg}}{(0.57 \text{ mol kg}^{-1})(1 \text{ kg})} = 0.214 \text{ kg mol}^{-1}$$

Let α be the degree of dimerization of benzoic acid. Since the solution contains 1 mol of benzoic acid, we will have



Total amount of solutes = $\{(1 - \alpha) + \alpha/2\}$ mol = $(1 - \alpha/2)$ mol

The number average molar mass of solutes in solution is given by

$$\bar{M}_n = \frac{N_1 M_1 + N_2 M_2}{N_1 + N_2} = \frac{n_1 M_1 + n_2 M_2}{n_1 + n_2} = \frac{m}{n_1 + n_2} = \frac{0.122 \text{ kg}}{(1 - \alpha/2) \text{ mol}}$$

Equating this to $0.214 \text{ kg mol}^{-1}$, we get

$$\frac{0.122}{1 - \alpha/2} = 0.214 \quad \text{or} \quad \alpha = 2(1 - 0.122/0.214) = 0.86$$

Example 2.11.2

A solution containing 0.011 kg of barium nitrate in 0.1 kg of water boils at 100.46°C . Calculate the degree of ionization of the salt. $K_b(\text{water}) = 0.52 \text{ K kg mol}^{-1}$.

Solution

The given data are

$$m_1 = 0.1 \text{ kg}, \quad m_2 = 0.011 \text{ kg}, \quad T_b = 100.46^\circ\text{C}, \quad T_b^* = 100^\circ\text{C},$$

$$M_2 = M_{\text{Ba}(\text{NO}_3)_2} = 261.3 \text{ g mol}^{-1}$$

Example

Solution

(2.11.9)

electrolyte.
experimental
0.1 mol dm⁻³.
mol dm⁻³ and

t. 353 K) boils
merizes) in the
7 J g⁻¹.

The molality of the solution is

$$m = \frac{n_2}{m_1} = \frac{m_2/M_2}{m_1} = \frac{(0.011 \text{ kg}/0.2613 \text{ kg mol}^{-1})}{(0.1 \text{ kg})} = 0.421 \text{ mol kg}^{-1}$$

The value of ΔT_b assuming the solute to be nonelectrolyte is

$$(\Delta T_b)_0 = K_b m = (0.52 \text{ K kg mol}^{-1})(0.421 \text{ mol kg}^{-1}) = 0.22 \text{ K}$$

The value of van't Hoff factor is

$$i = \frac{\Delta T_b}{(\Delta T_b)_0} = \frac{0.46 \text{ K}}{0.22 \text{ K}} = 2.09$$

Finally, the degree of dissociation of the electrolyte is

$$\alpha = \frac{i-1}{v-1} = \frac{2.09-1}{3-1} = \frac{1.09}{2} = 0.55$$

Example 2.11.3

When 3.24 g of mercuric nitrate $\text{Hg}(\text{NO}_3)_2$ is dissolved in 1 kg of water, the freezing point of the solution is found to be -0.0558°C . When 10.84 g of mercuric chloride HgCl_2 is dissolved in 1 kg of water, the freezing point of the solution is -0.0744°C . $K_f = 1.86 \text{ mol}^{-1} \text{ K kg}$. Will either of these dissociate into ions in an aqueous solution?

Solution

Molar mass of $\text{Hg}(\text{NO}_3)_2 = 324.6 \text{ g mol}^{-1}$

$$\begin{aligned} \text{Molality of } \text{Hg}(\text{NO}_3)_2 \text{ solution, } m &= \frac{n_2}{m_1} = \frac{m_2/M_2}{m_1} = \frac{(3.24 \text{ g}/324.6 \text{ g mol}^{-1})}{(1 \text{ kg})} \\ &= 0.01 \text{ mol kg}^{-1} \end{aligned}$$

We will have

$$(-\Delta T_f)_0 = K_f m = (1.86 \text{ K kg mol}^{-1})(0.01 \text{ mol kg}^{-1}) = 0.0186 \text{ K}$$

$$i = \frac{(-\Delta T_f)}{(-\Delta T_f)_0} = \frac{0.0558 \text{ K}}{0.0186 \text{ K}} = 3$$

$$\alpha = \frac{i-1}{v-1} = \frac{3-1}{3-1} = 1$$

that is, the degree of dissociation of $\text{Hg}(\text{NO}_3)_2$ is one and thus the salt is completely ionized in the solution.

For mercuric chloride, we have

Molar mass of $\text{HgCl}_2 = 271.5 \text{ g mol}^{-1}$

$$\begin{aligned} \text{Molality of } \text{HgCl}_2 \text{ solution, } m &= \frac{m_2/M_2}{m_1} = \frac{(10.84 \text{ g}/271.5 \text{ g mol}^{-1})}{(1 \text{ kg})} \\ &= 0.04 \text{ mol kg}^{-1} \end{aligned}$$

$$(-\Delta T_f)_0 = K_f m = (1.86 \text{ K kg mol}^{-1})(0.04 \text{ mol kg}^{-1}) = 0.0744 \text{ K}$$

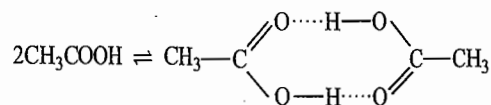
Since $(\Delta T_f)_0 = \Delta T_f$, the salt HgCl_2 does not ionize in the solution.

ains 1 mol of

100.46 °C.

Example 2.11.4

The freezing point of a solution of acetic acid (amount fraction = 0.02) in benzene is 277.4 K. Acetic acid exists partly as a dimer



Calculate the equilibrium constant for the dimerization. The melting point of pure benzene is 278.4 K, its molar enthalpy of fusion is 10.042 kJ mol⁻¹.

Solution

The value of K_f (benzene) is

$$K_f = \frac{M_1 R T_f^{*2}}{\Delta_{\text{fus}} H_{1,m}} = \frac{(78 \times 10^{-3} \text{ kg})(8.134 \text{ J K}^{-1} \text{ mol}^{-1})(278.4 \text{ K})^2}{(10\,042 \times 10^3 \text{ J mol}^{-1})} \\ = 5.0 \text{ K kg mol}^{-1}$$

Molality of the solution is

$$m = \frac{(-\Delta T_f)}{K_f} = \frac{(1.0 \text{ K})}{(5.0 \text{ K kg mol}^{-1})} = 0.2 \text{ mol kg}^{-1}$$

Given amount fraction of acetic acid = 0.02

For such a dilute solution, we may write

$$x_2 = \frac{n_2}{n_1 + n_2} \approx \frac{n_2}{n_1} = \frac{n_2}{(m_1/M_1)} = (n_2/m_1)M_1 = mM_1$$

$$\text{Hence } m = \frac{x_2}{M_1} = \frac{0.02}{78 \times 10^{-3} \text{ kg mol}^{-1}} = 0.257 \text{ mol kg}^{-1}$$

Thus, we have

$$\text{Given: } m_m + 2m_d = 0.257 \text{ mol kg}^{-1}$$

$$\text{Found: } m_m + m_d = 0.2 \text{ mol kg}^{-1}$$

where the subscripts m and d stand for monomer and dimer, respectively. Solving for m_m and m_d , we get

$$m_m = 0.143 \text{ mol kg}^{-1} \quad \text{and} \quad m_d = 0.057 \text{ mol kg}^{-1}$$

The equilibrium constant for the dimerization of acetic acid is

$$K_{\text{eq}}^\circ = \frac{(m_d/m^\circ)}{(m_m/m^\circ)^2} = \frac{0.057}{(0.143)^2} = 2.79$$

Example 2.11.5

The freezing point of an aqueous solution of KCN containing 0.189 mol kg⁻¹ was -0.704 °C. On adding 0.095 mol of Hg(CN)₂, the freezing point of the solution became -0.530 °C. Assuming that the complex is formed according to the equation



find the formula of the complex.

Solution**Exam****Solutio**

Solution

Molality of the solution containing only KCN is

$$m = \frac{(-\Delta T_f)}{K_f} = \frac{(0.704 \text{ K})}{(1.86 \text{ K kg mol}^{-1})} = 0.379 \text{ mol kg}^{-1}$$

This is just double of the given molality ($= 0.189 \text{ mol kg}^{-1}$) of KCN, indicating complete dissociation of KCN. Molality of the solution after the formation of the complex

$$m = \frac{(-\Delta T_f)}{K_f} = \frac{(0.530 \text{ K})}{(1.86 \text{ K kg mol}^{-1})} = 0.285 \text{ mol kg}^{-1}$$

If it be assumed that the whole of $\text{Hg}(\text{CN})_2$ is converted into complex, then the amounts of various species in 1 kg of solvent after the formation of the complex will be

$$n(\text{K}^+) = 0.189 \text{ mol}, \quad n(\text{CN}^-) = (0.189 - x) \text{ mol}$$

$$n(\text{Hg}(\text{CN})_{x+2}^{x-}) = 0.095 \text{ mol}$$

Total amount of species in 1 kg solvent becomes

$$n_{\text{total}} = [0.189 + (0.189 - x) + 0.095] \text{ mol} = (0.473 - x) \text{ mol}$$

Equating this to 0.285 mol, we get

$$(0.473 - x) \text{ mol} = 0.285 \text{ mol}$$

$$\text{i.e. } x = (0.473 - 0.285) = 0.188$$

$$\text{Number of CN}^- \text{ units combined} = \frac{0.188 \text{ mol}}{0.095 \text{ mol}} = 2$$

Thus, the formula of the complex is $\text{Hg}(\text{CN})_4^{2-}$.

Example 2.11.6

The vapour pressure of a solution containing 6.69 g of $\text{Mg}(\text{NO}_3)_2$ dissolved in 100 g of water is 747 Torr at 373 K. Calculate the degree of dissociation of the salt in the solution.

Solution

Molar mass of $\text{Mg}(\text{NO}_3)_2 = 148.31 \text{ g mol}^{-1}$

Amount fraction of the solute in the solution is

$$\begin{aligned} x_2 &= \frac{n_2}{n_1 + n_2} = \frac{(m_2/M_2)}{(m_1/M_1) + (m_2/M_2)} = \frac{(6.69/148.31)}{(100/18) + (6.69/148.31)} \\ &= \frac{0.045}{5.556 + 0.045} = 8.03 \times 10^{-3} \end{aligned}$$

The depression in the vapour pressure is

$$(\Delta p)_0 = x_2 p^* = (8.03 \times 10^{-3})(760 \text{ Torr}) = 6.10 \text{ Torr}$$

The value of van't Hoff factor is

$$i = \frac{\Delta p}{(\Delta p)_0} = \frac{(760 - 747) \text{ Torr}}{(6.10 \text{ Torr})} = 2.13$$

The degree of dissociation of the salt is

$$\alpha = \frac{i - 1}{v - 1} = \frac{2.13 - 1}{3 - 1} = \frac{1.13}{2} = 0.565$$

Example 2.11.7 A solution is 0.5 molar in MgSO_4 , 0.1 molar in AlCl_3 and 0.2 molar in $(\text{NH}_4)_2\text{SO}_4$. What is the total ionic strength?

Solution The ionic strength of the solution is given by

$$\mu = \frac{1}{2} \sum_i c_i z_i^2$$

where c_i is the molar concentration of the i th ion and z_i is its charge number. Thus

$$\begin{aligned} \mu = \frac{1}{2} [& (c_{\text{Mg}^{2+}})(z_{\text{Mg}^{2+}})^2 + (c_{\text{SO}_4^{2-}})(z_{\text{SO}_4^{2-}})^2 + (c_{\text{Al}^{3+}})(z_{\text{Al}^{3+}})^2 \\ & + (c_{\text{Cl}^-})(z_{\text{Cl}^-})^2 + (c_{\text{NH}_4^+})(z_{\text{NH}_4^+})^2] \end{aligned}$$

Substituting the given data, we get

$$\begin{aligned} \mu/\text{mol dm}^{-3} &= \frac{1}{2} [(0.5)(2)^2 + (0.7)(-2)^2 + (0.1)(3)^2 + (0.3)(-1)^2 + (0.4)(1)^2] \\ &= \frac{1}{2} [2.0 + 2.8 + 0.9 + 0.3 + 0.4] = \frac{1}{2} (6.4) \\ &= 3.2 \end{aligned}$$

Example 2.11.8

A 0.2 molar aqueous solution of KCl freezes at -0.680°C . (a) Calculate the van't Hoff factor i and the apparent degree of dissociation of KCl. (b) Using the Debye-Hückel equation, calculate the value of the van't Hoff factor and compare it with the value obtained in part (a), (c) Calculate the expected values of ΔT_b and Π at 0°C using the value of i obtained in part (a). Assume molality and molarity have the same value.

Solution

(a) We have

$$(-\Delta T_f)_0 = K_f m = (1.86 \text{ K kg mol}^{-1})(0.2 \text{ mol kg}^{-1}) = 3.72 \text{ K}$$

$$i = \frac{(-\Delta T_f)}{(-\Delta T_f)_0} = \frac{0.680 \text{ K}}{3.72 \text{ K}} = 1.83$$

The apparent degree of dissociation of KCl is

$$\alpha = \frac{i-1}{v-1} = \frac{1.83-1}{2-1} = 0.83$$

(b) The ionic strength of the solution is given by

$$\mu = \frac{1}{2} \sum_i c_i z_i^2$$

Substituting the given data, we get

$$\mu/\text{mol dm}^{-3} = \frac{1}{2} [(0.2)(1)^2 + (0.2)(1)^2] = 0.2$$

SO_4^{2-} . What

According to Debye-Hückel theory, we get

$$\begin{aligned} i &= \nu(1 - 0.375 |z_+| |z_-| \sqrt{\mu/\mu^\circ}) \\ &= 2[1 - (0.375)(1)(1)\sqrt{0.2}] = 2(1 - 0.168) \\ &= 1.644 \end{aligned}$$

r. Thus

$$\begin{aligned} \text{(c)} \quad \Delta T_b &= i(\Delta T_b)_0 = i K_b m \\ &= (1.83)(0.52 \text{ K kg mol}^{-1})(0.2 \text{ mol kg}^{-1}) \\ &= 0.19 \text{ K} \end{aligned}$$

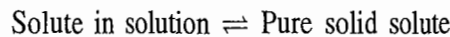
$$\begin{aligned} \Pi &= i(\Pi)_0 = icRT \\ &= (1.83)(0.2 \times 10^3 \text{ mol m}^{-3})(8.314 \text{ J K}^{-1} \text{ mol}^{-1})(273 \text{ K}) \\ &= 8.307 \times 10^5 \text{ Pa} \approx 8.2 \text{ atm} \end{aligned}$$

2.12 SOLUBILITY OF A SOLUTE IN AN IDEAL SOLUTION

Thermodynamic Derivation of Ideal Law of Solubility

van't Hoff
Debye-Hückel
law obtained
value of i

At saturation point, where no more solute dissolves in a solution, there exists an equilibrium between the solute in solution and the pure solid solute, i.e.



The thermodynamic condition of equilibrium is

$$\mu_{2(\text{sol})}(T, p, x_2) = \mu_{2(\text{s})}^*(T, p) \quad (2.12.1)$$

where x_2 is the amount fraction of solute in the saturated solution. If the solution is ideal, then

$$\mu_{2(\text{sol})}(T, p, x_2) = \mu_{2(1)}^*(T, p) + RT \ln x_2 \quad (2.12.2)$$

Substituting Eq. (2.12.2) in Eq. (2.12.1) and rearranging, we have

$$\mu_{2(1)}^* + RT \ln x_2 = \mu_{2(\text{s})}^*$$

$$\text{or} \quad \ln x_2 = \frac{\mu_{2(\text{s})}^* - \mu_{2(1)}^*}{RT} = -\frac{\Delta_{\text{fus}} \mu_2^*}{RT} \quad (2.12.3)$$

According to Eq. (2.12.3), the amount fraction of solute in the saturated solution is a function of the temperature of the solution. In order to determine the functionality, we differentiate Eq. (2.12.3) with respect to x_2 , keeping p constant. Thus, we have

$$\frac{1}{x_2} = -\frac{1}{R} \left[\frac{\partial(\Delta_{\text{fus}} \mu_2^*/T)}{\partial T} \right]_p \left[\frac{\partial T}{\partial x_2} \right]_p$$

Using Gibbs-Helmholtz equation, we get

$$\frac{1}{x_2} = \frac{\Delta_{\text{fus}} H_{2,\text{m}}}{RT^2} \left(\frac{\partial T}{\partial x_2} \right)_p$$

$$\text{or } \frac{dx_2}{x_2} = \frac{\Delta_{\text{fus}}H_{2,m}}{R} \frac{dT}{T^2} \quad (p \text{ constant}) \quad (2.12.4)$$

To determine the variation of x_2 with T , we integrate the above expression to give

$$\int_1^{x_2} \frac{dx}{x_2} = \int_{T_f^*}^T \frac{\Delta_{\text{fus}}H_{2,m}}{R} \frac{dT}{T^2} \quad (2.12.5)$$

where T_f^* is the freezing point of the pure solute ($x_2 = 1$) and x_2 is the solubility of the solute at temperature T of the solution.

Assuming $\Delta_{\text{fus}}H_{2,m}$ to be independent of temperature, Eq. (2.12.5) yields

$$\ln x_2 = -\frac{\Delta_{\text{fus}}H_{2,m}}{R} \left(\frac{1}{T} - \frac{1}{T_f^*} \right) \quad (2.12.6)$$

Equation (2.12.6) is an expression of the *ideal law of solubility*. According to this law, the solubility of a substance depends only on the characteristics of the solute through $\Delta_{\text{fus}}H_{2,m}$ and T_f^* and is independent of the nature of the solvent.

Factors Determining Solubility

The following dependence on the solubility of the solute may be concluded.

- A comparatively lesser value of T_f^* (i.e. low freezing point of the solute) makes the right side of Eq. (2.12.6) more positive indicating larger value of x_2 (i.e. more is the solubility).
- A comparatively lesser value of $\Delta_{\text{fus}}H_{2,m}$ makes the right side of Eq. (2.12.6) less negative indicating larger value of x_2 (i.e. more is the solubility).
- Increasing the value of T also makes the right side of Eq. (2.12.6) lesser negative indicating larger value of x_2 (i.e. more is the solubility).

Diagrammatic Representation of Solubility

Equation (2.12.6) can be written as

$$\ln x_2 = \frac{\Delta_{\text{fus}}S_{2,m}}{R} \left(1 - \frac{T_f^*}{T} \right) \quad (2.12.7)$$

where $\Delta_{\text{fus}}S_{2,m}$ is the molar entropy of fusion of solute. Figure 2.12.1 shows the variation of solubility, x , as a function of temperature for two substances with the same entropy of fusion but different freezing points.

Limitation of Eq. (2.12.6)

In deriving Eq. (2.12.6), we have assumed that $\Delta_{\text{fus}}H_{2,m}$ remains constant within the temperature range T_f^* and T . This is true only if the temperature of the solution is not far away from the melting point of the solute. If the temperature of the solution is very far away from T_f^* , then the solubility as calculated from Eq. (2.12.6) is no longer accurate.

stant) (2.12.4)

above expression

(2.12.5)

x_2 is the solubility

Eq. (2.12.5) yields

(2.12.6)

solubility. According to the characteristics of the nature of the

may be concluded.

point of the solute) indicating larger value

side of Eq. (2.12.6) (the solubility).

Eq. (2.12.6) lesser solubility).

(2.12.7)

re 2.12.1 shows the two substances with

ains constant within temperature of the solution. If the temperature is as calculated from

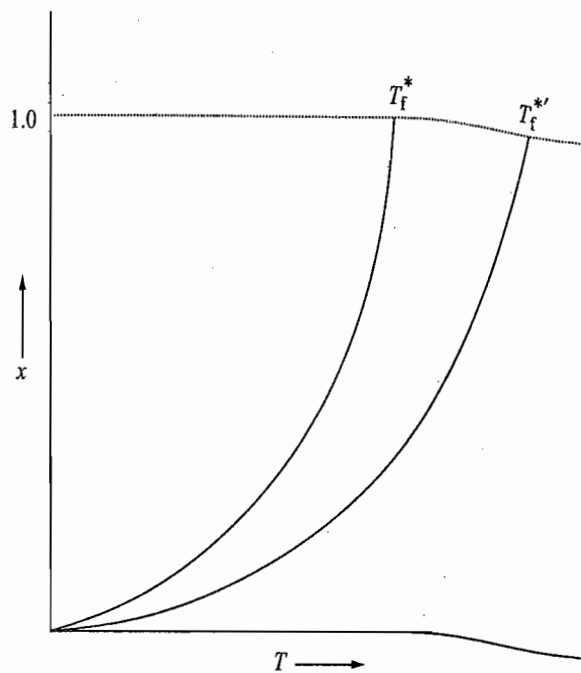


Fig. 2.12.1 Variation of solubility with temperature

Correlating Solubilities at Two Temperatures

If x_1 and x_2 are the solubilities of solute at temperatures T_1 and T_2 , respectively, we can write

$$\ln x_1 = -\frac{\Delta_{\text{fus}}H_{2,m}}{R} \left(\frac{1}{T_1} - \frac{1}{T_f^*} \right) \tag{2.12.8}$$

$$\ln x_2 = -\frac{\Delta_{\text{fus}}H_{2,m}}{R} \left(\frac{1}{T_2} - \frac{1}{T_f^*} \right) \tag{2.12.9}$$

Subtracting Eq. (2.12.8) from Eq. (2.12.9), we get

$$\ln \frac{x_2}{x_1} = -\frac{\Delta_{\text{fus}}H_{2,m}}{R} \left(\frac{1}{T_2} - \frac{1}{T_1} \right) \tag{2.12.10}$$

Equation (2.12.10) relates the solubility of the solute in a solvent with temperature of the solution.

Example 2.12.1

The molar enthalpy of fusion of naphthalene is 10.0 kJ mol⁻¹ at 298.15 K and its normal melting point is 353.35 K. Calculate the solubility of naphthalene at 298.15 K in a liquid with which it forms an ideal solution.

Solution

The given data are

$$\Delta_{\text{fus}}H_{2,m} = 10.0 \text{ kJ mol}^{-1}, \quad T = 298.15 \text{ K}, \quad T_f^* = 353.35 \text{ K}$$

Substituting the given data in the expression

$$\ln x_2 = -\frac{\Delta_{\text{fus}}H_{2,m}}{R} \left(\frac{1}{T} - \frac{1}{T_f^*} \right)$$

we get
$$\ln x_2 = -\frac{(10^4 \text{ J mol}^{-1})}{(8.314 \text{ J K}^{-1} \text{ mol}^{-1})} \left(\frac{1}{298.15 \text{ K}} - \frac{1}{353.35 \text{ K}} \right) = -0.2736$$

$$x_2 = 0.5326$$

Example 2.12.2

Given the following data, compute the molar enthalpy of fusion of sucrose assuming ideal solution.

Saturation solubility at 298 K = 6.2 mol per kg of solvent

Freezing point of solute = 473 K.

Solution

The given data are

$$T = 298 \text{ K}, \quad T_f^* = 473 \text{ K}$$

$$x_2 = \frac{n_2}{n_1 + n_2} = \frac{(6.2 \text{ mol})}{(1000/18) \text{ mol} + (6.2 \text{ mol})} = 0.1004$$

Substituting the data in the expression

$$\ln x_2 = -\frac{\Delta_{\text{fus}}H_{2,m}}{R} \left(\frac{1}{T} - \frac{1}{T_f^*} \right)$$

we get
$$\ln 0.1004 = -\frac{\Delta_{\text{fus}}H_{2,m}}{(8.314 \text{ J K}^{-1} \text{ mol}^{-1})} \left(\frac{1}{298 \text{ K}} - \frac{1}{473 \text{ K}} \right)$$

This gives

$$\begin{aligned} \Delta_{\text{fus}}H_{2,m} &= -\frac{(\ln 0.1004)(8.314 \text{ J K}^{-1} \text{ mol}^{-1})(298 \text{ K})(473 \text{ K})}{(473 \text{ K} - 298 \text{ K})} \\ &= 15422 \text{ J mol}^{-1} \end{aligned}$$

REVISIONARY PROBLEMS

- 2.1 What do you understand by the terms (a) solution, (b) solute molecules in a solution, and (c) colligative properties?
- 2.2 (a) Explain the following concentration units.
 (1) Mass %. (2) Volume %. (3) Molarity. (4) Molality. (5) Normality.
 (6) Amount fraction.
 (b) How will you convert:
 (1) Amount fraction into molarity and vice versa?
 (2) Amount fraction into molality and vice versa?
 (3) Molarity into molality and vice versa?
 (c) Explain which of the concentration units given in part (a) vary with temperature.
- 2.3 Derive the following conversion expressions of concentration units.

Amount fraction into molarity $M = x_2 \rho / (x_1 M_1 + x_2 M_2)$

Molarity into amount fraction $x_2 = MM_1 / \{\rho + M(M_1 - M_2)\}$

Amount fraction into molality $m = x_2 / (x_1 M_1)$

Molality into amount fraction $x_2 = mM_1 / (1 + mM_1)$

Molarity into molality $m = M / (\rho - MM_2)$

Molality into molarity $M = m\rho / (1 + mM_1)$

Show that for a very dilute solution, molality of the solution is virtually identical with its molarity.

- 2.4 (a) Describe the experimental behaviour regarding the variation of vapour pressure when a nonvolatile solute is added to a volatile solvent.
 (b) What is the characteristic of the curve of vapour pressure versus amount fraction of solute x_2 as $x_2 \rightarrow 0$?
 (c) What do you understand by an ideal solution? Explain, why a real solution deviates from the ideal behaviour as x_2 is increased.
 (d) State Raoult's law as applicable to ideal solutions. Under what conditions does a real solution follow Raoult's law?
- 2.5 Show that the relative lowering of vapour pressure of a solvent is equal to the amount fraction of the nonvolatile solute and hence show that this relative lowering is a colligative property. Discuss how the relative lowering of vapour pressure of a dilute solution can be utilized in determining the molar mass of the solute.
- 2.6 Show that the chemical potential for the solute and solvent in an ideal solution is given by

$$\mu_{i(\text{sol})} = \mu_i^* + RT \ln x_i$$

- 2.7 Show that the origin of colligative properties such as elevation of boiling point, depression of freezing point and osmotic pressure lies in the relation

$$\mu_{1(\text{sol})} = \mu_{1(l)}^* + RT \ln x_1$$

where $\mu_{1(\text{sol})}$ is the chemical potential of the solvent in the solution, $\mu_{1(l)}^*$ is that of pure liquid solvent and x_1 is the amount fraction of the solvent in the solution.

- 2.8 Draw chemical potential versus temperature diagrams for a solvent in solid, liquid and vapour phases. What changes in the above diagrams occur when a nonvolatile solute is added to the solvent?

Explain with the help of these diagrams that there occurs (a) an elevation in boiling point and (b) a depression in freezing point of the solvent when a nonvolatile solute is added to the solvent. Show also that the depression in freezing point is larger than the elevation in boiling point.

- 2.9 (a) Derive thermodynamically the relation

$$\frac{1}{T_b} = \frac{1}{T_b^*} + \frac{RT \ln x_1}{\Delta_{\text{vap}} H_{1,m}}$$

where T_b is the boiling point of the solution in which the amount fraction of the solvent is x_1 and T_b^* is the boiling point of the pure solvent.

- (b) Starting from the relation

$$\frac{dx_1}{x_1} = - \frac{\Delta_{\text{vap}} H_{1,m}}{RT_b^2} dT_b$$

derive the relation

$$dT_b = K_b dm \quad \text{i.e.} \quad \Delta T_b = K_b m$$

as applicable to dilute solutions. Explain the meaning of the term K_b and the factors on which its value depends. What is the unit of K_b ?

- 2.10 (a) Derive thermodynamically the relation

$$\frac{dx_1}{x_1} = \frac{\Delta_{\text{fus}} H_{1,m}}{R} \frac{dT_f}{T_f^2}$$

and its integrated form,

$$\frac{1}{T_f} = \frac{1}{T_f^*} - \frac{R \ln x_1}{\Delta_{\text{fus}} H_{1,m}}$$

where T_f is the freezing point of the solution, T_f^* is that of the pure solvent and x_1 is the amount fraction of the solvent in the solution.

(b) Starting from the relation

$$\frac{dx_1}{x_1} = \frac{\Delta_{\text{fus}}H_{1,m}}{R} \frac{dT_f}{T_f^2}$$

derive the relation

$$-dT_f = K_f dm \quad \text{i.e.} \quad -\Delta T_f = K_f m$$

On what factors does the value of K_f depend? What is its unit?

- 2.11 (a) What do you understand by the osmotic pressure of the solution? Derive thermodynamically the relation

$$\Pi V = -RT \ln x_1$$

where Π is the osmotic pressure, V is the molar volume of the pure solvent and x_1 is the amount fraction of the solvent in solution.

(b) Show that the above relation can be simplified to

$$\Pi = cRT$$

where c is the molar concentration of the solute in the solution. Discuss the types of approximations made in deriving the above relation.

(c) Explain why the osmotic pressure measurement is preferred for the determination of molar mass of polymers, proteins and colloids over the other colligative properties. Discuss whether the molar mass obtained is the number average molar mass or the mass average molar mass.

- 2.12 Derive the following relations connecting the different colligative properties.

$$\frac{p^* - p}{p^*} = \frac{\Delta_{\text{vap}}H_{1,m}}{R} \left(\frac{\Delta T_b}{T_b^{*2}} \right) = \frac{\Delta_{\text{fus}}H_{1,m}}{R} \left(\frac{-\Delta T_f}{T_f^{*2}} \right) = \frac{\Pi V}{RT}$$

$$\frac{\Delta T_b}{-\Delta T_f} = \frac{\Delta_{\text{fus}}H_{1,m}}{T_f^{*2}} \frac{T_b^{*2}}{\Delta_{\text{vap}}H_{1,m}}$$

$$\Delta T_b = \frac{\Pi V T_b^{*2}}{T \Delta_{\text{vap}}H_{1,m}} \quad \text{and} \quad -\Delta T_f = \frac{\Pi V T_f^{*2}}{T \Delta_{\text{fus}}H_{1,m}}$$

where $V = V_{1,m}^*$.

- 2.13 (a) Discuss why the colligative properties of a solution containing either a strong electrolyte or a weak electrolyte are larger than those of a solution containing nonelectrolyte of the same concentration. What effect does the dilution have on the colligative properties of an electrolytic solution?
 (b) What is the van't Hoff factor i ? Show that this is given as

$$i = \frac{-\Delta T_f}{(-\Delta T_f)_0} = \frac{\Delta T_b}{(\Delta T_b)_0} = \frac{\Pi}{(\Pi)_0} = \frac{\Delta p}{(\Delta p)_0}$$

where the quantities without subscript refer to the electrolytic solution and those with subscript refer to the nonelectrolytic solution of the same concentration.

(c) Discuss how the Arrhenius theory of electrolytic dissociation for a weak electrolyte and the Debye-Hückel theory of interionic attraction for a strong electrolyte explain the variation of colligative properties on dilution? Derive the relation

$$\alpha = \frac{i-1}{v-1}$$

where α is the degree of dissociation, i is the van't Hoff factor and v is the total number of ions that are produced on complete dissociation of the electrolytic molecule.

2.14 (a) Show that the ideal solubility expression at temperature T is given by

$$\ln x_2 = -\frac{\Delta_{\text{fus}}H_{2,m}}{R} \left[\frac{1}{T} - \frac{1}{T_f^*} \right]$$

where x_2 is the amount fraction of the solute in the saturated solution, $\Delta_{\text{fus}}H_{2,m}$ is the molar enthalpy of fusion of the pure solute and T_f^* is the freezing point of the pure solute. Discuss the approximations made in deriving the above relation.

(b) On what factors does the ideal solubility of the solute depend?

TRY YOURSELF PROBLEMS

- 2.1 In the Rast method of determining molar mass, camphor is used as the solvent. Outline the merits of choosing camphor as the solvent. How will you determine the value of K_f for camphor theoretically?
- 2.2 Osmotic pressure measurements are preferred over the other colligative properties to determine the molar mass of high polymers. Give reasons.
- 2.3 The accurate determination of molar mass is done by the method of extrapolation where the plot of (Π/c) versus c is extrapolated to zero concentration. Justify this procedure.
- 2.4 Justify the statements:
 - (a) The classification of solute and solvent in a solution is a matter of convenience only.
 - (b) Molality of a solution is independent of temperature of the solution.
 - (c) The expressions $-\Delta T_f = K_f m$, $\Delta T_b = K_b m$ and $\Pi = cRT$ are applicable only for dilute solutions.
 - (d) For solvents obeying Trouton's rule, the values of K_b and K_f are directly proportional to the factor (MT^*) .
 - (e) The solubility as calculated from the ideal solubility law shows large deviation from the observed value if the temperature of interest is far below the melting point of the solid.
 - (f) Colligative properties of a given electrolytic solution are larger than the corresponding properties produced by the same concentration of a nonelectrolytic solution.
- 2.5 Discuss what types of graphs do you expect for the following. What will be their slopes and intercepts?
 - (a) $\ln x_1$ versus $1/T_b$, (b) $\ln x_1$ versus $1/T_f$, (c) $\ln x_2$ versus $1/T$, where x_2 is the amount fraction of solute in the saturated ideal solution.
- 2.6 (a) If a system contains particles of the same mass, it is called the *monodisperse* system, whereas if it contains particles of different masses, it is called the *polydisperse* system. Show that for a monodisperse system, the number average and mass average molar masses have the same value whereas for a polydisperse system, the mass average is greater than the number average.

(b) Name at least one property which depends on each of the number average molar mass and mass average molar mass.

(c) Determine the number average and the mass average of a system containing the following particles.

5 particles of $m = 1$ g

3 particles of $m = 2$ g

3 particles of $m = 3$ g

1 particle of $m = 4$ g

(Ans. (b) any colligative property and light scattering, (c) 2.0 g and 2.5 g)

2.7 (a) In deriving Eq. (2.12.6), it has been assumed that $\Delta_{\text{fus}}H_{2,m}$ is independent of the temperature. Suppose $\Delta_{\text{fus}}H_{2,m}$ depends upon the temperature and is given by

$$\Delta H = \Delta H_0 + (\Delta a)T + \left(\frac{\Delta b}{2}\right)T^2 + \left(\frac{\Delta c}{3}\right)T^3 + \dots$$

where ΔH_0 , Δa , Δb , Δc , ..., etc., are constants. Taking the above temperature dependence, show that the solubility expression is given by

$$\ln x_2 = -\frac{\Delta H_0}{RT} + \frac{\Delta a}{R} \ln(T/K) + \frac{\Delta b}{2R}T + \frac{\Delta c}{3R} \frac{T^2}{2} + \dots + K$$

where K is the constant of integration.

(b) Predict for which substance (1 or 2) having following characteristics, the ideal solubility is larger, and give reasons:

(i) Same $\Delta_{\text{fus}}H_m$ but $T_1^* > T_2^*$.

(ii) Same T^* but $\Delta_{\text{fus}}H_{1,m} > \Delta_{\text{fus}}H_{2,m}$

2.8 Given below is a cell.

Solution of sodium proteinate [Na ⁺] = a [P ⁻] = a	membrane	Solution of sodium chloride [Na ⁺] = b [Cl ⁻] = b
---	----------	--

The membrane allows the diffusion of small ions and not of large ions such as P⁻. Such a system will not be in equilibrium as the Cl⁻ ions can diffuse from right side to left side. This diffusion will also be accompanied by the diffusion of Na⁺ ions in order to maintain the electroneutrality. Equilibrium will be achieved when the chemical potential of NaCl is same on each side of the membrane, i.e.

$$(\mu_{\text{NaCl}})_L = (\mu_{\text{NaCl}})_R$$

For dilute solutions, we can write

$$\mu_{\text{NaCl}}^* + RT \ln (m_{\pm, \text{NaCl}})_L^2 = \mu_{\text{NaCl}}^* + RT \ln (m_{\pm, \text{NaCl}})_R^2$$

$$\text{or } (m_{\pm, \text{NaCl}})_L = (m_{\pm, \text{NaCl}})_R$$

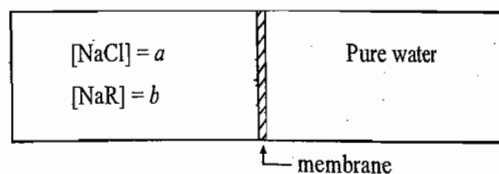
$$\text{or } (m_{\text{Na}^+})_L (m_{\text{Cl}^-})_L = (m_{\text{Na}^+})_R (m_{\text{Cl}^-})_R$$

If x is the concentration of NaCl that has diffused from right side to left side, show that it is equal to

$$x = \frac{b^2}{a + 2b}$$

The above equilibrium is known as *Donnan membrane equilibrium*.

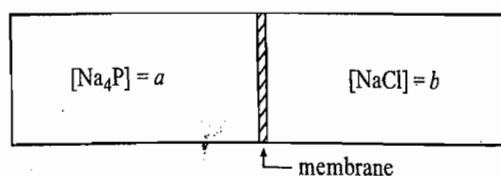
2.9 Given below is a cell



The membrane allows the passage of small ions Na^+ and Cl^- and not large ion such as R^- . If x is the concentration of NaCl that has diffused from left to right side, show that

$$x = \frac{a(a+b)}{2a+b}$$

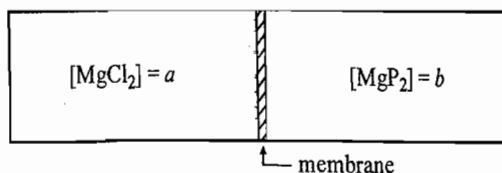
2.10 Given below is a cell.



The membrane allows the passage of small ions Na^+ and Cl^- and not large ion such as P^{4-} . If $b > a$ and if x is the concentration of NaCl that has diffused from right to left side, show that

$$x = \frac{b^2}{4a+2b}$$

2.11 Given below is a cell.



The membrane allows the passage of small ion Mg^{2+} and Cl^- and not large ion such as P^- . If $a > b$ and if x is the concentration of MgCl_2 that has diffused from left to right, show that the value x is obtainable from the expression.

$$2x^3 + x^2(b-3a) + 3a^2x - a^3 = 0$$

$$\text{(Hint: } [\text{Mg}^{2+}]_L [\text{Cl}^-]_L^2 = [\text{Mg}^{2+}]_R [\text{Cl}^-]_R^2 \text{)}$$

- 2.12 Why does increase in pressure reduce cooking time?
- 2.13 Will an egg cook faster if boiled in pure water or in water to which salt has been added? Give reason.
- 2.14 The phenomenon of osmosis can be stopped by either increasing the external pressure on the solution side or by lowering the external pressure on the solvent side. Explain.
- 2.15 Show that the relative lowering in the freezing $-\Delta T_f/T_f^*$, when a nonvolatile solute is dissolved in a volatile solvent, is given by $RT_f^*x_2/\Delta_{\text{fus}}H_{1,m}$, where x_2 is the amount fraction of solute in the solution. Does the freezing point remain constant as more and more of the solvent crystallizes out?

average molar

containing the

0 g and 2.5 g)
pendent of the
given by

ire dependence,

stics, the ideal

e ions such as
fuse from right
sion of Na^+ ions
eved when the
.e.

left side, show

NUMERICAL PROBLEMS

Concentration Units

- 2.1 An aqueous solution of HCl has 2.0% by mass of HCl and a density of 1.016 g cm^{-3} . Calculate the amount fraction of solute, molarity and molality of the solution.
(Ans. 0.01, $0.557 \text{ mol dm}^{-3}$, $0.559 \text{ mol kg}^{-1}$)

Vapour Pressure

- 2.2 In 804 g of water, 30 g sucrose ($\text{C}_{12}\text{H}_{22}\text{O}_{11}$) and 30 g glucose ($\text{C}_6\text{H}_{12}\text{O}_6$) were dissolved. What is the vapour pressure of this solution at 303 K if the vapour pressure of water is 31.82 mmHg? (Ans 31.64 mmHg)
- 2.3 The relative lowering of vapour pressure can be determined conveniently by the Ostwald and Walker's dynamic method. In this method, a fixed volume of dry air is first passed through bulbs containing the solution and then through the bulbs containing the pure solvent, the losses in masses of these two sets of bulbs are related to p_{sol} and Δp as follows.

$$\Delta m_1 \propto p_{\text{sol}}$$

$$\Delta m_2 \propto p^* - p_{\text{sol}}$$

$$\text{Hence } \frac{\Delta p}{p^*} = \frac{p^* - p_{\text{sol}}}{p^*} = \frac{\Delta m_2}{\Delta m_1 + \Delta m_2}$$

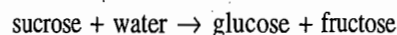
Using the above relation, determine the molar mass of solute from the following data:

$\Delta m_1 = 1.949 \text{ g}$, $\Delta m_2 = 0.087 \text{ g}$, the solution contains 26.66 g of solute in 200 g of water.

(Ans. 56.15 g mol^{-1})

Elevation of Boiling Points

- 2.4 The boiling point of ethyl alcohol is $78.4 \text{ }^\circ\text{C}$ and its $\Delta_{\text{vap}}H_{\text{m}} = 39.42 \text{ kJ mol}^{-1}$. Calculate the boiling point elevation constant for ethyl alcohol.
(Ans. $1.19 \text{ K kg mol}^{-1}$)
- 2.5 Benzene and cyclohexane follow Trouton's rule. If their boiling points are $80.2 \text{ }^\circ\text{C}$ and $81.4 \text{ }^\circ\text{C}$, respectively, calculate the values of the boiling point elevation constants.
(Ans. $2.625 \text{ K kg mol}^{-1}$, $2.833 \text{ K kg mol}^{-1}$)
- 2.6 A 10% solution of cane sugar has undergone partial inversion according to the reaction



The boiling point of the solution is $100.27 \text{ }^\circ\text{C}$: (a) What is the average molar mass of the dissolved material? (b) What fraction of the sugar has inverted?

(Ans. (a) 209.9 g mol^{-1} , (b) 0.63)

Depression of Freezing Point

- 2.7 (a) The molar mass and the melting point of camphor are 152.2 g mol^{-1} and $178.4 \text{ }^\circ\text{C}$, respectively. The cryoscopic constant of camphor is $37.7 \text{ K kg mol}^{-1}$. Calculate $\Delta_{\text{fus}}H_{1, \text{m}}$ for camphor.
(Ans. $6.844 \text{ kJ mol}^{-1}$)
- (b) A mixture which contains 0.52 g of camphor and 0.045 g of an organic solute freezes at $157.0 \text{ }^\circ\text{C}$. The solute contains 93.46% of C and 6.54% of H by mass. Determine the molecular formula of the compound.
(Ans. $\text{C}_{12}\text{H}_{10}$)
- 2.8 Pure benzene freezes at $5.4 \text{ }^\circ\text{C}$ and a solution of 0.223 g of phenylacetic acid ($\text{C}_6\text{H}_5\text{CH}_2\text{COOH}$) in 4.4 g of benzene freezes at $4.47 \text{ }^\circ\text{C}$. The molar enthalpy of fusion of benzene is 9.89 kJ mol^{-1} . Calculate the relative molar mass of phenylacetic acid and comment on the form of the acid in the solution.

(Ans. $M = 273 \text{ g mol}^{-1}$, dimerizes in solution)

Osmo

Corr
Colli
Prop

- 2.9 (a) Assuming $\Delta_{\text{fus}}H_{1,m}$ to be independent of temperature. Show that the integrated expression of Eq. (2.8.9) is given by

$$\frac{1}{T_f} = \frac{R \ln(1 + mM_1)}{\Delta_{\text{fus}}H_{1,m}} + \frac{1}{T_f^*}$$

Calculate T_f for aqueous solutions having

$$m/\text{mol kg}^{-1} \quad 0.1, 0.2, \dots, 0.8, 0.9.$$

Given: $\Delta_{\text{fus}}H_{1,m} = 6009.5 \text{ J mol}^{-1}$.

(b) Calculate T_f by using the expression, $-\Delta T_f = K_f m$ (an expression derived for dilute solutions in which $m \rightarrow 0$) for the aqueous solutions mentioned in part (a). Given: $K_f = M_1 R T_f^{*2} / \Delta_{\text{fus}}H_{1,m}$.

(c) Determine graphically or otherwise the maximum molality of aqueous solution for which T_f 's calculated in parts (a) and (b) do not differ more than 0.01 K

(Ans. 0.59 mol kg^{-1})

Osmotic Pressure

- 2.10 The average osmotic pressure of human blood is 7.7 atm at 40 °C. (a) What should be the total concentration of various solutes in the blood? (b) Assuming this concentration to be essentially the same as the molality, find the freezing point of blood.

(Ans. $-0.56 \text{ }^\circ\text{C}$)

- 2.11 Consider the following arrangement, in which a solution containing 20 g of hemoglobin in 1 dm^3 of the solution is placed in the right compartment and pure water is placed in the left compartment. At equilibrium, the height of water in the right-side column is 77.8 mm in excess of that in the left-side column. What is the molar mass of hemoglobin? The temperature of the system is maintained at 298 K.

(Ans. $65\,040 \text{ g mol}^{-1}$)

- 2.12 The chemical potential of pure water is $-285.84 \text{ kJ mol}^{-1}$. What is the chemical potential of water in a solution containing 0.1 mol of solute per 120 g of water at 298.15 K and 1 atm total pressure? Assume ideal behaviour.

(Ans. $-285.88 \text{ kJ mol}^{-1}$)

Correlation between Colligative Properties

- 2.13 The freezing point of a solution of 0.138 g of a nonvolatile solute in 15.2 g benzene is 0.53 K less than the freezing point of pure benzene. What are the molar mass of the substance and the normal boiling point of solution?

(Ans. 88 g mol^{-1} , $80.4 \text{ }^\circ\text{C}$)

- 2.14 An aqueous solution of cane sugar ($M = 342 \text{ g mol}^{-1}$) has an osmotic pressure of $1.5 \times 101.3 \text{ kPa}$ at 18 °C. What will be the vapour pressure of this solution at 40 °C? If 100 g of this solution is cooled to $-3.0 \text{ }^\circ\text{C}$, what mass of ice will separate out? Vapour pressure of water at 40 °C = 55.324 mmHg.

(Ans. 55.26 mmHg, 94 g)

- 2.15 Blood freezes at $-0.56 \text{ }^\circ\text{C}$ and a solution of 3.0 g of urea ($M = 60 \text{ g mol}^{-1}$) in 250 g of water freezes at $-0.37 \text{ }^\circ\text{C}$. What is the concentration of blood solution and its osmotic pressure at 37 °C?

(Ans. 0.3 mol dm^{-3} , 750 kPa)

- 2.16 The vapour pressure of a solution of urea is 736.2 mmHg at 100 °C. What is the osmotic pressure of this solution at 15 °C? At what temperature would the solution begin to freeze? K_f for water = $1.86 \text{ K kg mol}^{-1}$.

(Ans. 4.17 kPa, $-3.2 \text{ }^\circ\text{C}$)

- 2.17 Two grams of a complex of high molar mass compound ($M = 12\,400\text{ g mol}^{-1}$) is dissolved in 100 g of water at 25 °C. Calculate ΔT_f , ΔT_b , Δp and Π of the solution at 25 °C. On the basis of values obtained suggest the most appropriate method for determining the molar mass.

$$\text{(Ans. } -\Delta T_f = 3 \times 10^{-3} \text{ }^\circ\text{C, } \Pi = 29 \text{ mmHg, } \Delta T_b = 8 \times 10^{-4} \text{ }^\circ\text{C, } \Delta p = 6.9 \times 10^{-4} \text{ mmHg)}$$

Colligative Properties of Electrolytic Solution

- 2.18 A 0.4 molal solution of K_2SO_4 freezes at $-1.52\text{ }^\circ\text{C}$. Assuming that van't Hoff factor i is constant with temperature, calculate the vapour pressure at 25 °C and the normal boiling point of the solution. Given: $p_1^*(298\text{ K}) = 0.031\,67\text{ bar}$.

$$\text{(Ans. } 0.0312\text{ bar, } 100.42\text{ }^\circ\text{C)}$$

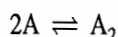
- 2.19 An aqueous solution contains 5% by mass of urea, 1.0% by mass of KCl and 10% by mass of glucose. Calculate its freezing point. Assume complete ionization for KCl.

$$\text{(Ans. } -4.29\text{ }^\circ\text{C)}$$

- 2.20 When phenol ($\text{C}_6\text{H}_5\text{OH}$) is dissolved in a particular solvent, it is partially dimerized. If 2.58 g of phenol is dissolved in 100 g of the solvent, the freezing point of solvent ($K_f = 14.1\text{ K mol}^{-1}\text{ kg}$) is depressed by 2.37 K. Find how much of the phenol is dimerized in solution.

$$\text{(Ans. } 77.55\%)$$

- 2.21 (a) An involatile solute A dimerizes in a solvent:



$$\text{show that } K_{\text{eq}} = \frac{K_b(K_b m - \Delta T_b)}{(2\Delta T_b - K_b m)^2}$$

where m is the molality of the solute in the solvent and K_b is the boiling point elevation constant of the solvent.

- (b) A 0.103 3 molal solution of A in the above solvent produces $\Delta T_b = (0.070\,4\text{ mol kg}^{-1}) K_b$. Calculate the value of K_{eq} .

$$\text{(Ans. } 23.4\text{ mol}^{-1}\text{ kg)}$$

- 2.22 125 g benzoic acid (molar mass = 121 g mol^{-1}) when dissolved in 100 cm^3 of benzene produces osmotic pressure of 1.73 atm at 300 K. Benzoic acid is known to form dimer in benzene. Calculate (i) the percentage of benzoic acid in the associated state and (ii) the equilibrium constant of the dimerization reaction.

$$\text{(Ans. } 63.93\%, 23.78\text{ mol}^{-1}\text{ dm}^3)$$

- 2.23 (a) The freezing point of 0.01 molal CaCl_2 is $-0.051\,12\text{ }^\circ\text{C}$. What freezing point is predicted by the Debye-Hückel theory? What is the osmotic pressure of 0.01 molal CaCl_2 at 0 °C?

- (b) Using the Debye-Hückel equation, calculate the values of i at 0 °C for 0.0005 molar aqueous solutions of HCl, BaCl_2 , H_2SO_4 , and $\text{La}(\text{NO}_3)_3$.

Ideal Solubility

- 2.24 The solubility values of picric acid in benzene are:

$\theta_c / ^\circ\text{C}$	5	10	15	20	25	35
g/100 g benzene	3.70	5.37	7.29	9.56	12.66	21.38

Calculate the freezing point and molar enthalpy of fusion of picric acid.

Donnan-Membrane Equilibrium

- 2.25 If in Q 2.11 of Try Yourself Problem, $a = 0.003\text{ M}$ and $b = 0.001\text{ M}$, Show that $x = 1.3628 \times 10^{-3}\text{ M}$.

(Hint: By the method of successive approximation, determine the value of x using the expression $x = \{[x^2(3a - b) - 3a^2x + a^3]/2\}^{1/3}$)

3

Phase Rule

3.1 INTRODUCTION AND DEFINITIONS

The various conditions of equilibrium between phases, such as the number of phases, the number of components and the degrees of freedom (or the variance), can be correlated with one another with the help of a general rule, known as the *phase rule*. This rule was deduced theoretically by J.W. Gibbs. Before proceeding with the deduction of the rule, it is necessary to define and explain the terms involved, viz., phase, component and degree of freedom.

Phase

A phase is defined as any homogeneous and physically distinct part of a system which is separated from other parts of the system by definite bounding surfaces. The term homogeneous means that the system has identical physical properties and chemical composition throughout the whole of the system.

In general, we have:

For gaseous system Only one phase is possible since gases are completely miscible with one another in all proportions.

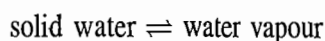
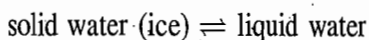
For liquid system The number of phases is equal to the number of layers present in the system. For completely miscible liquids, the number of phases is equal to one.

For solid system In general, every solid constitutes a single phase except when a solid solution is formed. Thus the number of phases in the solid system is equal to the number of solids present. In solid solution, the number of phases is equal to one. Each polymorphic form and allotropic modification constitutes a separate phase.

Number of Components

It is the smallest number of independent chemical constituents by means of which the composition of each and every phase can be expressed. The independent chemical constituent is the one whose concentration can be varied independent of other constituents of the system. Some typical examples are given below.

One-component system The water system is a typical example of one-component system. We can have the following equilibria between the different phases of water:

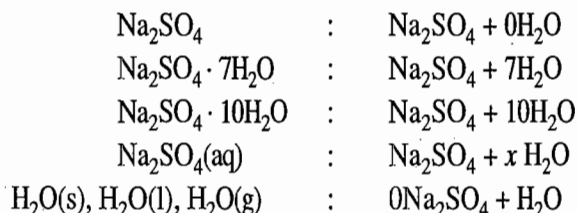


liquid water \rightleftharpoons water vapour

solid water \rightleftharpoons liquid water \rightleftharpoons water vapour

The composition of any one phase (solid, liquid or vapour) can be expressed in terms of the single constituent water and hence the number of components is one. The variable could be either H_2 or O_2 since specification of one fixes the other through the formula H_2O . However, this choice is never considered since H_2 or O_2 does not exist as the individual constituent in the above equilibrium.

Two-component system The typical example of a two-component system is the salt-water system such as sodium sulphate-water, copper sulphate-water, etc. In Na_2SO_4 - H_2O system, the various phases that may occur are Na_2SO_4 , $Na_2SO_4 \cdot 7H_2O$, $Na_2SO_4 \cdot 10H_2O$, an aqueous solution of Na_2SO_4 , water present as ice, liquid and vapour. The composition of any of the above phases can be stated in terms of the two constituents, namely, sodium sulphate and water:



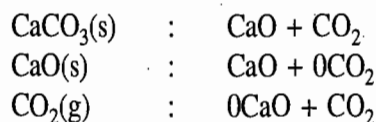
It can be seen that the composition of some of the phases can be represented by only one constituent while the others necessarily require two constituents. Since two constituents are the smallest number by which the compositions of all the phases can be defined, the number of components in sodium sulphate-water system is two.

Another example is the equilibrium between $CaCO_3(s)$, $CaO(s)$ and $CO_2(g)$ as represented by the equation

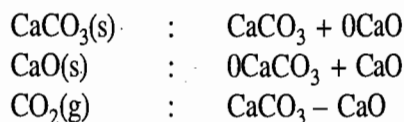


Here the number of phases are three, viz., solid $CaCO_3$, solid CaO and gaseous CO_2 . The number of components in the above system is two since two species out of the three are sufficient to express the compositions of all the three phases. It is immaterial which of the two are selected for this purpose. For example:

(a) If CaO and CO_2 are chosen, then



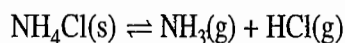
(b) If $CaCO_3$ and CaO are chosen, then




and so on.

Thus it is the number and not the nature that is important for determining the components of the system.

Another example, which makes a clear distinction between the one component system and the two-component system, is the dissociation of ammonium chloride:



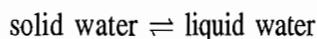
This system has two phases, viz., solid NH_4Cl and gaseous phase containing ammonia and hydrogen chloride. If the dissociation is carried out in vacuum, then the number of components of the system is one. This is due to the fact that in the gaseous phase both HCl and NH_3 are always present in equal amounts and thus its composition can be represented by $\text{NH}_4\text{Cl} (= x \text{NH}_3 + x \text{HCl})$. But if the dissociation is carried out in the presence of arbitrary amounts of NH_3 or/and HCl , then the number of components of the system becomes two:



Degree of Freedom

The degree of freedom or variance of the system is the minimum number of independent variables such as temperature, pressure and concentration, that must be ascertained so that a given system in equilibrium is completely defined.

For an illustration, we cite an example of water system. If only one phase is present (solid, liquid or gas), then we have to describe values of at least two parameters, namely, temperature and pressure, in order to define the system. For example, we can have liquid water under different conditions of temperature and pressure. Thus the water system has two degrees of freedom or it is bivariant. Now consider two phases in equilibrium, for example, solid and liquid water, i.e.



It is well known that the temperature at which a solid melts depends upon the external pressure. Thus if the value of one of the variables is fixed, the other will automatically have a definite value. The usual melting point of 0°C is referred to one atm external pressure. In order to describe the above equilibrium completely, we need to specify only one variable—either temperature or pressure; hence the system has one degree of freedom, i.e. it is an univariant system.

Alternatively, The degree of freedom of the system may be defined as the number of factors, such as temperature, pressure and concentration, which can be varied independently without altering the number of phases. For a single phase system, both temperature and pressure can be varied independently of each other and thus the system is bivariant. For two phases in equilibrium, only one variable can be varied as the other one will automatically have a fixed value and thus the system is univariant.

Consider now the situation at the triple point of water where all the three phases are in equilibrium with each other. This equilibrium is achieved at a temperature of 0.0098°C and a pressure of 4.58 mmHg . Any change in the values of these variables, converts the three-phase system into either two-phase or one-phase system. Thus, none of the variables can be changed so long as we

expressed
components
one fixed
considered
the above

system is the
ter, etc. In
 Na_2SO_4 ,
ter present
ses can be
id water:

represented
constituents.
positions of
sulphate-

and $\text{CO}_2\text{(g)}$

and gaseous
two species
three phases.
example:

want to have all the three phases in equilibrium. Thus the system has zero degree of freedom, or it is nonvariant (or invariant).

3.2 DERIVATION OF PHASE RULE

Phase rule is a general rule which is applicable to all types of reactive and nonreactive systems. In a nonreactive system, we simply have the distribution of various components in different phases without any complications such as the chemical reaction between the components. We derive the rule, first, for a nonreactive system and then show how the same rule can be used for a reactive system.

Nonreactive System

Consider a heterogeneous system of P phases at equilibrium containing in all C components. Let us start with the assumption that all the C components are present in all P phases. The system at equilibrium can be completely described if we know the values of the variables listed in Table 3.2.1.

Table 3.2.1 Number of Variables to be Known to Define a Given System Completely

<i>Variables</i>	<i>Number</i>
(i) Temperature of the system	1
(ii) Pressure of the system	1
(iii) Concentration of each and every component in all the P phases. For each phase, we will have to specify the values of C concentration terms and thus for P phases, we will have to specify in all PC values	PC
Total number of variables that need to be specified	$PC + 2$

Values of these variables can be obtained by solving the equations which are applicable when the system is at equilibrium. There are two types of equations which are available (Table 3.2.2).

Mathematically, we know that the number of variables that can be obtained from a set of equations is equal to the number of equations. Thus if there are as many equations as there are variables, then the temperature, pressure, and composition of the whole system in equilibrium can be determined. Such a system, as stated earlier, is the *nonvariant system*. If the number of variables exceeds the number of equations by one, then the equilibrium of the system cannot be determined until one of the variables is arbitrarily chosen. Such a system is called *monovariant (or univariant)* and has one degree of freedom. Thus we see that the excess of variables over equations, which is called the variance F of the system, is given as

$$\text{Variance} = \left(\begin{array}{l} \text{Total number of variables} \\ \text{that need to be specified} \end{array} \right) - \left(\begin{array}{l} \text{Total number of equations} \\ \text{that are available} \end{array} \right)$$

Thus, from Tables 3.2.1 and 3.2.2, we have

$$F = (PC + 2) - \{P + C(P - 1)\}$$

Table 3.2.2 Types and Number of Equations which are Available

Equations	Number
(i) Condition of sum of the amount fractions in any phase being equal to one,	
$x_{1(1)} + x_{2(1)} + \dots + x_{c(1)} = 1$	
$x_{1(2)} + x_{2(2)} + \dots + x_{c(2)} = 1$	
.....	
$x_{1(P)} + x_{2(P)} + \dots + x_{c(P)} = 1$	
There will be as many equations as the number of phases. Thus their total number will be P .	P
(ii) Thermodynamic condition of phase equilibria:	
According to this, the species will be distributed in such a manner that value of free energy of the system at equilibrium is minimum. The condition for this is that the chemical potential of any component will have the same value in all the P phases, i.e.	
$\mu_{1(1)} = \mu_{1(2)} = \dots = \mu_{1(P)}$	
$\mu_{2(1)} = \mu_{2(2)} = \dots = \mu_{2(P)}$	
... ..	
$\mu_{c(1)} = \mu_{c(2)} = \dots = \mu_{c(P)}$	
For each component, we will have $(P - 1)$ equations and thus for C components, the number of equations will be $C(P - 1)$	$C(P - 1)$
Total number of equations that are available	$P + C(P - 1)$

or $F = C - P + 2$
 or $F + P = C + 2$ (3.2.1)

Equation (3.2.1) is the phase rule which connects the number of phases and components with the variance of the system.

Verification of the Phase Rule

Let us verify the rule by calculating the variance of a one-component system:

- One phase only $P = 1, F = C - P + 2 = 1 - 1 + 2 = 2$
- Two phases in equilibrium $P = 2, F = C - P + 2 = 1 - 2 + 2 = 1$
- Three phases in equilibrium $P = 3, F = C - P + 2 = 1 - 3 + 2 = 0$

Thus, we see that the calculated degrees of freedom agree with experimentally observed values of the one-component water system.

The condition that all the components must be present in every phase, which has been used above in deriving the phase rule, is not altogether essential. The rule is applicable even if any component is missing in any of the phases. Say, for example, the component number 1 is missing from the phase number 1. We can once again derive the phase rule by following the procedure described earlier. Tables 3.2.3 and 3.2.4 describe the number of variables and equations for the present case.

ero degree

active and distribution such as the first, for a reactive

ng in all C onents are y described

Number
1
1
PC
$PC + 2$

tions which of equations

be obtained if there are pressure and red. Such a of variables the system sen. Such a of freedom. is called the

f equations le

Table 3.2.3 Number of Variables to be Known to Define a given System Completely

Variables	Number
(i) Temperature	1
(ii) Pressure	1
(iii) Concentration of components in different phases: For the first phase, $(C - 1)$ concentration terms and for the remaining $(P - 1)$ phases, C terms for each phase	$(C - 1) + C(P - 1)$
Total number of variables that need to be specified	$(C - 1) + C(P - 1) + 2$ $= CP + 1$

Table 3.2.4 Types and Number of Equations Available

Equations	Number
(i) Condition of amount fraction: $x_{2(1)} + x_{3(1)} + \dots + x_{c(1)} = 1$ $x_{1(2)} + x_{2(2)} + \dots + x_{c(2)} = 1$ $x_{1(P)} + x_{2(P)} + \dots + x_{c(P)} = 1$ There will again be in all P equations	P
(ii) Condition of thermodynamic equilibrium: For the component 1 $\mu_{1(2)} = \mu_{1(3)} = \dots = \mu_{1(P)}$ For other components $\mu_{2(1)} = \mu_{2(2)} = \dots = \mu_{2(P)}$ $\mu_{c(1)} = \mu_{c(2)} = \dots = \mu_{c(P)}$ There will be $(P - 2)$ equations for the component number 1, one less as compared to others as it is absent in the phase number 1	$(P - 2)$ $(C - 1)(P - 1)$
Total number of equations that are available	$P + (P - 2) + (C - 1)(P - 1)$ $= \{P + C(P - 1)\} - 1$

From Tables 3.2.3 and 3.2.4, we have

$$\text{Variance of the system} = \left(\begin{array}{c} \text{Total number} \\ \text{of variables} \end{array} \right) - \left(\begin{array}{c} \text{Total number of} \\ \text{equations} \end{array} \right)$$

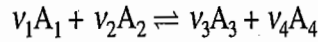
$$F = CP + 1 - [P + C(P - 1) - 1]$$

$$F = C - P + 2$$

The above equation is the same as Eq. (3.2.1). Thus we see that the effect of one of the components missing is that both the number of variables and the number of equations have been reduced by one. Thus the difference is the same and the phase rule remains unchanged

Reactive System

Let us consider a heterogeneous system composed of arbitrary amounts of C constituents. For the sake of simplicity we assume that four of the constituents are chemically active, capable of undergoing the reaction



As usual, we can write down the number of variables that are needed to describe the system completely and the number of equations that are available at equilibrium (Tables 3.2.5 and 3.2.6).

Table 3.2.5 Number of Variables to be Stated to Define a Given System Completely

Variables	Number
(i) Temperature	1
(ii) Pressure	1
(iii) Concentration of constituents in different phases	CP
Total number of variables	$CP + 2$

Table 3.2.6 Types and Number of Equations which are Available

Equations	Number
(i) Condition of amount fraction:	
$x_{1(1)} + x_{2(1)} + \dots + x_{c(1)} = 1$	
$x_{1(2)} + x_{2(2)} + \dots + x_{c(2)} = 1$	
.....	
$x_{1(P)} + x_{2(P)} + \dots + x_{c(P)} = 1$	P
(ii) Condition of thermodynamic equilibrium between phases:	
$\mu_{1(1)} = \mu_{1(2)} = \dots = \mu_{1(P)}$	
$\mu_{2(1)} = \mu_{2(2)} = \dots = \mu_{2(P)}$	
.....	
$\mu_{c(1)} = \mu_{c(2)} = \dots = \mu_{c(P)}$	$C(P - 1)$
(iii) Besides above two conditions, there is another condition which has to be satisfied for the reactive system, that is, the thermodynamic condition of reaction equilibrium. At equilibrium, the value of reaction potential, $\Delta_r \tilde{G}$ is zero. Thus	

$$0 = \Delta_r \tilde{G} = \sum_j v_j \mu_j \quad \text{where } v_j \begin{cases} \text{positive for products} \\ \text{negative for reactants} \end{cases}$$

This gives

$$0 = v_3 \mu_3 + v_4 \mu_4 - v_1 \mu_1 - v_2 \mu_2$$

or $v_1 \mu_1 + v_2 \mu_2 = v_3 \mu_3 + v_4 \mu_4$

Thus we get one more equation

Total number of equations that are available	$P + C(P - 1) + 1$
--	--------------------

completely
umber
1
1
 $C(P - 1)$
 $P - 1) + 2$
+ 1
umber
 P
- 2)
 $(P - 1)$
 $(P - 1)$
1
of one
umber
nd the



From Tables 3.2.5 and 3.2.6, we have

Variance = Number of variables - Number of equations

$$F = CP + 2 - [P + C(P - 1) + 1]$$

$$F = (C - 1) - P + 2$$

Similarly, if two independent reactions are possible, then we get

$$F = (C - 2) - P + 2$$

Generalizing, we have

$$F = (C - r) - P + 2$$

where r is the number of independent reactions that are taking place in the system.

**Example Involving
Chemical Equilibrium
with Additional
Restricting
Conditions**

Up to now, we have considered three kinds of equations amongst the variables T , P , and the x s. These are: (a) equations of phase equilibria; (b) equations of reaction equilibria; and (c) equations of the type $\sum_i x_i = 1$. Sometimes a chemical reaction takes place in such a manner that additional equations expressing further restriction upon the x s are to be satisfied. One such example, as cited earlier, is the decomposition of $\text{NH}_4\text{Cl}(s)$ in vacuum:

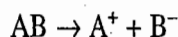


In the gaseous phase, the additional restriction which always exists is that

$$x_{\text{NH}_3} = x_{\text{HCl}}$$

This constitutes a fourth types of equation, which should also be included wherever it is applicable.

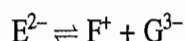
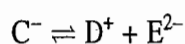
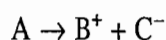
Another example of additional restricting equation among the x s is provided by the phenomenon of dissociation in solution. Suppose that we have a system in which a salt is dissolved in a solvent. Suppose that the salt dissociates according to the scheme given below:



All the ions remain in the solution and no precipitate is formed. Consequently, we have the additional restricting equation

$$x_{\text{A}^+} = x_{\text{B}^-}$$

If multi-dissociation takes place as shown below.



Final
Phas

Pro

Sol

then three independent restricting equations among the x s are available. These are

$$x_{B^+} = x_{G^{3-}} + x_{E^{2-}} + x_{C^-}$$

$$x_{D^+} = x_{G^{3-}} + x_{E^{2-}}$$

and $x_{F^+} = x_{G^{3-}}$

Adding these equations, we get the dependent equation

$$x_{B^+} + x_{D^+} + x_{F^+} = 3x_{G^{3-}} + 2x_{E^{2-}} + x_{C^-}$$

which expresses the condition of electrical neutrality.

Final Form of the Phase Rule

If, in general, a reactive system has r independent reactions and Z independent restrictive conditions, then the number of equations that are available at equilibrium is:

$$\begin{aligned} \text{Total number of equations} &= \left(\begin{array}{l} \text{Equations due to the} \\ \text{condition of amount fractions} \end{array} \right) + \left(\begin{array}{l} \text{Equations due to the} \\ \text{phase equilibria} \end{array} \right) \\ &+ \left(\begin{array}{l} \text{Equations due to the} \\ \text{chemical reactions} \end{array} \right) + \left(\begin{array}{l} \text{Equations due to} \\ \text{restricting conditions} \end{array} \right) \\ &= P + C(P - 1) + r + Z \end{aligned}$$

Thus the variance is

$$F = (CP + 2) - \{P + C(P - 1) + r + Z\}$$

or $F = (C - r - Z) - P + 2$

or $F = C' - P + 2$

where $C' = C - r - Z$ and is known as the number of components of the system. It is thus equal to the total number of constituents present in the system less the number of independent chemical reactions and the number of independent restricting equations. With this definition, we have put the phase rule in the form that is applicable for a nonreactive system.

Problem 3.2.1

Show explicitly without using the phase rule that the one-component system has (1) $F = 2$ when $P = 1$, (2) $F = 1$ when $P = 2$, and (3) $F = 0$ when $P = 3$.

Solution

For a one-component system, we usually state the values of two variables, namely, temperature and pressure, in order to define it completely. The concentration term is not stated as it has a constant value for a given component. For example, water has a concentration of $55.56 \text{ mol dm}^{-3}$ ($= 1000 \text{ g dm}^{-3}/18 \text{ g mol}^{-1}$ at $t = 4^\circ \text{C}$ and $p = 1 \text{ atm}$) when present in the liquid state and in the gaseous form (assumed to be ideal) it is

$$(n/V) = p/RT$$

Now if we have only one phase, then two variables T and p will have to be stated and thus its variance is two. If the number of phases at equilibrium are two, then we have one relation

$$\mu_{(1)}(T, p) = \mu_{(2)}(T, p)$$

where $\mu_{(1)}$ and $\mu_{(2)}$ are the chemical potentials in phases 1 and 2, respectively. Thus, we have one relation connecting T and p and we have seen earlier that it is Clapeyron equation. Hence if one variable is stated, then the other one can be calculated from the above relation and thus the variance is only one.

For three phases in equilibrium, two equations are available:

$$\mu_{(1)} = \mu_{(2)} \quad \text{and} \quad \mu_{(2)} = \mu_{(3)}$$

Thus the values of the two variables, namely, temperature and pressure, can be obtained from the above relations and therefore the system is nonvariant.

3.3 SOME TYPICAL EXAMPLES TO COMPUTE THE NUMBER OF COMPONENTS

We have earlier defined the number of components as the minimum number of independent chemical constituents required to express the composition of each and every phase of a system. This definition is completely in agreement with the definitions given below for the reactive and the nonreactive systems.

For nonreactive system:	Number of components = Number of constituents
For reactive system:	Number of components = (Number of constituents)
	– (Number of chemical reactions)
	– (Number of restricting conditions)

Let us illustrate the above consistency with the help of a few typical examples.

Sodium Sulphate-Water System

As stated earlier, it is a two-component system. It can be shown that so long as no precipitate is formed by virtue of a reaction between salt and water, the number of components is always two no matter what else is assumed to take place in the solution. We consider below four typical assumptions regarding the nature of the system.

Neglecting all dissociations There are two constituents, no chemical reaction, and no restricting equation. Hence

$$C' = C - r - Z = 2 - 0 - 0 = 2$$

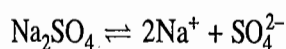
Complete dissociation of the salt The total number of constituents present in the solution are three: Na^+ , SO_4^{2-} and H_2O . Since there is one restricting condition,

$$x_{\text{Na}^+} = 2x_{\text{SO}_4^{2-}}$$

we have

$$C' = C - r - Z = 3 - 0 - 1 = 2$$

Partial dissociation of the salt The dissociation may be represented as



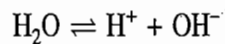
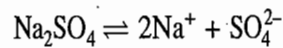
Now the system possesses four constituents, namely, Na_2SO_4 , Na^+ , SO_4^{2-} and H_2O . There is one reaction and one restricting condition:

$$x_{\text{Na}^+} = 2x_{\text{SO}_4^{2-}}$$

Thus, we have

$$C' = C - r - Z = 4 - 1 - 1 = 2$$

Dissociation of water also We have the following two equilibrium reactions:



The different constituents are Na_2SO_4 , Na^+ , SO_4^{2-} , H_2O , H^+ and OH^- , a total of six. There are two reactions and two restricting conditions:

$$x_{\text{Na}^+} = 2x_{\text{SO}_4^{2-}} \quad \text{and} \quad x_{\text{H}^+} = x_{\text{OH}^-}$$

Thus $C' = C - r - Z = 6 - 2 - 2 = 2$

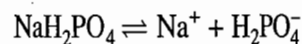
Sodium Dihydrogen Phosphate-Water System

It can be shown that this system is a two-component system irrespective of whatever chemical changes may be considered in the solution except that no precipitate is formed.

Neglecting all dissociations There are two constituents, no chemical reaction and no restricting equation. Hence

$$C' = C - r - Z = 2 - 0 - 0 = 2$$

Single dissociation of the salt We may represent the dissociation as

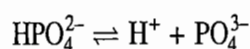
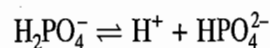
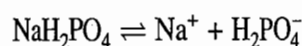


There are four constituents (NaH_2PO_4 , H_2O , Na^+ and H_2PO_4^-), one chemical reaction and one restricting equation:

$$x_{\text{Na}^+} = x_{\text{H}_2\text{PO}_4^-}$$

Hence $C' = C - r - Z = 4 - 1 - 1 = 2$

Multiple dissociation of the salt The multistep dissociation may be represented as



There are seven constituents, NaH_2PO_4 , Na^+ , H_2PO_4^- , H^+ , HPO_4^{2-} , PO_4^{3-} and H_2O .

Number of chemical reactions = 3

Number of independent restricting equations = 2:

$$x_{\text{Na}^+} = x_{\text{PO}_4^{3-}} + x_{\text{HPO}_4^{2-}} + x_{\text{H}_2\text{PO}_4^-} \quad (3.3.1)$$

$$x_{\text{H}^+} = 2x_{\text{PO}_4^{3-}} + x_{\text{HPO}_4^{2-}} \quad (3.3.2)$$

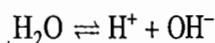
(Note: One may consider the charge balance expression

$$x_{\text{Na}^+} + x_{\text{H}^+} = x_{\text{H}_2\text{PO}_4^-} + 2x_{\text{HPO}_4^{2-}} + 3x_{\text{PO}_4^{3-}}$$

Equation (3.3.2) may be obtained by subtracting Eq. (3.3.1) from the above expression).

Thus $C' = C - r - Z = 7 - 3 - 2 = 2$

Dissociation of water also Besides the dissociation given in part (iii), we also have



There are total eight constituents, NaH_2PO_4 , Na^+ , H_2PO_4^- , H^+ , HPO_4^{2-} , PO_4^{3-} , OH^- and H_2O .

Number of chemical reactions = 4

Number of restricting equations = 2:

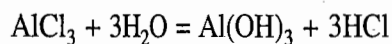
$$x_{\text{Na}^+} = x_{\text{PO}_4^{3-}} + x_{\text{HPO}_4^{2-}} + x_{\text{H}_2\text{PO}_4^-}$$

$$x_{\text{H}^+} = 2x_{\text{PO}_4^{3-}} + x_{\text{HPO}_4^{2-}} + x_{\text{OH}^-}$$

Thus $C' = C - r - Z = 8 - 4 - 2 = 2$

Aluminium Chloride-Water System

In this case, AlCl_3 combines with water according to the equation:



Some of the $\text{Al}(\text{OH})_3$ is precipitated out. The dissociation of the various species will be as follows:



Total number of constituents = 8:



Number of chemical reactions = 4

Exam

Solu

Since some of the $\text{Al}(\text{OH})_3$ has precipitated out, there is only one restricting equation, namely, that expressing the electrical neutrality of the solution

$$3x_{\text{Al}^{3+}} + x_{\text{H}^+} = x_{\text{OH}^-} + x_{\text{Cl}^-}$$

(3.3.1)

Thus the number of components = $8 - 1 - 4 = 3$.

If we assume complete dissociation of AlCl_3 and that of HCl , we will have

(3.3.2)

$$C = 6, r = 2 \text{ and } Z = 1$$

Thus $C' = C - Z - r = 6 - 1 - 2 = 3$

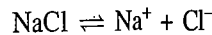
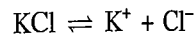
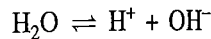
Example 3.3.1

Show that an aqueous system containing K^+ , Na^+ and Cl^- is a three-component system whereas K^+ , Na^+ , Cl^- and Br^- is a four-component system. What are the number of components if the salts are present in equal amounts?

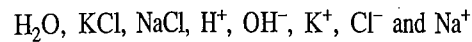
Solution

(a) K^+ , Na^+ , Cl^- and H_2O system: In this case, we have

Number of reactions, $r = 3$:



Number of constituents, $C = 8$:



Number of restricting equations, $Z = 2$:

$$\text{Electrical neutrality } x_{\text{Na}^+} + x_{\text{K}^+} + x_{\text{H}^+} = x_{\text{Cl}^-} + x_{\text{OH}^-}$$

$$\text{Water dissociation } x_{\text{H}^+} = x_{\text{OH}^-}$$

Hence, Number of components, $C' = C - r - Z = 8 - 3 - 2 = 3$

If the salts are present in equal amounts, then one more restricting equation exists, i.e.

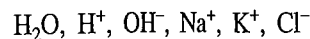
$$x_{\text{Na}^+} = x_{\text{K}^+}$$

Hence, here

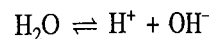
$$\text{Number of components, } C' = C - r - Z = 8 - 3 - 3 = 2$$

Alternatively, leaving KCl and NaCl on the basis that they are strong electrolytes, we have

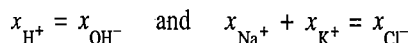
Number of constituents, $C = 6$:



Number of reactions, $r = 1$:

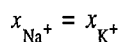


Number of restricting equations, $Z = 2$:



Hence, Number of components, $C' = C - r - Z = 6 - 1 - 2 = 3$

If the salts are present in equal amounts, then one more restricting equation exists, i.e.

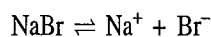


Hence, here

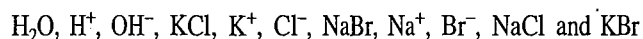
Number of components, $C' = C - r - Z = 6 - 1 - 3 = 2$

(b) K^+ , Na^+ , Cl^- , Br^- and H_2O system: In this case, we have


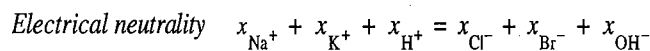
Number of reactions, $r = 5$;



Number of constituents, $C = 11$

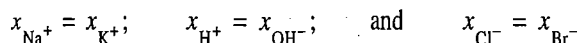


Number of restricting equations, $Z = 2$:



Hence, Number of components, $C' = C - r - Z = 11 - 5 - 2 = 4$

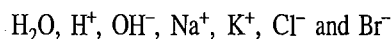
If the salts are present in equal amounts, then we have three independent restricting equations:



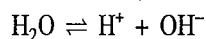
Hence, Number of components, $C' = C - r - Z = 11 - 5 - 3 = 3$

Alternatively, leaving KCl , NaBr , NaCl and KBr as they are strong electrolytes, we have:

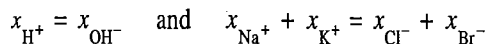
Number of constituents, $C = 7$:



Number of reactions, $r = 1$:



Number of restricting conditions, $Z = 2$:



Hence, Number of components, $C' = C - r - Z = 7 - 1 - 2 = 4$

Example

Solution

Example

Solution

If the salts are present in equal amounts, then we have three independent restricting equations:

$$x_{\text{Na}^+} = x_{\text{K}^+}; \quad x_{\text{Cl}^-} = x_{\text{Br}^-} \quad \text{and} \quad x_{\text{H}^+} = x_{\text{OH}^-}$$

Hence, Number of components, $C' = C - r - Z = 7 - 1 - 3 = 3$

Example 3.3.2

Show that $\text{NH}_4\text{Cl}(\text{s}) - \text{NH}_3(\text{g}) - \text{HCl}(\text{g})$ system in which $p_{\text{NH}_3} = p_{\text{HCl}}$ is a one-component system whereas when $p_{\text{NH}_3} \neq p_{\text{HCl}}$ is a two-component system.

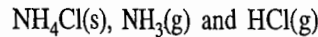
Solution

(a) $\text{NH}_4\text{Cl}(\text{s}) - \text{NH}_3(\text{g}) - \text{HCl}(\text{g})$ when $p_{\text{NH}_3} = p_{\text{HCl}}$. The condition of $p_{\text{NH}_3} = p_{\text{HCl}}$ would arise only when the gases are obtained by the sublimation of $\text{NH}_4\text{Cl}(\text{s})$. Thus, we have

Number of reactions, $r = 1$:



Number of constituents, $C = 3$:



Number of restricting equations, $Z = 1$:

$$p_{\text{NH}_3} = p_{\text{HCl}}$$

Hence, Number of components, $C' = C - Z - r = 3 - 1 - 1 = 1$

(b) $\text{NH}_4\text{Cl}(\text{s}) - \text{NH}_3(\text{g}) - \text{HCl}(\text{g})$ when $p_{\text{NH}_3} \neq p_{\text{HCl}}$: Here, we have

Number of reactions, $r = 1$

Number of constituents, $C = 3$

Number of restricting equations, $Z = 0$

Hence, Number of components, $C' = C - Z - r = 3 - 0 - 1 = 2$

Example 3.3.3

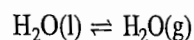
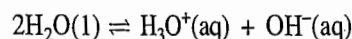
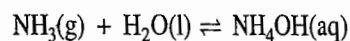
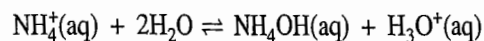
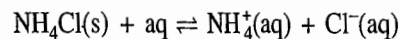
Determine the number of components in a system containing $\text{NH}_4\text{Cl}(\text{s})$, $\text{NH}_4^+(\text{aq})$, $\text{Cl}^-(\text{aq})$, $\text{H}_2\text{O}(\text{l})$, $\text{H}_3\text{O}^+(\text{aq})$, $\text{H}_2\text{O}(\text{g})$, $\text{NH}_3(\text{g})$, $\text{OH}^-(\text{aq})$, and $\text{NH}_4\text{OH}(\text{aq})$.

Solution

We have

Number of constituents, $C = 9$

Number of equilibrium reactions, $r = 5$:



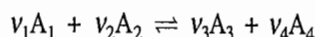
Number of restricting conditions, $Z = 1$:

$$x_{\text{NH}_4^+} + x_{\text{H}_3\text{O}^+} = x_{\text{Cl}^-} + x_{\text{OH}^-} \quad \text{(condition of electroneutrality)}$$

Hence, Number of components, $C' = C - r - Z = 9 - 5 - 1 = 3$

Example 3.34

Consider a homogeneous mixture of four ideal gases capable of undergoing the reaction

**Solution**

Determine the components if we start with (a) arbitrary amounts of A_1 and A_2 only, (b) arbitrary amounts of all the four gases, and (c) v_1 moles of A_1 and v_2 moles of A_2 only.

(a) Number of constituents, $C = 4$:

A_1, A_2, A_3 and A_4

Number of reactions, $r = 1$

Number of restrictions, $Z = 1$:

$$[A_3] : [A_4] :: v_3 : v_4$$

Hence, Number of components, $C' = C - r - Z = 4 - 1 - 1 = 2$

(b) Number of constituents, $C = 4$

Number of reactions, $r = 1$

Number of restrictions, $Z = 0$

Number of components, $C' = C - r - Z = 4 - 1 - 0 = 3$

(c) Number of constituents, $C = 4$

Number of reactions, $r = 1$

Number of restrictions, $Z = 2$

$$[A_1] : [A_2] :: v_1 : v_2 \text{ and } [A_3] : [A_4] :: v_3 : v_4$$

Hence, Number of components, $C' = C - r - Z = 4 - 1 - 2 = 1$

REVISIONARY PROBLEMS

3.1 (a) Explain with suitable examples the terms involved in the phase rule

$$F + P = C + 2$$

(b) What do you understand by the reactive and nonreactive systems?

3.2 (a) Derive the expression of phase rule as applicable to a nonreactive system.

(b) Prove that the expression of phase rule remains unchanged even if one of the components is missing in some of the phases present at equilibrium.

3.3 (a) What is the difference between the number of constituents and the number of components of a given system?

(b) Show that for the reactive systems, the form of the phase rule remains unaltered provided we define the number of components as

$$C' = C - r - Z$$

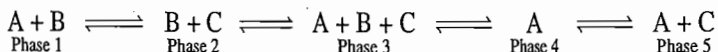
where C is the number of constituents present, r is the number of independent reactions, and Z is the number of independent restricting equations.

TRY YOURSELF PROBLEMS

3.1 Show explicitly without using the phase rule that the two-component system has (1) $F = 3$ if $P = 1$; (2) $F = 2$ if $P = 2$; (3) $F = 1$ if $P = 3$; and (4) $F = 0$ if $P = 4$.

3.2 Show that it is not possible to have more than three phases at equilibrium for a one-component system.

- 3.3 Blue copper sulphate crystals decompose and release their water of hydration when heated. How many phases and components are present in an otherwise empty heated vessel?
- 3.4 The absence of a few components in some phases does not alter the phase rule relation, $F + P - C + 2$. Derive the above conclusion by taking the following system of three components distributed over five phases:



- 3.5 How many degrees of freedom, number of phases and number of components are present in each of the following systems:
- Solid carbon in equilibrium with gaseous CO, CO₂ and O₂ at 100 °C.
 - Solid CaCO₃ is heated in a sealed tube.
 - I₂ dispersed between liquid water and CCl₄ at 1 atm pressure with no solid I₂ present.
 - CuSO₄ · 5H₂O(s) ⇌ CuSO₄ · 3H₂O(s) + 2H₂O(g)
 - Fe(s) + H₂O(g) ⇌ FeO(s) + H₂(g)
 - Liquid and its vapour in equilibrium with each other.
 - An aqueous solution of NaCl and Na₂SO₄.
 - An aqueous solution of KCl and Na₂SO₄.
 - CH₃COONH₄(s), CH₃COO⁻(aq), NH₄⁺(aq), H₃O⁺(aq), OH⁻(aq), CH₃COOH(aq), H₂O(l), H₂O(g), taking hydrolysis into account.
 - An azeotrope in a binary system.
 - Water vapour heated to 2 000 K so that H₂O, H₂, O₂, OH, O and H are present at equilibrium.
 - An arbitrary mixture of H₂ and O₂ has been heated to 2 000 K, so that H₂O, H₂, O₂, OH, H and O are present at equilibrium.
 - A pure substance at its critical point.
 - An aqueous solution containing LiCl, NaCl, KCl and CsCl.

3.6 Suppose that a one-component system exhibits a gas phase, a liquid phase and three solid modifications. How many one-, two-, three-, and four-phase, equilibria are theoretically possible?

3.7 Compute the number of components in the following systems:

- A solution containing Na⁺, Cl⁻, Ag⁺, NO₃⁻, AgCl(s) and H₂O.
- A solution containing H⁺, OH⁻, Na⁺, Cl⁻, Ag⁺, NO₃⁻, AgCl(s) and H₂O.
- A solution containing H₂O, Na⁺, Cl⁻, K⁺, NO₃⁻, NH₄⁺, NH₃, H⁺ and OH⁻.
- An aqueous solution containing H₃PO₄, H₂PO₄⁻, HPO₄²⁻, PO₄³⁻, Na⁺, and H⁺ at 1 atm pressure.
- NH₄Cl(s), NH₄⁺(aq), Cl⁻(aq), H₂O(l), H₃O⁺(aq), H₂O(g), NH₃(g), OH⁻(aq), and NH₄OH(aq).

(Ans. (i) 4, (ii) 4, (iii) 6, (iv) 3, (v) 3)

4

Solutions

4.1 IDEAL SOLUBILITY OF GASES IN LIQUIDS

Application of the Phase Rule

Solubility of a gas in a liquid depends on temperature and pressure. Therefore, both these variables should be stated while expressing the solubility of a gas in a liquid. This conclusion can also be arrived at with the help of the phase rule. In the present case, we have

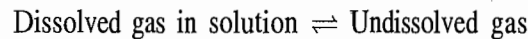
$$\begin{aligned} \text{Number of components, } C &= 2 && \text{(Gas and liquid)} \\ \text{Number of phases, } P &= 2 && \text{(Liquid phase and gaseous phase)} \end{aligned}$$

Thus Degrees of freedom of the system, $F = C + P - 2 = 2 + 2 - 2 = 2$

that is, the system is bivariant and values of two parameters, namely, temperature and pressure, must be stated in order to define the system completely.

Thermodynamic Derivation of Ideal Law of Solubility of Gases

At the saturation point, where no more gas dissolves in a solution, there exists an equilibrium between the dissolved gas and the undissolved gas, i.e.



The thermodynamic condition of equilibrium is

$$\mu_{2(\text{sol})}(T, p, x_2) = \mu_{2(\text{g})}^*(T, p) \quad (4.1.1)$$

where x_2 is the amount fraction of the gas in the saturated solution. If the solution is assumed to be ideal, then

$$\mu_{2(\text{soln})} = \mu_{2(1)}^* + RT \ln x_2 \quad (4.1.2)^\dagger$$

Substituting Eq. (4.1.2) in Eq. (4.1.1), we get

$$\mu_{2(1)}^* + RT \ln x_2 = \mu_{2(\text{g})}^*$$

$$\text{or } \ln x_2 = \frac{\mu_{2(\text{g})}^* - \mu_{2(1)}^*}{RT} = \frac{\Delta_{\text{vap}}\mu_2^*}{RT} \quad (4.1.3)$$

[†]If the solution is not ideal but an ideally dilute solution, then $\mu_{2(1)}^*$ is replaced by $\mu_{2(1, \text{hs})}$ where $\mu_{2(1, \text{hs})}$ represents the chemical potential of liquid solute in a hypothetical state. See, section 4.6 for detail. In applying Eq. (4.1.2), the temperature of the gas is below its critical temperature so that the gas exists in the liquid form in the solution.

Fact
Idea

Corr
Soli
Terr

According to Eq. (4.1.3), the amount fraction of solute in a saturated solution is a function of temperature of the solution. To determine this functionality, we differentiate Eq. (4.1.3) with respect to x_2 , keeping p constant. Thus, we have

$$\frac{1}{x_2} = \frac{1}{R} \left[\frac{\partial(\Delta_{\text{vap}}\mu_2^*/T)}{\partial T} \right]_p \left[\frac{\partial T}{\partial x_2} \right]_p$$

Using Gibbs-Helmholtz equation, we get

$$\frac{1}{x_2} = - \frac{\Delta_{\text{vap}}H_{2,m}}{RT^2} \left(\frac{\partial T}{\partial x_2} \right)_p$$

or
$$\frac{dx_2}{x_2} = - \frac{\Delta_{\text{vap}}H_{2,m}}{R} \frac{dT}{T^2} \quad (p \text{ constant}) \quad (4.1.4)$$

To determine the variation of x_2 with T , we integrate the above expression to give

$$\int_1^{x_2} \frac{dx_2}{x_2} = - \int_{T_b^*}^T \frac{\Delta_{\text{vap}}H_{2,m}}{R} \frac{dT}{T^2} \quad (4.1.5)$$

where T_b^* is the boiling point of the pure liquid solute ($x_2 = 1$) and x_2 is the solubility of the solute at temperature T of the solution.

Assuming $\Delta_{\text{vap}}H_{2,m}$ to be independent of temperature, Eq. (4.1.5) yields

$$\ln x_2 = \frac{\Delta_{\text{vap}}H_{2,m}}{R} \left(\frac{1}{T} - \frac{1}{T_b^*} \right) \quad (4.1.6)$$

Equation (4.1.6) is an expression of the *ideal law of solubility*. According to this law, the solubility of a substance depends only on the characteristics of the gas through $\Delta_{\text{vap}}H_{2,m}$ and T_b^* and is independent of the nature of the solvent.

Factors Determining Ideal Solubility

The following dependence on the solubility of the gases may be concluded.

- A comparatively lesser value of T_b^* makes the right side of Eq. (4.1.6) more negative indicating the lesser value of x_2 (i.e. lesser is the solubility). For example, hydrogen and helium are much less soluble as compared to carbon dioxide ammonia and sulphur dioxide.
- A comparatively larger value of T_b^* makes the right side of Eq. (4.1.6) lesser negative indicating the larger value of x_2 (i.e. larger is the solubility).
- A comparatively lesser value of $\Delta_{\text{vap}}H_{2,m}$ makes the right side of Eq. (4.1.6) lesser positive indicating the lesser value of x_2 (i.e. lesser is the solubility).
- Increasing the value of T makes the right side lesser positive indicating the lesser value of x_2 (i.e. lesser is the solubility).

Correlating Solubilities at Two Temperatures

If x_2 and x_2' are the solubilities of gases at temperatures T_1 and T_2 , respectively, we may write

e. Therefore, lity of a gas of the phase

seous phase)

2 - 2 = 2

temperature tely.

there exists s, i.e.

(4.1.1)

tion. If the

(4.1.2)†

(4.1.3)

d by $\mu_{2(1,hs)}$ al state. See, w its critical

$$\ln x_2 = \frac{\Delta_{\text{vap}}H_{2,m}}{R} \left(\frac{1}{T_1} - \frac{1}{T_b^*} \right) \quad (4.1.7)$$

$$\ln x_2' = \frac{\Delta_{\text{vap}}H_{2,m}}{R} \left(\frac{1}{T_2} - \frac{1}{T_b^*} \right) \quad (4.1.8)$$

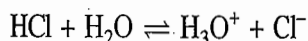
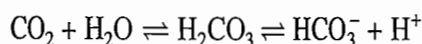
Subtracting Eq. (4.1.7) from Eq. (4.1.8), we get

$$\ln \frac{x_2'}{x_2} = \frac{\Delta_{\text{vap}}H_{2,m}}{R} \left(\frac{1}{T_2} - \frac{1}{T_1} \right) \quad (4.1.9)$$

Equation (4.1.9) relates the solubility of a gas in a solvent at two temperatures of the solution.

Exception to Ideal Solubility

It may be pointed out here that Eq. (4.1.6) represents ideal gas solubility and is independent of the nature of the solvent. Solubility of a gas which can interact with the solvent is very much enhanced. That is why gases like ammonia, carbon dioxide, sulphur dioxide and hydrochloric acid are very easily soluble in water. The interaction reactions are:



Coefficients for Expressing Solubility of a Gas in a Liquid

Solubilities of gases can be expressed either in terms of *absorption coefficient* or the *coefficient of solubility*.

Absorption Coefficient

The absorption coefficient was suggested by R. Bunsen and is known as *Bunsen absorption coefficient*. At a given temperature, this coefficient is defined as *the volume of gas, reduced to STP (0 °C and 1 atm pressure), that has been dissolved by unit volume of solvent under a partial pressure of 1 atm of the gas*. If v_0 is the volume of gas dissolved, reduced to STP, by the volume V of the solvent under the partial pressure p of the gas, the absorption coefficient is given by

$$\alpha = \frac{v_0/p}{V} \quad (4.1.10)$$

The amount of gas dissolved by unit volume of solvent under the partial pressure p is

$$c = \frac{(v_0/v_m)}{Vp} = \frac{\alpha}{v_m} \quad (4.1.11)$$

where v_m is the molar volume of the gas at STP.

Coefficient of Solubility

The second unit of *coefficient of solubility* was suggested by W. Ostwald and is defined as *the volume of gas measured under given conditions of temperature*

Relati
the T_b

4.2

Effec
Henry

Exam

Solut

(4.1.7)

and pressure, that has been dissolved in a unit volume of the solvent. If v is the volume of gas dissolved by the volume V of the solvent, then the coefficient of solubility is

(4.1.8)

$$\beta = \frac{v}{V} \quad (4.1.12)$$

Relation between the Two Coefficients

Assuming ideal behaviour for gas, we can write

(4.1.9)

$$\frac{pv}{nRT} = \frac{(1 \text{ atm})v_0}{nR(273 \text{ K})}$$

Thus

$$v = \frac{v_0 T}{(273 \text{ K})(p/\text{atm})} \quad (4.1.13)$$

Substituting Eq. (4.1.13) in Eq. (4.1.12), we get

$$\beta = \frac{v}{V} = \frac{v_0 T}{(273 \text{ K})(p/\text{atm})} \cdot \frac{1}{V} = \left(\frac{v_0}{Vp} \right) \frac{T(1 \text{ atm})}{(273 \text{ K})}$$

or

$$\beta = \alpha \frac{T(1 \text{ atm})}{(273 \text{ K})} \quad (4.1.14)$$

4.2 EFFECT OF PRESSURE AND TEMPERATURE ON THE SOLUBILITY OF GASES

Effect of Pressure – Henry's Law

The solubility of a gas in a liquid increases with the increase in the pressure of the gas. The quantitative relation connecting the solubility with pressure was stated by W. Henry and is known as *Henry's law*. The law states that *at a given temperature the mass of dissolved gas in a given volume of solvent is proportional to the pressure of the gas with which it is in equilibrium.*[†] If m is the mass of the gas dissolved by unit volume of solvent at equilibrium pressure p , then according to Henry's law, we have

$$m \propto p$$

$$\text{or } m = kp \quad (4.2.1)$$

where k is the constant of proportionality. Thus, if a graph of the solubility and the external equilibrium pressure is plotted, a straight line would be observed (Fig. 4.2.1).

Example 4.2.1

At 273.15 K, 500 cm³ of water dissolves 15.03 cm³ of CH₄(STP) under a partial pressure of methane of 1 atm. If Henry's law holds, what pressure is required to dissolve 0.001 mol methane in 300 cm³ water?

Solution

Amount of methane dissolved in 500 cm³ of water under a partial pressure of 1 atm of methane is

[†]For the solubility of a gas from a mixture of gases, the equilibrium pressure is the partial pressure of the gas.

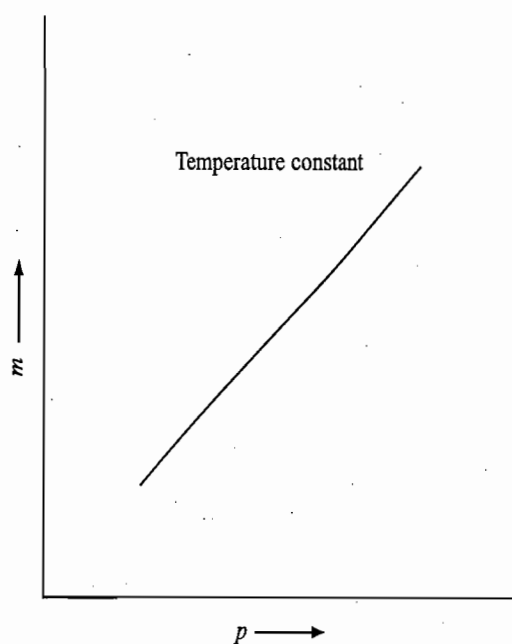


Fig. 4.2.1 Variation of solubility with pressure

$$n = \frac{v_0}{V_m} = \frac{15.03 \text{ cm}^3}{22414 \text{ cm}^3 \text{ mol}^{-1}} = 6.706 \times 10^{-4} \text{ mol}$$

Amount of methane dissolved per unit volume of water is

$$n' = \frac{6.706 \times 10^{-4} \text{ mol}}{500 \text{ cm}^3} = 1.341 \times 10^{-6} \text{ mol cm}^{-3}$$

Amount of methane to be dissolved per unit volume of water is

$$n'' = \frac{0.001 \text{ mol}}{300 \text{ cm}^3} = 3.333 \times 10^{-6} \text{ mol cm}^{-3}$$

Since mass of gas \propto amount of gas, we can write Henry's law as

$$n'' = k'p'' \quad \text{and} \quad n' = k'p'$$

$$\begin{aligned} \text{Hence, } p'' &= \left(\frac{n''}{n'} \right) p' = \left(\frac{3.33 \times 10^{-6} \text{ mol cm}^{-3}}{1.341 \times 10^{-6} \text{ mol cm}^{-3}} \right) (1 \text{ atm}) \\ &= 2.485 \text{ atm} \end{aligned}$$

A Consequence of Henry's Law

A direct consequence of Henry's law is that the volume of an ideal gas, measured at the experimental pressure, that is dissolved in a given volume of the solvent has a constant value. This can be proved as follows.

If v is the dissolved volume of the gas, measured at the experimental pressure p , in a given volume of the solvent at temperature T , then according to ideal gas law, we have

$$pv = nRT = \frac{m}{M} RT$$

$$\text{or } v = \left(\frac{m}{p} \right) \frac{RT}{M}$$

Substituting the value of (m/p) from Eq. (4.2.1), we have

$$v = k \frac{RT}{M}$$

Since the right side of the above equation is constant for a given gas (M constant) at a given temperature (T constant), it follows that the volume of the gas dissolved in a given volume of the solvent has a constant value.

Thermodynamic Derivation of Henry's Law

The thermodynamic condition of equilibrium between dissolved and undissolved gases is

$$\mu_{2(\text{sol})}(T, p, x_2) = \mu_{2(\text{g})}^*(T, p) \quad (4.2.2)$$

If the solution is considered to be ideally dilute, we have

$$\mu_{2(\text{sol})} = \mu_{2(1, \text{hs})}^* + RT \ln x_2$$

where the subscript 2(1, hs) represents hypothetical state of pure solute in the liquid phase.[†] If the gas is assumed to be ideal, then

$$\mu_{2(\text{g})}^* = \mu_{2(\text{g})}^{\circ} + RT \ln (p/p^{\circ})$$

With these, Eq. (4.2.2) becomes

$$\mu_{2(1, \text{hs})}^* + RT \ln x_2 = \mu_{2(\text{g})}^{\circ} + RT \ln (p/p^{\circ})$$

$$\text{or} \quad \ln \frac{x_2}{(p/p^{\circ})} = \frac{\mu_{2(\text{g})}^{\circ} - \mu_{2(1, \text{hs})}^*}{RT} \quad (4.2.3)$$

At a constant temperature, the right side of Eq. (4.2.3) is a constant. Hence

$$\ln \frac{x_2}{(p/p^{\circ})} = \text{constant}$$

$$\text{or} \quad x_2 = (\text{constant}) p \quad (4.2.4)$$

For a dilute solution, we can write

$$x_2 = \frac{n_2}{n_1 + n_2} \approx \frac{n_2}{n_1} = \frac{m_2/M_2}{n_1} = \left(\frac{1}{M_2 n_1} \right) m_2$$

$$\text{i.e.} \quad x_2 \propto m_2$$

With this, Eq. (4.2.4) becomes

$$m_2 = kp \quad (\text{Eq. 4.2.1})$$

which is Henry's law.

[†]See Section 4.6 for the hypothetical state of liquid solute.

Applicability of Henry's Law

It will be shown that Henry's law is a special case of more generalized laws such as the distribution law and Raoult's law. Since these laws are applicable only for ideal systems, it is, therefore, expected that Henry's law is also applicable only to ideal systems.

A solution of gas in liquid will show ideal behaviour, provided the solubility of the gas in the liquid is low (i.e. dilute solution) and that the gas itself shows ideal behaviour. The real gases are known to behave ideally under the conditions of high temperature and low pressure, but show deviations at low temperature and high pressure. The deviations are pronounced for easily liquefiable gases. Thus, it is expected that Henry's law will be applicable for low soluble gases at high temperatures and low pressures. The deviations from Henry's law are expected to be large at low temperatures and high pressures. These facts are in agreement with the experimental results.

Henry's Law and the Distribution Law

It can be shown that Henry's law is a special case of the distribution law.[†] According to Henry's law, we have

$$\frac{m}{p} = k \quad (4.2.5)$$

where m is the mass of the gas dissolved by a unit volume of the solvent, p is the equilibrium pressure of the gas, and k is constant whose value depends upon the temperature of the system.

The term m in Eq. (4.2.5) is the concentration term of the dissolved gas expressed in mass of the gas dissolved per unit volume of solvent. It is proportional to the concentration expressed as amount of gas dissolved per unit volume of solvent or per unit volume of solution, if it is assumed that no change of volume occurs when the gas dissolves in the solvent. Similarly, the pressure p of the gas will be proportional to the concentration of the gas expressed as amount of gas per unit volume of the gaseous phase. Thus Eq. (4.2.5) can be written as

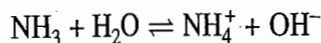
$$\frac{\text{Concentration of gas in liquid phase}}{\text{Concentration of gas in gaseous phase}} = \text{Constant} \quad (4.2.6)$$

The value of constant depends only on temperature and not on pressure of the gas.

Equation (4.2.6) is, in fact, the statement of the distribution law. It may be stated that the distribution law is applicable only for common species in both the phases. Thus a gas which undergoes a change in a solvent, such as change in molecular complexity, compound formation between solute and solvent, ionization, etc., will not follow the conventional definition of Henry's law as given by Eq. (4.2.6). However, if concentration of the gas in the liquid phase which exists in the same form as that of the gaseous phase, is determined and substituted in Eq. (4.2.6), the ratio is found to be independent of the pressure of the gas. Thus

[†]See Section 4.19

Henry's law is still applicable provided concentration of the gas in the liquid phase, which exists in the same form as that of gaseous phase, is taken into consideration. One example is the dissolution of ammonia in water, where the following reaction takes place:



If c_1 and c_g represent the total concentrations of ammonia in the liquid and gaseous phases, respectively, then c_1/c_g is not constant. If α is the fraction of the dissolved ammonia which has undergone reaction with water, then the ratio $c_1(1 - \alpha)/c_g$ is found to have a constant value irrespective of the total amount of NH_3 that has been dissolved.

Effect of Temperature on Solubility of Gases in Water

The solubility of gases in water is generally exothermic in nature. In accordance to Le-Chatelier principle, their solubility decreases with increase in temperature. If Henry's law is interpreted as

$$K = \frac{\text{Concentration of gas in liquid phase}}{\text{Concentration of gas in gaseous phase}} \quad (\text{Eq. 4.2.6})$$

then the effect of temperature on K may be expressed by the van't Hoff equation:

$$\frac{d \ln K}{dT} = \frac{\Delta_r H_m^\circ}{RT^2} \quad (4.2.7)$$

where $\Delta_r H_m^\circ$ is the differential enthalpy of solution for 1 mol of the gas in the saturated solution at temperature T . If $\Delta_r H_m^\circ$ is assumed to be independent of temperature, the integrated form of the above expression is

$$\ln \frac{K_2}{K_1} = -\frac{\Delta_r H_m^\circ}{R} \left(\frac{1}{T_2} - \frac{1}{T_1} \right) \quad (4.2.8)$$

For the constant external pressure of the gas, we find from Eq. (4.2.6) that

$$K \propto (c_{\text{gas}})_{\text{liquid}}$$

Hence, Eq. (4.2.8) may be written as

$$\ln \frac{c_2}{c_1} = -\frac{\Delta_r H_m^\circ}{R} \left(\frac{1}{T_2} - \frac{1}{T_1} \right) \quad (4.2.9)^\dagger$$

where c_1 and c_2 are the solubilities of the gas at temperatures T_1 and T_2 , respectively.

Since Bunsen absorption coefficient (α), is directly proportional to the concentration of gas in the solution, Eq. (4.2.9) may also be expressed as

[†]Comparing Eqs (4.1.9) and (4.2.9) we find that $\Delta_r H_m^\circ = -\Delta_{\text{vap}} H_{2, m}$ for an ideal solution.

$$\ln \frac{\alpha_2}{\alpha_1} = -\frac{\Delta_r H_m}{R} \left(\frac{1}{T_2} - \frac{1}{T_1} \right) \quad (4.2.10)$$

According to Eqs (4.2.9) and (4.2.10), it follows that the graph between $\ln c_2$ (or $\ln \alpha$) and $1/T$ is linear with the slope equal to $(-\Delta_r H_m/R)$.

4.3 HENRY'S LAW AND RAOULT'S LAW

Henry's Law in Amount Fraction Form

Equation (4.2.4) is, in fact, Henry's law expressed in amount fraction form. This, however, may be obtained from the conventional Henry's law expressed in the mass of the gas dissolved in the given volume of solution. If m_2 is the mass of the gas that is dissolved at the gaseous pressure p_2 , then according to Henry's law, we have

$$m_2 = kp_2 \quad (\text{Eq. 4.2.1})$$

Dividing throughout by m_1 , the mass of the solvent, we have

$$\frac{m_2}{m_1} = \left(\frac{k}{m_1} \right) p_2 = k'p_2$$

Dividing the two masses by the respective molar masses, we have

$$\frac{m_2/M_2}{m_1/M_1} = \left(k' \frac{M_1}{M_2} \right) p_2 = k''p_2$$

$$\text{or} \quad \frac{n_2}{n_1} = k''p_2 \quad (4.3.1)$$

The amount fraction of the gas in the above solution is given by

$$x_2 = \frac{n_2}{n_1 + n_2}$$

For a dilute solution as is the case for gases in liquids, $n_2 \ll n_1$, and thus the amount fraction can be approximated as

$$x_2 \approx \frac{n_2}{n_1}$$

Substituting this in Eq. (4.3.1), we get

$$x_2 = k''p_2 \quad (4.3.2)$$

Thus for a dilute solution Henry's law can also be stated in terms of amount fraction of gaseous solute in the saturated solution. According to this, *the solubility of a gas expressed in amount fraction is directly proportional to the pressure of the gas.*

The solubility of a gas may be considered from the following two points of view:

(i) x_2 may be regarded as the solubility of the gas under pressure p_2 .

(ii) p_2 may be taken as the vapour pressure of a volatile solute when its amount fraction in the solution is x_2 , i.e. in a dilute solution, the vapour pressure of a solute in a solution is proportional to its amount fraction. Mathematically, we have

$$p_2 = \frac{1}{k''} x_2 = K_H x_2 \quad (4.3.3)$$

where K_H is equal to $1/k''$ and is known as *Henry's law constant*. It has the unit of pressure.

The values of Henry's law constant for some gases in water and benzene at 25 °C are shown in Table 4.3.1.

Table 4.3.1 Henry's Law constant for some Gases at 25 °C

Gas	K_H/kbar		Gas	K_H/kbar	
	Water	Benzene		Water	Benzene
H ₂	71.7	3.93	CO	58.8	1.52
N ₂	86.4	2.27	CH ₄	40.4	0.49
O ₂	44.1	1.24	C ₂ H ₆	30.3	0.068

From Eq. (4.3.3), it follows that the gases will have the same value of $K_H x_2$ provided the gaseous pressure p_2 has the same value. From this it follows that the larger the value of K_H , the smaller the solubility (in terms of x_2) of the gas.

In a special case where Henry's law is applicable over the entire range of concentrations starting from $x_2 = 0$ (infinitely dilute solution, i.e. pure solvent) to $x_2 = 1$ (pure liquid solute), the constant k'' is given as

$$k'' = \frac{x_2}{p_2} = \frac{1}{p_2^*}$$

where p_2^* is the vapour pressure of pure liquid solute ($x_2 = 1$). With this Eq. (4.3.2) can be written as

$$x_2 = \frac{p_2}{p_2^*} \quad \text{or} \quad p_2 = x_2 p_2^* \quad (4.3.4)$$

Henry's Law Constant

Correspondence between Henry's and Raoult's Laws

Equation (4.3.4) is the statement of Raoult's law when applied to a volatile solute. Hence it may be concluded that Raoult's law is a special case of Henry's law; **all systems which obey Raoult's law must satisfy Henry's law, but the reverse is not true unless Henry's law is applicable over the entire range of concentrations.**

Comment on Eq. (4.3.4)

Equation (4.3.4) is useful in computing the solubility (in terms of amount fraction x_2) of a gas in a solvent at a temperature lower than its critical temperature, provided the solution behaves in an ideal manner. Since x_2 and p_2^* have inverse dependence, a lower value of p_2^* results into higher value of x_2 (i.e. solubility) and vice versa. A gas which is difficult to liquefy has a low boiling point. Consequently, it has a larger vapour pressure and thus has a lower solubility in a solvent. Easily liquefiable gases have higher boiling points, lower vapour pressures and thus exhibit larger solubility.

Equation (4.3.4) is also useful in estimating the solubility of a gas at a temperature higher than its critical temperature provided the hypothetical vapour pressure of the gas in the liquid form at the said temperature is available. This vapour pressure may be estimated by the extrapolation method or by the use of Clapeyron-Clausius equation

$$\ln \frac{p_2}{p_1} = - \frac{\Delta_{\text{vap}} H_m}{R} \left(\frac{1}{T_2} - \frac{1}{T_1} \right)$$

provided $\Delta_{\text{vap}} H_m$ may be assumed to be independent of temperatures. For example, the hypothetical vapour pressure of liquid methane (critical temperature -95.5°C) at 20°C is estimated to be 310 atm. Its solubility at 1 atm gaseous pressure in any solvent would be

$$x_2 = \frac{p_2}{p_2^*} = \frac{1 \text{ atm}}{310 \text{ atm}} = 0.0032$$

which is very near to its solubility in *n*-hexane.

The solubility of gas in amount fraction is theoretically independent of the nature of the solvent. Any deviation may be attributed to departure from the ideal behaviour.

Example 4.3.1

- (a) For a solution of acetone in chloroform, it is found that the value of Henry's law constant is 150 Torr when the solution is at a temperature of 308 K. Calculate the value of vapour pressure of acetone when the amount fraction is 0.12.
- (b) Assuming that Henry's law is applicable over sufficient range of composition to make the calculation valid, compute the composition at which Henry's law pressure of chloroform is equal to Henry's law pressure of acetone at 308 K. (Given: Henry's law constant for chloroform 175 Torr.)

Solution

- (a) Henry's law is given as $p = K_H x$

Substituting the given values of K_H and x , we get

$$p = (150 \text{ Torr})(0.12) = 18.0 \text{ Torr}$$

Exan

Solu

(b) Here $p = 18.0$ Torr and $K_H = 175.0$ Torr.

$$\text{Hence } x = \frac{p}{K_H} = \frac{18.0 \text{ Torr}}{175 \text{ Torr}} = 0.103$$

Example 4.3.2

Henry's law constants as defined by the relation $K_H = p_A/x_A$ for oxygen and nitrogen dissolved in water at 273 K are 2.53×10^9 Pa and 5.47×10^9 Pa, respectively. A sample of water at a temperature just above 273 K was equilibrated with air (20% oxygen and 80% nitrogen) at 1 atm. The dissolved gas was separated from a sample of this water and then dried. (a) Determine the composition of this gas. (b) Calculate the freezing point of the saturated water. Given: $K_f = 1.86$ K kg mol⁻¹.

Solution

(a) Partial pressure of oxygen, $p_{O_2} = 0.2 \text{ atm} = 20\,265 \text{ Pa}$

Partial pressure of nitrogen, $p_{N_2} = 0.8 \text{ atm} = 81\,060 \text{ Pa}$

Amount fraction of dissolved oxygen in water

$$= \frac{p_{O_2}}{K_H(O_2)} = \frac{20\,265 \text{ Pa}}{2.53 \times 10^9 \text{ Pa}} = 8.01 \times 10^{-6}$$

Amount fraction of dissolved nitrogen in water

$$= \frac{p_{N_2}}{K_H(N_2)} = \frac{81\,060 \text{ Pa}}{5.47 \times 10^9 \text{ Pa}} = 1.48 \times 10^{-5}$$

$$\frac{\text{Amount of dissolved oxygen}}{\text{Amount of dissolved nitrogen}} = \frac{8.01 \times 10^{-6}}{1.48 \times 10^{-5}} = 0.541$$

$$\text{Hence Amount per cent of } O_2 = \frac{0.541}{1.541} \times 100 = 35.11$$

$$\text{Amount per cent of } N_2 = 100 - 35.11 = 64.89$$

(b) Total amount fraction of dissolved gas = $8.01 \times 10^{-6} + 1.48 \times 10^{-5} = 2.281 \times 10^{-5}$
For such a small value of amount fraction, we may write

$$n_{\text{solute}} = 2.281 \times 10^{-5} \text{ mol} \quad \text{and} \quad n_{\text{water}} = 1 \text{ mol}$$

Hence, molality of the solution is

$$m = \frac{n_{\text{solute}}}{m_{\text{solvent}}} = \frac{(2.28 \times 10^{-5} \text{ mol})}{(18 \times 10^{-3} \text{ kg})} = 1.267 \times 10^{-3} \text{ mol kg}^{-1}$$

The depression in freezing point of water is

$$-\Delta T_f = K_f m = (1.86 \text{ K kg mol}^{-1}) (1.267 \times 10^{-3} \text{ mol kg}^{-1}) \\ = 0.002\,36 \text{ K}$$

The freezing point of the saturated water is $-0.002\,36$ °C.

4.4 RAOULT'S LAW FOR SOLVENT AND HENRY'S LAW FOR SOLUTE

Application of Duhem-Margules Equation

It can be shown that if Henry's law is applicable to the volatile solute, then Raoult's law is applicable to the volatile solvent. We start with the Duhem-Margules equation (Section 4.15), such that

$$\frac{d \log (p_1/p^\circ)}{d \log x_1} = \frac{d \log (p_2/p^\circ)}{d \log x_2} \quad (4.4.1)$$

Henry's law in the amount fraction form as applicable to the solute is

$$p_2 = K_H x_2 \quad (\text{Eq. 4.3.3})$$

Taking logarithm, we have

$$\log (p_2/p^\circ) = \log (K_H/p^\circ) + \log x_2 \quad \text{or} \quad d \log (p_2/p^\circ) = d \log x_2$$

$$\text{i.e.} \quad \frac{d \log (p_2/p^\circ)}{d \log x_2} = 1 \quad (4.4.2)$$

Hence, from Eq. (4.4.1), we have

$$\frac{d \log (p_1/p^\circ)}{d \log x_1} = 1 \quad (4.4.3)$$

which on integration gives

$$\log (p_1/p^\circ) = \log x_1 + \text{constant}$$

$$p_1/p^\circ = K' x_1$$

$$\text{or} \quad p_1 = K x_1 \quad (4.4.4)$$

For the pure solvent $x_1 = 1$ and $p_1 = p_1^*$ where p_1^* is the vapour pressure of the pure solvent. Thus

$$K = p_1^*$$

With the above identity, Eq. (4.4.4) becomes

$$p_1 = x_1 p_1^* \quad (4.4.5)$$

Equation (4.4.5) is obtained provided Eq. (4.4.3) is applicable to the solvent. In deriving Eq. (4.4.3), we have used Henry's law in the amount fraction form as applicable to the solute (Eq. 4.3.3). Thus, it is obvious that Eq. (4.4.5) holds good for the solvent as long as Eq. (4.3.3) is obeyed by the solute. If Eq. (4.3.3) is applicable to solute only in the limited range of low concentration (in dilute solutions where x_2 is small), then Eq. (4.4.5) will be applicable to solvent over the same range of concentration. When Henry's law is not obeyed by the solute, Raoult's law is also not obeyed by the solvent.

Illustration

To make the above discussion more clear, let us take a specific example of a solution of liquid A in liquid B. If the partial pressure of B is plotted against its amount fraction in the solution, we get a curve as shown in Fig. 4.4.1a. The curve as expected from Raoult's law can be obtained by connecting the zero

point at the left ($x_B = 0$) with the point representing p_B^* at the right ($x_B = 1$). It can be seen from Fig. 4.4.1a that Raoult's law curve meets the partial vapour pressure curve tangentially in the region where $x_B \rightarrow 1$. Thus, we see that Raoult's law is applicable only in the limited range of concentrations where B is present in excess amounts and is thus acting as a solvent. Now if a line tangent to the curve of the observed partial vapour pressure at very low concentration of B is drawn, we get the graph of Henry's law. The extrapolation of this line to the right axis where $x_B = 1$ gives the hypothetical vapour pressure which would be observed if Henry's law be applicable over the entire range of concentration, that is, up to $x_B = 1$.

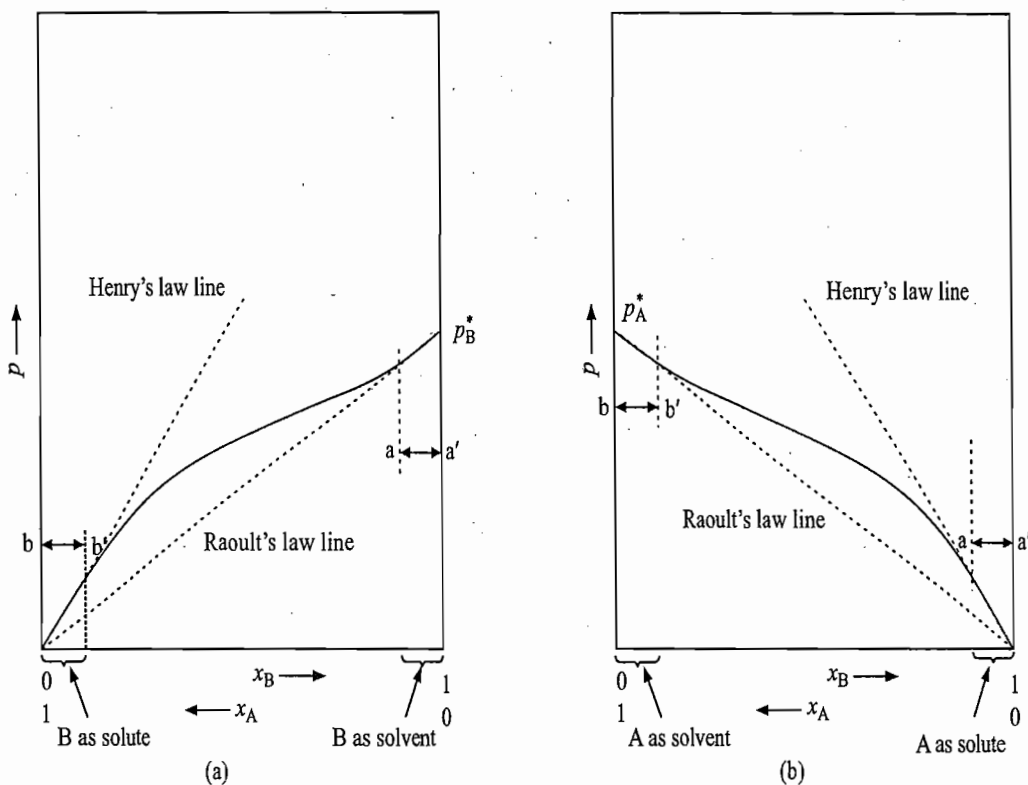


Fig. 4.4.1 Schematic graphs indicating applicability of Henry's law to the solute and Raoult's law to the solvent. (a) For liquid B and (b) for liquid A.

From Eq. (4.3.3), it follows that at $x_B = 1$, we have

$$p_B = K_H$$

Thus, Henry's law constant has a value of the vapour pressure which pure B would have if the vapour pressure obeyed Henry's law instead of Raoult's law. Note that according to Raoult's law, the constant K_H would have been equal to p_B^* . In other words, Henry's law constant for nonideal system is different from Raoult's law constant.

Now, if a graph between the partial vapour pressure of liquid A and its amount fraction in the solution is drawn, we would get a plot as shown in Fig. 4.4.1b. The associated Raoult's law curve and Henry's law curve are also shown in Fig. 4.4.1b. It may be seen that Raoult's law curve meets the partial vapour pressure curve tangentially in the region $x_A \rightarrow 1$ indicating that Raoult's

law is applicable to the solvent. On the other hand, Henry's law curve meets the partial vapour pressure curve in the region $x_A \rightarrow 0$ indicating that Henry's law is applicable to solute.

Figure 4.4.1 also illustrates the fact that Raoult's law is applicable to the solvent over the same range where Henry's law is applicable to the solute. For example, if the applicable range of Henry's law for liquid A (solute) were from 0 to 8% of A (shown by the line aa' in Fig. 4.4.1b), then the applicable range for B (solvent) will be from 92 to 100% of B as shown by the line aa' in Fig. 4.4.1a. On the other side, if Henry's law applicable range for B were from 0 to 5% of B (shown by the line bb' in Fig. 4.4.1a), then Raoult's law applicable range for liquid A will be from 95 to 100% of A as shown by the lines bb' in Fig. 4.4.1b.

Raoult

Example 4.4.1

The total vapour pressure of a 4 mol % solution of NH_3 in water at 293 K is 50.0 Torr; the vapour pressure of pure water is 17.0 Torr at this temperature. Applying Henry's and Raoult's laws, calculate the two partial pressures and the total vapour pressure for a 5 mol % solution.

Solution

The given data are

$$p_{\text{water}}^* = 17.0 \text{ Torr}$$

$$p_{\text{total}} (4 \text{ mol \% solution}) = p_{\text{NH}_3} + p_{\text{water}} = 50.0 \text{ Torr}$$

$$x_{\text{NH}_3} = 0.04 \quad \text{and} \quad x_{\text{water}} = 0.96$$

Now according to Raoult's law, we have

$$p_{\text{water}} = x_{\text{water}} p_{\text{water}}^* = 0.96 \times 17.0 \text{ Torr} = 16.3 \text{ Torr}$$

$$\text{Thus} \quad p_{\text{NH}_3} = p_{\text{total}} - p_{\text{water}} = 50.0 \text{ Torr} - 16.3 \text{ Torr} = 33.7 \text{ Torr}$$

Now Henry's law constant for ammonia is

$$K_{\text{H}}(\text{NH}_3) = \frac{p_{\text{NH}_3}}{x_{\text{NH}_3}} = \frac{33.7 \text{ Torr}}{0.04} = 842 \text{ Torr}$$

Hence for 5 mol % solution, we have

$$p_{\text{NH}_3} = K_{\text{H}}(\text{NH}_3) x_{\text{NH}_3} = (842 \text{ Torr})(0.05) = 42.1 \text{ Torr}$$

$$p_{\text{water}} = p_{\text{water}}^* x_{\text{water}} = (17 \text{ Torr})(0.95) = 16.1 \text{ Torr}$$

$$\begin{aligned} \text{Thus} \quad p_{\text{total}} (5 \text{ mol \% solution}) &= p_{\text{NH}_3} + p_{\text{water}} = 42.1 \text{ Torr} + 16.1 \text{ Torr} \\ &= 58.2 \text{ Torr} \end{aligned}$$

Henry'

4.5 DERIVATIONS OF RAOULT'S AND HENRY'S LAWS FROM KINETIC-MOLECULAR THEORY

Raoult's and Henry's laws may be derived from the view-point of kinetic-molecular theory as follows.

Raoult's Law

For a pure liquid solvent in equilibrium with its vapour, we may write

$$r_{1, \text{cond}} = r_{1, \text{evap}} \quad (4.5.1)$$

where $r_{1, \text{cond}}$ and $r_{1, \text{evap}}$ are the rates of condensation of solvent molecules from vapour phase and of evaporation of solvent molecules from pure liquid solvent, respectively. The rate of condensation may be taken as proportional to the number of collisions per second of vapour molecules with the liquid's surface and this number is proportional to pressure p_1^* . Thus, we have

$$r_{1, \text{cond}} = r_{1, \text{evap}} = bp_1^* \quad (4.5.2)$$

where b is the constant of proportionality.

In an ideal binary liquid solution, the vapour pressure of solvent is p_1 . Hence

$$r_{1, \text{cond}} = bp_1 \quad (4.5.3)$$

Since the sizes of solute and solvent molecules in an ideal solution are identical, the number of molecules of solvent in unit surface area of the solution will be x_1 times the number of solvent molecules in unit surface area of pure solvent, where x_1 is the amount fraction of solvent in solution. Consequently, the rate of evaporation of molecules from the surface of solution will also be x_1 times the rate of evaporation from the pure solvent's surface. Hence

$$r_{1, \text{evap}} = x_1(bp_1^*) \quad (4.5.4)$$

Equating Eqs (4.5.3) and (4.5.4), we get

$$p_1 = x_1p_1^*$$

which is Raoult's law.

Henry's Law

For a pure liquid solute in equilibrium with its vapour, we may write

$$r_{2, \text{cond}} = r_{2, \text{evap}} \quad (4.5.5)$$

where $r_{2, \text{cond}}$ and $r_{2, \text{evap}}$ are the rates of condensation of solute molecules from vapour phase and of evaporation of solute molecules from pure liquid solute, respectively. As in the case of pure solvent, we write

$$r_{2, \text{cond}} = r_{2, \text{evap}} = bp_2^* \quad (4.5.6)$$

In an ideally dilute solution, the rate of condensation of solute molecules is proportional to the partial vapour pressure p_2 . But because of the fact that in the liquid phase solute interacts only with solvent molecules, the proportionality constant in the present case will be different from that appearing in Eq. (4.5.6). Thus we write

$$r_{2, \text{cond}} = b'p_2 \quad (4.5.7)$$

For the rate of evaporation of solute molecules from an ideally dilute solution, we consider the following two facts:

(i) *Size of solute and solvent molecules are different* If x_2 is the amount fraction of solute in solution, then the number of solute molecules present in unit surface area of solution will be reduced by a factor ax_2 compared with those present in unit surface area of pure solute, where the constant a takes into account the different sizes of solute and solvent molecules.

(ii) *Solute molecule interacts with solvent molecules only* Because of this interaction, the rate of evaporation of solute molecules will not be simply equal to ax_2 times but $c(ax_2)$ times the rate of evaporation from pure liquid solute, where the constant c takes into account the different interactions in pure solute and in ideally dilute solution. Thus, we write

$$r_{2, \text{evap}} = \{c(ax_2)\}\{bp_2^*\} \quad (4.5.8)$$

Equating Eq (4.5.7) and (4.5.8), we have

$$b'p_2 = \{c(ax)\}\{bp_2^*\} \quad \text{or} \quad p_2 = \left(\frac{c a b p_2^*}{b'}\right)x_2$$

i.e. $p_2 = K_H x_2$

which is Henry's law.

4.6 IDEAL AND IDEALLY DILUTE SOLUTIONS

Ideal Solution

An ideal solution is the one whose components follow Raoult's law in the entire range of composition. Each component also follows Henry's law where the Henry's law constant is equal to the vapour pressure of the pure component (see Section 4.15).

Ideally Dilute Solution

A real solution in the limit $x_1 \rightarrow 1$ and $x_2 \rightarrow 0$ is known as *ideally dilute solution*. In this solution, each solute molecule is surrounded by solvent molecules. The separation between solute molecules is so large that they do not interact with one another. *Raoult's law for solvent and Henry's law for solute are the defining equations for an ideally dilute solution*. Thus, the vapour pressures of solvent and solute of an ideally dilute solution are given by the expressions:

$$\text{Raoult's law for solvent} \quad p_1 = x_1 p_1^* \quad (4.6.1a)$$

$$\text{Henry's law for solute} \quad p_2 = x_2 K_H \quad (4.6.1b)$$

Expressions of Chemical Potentials

Equations (4.6.1) can be used to derive the expressions of chemical potential for solvent and solute in an ideally dilute solution. From the thermodynamic criterion of equilibrium, we write

$$\mu_{1(\text{sol})} = \mu_{1(\text{v})} \quad (4.6.2a)$$

$$\mu_{2(\text{sol})} = \mu_{2(\text{v})} \quad (4.6.2b)$$

For the vapour phase, we have

$$\mu = \mu^* + RT \ln (p/p^0)$$

With the above expression, Eqs (4.6.2a) and (4.6.2b) become

$$\mu_{1(\text{sol})} = \mu_{1(\text{v})}^* + RT \ln (p_1/p^\circ)$$

$$\mu_{2(\text{sol})} = \mu_{2(\text{v})}^* + RT \ln (p_2/p^\circ)$$

which on making use of Eqs (4.6.1a) and (4.6.1b) become

$$\mu_{1(\text{sol})} = \{\mu_{1(\text{v})}^* + RT \ln (p_1^*/p^\circ)\} + RT \ln x_1 \quad (4.6.3a)$$

$$\mu_{2(\text{sol})} = \{\mu_{2(\text{v})}^* + RT \ln (K_H/p^\circ)\} + RT \ln x_2 \quad (4.6.3b)$$

or
$$\mu_{1(\text{sol})} = \mu_{1(\text{l})}^* + RT \ln x_1 \quad (4.6.4a)$$

$$\mu_{2(\text{sol})} = \mu_{2(\text{l,hs})}^* + RT \ln x_2 \quad (4.6.4b)$$

where the subscript 'hs' stands for the hypothetical state. From Eq. (4.6.4a), we conclude that the standard state of solvent in ideally dilute solution is the pure liquid solvent. For solute, the standard state is the hypothetical state of solute where its vapour pressure is K_H . Its value is determined by extrapolating the experimental vapour pressure of solute in the region $x_2 \rightarrow 0$ to a value of $x_2 \rightarrow 1$. This hypothetical state has the properties which the pure solute would have if its limiting low-concentration properties in solution were to be retained in a pure substance. The actual 'properties of the pure solute will be different from those of the hypothetical state, since in the pure form, the solute molecule is surrounded by another solute molecules whereas in the hypothetical state solute molecule is surrounded by solvent molecules only. From Eq. (4.6.4b), we may define the chemical potential for the hypothetical state as

$$\mu_{2(\text{l,hs})}^* = \lim_{x_2 \rightarrow 1} (\mu_{2(\text{sol})} - RT \ln x_2) \quad (4.6.5)$$

4.7 VARIATION OF HENRY'S LAW CONSTANT WITH TEMPERATURE

From Eqs (4.6.3b) and (4.6.4b), we may write

$$\mu_{2(\text{l,hs})}^* = \mu_{2(\text{v})}^* + RT \ln (K_H/p^\circ)$$

or
$$\ln (K_H/p^\circ) = \frac{\mu_{2(\text{l,hs})}^* - \mu_{2(\text{v})}^*}{RT} = - \frac{\Delta_{\text{vap}} \mu_{2(\text{l,hs})}^*}{RT} \quad (4.7.1)$$

According to Eq. (4.7.1), the Henry's law constant is a function of temperature of the solution. To determine functionality, we differentiate Eq. (4.7.1) with respect to temperature, i.e.

$$\left(\frac{\partial \ln (K_H/p^\circ)}{\partial T} \right)_p = - \frac{1}{R} \left(\frac{\partial (\Delta_{\text{vap}} \mu_{2(\text{l,hs})}^* / T)}{\partial T} \right)_p \quad (4.7.2)$$

Using Gibbs-Helmholtz equation, we get

$$\left(\frac{\partial \ln (K_H/p^\circ)}{\partial T} \right)_p = \frac{\Delta_{\text{vap}} H_{m,2(1,hs)}^*}{RT^2} \quad (4.7.3)$$

To determine the variation of K_H with T , we integrate the above expression to give

$$\int_{T_1}^{T_2} d(\ln K_H/p^\circ) = \int_{T_1}^{T_2} \frac{\Delta_{\text{vap}} H_{m,2(1,hs)}^*}{R} \frac{dT}{T^2} \quad (4.7.4)$$

$$\ln \frac{K'_H}{K_H} = \frac{\Delta_{\text{vap}} H_{m,2(1,hs)}^*}{R} \left(\frac{1}{T_1} - \frac{1}{T_2} \right) \quad (4.7.5)$$

where K'_H and K_H are Henry's law constants at temperatures T_2 and T_1 , respectively.

Since $p_2 = K_H x_2$, the variation of x_2 with temperature at constant p_2 will given by

$$\ln \frac{x_2}{x'_2} = \frac{\Delta_{\text{vap}} H_{m,2(1,hs)}^*}{R} \left(\frac{1}{T_1} - \frac{1}{T_2} \right) \quad (4.7.6)$$

which is the same as given by Eq. (4.1.9).

From Eq. (4.7.5), it follows that K_H increases with increase in temperature.

Since $p_2 = K_H x_2$, it may be concluded that

- (i) p_2 increases with increases in T for a constant x_2
- (ii) x_2 decreases with increase in T for a constant p_2 .

4.8 THERMODYNAMICS OF IDEAL SOLUTIONS OF LIQUID IN LIQUID

Definition of an Ideal Solution

When a liquid is completely miscible with another liquid, a homogeneous solution consisting of a single phase is formed. If such a solution is placed in a closed evacuated vessel, the total pressure exerted by the vapour, after the system has attained equilibrium, will be equal to the sum of partial pressures of its constituents. A solution is said to be an ideal solution if its constituents follow Raoult's law under all conditions of compositions, i.e. the partial pressure of each and every constituent is given by

$$p_i = x_i p_i^* \quad (4.8.1)$$

where p_i is the partial pressure of the constituent i whose amount fraction in the solution is x_i and p_i^* is the corresponding vapour pressure of the pure constituent.

Thermodynamics of an Ideal Solution

The various constituents of an ideal solution follow the relation

$$\mu_{i(\text{soln})} = \mu_{i(1)}^* + RT \ln x_i \quad (\text{Eq. 2.5.15})$$

where $\mu_{i(\text{soln})}$ is the chemical potential of i th constituent of the solution, $\mu_{i(1)}^*$ is that of the pure liquid constituent i and x_i is the amount fraction of the constituent in the solution. The changes in the thermodynamic functions when an ideal solution is formed by mixing pure components can be readily calculated as described below.

Change of Gibbs free-energy We have

$$\begin{aligned} \Delta_{\text{mix}} G &= G_{\text{final}} - G_{\text{initial}} = \sum_i n_i \mu_{i(\text{sol})} - \sum_i n_i \mu_{i(1)}^* \\ &= \sum_i n_i (\mu_{i(\text{sol})} - \mu_{i(1)}^*) \end{aligned} \quad (4.7.3)$$

Making use of Eq. (2.5.15), we get

$$\Delta_{\text{mix}} G = \sum_i n_i RT \ln x_i = n_{\text{total}} RT \sum_i x_i \ln x_i \quad (4.8.2)$$

where n_{total} is the total amount of all the constituents present in the solution.

Change of entropy on mixing The entropy of mixing can be obtained from the relation

$$\left[\frac{\partial(\Delta_{\text{mix}} G)}{\partial T} \right]_{p, n, j, s} = -\Delta_{\text{mix}} S$$

Substituting $\Delta_{\text{mix}} G$ from Eq. (4.8.2) and carrying out the desired differentiation, we get

$$\Delta_{\text{mix}} S = - \left[\frac{\partial(n_{\text{total}} RT \sum_i x_i \ln x_i)}{\partial T} \right]_{p, n, j, s} = -n_{\text{total}} R \sum_i x_i \ln x_i \quad (4.8.3)$$

Change of enthalpy on mixing This can be determined from the relation

$$\Delta_{\text{mix}} G = \Delta_{\text{mix}} H - T \Delta_{\text{mix}} S \quad \text{i.e.} \quad \Delta_{\text{mix}} H = \Delta_{\text{mix}} G + T \Delta_{\text{mix}} S$$

Substituting $\Delta_{\text{mix}} G$ and $\Delta_{\text{mix}} S$ from Eq. (4.8.2) and (4.8.3), we get

$$\Delta_{\text{mix}} H = n_{\text{total}} RT \sum_i x_i \ln x_i - T n_{\text{total}} R \sum_i x_i \ln x_i = 0 \quad (4.8.4)$$

Thus in the formation of an ideal solution neither heating nor cooling is observed.

Change of volume on mixing This can be determined from the relation

$$\Delta_{\text{mix}} V = \left(\frac{\partial(\Delta_{\text{mix}} G)}{\partial p} \right)_{T, n, j, s}$$

Substituting $\Delta_{\text{mix}} G$ from Eq. (4.8.2), we get

$$\Delta_{\text{mix}} V = \left(\frac{\partial(\sum_i n_{\text{total}} RT x_i \ln x_i)}{\partial p} \right)_{T, n, j, s} = 0 \quad (4.8.5)$$

as $\Delta_{\text{mix}} G$ is independent of pressure. Equation (4.8.5) implies that the *total volume of an ideal solution will be equal to the sum of individual volumes of its constituents.*

Molecular Interpretation of $\Delta_{\text{mix}}H = 0$ and $\Delta_{\text{mix}}V = 0$

The fact that $\Delta_{\text{mix}}H$ is zero for the formation of an ideal solution implies that at the molecular level, the cohesive forces between the molecules of its constituents must be completely identical in nature, since only then it is expected that on mixing, the environmental forces of each remain almost unchanged. In other words, the two liquids A and B are expected to form a binary ideal solution provided the forces of attraction between A...A molecules are identical with those of B...B molecules and thus are also identical with those between A...B molecules which exist in the solution. Thus the molecule A in solution will not be knowing whether it is attracting a like molecule A or an unlike molecule B and vice versa. Besides the identical forces between all pairs of molecules in an ideal solution, the different molecules must also have equal volumes, since only then we would expect no volume change on mixing its components.

The partial molar volume of a constituent in an ideal solution is equal to the molar volume of the constituent when present in the pure form.

Examples of Ideal Binary Liquid Solutions

The above conditions are, however, met only in few cases and thus limited examples of ideal binary liquid solutions are known. Some of the known examples which form nearly ideal solutions are:

- (i) Ethylene dibromide and propylene dibromide at 358 K
- (ii) Ethyl bromide and ethyl iodide at 303 K
- (iii) *n*-Butyl chloride and *n*-butyl bromide at 323 K
- (iv) *n*-Hexane and *n*-heptane at 303 K.

The temperatures mentioned along with the above liquid pairs are those at which measurements have been reported.

Example 4.8.1

Assuming ideal behaviour, determine $\Delta_{\text{mix}}G_m$, $\Delta_{\text{mix}}G$, $\Delta_{\text{mix}}S_m$ and $\Delta_{\text{mix}}S$ when 270.0 g of sugar with a molar mass of 358 g mol^{-1} is dissolved in 1.0 kg of water at 298 K.

Solution

$$\text{Amount of sugar} = \frac{270.0 \text{ g}}{358 \text{ g mol}^{-1}} = 0.754 \text{ mol}$$

$$\text{Amount of water} = \frac{1000 \text{ g}}{18 \text{ g mol}^{-1}} = 55.556 \text{ mol}$$

$$\text{Total amount, } n_{\text{total}} = 0.754 \text{ mol} + 55.556 \text{ mol} = 56.310 \text{ mol}$$

$$\text{Amount fraction of sugar, } x_s = \frac{0.754 \text{ mol}}{56.310 \text{ mol}} = 0.0134$$

$$\text{Amount fraction of water, } x_w = \frac{55.556 \text{ mol}}{56.310 \text{ mol}} = 0.9866$$

Substituting the data in

$$\Delta_{\text{mix}}G_m = x_s RT \ln x_s + x_w RT \ln x_w$$

$$\begin{aligned} \text{we get } \Delta_{\text{mix}}G_m &= (0.0134)(8.314 \text{ J K}^{-1} \text{ mol}^{-1})(298 \text{ K})(\ln 0.0134) \\ &\quad + (0.9866)(8.314 \text{ J K}^{-1} \text{ mol}^{-1})(298 \text{ K})(\ln 0.9866) \\ &= -143.173 \text{ J mol}^{-1} - 32.976 \text{ mol}^{-1} \\ &= -176.149 \text{ J mol}^{-1} \end{aligned}$$

Exam

Soluti

$$\begin{aligned}\text{Now } \Delta_{\text{mix}}G &= n_{\text{total}} \Delta_{\text{mix}}G_{\text{in}} = (56.310 \text{ mol}) (-176.149 \text{ J mol}^{-1}) \\ &= -9919.0 \text{ J}\end{aligned}$$

$$\Delta_{\text{mix}}S_{\text{m}} = -\frac{\Delta_{\text{mix}}G_{\text{m}}}{T} = -\frac{(-176.149 \text{ J mol}^{-1})}{298 \text{ K}} = 0.591 \text{ J mol}^{-1} \text{ K}^{-1}$$

$$\Delta_{\text{mix}}S = -\frac{\Delta_{\text{mix}}G}{T} = -\frac{(-9919.0 \text{ J})}{298 \text{ K}} = 33.285 \text{ J K}^{-1}$$

Example 4.8.2

Assuming ideal behaviour, determine $\Delta_{\text{mix}}G$ and $\Delta_{\text{mix}}S$ when a solution of 1 mol of liquid A in 9 mol of liquid B is mixed with 10 mol of liquid B at 300 K.

Solution

We consider the following three processes.

- | | |
|---|--------------------------|
| (i) 9 mol of liquid B + 1 mol of liquid A \rightarrow (solution) ₁ ; | $\Delta_{\text{mix}}G_1$ |
| (ii) 10 mol of liquid B + (solution) ₁ \rightarrow (solution) ₂ ; | $\Delta_{\text{mix}}G_2$ |
| (iii) 19 mol of liquid B + 1 mol of liquid A \rightarrow (solution) ₃ ; | $\Delta_{\text{mix}}G_3$ |

Obviously, we have

$$\Delta_{\text{mix}}G_3 = \Delta_{\text{mix}}G_1 + \Delta_{\text{mix}}G_2 \quad \text{or} \quad \Delta_{\text{mix}}G_2 = \Delta_{\text{mix}}G_3 - \Delta_{\text{mix}}G_1$$

$$\text{Similarly } \Delta_{\text{mix}}S_2 = \Delta_{\text{mix}}S_3 - \Delta_{\text{mix}}S_1$$

$$\begin{aligned}\text{Now } \Delta_{\text{mix}}G_1 &= n_{\text{total}} RT \sum_i x_i \ln x_i \\ &= (10 \text{ mol}) (8.314 \text{ J K}^{-1} \text{ mol}^{-1}) (300 \text{ K}) \left(\frac{1}{10} \ln \frac{1}{10} + \frac{9}{10} \ln \frac{9}{10} \right) \\ &= -8108.2 \text{ J}\end{aligned}$$

$$\Delta_{\text{mix}}S = -\frac{\Delta_{\text{mix}}G_1}{T} = -\frac{(-8108.2 \text{ J})}{(300 \text{ K})} = 27.03 \text{ J K}^{-1}$$

$$\begin{aligned}\Delta_{\text{mix}}G_3 &= n_{\text{total}} RT \sum_i x_i \ln x_i \\ &= (20 \text{ mol}) (8.314 \text{ J K}^{-1} \text{ mol}^{-1}) (300 \text{ K}) \left(\frac{1}{20} \ln \frac{1}{20} + \frac{19}{20} \ln \frac{19}{20} \right) \\ &= -9902.7 \text{ J}\end{aligned}$$

$$\Delta_{\text{mix}}S_3 = -\frac{\Delta_{\text{mix}}G_3}{T} = -\frac{(-9902.7 \text{ J})}{(300 \text{ K})} = 33.01 \text{ J K}^{-1}$$

$$\begin{aligned}\text{Hence } \Delta_{\text{mix}}G_2 &= \Delta_{\text{mix}}G_3 - \Delta_{\text{mix}}G_1 = (-9902.7 \text{ J mol}^{-1}) - (-8108.2 \text{ J mol}^{-1}) \\ &= -1794.5 \text{ J mol}^{-1}\end{aligned}$$

$$\begin{aligned}\Delta_{\text{mix}}S_2 &= \Delta_{\text{mix}}S_3 - \Delta_{\text{mix}}S_1 = (33.01 \text{ J K}^{-1}) - (27.03 \text{ J K}^{-1}) \\ &= 5.98 \text{ J K}^{-1}\end{aligned}$$

4.9 VAPOUR PRESSURE OF AN IDEAL BINARY LIQUID SOLUTION

Expression of Vapour Pressure

Since both the constituents of an ideal binary liquid system follow Raoult's law over the entire range of composition, the partial pressures exerted by vapours of these constituents over the solution will be given by

$$p_A = x_A p_A^* \quad (4.9.1)$$

$$p_B = x_B p_B^* \quad (4.9.2)$$

where x_A and x_B are the amount fractions of the two constituents in the liquid phase and p_A^* and p_B^* are the respective vapour pressures of the pure constituents.

The total pressure over the solution will be sum of these partial pressures. Thus, we have

$$p = p_A + p_B = x_A p_A^* + x_B p_B^*$$

Since in a binary solution, $x_A + x_B = 1$ or $x_B = 1 - x_A$, therefore, we have

$$\begin{aligned} p &= x_A p_A^* + (1 - x_A) p_B^* \\ &= p_B^* + (p_A^* - p_B^*) x_A \end{aligned} \quad (4.9.3)$$

Thus, the total vapour pressure over the solution is a linear function of x_A with intercept equal to p_B^* and slope equal to $p_A^* - p_B^*$. The slope can be positive or negative depending upon the relative magnitudes of p_A^* and p_B^* . If the constituent A is more volatile, then $p_A^* > p_B^*$ and the term $p_A^* - p_B^*$ is positive. For such a case, the total pressure p increases with increase in amount fraction x_A of the more volatile constituent. If the constituent A is less volatile, then $p_A^* < p_B^*$. In this case, the term $p_A^* - p_B^*$ is negative and there occurs a decrease in vapour pressure with increase in amount fraction x_A of the less volatile constituent.

Equations (4.9.1), (4.9.2) and (4.9.3) have been shown schematically in Fig. 4.9.1 with $p_A^* > p_B^*$.

Composition of the Vapour Phase

Composition of the vapour phase can be determined with the help of Dalton's law of partial pressures. Thus, we have

$$y_A = \frac{p_A}{p} = \frac{x_A p_A^*}{p_B^* + (p_A^* - p_B^*) x_A} \quad (4.9.4)$$

$$\text{and } y_B = \frac{p_B}{p} = 1 - y_A = \frac{x_B p_B^*}{p_A^* + (p_B^* - p_A^*) x_B} \quad (4.9.5)$$

Fig. 4.9
and p
fraction
liquid :

Vapour
Relate
Comp

and Raoult's law
 and by vapours

(4.9.1)

(4.9.2)

in the liquid
 of the pure

tial pressures

, we have

(4.9.3)

ction of x_A
 n be positive
 d p_B^* . If the
 positive. For
 in amount
 less volatile,
 rs a decrease
 less volatile

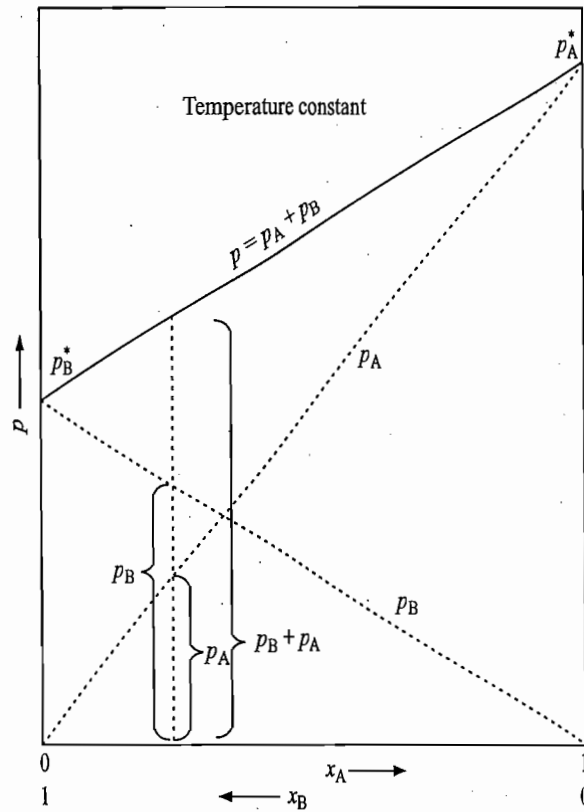
atically in

of Dalton's

(4.9.4)

(4.9.5)

Fig. 4.9.1 Plots of p_A , p_B and p against the amount fraction x_A or x_B in the liquid state.



Vapour Pressure Related to Vapour Composition

To express the total vapour pressure in terms of the composition of vapour phase, we rearrange Eq. (4.9.4) as

$$x_A = \frac{y_A p_B^*}{p_A^* + (p_B^* - p_A^*)y_A} \tag{4.9.6}$$

and then substitute x_A in Eq. (4.9.3). Thus, we have

$$\begin{aligned} p &= p_B^* + (p_A^* - p_B^*)x_A \\ &= p_B^* + (p_A^* - p_B^*) \frac{y_A p_B^*}{p_A^* + (p_B^* - p_A^*)y_A} \end{aligned}$$

i.e.
$$p = \frac{p_B^* p_A^*}{p_A^* + (p_B^* - p_A^*)y_A} \tag{4.9.7}$$

The plot of p versus y_A for a solution in which $p_A^* > p_B^*$ is shown in Fig. 4.9.2.

Equation (4.9.7) can be written in a linear form by taking its reciprocal. Thus, we have

$$\frac{1}{p} = \frac{p_A^* + (p_B^* - p_A^*)y_A}{p_B^* p_A^*} = \frac{1}{p_B^*} + \left(\frac{1}{p_A^*} - \frac{1}{p_B^*} \right) y_A \tag{4.9.8}$$

According to Eq. (4.9.8), the reciprocal of the total pressure varies linearly with y_A , the amount fraction of the constituent A in the vapour phase. This variation is shown in Fig. 4.9.3.

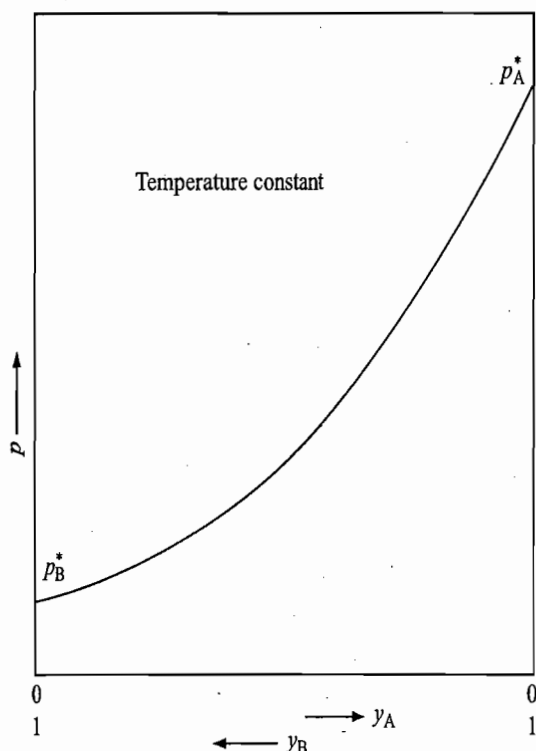


Fig. 4.9.2 Plot of p against y_A , the composition of A in vapour phase

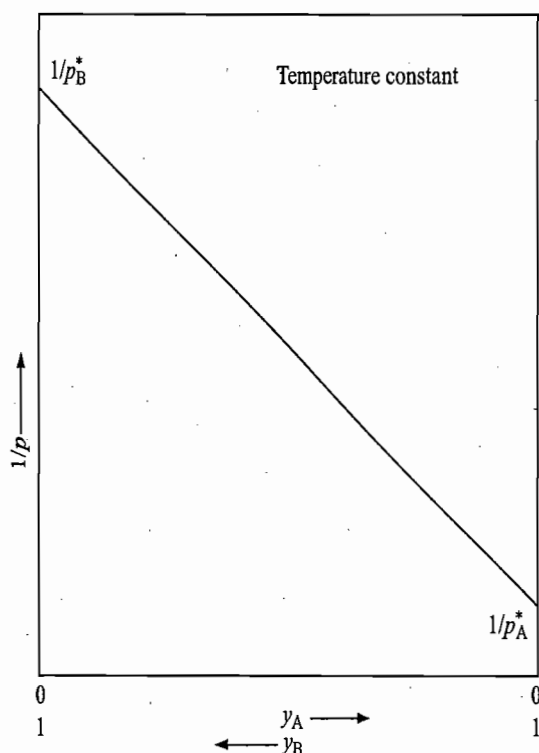


Fig. 4.9.3 Plot of $1/p$ versus y_A , the composition of A in vapour phase

Example 4.9.1

Suppose that the vapour over an ideal solution contains the amounts n_1 of 1 and n_2 of 2 and occupies a volume V under the pressure $p = p_1 + p_2$. If we define $V_{1,m}^* = RT/p_1^*$ and $V_{2,m}^* = RT/p_2^*$, then show that Raoult's law implies that $V = n_1 V_{1,m}^* + n_2 V_{2,m}^*$.

Solution

The pressure p over a solution as calculated by using Raoult's law is given by

$$\frac{1}{p} = \frac{1}{p_2^*} + \left(\frac{1}{p_1^*} - \frac{1}{p_2^*} \right) y_1 \quad (\text{Eq. 4.9.8})$$

Replacing ps in terms of Vs we get

$$\frac{V}{(n_1 + n_2)RT} = \frac{V_{2,m}^*}{RT} + \left(\frac{V_{1,m}^*}{RT} - \frac{V_{2,m}^*}{RT} \right) \left(\frac{n_1}{n_1 + n_2} \right)$$

$$\text{or} \quad V = (n_1 + n_2)V_{2,m}^* + n_1(V_{1,m}^* - V_{2,m}^*)$$

$$\text{or} \quad V = n_1 V_{1,m}^* + n_2 V_{2,m}^*$$

Example 4.9.2

The composition of vapour over a binary ideal solution is determined by the composition of the liquid. If x_A and y_A are the amount fractions of A in the liquid and vapour, respectively, find the value of x_A for which $y_A - x_A$ has a maximum. What is the value of the pressure at this composition?

Solution

$$\text{We have } y_A = \frac{x_A p_A^*}{p_B^* + (p_A^* - p_B^*)x_A}$$

Subtracting x_A from both sides, we get

$$y_A - x_A = \frac{x_A p_A^*}{p_B^* + (p_A^* - p_B^*)x_A} - x_A$$

Differentiating with respect to x_A , we get

$$\frac{d(y_A - x_A)}{dx_A} = \frac{p_A^*}{p_B^* + (p_A^* - p_B^*)x_A} - \frac{x_A p_A^* (p_A^* - p_B^*)}{\{p_B^* + (p_A^* - p_B^*)x_A\}^2} - 1$$

The value of x_A at which $y_A - x_A$ has a maximum value can be obtained by setting the above differential equal to zero. Thus, we have

$$\frac{p_A^*}{p_B^* + (p_A^* - p_B^*)x_A} - \frac{x_A p_A^* (p_A^* - p_B^*)}{\{p_B^* + (p_A^* - p_B^*)x_A\}^2} - 1 = 0$$

Solving for x_A , we get

$$x_A = \frac{\sqrt{p_A^* p_B^*} - p_B^*}{p_A^* - p_B^*}$$

The value of p at this composition is

$$\begin{aligned} p &= x_A p_A^* + x_B p_B^* = p_B^* + (p_A^* - p_B^*)x_A \\ &= p_B^* + (p_A^* - p_B^*) \left(\frac{\sqrt{p_A^* p_B^*} - p_B^*}{p_A^* - p_B^*} \right) = \sqrt{p_A^* p_B^*} \end{aligned}$$

Example 4.9.3

Two liquids A and B form an ideal solution at temperature T . When the total vapour pressure above the solution is 600 Torr, the amount fraction of A in the vapour phase is 0.35 and in the liquid phase is 0.70. What are the vapour pressures of pure A and pure B at temperature T ?

Solution

The given data are

$$x_A = 0.70 \quad y_A = 0.35 \quad p = 600 \text{ Torr} \quad p_A^* = ? \quad p_B^* = ?$$

$$\text{Now } y_A = \frac{p_A}{p} = \frac{x_A p_A^*}{p}$$

$$\text{Therefore } p_A^* = \frac{y_A p}{x_A} = \frac{(0.35)(600 \text{ Torr})}{(0.70)} = 300 \text{ Torr}$$

$$\text{Similarly, } p_B^* = \frac{y_B p}{x_B} = \frac{(0.65)(600 \text{ Torr})}{(0.30)} = 1300 \text{ Torr}$$

Example 4.9.4

At 323 K, the vapour pressures of pure n -hexane and n -heptane are 54.4 and 18.8 kN m⁻², respectively. Assuming ideality, determine:

(a) The amount fraction of n -hexane in a solution in equilibrium with a vapour in which the amount fraction of n -hexane is 0.85.

(b) The molar entropy change when this solution is formed from pure components at 323 K.

Solution

The given data are

$$p_A^* = p_{n\text{-hexane}}^* = 54.4 \text{ kN m}^{-2} \quad p_B^* = p_{n\text{-heptane}}^* = 18.8 \text{ kN m}^{-2}$$

$$x_A = x_{n\text{-hexane}} = ? \quad y_A = y_{n\text{-hexane}} = 0.85$$

$$\Delta S_{\text{mix}} = ?$$

$$(a) \text{ Now } y_A = \frac{p_A}{p} = \frac{x_A p_A^*}{p_B^* + (p_A^* - p_B^*) x_A}$$

$$\text{Therefore } x_A = \frac{y_A p_B^*}{p_A^* - (p_A^* - p_B^*) y_A}$$

Substituting the values, we get

$$x_A = \frac{0.85 \times 18.8 \text{ kN m}^{-2}}{54.4 \text{ kN m}^{-2} - (54.4 \text{ kN m}^{-2} - 18.8 \text{ kN m}^{-2}) \times 0.85} = 0.662$$

$$(b) \text{ Now } \Delta_{\text{mix}} S/R = -x_A \ln x_A - x_B \ln x_B$$

Substituting the values of x_A and x_B , we get

$$\Delta_{\text{mix}} S/R = -0.662 \times 2.303 \times \log(0.662) - 0.338 \times 2.303 \times \log(0.338)$$

$$= 0.2731 + 0.3667 = 0.6398$$

$$\text{Hence } \Delta S_{\text{mix}} = (0.6398)(8.314 \text{ J K}^{-1} \text{ mol}^{-1}) = 5.319 \text{ J K}^{-1} \text{ mol}^{-1}$$

Example 4.9.5

At 303 K, the vapour pressure of pure toluene and pure benzene are 36.7 and 118.2 Torr, respectively, and the two liquids form a nearly ideal solution, (a) For a solution containing 50.0 mass % of toluene, calculate the total vapour pressure and the amount fraction of each compound in the vapour phase. (b) Determine the composition of a solution of benzene and toluene that will boil at 303 K at a pressure of 50.0 Torr.

Solution

The given data are

$$p_{\text{toluene}}^* = p_t^* = 36.7 \text{ Torr} \quad p_{\text{benzene}}^* = p_b^* = 118.2 \text{ Torr}$$

(a) From the given data, we have

$$x_t = \frac{n_t}{n_t + n_b} = \frac{(50 \text{ g}/92 \text{ g mol}^{-1})}{(50 \text{ g}/92 \text{ g mol}^{-1}) + (50 \text{ g}/78 \text{ g mol}^{-1})} = 0.459$$

$$p_t = x_t p_t^* = 0.459 \times 36.7 \text{ Torr} = 16.85 \text{ Torr}$$

$$p_b = x_b p_b^* = (1 - 0.459) \times 118.2 \text{ Torr} = 63.95 \text{ Torr}$$

$$p = p_t + p_b = 16.85 \text{ Torr} + 63.95 \text{ Torr} = 80.80 \text{ Torr}$$

$$\text{Now } y_t = \frac{p_t}{p} = \frac{16.85 \text{ Torr}}{80.80 \text{ Torr}} = 0.21 \quad \text{and} \quad y_b = 1 - y_t = 0.79$$

components

(b) We have

$$P = p_t + p_b = x_t p_t^* + x_b p_b^* = x_t p_t^* + (1 - x_t) p_b^* = p_b^* + (p_t^* - p_b^*) x_t$$

$$\text{Thus } x_t = \frac{P - p_b^*}{p_t^* - p_b^*}$$

Substituting the given data, we get

$$x_t = \frac{50.0 \text{ Torr} - 118.2 \text{ Torr}}{36.7 \text{ Torr} - 118.2 \text{ Torr}} = 0.84$$

$$x_b = 1 - x_t = 0.16$$

4.10 VAPOUR PRESSURE-COMPOSITION DIAGRAM OF A BINARY LIQUID SOLUTION

Application of the Phase Rule

Since the number of components in a binary mixture are two, according to the phase rule, we have

$$F = C - P + 2 = 4 - P \quad (4.10.1)$$

The variance of the system will depend on the number of phases present in the system.

System consisting of only one Phase If the system has only one phase (liquid or gaseous), then it is trivariant. This means that the values of three variables will have to be stated in order to define the state of the system completely. These are temperature, pressure and composition. If one of them is held constant, say temperature, then the values of other two variables, namely, pressure and composition, will have to be stated in order to describe the system completely. The state of such a system can be represented by a point in a two-dimensional plot of pressure versus composition at a given temperature. In Fig. 4.9.1, we have plotted the total vapour pressure of a binary liquid mixture against the amount fraction of the constituent A (or constituent B as $x_A + x_B = 1$) in the liquid phase. Since the total pressure is an equilibrium vapour pressure, it is obvious that the system would consist of only liquid phase if it is subjected to a pressure greater than its equilibrium vapour pressure. Hence a point anywhere above the total vapour pressure line in Fig. 4.9.1 represents the system in the liquid phase. Similarly, a point anywhere below the total pressure line in Fig. 4.9.2 represents the system in the vapour phase.

System consisting of two phases If the system has two phases in equilibrium, namely, liquid and vapour, then the variance of the system is two. This means that the values of only two variables will have to be stated in order to describe the system completely. Any two of the three variables, temperature, pressure and composition, can be stated. The third one automatically will have a definite value. For example, if temperature and composition are stated, then the vapour pressure of the system will have a definite value. The straight line of Fig. 4.9.1 and the curved line of Fig. 4.9.2 represent the two phases, liquid and vapour, in equilibrium with each other.

38)

118.2 Torr,
containing
tion of each
of benzene

Depiction of the Diagram

The two states, namely, liquid and vapour, can be shown in one diagram when the plots of Figs 4.9.1 and 4.9.2 are drawn together in one graph. This is shown in Fig. 4.10.1. The upper curve is called the *liquidus curve* since this represents the line above which only liquid phase exists. A point anywhere on this line represents the two phases, liquid and vapour, in equilibrium with each other. Similarly, the lower curve is called the *vaporous curve* since it represents the curve below which only vapour exists. Along this line also the two phases, liquid and vapour, are in equilibrium with each other.

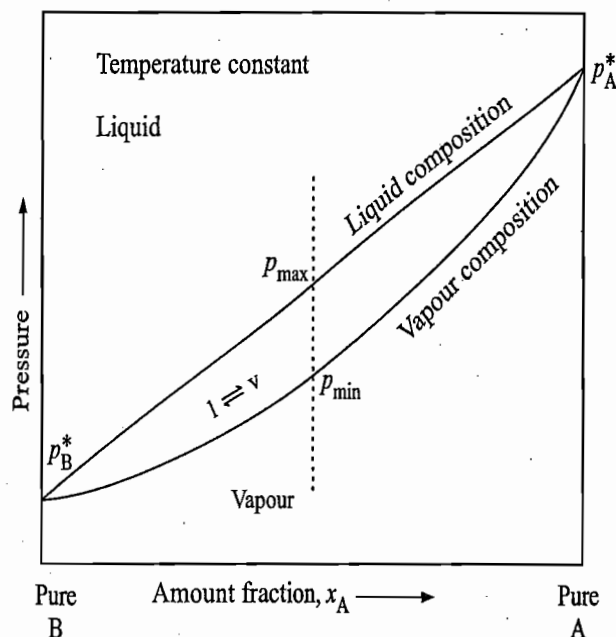


Fig. 4.10.1 Vapour pressure-composition diagram

A point anywhere in the region between the two curves represents the system in which both liquid and vapour coexist in equilibrium with each other. It is for this reason, this region is known as the *liquid-vapour region*. For a given composition, the points on the liquidus and vaporous curves represent, respectively, the maximum and the minimum pressures within which the two phases can exist in equilibrium with each other. The above facts can be summarized as follows:

- (i) If $p_{\text{system}} > p_{\text{max}}$; only liquid phase exists.
- (ii) If $p_{\text{system}} < p_{\text{min}}$; only vapour phase exists.
- (iii) For $p_{\text{max}} > p_{\text{system}} > p_{\text{min}}$; the liquid and vapour phases are in equilibrium with each other.

Tie Line

As indicated above, the region between the liquidus and vaporous curves of Fig. 4.10.1 represents a region where both the phases exist in equilibrium with each other. For this region, $P = 2$ and thus $F = 2$. Since the temperature is fixed, one other variable (any one of p , x_A and y_A) is sufficient to describe the system completely. For instance, if p is chosen, then the amount fractions of the component A in the liquid and vapour phases are represented by the intersection points of a horizontal line, known as the *tie line*, drawn from the given p with those of liquidus and vaporous curves, respectively. If x_A is chosen as the describing variable, then the intersection of a vertical line from x_A with the

The l

Fig. 4. rule

The Lever Rule

liquidus curve yields the value of p and a horizontal line from p cutting the vapour curve gives the vapour composition y_A .

A point within the liquid and vapour curves represents two phases, liquid and vapour, in equilibrium with each other. For the point a shown in Fig. 4.10.2, the amount fraction of the constituent A in the liquid phase is given by the point b (i.e. x_A) and that in the vapour phase is given by the point c (i.e. y_A).

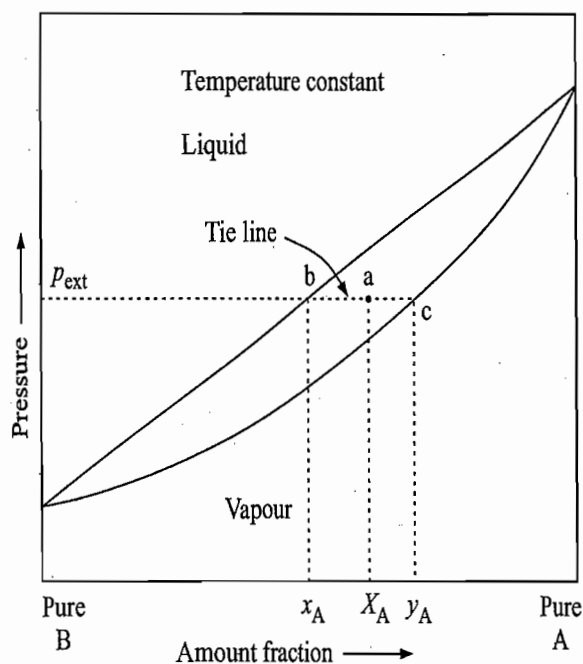


Fig. 4.10.2 The lever rule

Qualitative introduction of the lever rule In fact, any point a on the tie line bc represents the same compositions of liquid and vapour phases, namely, x_A and y_A , respectively. The only difference that exists from point to point is the relative amounts of the two phases. If a coincides with b then the vapour phase has just started forming with amount fraction y_A and if it coincides with c , then the last drop of liquid phase with amount fraction x_A is just going to be converted into the vapour phase. As we move from b to c , more and more of the liquid phase is converted into the vapour phase, keeping the amount fractions of the two phases equal to x_A and y_A , respectively. Thus if the point a is nearer to b , the system will consist of a larger amount of liquid and a relatively smaller amount of vapour; but if it is nearer to c , then the amount of liquid present is relatively small as compared with the amount of vapour present. As a moves from b to c , more and more of the vapour is formed, thus the distance ba represents the amount of vapour formed. Similarly as a moves from c to b , more and more of the liquid is formed and thus the distance ac represents the amount of liquid formed. Taking these together, we have

$$\begin{aligned} \text{distance } ab &\propto \text{amount of the vapour formed} \\ \text{distance } ac &\propto \text{amount of the liquid formed} \end{aligned}$$

Taking the ratio, we have

$$\frac{ab}{ac} = \frac{\text{Amount of the vapour formed}}{\text{Amount of the liquid formed}} \quad (4.10.2)$$

Equation (4.10.2) is known as the lever rule.

Quantitative derivation of the lever rule The amount fraction X_A corresponding to the point *a* represents the amount fraction of the component A in the entire system consisting of liquid and vapour phases, i.e.

$$X_A = \frac{n_{A(l)} + n_{A(v)}}{n_{A(l)} + n_{A(v)} + n_{B(l)} + n_{B(v)}} \quad (4.10.3)$$

From Fig. 4.10.2, we have

$$(ab) = X_A - x_A = X_A - \frac{n_{A(l)}}{n_{A(l)} + n_{B(l)}} \quad (4.10.4)$$

$$(ac) = y_A - X_A = \frac{n_{A(v)}}{n_{A(v)} + n_{B(v)}} - X_A \quad (4.10.5)$$

Multiplying Eq. (4.10.4) by $n_{A(l)} + n_{B(l)}$ and Eq. (4.10.5) by $n_{A(v)} + n_{B(v)}$, we have

$$(n_{A(l)} + n_{B(l)}) (ab) = (n_{A(l)} + n_{B(l)}) X_A - n_{A(l)} \quad (4.10.6)$$

$$(n_{A(v)} + n_{B(v)}) (ac) = n_{A(v)} - (n_{A(v)} + n_{B(v)}) X_A \quad (4.10.7)$$

Subtracting Eq. (4.10.7) from Eq. (4.10.6), we get

$$\begin{aligned} (n_{A(l)} + n_{B(l)}) (ab) - (n_{A(v)} + n_{B(v)}) (ac) \\ = X_A (n_{A(l)} + n_{B(l)} + n_{A(v)} + n_{B(v)}) - (n_{A(l)} + n_{A(v)}) \end{aligned}$$

which on making use of Eq. (4.10.3) becomes

$$(n_{A(l)} + n_{B(l)}) (ab) - (n_{A(v)} + n_{B(v)}) (ac) = 0$$

or
$$\left(\frac{ab}{ac} \right) = \frac{n_{A(v)} + n_{B(v)}}{n_{A(l)} + n_{B(l)}}$$

i.e.
$$\left(\frac{ab}{ac} \right) = \frac{\text{Amount in the vapour phase}}{\text{Amount in the liquid phase}} \quad (4.10.8)$$

In words, the ratio of the amount of vapour to the amount of liquid is given by the ratio of lengths of the line segments connecting *a* to *b* and *a* to *c*. Thus if *a* lies very close to *b*, then *ab* is very small and, therefore, $n_v \ll n_l$, i.e. the system consists mainly of liquid phase. If *a* lies very close to *c*, then $n_v \gg n_l$ and thus the system consists mainly of vapour phase.

Example 4.10.1

At 353 K, the vapour pressures of pure ethylene bromide and propylene bromide are 22.93 and 16.93 kN m⁻², respectively, and these compounds form a nearly ideal solution. 3 mol of ethylene bromide and 2 mol of propylene bromide are equilibrated at 353 K and a total pressure of 20.4 kN m⁻². (a) What is the composition of the liquid phase? (b) What amount of each compound is present in the vapour phase?

Solution

The given data are

$$p_A^* = p_{\text{ethylene bromide}}^* = 22.93 \text{ kN m}^{-2} \quad p_B^* = p_{\text{propylene bromide}}^* = 16.93 \text{ kN m}^{-2}$$

$$n_A = 3 \text{ mol} \quad n_B = 2 \text{ mol} \quad p = 20.4 \text{ kN m}^{-2}$$

(a) We have

$$p = p_A + p_B = x_A p_A^* + x_B p_B^* = p_B^* + (p_A^* - p_B^*) x_A$$

$$\text{Therefore } x_A = \frac{p - p_B^*}{p_A^* - p_B^*}$$

Substituting the given data, we have

$$x_A = \frac{20.4 \text{ kN m}^{-2} - 16.93 \text{ kN m}^{-2}}{22.93 \text{ kN m}^{-2} - 16.93 \text{ kN m}^{-2}} = 0.578$$

$$x_B = 1 - 0.578 = 0.422$$

$$\text{(b) Now } y_A = \frac{p_A}{p} = \frac{x_A p_A^*}{p} = \frac{0.578 \times 22.93 \text{ kN m}^{-2}}{20.4 \text{ kN m}^{-2}} = 0.6497$$

Let n_A and n_B be the amounts of vaporized ethylene bromide and propylene bromide, respectively, when $p = 20.4 \text{ kN m}^{-2}$. Hence we have

$$y_A = \frac{n_A}{n_A + n_B} = 0.6497$$

$$x_A = \frac{3 \text{ mol} - n_A}{(3 \text{ mol} - n_A) + (2 \text{ mol} - n_B)} = \frac{3 \text{ mol} - n_A}{5 \text{ mol} - (n_A + n_B)}$$

$$= \frac{3 \text{ mol} - n_A}{5 \text{ mol} - n_A / 0.6497} = 0.578$$

$$\text{or } (3 \text{ mol} - n_A) = 0.578 \left(5 \text{ mol} - \frac{n_A}{0.6497} \right)$$

$$\text{Therefore } n_A = \frac{3 \text{ mol} - 0.578 \times 5 \text{ mol}}{1 - 0.578/0.6497} = 0.9967 \text{ mol}$$

$$\text{Since } \frac{n_A}{n_A + n_B} = 0.6497, \quad \text{we, therefore, have}$$

$$n_B = \frac{n_A}{0.6497} - n_A = n_A \left(\frac{1}{0.6497} - 1 \right) = \frac{(0.9967 \text{ mol})(0.3503)}{(0.6497)}$$

$$= 0.5374 \text{ mol}$$

spending
the entire

(4.10.3)

(4.10.4)

(4.10.5)

we have

(4.10.6)

(4.10.7)

(4.10.8)

iven by
Thus if
i.e. the
 $v \gg n_1$ re 22.93
1.3 mol
d a total
amount

Example 4.10.2

For the preceding problem, use the lever rule to obtain the amount of each compound in the vapour phase.

Solution

Now, we know

$$\frac{\text{Amount in the liquid phase}}{\text{Amount in the vapour phase}} = \frac{y_A - X_A}{X_A - x_A}$$

where X_A is the amount fraction of ethylene bromide in the overall system. Substituting the values of x_A , y_A and X_A , we have

$$\begin{aligned} \frac{\text{Amount in the liquid phase}}{\text{Amount in the vapour phase}} &= \frac{0.6497 - (3/5)}{(3/5) - 0.578} = \frac{0.0497}{0.022} \\ &= 2.259 \end{aligned}$$

Adding one on both sides and taking inverse, we get

$$\frac{\text{Amount in the vapour phase}}{\text{Amount in the (liquid + vapour) phase}} = \frac{1}{1 + 2.259}$$

$$\text{Amount in the vapour phase} = \frac{1}{(1 + 2.259)} (5 \text{ mol})$$

$$\text{Therefore } n_A = y_A \left(\frac{5 \text{ mol}}{3.259} \right) = (0.6497) \left(\frac{5 \text{ mol}}{3.259} \right) = 0.9968 \text{ mol}$$

$$n_B = y_B \left(\frac{5 \text{ mol}}{3.259} \right) = (0.3503) \left(\frac{5 \text{ mol}}{3.259} \right) = 0.5374 \text{ mol}$$

4.11 ISOTHERMAL FRACTIONAL DISTILLATION OF AN IDEAL BINARY SOLUTION**Underlying Principle**

Isothermal distillation of an ideal binary solution is based on the fact that whenever a liquid phase is in equilibrium with the vapour phase, the latter is relatively richer in the more volatile component. This can be proved from Eq. (4.9.4). We have

$$y_A = \frac{x_A p_A^*}{x_A p_A^* + x_B p_B^*} \quad \text{or} \quad \frac{y_A}{x_A} = \frac{1}{x_A + x_B (p_B^*/p_A^*)} \quad (4.11.1)$$

If the constituent A is more volatile than the constituent B, i.e. $p_A^* > p_B^*$, then p_B^*/p_A^* will be less than one and so also the denominator of Eq. (4.11.1), since $x_A + x_B$ can only be equal to one. The result of this is that the right side of Eq. (4.11.1) is greater than one and hence $y_A > x_A$, i.e. the amount fraction of the component A, the more volatile one, in the vapour phase is larger than that present in the liquid phase.

Effects of Isothermal Decrease in Pressure

Before we discuss the procedure that is employed for isothermal distillation, we will discuss the effects which are produced when the pressure of the system is reduced isothermally.

Fig. 4.11
reducing
constant
the idea

compound in

Substituting

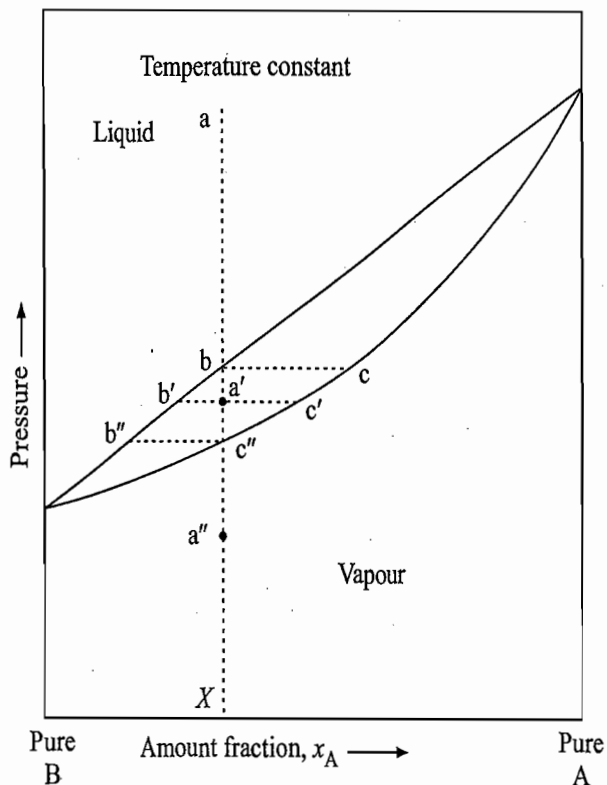


Fig. 4.11.1 Effect of reducing pressure at constant temperature on the ideal binary mixture

Let us start with the liquid phase as shown by the point a in Fig. 4.11.1. Let the pressure of the system be reduced, while its temperature remains constant. The effects to be observed are summarized as follows.

- The state of the system will move along the vertical line aa'a''.
- The system will remain of one phase (i.e. liquid) till the pressure corresponding to the point b is reached.
- At the state b of the system, the vapour phase just starts forming. Its composition will correspond to the point c. The obtained vapour phase is more rich in the component A (which is more volatile) as compared to the liquid phase b.
- Removal of more of the component A in the vapour phase makes the liquid phase more rich in the component B with the result that the composition of liquid phase moves along bb'.
- If the vaporization is to be continued, the pressure of the system must be lowered. The overall state of the system will still move along the same vertical line as shown, for example, by the point a'.
- At the point a', the compositions of the liquid and vapour phases are given by the points b' and c', respectively. The relative amounts of the two phases as given by the lever rule are

$$\frac{\text{Amount in liquid phase}}{\text{Amount in vapour phase}} = \frac{a'c'}{a'b'}$$

- Continued reduction of pressure brings the state point to c'' where only a negligible trace of liquid b'' is left behind and the vapour phase has the composition X which is the same as that of starting liquid (represented by the point a).

N

the fact that the latter is removed from

(4.11.1)

i.e. $p_A^* > p_B^*$
 eq. (4.11.1),
 the right side
 amount fraction
 larger than

distillation, we
 the system is

- As the pressure is further reduced, the two-phase system is converted into one-phase system consisting of the vapour phase.

A Specific Example

To illustrate the above changes, we take up a specific example of a binary liquid solution with $p_A^* = 200$ Torr and $p_B^* = 100$ Torr at a temperature T . Let us have, for example, a solution of 1 mol of constituent A and 2 mol of constituent B.

- The total vapour pressure of the system would be

$$p = x_A p_A^* + x_B p_B^* = (1/3)(200 \text{ Torr}) + (2/3)(100 \text{ Torr}) \\ = 133.33 \text{ Torr}$$

If the pressure on the system is higher than this value, no vapour phase can exist and the system consists of only liquid phase. This may be represented by the point a in Fig. 4.11.1.

- Let the pressure on the system is lowered to a value just less than 133.33 Torr (point b). At this pressure, a bubble of vapour will appear whose composition would be

$$y_A = \frac{p_A}{p} = \frac{x_A p_A^*}{p} = \frac{(1/3)(200 \text{ Torr})}{(133.33 \text{ Torr})} = 0.50$$

The state representing this vapour phase is represented by the point c in Fig. 4.11.1.

- As the pressure on the system is gradually lowered, more and more of liquid evaporates and the vapour phase becomes more rich in the component B.

As the last drop of the liquid evaporates, the composition of the vapour phase approaches the composition of the entire system and thus $y_A = (1/3)$ mol. The composition of last trace of liquid to be evaporated can be calculated by using the expression

$$y_A = \frac{p_A}{p} = \frac{x_A p_A^*}{x_A p_A^* + x_B p_B^*} = \frac{x_A p_A^*}{x_A p_A^* + (1 - x_A) p_B^*}$$

Rearranging this expression, we get

$$x_A = \frac{p_B^* y_A}{p_A^* + (p_B^* - p_A^*) y_A}$$

Substituting the values, we get

$$x_A = \frac{(100 \text{ Torr})(1/3)}{(200 \text{ Torr}) + (100 \text{ Torr} - 200 \text{ Torr})(1/3)} = 0.20$$

- The total pressure of the system at point b'' is

$$p = x_A p_A^* + x_B p_B^* = (0.20)(200 \text{ Torr}) + (0.80)(100 \text{ Torr}) = 120 \text{ Torr}$$

- The system will consist of two phases between the pressure range 120 Torr – 133.33 Torr. The composition of liquid and vapour phases at any pressure can be computed using the following expressions.

$$(i) \quad p = x_A p_A^* + (1 - x_A) p_B^* \Rightarrow x_A = \frac{p - p_B^*}{p_A^* - p_B^*}$$

$$(ii) \quad y_A = \frac{p_A}{p} = \frac{x_A p_A^*}{p} = \frac{x_A p_A^*}{p_B^* + (p_A^* - p_B^*) x_A}$$

For example, if $p = 125$ Torr, then

$$x_A = \frac{125 \text{ Torr} - 100 \text{ Torr}}{200 \text{ Torr} - 100 \text{ Torr}} = 0.25$$

$$y_A = \frac{x_A p_A^*}{p} = \frac{(0.25)(200 \text{ Torr})}{(125 \text{ Torr})} = 0.40$$

- The individual amounts in liquid and vapour phases can be determined by using the level rule.

$$\frac{\text{Amount in liquid phase}}{\text{Amount in vapour phase}} = \frac{a'c'}{a'b'} = \frac{y_A - X}{X - x_A} = \frac{0.40 - (1/3)}{(1/3) - 0.25} = 0.80$$

Adding one to both sides and taking the inverse, we get

$$\frac{\text{Amount in vapour phase}}{\text{Amount in liquid and vapour phases}} = \frac{1}{1.80}$$

- Thus Amount in vapour phase = $(1/1.80)(3.0 \text{ mol}) = 1.67 \text{ mol}$
 Amount in liquid phase = $3.0 \text{ mol} - 1.67 \text{ mol} = 1.33 \text{ mol}$
- Now Amount of A in liquid phase = $x_A n_l = (0.25)(1.33 \text{ mol}) = 0.33 \text{ mol}$
 Amount of B in liquid phase = $1.33 \text{ mol} - 0.33 \text{ mol} = 1.00 \text{ mol}$
 Amount of A in vapour phase = $y_A n_v = (0.40)(1.67 \text{ mol}) = 0.67 \text{ mol}$
 Amount of B in vapour phase = $1.67 \text{ mol} - 0.67 \text{ mol} = 1.00 \text{ mol}$

Example 4.11.1

- (a) A liquid mixture of benzene and toluene is composed of 1 mol of benzene and 1 mol of toluene. If the pressure over the mixture at 300 K is reduced, at what pressure does the first vapour form? Given: $p_t^* = 4.274 \text{ kN m}^{-2}$ and $p_b^* = 13.734 \text{ kN m}^{-2}$, where the subscripts t and b stand for toluene and benzene, respectively.
- (b) What is the composition of the first trace of vapour formed?
- (c) If the pressure is reduced further, at what pressure does the last trace of liquid disappear?
- (d) What is the composition of the last trace of liquid?
- (e) What will be the pressure, the composition of the liquid and the composition of the vapour, when 1 mol of the mixture has been vaporized?

converted into

binary liquid
 are T . Let us
 of constituent

our phase can
 be represented

than 133.33
 appear whose

the point c

ore of liquid
 mponent B.
 f the vapour
 s $y_A = (1/3)$
 e calculated

120 Torr

Solution

(a) The first vapour will be formed when the external pressure becomes equal to the vapour pressure of the system. Thus, the required pressure is

$$p = x_t p_t^* + x_b p_b^* \\ = \frac{1}{2}(4.274 \text{ kN m}^{-2}) + \frac{1}{2}(13.734 \text{ kN m}^{-2}) = 9.004 \text{ kN m}^{-2}$$

(b) Composition of the first vapour can be calculated using the equation

$$y_t = \frac{p_t}{p} = \frac{x_t p_t^*}{p} = \frac{(0.5)(4.274 \text{ kN m}^{-2})}{9.004 \text{ kN m}^{-2}} = 0.2373 \\ y_b = 1 - y_t = 0.7627$$

(c) The last trace of liquid will disappear when the composition of the vapour phase becomes

$$y_b = \frac{1}{2} \quad \text{and} \quad y_t = \frac{1}{2} \quad (\text{i.e. practically whole of the liquid has vaporized})$$

The pressure at which this occurs can be calculated from the expression

$$p = \frac{p_b^* p_t^*}{p_t^* + (p_b^* - p_t^*) y_t} \quad (\text{Eq. 4.9.7}) \\ = \frac{(13.734 \text{ kN m}^{-2})(4.274 \text{ kN m}^{-2})}{(4.274 \text{ kN m}^{-2}) + (13.734 \text{ kN m}^{-2} - 4.274 \text{ kN m}^{-2})(0.5)} \\ = 6.519 \text{ kN m}^{-2}$$

(d) Composition of the last trace of the liquid can be calculated using the expression

$$x_t = \frac{y_t p}{p_t^*} = \frac{(0.5)(6.519 \text{ kN m}^{-2})}{4.274 \text{ kN m}^{-2}} = 0.7626$$

Therefore $x_b = 1 - x_t = 0.2374$

(e) Let n_b be the amount of benzene present in 1 mol of the mixture that has been vaporized.

Thus $y_b = n_b/1 \text{ mol}$

The amount fraction of benzene in the remaining liquid phase will be

$$x_b = \frac{1 \text{ mol} - n_b}{1 \text{ mol}}$$

Now from the expression $p = p_t^* + (p_b^* - p_t^*) x_b$, we get

$$x_b = \frac{p - p_t^*}{p_b^* - p_t^*} \quad (1)$$

Also $y_b = \frac{p_b}{p} = \frac{x_b p_b^*}{p} \quad (2)$

Exa

Soh

o the vapour

Substituting the values of x_b and y_b in Eqs (1) and (2), we have

$$\frac{1 \text{ mol} - n_b}{1 \text{ mol}} = \frac{p - p_t^*}{p_b^* - p_t^*} \quad (3)$$

$$\text{and } n_b = \frac{(1 \text{ mol} - n_b) p_b^*}{p} \quad (4)$$

Rearranging Eq. (4) for n_b , we have

$$n_b = \frac{(1 \text{ mol}) p_b^*}{p + p_b^*} \quad (5)$$

vapour phase

Substituting this in Eq. (3), we get

$$1 - \frac{p_b^*}{p + p_b^*} = \frac{p - p_t^*}{p_b^* - p_t^*} \quad (6)$$

vaporized)

Rearranging the above equation, we have

$$p = \sqrt{p_t^* p_b^*}$$

(Eq. 4.9.7)

Substituting the given values of p_t^* and p_b^* , we get

$$p = \{(4.274 \text{ kN m}^{-2})(13.734 \text{ kN m}^{-2})\}^{1/2} = 7.662 \text{ kN m}^{-2}$$

Substituting p in Eq. (3), we get

$$\frac{1 \text{ mol} - n_b}{(1 \text{ mol})} = \frac{(7.662 \text{ kN m}^{-2}) - (4.274 \text{ kN m}^{-2})}{(13.734 \text{ kN m}^{-2}) - (4.274 \text{ kN m}^{-2})} = \frac{3.388}{9.460}$$

pressure

$$\text{or } n_b = \left(1 - \frac{3.388}{9.460}\right) \text{ mol} = \frac{6.072}{9.480} \text{ mol} = 0.642 \text{ mol}$$

vaporized.

$$\text{Thus } y_b = n_b / \text{mol} = 0.642 \text{ and } y_t = 1 - y_b = 0.358$$

Example 4.11.2

The vapour pressures of two pure liquids, A and B, that form an ideal solution are 300 and 800 Torr, respectively, at temperature T . A mixture of the vapours of A and B for which the amount fraction of A is 0.25 is slowly compressed at temperature T . Calculate (a) the composition of the first drop of the condensate, (b) the total pressure when this drop is formed, (c) the composition of the solution whose normal boiling point is T . (d) the pressure when only the last bubble of vapour remains, and (e) the composition of the last bubble.

Solution

The given data are

$$(1) \quad p_A^* = 300 \text{ Torr} \quad p_B^* = 800 \text{ Torr} \quad y_A = 0.25$$

$$(2) \quad \text{(a) We have } y_A = \frac{p_A}{p} = \frac{x_A p_A^*}{x_A p_A^* + x_B p_B^*} = \frac{x_A p_A^*}{p_B^* + (p_A^* - p_B^*) x_A}$$

$$\text{Therefore } x_A = \frac{y_A p_B^*}{p_A^* - (p_A^* - p_B^*) y_A}$$

Substituting the given data, we have

$$x_A = \frac{(0.25)(800 \text{ Torr})}{300 \text{ Torr} - (300 \text{ Torr} - 800 \text{ Torr})(0.25)} = 0.4706$$

(b) We have

$$p = x_A p_A^* + x_B p_B^* = x_A p_A^* + (1 - x_A) p_B^*$$

Substituting the given data, we get

$$\begin{aligned} p &= 0.4706 \times 300 \text{ Torr} + 0.5294 \times 800 \text{ Torr} \\ &= 141.18 \text{ Torr} + 423.52 \text{ Torr} = 564.7 \text{ Torr} \end{aligned}$$

(c) For the normal boiling point, we have

$$p = 760 \text{ Torr} = x_A p_A^* + (1 - x_A) p_B^*$$

$$\text{Therefore } x_A = \frac{760 \text{ Torr} - p_B^*}{p_A^* - p_B^*}$$

Substituting the given data, we have

$$x_A = \frac{760 \text{ Torr} - 800 \text{ Torr}}{300 \text{ Torr} - 800 \text{ Torr}} = 0.08$$

$$\text{Thus } x_B = 1 - 0.08 = 0.92$$

(d) Here, the amount fraction of A in the liquid phase will be the same as that of A in the original vapour phase, i.e. $x_A = 0.25$

$$\begin{aligned} \text{Hence } p &= x_A p_A^* + x_B p_B^* = 0.25 \times 300 \text{ Torr} + 0.75 \times 800 \text{ Torr} \\ &= 75 \text{ Torr} + 600 \text{ Torr} = 675 \text{ Torr} \end{aligned}$$

(e) In this case, we have

$$y_A = \frac{x_A p_A^*}{p} = \frac{0.25 \times 300 \text{ Torr}}{675 \text{ Torr}} = 0.111$$

$$y_B = 1 - y_A = 0.889$$

Example 4.11.3

The vapour pressure of two pure liquids A and B which form an ideal solution are 300 and 800 Torr, respectively, at temperature T . A liquid solution of A and B for which the amount fraction of A is 0.60 is contained in a cylinder closed by a piston on which the pressure can be varied. The solution is slowly vaporized at temperature T by decreasing the applied pressure, starting with a pressure of about 1 atm. Calculate (a) the pressure at which the first bubble of vapour is formed, (b) the composition of the vapour in this bubble, (c) the composition of the last droplet, and (d) the pressure when only this last droplet of liquid remains.

Solution

The given data are

$$p_A^* = 300 \text{ Torr} \quad p_B^* = 800 \text{ Torr} \quad x_A = 0.60$$

(a) *The pressure at which first bubble of vapour is formed*

We have

$$\begin{aligned} p &= x_A p_A^* + x_B p_B^* = 0.6 \times 300 \text{ Torr} + 0.4 \times 800 \text{ Torr} \\ &= 180 \text{ Torr} + 320 \text{ Torr} = 500 \text{ Torr} \end{aligned}$$

(b) *Amount fractions of components in the first bubble of vapour*

We have

$$y_A = \frac{p_A}{p} = \frac{x_A p_A^*}{500 \text{ Torr}} = \frac{0.60 \times 300 \text{ Torr}}{500 \text{ Torr}} = 0.36$$

$$\text{Thus } y_B = 1 - 0.36 = 0.64$$

(c) *Amount fractions of components in the last drop of liquid*

Here we will have $y_A = 0.60$ (as most of the liquid has vaporized).

$$\text{Now } y_A = \frac{p_A}{p} = \frac{x_A p_A^*}{x_A p_A^* + x_B p_B^*} = \frac{x_A p_A^*}{p_B^* + (p_A^* - p_B^*) x_A}$$

Substituting the given data, we get

$$0.60 = \frac{x_A (300 \text{ Torr})}{800 \text{ Torr} + (300 \text{ Torr} - 800 \text{ Torr}) x_A}$$

Solving for x_A , we have

$$x_A = 0.80$$

$$\text{Thus } x_B = 1 - x_A = 0.20$$

(d) *Pressure when the last droplet of liquid remains*

$$\begin{aligned} \text{We have } p &= x_A p_A^* + x_B p_B^* = 0.80 \times 300 \text{ Torr} + 0.2 \times 800 \text{ Torr} \\ &= 240 \text{ Torr} + 160 \text{ Torr} = 400 \text{ Torr} \end{aligned}$$

Procedure of Isothermal Fractional Distillation

Suppose the vapour which is formed over the solution is removed and is condensed separately. This new liquid which is formed will be richer in the more volatile constituent. Now, let again the vapour which is formed over this new solution be removed and recondensed. The new liquid which is formed will be still richer in the more volatile constituent. Let this procedure of removing the vapour from the newer solution and condensing them be repeated several times. Ultimately, a stage will come when the vapour consists only of the more volatile constituent and the liquid that of the less volatile constituent. Thus a separation of constituents has been achieved.

at of A in

on are 300
which the
which the
decreasing
pressure at
this bubble,
droplet of

The above method is useful for those mixtures which would decompose if distilled by ordinary methods. However, it is very inconvenient and is used only when the other method of separation is not available.

Konowaloff's Rule

From Eqs (4.11.1) and (4.9.3), we have drawn the following two conclusions.

- (i) If $p_A^* > p_B^*$, the amount fraction of the component A in the vapour phase is larger than in the liquid phase. In other words, the vapour phase is richer in the component A than the liquid phase.
- (ii) If $p_A^* > p_B^*$, the component A is more volatile than the component B. In a system where component A is more volatile, the total vapour pressure of the system increases with increase in the amount fraction x_A of the more volatile component. In other words, if we add more of the component A in the liquid phase, the total vapour pressure of the system is increased.

We can combine the above two conclusions in a statement given below.

The vapour phase is richer in the component whose addition to the liquid mixture results in an increase in total vapour pressure.

The above statement is, in fact, the *Konowaloff's rule*, which we shall derive more rigorously in Section 4.15.

Depen
Boiling
Solutic
Comp

4.12 TEMPERATURE-COMPOSITION DIAGRAM OF A BINARY LIQUID SOLUTION

Qualitative Description

We have already seen that if the two phases are in equilibrium in a binary system, then its variance is two. Thus fixing the values of any of the two variables amongst temperature, pressure and composition, completely defines the system. The third variable automatically has a fixed value. For example, if temperature and composition are chosen, then the equilibrium pressure of the system has a fixed value. Mathematically, this can be stated as

$$p = f(\text{temperature, composition}) \quad (4.12.1)$$

If the temperature is held constant, then p depends only on the composition of the mixture. Thus

$$p = f(\text{composition}) \quad (T \text{ constant}) \quad (4.12.2)$$

Likewise, if pressure and composition be chosen as the independent variables, then the temperature becomes the dependent variable, i.e.

$$T = f(\text{pressure, composition}) \quad (4.12.3)$$

If the pressure is kept constant for a series of solutions of different compositions, then

$$T = f(\text{composition}) \quad (p \text{ constant}) \quad (4.12.4)$$

that is, temperature at which the given system has the equilibrium pressure p will depend on the composition of the system.

Equations (4.12.2) and (4.12.4) may be understood by taking an example of liquid-vapour equilibrium of an ideal binary liquid system. From Raoult's law, the total vapour pressure p of the system is given by

$$\begin{aligned}
 p &= p_A + p_B = x_A p_A^* + x_B p_B^* = x_A p_A^* + (1 - x_A) p_B^* \\
 &= p_B^* + (p_A^* - p_B^*) x_A
 \end{aligned}
 \tag{4.12.5}$$

Thus p depends on x_A , the composition of the solution and on the values of p_A^* and p_B^* , the vapour pressures of the pure constituents. Since p_A^* and p_B^* depend only on temperature, it follows that p is a function of temperature and composition. Now if the temperature is kept constant (i.e. p_A^* and p_B^* are constant), then p depends only on the composition of the solution. Figure 4.9.1 shows the dependence of p on composition of an ideal binary liquid system at a constant temperature. Now suppose we want to keep the equilibrium pressure p to a constant value. For a system, this given value of p can be obtained by varying the temperature of the system. This time p_A^* and p_B^* are being changed so that the value of p as calculated from Eq. (4.12.5) becomes equal to the given value of the pressure. The temperature at which this equality is obtained will depend upon the composition of the system.

Dependence of Boiling Point of a Solution on its Composition

The boiling point of a liquid (or a solution) is the temperature at which the vapour pressure of the liquid (or the total vapour pressure of the solution) becomes equal to that of the external pressure. If the external pressure is 1 atm, the boiling point is known as the normal boiling point. A liquid which has a higher vapour pressure will have a lower boiling point since less heating will be required to attain vapour pressure equal to the external pressure. Similarly, a liquid with low vapour pressure will have a high boiling point. The boiling point of a solution will have a definite relation with the composition of the solution. The relation connecting these two may be determined with the help of Clausius-Clapeyron equation.

Let T_A^* and T_B^* be the normal boiling points of constituents A and B, respectively. Let T be the normal boiling point of a solution of known composition and let p_A^* and p_B^* be the vapour pressures of pure constituents at temperature T . Applying Clausius-Clapeyron equation separately to both the constituents, we have

$$\ln \left(\frac{p_A^*}{1 \text{ atm}} \right) = \frac{\Delta_{\text{vap}} H_{m,A}}{R} \left(\frac{1}{T_A^*} - \frac{1}{T} \right)$$

$$\text{or } \frac{p_A^*}{1 \text{ atm}} = \exp \left\{ \frac{\Delta_{\text{vap}} H_{m,A}}{R} \left(\frac{1}{T_A^*} - \frac{1}{T} \right) \right\}
 \tag{4.12.6a}$$

$$\ln \left(\frac{p_B^*}{1 \text{ atm}} \right) = \frac{\Delta_{\text{vap}} H_{m,B}}{R} \left(\frac{1}{T_B^*} - \frac{1}{T} \right)$$

$$\text{or } \frac{p_B^*}{1 \text{ atm}} = \exp \left\{ \frac{\Delta_{\text{vap}} H_{m,B}}{R} \left(\frac{1}{T_B^*} - \frac{1}{T} \right) \right\}
 \tag{4.12.6b}$$

Now the total vapour pressure of the solution of known composition is

$$p = x_A p_A^* + x_B p_B^*$$

and this, by definition, is equal to 1 atm (the external pressure). Thus, we have

$$\begin{aligned}
 1 &= x_A \left(\frac{p_A^*}{\text{atm}} \right) + x_B \left(\frac{p_B^*}{\text{atm}} \right) \\
 &= x_A \exp \left\{ \frac{\Delta_{\text{vap}} H_{m,A}}{R} \left(\frac{1}{T_A^*} - \frac{1}{T} \right) \right\} + x_B \exp \left\{ \frac{\Delta_{\text{vap}} H_{m,B}}{R} \left(\frac{1}{T_B^*} - \frac{1}{T} \right) \right\} \\
 &= x_A \exp \left\{ \frac{\Delta_{\text{vap}} S_{m,A}}{R} \left(1 - \frac{T_A^*}{T} \right) \right\} + x_B \exp \left\{ \frac{\Delta_{\text{vap}} S_{m,B}}{R} \left(1 - \frac{T_B^*}{T} \right) \right\}
 \end{aligned} \tag{4.12.7}$$

where $\Delta_{\text{vap}} S_{m,A}$ and $\Delta_{\text{vap}} S_{m,B}$ are the molar entropy changes for the liquid to vapour conversion for the components A and B, respectively. Assuming that the liquids follow Trouton's rule ($\Delta_{\text{vap}} S_m = \Delta_{\text{vap}} S_{m,A} = \Delta_{\text{vap}} S_{m,B} = 88 \text{ J K}^{-1} \text{ mol}^{-1}$), we have

$$1 = x_A \exp \left\{ \frac{\Delta_{\text{vap}} S_m}{R} \left(1 - \frac{T_A^*}{T} \right) \right\} + x_B \exp \left\{ \frac{\Delta_{\text{vap}} S_m}{R} \left(1 - \frac{T_B^*}{T} \right) \right\}$$

$$\text{or} \quad \exp \left(- \frac{\Delta_{\text{vap}} S_m}{R} \right) = x_A \exp \left\{ - \frac{\Delta_{\text{vap}} S_m}{R} \left(\frac{T_A^*}{T} \right) \right\} + x_B \exp \left\{ - \frac{\Delta_{\text{vap}} S_m}{R} \left(\frac{T_B^*}{T} \right) \right\} \tag{4.12.8}$$

Thus, knowing T_A^* , T_B^* and x_A (or x_B , since $x_A + x_B = 1$), we can solve the above equation for T , the boiling point of the solution.

Composition of Vapour at a Given Temperature

Composition of vapour at temperature T can be determined as usual from the relations

$$y_A = \frac{x_A (p_A^*/p^\circ)}{x_A (p_A^*/p^\circ) + x_B (p_B^*/p^\circ)} = \frac{x_A \exp \left\{ \frac{\Delta_{\text{vap}} S_m}{R} \left(1 - \frac{T_A^*}{T} \right) \right\}}{1}$$

$$\text{and} \quad y_B = \frac{x_B (p_B^*/p^\circ)}{x_A (p_A^*/p^\circ) + x_B (p_B^*/p^\circ)} = \frac{x_B \exp \left\{ \frac{\Delta_{\text{vap}} S_m}{R} \left(1 - \frac{T_B^*}{T} \right) \right\}}{1} \tag{4.12.9}$$

where p° is the unit pressure.

Depiction of the Diagram

Figure 4.12.1 shows the graph of boiling point versus composition for the ideal solution corresponding to Fig. 4.10.1.

Fig. 4
boilin
amou
pondi

Qual
of th

Effec
Heat

us, we have

$$\left\{ \frac{1}{T} \right\} \quad (4.12.7)$$

e liquid to
ng that the
 $\zeta^{-1} \text{ mol}^{-1}$,

}

$$\left\{ \frac{S_m \left(\frac{T_B^*}{T} \right)}{T} \right\} \quad (4.12.8)$$

the above

from the

$$(4.12.9)$$

the ideal

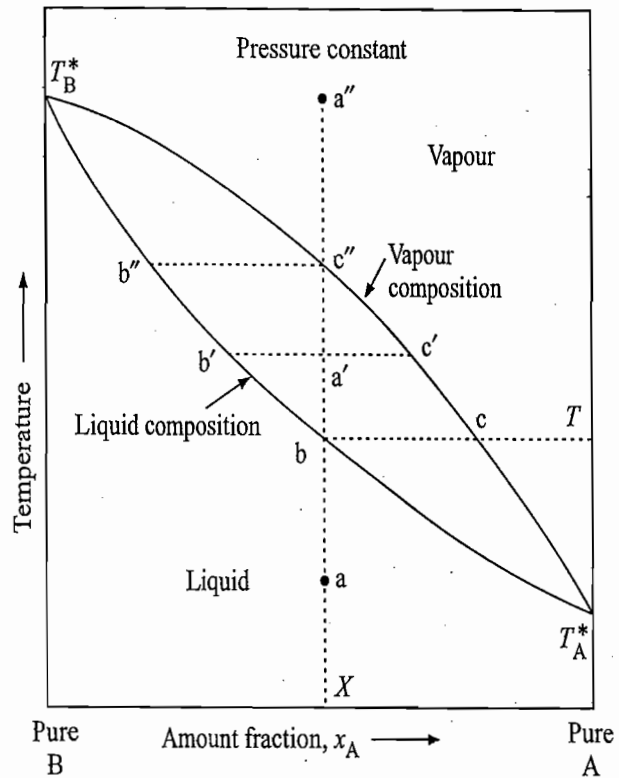


Fig. 4.12.1 Graph of boiling point versus amount fraction corresponding to Fig. 4.10.1

Qualitative Features of the Diagram

- Neither the liquidus nor the vapourous curve is a straight line. This follows immediately from the forms of Eqs (4.12.8) and (4.12.9).
- The lower region of the figure represents the liquid phase as this phase is stable at lower temperatures. Thus, the lower curved line represents the liquidus curve. Similarly, it can be concluded that upper region of the figure represents the vapour phase as this phase is stable at higher temperatures. Thus, the upper curved line represents the vaporous curve.
- The normal boiling point T_B^* of the constituent B is higher than that of the constituent A, i.e. T_A^* . This follows immediately from the fact that the vapour pressure of the constituent A is higher than that of the constituent B.
- The central region between the two curved lines represents the liquid-vapour equilibrium.

Effects Produced on Heating a System

Now we can examine the sequence of events that takes place when a given liquid mixture under a constant pressure is heated from a lower temperature to a high temperature. Let us start with a system represented by the point a in Fig. 4.12.1.

- On increasing the temperature at constant pressure, the state of the system will move along the vertical line aa'' .
- The system will remain of one phase till the temperature T is reached where the liquid just starts boiling with the vapour composition corresponding to the point c.
- The vapour phase is richer than the liquid in the component A, the lower boiling component. Removal of more of the component A in the vapour phase makes the solution more rich in the second component with the result that the composition of the solution moves along bb' .

- If the boiling is to be continued, the temperature of the system must be increased; there occurs an increase in the boiling point of the solution.
- The overall state of the system at any temperature will be represented by a point on the vertical line $aa'a''$. For example, at point a' , the compositions of liquid and vapour phases are represented by the points b' and c' , respectively. The relative amounts of these two phases as given by the lever rule are

$$\frac{\text{Amount in liquid phase}}{\text{Amount in vapour phase}} = \frac{a'c'}{a'b'}$$

- The increase in temperature will eventually bring the system to the point c'' where only a last trace of liquid of composition b'' is left and the vapour phase has the composition X .
- If the temperature of the system is slightly increased the liquid phase disappears completely and the system becomes of one phase comprising of the vapour phase.

Example 4.12.1

The boiling points of pure benzene and toluene are 353.25 K and 383.75 K under 1 atm pressure. By employing appropriate equations, determine the compositions of the liquid mixture and its vapour when the former just starts boiling at 368.15 K. Assume that Trouton's law is applicable to both the constituents.

Solution

We know from Eq. (4.12.8) that

$$\exp\left(-\frac{\Delta_{\text{vap}}S_m}{R}\right) = x_b \exp\left[-\frac{\Delta_{\text{vap}}S_m}{R}\left(\frac{T_b^*}{T}\right)\right] + x_t \exp\left[-\frac{\Delta_{\text{vap}}S_m}{R}\left(\frac{T_t^*}{T}\right)\right] \quad (1)$$

where, according to Trouton's law, $\Delta_{\text{vap}}S_m/R = 10.6$

$$\begin{aligned} \text{Now } T_b^* &= T_{\text{benzene}}^* = 353.25 \text{ K} & T_t^* &= T_{\text{toluene}}^* = 383.75 \text{ K} \\ T &= 368.15 \text{ K} & x_t &= 1 - x_b \end{aligned}$$

Substituting these in Eq. (1), we get

$$\exp(-10.6) = x_b \exp\left\{-10.6\left(\frac{353.25}{368.15}\right)\right\} + (1 - x_b) \exp\left\{-10.6\left(\frac{383.75}{368.15}\right)\right\}$$

$$2.576 \times 10^{-5} = x_b(3.908 \times 10^{-5}) + (1 - x_b)(1.629 \times 10^{-5})$$

$$\text{or } x_b = \frac{2.576 \times 10^{-5} - 1.629 \times 10^{-5}}{3.908 \times 10^{-5} - 1.629 \times 10^{-5}} = 0.415$$

$$x_t = 1 - x_b = 1 - 0.415 = 0.585$$

Composition of the issuing vapour can be calculated using the expression

$$y_b = x_b \exp\left\{\frac{\Delta S_m}{R}\left(1 - \frac{T_b^*}{T}\right)\right\} \quad (\text{Eq. 4.12.9})$$

Substituting the data, we get

$$\begin{aligned} y_b &= 0.415 \times \exp\left\{10.6\left(1 - \frac{353.25}{368.15}\right)\right\} = 0.415 \times \exp(0.429) \\ &= 0.637 \end{aligned}$$

$$\text{Thus } y_t = 1 - y_b = 0.363$$

4.13 ISOBARIC FRACTIONAL DISTILLATION OF AN IDEAL BINARY SOLUTION

Underlying Principle

The isobaric process of distillation in which the external pressure is kept constant instead of temperature is more convenient and is often employed for the separation of constituents of a binary liquid system. The principle of separation of constituents using the isobaric fractional distillation may be explained with the help of temperature-composition diagram shown in Fig. 4.13.1.

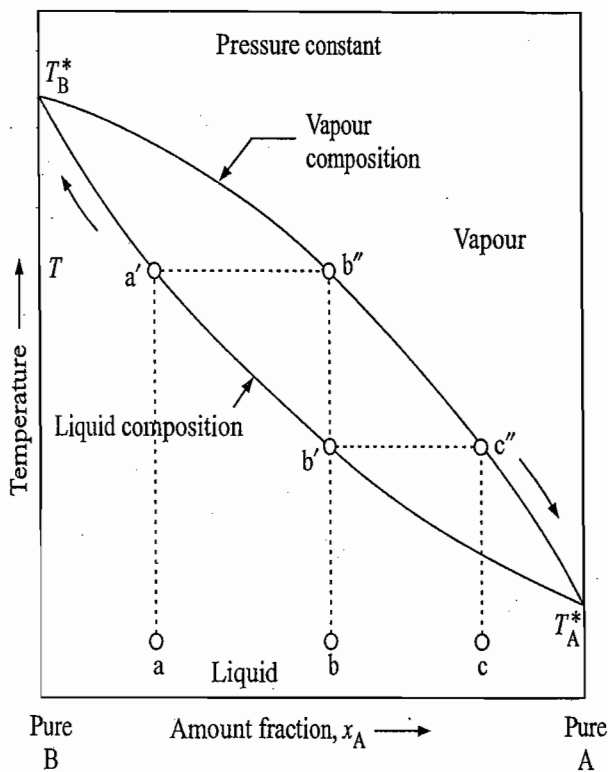


Fig. 4.13.1 Principle of isobaric distillation

- Let the starting composition of the solution to be distilled be represented by the point a. Let the temperature of the solution be raised till it starts boiling. At this stage, the vapour pressure of the solution is equal to the external pressure, which is kept constant throughout the distillation process. Usually the atmospheric pressure of 1 atm is employed for this purpose. The vapour which appeared at the boiling point T is represented by b'' . Since the latter is richer in the constituent A (the more volatile constituent), the residual liquid will become richer in the constituent B and will boil at a slightly higher temperature.
- Let the vapour formed at T be removed and condensed separately to yield distillate b. Let this new distillate be heated till it starts boiling, the vapour which now emerges is represented by c'' and is still richer in the constituent A.
- If the above sequence of collecting the vapour, condensing them to give a new distillate and heating the new distillate to its boiling point is repeated several times, the vapour will continue to contain more and more of the constituent A and ultimately a stage would be reached where it would contain only this constituent.

must be solution. by a point of liquid vely. The

point c'' the vapour

liquid phase arising of

under 1 atm the liquid assume that

(1)

$\left. \begin{matrix} 3.75 \\ 3.15 \end{matrix} \right\}$

q. 4.12.9)

The residual liquid at any stage can be mixed with the previous residual liquid and can be treated in the same way. The residual liquid continues to contain lesser and lesser of the more volatile constituent and thus more and more of the lesser volatile constituent. When the process is repeated several times, a stage would be reached when the residual liquid would contain only the lesser volatile constituent.

Thus, we see that by carrying out the above fractional distillation process, it is possible to separate the two constituents of a binary liquid mixture; vapour containing more volatile constituent and the liquid containing less volatile constituent.

Theoretical Plate

Each horizontal line in the zig-zag steps shown in Fig. 4.13.1 is known as the *theoretical plate*. For example, in going from liquid of composition a to c, we have two theoretical plates.

Example 4.13.1

The vapour pressures of two liquids A and B that form an ideal solution are given by the equations:

$$\log(p_A/\text{Torr}) = -\frac{5100\text{ K}}{T} + 16.24$$

$$\log(p_B/\text{Torr}) = -\frac{4530\text{ K}}{T} + 13.38$$

Draw the temperature-composition phase diagram for solutions of A and B at a total pressure of 1 atm. How many theoretical plates in the fractionating column will be present in going from liquid composition $x_A = 0.03$ to $x_A = 0.96$?

Solution

Boiling points of the two liquids These can be obtained by substituting $p_A = p_B = 760$ Torr in the given expressions

$$\log(p_A/\text{Torr}) = -\frac{5100\text{ K}}{T} + 16.24$$

$$\log(p_B/\text{Torr}) = -\frac{4530\text{ K}}{T} + 13.38$$

$$\text{Thus } T_A^* = \frac{5100\text{ K}}{16.24 - \log(p_A/\text{Torr})} = \frac{5100\text{ K}}{16.24 - \log(760)} = \frac{5100\text{ K}}{16.24 - 2.8808} = 381.7\text{ K}$$

$$T_B^* = \frac{4530\text{ K}}{13.38 - \log(p_B/\text{Torr})} = \frac{4530\text{ K}}{13.38 - \log(760)} = \frac{4530\text{ K}}{13.38 - 2.8808} = 413.4\text{ K}$$

Compositions of the solution and vapour at different temperatures For a given temperature, p_A^* and p_B^* can be obtained from the given relations

$$\log(p_A^*/\text{Torr}) = -\frac{5100\text{ K}}{T} + 16.24 \quad (1)$$

$$\log(p_B^*/\text{Torr}) = -\frac{4530\text{ K}}{T} + 13.38 \quad (2)$$

Let x_A be the amount fraction of liquid A in the solution. The amount fraction of liquid B will be equal to $(1 - x_A)$. Since the two liquids form an ideal solution, the partial vapour pressures of the two liquids can be obtained by using Raoult's law, i.e.

$$p_A = x_A p_A^*$$

$$p_B = x_B p_B^* = (1 - x_A) p_B^*$$

Since the total pressure is 760 Torr, therefore

$$p = p_A + p_B = x_A p_A^* + (1 - x_A) p_B^* = 760 \text{ Torr}$$

$$\text{or } x_A = \frac{760 \text{ Torr} - p_B^*}{p_A^* - p_B^*} \quad (3)$$

The composition of constituent A in the vapour phase is given by

$$y_A = \frac{p_A}{p} = \frac{x_A p_A^*}{760 \text{ Torr}} \quad (4)$$

The values of p_A^* , p_B^* , x_A and y_A as calculated from Eqs (1) to (4) at different temperatures are given below.

T/K	p_A^*/Torr	p_B^*/Torr	$x_A = \frac{760 \text{ Torr} - p_B^*}{p_A^* - p_B^*}$	$y_A = \frac{x_A p_A^*}{760 \text{ Torr}}$
385	1 000	39.81	0.750	0.986
390	1 445	58.88	0.506	0.962
400	3 090	114.8	0.217	0.882
410	6 310	213.8	0.089	0.743
420	12 590	398.1	0.030	0.491
425	17 380	573.0	0.029	0.255

On plotting temperature versus composition, we get a graph as shown in Fig. 4.13.2. The number of theoretical plates in a column in going from $x_A = 0.03$ (point b_3) to $x_A = 0.96$ (point c_1) are two since there are two horizontal lines present in the zig-zag steps.

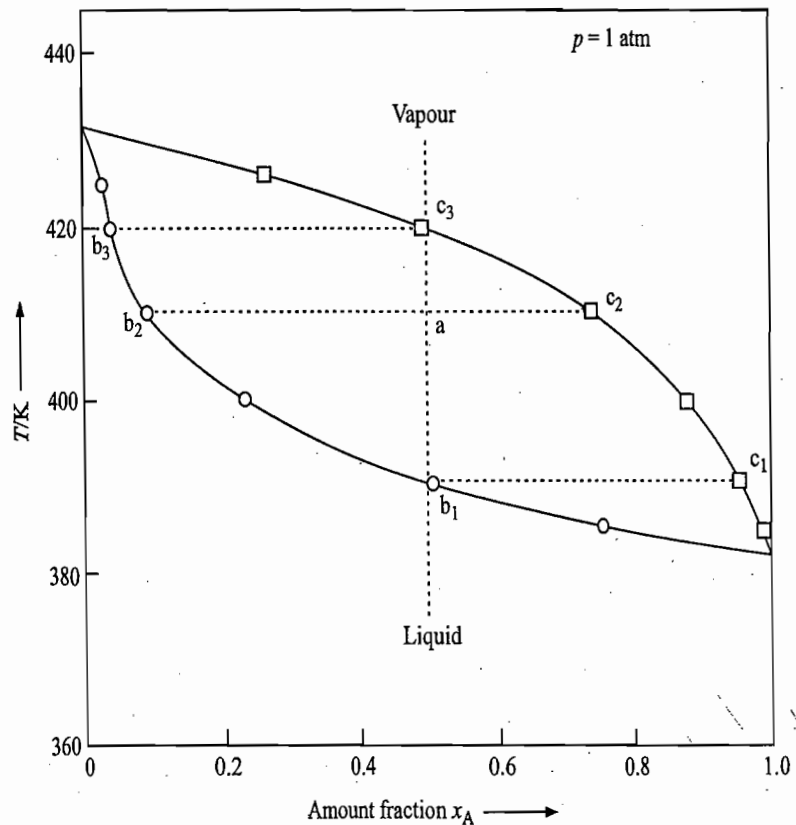


Fig. 4.13.2 The required temperature versus composition plot

ous residual
continues to
re and more
ral times, a
y the lesser

on process,
ure; vapour
ess volatile

own as the
ic, we have

re given by

B at a total
ll be present

$$p_A = p_B =$$

$$= 381.7 \text{ K}$$

$$= 413.4 \text{ K}$$

or a given

(1)

(2)

on of liquid
tial vapour

Example 4.13.2

A liquid mixture containing 50 mol per cent of liquid A in Example 4.13.1 was heated gradually. Answer the following from the phase diagram thus obtained:

- (i) What is the normal boiling point of the mixture?
- (ii) What is the composition of the vapour that appears at the normal boiling point?
- (iii) Indicate whether the boiling point of the remaining liquid mixture increases or decreases.
- (iv) What are the compositions of liquid and vapour at temperature 410 K? What are their relative amounts?
- (v) What is the composition of the last drop of the liquid to be vaporized?
- (vi) If the given mixture of 50 mol per cent of liquid A is distilled without removing the distillate till the temperature of residue is 410 K, what will be the composition of the resultant distillate?

Solution

- (i) Normal boiling point of the mixture = 391 K
- (ii) Composition of vapour issuing at 391 K (near the point c_1);

$$y_B = 0.045 \quad \text{and} \quad y_A = 0.955$$

- (iii) Boiling point of the remaining liquid mixture increases.
- (iv) Compositions at 410 K are

$$\text{Composition of liquid (point } b_2\text{): } x_A = 0.09, x_B = 0.91$$

$$\text{Composition of vapour (point } c_2\text{): } y_A = 0.74, y_B = 0.26$$

$$\frac{\text{Amount of liquid mixture}}{\text{Amount of vapour}} = \frac{ac_2}{b_2a} = \frac{y_A - 0.5}{0.5 - x_A} = \frac{0.24}{0.41}$$

$$\text{Amount \% of vapour} = \frac{0.41}{0.24 + 0.41} \times 100 = 63.08$$

$$\text{Amount \% of liquid} = 100 - 63.08 = 36.92$$

- (v) Composition of the last drop of the liquid to be vaporized (near the point b_3);

$$x_A = 0.035 \quad \text{and} \quad x_B = 0.965$$

- (vi) The composition of the resultant distillate will be the mean of the initial composition of vapour (which appears when the composition of liquid mixture is 50 mol per cent in A) and the final composition of vapour (when the temperature of the residue is 410 K). The two compositions are:

$$(y_A)_{\text{initial}} = 0.955 \quad \text{and} \quad (y_A)_{\text{final}} = 0.743$$

Hence, the amount fraction of A in the resultant distillate will be

$$\frac{0.955 + 0.743}{2} = 0.743 \approx 0.85$$

The Fractionating Column

The process of fractional distillation is extremely tedious and involves more time and labour as the separation is carried out in batches and in a discontinuous manner. However, these difficulties can be overcome by employing a fractionating

Prin
FracP₁
liT₀

Fig

column, which essentially carries the distillation in a continuous manner. Figure 4.13.3 displays one such column commonly employed in industry. This is known as the *bubble-cap column*. It consists of a long tube carrying a large number of bubble-cap plates and is attached to a boiler at the bottom and to a condenser at the top. Each plate can hold a thin layer of liquid and has an overflow mechanism through which the excess liquid can pass to the plate just below it. It also has many bubble-caps through which the vapour passes upward after bubbling through the liquid. There is a temperature gradient along the length of the column, the top being cooler than the bottom. The various plates are thus situated at different temperatures and also hold the liquid at that temperature.

Principle Underlying Fractionating Column

The principle of bubble-cap column can be illustrated very nicely with the help of temperature-composition diagram (Fig. 4.13.4).

Let the liquid be boiled at the bottom, say at temperature T_0 . The vapour issuing has composition v_0 . When this vapour is passed through the first plate, it is cooled to temperature T_1 and thus its state is moved to the point a. At this state, some of the vapour condenses to form liquid of composition l_1 and the

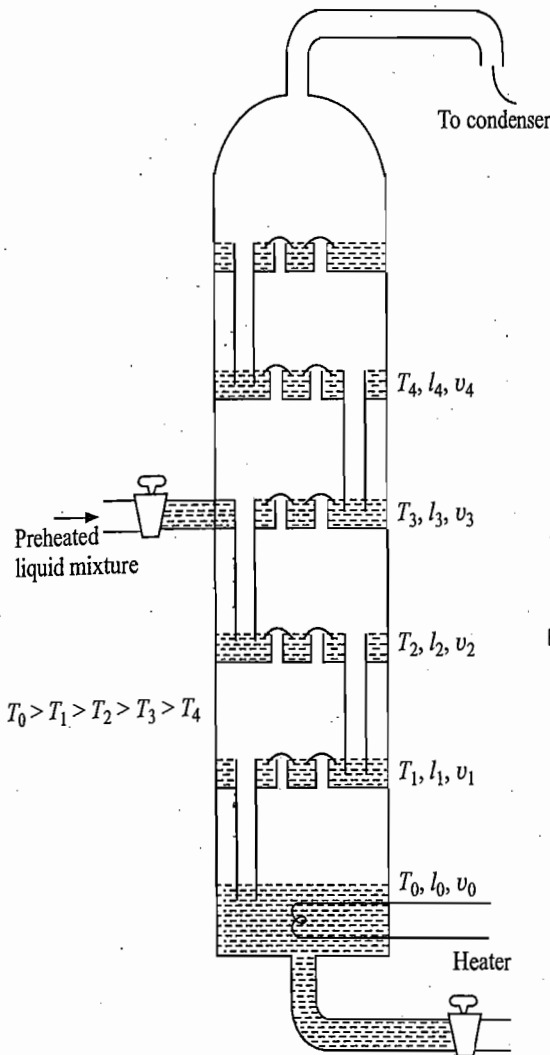


Fig. 4.13.3 Bubble-cap distilling column

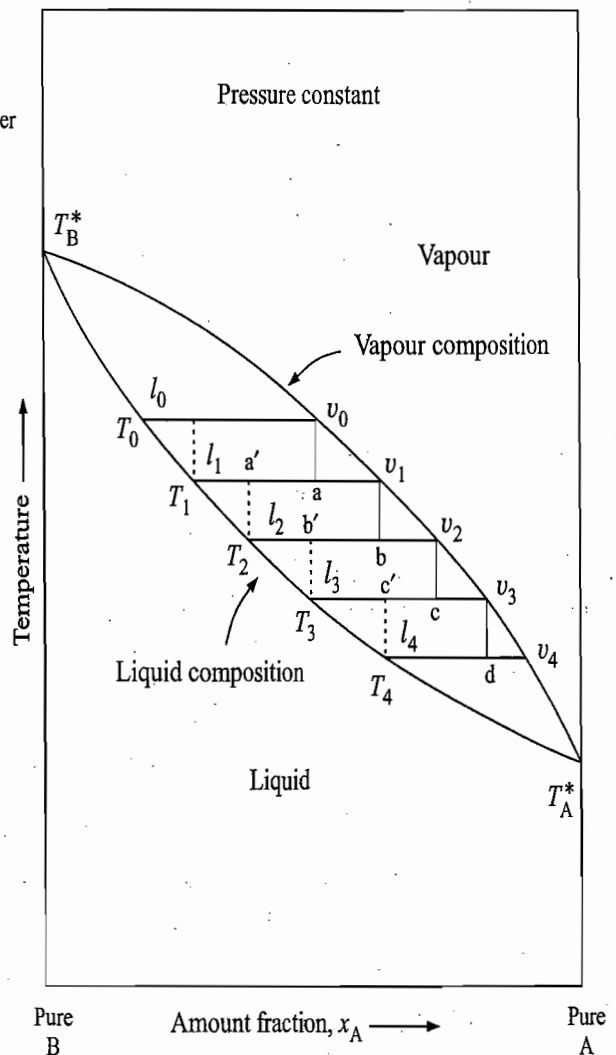


Fig. 4.13.4 Scheme of redistribution of constituents in the distilling column

remaining vapour has composition v_1 . The liquid formed contains more of the less volatile constituent. Next, the vapour of composition v_1 is passed through the second plate whose temperature is T_2 ($T_2 < T_1$). Here the vapour is cooled to T_2 and thus the state of system is moved from v_1 to b . At this state, again part of the vapour is condensed to give liquid of composition l_2 and the remaining vapour has composition v_2 . Now the vapour has become more enriched in the more volatile constituent. This happens at every plate of the column as is also shown in Fig. 4.13.4. As the vapour moves up the column, it is being cooled; this cooling condenses the less volatile component preferentially, so that the vapour becomes increasingly enriched in the more volatile component as it passes upward from one plate to another.

Similarly, as the liquid flows down, its temperature is increased and again there is a redistribution of the constituents. For example, the liquid of composition l_3 has flown from the plate 3 to plate 2. The liquid has been heated from T_3 to T_2 and thus the state of the system has moved from l_3 to b' . Thus part of the liquid vaporizes to yield vapour of composition v_2 containing more of the more volatile constituent. The resultant liquid has a composition of l_2 and thus contains more of the less volatile constituent. This happens at every plate of the column as shown in Fig. 4.13.4. As the liquid moves down the column, it is being heated; this heating vaporizes the more volatile constituent preferentially, so that the liquid becomes increasingly enriched in the less volatile component as it moves downward from one plate to another.

If sufficient number of plates are used, it is possible to separate the two constituents of a binary liquid mixture; the more volatile constituent in the vapour form is collected from the top of the distilling column and that of lesser volatile constituent from the bottom of the column. The vapour from the top of the column is fed into a condenser where it is liquefied. Part of this liquid is drawn off and the rest is returned to the column in order to maintain the stock of essentially pure distillate on the upper plates. In order to make the separation continuous, the preheated liquid mixture is introduced somewhere within the column as shown in Fig. 4.13.3.

Fig. 4.14.
composit
typical n
exhibitin
deviation

4.14 NONIDEAL SOLUTIONS OF LIQUID IN LIQUID

Nonideal Solutions

It was pointed out earlier that an ideal binary liquid solution is formed only when two liquids having more or less identical intermolecular forces of attraction are mixed together, so that the environment around any particular molecule of either of the two liquids is identical to that existing in the liquid mixture. This condition is, however, not satisfied for most liquid pairs and thus they form nonideal solutions. These solutions show deviations from Raoult's law. The nature and the extent of deviation depends upon the types of liquids that are being mixed up. Two types of deviations are observed as describe below.

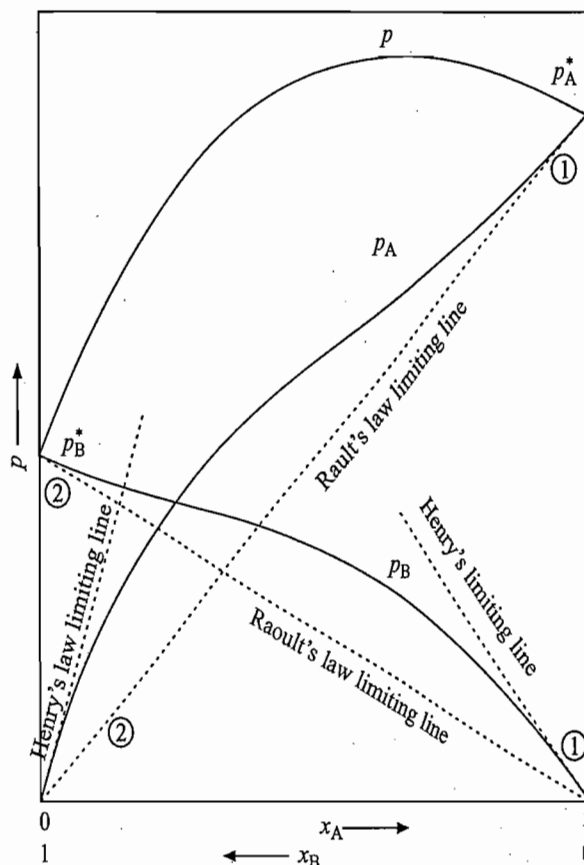
Positive Deviation

If the forces of attraction between unlike molecules (i.e. between A and B) are weaker than those between like molecules (i.e. between either A and A or B and B), the solution shows positive deviation from Raoult's law. In this case, the vapour pressure curves of the constituents and the mixture lie above those of ideal lines (Fig. 4.14.1).

Examp
Positiv

Negati

Fig. 4.14.1 Pressure-composition curves of a typical nonideal solution exhibiting positive deviation from ideality



(1) Region (labelled as 1) of concentration where Raoult's law is applicable to the component A (solvent) and Henry's law to the component B (solute)
 (2) Region (labelled as 2) of concentration where Raoult's law is applicable to B (solvent) and Henry's law to A (solute)

The positive deviation arises from the fact that the tendency of molecules of each kind to escape from the solution to vapour is greater in nonideal solution than that prevailing in an ideal solution. The extent of positive deviation depends upon many factors. Some of them are: (i) difference in polarity of the molecules; (ii) difference in the length of hydrocarbon chain or analogous grouping of the molecules; (iii) difference in the intermolecular forces of attraction; and (iv) association of either of the constituent in the liquid state. The deviation is larger if the two liquids differ greatly in respect to the above factors in which cases a maximum in the plot of total vapour pressure versus composition of solution is observed.

Examples of Positive Deviation

Examples of solutions showing positive deviation are numerous. In fact, most liquid pairs fall into this category. Some of these are:

(i) Carbon tetrachloride and heptane at 323 K: This solution shows small deviations from Raoult's law as both the constituents are nonpolar and involve low forces of attraction.

(ii) Ethyl ether and acetone at 293 K and 303 K: Deviations here are bit larger as the components differ appreciably in the intermolecular attraction forces.

(iii) Heptane and ethyl alcohol at 323 K: This solution shows very large deviations as the two liquids differ appreciably in all the above four factors, namely, polarity, chain length, intermolecular forces of attraction and the association of alcohol in the liquid state.

Negative Deviation

If, on the other hand, the forces of attraction between unlike molecules (i.e. between A and B) are stronger than those between like molecules (i.e. between

either A and A or B and B), then the solution shows negative deviation from Raoult's law. Here the vapour pressure curves of the constituents and the mixture lie below those of the ideal lines. In this case, the tendency of molecules of each kind to escape from the solution into the vapour is weak relative to that found in an ideal solution. This is primarily due to the stronger interactions between the unlike molecules. Figure 4.14.2 exhibits pressure-composition curves of a typical solution exhibiting negative deviation from ideality. The deviation is larger if the two constituents form partial compound in the solution and in such cases a minimum in the plot of total vapour pressure versus composition of solution is observed.

Examples of Negative Deviation

Examples of solutions showing negative deviation are not very common. A few examples are:

- (i) Pyridine and formic acid (or acetic or propanoic acid): One of the constituents is basic and the other one is acidic.
- (ii) Mixture of halomethane (e.g., chloroform) with an oxygen or nitrogen compound (e.g., a ketone, ether, ester or amine): In this case, there occurs a partial association between the molecules through the hydrogen bonding.
- (iii) An aqueous solution of a strong volatile acid such as halogen acids, nitric acid and perchloro acids: In this case, non-volatile ions are formed with the interaction of ions of the acid with water.

Ideally Dilute Solution

There is one common feature in Figs 4.14.1 and 4.14.2 that the partial pressure curves of each component approaches the ideal ones asymptotically as the amount fraction of the component approaches one. This is to be expected since at this stage, the solution is very dilute and hence behaves ideally. This dilute solution is known as *ideally dilute solution*. Thus, we can say that Raoult's law is a limiting law for the solvent (major component as $x_A \rightarrow 1$ or $x_B \rightarrow 1$) in very dilute solutions. Mathematically, it may be expressed as

$$\lim_{x_A \rightarrow 1} \left(\frac{p_A}{x_A} \right) = p_A^* \quad \text{and} \quad \lim_{x_B \rightarrow 1} \left(\frac{p_B}{x_B} \right) = p_B^* \quad (4.14.1)$$

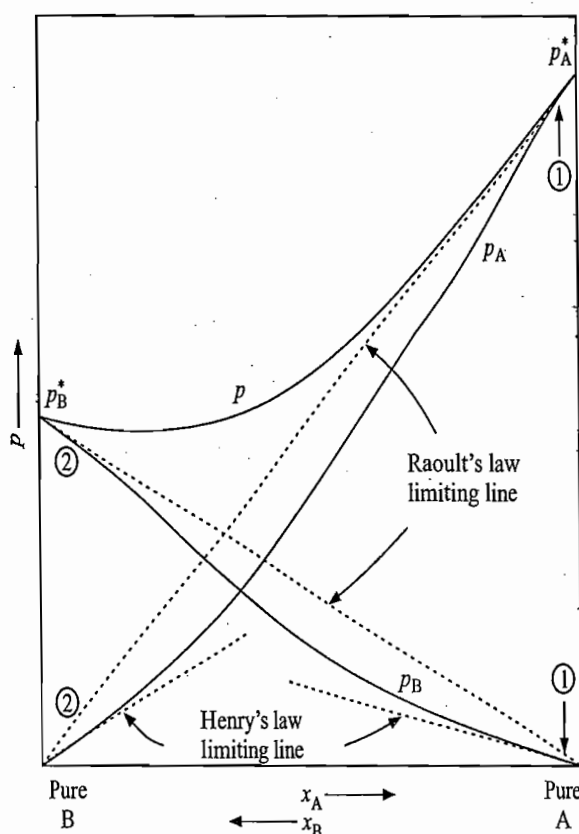
It was shown earlier that if Raoult's law is applicable to the major component (solvent) over a certain region of concentration, then Henry's law is followed by the minor component (solute) over the same region of concentration. It is thus expected that the partial vapour pressure curve of each of the two components should also approach linearity asymptotically, as the amount fraction of the component approaches zero. In fact, it is found to be so and thus the linearity observed at $x \rightarrow 0$ represents the limiting behaviour of Henry's law as applicable to the solute. Mathematically, the linearity may be expressed as

$$\lim_{x_A \rightarrow 0} \left(\frac{p_A}{x_A} \right) = K_H(A) \quad \text{and} \quad \lim_{x_B \rightarrow 0} \left(\frac{p_B}{x_B} \right) = K_H(B) \quad (4.14.2)$$

where $K_H(A)$ is a constant for a given solute (A) in a particular solvent (B) and is not equal to p_A^* . Likewise, $K_H(B)$ is also constant and will not be equal to p_B^* .

Fig. 4
comp
typic
negat

Expi



- (1) Region (labelled as 1) of concentration over which Raoult's law is applicable to A and Henry's law to B
- (2) Region (labelled as 2) of concentration over which Raoult's law is applicable to B and Henry's law to A.

Fig. 4.14.2 Pressure-composition diagram of a typical system exhibiting negative deviation.

In general, the slope of the limiting Henry's law line is greater than that of the limiting Raoult's law line in case of positive deviation from ideality and is smaller in case of negative deviation from ideality.

Expression of Raoult's Law for a Nonideal Solution

For an ideal solution, Raoult's law is expressed as

$$p_i = x_i p_i^* \tag{4.14.3}$$

For the *i*th constituent in a nonideal solution, Raoult's law may be expressed as

$$p_i = a_i p_i^* \tag{4.14.4}$$

where *a_i* is the activity of *i*th constituent in the solution.† In terms of amount fraction, we have

$$p_i = (x_i \gamma_i) p_i^* \tag{4.14.5}$$

where γ_i is the activity coefficient of *i*th constituent in the solution. From Eq. (4.14.5), it follows that

$$a_i = x_i \gamma_i = \frac{p_i}{p_i^*} \tag{4.14.6a}$$

or
$$\gamma_i = \frac{p_i}{x_i p_i^*} = \frac{(p_i)_{\text{real}}}{(p_i)_{\text{ideal}}} \tag{4.14.6b}$$

†See Annexure I at the end of Chapter 8 for the concept of activity.

For a solution exhibiting positive deviation from ideality, we have

$$(p_i)_{\text{real}} > (p_i)_{\text{ideal}} \quad \text{i.e.} \quad \gamma_i > 1 \quad (4.14.7)$$

and for a solution exhibiting negative deviation

$$(p_i)_{\text{real}} < (p_i)_{\text{ideal}} \quad \text{i.e.} \quad \gamma_i < 1 \quad (4.14.8)$$

From Figs 4.14.1 and 4.14.2, it is obvious that the activity coefficient γ_i will vary as the amount fraction of i th constituent in the solution is varied. But there is one common feature that $\gamma_i \rightarrow 1$ as $x_i \rightarrow 1$, since $(p_i)_{\text{real}}$ approaches $(p_i)_{\text{ideal}}$ asymptotically as the amount fraction of the constituent approaches one. The typical variations of activity coefficient with mole fraction for positive and negative deviations are of the type shown in Fig. 4.14.2.

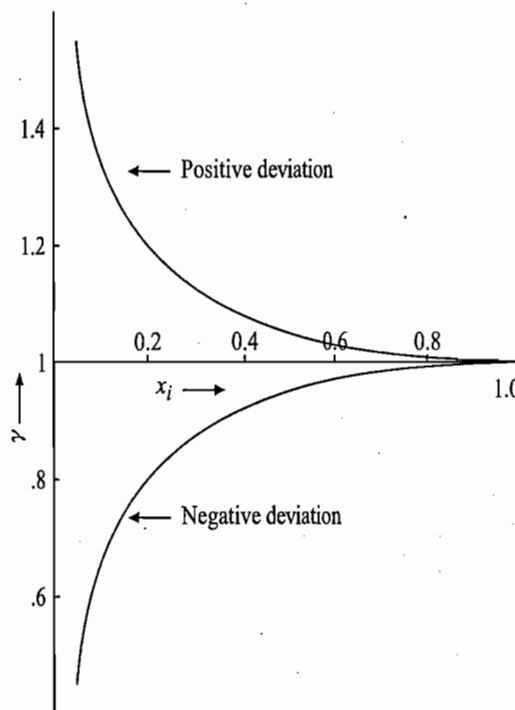


Fig. 4.14.3 Typical variations of activity coefficient with amount fraction.

Example 4.14.1

Starting from the fact that for a binary solution exhibiting negative deviation from Raoult's law, solute-solvent interactions are strong compared to solute-solute and solvent-solvent interactions, show that for such a solution

$$\begin{aligned} \Delta_{\text{mix}}H &< \Delta_{\text{mix}}H(\text{ideal}); & \Delta_{\text{mix}}S &< \Delta_{\text{mix}}S(\text{ideal}) \\ \Delta_{\text{mix}}G &< 0; & p_A &< p_A(\text{ideal}) \end{aligned}$$

Solution

Since solute-solvent interactions are stronger than solute-solute interactions ($B \cdots B$) and solvent-solvent interactions ($A \cdots A$), we have

$$\Delta H_{A \cdots B} > \Delta H_{A \cdots A} \quad \text{and} \quad \Delta H_{A \cdots B} > \Delta H_{B \cdots B} \quad (1)$$

where $\Delta H_{A \cdots A}$, $\Delta H_{B \cdots B}$ and $\Delta H_{A \cdots B}$ represent the enthalpies required to separate $A \cdots A$ in the solvent, $B \cdots B$ in the solute and $A \cdots B$ in the solution, respectively. For an ideal solution, we have

$$\Delta H_{A \cdots A}(\text{ideal}) = \Delta H_{B \cdots B}(\text{ideal}) = \Delta H_{A \cdots B}(\text{ideal}) \quad (2)$$

In the solution process, we will be breaking A...A and B...B interactions and will be generating 2(A...B) interactions, i.e.

$$(4.14.7) \quad \Delta_{\text{mix}}H = \Delta H_{A...A} + \Delta H_{B...B} + 2(-\Delta H_{A...B}) \quad (3)$$

For an ideal solution, From Eq. (2), we get

$$(4.14.8) \quad \Delta_{\text{mix}}H(\text{ideal}) = 0$$

For a nonideal solution which satisfies Eq. (1), we get

$$\Delta_{\text{mix}}H = -ve \quad \text{i.e.} \quad \Delta_{\text{mix}}H < \Delta_{\text{mix}}H(\text{ideal}) \quad (4)$$

that is, heat will be released on mixing solute and solvent to form a solution. $\Delta_{\text{mix}}S$ of the solution process will always be positive as the solute and solvent molecules are more disordered in solution than in the pure liquids. For an ideal solution, $\Delta_{\text{mix}}S$ will have a maximum value as there exists no interaction terms. If A...B interactions are strong, there will be some ordering in the solution, which make $\Delta_{\text{mix}}S$ smaller than $\Delta_{\text{mix}}S(\text{ideal})$, i.e.

$$\Delta_{\text{mix}}S < \Delta_{\text{mix}}S(\text{ideal}) \quad (5)$$

$\Delta_{\text{mix}}G$ will be given by

$$\Delta_{\text{mix}}G = \Delta_{\text{mix}}H - T \Delta_{\text{mix}}S$$

Now $\Delta_{\text{mix}}H$ is negative; tending to make $\Delta_{\text{mix}}G$ more negative than for an ideal solution. But $T \Delta_{\text{mix}}S$ is less positive than $T \Delta_{\text{mix}}S(\text{ideal})$, which tends to make $-T \Delta_{\text{mix}}S$ and $\Delta_{\text{mix}}G$ less negative. Though the final $\Delta_{\text{mix}}G$ is negative, but its value relative to the ideal solution depends on the relative magnitudes of $\Delta_{\text{mix}}H$ and $T \Delta_{\text{mix}}S$.

Finally, because of A...B interactions, A will not be as free to vaporize as in the ideal solution. Thus, we will have

$$p_A < p_A(\text{ideal}) \quad (6)$$

4.15 THE DUHEM-MARGULES EQUATION

Thermodynamic Derivation

A quantitative relation between the partial vapour pressures of the two constituents of a binary liquid system and their corresponding amount fractions can be derived thermodynamically. We start with the Gibbs-Duhem equation for a system of two components A and B, such that

$$n_A d\mu_A + n_B d\mu_B = 0$$

$$\text{or} \quad n_A d\mu_A = -n_B d\mu_B$$

Dividing both sides by $n_A + n_B$, we have

$$\frac{n_A}{n_A + n_B} d\mu_A = -\frac{n_B}{n_A + n_B} d\mu_B \quad (4.15.1)$$

$$\text{or} \quad x_A d\mu_A = -x_B d\mu_B$$

where x_A and x_B are the amount fractions of components A and B, respectively.

Dividing throughout by dx_A , we get

$$x_A \frac{d\mu_A}{dx_A} = -x_B \frac{d\mu_B}{dx_A} \quad (4.15.2)$$

Since $x_A + x_B = 1$, therefore

$$dx_A + dx_B = 0$$

Raoult's
it-solvent

B) and

(1)

separate
ectively.

(2)

$$\text{or} \quad dx_A = -dx_B$$

Substituting the above relation in Eq. (4.15.2), we get

$$x_A \frac{d\mu_A}{dx_A} = x_B \frac{d\mu_B}{dx_B} \quad (4.15.3)$$

The chemical potential of any constituent of a liquid mixture is given by

$$\mu_{i(\text{sol})} = \mu_i^* + RT \ln (p/p^\circ) \quad (4.15.4)$$

where p is the partial vapour pressure of that constituent. In deriving the above expression, it is assumed that the vapour behaves as an ideal gas. For the component A, the above equation on differentiating with respect to x_A at constant temperature and total pressure gives

$$\frac{d\mu_A}{dx_A} = RT \frac{d \ln (p_A/p^\circ)}{dx_A} \quad (4.15.5)$$

Similarly, for the component B, differentiation with respect to x_B gives

$$\frac{d\mu_B}{dx_B} = RT \frac{d \ln (p_B/p^\circ)}{dx_B} \quad (4.15.6)$$

Multiplying Eq. (4.15.5) by x_A and Eq. (4.15.6) by x_B , and equating the resultant expressions (Eq. 4.15.3), we get

$$x_A \frac{d \ln (p_A/p^\circ)}{dx_A} = x_B \frac{d \ln (p_B/p^\circ)}{dx_B}$$

or

$$\frac{d \ln (p_A/p^\circ)}{d \ln x_A} = \frac{d \ln (p_B/p^\circ)}{d \ln x_B} \quad (4.15.7)$$

Equation (4.15.7) is known as the *Duhem-Margules equation*. It relates the partial pressures of the two constituents with their corresponding amount fractions. Equation (4.15.7) is applicable to both ideal and nonideal liquid mixtures, since in its derivation nowhere the nature of the liquid mixture is involved. The only assumption made was that the vapour behaves as an ideal gas.

Application of Duhem-Margules Equation

One of the relations for the partial pressure of the component A in a binary liquid solution is

$$p_A = p_A^* x_A \exp(\alpha x_B^2) \quad (4.15.8a)$$

and that for the component B is

$$p_B = p_B^* x_B \exp(\alpha x_A^2) \quad (4.15.8b)$$

where p_A^* and p_B^* are the vapour pressures of pure liquids A and B, respectively. The symbol α is a constant which has the same value for both the components. For ideal solutions $\alpha = 0$; for nonideal solutions α is positive for solutions exhibiting positive deviation from ideality, and negative for solutions exhibiting negative deviation from ideality. Since α is same for both the components, it follows that both components behave in an identical manner. Thus, we have:

(i) If one component behaves in an ideal manner, the other one will also behave ideally.

(ii) If one component shows positive (or negative) deviation from ideality so also must the other.

The above conclusions can be derived directly from Eq. (4.15.7) as follows.

When One component behaves ideally Let this component be A. Then, according to Raoult's law, we have

$$p_A = p_A^* x_A$$

$$\text{or} \quad \ln(p_A/p^\circ) = \ln(p_A^*/p^\circ) + \ln x_A$$

$$\text{Hence} \quad d \ln(p_A/p^\circ) = d \ln x_A$$

$$\text{or} \quad \frac{d \ln(p_A/p^\circ)}{d \ln x_A} = 1$$

Thus, according to the Duhem-Margules relation (Eq. 4.15.7), we must also have

$$\frac{d \ln(p_B/p^\circ)}{d \ln x_B} = 1 \quad \text{or} \quad d \ln(p_B/p^\circ) = d \ln x_B$$

Integration of the above expression gives

$$\int d \ln(p_B/p^\circ) = \int d \ln x_B \quad \text{or} \quad \ln(p_B/p^\circ) = \ln x_B + I$$

where I is the constant of integration. Its value may be determined from the fact that at $x_B = 1$, $p_B = p_B^*$ and hence

$$I = \ln(p_B^*/p^\circ)$$

$$\text{Thus} \quad \ln(p_B/p^\circ) = \ln x_B + \ln(p_B^*/p^\circ) = \ln(x_B p_B^*/p^\circ)$$

$$\text{or} \quad p_B = x_B p_B^*$$

that is, the second component also follows Raoult's law and thus behaves in an ideal manner.

When one component exhibits positive deviation Let this component be A. Obviously, we have

$$p_{A(\text{real})} > p_{A(\text{ideal})} = p_A^* x_A$$

$$\text{or} \quad \ln(p_{A(\text{real})}/p^\circ) > \ln(p_{A(\text{ideal})}/p^\circ) = \ln(p_A^*/p^\circ) + \ln x_A$$

Therefore

$$\frac{d \ln(p_{A(\text{real})}/p^\circ)}{dx_A} > \frac{d \ln(p_{A(\text{ideal})}/p^\circ)}{dx_A} = \frac{1}{x_A}$$

$$\text{or } x_A \frac{d \ln (p_{A(\text{real})}/p^\circ)}{dx_A} > \frac{x_A d \ln (p_{A(\text{ideal})}/p^\circ)}{dx_A} = 1$$

$$\text{i.e. } \frac{d \ln (p_{A(\text{real})}/p^\circ)}{d \ln x_A} > 1$$

Thus, according to the Duhem-Margules equation, we must also have

$$\frac{d \ln (p_{B(\text{real})}/p^\circ)}{d \ln x_B} > 1$$

After integration, we will have

$$p_{B(\text{real})} > p_{B(\text{ideal})} = p_B^* x_B$$

that is, the second component also exhibits positive deviation from ideality.

Arguing in a similar manner, it can be shown that if one component exhibits negative deviation, the other will also do so.

Konowaloff's Rule

A general conclusion regarding the composition of the vapour phase in equilibrium with any particular solution (ideal or nonideal) can be obtained theoretically through the Duhem-Margules equation.

From Eq. (4.15.7), we have

$$\frac{d (\ln p_A/p^\circ)}{d \ln x_A} = \frac{d (\ln p_B/p^\circ)}{d \ln x_B} \quad \text{or} \quad \frac{x_A dp_A}{p_A dx_A} = \frac{x_B dp_B}{p_B dx_B} \quad (4.15.9)$$

Since $x_A + x_B = 1$ therefore $dx_A + dx_B = 0$

or $dx_B = -dx_A$

Substituting the above expression in Eq. (4.15.9), we get

$$\frac{x_A dp_A}{p_A dx_A} + \frac{x_B dp_B}{p_B dx_A} = 0 \quad (4.15.10)$$

Now $p = p_A + p_B$, therefore $\frac{dp}{dx_A} = \frac{dp_A}{dx_A} + \frac{dp_B}{dx_A}$ (4.15.11)

Substituting dp_A/dx_A from Eq. (4.15.10) in the above equation, we get

$$\frac{dp}{dx_A} = -\frac{x_B dp_B}{p_B dx_A} \frac{p_A}{x_A} + \frac{dp_B}{dx_A} = \frac{dp_B}{dx_A} \left[1 - \frac{x_B p_A}{x_A p_B} \right] \quad (4.15.12)$$

From Eq. (4.8.1), it follows that the addition of either of the components causes an increase in the corresponding partial vapour pressure (i.e. dp_A/dx_A and dp_B/dx_B are positive). Hence, the derivative dp_B/dx_A , which is equal to $-dp_B/dx_B$, must be negative. The change in the total vapour pressure with the addition of dx_A (i.e. the derivative dp/dx_A in Eq. 4.15.12) can be either positive or negative depending upon the sign of the expression within brackets in Eq. (4.15.12). Thus, we have two alternatives as given below.

(i) $x_B p_A > x_A p_B$: In this case dp/dx_A is positive. The condition

$$x_B p_A > x_A p_B$$

can be written as

$$\frac{p_A}{p_B} > \frac{x_A}{x_B}$$

Using Dalton's law of partial pressures, we have

$$\frac{y_A}{y_B} > \frac{x_A}{x_B} \quad (4.15.13)$$

that is, the ratio of amount fractions of A and B in the vapour phase is greater than the corresponding ratio in the liquid phase. This means that the vapour is relatively richer in A than is the liquid from which it vaporizes. Thus, the vapour is richer in the component (here A) whose addition to the liquid mixture results in an increase in total vapour pressure (i.e. dp/dx_A is positive).

(ii) $x_B p_A < x_A p_B$: In this case, dp/dx_A is negative or dp/dx_B is positive. The condition

$$x_B p_A < x_A p_B$$

can be written as

$$\frac{p_A}{p_B} < \frac{x_A}{x_B} \quad (4.15.9)$$

Employing Dalton's law of partial pressures, we get

$$\frac{y_A}{y_B} < \frac{x_A}{x_B} \quad \text{or} \quad \frac{y_B}{y_A} > \frac{x_B}{x_A} \quad (4.15.14)$$

that is, the ratio of amount fractions of B and A in the vapour phase is greater than the corresponding ratio in the liquid phase. This means that the vapour phase is relatively richer in B than is the liquid from which it vaporizes. Thus, the vapour is richer in the component (here B) whose addition to the liquid mixture results in an increase in total vapour pressure (i.e. dp/dx_B is positive).

Statement of Konowaloff's Rule

Hence we have a general conclusion that:

The vapour phase is richer in the component whose addition to the liquid mixture results in an increase in total vapour pressure, or alternatively, the liquid phase is richer in the component whose addition to the liquid mixture results in a decrease in total vapour pressure.

This rule was stated empirically by D.P. Konowaloff on the basis of his systematical measurements of total vapour pressure of homogeneous liquid systems and is, therefore, known as *Konowaloff's rule*.

Alternative Statement of Konowaloff's Rule

Since the boiling point of a solution is inversely related to its vapour pressure (higher vapour pressure means lower boiling point and *vice versa*), we can state Konowaloff's rule in terms of boiling point of the mixture:

The vapour phase is richer in the component whose addition to the liquid mixture causes a decrease in its boiling point, or alternatively, the liquid phase is richer in the component whose addition to the liquid mixture causes an increase in its boiling point.

4.16 TEMPERATURE-COMPOSITION DIAGRAMS OF NONIDEAL SOLUTIONS

Based on the extent of deviations, a nonideal solution can be classified into the following two categories.

A Little Deviation from Ideality

In this case the vapour pressure versus composition curve and the boiling point versus composition curve are very similar to those of an ideal solution (Figs. 4.10.1 and 4.12.1). The total vapour pressure of the liquid mixture lies between those of the pure components. It increases or decreases regularly with the composition of the mixture. Consequently, boiling point of the liquid mixture also lies in between those of the pure components and it increases or decreases regularly with the composition.

Very Large Deviation from Ideality

In this category, the solution exhibits either maximum or minimum in the pressure versus composition curve. Since boiling point is inversely related to vapour pressure, it is expected that the solution will exhibit either a minimum or a maximum in the boiling point curve at a concentration where maximum or minimum in the total vapour pressure is observed. It is also expected that the general appearance of temperature versus composition curve will have one to one inverse correspondence with that of the vapour pressure versus composition curve.

An Important Comment

The temperature versus composition curve for a given solution can be drawn in accordance with Konowaloff's rule. Before doing so, we consider the composition of the vapour phase relative to that of the liquid phase at a point where maximum or minimum in the vapour pressure versus composition curve is observed. At this point, dp/dx_A is zero, and hence from Eq. (4.15.12), we have either dp_B/dx_A equal to zero or $x_B p_A$ is equal to $x_A p_B$. The former will not be true as it means that the partial pressure would remain constant in spite of a change in composition of the solution. The only alternative is that

$$x_B p_A = x_A p_B \quad \text{or} \quad \frac{p_A}{p_B} = \frac{x_A}{x_B} \quad \text{or} \quad \frac{y_A}{y_B} = \frac{x_A}{x_B} \quad (4.16.1)$$

Thus, the ratio of amount fractions of A and B in the vapour phase is the same as that in the liquid phase. We conclude that the composition of the vapour phase is the same as that of the liquid with which it is in equilibrium. It is, therefore, expected that the vaporous curve and the liquidus curve in a temperature versus composition diagram meet each other at maximum or minimum point, so that both the phases have same composition at this point.

Depict
Diagram



Fig. 4.
a syst

A Lit
from

Depiction of Diagrams

Keeping in mind the above fact and that the vapour phase is stable at higher temperatures, we can readily draw temperature versus composition diagrams for nonideal solutions as described in the following.

Solution exhibiting a maximum in the total vapour pressure curve corresponding to Fig. 4.14.1 It will exhibit a minimum in the boiling point and thus the temperature versus composition curves will have an appearance as given in Fig. 4.16.1.

Solution exhibiting a minimum in the total vapour pressure curve corresponding to Fig. 4.14.2 It will exhibit a maximum in the boiling point and thus the temperature versus composition curves will have an appearance as given in Fig. 4.16.2.

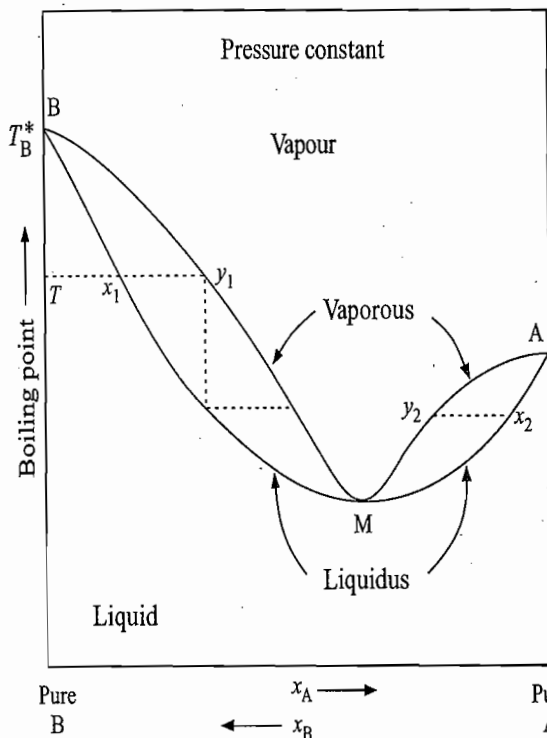


Fig. 4.16.1 Temperature-composition diagram for a system exhibiting a minimum in boiling point

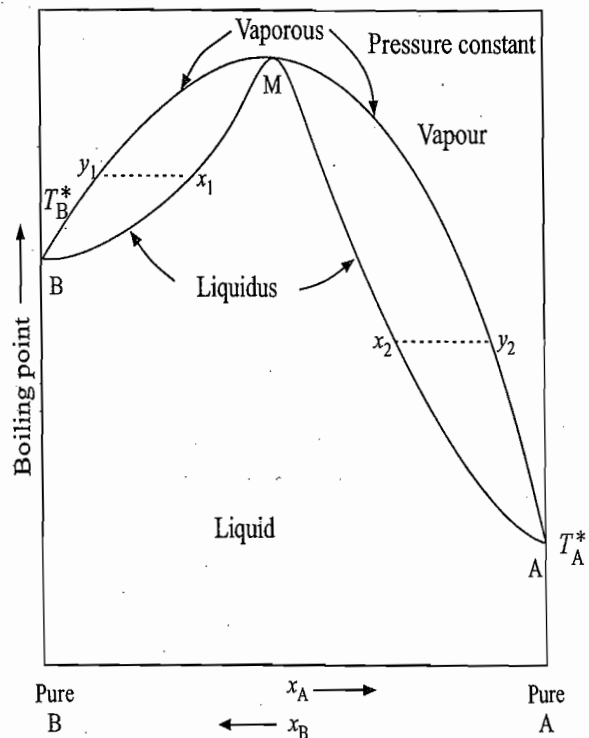


Fig. 4.16.2 Temperature-composition diagram for a system exhibiting a maximum in boiling point

FRACTIONAL DISTILLATION OF NONIDEAL SOLUTIONS

We now consider the results that are obtained when a nonideal liquid mixture is subjected to fractional distillation.

A Little Deviation from Ideality

Since the temperature-composition diagram for this type of solution is very similar to that of an ideal solution, it is obvious that the given liquid mixture on fractionating will yield the pure constituents. During distillation, the liquid phase becomes richer in the lesser volatile component, the boiling point of which rises gradually, and the vapour phase becomes richer in the more volatile component. Thus using a fractionating column, the more volatile constituent can be removed from the top of the fractionating column and the lesser volatile one from the bottom of the column.

Very Large Deviations from Ideality

Fractional distillation of nonideal solutions exhibiting minimum and maximum boiling points yield, in general, only one of the constituents in the pure form, depending upon the composition of the liquid mixture, as discussed below.

Solutions exhibiting a minimum in the boiling point Consider the distillation of a liquid mixture of composition, say x_1 , lying between the points B and M as shown in Fig. 4.16.1. The liquid mixture will start boiling at temperature T and the vapour which appeared on boiling will have composition y_1 . Since the vapour phase carries relatively more of the constituent A, it is obvious that the remaining liquid will contain more of the constituent B and will thus boil at a higher temperature. As the distillation proceeds, composition of the liquid phase will move along x_1B , i.e. towards the pure B, and that of the vapour phase will move along y_1M , i.e. towards the point M. At the point M, the vapour phase and the liquid phase have identical compositions. Thus, condensing the vapour and distilling the resultant solution will not yield any further separation of the constituents. The liquid at this point would boil at a constant temperature, as if it consisted of a single constituent. Thus, we see that the fractional distillation of liquid mixture of composition x_1 will yield vapour of composition corresponding to the point M and the pure liquid B. The former can be collected from the top of the fractionating column and the latter from the bottom of the column.

A similar conclusion is reached when the composition of the liquid mixture lies between A and M (say x_2) as shown in Fig. 4.16.1. In this case, as the distillation proceeds, the vapour phase will contain more and more of B and ultimately acquire the composition corresponding to the point M and the liquid phase will contain more and more of A and ultimately yield pure A. Thus, the fractional distillation of this liquid mixture will yield vapour of composition corresponding to the point M, which can be collected from the top of the fractionating column and the liquid of pure constituent A, which can be collected from the bottom of the column.

Thus, we see that the fractional distillation of a solution exhibiting a minimum in the boiling point yields:

Distillate A constant boiling liquid mixture of composition corresponding to the point M.

Residue Pure A (and not B at all) if the composition of the liquid mixture lies between A and M or pure B (and not A at all) if the composition lies between B and M.

Solutions exhibiting a maximum in the boiling point Such a solution can be analyzed in a similar manner. Consider, for example, a liquid mixture of composition x_1 (or x_2) as shown in Fig. 4.16.2. When this liquid mixture starts boiling, the vapour has a composition y_1 (or y_2). Since the vapour is relatively richer in the constituent B (or A), the remaining liquid becomes richer in the constituent A (or B). Thus, during distillation, composition of the liquid phase moves along x_1M (or x_2M), the boiling point of which rises gradually and that

Azeo

4.17
The Deri

of the vapour phase moves along y_1B (or y_2A). Hence the end products of fractional distillation of a liquid mixture are:

Distillate Pure A (and not B at all) if the composition of the liquid mixture lies between A and M or pure B (and not A at all) if the composition lies between B and M.

Residue A constant boiling liquid mixture of composition corresponding to the point M.

Azeotropic Mixture

We have seen that a liquid mixture of composition M corresponding to the minimum or maximum boiling point, boils at a constant temperature and can be distilled without any change of composition. Such a liquid mixture is known as *azeotropic mixture* or simply *azeotrope* (Greek: to boil unchanged). For a given pair of liquids and at a given pressure, the composition of the azeotropic mixture and the corresponding boiling point are quite definite. Their values vary as the external pressure is changed. This fact supports that the solution at the point M is really a mixture of the two liquids and not a liquid containing only one component formed as a result of definite union of the two liquids. Thus the compound formation at the point M is excluded. Some examples of azeotropic mixtures are given in Table 4.16.1.

Table 4.16.1 Some Examples of Azeotropic Mixtures. The boiling Points (B.Pt.; T/K = $\theta_j^\circ\text{C} + 273$) Referred to are at 1 atm External Pressure

Type	Components		Azeotrope	
	A	B	mass % A	b.pt./K
Minimum	Water (373 K)	Ethyl alcohol (351.3 K)	4	351.2
	Water (373 K)	Ethyl acetate (352.6 K)	11.3	346.4
	Carbon tetrachloride (349.8 K)	Methyl alcohol (337.7 K)	79.49	328.7
	Chloroform (334.2 K)	Methyl alcohol (337.7 K)	87.4	326.4
Maximum	Water (373 K)	Nitric acid (359.7 K)	68	393.5
	Water (373 K)	Hydrochloric acid (353 K)	20.22	381.6
	Chloroform (334.2 K)	Acetone (329.1 K)	78.5	337.4
	Phenol (455.2 K)	Aniline (457.4 K)	42	459.2

The variation of the composition and boiling point of azeotropic mixture of HCl-water and pyridine-formic acid solutions with pressure is given in Table 4.16.2. Since the composition of azeotrope varies with pressure, it indicates that the azeotrope consists of pure mixture and not a single compound.

4.17 KONOWALOFF'S RULE — REVISITED

Thermodynamic Derivation

An alternative proof of Konowaloff's rule can be derived from the quantitative relation of shift in the boiling point of the solvent when a volatile solute is added to it. We will derive the relation on the assumption that both liquid mixture and vapour behave ideally. This assumption will be applicable only when the solution is very dilute.

Table 4.16.2 Variation of Composition and the Boiling Point of the Azeotropic Mixture with the External Pressure

HCl-H ₂ O			Pyridine + Formic acid		
<i>p</i> /Torr	mass % HCl	b.pt./°C	<i>p</i> /Torr	mol %	b.pt./°C
500	20.916	97.578	760	58.4	138.25
700	20.360	106.424	570	58.9	129.4
760	20.22	108.584	380	59.5	117.5
800	20.155	110.007	190	60.2	99.5
			120	60.8	87.10

The condition of phase equilibrium between the liquid mixture and the vapour for one of the components (say solvent) is

$$\mu_{1(l)} = \mu_{1(v)}$$

where the subscripts 1 and v within the brackets stand for liquid and vapour, respectively.

If it is assumed that both liquid and vapour mixtures behave ideally, then we have

$$\mu_{1(l)}^* + RT \ln x_{1(l)} = \mu_{1(v)}^* + RT \ln y_{1(v)}$$

Rearranging the above expression, we have

$$R(\ln x_{1(l)} - \ln y_{1(v)}) = \frac{\mu_{1(v)}^* - \mu_{1(l)}^*}{T} = \frac{\Delta_{\text{vap}} G_{1,m}^*}{T} \quad (4.17.1)$$

where $\Delta_{\text{vap}} G_{1,m}^*$ is the molar free energy of vaporization of the pure solvent at temperature T and pressure p . For $p = 1$ atm, we have

$$\Delta_{\text{vap}} G_{1,m}^{\circ} = \Delta_{\text{vap}} H_{1,m}^{\circ} - T \Delta_{\text{vap}} S_{1,m}^{\circ}$$

and at the normal boiling point T^* of the pure solvent

$$\Delta_{\text{vap}} S_{1,m}^{\circ} = \frac{\Delta_{\text{vap}} H_{1,m}^{\circ}}{T^*}$$

Therefore, we have

$$\Delta_{\text{vap}} G_{1,m}^{\circ} = \Delta_{\text{vap}} H_{1,m}^{\circ} - T \frac{\Delta_{\text{vap}} H_{1,m}^{\circ}}{T^*} = \Delta_{\text{vap}} H_{1,m}^{\circ} \left(1 - \frac{T}{T^*}\right)$$

Substituting the above expression in Eq. (4.17.1), we get

$$R(\ln x_{1(l)} - \ln y_{1(v)}) = \frac{\Delta_{\text{vap}} H_{1,m}^{\circ}}{T} \left(1 - \frac{T}{T^*}\right) = \frac{\Delta_{\text{vap}} H_{1,m}^{\circ} (-\Delta T_b)}{T T^*} \quad (4.17.2)$$

where $\Delta T_b = T - T^*$.

Equation (4.17.2) can be simplified under the following approximations.

(i) For a dilute solution, T will be very near to T^* , so that the term TT^* may be replaced by T^{*2} .

(ii) For a dilute solution, we have

$$\ln x_{1(l)} = \ln(1 - x_{2(l)}) \approx -x_{2(l)}$$

$$\ln y_{1(v)} = \ln(1 - y_{2(v)}) \approx -y_{2(v)}$$

With these approximations, Eq. (4.17.2) reduces to

$$R(-x_{2(l)} + y_{2(v)}) = \frac{\Delta_{\text{vap}}H_{1,m}^{\circ}(-\Delta T_b)}{T^{*2}}$$

$$\text{or } -R x_{2(l)} \left(1 - \frac{y_{2(v)}}{x_{2(l)}}\right) = \frac{\Delta_{\text{vap}}H_{1,m}^{\circ}(-\Delta T_b)}{T^{*2}}$$

$$\text{or } \Delta T_b = \frac{RT^{*2}}{\Delta_{\text{vap}}H_{1,m}^{\circ}} x_{2(l)} \left(1 - \frac{y_{2(v)}}{x_{2(l)}}\right) \quad (4.17.3)$$

Equation (4.17.3) can be written in terms of molality of the liquid solution using the approximation:

$$x_{2(l)} = \frac{n_{2(l)}}{n_{1(l)} + n_{2(l)}} \approx \frac{n_{2(l)}}{n_{1(l)}} = \frac{n_{2(l)}}{m_{1(l)}/M_1} = \left(\frac{n_{2(l)}}{m_{1(l)}}\right) M_1 = m M_1$$

Thus, Eq. (4.17.3) modifies to

$$\Delta T_b = \frac{RT^{*2} M_1}{\Delta_{\text{vap}}H_{1,m}^{\circ}} m \left(1 - \frac{y_{2(v)}}{x_{2(l)}}\right)$$

$$\text{or } \Delta T_b = K_b m (1 - K) \quad (4.17.4)$$

where K is the distribution coefficient of the solute between the vapour phase and the liquid phase and is given by

$$K = \frac{\text{Amount fraction of the solute in vapour phase}}{\text{Amount fraction of the solute in liquid phase}} \quad (4.17.5)$$

If in Eq. (4.17.4), $K = 0$ (i.e. the solute is nonvolatile), it reduces to $\Delta T_b = K_b m$, an expression which we derived earlier in Section 2.7 for the elevation of boiling point of the solvent when a nonvolatile solute is dissolved in it.

ΔT_b in Eq. (4.17.4) is equal to $T - T^*$ and can have either positive or negative value depending upon the value of K . Hence, we will have the following two cases.

(i) ΔT_b Positive Provided $K < 1$ (i.e. $y_{2(v)} < x_{2(l)}$)

In this case, $T > T^*$ and an elevation in the boiling point of the solvent occurs. The presence of $(1 - K)$ factor in Eq. (4.17.4) indicates that the numerical

Application of Eq. (4.17.4)

value of ΔT_b is smaller than the corresponding value expected for a solution containing a nonvolatile solute.

(ii) ΔT_b Negative Provided $K > 1$ (i.e. $y_{2(v)} > x_{2(l)}$)

In this case, $T < T^*$ and a depression in the boiling point of the solvent occurs.

Agreement with Konowaloff's Rule

The above two conclusions are, in fact, the statements of Konowaloff's rule as may be seen from the following analysis.

According to Konowaloff's rule, the vapour phase is richer in the component whose addition to the liquid mixture causes a decrease in its boiling point. This is, in fact, the second conclusion which we have derived above. According to this rule, the depression of boiling point takes place only when $K > 1$, i.e. the vapour contains relatively more of the solute than the liquid and thus the addition of such a solute in the solvent (or solution) will cause a decrease in the boiling point of the latter.

Alternatively, the liquid phase is richer in the component whose addition to the liquid mixture causes an increase in its boiling point. This is, in fact, the first conclusion which we have derived above. According to this rule the elevation of boiling point takes place only when $K < 1$, i.e. the vapour contains relatively lesser of the solute than the liquid (or the liquid contains relatively more of the solute than the vapour) and thus the addition of such a solute in the solvent (or the solution) will cause an increase in the boiling point of the latter.

Now the nature of curves depicted in Figs 4.16.1 and 4.16.2 may be understood qualitatively. Nonideal solutions exhibiting maximum boiling point are observed whenever molecular attractions between unlike molecules are greater than those between like molecules. In such cases, the escaping tendencies of molecules of both the components are weakened with the result that the amount fraction of the solute in the vapour phase is smaller than the corresponding amount fraction in the liquid phase. Consequently, $K_{A \text{ in } B}$ (i.e. $y_{A(v)}/x_{A(l)}$, where A is solute and B is solvent) and $K_{B \text{ in } A}$ (i.e. $y_{B(v)}/x_{B(l)}$, where B is solute and A is solvent) are less than one and thus there occurs an elevation in the boiling point when either B is added to A or A is added to B. Hence the boiling point versus composition curves exhibit upward trends on either end of the diagram and thus a maximum at a point where the liquidus and vaporous fragments meet each other is observed (Fig. 4.16.2).

On the other hand, solutions exhibiting minimum boiling point are observed whenever molecular attractions between unlike molecules are smaller than those between like molecules. This results in the increase in the escaping tendencies of molecules of both the components with the result that the amount fraction of the solute in the vapour phase is greater than the corresponding amount fraction in the liquid phase. Consequently, $K_{A \text{ in } B}$ and $K_{B \text{ in } A}$ are greater than one and thus there occurs a depression in the boiling point when either B is added to A or A is added to B (Fig. 4.16.1). Hence the boiling point versus composition curves exhibit downward trends on either end and thus a minimum at a point where the liquidus and vaporous fragments meet each other is observed.

4.18 PARTIALLY MISCIBLE LIQUIDS

General Considerations

Certain pairs of liquids are miscible with each other in limited range of concentrations and are known as partial miscible liquids. For example, if a small quantity of phenol, ether or aniline is added to water at room temperature, and the mixture is shaken, it is observed that the organic compound dissolves completely in water. If the addition of the organic compound is continued, a stage is reached where the compound is no more soluble and thus two solutions are formed. These are: (i) a saturated solution of the organic compound in water, and (ii) a saturated solution of water in the organic compound.

These two solutions are in equilibrium with each other and are known as *conjugate solutions*. The compositions of these solutions are fixed and are independent of the relative amounts of the two solutions. Thus, if more of organic compound is added, it is dispersed into these two solutions in such a way that the compositions of both the solutions remain unaltered, the only thing that vary is the relative amounts of the two solutions. As more and more of organic compound is added, it continues to disperse in these two solutions and the net effect is that the amount of the solution of organic compound in water is gradually decreased, whereas that of water in organic compound is gradually increased. Ultimately, a stage is reached where the solution of organic compound in water is present in an infinitesimal amount. At this stage, the addition of a very small amount of organic compound converts the system once again to a single solution, but this time to a saturated solution of water in organic compound. The addition of more organic compound simply makes the solution more and more unsaturated with respect to water.

The above sequence of formation of a single solution followed by two solutions and once again into a single solution is observed only in case of those liquids which differ very widely from each other and show large positive deviations from Raoult's law.

Theoretical Consideration

The formation of partial miscible liquid mixtures has a sound theoretical background. The extent of positive deviation from Raoult's law is proportional to the value of α in Eq. (4.15.8), the deviation increases as the value of α increases. For a given pair of liquids, the value of α can be increased by lowering the temperature of the system: the deviations being larger at lower temperature and smaller at higher temperatures. In general, the partial vapour pressure curve for each component undergoes the changes of types I, II, III and IV shown in Fig. 4.18.1, as the temperature of system is lowered (or as α is increased). Curve I corresponds to a higher temperature where lesser deviations are observed and curve IV corresponds to a lower temperature where the deviations are larger. Special interest attaches to curves of types III and IV, where instead of a smooth curve, a curly shaped curve is obtained. These curves have maximum and minimum in the curly portion. The composition of solution at maximum or minimum can be obtained by differentiating Eq. (4.15.8) with respect to x and setting the resultant equation to zero.

Writing Eq. (4.15.8) without subscripts, we have

$$p = p^*x \exp\{\alpha(1-x)^2\}$$

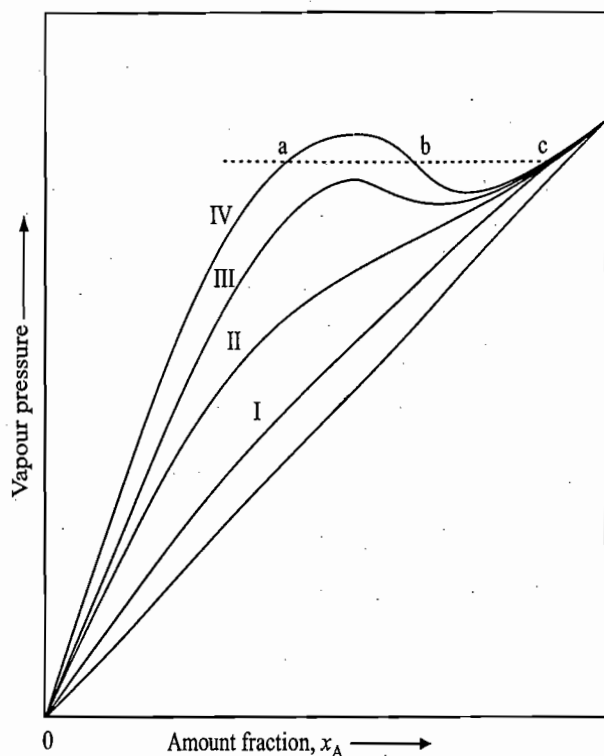


Fig. 4.18.1 Vapour pressure-composition diagram for partial miscible liquids

Differentiating this with respect x , we get

$$\frac{dp}{dx} = p^* \exp\{\alpha(1-x)^2\} + p^*x \{-2\alpha(1-x)\} \exp\{\alpha(1-x)^2\}$$

or
$$\frac{dp}{dx} = p^* \exp\{\alpha(1-x)^2\} \{1 - 2\alpha x(1-x)\}$$

Equating the above expression to zero, we get

$$1 - 2\alpha x(1-x) = 0$$

or
$$2\alpha x^2 - 2\alpha x + 1 = 0 \quad (4.18.1)$$

Solving for x , we have

$$x = \frac{2\alpha \pm \sqrt{4\alpha^2 - 8\alpha}}{4\alpha} \quad (4.18.2)$$

The roots of Eq. (4.18.2) are real if $\alpha > 2$ and approaches each other as $\alpha \rightarrow 2$. At $\alpha = 2$, the two roots are identical and for $\alpha < 2$, they are imaginary.

It can be seen from the curly curve that there are three solutions of different concentrations which have the same vapour pressure. For example, on curve IV, the three solutions are represented by the points a, b and c. This situation, however, is not consistent with the phase rule, according to which, we have

$$F = C - P + 2 = 4 - P \quad (\text{as } C = 2)$$

or
$$P = 4 - F$$

Tem
Corr
Diag

Fig.
ture
diag
mist

If the state of the system is to be defined completely by only one degree of freedom (i.e. temperature alone), then we can have at the most three phases in equilibrium with each other. Of these three phases, one is the vapour phase thus, we are left with only two liquid phases and, therefore, we cannot have more than two liquid phases in equilibrium with each other. In fact, the curly shape abc is not found experimentally and one observes a flat portion between a and c, the liquid phase b having no real existence. The vapour pressure remains constant between a and c.

Thus, we see that for a binary liquid system exhibiting large deviations from Raoult's law, there occurs limited solubility of one liquid into another and hence two saturated solutions are formed over a certain range of composition. Beyond this range, the two liquids are completely miscible with each other and thus there exists a miscible gap in the system.

Temperature-Composition Diagram

The compositions of the two conjugate solutions in the miscible gap are quite definite for a given temperature and are independent of the relative amounts of the two solutions. This fact is consistent with the phase rule. For $P = 2$ and $C = 2$, we have

$$F = C - P + 2 = 2$$

One of these two degrees of freedom represents the external pressure and has a fixed value. Hence stating the value of one other parameter, namely, temperature or composition of either of the conjugate solutions, defines the given system completely. If, for example, temperature is stated then compositions of the two solutions are fixed. If a graph between compositions of the two solutions and the corresponding temperature is plotted, we obtain a curve (known as solubility curve) of the type shown in Fig. 4.18.2.

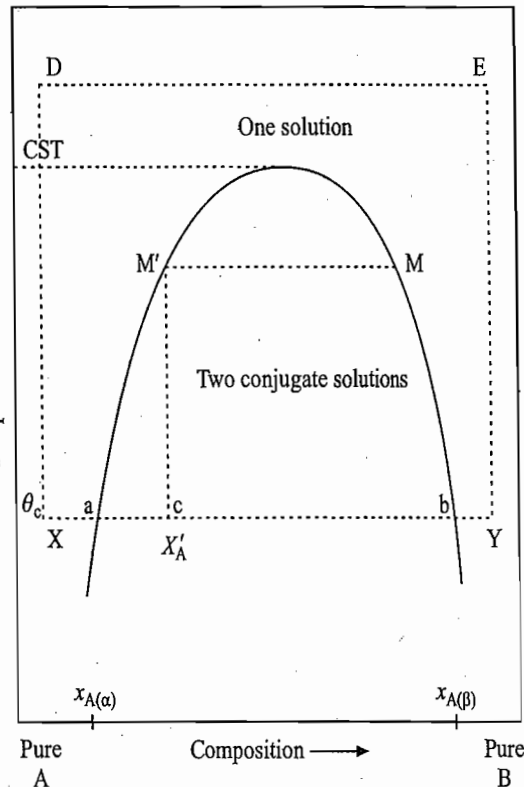


Fig. 4.18.2 Temperature-composition diagram for partial miscible liquids

(4.18.1)

(4.18.2)

each other as
e imaginary.
solutions of
example, on
and c. This
o which, we

Critical Solution Temperature

The compositions of the two solutions become closer as temperature is raised. This is due to the increase in mutual solubilities of the two components as the temperature is raised. At a certain temperature, the compositions of the two solutions become identical and both the solutions merge into each other, thereby forming a single solution. This temperature is known as the *consolute temperature* or the *critical solution temperature* (CST). When the temperature is greater than CST, the two liquids are miscible in all proportions and thus always form a single solution. In fact, a point outside the curve of Fig. 4.18.2 represents a single solution, whereas that within the curve represents two conjugate solutions in equilibrium with each other.

The compositions of the two conjugate solutions at a given temperature are given by the two points on the solubility curve. Consider, for example, the point *c* of composition X'_A within the curve at temperature θ_c . At this point, the system consists of two solutions α and β (represented by the points *a* and *b*, respectively) of compositions $x_{A(\alpha)}$ and $x_{A(\beta)}$. In fact, the point *c* anywhere on the horizontal line *ab* represents two solutions of compositions $x_{A(\alpha)}$ and $x_{A(\beta)}$. The only thing that varies from point to point is the relative amounts of the two solutions, which can be calculated by using the lever rule as derived below.

Lever Rule

Let the amounts of species A and B at the point *c* be n_A and n_B , respectively. Now at the point *c* the system contains two conjugate solutions α and β of compositions $x_{A(\alpha)}$ and $x_{A(\beta)}$, respectively. Of the total amount of A, let the amounts present in these two solutions be $n_{A(\alpha)}$ and $n_{A(\beta)}$. Similarly, let $n_{B(\alpha)}$ and $n_{B(\beta)}$ be the amounts of B present in these two solutions. Obviously,

$$X'_A = \frac{n_A}{n_A + n_B} = \frac{n_{A(\alpha)} + n_{A(\beta)}}{n_{A(\alpha)} + n_{A(\beta)} + n_{B(\alpha)} + n_{B(\beta)}} \quad (4.18.3)$$

$$\text{Now } ac = X'_A - x_{A(\alpha)} = X'_A - \frac{n_{A(\alpha)}}{n_{A(\alpha)} + n_{B(\alpha)}}$$

$$\text{or } (n_{A(\alpha)} + n_{B(\alpha)})(ac) = (n_{A(\alpha)} + n_{B(\alpha)})X'_A - n_{A(\alpha)} \quad (4.18.4)$$

$$\text{and } bc = x_{A(\beta)} - X'_A = \frac{n_{A(\beta)}}{n_{A(\beta)} + n_{B(\beta)}} - X'_A$$

$$\text{or } (n_{A(\beta)} + n_{B(\beta)})(bc) = n_{A(\beta)} - (n_{A(\beta)} + n_{B(\beta)})X'_A \quad (4.18.5)$$

Subtracting Eq. (4.18.5) from Eq. (4.18.4), we get

$$\begin{aligned} & (n_{A(\alpha)} + n_{B(\alpha)})(ac) - (n_{A(\beta)} + n_{B(\beta)})(bc) \\ &= (n_{A(\alpha)} + n_{B(\alpha)} + n_{A(\beta)} + n_{B(\beta)})X'_A - (n_{A(\alpha)} + n_{A(\beta)}) \end{aligned} \quad (4.18.6)$$

In view of Eq. (4.18.3), the right side of Eq. (4.18.6) is zero. Hence

$$\frac{ac}{bc} = \frac{n_{A(\beta)} + n_{B(\beta)}}{n_{A(\alpha)} + n_{B(\alpha)}} = \frac{\text{Total amount of substances in solution } \beta}{\text{Total amount of substances in solution } \alpha} \quad (4.18.7)$$

Equation (4.18.7) is the required lever rule.

We consider below the application of the phase rule to the following three typical cases.

Application of the Phase Rule

A point outside the solubility curve Here we have

$$P = 1 \quad \text{and} \quad C = 2$$

Therefore

$$F = C - P + 2 = 3$$

Since the pressure is kept constant (usually 1 atm), the values of two variables, namely temperature and composition of the solution, should be stated in order to define the system completely.

A point inside the solubility curve Here we have

$$P = 2 \quad \text{and} \quad C = 2$$

Therefore

$$F = C - P + 2 = 2$$

Once again, since pressure is constant, we would have to state the value of one variable (usually temperature) in order to define the system completely. As stated earlier, the compositions of the two solutions will have fixed values and will be represented by the two points on the solubility curve corresponding to the given temperature.

At critical solution temperature At this point, we have one restricted condition of identical compositions of the two solutions. Thus, we have

$$F = (C - r) - P + 2 = (2 - 1) - 2 + 2 = 1$$

Since p is kept constant, the system is invariant, i.e. the critical solution temperature and the corresponding composition on the curve have fixed values for a given value of pressure (usually 1 atm is chosen for this purpose).

Examples

A few examples of pairs of liquids showing partial miscibility along with their critical solution temperatures and the corresponding compositions are given in Table 4.18.1.

Effects of Changing the Composition

Let us have a system represented by a point X in Fig. 4.18.2. This represents an unsaturated solution of B in A. Now if more of B is added, it continues to dissolve till the point a is reached. At this point, the single solution just splits into two; a saturated solution of B in A of composition $x_{A(\alpha)}$, which is presents

Table 4.18.1 Examples of Pairs of Liquids showing Partial Miscibility

System	CST/°C	Composition
Water-Phenol	65.9	66 mass % of water
Aniline-Hexane	59.6	48 mass % of aniline
Methyl alcohol-Cyclohexane	49.1	29 mass % of methyl alcohol
Methyl alcohol-Carbon disulphide	40.5	20 mass % of methyl alcohol

in the large amount and a saturated solution A in B of composition $x_{A(\beta)}$, which has just started forming. Now as more of B is added, system continues to possess the above two solutions till the point b is reached. The only change that is observed during this interval is that the relative amounts of the two solutions vary; the amount of the solution of B in A gradually decreases whereas that of A in B gradually increases. The relative ratio at any stage can be determined with the help of the lever rule. At point b, the solution of B in A is just going to disappear, and, therefore, is present in a very small amount. Further addition of B gives rise once again to a single solution, but this time an unsaturated solution of A in B (point Y). We can also go from the point X to Y without going through the formation of two solutions. This can be done as follows:

- Raise the temperature of the solution represented by the point X to a point above the critical solution temperature.
- Add more of B till the desired composition of A in B, corresponding to the point Y, is obtained.
- Cool the resultant solution till the point Y is reached.

The above procedure is also shown in Fig. 4.18.2.

Effect of Changing the Temperature

Let us have a system represented by the point c (Fig. 4.18.2). This represents two solutions of B in A and A in B with compositions $x_{A(\alpha)}$ and $x_{A(\beta)}$, respectively. If the temperature of the system is increased, the state of the system is moved vertically, the composition of the solution of A in B changes along bM and that of B in A along aM'. The relative amounts of the two solutions also vary; the amount of B in A is gradually increased whereas that of A in B is gradually decreased. The system continues to have two solutions till the point M' is reached where the solution of A in B is present in vanishing amount. In fact, the system of two solutions becomes a single saturated solution of B in A. The temperature at which this happens is known as the *mutual solubility temperature* (MST). When the temperature is further increased, we get an unsaturated solution of B in A. Obviously, critical solution temperature is the maximum of all mutual solubility temperatures.

Lower Consolute Temperature

There are some binary liquid mixtures which show increase in the mutual solubilities as the temperature is decreased. Such systems, therefore, are expected to have temperature-composition curve just reverse of the curve of Fig. 4.18.2. This is shown in Fig. 4.18.3. The system now has a lower consolute temperature and thus liquids are completely miscible with each other in all respects so long as the temperature is below the lower consolute temperature. Systems showing the

Fig. 4
conso

Low
Cons
Temp

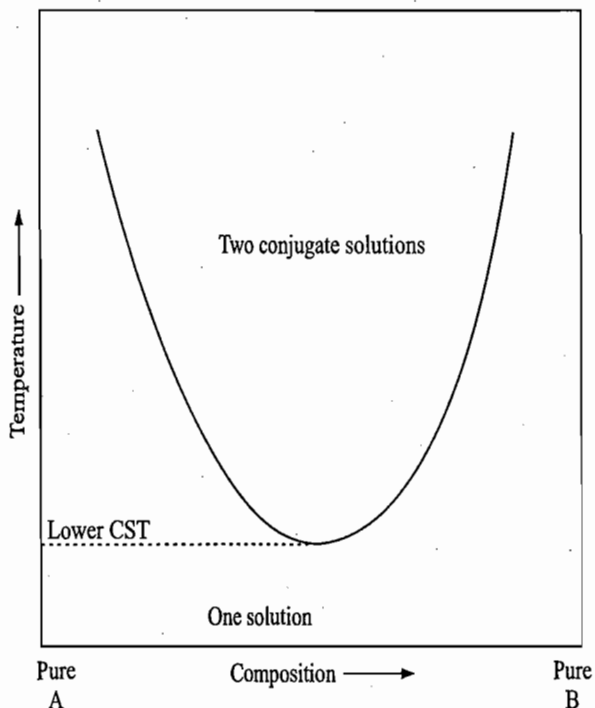
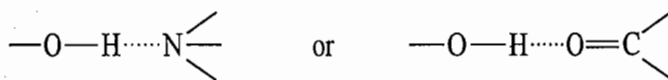


Fig. 4.18.3 The lower consolute temperature

lower CST almost invariably consist of either a hydroxy-compound and an amine or a hydroxy-compound and a keto grouping (or an ether grouping). It is, therefore, expected that the two components partially associate through the hydrogen bonding



The extent of such association depends upon the temperature of the system and it decreases as the temperature is raised. This probably is the reason why their mutual solubilities are decreased as the temperature is increased.

A few examples of pairs of liquids showing lower consolute temperature are given in Table 4.18.2.

Table 4.18.2 Examples of Systems showing Lower CST

System	Lower CST/°C
Triethylamine-water	18.5
γ -Collidine-water	6
Glycerol- <i>m</i> -toluidine	6.7

Lower and Upper Consolute Temperatures

It is found that the mutual solubilities do not continue to decrease as the temperature is increased. After a certain temperature the solutions behave in a normal manner and the solubilities again start increasing with rise in temperature. It is, therefore, expected that such solutions will also show the upper critical solution temperature. The solubility curve for such systems consists of a closed curve and is shown in Fig. 4.18.4. At any point within the closed loop, two liquid phases are present, while that lying outside the loop represents a single solution. The first case of this type to be established was the nicotine-water system, the

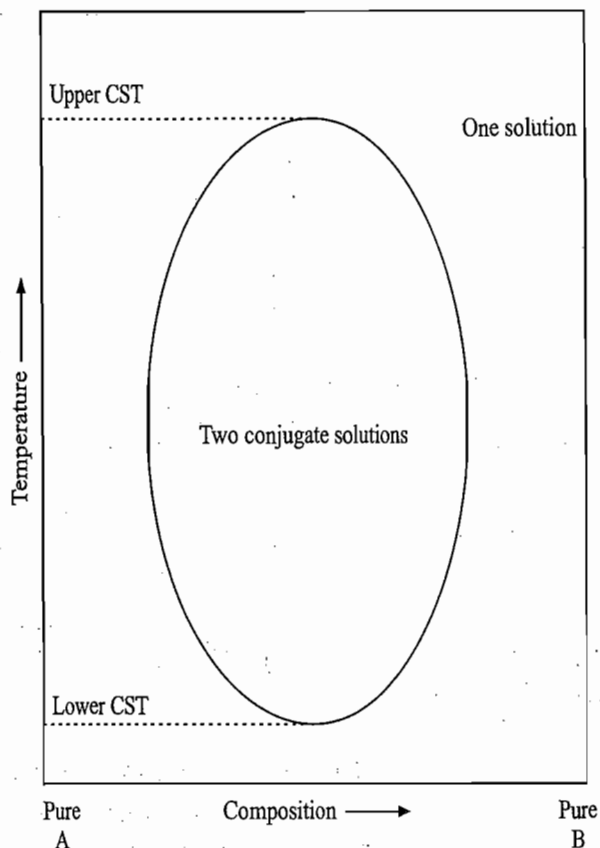


Fig. 4.18.4 Temperature-composition curve of a system having both upper and lower CST

upper CST being at 208 °C and the lower one at 60.8 °C. Thus nicotine and water are completely miscible in each other at temperatures greater than 208 °C and less than 60.8 °C.

The upper critical solution temperatures for most liquids pairs are very high and are realized only under high pressures. In many cases, it has not been possible to attain this upper CST experimentally as this lies above the respective critical temperatures of the liquids with the effect that the system volatilizes much before CST is reached.

In few cases such as the ethyl acetate-water mixture and the ether-water mixture, it has not been possible to attain experimentally both the upper and the lower critical solution temperatures. In the above two systems, theoretically one would expect the lower critical solution temperatures since the solubilities of ethyl alcohol and ether in water decrease with increasing temperature. However, the critical solution temperatures for both the above systems lie below the freezing point of water. Thus water freezes completely before these temperatures are reached. Similarly, the upper CST for chloroform-water mixture has not been realized experimentally; here the upper CST lies above the critical temperature of chloroform. Thus, it is obvious that one would not observe experimentally the critical solution temperature when (i) the upper CST lies above the critical temperature of either of the two liquids, and (ii) the lower CST lies below the freezing point of either of the two liquids.

Effect of Pressure on CST

It was shown earlier with the help of phase rule that the CST of partially miscible liquids has a definite value for a given value of the external pressure. Thus, it is expected that the CST will vary as the external pressure is varied. Since the

mutual solubilities of the two components invariably increase with increase in external pressure, it is, therefore, expected that the upper CST will decrease whereas the lower CST will increase as the external pressure is increased. This is shown in Fig. 4.18.5. In fact, it is found to be so experimentally. The area of the loop thus becomes smaller and smaller with increase in pressure, ultimately, a stage is reached when the area is just reduced to a point. At this stage, the two liquids become miscible with each other in all proportions and thus form a single liquid solution.

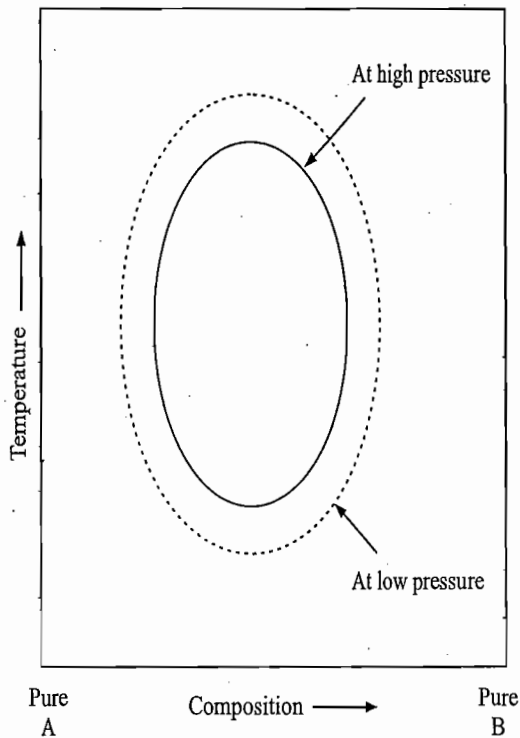


Fig. 4.18.5 Effect of pressure on CST; dotted curve at low pressure, solid curve at high pressure

Effect on Impurities on CST

The impurities have a marked effect on the critical solution temperature, the nature of the effect depends whether the added substance is soluble in one liquid or in both the liquids.

If the substance is soluble only in one liquid, it will effect the solubility of the other liquid in this liquid. In general, this solubility is decreased, i.e. the mutual solubilities of the two liquids are decreased and, consequently, the CST is raised as shown by the dotted curve I in Fig. 4.18.6. For example, the addition of 0.1 mol of KCl per dm^3 of water raises the CST of the phenol-water mixture by about 8 K whereas the addition of 0.1 mol of naphthalene per dm^3 of phenol raises the temperature nearly by 20 K.

If the added substance is soluble in both the liquids, it increases the mutual solubilities of the two liquids and, consequently, the CST is lowered as shown by the dotted curve II in Fig. 4.18.6. This probably is due to the fact that the added substance will distribute itself between the two conjugate liquid mixtures in a definite manner and is being continuously exchanged between them. Thus,

cotine and
ian 208 °C

s are very
s not been
respective
volatalizes

ther-water
upper and
eoretically
solubilities
However,
below the
peratures
s not been
mperature
perimentally
he critical
below the

y miscible
. Thus, it
Since the

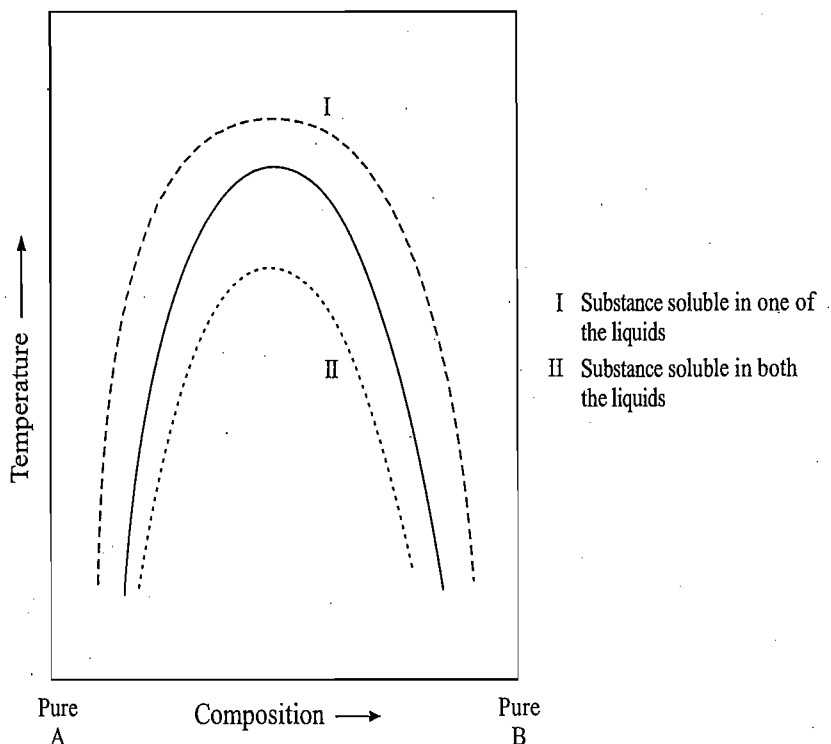


Fig. 4.18.6 Effect of impurities on CST

a stage of dynamic equilibrium exists. This to and fro movement of molecules of the added substance acts as a cementing force between the two conjugate liquid mixtures and hence brings about more solubility of the two liquids. For example, when succinic acid is added to the phenol-water mixture, its CST is lowered.

DISTILLATION OF PARTIALLY MISCIBLE LIQUIDS

Qualitative Features

A complete temperature-composition diagram of a binary mixture of partially miscible liquids also includes the vapour phase and gives a curve of the type shown in Fig. 4.18.7. The liquid-vapour curves will show a minimum as the two liquids show large positive deviations from Raoult's law. The upper and lower portions of the diagram shown in Fig. 4.18.7 can be discussed separately as we did earlier. If distillation of a binary mixture of partially miscible liquids is carried out at a low pressure, the temperature at which the mixture starts boiling is lowered. Consequently, the boiling point-composition curves in Fig. 4.18.7 are shifted downwards. If the pressure is low enough, a stage will be reached where the boiling point curves will intersect the liquid-liquid solubility curve. The nature of the resultant diagram depends on the corresponding vapour pressure-composition curves. Three types of vapour pressure-composition curves and hence also temperature-composition curves are possible. These are shown in Figs 4.18.8 to 4.18.10. The behaviour of the mixture during distillation will depend upon the characteristics of these curves.

Distillation Involving no Azeotropic Mixture

Examples of such a system are aniline-water, ethyl acetate-water, and isobutyl alcohol-water mixtures. As usual, the curved lines AE and BE in Fig. 4.18.8b represent the vapourous curves and the lines AC and BD represent the liquidus curves. The horizontal line CD represents systems where two liquid phases C and D and the vapour phase E are in equilibrium with one another. The lines

Fig. 4.1
temper
diagram
partiall

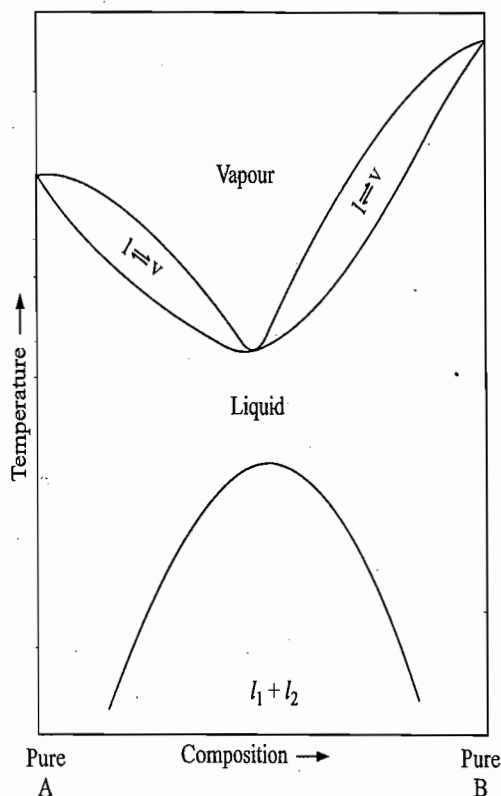


Fig. 4.18.7 A complete temperature-composition diagram of a mixture of partially miscible liquids

below the horizontal line CD represent the region of partial miscibility within which the two liquid phases are formed. The behaviour of the system during distillation can be described as usual. Consider, for example, a solution represented by the point a. This consists of a single unsaturated solution of B in A. If temperature of this solution is increased, it will start boiling at temperature t_1 , the vapour which issues here has composition v' . The vapour phase is relatively richer in the component B (in accordance with Konowaloff's rule, the vapour is richer in the component whose addition to the mixture lowers the boiling point) and thus the remaining liquid will be richer in the component A. Consequently, composition of the liquid will move along ba and thus will boil at higher temperatures. If fractional distillation is carried out, it will eventually yield the pure component A. Now if the vapour which is formed at t_1 is cooled to the original temperature, it will form a mixture of two liquid phases c and d . If the temperature of this mixture is gradually increased, compositions of the two liquids will move along cC and dD , respectively. At temperature t_2 , this mixture will start boiling with the vapour composition given by the point E. Since the vapour contains relatively more of B in comparison to the overall composition of liquids (point C') and since the distillation at this stage takes place at a constant temperature, it follows that the overall composition of the remaining liquids will move along $C'C$. Thus during distillation, the relative amounts of the two liquid phases vary, the amount of liquid phase D gradually vanishes. The mixture continues to have two phases till the point C is reached. Further distillation beyond this stage completely vanishes the liquid phase of A in B and the composition of the liquid phase C moves along CA. The sequence of further distillation is the same as described earlier. Thus, we see that the end products of fractional distillation will consist of:

isobutyl
4.18.8b
liquidus
phases C
The lines

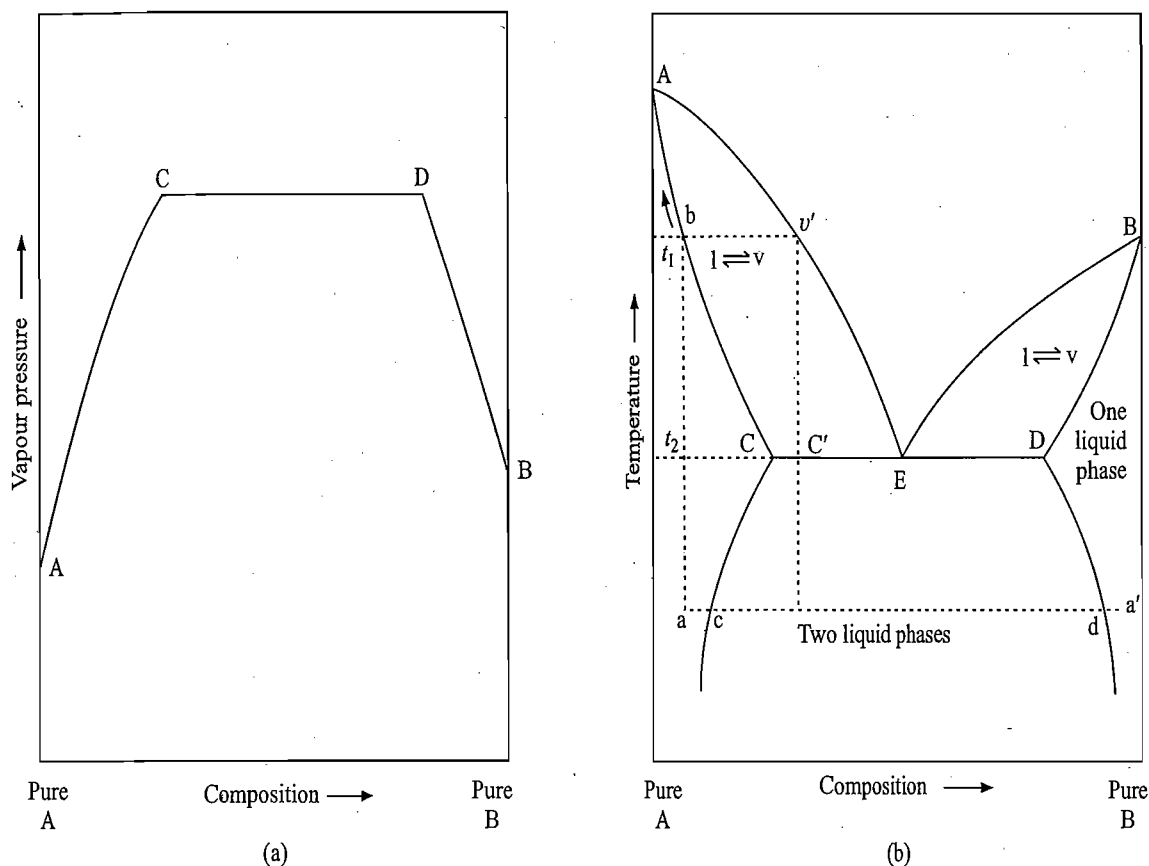


Fig. 4.18.8 (a) Vapour pressure-composition and (b) temperature-composition diagrams for partial miscible liquids with no azeotropic mixture

Residue The pure component A in the liquid form and can be collected from bottom of the column.

Distillate The vapour corresponding to the composition E, which can be collected from top of the column. This distillate cannot be fractionated further.

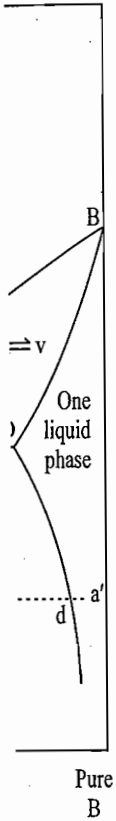
Similar results would be expected if the composition of the original solution lies at a' . Here the residue will consist of pure component B and the distillate of composition E. Thus, we see that the fractional distillation of this type of system will not give a complete separation of the two components, only one of them can be obtained in the pure form depending upon the original composition of the solution; pure A if the composition of the system lies left to the point E, and pure B if it lies right to the point E. It may, however, be noted that none of the two constituents can be obtained in pure form if the original composition of the mixture lies exactly on the point E, since the total composition of the liquid is the same as that of vapour with which it is in equilibrium.

Distillation Involving Azeotropic Mixture

Examples of such a system are water-phenol, ethyl methyl ketone-water and triethylamine-water mixtures. The end products obtained in the fractional distillation of a mixture exhibiting Fig. 4.18.9b can be analyzed following the principles described above. Consider, for example, a solution as represented by the point a. This mixture will start boiling at temperature t_1 . Since the vapour which issues here contains relatively more of B (point c in comparison to the point b), the composition of the remaining liquid will move along bD and hence

Vapour pressure →

Fig. 4.18. liquids ex



al miscible

e collected

ich can be ed further. ie original B and the ion of this ents, only ie original m lies left wever, be orm if the e the total h it is in

water and fractional owing the esented by he vapour on to the and hence

its boiling point will rise. At point D, the single liquid splits into two liquids C and D, the former being present in a smaller amount. At this stage, distillation proceeds at a constant temperature and the vapour which appears has composition E. The vapour is relatively richer in B in comparison to either of the two liquid layers. Thus, in the remaining two liquid layers, the concentration of B decreases faster than that of A. In other words, the state of the mixture will move along DC. The net effect that is produced here is that the liquid layer D gradually decreases, whereas that of C gradually increases. At point C, practically entire liquid layer D has disappeared. Further distillation will change the liquid composition along CA and ultimately to pure A. Thus, the end products of the fractional distillation of the system are:

Residue The residue consists of pure liquid A and can be collected from bottom of the fractionating column.

Distillate The distillate consists of the azeotropic mixture of composition corresponding to the point M and can be collected from top of the fractionating column.

If in the beginning the composition of the solution lies to right of the point M, the end products would be

Residue Pure liquid B.

Distillate The azeotropic mixture of composition corresponding to the point M.

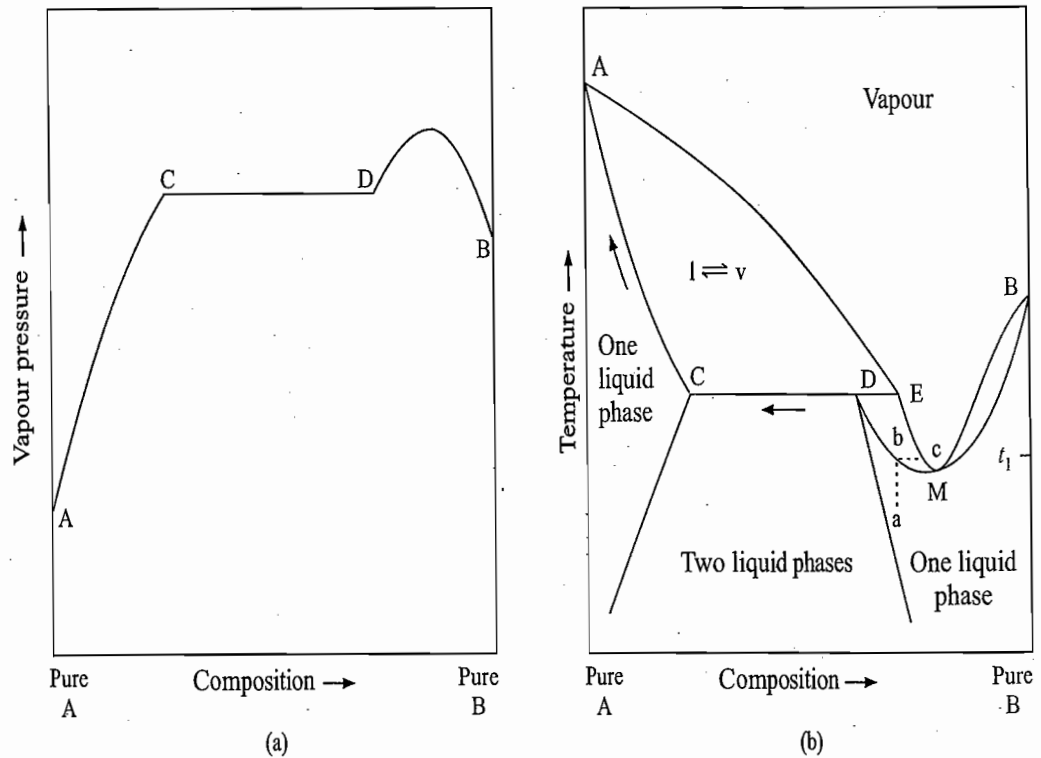


Fig. 4.18.9 (a) Vapour pressure-composition and (b) temperature-composition diagrams for partial miscible liquids exhibiting azeotropic mixture

Distillation Involving Complete Separation

Examples of such a system are isopentane-nitrobenzene, isopentane-dichloroacetic acid, and nicotine-water mixtures. In this case, complete separation of the two components is possible in spite of the formation of two layers during the course of fractional distillation (Fig. 4.8.10). The residue will consist of pure A in the liquid form and the distillate consisting of pure B in the vapour form.

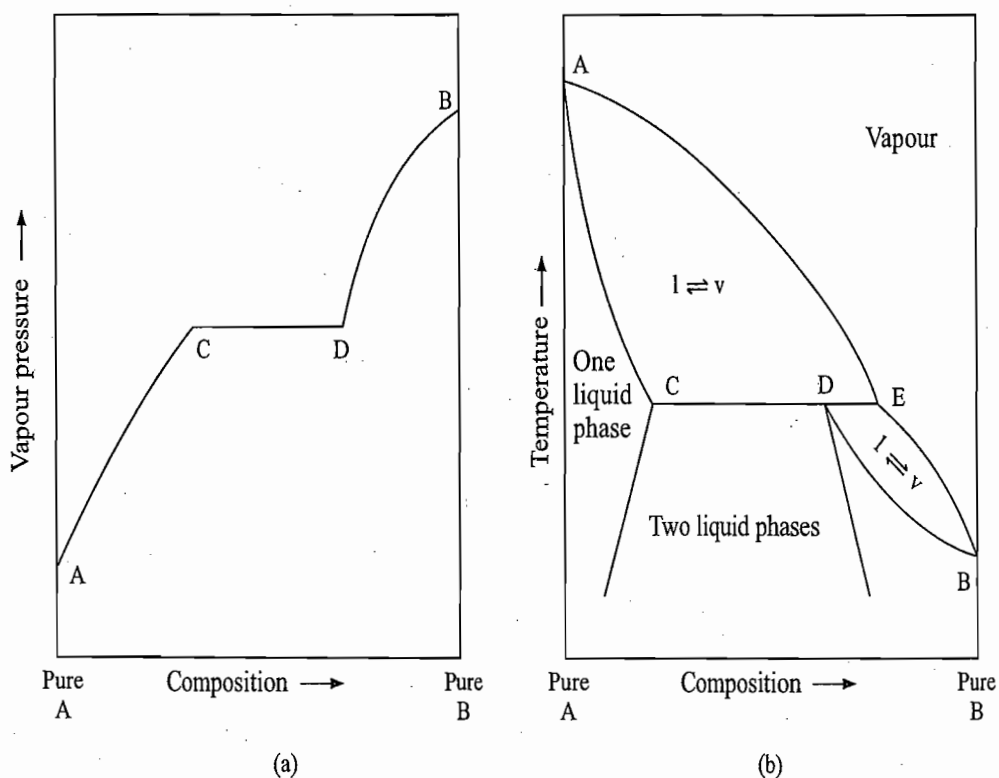


Fig. 4.18.10 (a) Vapour pressure-composition and (b) temperature-composition diagrams for partially miscible liquids exhibiting complete separation of its constituents

4.19 COMPLETELY IMMISCIBLE LIQUIDS (STEAM DISTILLATION)

If the two liquids are completely immiscible with each other, each one will behave independently of the other and will exert its own vapour pressure. The total vapour pressure of the system will be sum of vapour pressures of the two liquids. Thus

$$P = P_A^* + P_B^*$$

This total pressure will remain constant as long as both the liquids are present and will be independent of the relative amounts of the two liquids.

Principle Underlying Boiling of Immiscible Liquids

The boiling point of a liquid system is a temperature at which its vapour pressure becomes equal to the external pressure. Since the total vapour pressure of a mixture containing immiscible liquids is greater than that of either of the pure constituents, it follows that the mixture will boil at a temperature which is lower than boiling points of either of the pure constituents. Moreover, since the total vapour pressure is independent of the relative amounts of the two constituents, the boiling point will remain constant as long as both the layers are present.

Proc
Disti

Exa

Solu

The composition of vapour can be calculated by using Dalton's law of partial pressures. Thus, we have

$$\frac{p_A^*}{p_B^*} = \frac{y_A}{y_B} = \frac{n_A}{n_B} = \frac{m_A/M_A}{m_B/M_B} \quad \text{or} \quad \frac{m_A}{m_B} = \frac{M_A p_A^*}{M_B p_B^*} \quad (4.19.1)$$

The masses of the constituents in the distillate are thus proportional to their respective molar masses and vapour pressures.

Process of Steam Distillation

The process of distillation of immiscible liquids is generally utilized for the purification of those liquids which either boil at too high temperatures or decompose when heated to their normal boiling points. In laboratory and also in industry, water is used as one of the immiscible liquids and the process of distillation is known as *steam distillation*. The immiscible liquid is heated either directly along with water or by passing steam through it. Generally, the process of passing steam is preferred as it keeps the system agitating and thus equilibrium between the vapour and the two liquids is rapidly attained. The distillate is condensed and separated in the pure forms. It is evident from Eq. (4.19.1) that distillation of an immiscible mixture of an organic compound with water will yield a distillate containing a high proportion of compound provided the molar mass of the compound is larger and has appreciable vapour pressure at temperature near and just below the boiling water of water.

The process of steam distillation is often employed for the partially miscible mixtures. In this case, the efficiency of the process is slightly less than the theoretical value.

Example 4.19.1

The steam distillation of chlorobenzene is observed to occur at a temperature of 90.6 °C when the total pressure is 1.0 atm. Assuming complete immiscibility of these liquids, calculate the mass of chlorobenzene in 0.1 kg of distillate. The vapour pressure of water at 90.6 °C is 538.9 Torr.

Solution

Total vapour pressure = 760 Torr

Molar mass of chlorobenzene, $M_A = 112.5 \text{ g mol}^{-1}$

Vapour pressure of water at 90.6 °C = 538.9 Torr

Vapour pressure of pure chlorobenzene, $p_A^* = (760 - 538.9) \text{ Torr} = 221.1 \text{ Torr}$

Substituting the above data in the expression $m_A/m_B = p_A^* M_A / p_B^* M_B$,

$$\text{we get } \frac{m_A}{m_B} = \frac{(221.1 \text{ Torr})(112.5 \text{ g mol}^{-1})}{(538.9 \text{ Torr})(18 \text{ g mol}^{-1})} = 2.56 \quad \text{or} \quad \frac{m_B}{m_A} = \frac{1}{2.56}$$

Adding one on both sides, we have

$$\frac{m_A + m_B}{m_A} = \frac{1}{2.56} + 1 = \frac{3.56}{2.56} \quad \text{or} \quad \frac{m_A}{m_A + m_B} = \frac{2.56}{3.56} = 0.72$$

For 100 g of distillate, we have

$$m_A = (0.72)(m_A + m_B) = (0.72)(100 \text{ g}) = 72 \text{ g}$$

Example 4.19.2

When a liquid that is immiscible with water was steam distilled at 95.2 °C at a total pressure of 747.3 Torr, the distillate contained 1.27 g of the liquid per gram of water. Calculate the molar mass of the liquid. The vapour pressure of water is 638.6 Torr at 95.2 °C.

Solution

We are provided with

$$p_{\text{total}} = 747.3 \text{ Torr}$$

$$p_{\text{B}}^* = p_{\text{water}}^* = 638.6 \text{ Torr}$$

$$p_{\text{A}}^* = p_{\text{liquid}}^* = 747.3 \text{ Torr} - 638.6 \text{ Torr} = 108.7 \text{ Torr}$$

and $m_{\text{A}}/m_{\text{B}} = 1.27 \text{ g/1 g.}$

We have

$$\frac{m_{\text{A}}}{m_{\text{B}}} = \frac{p_{\text{A}}^* M_{\text{A}}}{p_{\text{B}}^* M_{\text{B}}} \quad \text{or} \quad M_{\text{A}} = \left(\frac{m_{\text{A}}}{m_{\text{B}}} \right) \left(\frac{p_{\text{B}}^* M_{\text{B}}}{p_{\text{A}}^*} \right)$$

Substituting the given data, we get

$$M_{\text{A}} = (1.27) \left[\frac{(638.6 \text{ Torr})(18 \text{ g mol}^{-1})}{(108.7 \text{ Torr})} \right] = 134.3 \text{ g mol}^{-1}$$

4.20 DISTRIBUTION OF A SOLUTE BETWEEN TWO IMMISCIBLE LIQUIDS — THE NERNST DISTRIBUTION LAW

Definition of Distribution Law

If a solute A is added in a system containing two immiscible liquids α and β (or slightly miscible liquids) and if the solute is soluble in both the liquids, then it distributes itself between the two liquids in a definite manner, such that

$$\frac{[\text{A}]_{\alpha}}{[\text{A}]_{\beta}} = K_{\text{d}} \quad (4.20.1)$$

where $[\text{A}]_{\alpha}$ and $[\text{A}]_{\beta}$ are the equilibrium molar concentrations of the solute A in the liquid phases α and β , respectively and K_{d} is a constant known as the *distribution coefficient* or the *partition coefficient*. The value of the constant K_{d} depends only on the temperature of the system and is independent of the relative amounts of the two layers and also that of the solute. Equation (4.20.1) is the defining equation for the distribution law or the partition law.

Phase Rule Applied to Distribution Law

The distribution law is in agreement with the phase rule requirements. We have

$$P = 2 \text{ and } C = 3$$

Thus $F = C - P + 2 = 3$

Of the three degrees of freedom, the two degrees of freedom, namely, temperature and pressure, are held constant. Thus stating the value of any third variable is sufficient to define the system completely. This implies that if the concentration of the solute in one of the layers is stated, then its value in the other layer will have a definite value and thus the ratio of the two concentrations will have a constant value.

Thermodynamic Derivation of the Distribution Law

Derivation for Ideal Solutions. The condition of equilibrium of the solute A between the two layers is

$$\mu_{A(\alpha)} = \mu_{A(\beta)}$$

where $\mu_{A(\alpha)}$ and $\mu_{A(\beta)}$ are the chemical potentials of the solute A in the two liquids α and β , respectively. If these liquids behave ideally, we have

$$\mu_{A(\alpha)} = \mu_{A(\alpha)}^* + RT \ln x_{A(\alpha)} \quad \text{and} \quad \mu_{A(\beta)} = \mu_{A(\beta)}^* + RT \ln x_{A(\beta)}$$

Substituting these in the previous expression, we get

$$\mu_{A(\alpha)}^* + RT \ln x_{A(\alpha)} = \mu_{A(\beta)}^* + RT \ln x_{A(\beta)}$$

or
$$\ln \frac{x_{A(\alpha)}}{x_{A(\beta)}} = \frac{1}{RT} (\mu_{A(\beta)}^* - \mu_{A(\alpha)}^*)$$

At a given temperature and pressure, the right side of the above equation has a constant value. Thus, we have

$$\ln \frac{x_{A(\alpha)}}{x_{A(\beta)}} = \text{constant} \quad \text{or} \quad \frac{x_{A(\alpha)}}{x_{A(\beta)}} = \text{constant}$$

If the solutions are dilute, the amount fractions can be replaced by the corresponding molar concentrations. Thus, we have

$$\frac{[A]_{\alpha}}{[A]_{\beta}} = \text{constant} = K_d \quad (\text{Eq. 4.20.1})$$

Derivation for Ideally Dilute Solutions

For ideally dilute solutions, we have

$$\mu_{A(\alpha)} = \mu_{A(\alpha, \text{hs})}^* + RT \ln x_{A(\alpha)}$$

$$\mu_{A(\beta)} = \mu_{A(\beta, \text{hs})}^* + RT \ln x_{A(\beta)}$$

The condition of equilibrium of A between the two phases gives

$$\mu_{A(\alpha)} = \mu_{A(\beta)}$$

i.e.
$$\mu_{A(\alpha, \text{hs})}^* + RT \ln x_{A(\alpha)} = \mu_{A(\beta, \text{hs})}^* + RT \ln x_{A(\beta)}$$

Hence
$$K_d = \frac{x_{A(\alpha)}}{x_{A(\beta)}} = \exp \left[\frac{\mu_{A(\beta, \text{hs})}^* - \mu_{A(\alpha, \text{hs})}^*}{RT} \right]$$

Since
$$\mu_{A(\alpha, \text{hs})}^* = \mu_{A(v)}^* + RT \ln (K_{H, A(\alpha)} / p^{\circ})$$

and
$$\mu_{A(\beta, \text{hs})}^* = \mu_{A(v)}^* + RT \ln (K_{H, A(\beta)} / p^{\circ})$$

we get
$$K_d = \frac{x_{A(\alpha)}}{x_{A(\beta)}} = \frac{K_{H, A(\beta)}}{K_{H, A(\alpha)}}$$

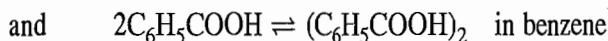
Thus, the amount of fraction of A in phase α is inversely proportional to its Henry's law constant in phase α .

Limitation of the Distribution Law

The distribution expression as given by Eq. (4.20.1) will be strictly true provided (i) the solutions are ideal and dilute, (ii) the presence of solute does not change the mutual solubility of the two layers, and (iii) the solute has the same molar mass in both the layers.

A few examples which follow distribution law are the distribution of iodine between water and carbon tetrachloride (or chloroform or carbon disulphide), phenol between water and amyl alcohol, and bromine between water and carbon disulphide.

It was pointed out by Nernst that the distribution law as given by Eq. (4.20.1) is applicable only when the solute has the same molecular form (i.e. same molar mass) in both the layers. In some cases, solute does not have the same molar mass in the two solutions. This results because of association or dissociation or any other such changes which the solute can undergo in the solution. One of such examples is the distribution of benzoic acid in water and benzene. Benzoic acid in water is present in a partially ionized form whereas in benzene, it undergoes dimerization. Thus, we have



If the total concentrations of benzoic acid in the two layers are substituted in Eq. (4.20.1), it is found that the ratio does not remain constant as the amount of benzoic acid dissolved in both the layers is varied. According to Nernst, the distribution law will be applicable if the concentrations of the species common to both the layers (i.e. undissociated benzoic acid) are employed.

$$\text{Thus } K_d = \frac{[\text{A}]_{\text{aq}} - \xi_d}{[\text{A}]_{\text{org}} - 2\xi_a} \quad (4.20.2)$$

where ξ_d and ξ_a are the extent of dissociation and association reaction, respectively.

DISTRIBUTION LAW UNDER DIFFERENT CONDITIONS

A suitable modification in the original distribution law as given by Eq. (4.20.1) can be made in order to account for the association, dissociation, hydrolysis or any such changes which a solute undergoes in the solution. Some of these are described below.

Normal Existence in α and Association in β

In liquid α , solute A is present as it is, thus its concentration is $[\text{A}]_\alpha$. In liquid β , it associates according to the equation



Let $[\text{A}]_{\beta, \text{total}}$ be the total concentration of A in liquid β and ξ_a be its extent of association, then we have

$$[\text{A}]_{\beta, \text{free}} = [\text{A}]_{\beta, \text{total}} - n\xi_a$$

Substituting these in the equilibrium expression corresponding to the association reaction, we get

$$K_{\text{eq}} = \frac{[A_n]_{\beta}}{[A]_{\beta, \text{free}}^n} = \frac{\xi_a}{([A]_{\beta, \text{total}} - n\xi_a)^n} \quad (4.20.4)$$

or $[A]_{\beta, \text{free}} = [A]_{\beta, \text{total}} - n\xi_a = \left(\frac{\xi_a}{K_{\text{eq}}} \right)^{1/n}$

If the solute A in liquid β is almost present in the associated form, then $\xi_a = [A]_{\beta, \text{total}}/n$. Thus, we have

$$[A]_{\beta, \text{free}} = [A]_{\beta, \text{total}} - n\xi_a = \left(\frac{[A]_{\beta, \text{total}}}{nK_{\text{eq}}} \right)^{1/n}$$

Substituting $[A]_{\alpha}$ and $[A]_{\beta, \text{free}}$ in the distribution law, we get

$$K_d = \frac{[A]_{\alpha}}{[A]_{\beta, \text{free}}} = \frac{[A]_{\alpha}}{([A]_{\beta, \text{total}}/n K_{\text{eq}})^{1/n}}$$

or $\frac{[A]_{\alpha}}{([A]_{\beta, \text{total}})^{1/n}} = \frac{K_d}{(n K_{\text{eq}})^{1/n}} \quad (4.20.5)$

At a given temperature, K_{eq} has a constant value. Since n is a constant for a given association reaction, it follows that the right side of Eq. (4.20.5) also has a constant value. Thus, we have

$$\frac{[A]_{\alpha}}{([A]_{\beta, \text{total}})^{1/n}} = \text{constant} = K'_d \quad (4.20.6)$$

where K'_d is known as the apparent distribution coefficient.

The value of n can be determined by plotting a graph between $\log\{[A]_{\alpha}/c^{\circ}\}$ and $\log\{[A]_{\beta, \text{total}}/c^{\circ}\}$, the slope of the resultant line is equal to $1/n$. Thus knowing n , the value of K_d can be determined. For benzoic acid in benzene, n is equal to 2. Thus, it dimerizes in benzene layer.

Alternatively, the value of n can be determined from the given two sets of data as shown in the following.

Since $\frac{[A]_{\alpha}}{([A]_{\beta, \text{total}})^{1/n}} = K'_d$ or $\frac{[A]_{\alpha}/c^{\circ}}{([A]_{\beta, \text{total}}/c^{\circ})^{1/n}} = \frac{K'_d}{(c^{\circ})^{(n-1)/n}} \quad (4.20.7)^{\dagger}$

[†]Division by c° = (unit concentration) makes different quantities unitless

Therefore

$$\log \left(\frac{K'_d}{(c^\circ)^{(n-1)/n}} \right) = \log \left(\frac{[A]_\alpha}{c^\circ} \right) - \frac{1}{n} \log \left(\frac{[A]_{\beta, \text{total}}}{c^\circ} \right) \quad (4.20.8)$$

Representing $[A]_\alpha/c^\circ$ and $[A]_{\beta, \text{total}}/c^\circ$ for the two sets of data as x_1, y_1 and x_2 and y_2 , we get

$$\log K'_d = \log x_1 - \frac{1}{n} \log y_1 \quad \text{and} \quad \log K'_d = \log x_2 - \frac{1}{n} \log y_2$$

From these two expressions, we get

$$\log x_1 - \frac{1}{n} \log y_1 = \log x_2 - \frac{1}{n} \log y_2$$

$$\text{or} \quad n = \frac{\log y_1 - \log y_2}{\log x_1 - \log x_2} \quad (4.20.9)$$

Example 4.20.1

An organic substance X has a normal molar mass in water but gives abnormal molar mass in benzene. The following data were obtained during a distribution experiment.

	I	II	III
$[X]_{\text{water}}/\text{g dm}^{-3}$	0.01	0.12	0.24
$[X]_{\text{benzene}}/\text{g dm}^{-3}$	1.848×10^{-5}	2.661×10^{-3}	1.089×10^{-2}

Find without using the graphical method, the degree of complexity of the substance in benzene.

Solution

We know that the degree of complexity is given by

$$n = \frac{\log (y_1/\text{g dm}^{-3}) - \log (y_2/\text{g dm}^{-3})}{\log (x_1/\text{g dm}^{-3}) - \log (x_2/\text{g dm}^{-3})}$$

From the first two readings, we have

$$n = \frac{\log (1.848 \times 10^{-5}) - \log (2.661 \times 10^{-3})}{\log (0.01) - \log (0.12)} = \frac{\bar{5}.2667 - \bar{3}.4251}{\bar{2}.0000 - \bar{1}.0792} = 1.999 \approx 2$$

Taking the second two readings, we have

$$n = \frac{\log (2.661 \times 10^{-3}) - \log (1.089 \times 10^{-2})}{\log (0.12) - \log (0.24)} = \frac{\bar{3}.4251 - \bar{2}.0370}{\bar{2}.0000 - \bar{1}.0792} = 2.033$$

Taking the first and the third readings, we have

$$n = \frac{\log (1.848 \times 10^{-5}) - \log (1.089 \times 10^{-2})}{\log (0.01) - \log (0.24)} = \frac{\bar{5}.2667 - \bar{2}.0370}{\bar{2}.0000 - \bar{1}.3802} = 2.007$$

The value of n is equal to 2. Thus, the organic substance exists as dimer in benzene layer.

Values of true distribution coefficient and equilibrium constant Equation (4.20.4) can be written as

$$K_{\text{eq}} = \frac{[A_n]_\beta}{[A]_{\beta, \text{free}}^n} \quad (4.20.10)$$

Norm
α and
in β

Disso
and D
in β

The total concentration of A in liquid β is given by

$$[A]_{\beta, \text{total}} = [A]_{\beta, \text{free}} + n[A_n]_{\beta} \quad (4.20.8)$$

Making use of Eq. (4.20.10), we get

$$[A]_{\beta, \text{total}} = [A]_{\beta, \text{free}} + n K_{\text{eq}} [A]_{\beta, \text{free}}^n$$

Now employing the distribution expression

$$K_d = \frac{[A]_{\alpha}}{[A]_{\beta, \text{free}}}$$

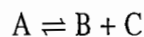
we get
$$[A]_{\beta, \text{total}} = \frac{[A]_{\alpha}}{K_d} + n K_{\text{eq}} \left(\frac{[A]_{\alpha}}{K_d} \right)^n$$

or
$$\frac{[A]_{\beta, \text{total}}}{[A]_{\alpha}} = \frac{1}{K_d} + \frac{n K_{\text{eq}}}{K_d^n} [A]_{\alpha}^{n-1} \quad (4.20.11)$$

Thus by plotting $[A]_{\beta, \text{total}}/[A]_{\alpha}$ versus $[A]_{\alpha}^{n-1}$, we can get $1/K_d$ and nK_{eq}/K_d^n as intercept and slope, respectively. From these, the values of K_d and K_{eq} can be determined.

Normal Existence in α and Dissociation in β

Let the solute dissociate in Liquid β according to the following scheme.



Let ξ be the extent of reaction. We will have

$$[A]_{\beta, \text{free}} = [A]_{\beta, \text{total}} - \xi$$

$$[B] = [C] = \xi$$

Substituting these in the equilibrium expression corresponding to the above dissociation, we get

$$K_{\text{diss}} = \frac{[B][C]}{[A]} = \frac{\xi^2}{[A]_{\beta, \text{total}} - \xi}$$

Thus
$$[A]_{\beta, \text{free}} = [A]_{\beta, \text{total}} - \xi = \frac{\xi^2}{K_{\text{diss}}}$$

Hence, the distribution law becomes

$$K_d = \frac{[A]_{\alpha}}{[A]_{\beta, \text{free}}} = \frac{[A]_{\alpha}}{\xi^2/K_{\text{diss}}} \quad (4.20.12)$$

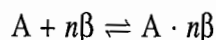
Dissociation in α and Dimerization in β

In this case, we have

$$K_d = \frac{[A]_{\alpha, \text{total}} - \xi_d}{[A]_{\beta, \text{total}} - 2\xi_d} \quad (4.20.13)$$

Normal Existence in α and Undergoes a Reaction with β

Let the reaction between the solute and the liquid β be represented as



Its equilibrium constant is given by

$$K_{\text{eq}} = \frac{[A \cdot n\beta]}{[A]_{\beta, \text{free}} [\beta]^n} \quad (4.20.14)$$

The total concentration of A in liquid β is given by

$$[A]_{\beta, \text{total}} = [A]_{\beta, \text{free}} + [A \cdot n\beta]$$

Making use of Eq. (4.20.14), we get

$$[A]_{\beta, \text{total}} = [A]_{\beta, \text{free}} + K_{\text{eq}} [A]_{\beta, \text{free}} [\beta]^n$$

$$\text{Hence, } [A]_{\beta, \text{free}} = \frac{[A]_{\beta, \text{total}}}{1 + K_{\text{eq}} [\beta]^n} \quad (4.20.15)$$

Substituting Eq. (4.20.15) in the distribution law, we get

$$K_d = \frac{[A]_{\alpha}}{[A]_{\beta, \text{free}}} = \frac{[A]_{\alpha}}{[A]_{\beta, \text{total}} / (1 + K_{\text{eq}} [\beta]^n)}$$

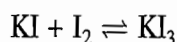
$$\text{or } \frac{[A]_{\alpha}}{[A]_{\beta, \text{total}}} = \frac{K_d}{1 + K_{\text{eq}} [\beta]^n} \quad (4.20.16)$$

For a given temperature, K_{eq} has a constant value. Since liquid β is present in a very large amount, the concentration of β practically remains constant. Thus, we have

$$\frac{[A]_{\alpha}}{[A]_{\beta, \text{total}}} = \text{constant} \quad (4.20.17)$$

Study of Equilibria by Distribution Measurement

Distribution measurements have been used to determine the equilibrium constants of various reactions such as complex formation, hydrolysis of ions, etc. In such studies, the second solvent which is generally chosen is the one that can dissolve one of the reactants or products of the reaction under study so that the distribution of this species occurs between the two layers. The underlying principle can be explained by taking a typical example of the complex formation between I_2 and KI. In aqueous solution, we have



We choose a solvent in which I_2 is soluble, it may be carbon tetrachloride or carbon disulphide. First of all, the distribution coefficient K_d of I_2 in water and CCl_4 is determined, such that

$$\frac{[I_2]_{\text{CCl}_4}}{[I_2]_{\text{water}}} = K_d$$

Exa

Sol

Now the equilibrium of I_2 between KI solution and CCl_4 is studied. If $[I_2]_{aq, total}$ and $[I_2]_{CCl_4}$ are the concentrations of iodine in aqueous and CCl_4 layers, respectively, then we have:

$$.20.14) \quad \text{Concentration of free iodine in aqueous layer, } [I_2]_{aq, free} = \frac{[I_2]_{CCl_4}}{K_d}$$

Concentration of combined I_2 in aqueous layer or the concentration of KI_3
 = Total I_2 in aqueous layer - Free I_2 in aqueous layer

$$= [I_2]_{aq, total} - \frac{[I_2]_{CCl_4}}{K_d}$$

Concentration of free KI in aqueous solution, $[KI]_{free}$

= Total concentration of KI - Concentration of KI_3

$$.20.15) \quad = [KI]_{aq, total} - \left\{ [I_2]_{aq, total} - \frac{[I_2]_{CCl_4}}{K_d} \right\}$$

The equilibrium constant of the reaction is thus given by

$$.20.16) \quad K_{eq} = \frac{[KI_3]}{[I_2]_{aq, free} [KI]_{free}} = \frac{[I_2]_{aq, total} - \frac{[I_2]_{CCl_4}}{K_d}}{\left(\frac{[I_2]_{CCl_4}}{K_d} \right) \left([KI]_{aq, total} - \left\{ [I_2]_{aq, total} - \frac{[I_2]_{CCl_4}}{K_d} \right\} \right)}$$

Thus knowing $[I_2]_{aq, total}$, $[I_2]_{CCl_4}$, $[KI]_{aq, total}$ and K_d , the value of equilibrium constant K_{eq} can be determined.

Example 4.20.2

The distribution coefficient of the base *p*-nitroaniline between benzene and water is 9.0 (in favour of benzene). 0.006 93 mol of *p*-nitroanilinium chloride was dissolved in one dm³ of dil HCl solution of molarity 0.043 42 M. To this solution 60 cm³ of benzene was added and the solution shaken up till the equilibrium was attained. Then 25 cm³ of benzene solution was withdrawn and was analyzed for the base and thus found to contain 0.108 25 g *p*-nitroaniline. Calculate the hydrolysis constant of the salt.

Solution

Given that

$$\frac{\text{Concentration of } p\text{-nitroaniline in benzene layer}}{\text{Concentration of } p\text{-nitroaniline in aqueous layer}} = 9.0$$

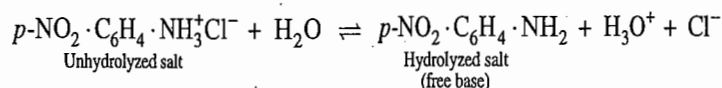
$$\text{Amount of free base in 25 cm}^3 \text{ of benzene} = \frac{(0.108 \text{ 25 g})}{(138 \text{ g mol}^{-1})}$$

$$\text{Thus in 60 cm}^3, \text{ the amount} = \left(\frac{0.108 \text{ 25 g}}{138 \text{ g mol}^{-1}} \right) \left(\frac{60 \text{ cm}^3}{25 \text{ cm}^3} \right) = 0.001 \text{ 88 mol}$$

$$\text{Molar concentration of free base} = \left(\frac{0.001 \text{ 88 mol}}{(60/1000) \text{ dm}^3} \right) = 0.031 \text{ 33 mol dm}^{-3}$$

Using the distribution coefficient, we find that molar concentration of free base in aqueous solution = $\frac{(0.031\ 33\ \text{mol dm}^{-3})}{9} = 0.003\ 48\ \text{mol dm}^{-3}$

The added amount of 0.006 93 mol of *p*-nitroanilinium chloride will be present in two forms, namely, (i) unhydrolyzed salt, and (ii) hydrolyzed salt. The hydrolysis reaction is



Thus, the amount of unhydrolyzed cation

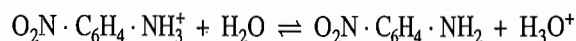
$$\begin{aligned} &= \text{Total amount of salt added} - \text{Total amount of free base} \\ &= \text{Total amount of salt added} - (\text{Free base in benzene} + \text{Free base in water}) \\ &= 0.006\ 93\ \text{mol} - (0.001\ 88\ \text{mol} + 0.003\ 48\ \text{mol}) \\ &= 0.001\ 57\ \text{mol} \end{aligned}$$

Amount of acid set free because of hydrolysis

$$\begin{aligned} &= \text{Total amount of free base in benzene and water} \\ &= 0.001\ 88\ \text{mol} + 0.003\ 48\ \text{mol} = 0.005\ 36\ \text{mol} \end{aligned}$$

$$\begin{aligned} \text{Total amount of acid} &= \text{Acid already present} + \text{Acid set free} \\ &= 0.043\ 42\ \text{mol} + 0.005\ 36\ \text{mol} \\ &= 0.048\ 78\ \text{mol} \end{aligned}$$

Thus, the concentrations of various species in water for the reaction



$$\text{are } [\text{O}_2\text{N} \cdot \text{C}_6\text{H}_4 \cdot \text{NH}_3^+] = 0.001\ 57\ \text{mol dm}^{-3}$$

$$[\text{NO}_2 \cdot \text{C}_6\text{H}_4 \cdot \text{NH}_2] = 0.003\ 48\ \text{mol dm}^{-3}$$

$$[\text{H}_3\text{O}^+] = 0.048\ 78\ \text{mol dm}^{-3}$$

and hence

$$\begin{aligned} K_h &= \frac{[\text{O}_2\text{N} \cdot \text{C}_6\text{H}_4 \cdot \text{NH}_2][\text{H}_3\text{O}^+]}{[\text{O}_2\text{N} \cdot \text{C}_6\text{H}_4 \cdot \text{NH}_3^+]} = \frac{(0.003\ 48\ \text{mol dm}^{-3})(0.048\ 78\ \text{mol dm}^{-3})}{(0.001\ 57\ \text{mol dm}^{-3})} \\ &= 0.108\ 1\ \text{mol dm}^{-3} \end{aligned}$$

Example 4.20.3

The distribution ratio of ammonia between water and chloroform at 291 K is 25.8. When a 0.025 mol dm⁻³ of copper sulphate solution was equilibrated with ammonia and chloroform, the aqueous and chloroform solutions contained 0.385 mol dm⁻³ and 0.011 2 mol dm⁻³ of ammonia, respectively. Determine how much of ammonia is complexed with the Cu²⁺ ion and the value of *x* in the formula Cu(NH₃)_{*x*}²⁺.

Solution

We are provided that

$$\frac{\text{Concentration of NH}_3 \text{ in aqueous solution}}{\text{Concentration of NH}_3 \text{ in chloroform}} = 25.8$$

$$\text{Concentration of NH}_3 \text{ in aqueous CuSO}_4 \text{ solution} = 0.385\ \text{mol dm}^{-3}$$

$$\text{Concentration of NH}_3 \text{ in chloroform} = 0.011\ 2\ \text{mol dm}^{-3}$$

Using distribution coefficient, concentration of free NH₃ in aqueous layer

$$\begin{aligned} &= (0.011\ 2\ \text{mol dm}^{-3})(25.8) \\ &= 0.289\ 0\ \text{mol dm}^{-3} \end{aligned}$$

Solve

Multi-
Extra

$$\begin{aligned} \text{Concentration of combined NH}_3 &= 0.3850 \text{ mol dm}^{-3} - 0.2890 \text{ mol dm}^{-3} \\ &= 0.0960 \text{ mol dm}^{-3} \end{aligned}$$

$$\text{The value of } x \text{ in } \text{Cu}(\text{NH}_3)_x^{2+} = \frac{[\text{NH}_3]_{\text{combined}}}{[\text{CuSO}_4]} = \frac{0.0960 \text{ M}}{0.025 \text{ M}} = 3.84 \approx 4$$

Solvent Extraction

The Nernst distribution law is the basis for the solvent extraction process in which the dissolved solute in one solvent is extracted with the help of another solvent. When a solution containing the solute is shaken with another immiscible solvent, the solute distributes between the two solutions according to the Nernst distribution law. From the second solvent, the solute can be separated by simple processes such as distillation, evaporation, etc. For efficient use of the solvent, it is advantageous to carry out this process in a series of successive stages. This can be proved as follows.

Let m be the mass of solute present in volume V_1 of the solvent 1 (or V_1 of the solution) and let the volume V_2 of the solvent 2 be added each time till the entire solvent 2 is exhausted. If the solvent 2 is added n times, we have

$$\text{Total volume of the solvent 2 used for extraction} = nV_2$$

Multi-stage Extraction

If m_1 is the mass of the solute that remains unextracted in the solvent 1 after the addition of first lot of V_2 of the solvent 2, then we have

$$\frac{c_1}{c_2} = \frac{m_1/V_1}{(m - m_1)/V_2} = K_d$$

Solving for m_1 , we get

$$m_1 = \left(\frac{K_d V_1}{K_d V_1 + V_2} \right) m \quad (4.20.18)$$

If m_2 is the mass of the solute unextracted after the addition of the second lot, then

$$\frac{c'_1}{c'_2} = \frac{m_2/V}{(m_1 - m_2)/V_2} = K_d$$

$$\text{or } m_2 = \left(\frac{K_d V_1}{K_d V_1 + V_2} \right) m_1$$

Substituting m_1 from Eq. (4.10.18), we get

$$m_2 = \left(\frac{K_d V_1}{K_d V_1 + V_2} \right)^2 m \quad (4.20.19)$$

Carrying out the above process n times, we will get

$$m_n = \left(\frac{K_d V_1}{K_d V_1 + V_2} \right)^n m \quad (4.20.20)$$

Thus, the fraction of the solute remaining unextracted in solvent 1 is

$$\frac{m_n}{m} = \left(\frac{K_d V_1}{K_d V_1 + V_2} \right)^n \quad (4.20.21)$$

mol dm⁻³)

5.8. When
nonia and
dm⁻³ and
complexed

e in aqueous

esent in two
reaction is

+ Cl⁻

se in water)

**Single-stage
Extraction**

If the extraction were carried out in a single stage by adding whole of the solvent 2 in one lot, we would have

$$\frac{m'}{m} = \left(\frac{K_d V_1}{K_d V_1 + n V_2} \right) \quad (4.20.22)$$

**Comparing
Efficiency of the
Two Processes**

Now we proceed to show that the multi-stage extraction is more effective than the single-stage extraction. Taking the inverse of Eq. (4.20.21), we get

$$\frac{m}{m_n} = \left(\frac{K_d V_1 + V_2}{K_d V_1} \right)^n = \left(1 + \frac{V_2}{K_d V_1} \right)^n \quad (4.20.23)$$

The right side of Eq. (4.20.23) can be expanded by using binominal theorem. We have

$$\frac{m}{m_n} = \left(1 + \frac{V_2}{K_d V_1} \right)^n = 1 + \frac{n V_2}{K_d V_1} + \frac{n(n-1)}{2} \left(\frac{V_2}{K_d V_1} \right)^2 + \dots \quad (4.20.24)$$

The inverse of Eq. (4.20.22) is

$$\frac{m}{m'} = \frac{K_d V_1 + n V_2}{K_d V_1} = 1 + \frac{n V_2}{K_d V_1} \quad (4.20.25)$$

Substituting Eq. (4.20.25) in Eq. (4.20.24), we get

$$\frac{m}{m_n} = \frac{m}{m'} + \frac{n(n-1)}{2} \left(\frac{V_2}{K_d V_1} \right)^2 + \dots$$

Therefore it follows that

$$\frac{m}{m_n} > \frac{m}{m'} \quad \text{or} \quad m_n < m'$$

that is, the amount of the solute remaining unextracted is less in multi-stage extraction. In other words, the amount of extracted solute is larger in multi-stage extraction than in single-stage extraction. Hence the former is more effective for extraction of solute from a given solution.

It may, however, be mentioned that a complete extraction of the solute can never be achieved howsoever large number of extractions may be done, as something will always be left behind in the solution in accordance with the distribution law.

While calculating m from Eqs. (4.20.21) and (4.20.22), one should be very careful about the expression for K_d . The latter represents the ratio of the amount of solute in the solvent in which it is already present to that of the extracting solvent. Sometimes, the value of K_d is given as the ratio of the solute in the extracting solvent to that in which it is already present. In such cases, the reciprocal of the given value of K_d should be employed while using Eqs. (4.20.21) and (4.20.22).

Exam

Soluti

Exam

Soluti

Example 4.20.4

A solute A is distributed between two immiscible liquids B and C with the value of the distribution coefficient, $[A]_C/[A]_B$, equal to 10. The concentration units are expressed in terms of grams of solute per dm^3 of solvent. It is desired to remove 99% of the amount of A from a solution containing 1 g of A in 100 cm^3 of B by extraction with successive 10 cm^3 portions of solvent C. Calculate the approximate volume of solvent C required for this purpose.

Solution

We have

$$\frac{[A]_C}{[A]_B} = \frac{10}{1}$$

$$\text{Therefore } \frac{[A]_B}{[A]_C} = \frac{1}{10} = 0.1 = K_d$$

Since 99% of A is to be removed from a solution containing 1 g of A per 100 cm^3 of B, we have

$$m_n = 0.01 \text{ g} \quad m = 1.00 \text{ g} \quad V_B = 100 \text{ cm}^3 \quad V_C = 10 \text{ cm}^3$$

The number of times (n) solvent C to be added can be calculated from

$$\frac{m_n}{m} = \left(\frac{K_d V_B}{K_d V_B + V_C} \right)^n$$

Substituting the given data, we get

$$\frac{0.01 \text{ g}}{1 \text{ g}} = \left(\frac{0.1 \times 100 \text{ cm}^3}{0.1 \times 100 \text{ cm}^3 + 10 \text{ cm}^3} \right)^n$$

$$\text{or } 0.01 = \left(\frac{1}{2} \right)^n \quad \text{or } \log(0.01) = -n \log 2$$

$$\text{or } n = 7$$

Hence, volume of C to be used is $7 \times 10 \text{ cm}^3$, i.e. 70 cm^3

Example 4.20.5

An aqueous solution contains 0.20 g aspirin in a 50 cm^3 solution. To this solution is added 20 cm^3 of ether, and the mixture is shaken and allowed to attain equilibrium at 298 K. At this temperature, the distribution coefficient of aspirin between ether and water is 4.7.

(i) How much aspirin remains in the aqueous phase?

(ii) If the extraction is carried out with two successive 10 cm^3 portions of ether, how much aspirin remains unextracted?

Solution

(i) We have

$$K_d = \frac{\text{Aspirin in g cm}^{-3} \text{ in ether}}{\text{Aspirin in g cm}^{-3} \text{ in water}} = 4.7$$

Let m_1 and m_2 be the respective masses of aspirin in ether and the aqueous phase after the addition of 20 cm^3 of ether in the given 50 cm^3 of aqueous solution. It follows that

$$\frac{m_1/20 \text{ cm}^3}{m_2/50 \text{ cm}^3} = 4.7$$

$$\text{and } m_1 + m_2 = 0.20 \text{ g}$$

Solving for m_1 and m_2 , we get

$$m_1 = 0.1306 \text{ g and } m_2 = 0.0694 \text{ g}$$

Thus, the mass of aspirin remaining in aqueous phase = 0.0694 g

(ii) For the multi-stage extraction, we have to use the distribution coefficient given below.

$$K_d = \frac{\text{Aspirin in water}}{\text{Aspirin in ether}} = \frac{1}{4.7} = 0.2128$$

We have

$$\frac{m_n}{m} = \left(\frac{K_d V_1}{K_d V_1 + V_2} \right)^n$$

where for the given problem, we have

$$m_n = ? \quad m = 0.20 \text{ g} \quad V_1 = 50 \text{ cm}^3 \quad V_2 = 10 \text{ cm}^3 \quad n = 2$$

Substituting the given data, we get

$$\begin{aligned} m_n &= \left(\frac{0.2128 \times 50 \text{ cm}^3}{0.2128 \times 50 \text{ cm}^3 + 10 \text{ cm}^3} \right)^2 (0.20 \text{ g}) = \left(\frac{10.64}{20.64} \right)^2 (0.20 \text{ g}) \\ &= 0.0531 \text{ g} \end{aligned}$$

Hence

$$\text{Aspirin remains unextracted} = 0.0531 \text{ g}$$

$$\text{Aspirin extracted} = 0.2 \text{ g} - 0.0531 \text{ g} = 0.1469 \text{ g}$$

REVISIONARY PROBLEMS

- 4.1 (a) Define the terms absorption coefficient α and coefficient of solubility β . Derive the expression relating α and β .
(b) What is the variance of a system involving a dissolved gas in a liquid?
- 4.2 Define Henry's law and show that the volume of an ideal gas dissolved in a given volume of solvent (measured at the pressure of the experiment) is independent of the pressure.
- 4.3 What is the effect of temperature on the solubility of a gas in liquids?
- 4.4 Show that Henry's law is a special case of the distribution law and Raoult's law.
- 4.5 Prove the statements that:
(i) Raoult's law may be considered as a special case of Henry's law; all systems which obey Raoult's law must satisfy Henry's law, but the reverse is not true unless Henry's law is applicable over the entire range of concentration.
(ii) Raoult's law is applicable to the solvent over the range where Henry's law in the form $x_2 = k p_2$ is applicable to solute.
- 4.6 What is an ideally dilute solution? Derive the expressions of chemical potential for solute and solvent in an ideally dilute solution.
- 4.7 Derive Henry's law from the viewpoint of kinetic-molecular theory.
- 4.8 Explain, what do you understand by an ideal solution. Show that for an ideal solution $\Delta_{\text{mix}}H = 0$ and $\Delta_{\text{mix}}V = 0$, where $\Delta_{\text{mix}}H$ and $\Delta_{\text{mix}}V$ are the changes in enthalpy and volume on mixing various constituents of the liquid solution. Suggest a possible reason for $\Delta_{\text{mix}}H$ and $\Delta_{\text{mix}}V$ being equal to zero.

- given below.
- g)
- ity β . Derive the
liquid?
olved in a given
dependent of the
ds?
d Raoult's law
ll systems which
not true unless
enry's law in the
ical potential
hat for an ideal
anges in enthalpy
uggests possible
- 4.9 (a) Following Raoult's law, derive an expression for the total vapour pressure of an ideal binary liquid solution in terms of the amount fraction of either of the two constituents in the liquids phase. Draw a schematic diagram for the variation of p_A versus x_A , p_B versus x_B and p versus x_A (or x_B) for a system in which $p_A^* > p_B^*$.
(b) Derive an expression for the total vapour pressure of an ideal binary liquid solution in terms of the amount fraction of either of the two constituents in vapour phase. Draw a schematic plot of p versus y_A and $1/p$ versus y_A .
- 4.10 (a) What is the variance of a binary liquid solution? Show that the state of the solution at a constant temperature can be represented on a two dimensional plot of pressure versus composition. Draw such a plot and label different regions and lines of the plot.
(b) Explain, why a region instead a point is observed when a binary liquid mixture is in equilibrium with its vapour.
(c) Predict the sequence of steps that takes place when the pressure on the binary liquid mixture at a constant temperature is gradually lowered.
(d) What is the lever rule and deduce it from pressure versus composition diagram for the binary liquid mixture?
(e) Discuss briefly the principle underlying the isothermal fractional distillation of an ideal binary liquid mixture.
- 4.11 (a) Draw a plot of temperature versus composition diagram at constant pressure for an ideal binary liquid mixture. Explain qualitatively why the liquids and the vaporous curves are not straight lines.
(b) Explain, why you should have a region over which the liquid mixture is in equilibrium with its vapour.
(c) Predict the sequence of steps that takes place when the temperature of a binary liquid mixture is gradually increased; hence describe briefly the theory of the isobaric fractional distillation of an ideal binary solution. What are the end products in such a distillation?
(d) Describe the theory of the bubble-cap fractionating column.
- 4.12 (a) What are nonideal solutions? How do they differ from ideal solutions? What are the main criteria for exhibiting positive and negative deviations from ideality?
(b) Draw a schematic diagram for p_A versus x_A , p_B versus x_B and p versus x_A (or x_B) of a system showing (i) positive deviation, and (ii) negative deviation. Also, show in the diagram the limiting Henry's line and the limiting Raoult's law line.
- 4.13 (a) Starting from the Gibbs-Duhem equation, derive the Duhem-Margules equation as applicable to a binary liquid system. To which type of liquid mixtures (ideal or nonideal), the Duhem-Margules equation is applicable?
(b) Starting from the Duhem-Margules equation as applicable to a binary liquid system, show that: (i) if one component behaves ideally, then the other also does so, and (ii) if one component shows positive deviation (or negative deviation), so also must the other.
- 4.14 Konowaloff's rule states that:
The vapour phase is richer in the component whose addition to the liquid mixture results in an increase of total vapour pressure.

or

The liquid phase is richer in the component whose addition to the liquid mixture results in a decrease of total vapour pressure.

Derive the above statements from the Duhem-Margules equation.

- 4.15 How will you justify the following alternative statements of Konowaloff's rule.

The vapour phase is richer in the component whose addition to the liquid mixture causes a decrease in the boiling point or alternatively, the liquid is richer in

the component whose addition to the liquid mixture causes an increase in its boiling point.

- 4.16 (a) Draw schematic plots of temperature versus composition for nonideal solutions showing very large positive and negative deviations from ideality.
 (b) Show that at the maximum or minimum point of the above plots, the following relation holds good.

$$\frac{y_A}{y_B} = \frac{x_A}{x_B}$$

that is, the composition of the vapour phase is identical with that of the liquid with which it is in equilibrium. On this basis justify that the liquids curve must meet with the vapour curve at the maximum or minimum point.

- (c) Show with the help of diagrams that (i) both the components can be separated from a nonideal solution if the components show a little deviation from ideality, and (ii) only pure A or pure B and not both of them if the components show very large deviation from ideality.
 (d) What is an azeotropic mixture? Show that it is not possible to separate the constituents from an azeotropic mixture following the ordinary fractional distillation. What other methods could be employed for the separation from the azeotropic mixture? How will you show that an azeotropic mixture is really a mixture and not a single compound resulted because of the definite union of the two constituents?
- 4.17 (a) Derive the relation

$$\Delta T_b = K_b m (1 - K)$$

as applicable to a dilute solution of a nonideal binary liquid mixture, i.e. one of the liquids is present in a very large amount (solvent) and the other one in a very small amount (solute). In the above expression, ΔT_b is the change in the boiling point of the solvent as a result of the addition of the volatile solute; K_b is the boiling point elevation constant, and K is the distribution coefficient of the solute between the vapour phase and the liquid phase and is defined as

$$K = \frac{\text{Amount fraction of the solute in the vapour phase}}{\text{Amount fraction of the solute in the liquid phase}}$$

- (b) Show that ΔT_b can be positive or negative depending upon the value of K , and hence show that the change in ΔT_b is in agreement with Konowaloff's rule.
- 4.18 (a) What do you understand by partially miscible liquids? Show that the formation of partially miscible liquids have sound theoretical background and can be explained qualitatively from the Duhem-Margules equation.
 (b) Using the phase rule expression, show that the compositions of the two conjugate solutions in the miscible gap are quite definite for a given temperature and are independent of the relative amounts of the two solutions. Draw a schematic plot connecting the compositions of the two conjugate solutions at different temperatures.
 (c) What is the difference between the critical solution temperature and mutual solubility temperature?
 (d) Show with the help of the phase rule that at a given pressure, the critical solution temperature is a nonvariant point.
 (e) Describe the sequence of steps that takes place when (i) the temperature of a given overall composition of partially miscible liquids is changed.

(f) At a temperature lower than CST, if we sweep from one extreme composition to the other, we will have to pass through the miscibility gap. Suggest an alternative path where this miscibility gap could be avoided.

(g) Explain, why certain liquid pairs show lower CST.

(h) Explain, under what circumstances, a liquid pair shows both the upper and the lower CST. What effect the pressure has on the temperature-composition curve for such a type of liquid pairs?

(i) Explain why in some cases the CST (upper or lower) is not observed experimentally.

(j) What effects impurities have on the CST?

(k) Describe with the help of appropriate diagram, the end products that are obtained when the following categories of partially miscible binary liquid mixtures are subjected to fractional distillation: (i) Partially miscible binary liquid mixtures with no azeotropic mixture and also showing incomplete separation of constituents, (ii) Partially miscible binary liquid mixtures showing an azeotropic mixture, (iii) Partially miscible binary liquid mixtures exhibiting complete separation of constituents.

4.19 Describe the theory of steam distillation.

4.20 (a) State the Nernst distribution law and show that it is in agreement with the phase rule requirements.

(b) Derive thermodynamically the distribution law. What approximations are made in deriving this law?

(c) Show that for a solute distributed in two ideally dilute solutions, its solubility in a solution is inversely proportional to its Henry's law constant in that solution.

(d) One of the basic requirements of the distribution law as suggested by Nernst is that the solute must have the same molecular form in both the layers. However, in some cases the association, dissociation, etc., of the solute takes place. Under such conditions the original definition of the distribution law can be modified in order to account for such changes. Derive the following modified forms of the distribution law:

(i) Solute having normal existence in the liquid α and dimerizes in the liquid β .

$$[A]_{\alpha}/([A]_{\beta, \text{total}})^{1/2} = \text{constant}$$

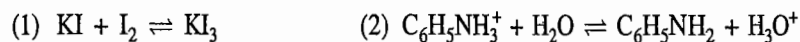
(ii) Solute A having normal existence in the liquid α and dissociates ($A \rightarrow B + C$) in the liquid β

$$\frac{[A]_{\alpha}}{\xi^2/K_{\text{diss}}} = \text{constant}$$

(iii) Solute having normal existence in the liquid α and undergoes a chemical reaction with the liquid β of the type $A + n\beta \rightleftharpoons A \cdot n\beta$

$$[A]_{\alpha}/[A]_{\beta, \text{total}} = \text{constant}$$

(d) Describe how the distribution experiments can be used to determine the equilibrium constant of each of the following reactions.



(e) What is a solvent extraction? Show mathematically that multi-stage extraction is more profitable than single-stage extraction.

TRY YOURSELF PROBLEMS

4.1 Hydrogen sulphide obeys Henry's law. What does this indicate about H_2S dissolved in water?

4.2 (a) Henry's law can be written as $p = K_{\text{H}}x$ and Raoult's law as

$$p = K_{\text{R}}x$$

In general, Henry's law constant K_{H} is different from Raoult's law constant K_{R} . Explain why it is so. Under what conditions the two constants have the same value?

(b) Show that Bunsen absorption coefficient is related to Henry's law constant by the expression $\alpha = \rho(22\,414\text{ cm}^3\text{ mol}^{-1})/K_{\text{H}}M_1$.

$$\begin{aligned} [\text{Hint: } p_2 &= K_{\text{H}}x_2 = K_{\text{H}}n_2/(n_1 + n_2) = K_{\text{H}}n_2/n_1 \\ &= K_{\text{H}}\{v_0/(22\,414\text{ cm}^3\text{ mol}^{-1})\}/(V_1\rho/M_1)] \end{aligned}$$

$$\text{Hence, } \alpha = v_0/(p_2V_1) = \rho(22\,414\text{ cm}^3\text{ mol}^{-1})/K_{\text{H}}M_1.]$$

4.3 (a) Figure 1 shows vapour pressure versus composition plots of a binary liquid system. Answer the following:

- Identify the two curves with the corresponding liquids,
 - By drawing limiting Henry's law and Raoult's law lines, show the regions of applicability of these laws.
 - How will you obtain the Henry's law constants for the liquids A and B?
- (b) Explain why the types of vapour pressure versus composition plots of a binary-liquid system shown in Fig. 2 are theoretically not feasible.
- (c) What is the difference between ideal and ideally dilute solutions?

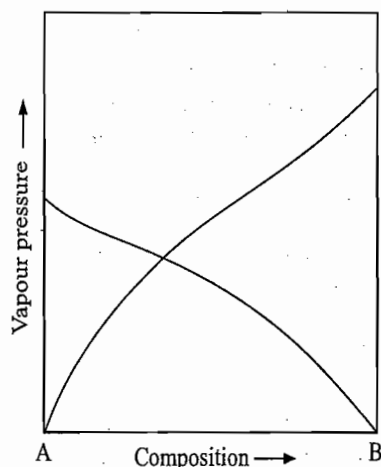


Fig. 1

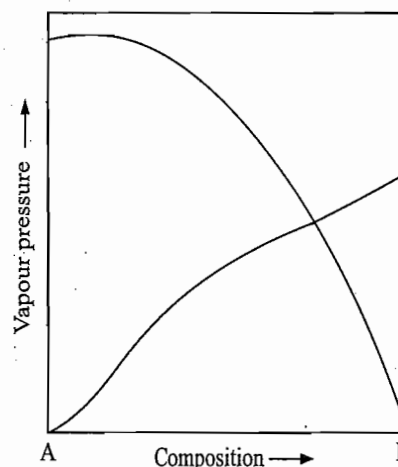


Fig. 2

4.4 Under what conditions are the following true?

- Henry's law constant = Raoult's law constant
- Henry's law constant > Raoult's law constant
- Henry's law constant < Raoult's law constant

4.5 For an ideal binary system, compute $\Delta_{\text{mix}}G$ and $\Delta_{\text{mix}}S$ at 298 K for $x_{\text{A}} = 0.1$ to 0.9 with a regular interval of 0.1 and then draw the plots of $\Delta_{\text{mix}}G$ versus x_{A} and $\Delta_{\text{mix}}S$ versus x_{A} . Show mathematically or otherwise that $\Delta_{\text{mix}}G$ is minimum and $\Delta_{\text{mix}}S$ is maximum at $x_{\text{A}} = 0.5$.

4.6 Starting from the fact that for a binary system exhibiting positive deviation from Raoult's law, either solvent-solvent interactions or solute-solute interactions are strong compared to solvent-solute interactions, show that for such a system

$$\Delta_{\text{mix}}H > 0; \Delta_{\text{mix}}S < \Delta_{\text{mix}}S_{\text{ideal}}; \Delta_{\text{mix}}G > \Delta_{\text{mix}}G_{\text{ideal}}; p_{\text{A}} > p_{\text{A,ideal}}$$

(Hint: See Example 4.14.1.)

- 4.7 The chemical potential of a constituent in a nonideal system is given by $\mu_i = \mu_i^* + RT \ln a_i$, where a_i is the activity of the constituent in the solution and is related to the amount fraction by the equation $a_i = x_i \gamma_i$ (where γ_i is the activity coefficient of the constituent). For a very dilute solution, real solution behaves as an ideal solution, and, therefore, we have $a_i \rightarrow x_i$ and $\gamma_i \rightarrow 1$. Show that for a real solution

$$\Delta_{\text{mix}}G = RT \sum_i x_i \ln a_i \quad \text{and} \quad \Delta_{\text{mix}}S = -R \sum_i x_i \ln a_i$$

- 4.8 Suppose the distribution coefficient of I_2 is studied between an aqueous solution of NH_4Cl and chloroform. Would you expect K_d to be different or same as that between water and chloroform? (Ans. K_d increases as $[I_2]_{NH_4Cl(aq)} > [I_2]_{\text{water}}$)

- 4.9 (a) Show that the nonideal binary liquid solutions may be classified into the following three categories based on the K_s values as defined by Eq. (4.17.5). Designate K as $K_{A \text{ in } B}$, where A is solute and B is solvent, or $K_{B \text{ in } A}$, where B is solute and A is solvent.

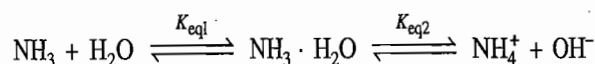
System	K_s values
(i) Solution with a little deviation from ideality	$K_{A \text{ in } B} > 1$ and $K_{B \text{ in } A} < 1$ or $K_{A \text{ in } B} < 1$ and $K_{B \text{ in } A} > 1$
(ii) Solution with large negative deviation from ideality	$K_{A \text{ in } B} < 1$ and $K_{B \text{ in } A} < 1$
(iii) Solution with large positive deviation from ideality	$K_{A \text{ in } B} > 1$ and $K_{B \text{ in } A} > 1$

(b) Rationalize the following facts with the help of Eq. (4.17.5).

- (i) The addition of ethyl bromide in ethyl iodide lowers the boiling point of the solvent whereas the addition of ethyl iodide in ethyl bromide raises the boiling point.
(ii) The addition of *n*-heptane in ethyl alcohol or ethyl alcohol in *n*-heptane lowers the boiling point of the solvent.
(iii) The addition of pyridine in acetic acid or acetic acid in pyridine raises the boiling point of the solvent.

- 4.10 Is it possible for one component of a binary solution to behave ideally but not the other component?

- 4.11 In aqueous solution of NH_3 , the following equilibria exist:



Show that the expression for the distribution of NH_3 between water and chloroform is given by

$$\frac{[NH_3]_{\text{total, aq}}}{[NH_3]_{\text{org}}} = K_d(1 + K_{eq1} + K_{eq1}K_{eq2}/[OH^-])$$

0.1 to 0.9
and $\Delta_{\text{mix}}S$
 $\Delta_{\text{mix}}S$ is

ion from
are strong

al

4.14.1.)

For NH_4OH solution, $K_{\text{eq1}} + K_{\text{eq2}}/[\text{OH}^-] \ll 1$. Hence show that

$$\frac{[\text{NH}_3]_{\text{total, aq}}}{[\text{NH}_3]_{\text{org}}} = \text{constant}$$

- 4.12 Show that for a given pressure, a binary mixture at the azeotropic point is an invariant system.

(Hint: Compositions of liquid and vapour phases are identical. Hence $F = (C - r) + 2 - P = (2 - 1) + 2 - 2 = 1$, which is the given pressure.)

NUMERICAL PROBLEMS

Solubility of Gases

- 4.1 The Bunsen absorption coefficients of O_2 and N_2 in water at 298 K are 0.028 3 and 0.014 3 atm^{-1} , respectively. If air contains 20% O_2 and 80% N_2 , by volume, how many cubic centimetre of gas measured at STP will be dissolved in 100 cm^3 of water in equilibrium with air at that temperature? How many, if pressure is 10 atm?

(Ans. 1.71 cm^3 and 17.1 cm^3)

- 4.2 Water saturated with air (20% O_2 and 80% N_2) at 298 K contains 8.9×10^{-3} g dm^{-3} of dissolved oxygen. Estimate the solubility of pure oxygen in water at a pressure of 25 atm and a temperature of 298 K.

(Ans. 1.1125 g)

- 4.3 The solubility coefficient S for CO_2 dissolved in water has the following values at different temperatures.

$\theta_c/^\circ\text{C}$	0	10	20	30	40
S	1.713	1.238	0.943	0.766	0.608

Calculate the mean value of enthalpy of solution of CO_2 in water.

(Ans. -18.12 kJ mol^{-1})

- 4.4 Given the following Bunsen absorption coefficients for CO at different temperatures, calculate the mean value of enthalpy of solution of CO in water.

$\theta_c/^\circ\text{C}$	0	10	20	30	40
S/atm^{-1}	0.035 4	0.028 2	0.023 2	0.020 0	0.017 8

(Ans. -11.87 kJ mol^{-1})

Henry's Law

- 4.5 The table below lists the vapour pressure of methyl chloride above the mixture with water at 298 K. Find Henry's law constant for methyl chloride.

$m(\text{CH}_3\text{Cl})/\text{mol kg}^{-1}$	0.029	0.051	0.106	0.131
p/mmHg	205.2	363.2	756.1	945.9

(Hint: Convert molalities into amount fractions, plot pressure versus amount fraction and extrapolate the plot in the dilute solution region up to $x = 1$.)

(Ans. 40 000 mmHg)

- 4.6 At 0 $^\circ\text{C}$ the Henry's law constant for argon in water is 2.17×10^4 bar and at 30 $^\circ\text{C}$ the constant is 3.97×10^4 bar for $p = 1$ atm. Find the approximate enthalpy of solution over this temperature range.

(Ans. 13.87 kJ mol^{-1})

Ideal Solution

- 4.7 (a) The vapour pressures of n -hexane and n -heptane at 273 K are 45.5 and 11.4 mmHg. What is the composition of a solution of these two substances if its total vapour pressure at 273 K is 37.3 mmHg?

(Ans. 0.759 5)

(b) The amount fraction of n -hexane in the vapour above a solution of n -hexane and n -heptane is 0.75 at 273 K. What is the composition of the liquid solution?

(Ans. 0.429)

- 4.8 Calculate the (i) enthalpy, (ii) entropy, (iii) volume, and (iv) Gibbs free energy of mixing of 1 mol of benzene and 2 mol of toluene at 298 K?

(Ans. (i) 0, (ii) 15.86 J K^{-1} , (iii) 0, and (iv) -4.732 kJ)

- 4.9 (a) Benzene and toluene form essentially ideal solutions, and a particular mixture which consists of two moles of benzene and three moles of toluene has a total vapour pressure of 280 mmHg at 333 K. If one additional mole of benzene is added to the solution, the new total vapour pressure is now 300 mmHg. Calculate the vapour pressures of pure benzene and toluene at 333 K?

(Ans. $p_b^* = 400$ mmHg and $p_t^* = 200$ mmHg)

- 4.10 At 413 K, the vapour pressure of C_6H_5Cl is 939.4 Torr and that of C_6H_5Br is 495.8 Torr. Assuming that these two liquids form an ideal solution, determine the composition of a mixture of the two which boils at 413 K under 1 atm pressure? What will be the composition of the vapour at this temperature?

(Ans. For C_6H_5Cl , $x = 0.596$, $y = 0.736$)

- 4.11 Ethanol and methanol form very nearly ideal solutions. The vapour pressures of ethanol and methanol are 44.5 Torr and 88.7 Torr, respectively. Calculate:

- (a) the amount fraction of methanol in a solution obtained by mixing 100 g of each,
 (b) the partial pressures and the total vapour pressure of the solution, and
 (c) the amount fraction of methanol in the vapour.

(Ans. (a) 0.59, (b) $p_{\text{ethanol}} = 18.2$ Torr, $p_{\text{methanol}} = 52.3$ Torr,
 $p_{\text{total}} = 70.5$ Torr, (c) 0.741)

- 4.12 The normal boiling points of C_6H_5Cl and C_6H_5Br are 405.2 K and 429.2 K, respectively. Assuming that these two liquids form an ideal solution:

- (a) Determine the composition of a mixture of the two which boils at 413 K under 1 atm pressure.
 (b) What would be the corresponding composition of vapour which is liberated at 413 K?

Assume Trouton's law is applicable to both the above constituents.

(Ans. For C_6H_5Cl , $x = 0.606$, $y = 0.74$)

- 4.13 An ideal solution of two components with vapour pressures of 400 mmHg and 300 mmHg when pure contains two moles of the more volatile component and five moles of the less volatile one. Calculate:

- (a) Total vapour pressure of the solution.
 (b) Composition of the vapour in equilibrium with a solution of this composition.
 (c) Composition of the last drop to vaporize from such a solution when none of the vapour is withdrawn from contact with the unvaporized mixture.
 (d) Composition of the last drop to vaporize when the distillate from such a solution is continuously condensed elsewhere and is thus withdrawn from contact with the unvaporized mixture.

- 4.14 (a) Benzene and toluene form nearly an ideal solution. Their boiling points in pure state are 80.2 °C and 110 °C, respectively. The temperature-composition data for them are given below:

x_{benzene}	0.00	0.24	0.35	0.46	0.90	1.00
y_{benzene}	0.00	0.44	0.62	0.77	0.95	1.00
b.pt./°C	110	101	93	88	83	82

- (i) If a solution with 50 mol per cent in benzene is to be distilled, at what temperature will the distillation just start? What would be the composition of the distillate which just issues at the above temperature?

- (ii) Suppose that the above distillate is condensed. Predict the temperature at which this liquid mixture will just start distilling and find out the corresponding composition of the vapour which issues at this temperature.

(iii) A liquid mixture containing 0.9 amount fraction of benzene is distilled without removing the distillate till it contains 0.24 amount fraction of benzene. What will be the composition of the resultant distillate?

(b) By employing Eqs. (4.12.8) and assuming Trouton's law to be applicable to both the species, calculate boiling point of the solution containing 50 mol per cent in benzene. After obtaining this value, calculate the composition of the vapour from Eq. (4.12.9).

- 4.15 At 363 K the vapour pressure of toluene is 400 mmHg, and that of *o*-xylene is 150 mmHg. What is the composition of a liquid mixture that will boil at 363 K when the pressure is 0.5 atm? What is the composition of the vapour produced?

(Ans. $x_{\text{toluene}} = 0.92$, $y_{\text{toluene}} = 0.97$)

- 4.16 Construct the temperature-composition diagram for the system ethanol-ethyl acetate from the following data available at 760 Torr external pressure.

$x(\text{C}_2\text{H}_5\text{OH})$	$y(\text{C}_2\text{H}_5\text{OH})$	$b.\text{pt.}^\circ\text{C}$	$x(\text{C}_2\text{H}_5\text{OH})$	$y(\text{C}_2\text{H}_5\text{OH})$	$b.\text{pt.}^\circ\text{C}$
0	0	77.15	0.563	0.507	72.0
0.025	0.070	76.7	0.710	0.600	72.8
0.100	0.164	75.0	0.833	0.735	74.2
0.260	0.295	72.6	0.942	0.880	76.4
0.360	0.398	71.8	0.982	0.965	77.7
0.462	0.462	71.6	1.000*	1.000	78.3

From the obtained plot answer the following:

- (a) What is the composition of the first vapour to come off from a solution containing 0.8 amount fraction of ethanol? What would be the boiling point of the liquid?
 (b) What would be the composition of the last drop of liquid to evaporate?

Nonideal Solution

- 4.17 The following data were obtained for benzene(A)-ethanol(B) solutions at atmospheric pressure:

Boiling point/ $^\circ\text{C}$	78	75	70	70	75	80
x_A	0	0.04	0.21	0.86	0.96	1
y_A	0	0.18	0.42	0.66	0.83	1

- (a) Plot the temperature-composition diagram for this system and estimate the composition and boiling point of the azeotrope.
 (b) For a solution containing 20 g of benzene and 50 g of ethanol, estimate the boiling point and the composition of the vapour first formed at this temperature.
 (c) If the solution described in (d) is exhaustively fractionated, which component will be obtained as a pure substance? Is this component the distillate or residue? How much of this component will be obtained as a pure substance?
- 4.18 Given below are the partial vapour pressures of A and B in a binary liquid solutions at 30 $^\circ\text{C}$.

x_A	0	0.12	0.30	0.60	0.80	1.0
p_A/Torr	0	20.0	55.0	140.0	225.0	295.0
p_B/Torr	345.0	300.0	230.0	110.0	37.5	0

Calculate the Henry's law constants for A and B and also the activities and activity coefficients of A and B at the given compositions.

Partial
Liquid:

Steam

Distrib

Partial Miscible Liquids

- 4.19 (a) Prepare a liquid-liquid phase diagram for the system of partially miscible liquids A and B, where the mass % of B at various temperatures are

$\theta_c/^\circ\text{C}$	0	10	20	30	40
(mass % B) ₁	30	37	45	53	64
(mass % B) ₂	94	90	87	84	80

What is the critical solution temperature?

(b) You are given a system containing 60 mass % of B at 20 °C. What is the nature of the system, whether it forms a single liquid or two liquids? If two, what are their compositions and the relative amounts? At what minimum temperature this system can be converted into the one liquid?

- 4.20 Methyl ethyl ketone and water are partially miscible. At 303 K the two layers contain 21.9 and 89.9% by mass of ketone. What will be the mass of each layer when 50 g each of methyl ethyl ketone and water are equilibrated at this temperature?

(Ans. 41.3 g methyl ethyl ketone—rich layer)

Steam Distillation

- 4.21 If the vapour pressure of water at 363 K is 526 mmHg, what mass of chlorobenzene will be distilled per gram of water collected in the distillate, if chlorobenzene is distilled at 363 K at a total pressure of 734 mmHg. (Ans. 8.876 g)

- 4.22 A mixture of an organic liquid A and water is distilled under one atmosphere pressure at 372.2 K. What mass of steam would be condensed to obtain 1.0 g of liquid A in the distillate? The vapour pressure of water at 372.2 K is 739 Torr; molar mass of A = 123 g mol⁻¹. (Ans. 5.15 g)

- 4.23 A mixture consisting of an organic liquid A and water (immiscible) distills at 368 K at 756 mmHg. The vapour pressure of H₂O at 368 K is 634.6 Torr. Calculate the molar mass of A, if the distillate contains 65 per cent by mass of the liquid A.

(Ans. 174.8 g mol⁻¹)

Distribution Law

- 4.24 The following data were obtained when quinine C₂₀H₂₄O₂N₂ was distributed between ether and water at 273 K.

(Water layer/g) per 100 cm ³	0.0547	0.059 0	0.062 2
(Ether layer/g) per 100 cm ³	0.114 2	1.290 1	1.428 1

Quinine exists as a monomer in water. Determine its molecular complexity in ether.

(Ans. Dimeric)

- 4.25 When different amounts of phenol were equilibrated with a mixture of water (W) and chloroform (C) at 298 K the concentrations of the two solutions formed in each case had the following values.

$c_w/\text{mol dm}^{-3}$	7.85×10^{-4}	1.73×10^{-3}	2.64×10^{-3}	4.65×10^{-3}
$c_c/\text{mol dm}^{-3}$	1.64×10^{-3}	2.10×10^{-3}	1.97×10^{-2}	5.77×10^{-2}

Phenol dissolved in water is almost completely monomeric.

- (a) Is this also true of phenol dissolved in chloroform?
(b) Calculate the value of the distribution coefficient.

(Ans. (a) No, (b) 3.7×10^{-4})

- 4.26 The distribution coefficient of succinic acid between water and ether is 5.7. How much ether is required to decrease the concentration of succinic acid in 50 cm³ of water from 5 to 1 per cent? Suppose that the extraction had been done in 10 stages by employing the volume each time equal to the (V/10), where V is the volume of ether obtained in the single-stage extraction. How much succinic acid remaining unextracted in water?

(Ans. 1140 cm³, 0.173%)

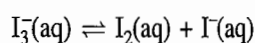
- 4.27 Solutions of ammonia in water were shaken with chloroform at 298 K. The following data were obtained when the equilibrium is reached.

$[\text{NH}_3]_{\text{water}}/\text{mol dm}^{-3}$	0.011 0	0.08 5	0.64 2
$[\text{NH}_3]_{\text{CHCl}_3}/\text{mol dm}^{-3}$	0.000 44	0.003 3	0.025 8

What is the distribution coefficient?

(Ans. 25.2 in favour of water)

- 4.28 Some iodine is dissolved in an aqueous solution of potassium iodide of concentration $0.102 \text{ mol dm}^{-3}$, and the solution is then shaken with carbon tetrachloride until equilibrium is reached (at 15°C). The amount of iodine at equilibrium is found to be $0.048 \text{ mol dm}^{-3}$ in the aqueous layer and $0.089 \text{ mol dm}^{-3}$ in the carbon tetrachloride layer. The distribution coefficient of iodine between carbon tetrachloride and water is 85. Calculate the equilibrium constant at 15°C for the reaction



(Ans. $1.23 \times 10^{-3} \text{ mol dm}^{-3}$)

- 4.29 0.0624 mol of an amine hydrochloride is present per dm^3 of the aqueous solution. On shaking this solution with one dm^3 of benzene, 0.00964 mol of the free base is extracted. The distribution coefficient of the free base for benzene and water is 24.1. Calculate the hydrolysis constant for the base hydrochloride.

(Ans. $7.67 \times 10^{-5} \text{ mol dm}^{-3}$)

- 4.30 An aqueous solution contains 0.20 g aspirin ($\text{C}_9\text{H}_8\text{O}_4$) in 50 cm^3 solution. To this solution 20 cm^3 of ether is added and the mixture is shaken and allowed to come to equilibrium at 298 K . At this temperature $K_A = c_{\text{ether}}/c_{\text{water}} = 4.7$. (a) How much aspirin remains in the aqueous phase? (b) If the extraction is carried out with two successive 10 cm^3 portions of ether, how much aspirin remains unextracted?

(Ans. (a) 0.00038 mol , (b) 0.00029 mol)

- 4.31 (a) A series of solutions of iodine in chloroform were shaken with water at 298 K until equilibrium was established. The following results were obtained.

$[\text{I}_2]_{\text{water}}/\text{mol dm}^{-3}$	0.000 25	0.001 20	0.001 84	0.002 42
$[\text{I}_2]_{\text{CHCl}_3}/\text{mol dm}^{-3}$	0.033 8	0.154 6	0.231 8	0.320 7

What is the value of the distribution coefficient?

(b) How many times would it be necessary to equilibrate 1 dm^3 of a solution of iodine in water with 10 cm^3 samples of chloroform in order to reduce the iodine concentration to 10^{-2} of an initial value?

(Ans. (a) 0.0076 , (b) six extractions)

- 4.32 Parke's process involves the extraction of silver from the molten argentiferous lead with the help of molten zinc. Silver is more soluble in zinc than in lead ($K_d = [\text{Ag}]_{\text{Zn}}/[\text{Ag}]_{\text{Pb}} = 300$). Zn - Ag has a higher melting point and is thus solidified first. It is separated and subjected to distillation in a retort when Zn passes over leaving behind silver. Calculate the mass of Ag that can be separated from 1000 mL of argentiferous lead containing 100 g of silver if 100 mL of Zn is added in (i) one lot, and (ii) two equal lots of 50 mL .

(Ans. (i) 96.77 g , (ii) 99.61 g)

5.1 AI

System
of OneSystem
of TwoSystem
of Three

5.2 QI

5

Phase Diagrams of One-Component Systems

5.1 APPLICATION OF THE PHASE RULE

According to the phase rule, the degrees of freedom of a one-component system is given by

$$F = C - P + 2 = 1 - P + 2 = 3 - P$$

Thus we have:

System Consisting of One Phase

The value of F becomes

$$F = 3 - P = 3 - 1 = 2$$

that is, the system is bivariant. Therefore, we have to state the values of two variables in order to define the system completely. These variables are temperature and pressure. The given component may exist in any of the three phases, namely, solid, liquid, or vapour.

System Consisting of Two Phases

The value of F in this case is

$$F = 3 - P = 3 - 2 = 1$$

and thus stating the value of either of the two variables (temperature or pressure) is sufficient to define the system completely. If temperature is stated then the other variable, namely, pressure, will have a definite value and vice versa. The two phases in equilibrium with each other may be solid-solid, solid-liquid, liquid vapour, and solid-vapour.

System Consisting of Three Phases

Here

$$F = 3 - P = 3 - 3 = 0$$

and thus the system is invariant, i.e. the three phases can exist in equilibrium only at definite values of temperature and pressure. The three phases in equilibrium with one another may be solid-liquid-vapour, solid-solid-liquid, and solid-solid-vapour.

It is obvious that for a one-component system, we cannot have more the three phases in equilibrium as otherwise the variance of the system would become negative.

5.2 QUALITATIVE DISCUSSION OF A PHASE DIAGRAM

Since the maximum degrees of freedom to define a one-component system are two, its phase diagram can be drawn in two dimensions by choosing rectangular

Representation of a Single Phase

axes representing temperature and pressure, respectively. A complete phase diagram of a one-component system will include the following aspects.

A single phase will be represented over a region (or area) since the given phase can exist under different conditions of temperature and pressure, i.e. temperature and pressure can both be varied independently over a range of values without affecting the existence of the single phase. In general, the solid phase is stable under conditions of low temperatures and high pressures, the gaseous phase at high temperatures and low pressures, and the liquid phase in between these two extreme conditions. Figure 5.2.1 shows the approximate regions of stability of the three phases.

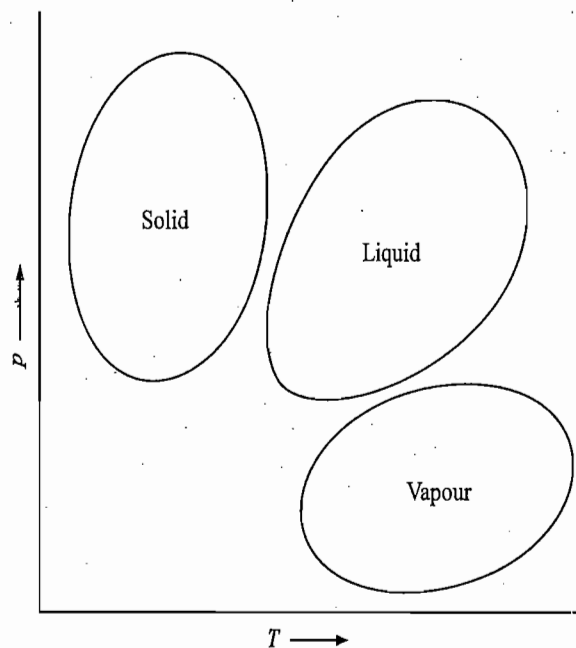


Fig. 5.2.1 Regions of stability of the three phases

Representation of Two Phases in Equilibrium

Two phases in equilibrium will be represented on a line since for this type of equilibrium, one has to state only one variable (say, temperature), the other variable (say, pressure) has a definite value. Thus, if temperature is stated, the corresponding equilibrium value of pressure can be determined from the line and vice versa. The number of lines in a phase diagram will be equal to the number of two-phase equilibria which the system can possess. The slope dp/dT of these lines follows the Clapeyron equation, according to which, we have

$$\frac{dp}{dT} = \frac{\Delta_{ts}H_m}{\Delta_{ts}V_m} \quad (5.2.1)$$

where $\Delta_{ts}H_m$ and $\Delta_{ts}V_m$ are the respective changes in the molar enthalpy and the molar volume during transformation of one phase into another at the equilibrium temperature T . In general, the slope dp/dT for solid to liquid transformation is much steeper than those of solid to vapour and liquid to vapour transformations, as $\Delta_{ts}V_m$ for the fusion process is usually very small. Since $\Delta_{ts}H_m$ for the fusion process is positive, the sign of the slope dp/dT of the melting point curve will depend on whether the term $\Delta_{ts}V_m$ is positive or

negative. If the solid is denser than the liquid, as is normally the case, $\Delta_{\text{trs}}V_m$ is positive and the slope of the melting points curve is positive. If on the other hand, liquid is more dense than solid, then $\Delta_{\text{trs}}V_m$ is negative and so is the slope of the melting point curve. If the densities of liquid and solid are identical, the slope becomes infinite since dp/dT becomes infinite in this case. These three cases along with the expected curves of solid to vapour and liquid to vapour equilibria are shown in Fig. 5.2.2.

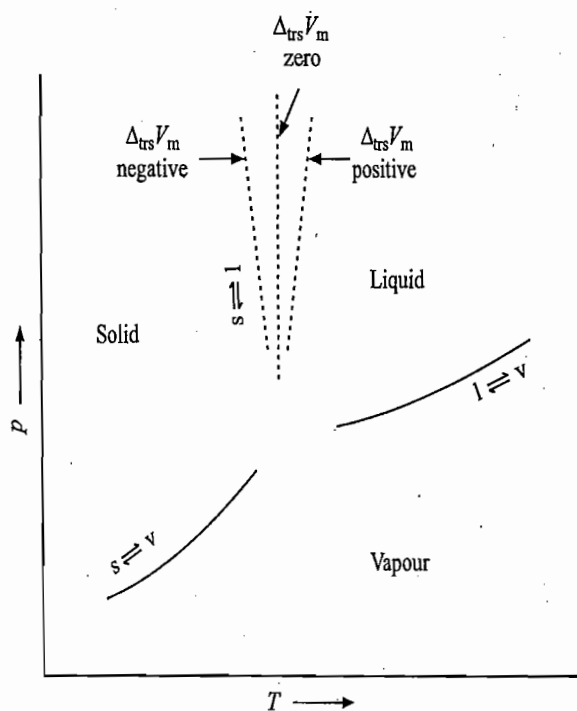


Fig. 5.2.2 A schematic plot of three lines representing solid to liquid, solid to vapour and liquid to vapour equilibria

Representation of Three Phases in Equilibrium

Three phases in equilibrium will be represented by a point since both the variables (i.e. temperature and pressure) for such type of equilibrium have definite values. The three lines representing solid to liquid, solid to vapour and liquid to vapour equilibria meet one another at this point. This point is known as the *triple point of the system*. In general, we have

$$\Delta_{\text{sub}}H_m = \Delta_{\text{fus}}H_m + \Delta_{\text{vap}}H_m \quad (5.2.2)$$

where the subscripts sub, fus and vap stand respectively for sublimation, fusion and vaporization transformations. Since

$$\Delta_{\text{sub}}H_m > \Delta_{\text{vap}}H_m$$

it follows from the Clapeyron equation that at the triple point

$$\left(\frac{dp}{dT}\right)_{s=v} > \left(\frac{dp}{dT}\right)_{l=v} \quad (5.2.3)$$

Thus, at the triple point where the three lines representing solid to vapour, liquid to vapour and solid to liquid equilibria meet one another, the slope of the line representing solid to vapour transformation will be greater than that of the liquid to vapour transformation.

plete phase
pects.
given phase
temperature
ues without
ase is stable
us phase at
n these two
stability of

this type of
, the other
e is stated,
d from the
be equal to
. The slope
which, we

(5.2.1)

enthalpy and
ther at the
d to liquid
d liquid to
very small.
pe dp/dT of
positive or

5.3 PHASE DIAGRAM OF WATER

Experimentation

Let an evacuated vessel fitted with a movable piston be placed in a thermostat whose temperature is well below 0°C (say, -20°C). The position of the piston can be held anywhere against a set of stops. Let solid water (i.e. ice) be placed in the vessel. The behaviour of the above system at various stages of temperature and pressure as depicted in the phase diagram of water (Fig. 5.3.1) is described below.

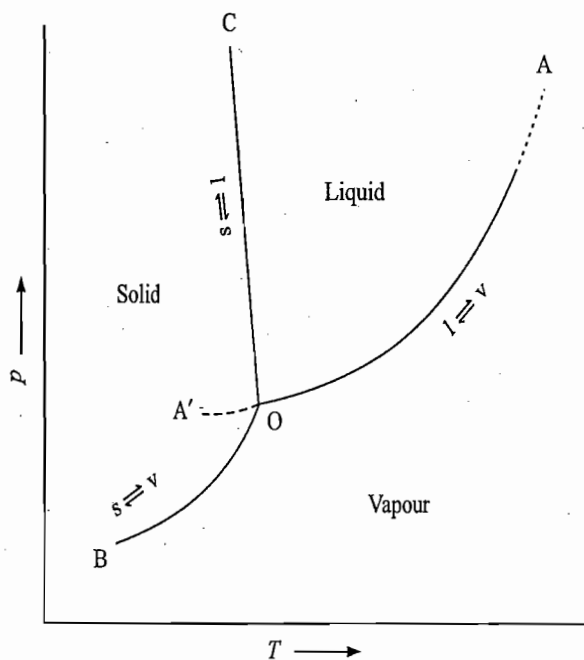


Fig. 5.3.1 Phase diagram of water system

Solid-Vapour Equilibrium

After some time when the system attains equilibrium, it is found that the pressure within the vessel attains a constant value. This pressure is the vapour pressure of solid water at -20°C . Let the point B in Fig. 5.3.1 represent the above system of ice in equilibrium with its vapour.

Suppose that the temperature of the system represented by the point B is raised slowly at constant volume. It is found that the vapour pressure of solid water also increases. If a plot of vapour pressure of solid water versus temperature is drawn, the curve BO as shown in Fig. 5.3.1 is obtained. The curve BO, known as the *sublimation curve*, describes the various conditions of temperature and pressure at which solid water and water vapour are in equilibrium with each other. The slope of the curve at any point as given by the Clapeyron equation is

$$\left(\frac{dp}{dT}\right)_{s=v} = \frac{\Delta_{\text{sub}}H_m}{T(V_{m,v} - V_{m,s})}$$

The variation of sublimation pressure with temperature (i.e. the curve BO) may be represented by the Clausius-Clapeyron equation:

$$\ln\left(\frac{p}{p^\circ}\right) = -\frac{\Delta_{\text{sub}}H_m}{RT} + I$$

Solid
PhaseMelt
PhaseLiqu
Equilibrium

Solid and Vapour Phases

For a given temperature, the equilibrium between solid and vapour exists only at a specific vapour pressure which can be determined from the curve BO. Now suppose the volume of the vessel representing system at point B is increased isothermally by moving the piston in the outward direction. This, in turn will decrease the pressure of the vapour phase. Since at a given temperature vapour pressure of solid water has a fixed value, a little bit of ice will sublime to keep the vapour pressure to a constant value. If the above process of expansion at constant temperature is continued, more and more of ice sublimates till the entire solid phase disappears. At this stage, the system contains only the gaseous phase. The expansion of the latter merely causes a decrease in its pressure.

If the volume of system at point B is decreased isothermally, it will cause an increase in the pressure of the vapour phase. In order to keep the vapour pressure to a constant value, a little of vapour will condense to give solid water. If the above process of compressing the vapour phase is continued, eventually a stage is reached where the entire vapour phase is condensed and the system contains only the solid phase. The piston of the vessel will be directly in contact with the solid phase. The pressure on the solid phase can be increased by putting weights on the piston.

Thus, it may be concluded that the effect of isothermal increase and decrease of pressure on the solid-vapour equilibrium is to convert the two-phase equilibrium to that of one phase comprising of solid and vapour, respectively. Hence, regions above and below the curve BO represent solid and vapour phases, respectively.

Melting of Solid Phase (Triple Point)

If the temperature of the system at point B is slowly increased at constant volume, eventually a temperature is reached where the vapour pressure of solid water becomes equal to that of liquid water maintained at the same temperature. At this stage, solid water starts melting and the system contains three phases, viz., solid, liquid and vapour, in equilibrium with one another. According to the phase rule, as described earlier, the system now becomes invariant, i.e. so long as the three phases remain intact, the temperature and vapour pressure of system remain constant. The point O in Fig. 5.3.1 represents such a situation and is known as *triple point*. For water, this point lies at $0.0075\text{ }^{\circ}\text{C}$ and $4.6\text{ mmHg}^{\dagger}$.

Liquid-Vapour Equilibrium

If the system at the triple point is slowly heated at constant volume, its temperature and vapour pressure do not change unless whole of solid is melted to give liquid. At this stage, the system contains two phases, viz., liquid and vapour, in equilibrium with each other. If now the system is gradually heated at constant volume, the temperature and the vapour pressure of the system change along the curve OA.

[†]Note that the pressure 4.6 mmHg is the vapour pressure of solid or liquid at temperature $0.0075\text{ }^{\circ}\text{C}$. Since the effect of external pressure on the vapour pressure of solid-liquid equilibrium is very small, the normal melting point of a substance is very near to its triple point and, for all practical purposes, the triple point of a substance may be referred to as its melting point.

The curve OA, known as the *vaporization curve*, represents the various conditions of temperature and pressure at which liquid and vapour are present in equilibrium with each other. The slope of the line OA at any point is given by the Clapeyron equation, such that

$$\left(\frac{dp}{dT}\right)_{l=v} = \frac{\Delta_{\text{vap}}H_m}{T(V_{m,v} - V_{m,l})}$$

The variation of vapour pressure of liquid phase with temperature (i.e. the curve OA) may be represented by the Clausius-Clapeyron equation:

$$\ln \left(\frac{p}{p^\circ}\right) = -\frac{\Delta_{\text{vap}}H_m}{RT} + I$$

where I is the constant of integration. The curve OA has an upper limit at point A which represents the critical temperature of water. In accordance with Eq. (5.2.3), the slope of the line BO (representing solid \rightleftharpoons vapour) at the triple point is larger than that of line OA (representing liquid \rightleftharpoons vapour).

Liquid and Vapour Phases

For a given temperature, the equilibrium between liquid and vapour will exist only at a specific vapour pressure which can be determined from the curve OA. Now if the volume of a system anywhere on the line OA is increased at constant temperature by moving the piston in the outward direction, it will cause a decrease in the pressure of vapour phase. Since at a given temperature the vapour pressure of liquid water has a fixed value, a little bit of water will evaporate to keep the vapour pressure to a constant value. If the above process of expansion is continued, more and more of liquid water evaporates till the entire liquid phase disappears. At this stage, the system contains only the gaseous phase. The expansion of the latter merely causes a decrease in its pressure. Similarly, if the volume of the system is gradually decreased, more and more of vapour is condensed in order to keep the vapour pressure of liquid water to a constant value. If the compression is continued, eventually a stage is reached where the entire vapour phase is condensed and the system contains only liquid phase. The piston of the vessel will be directly in contact with the liquid phase. The pressure on the liquid phase can be increased by applying more pressure on the piston.

Thus, it may be concluded that the regions above and below the curve OA represent liquid and vapour phases, respectively.

Solid-Liquid Equilibrium

If the system containing only solid phase at some high pressure is gradually heated, its temperature rises till a stage is reached where it starts melting. At this stage, temperature of the system remains constant till whole of the solid phase is converted into the liquid phase. The temperature at which solid melts depends on the pressure on the solid phase. The line OC in Fig. 5.3.1 represents the various conditions of temperature and pressure at which solid and liquid are in equilibrium with each other. The slope of this line follows the Clapeyron equation, such that

Meta
Equi

Com
Vapo
Stabl
Meta

Label
Phase

is conditions
equilibrium
e Clapeyron

$$\left(\frac{dp}{dT}\right)_{s \rightleftharpoons l} = \frac{\Delta_{\text{fus}} H_m}{T(V_{m,l} - V_{m,s})}$$

Since $V_{m,l} - V_{m,s}$ is small, the slope of the line OC has a comparatively high value. Consequently, the line OC is nearly vertical. Since for water, $V_{m,s} > V_{m,l}$ the slope dp/dT is negative and hence the line OC is slightly tilted towards the left.

Metastable Equilibrium

If the system on the line AO is rapidly cooled, it may happen that ice fails to appear at the triple point and the vapour pressure of liquid continues to move along OA' which now represents metastable equilibrium involving liquid and vapour phases. Similarly, if the system on the line BO is rapidly heated, liquid may not appear at the triple point and the vapour pressure of solid continues along the continuation of the curve BO where metastable equilibrium between solid and vapour phases exists.

Comparison of Vapour Pressure of Stable and Metastable Phases

Since at the triple point, the slope of the solid-vapour curve is greater than that of the liquid-vapour curve, the continuation of each of these curves beyond the triple point places them above the curve for the stable phase in that temperature interval. Consequently, the vapour pressure of the system in the metastable region is greater than that in the stable system at the same temperature. This generalization can also be derived thermodynamically as follows.

Since the transformation

Metastable phase \rightarrow Stable phase

is a spontaneous process, we must have

$$\Delta G = \mu_s - \mu_{ms} = -ve$$

where μ_s and μ_{ms} are the chemical potentials of stable and metastable phases, respectively. Since in both stable and metastable regions, the substance is in equilibrium with its vapour, we will have

$$\mu_s = \mu_{vs} = \mu_v^{\circ} + RT \ln p_s$$

$$\mu_{ms} = \mu_{vm} = \mu_v^{\circ} + RT \ln p_{ms}$$

where μ_{vs} and μ_{vm} are the chemical potentials of the vapour phase in stable and metastable regions, respectively. Hence

$$\Delta G = \mu_s - \mu_{ms} = RT \ln \frac{p_s}{p_{ms}} \quad (5.3.1)$$

Since ΔG is negative, it follows that

$$p_{ms} > p_s$$

that is, the vapour pressure of metastable phase is larger than that of the stable phase at the same temperature.

Labelling of the Phase Diagram

Table 5.3.1 describes, in brief, the phase diagram of water (Fig. 5.3.1) in the light of above analysis.

ure (i.e. the
n:

mit at point
dance with
at the triple
).

r will exist
curve OA.
at constant
ill cause a
erature the
water will
ve process
tes till the
s only the
ease in its
l, more and
iquid water
a stage is
n contains
ct with the
y applying
curve OA

gradually
ng. At this
olid phase
ts depends
esents the
uid are in
Clapeyron

Table 5.3.1 Description of the Phase Diagram of Water (Fig. 5.3.1)

Location of the system	Status of the system	Degrees of freedom	
		Number	Kind
BO	Sublimation curve	1	T or p
O	Triple point where solid \rightleftharpoons liquid \rightleftharpoons vapour	0	
OA	Vaporization curve	1	T or p
OC	Fusion curve	1	T or p
Area above AO and to the right of OC	Liquid phase	2	T and p
Area above OB and to the left of OC	Solid phase	2	T and p
Area, below the curve AOB	Vapour phase	2	T and p
OA'	Metastable equilibrium liquid \rightleftharpoons vapour	1	T or p

Example 5.3.1

Suppose solid water-liquid water equilibrium is maintained at triple point temperature (0.0075°C) and triple point pressure (4.6 mmHg). Calculate how much change in temperature be made so that the equilibrium is maintained at an external pressure of 1 atm. Given: $\rho(\text{ice}) = 0.917 \text{ g cm}^{-3}$, $\rho(\text{liquid}) = 0.99987 \text{ g cm}^{-3}$ and $\Delta_{\text{fus}}H_m = 6008.5 \text{ J mol}^{-1}$.

Solution

The temperature at which solid-liquid equilibrium is maintained, when the external pressure is raised from 4.6 mmHg to 1 atm, can be calculated by using the Clapeyron equation:

$$\frac{dp}{dT} = \frac{\Delta_{\text{fus}}H_m}{T(V_{m,l} - V_{m,s})}$$

$$\begin{aligned} \text{Now } V_{m,l} - V_{m,s} &= \frac{18 \text{ g mol}^{-1}}{0.99987 \text{ g cm}^{-3}} - \frac{18 \text{ g mol}^{-1}}{0.917 \text{ g cm}^{-3}} \\ &= 18.002 \text{ cm}^3 \text{ mol}^{-1} - 19.629 \text{ cm}^3 \text{ mol}^{-1} \\ &= -1.627 \text{ cm}^3 \text{ mol}^{-1} = -1.627 \times 10^{-6} \text{ m}^3 \text{ mol}^{-1} \end{aligned}$$

$$\text{Thus } \frac{dp}{dT} = \frac{6008.5 \text{ J mol}^{-1}}{(273.15 \text{ K})(-1.627 \times 10^{-6} \text{ m}^3 \text{ mol}^{-1})} = -1.352 \times 10^7 \text{ Pa K}^{-1}$$

$$\text{or } dT = -\frac{dp}{1.352 \times 10^7 \text{ Pa K}^{-1}}$$

$$\begin{aligned} \text{Now } dp &= 760 \text{ mmHg} - 4.6 \text{ mmHg} = 755.4 \text{ mmHg} \\ &= \left(\frac{755.4}{760} \times 101.325 \times 10^3 \text{ Pa} \right) = 1.007 \times 10^5 \text{ Pa} \end{aligned}$$

$$\text{Hence, } dT = -\frac{1.007 \times 10^5 \text{ Pa}}{1.352 \times 10^7 \text{ Pa K}^{-1}} = -0.0075 \text{ K}$$

Thus, ice will melt at 0°C (triple point temperature -0.0075 K) when the external pressure on it is 1 atm. This external pressure may be due to the atmospheric pressure. Thus, the normal melting point of ice is 0°C .

Example 5.3.2

Suppose liquid water-water vapour equilibrium is maintained at triple point temperature and atmospheric pressure of 1 atm. Calculate the vapour pressure of water. Given: Triple point pressure = 4.6 mmHg.

Solution

In the absence of atmospheric gases, the vapour pressure of liquid water (p^*) would have been 4.6 mmHg. In the presence of air at atmospheric pressure (P_2), the vapour pressure of liquid water (p_2) can be calculated by using the expression

$$RT \ln \frac{p}{p^*} = V_{m,1}(P_2 - p^*) \quad (1)$$

The molar volume of liquid water is

$$V_{m,1} = \frac{M}{\rho} = \frac{18 \text{ g mol}^{-1}}{1 \text{ g cm}^{-3}} = 18 \text{ cm}^3 \text{ mol}^{-1} = 18 \times 10^{-6} \text{ m}^3 \text{ mol}^{-1}$$

The value of p^* is

$$p^* = \left(\frac{4.6 \text{ mmHg}}{760 \text{ mmHg}} \right) (101325 \text{ Pa}) = 613.28 \text{ Pa}$$

Substituting the values of $V_{m,1}$ and p^* in Eq. (1), we get

$$\begin{aligned} (8.314 \text{ J K}^{-1} \text{ mol}^{-1}) (273.15 \text{ K}) \ln \left(\frac{p_2}{4.6 \text{ mmHg}} \right) \\ = (18 \times 10^{-6} \text{ m}^3 \text{ mol}^{-1}) (101325 \text{ Pa} - 613.28 \text{ Pa}) \end{aligned}$$

$$\text{or} \quad \ln \left(\frac{p_2}{4.6 \text{ mmHg}} \right) = \frac{(18 \times 10^{-6}) (100712)}{(8.314) (273.15)} = 7.98 \times 10^{-4}$$

$$\text{or} \quad \frac{p_2}{4.6 \text{ mmHg}} = 1.0008 \quad \text{or} \quad p_2 = 4.604 \text{ mmHg}$$

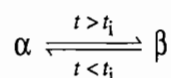
5.4 POLYMORPHISM

Sometimes a substance can exist in more than one crystalline form and each form has its own characteristic vapour pressure curve. Such type of substances are said to exhibit the phenomenon of *polymorphism*. Two types of polymorphism are observed depending upon whether the change from one polymorphic form to the other can be carried out in either direction or only in one direction. The former is known as *enantiotropy* (Greek: opposite change) and the latter as *monotropy* (Greek: one change).

ENANTIOTROPY

Two crystalline forms can be interconvertible and this conversion takes place at a definite temperature for a given external pressure. This temperature is the *transition point* and it is the only temperature at which the two solids can coexist in equilibrium at a given pressure. If the temperature of the system is greater than this temperature, there occurs a complete transformation of one form into the other, one being stable below the transition point and the other above

it. Suppose, the two enantiotropic modifications are represented by α and β , then we have;



where α -form is stable at lower temperatures while β -form is stable at higher temperatures.

Each polymorphic form has its own vapour pressure curve. The two vapour pressure curves meet each other at a common point as shown in Fig. 5.4.1. The curve AB is vapour pressure curve of the α -form and BC is that of the β -form. The curve AB comes before the curve BC as α -form is stable at lower temperatures. The point B is the intersection point and is the transition point where both α - and β -forms are at equilibrium with the vapour. Thus, if α -form is heated very slowly so that the equilibrium between solid and vapour is always established, the vapour pressure of the system will rise along the curve AB. When the point B is reached, the α -form is transformed into the β -form without any increase in temperature and vapour pressure. Heat supplied to the system is utilized in carrying out the transformation from the α -form to the β form. Once the transformation is complete, the vapour pressure of the system changes along the curve BC.

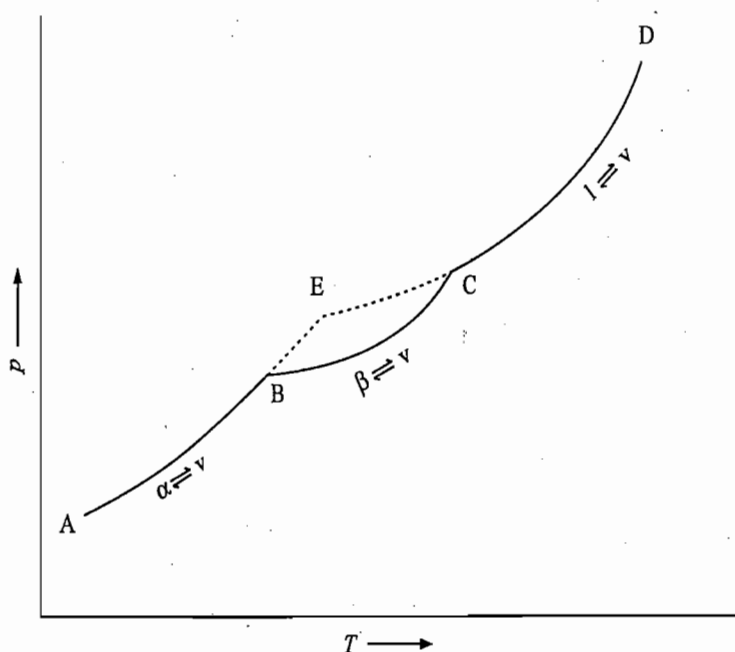


Fig. 5.4.1 The phenomenon of enantiotropy

Since at the triple point,

$$\Delta_{\text{sub}}H_m(\text{solid } \alpha) = \Delta_{\text{trs}}H_m(\text{solid } \alpha - \text{solid } \beta) + \Delta_{\text{sub}}H_m(\text{solid } \beta)$$

it follows that

$$\Delta_{\text{sub}}H_m(\text{solid } \alpha) > \Delta_{\text{sub}}H_m(\text{solid } \beta)$$

A direct consequence of the above relation is that the slope of solid α -vapour curve at the triple point is greater than that of solid β -vapour curve.

Consequently, the metastable extensions of the solid α -vapour and the solid β -vapour curves obey Eq. (5.3.1), according to which, the vapour pressure of component in the metastable form is larger than that in the stable form at same temperature.

Point C is the melting point of the β -form and thus the curve CD is the vaporization curve. If the heating of the α -form is not done slowly, it may be observed that at B no β -form is formed and the vapour pressure of the system continues along BE. Along this line, we have metastable equilibrium between α -form and its vapour. Similarly, if the liquid is cooled rapidly, then it may be observed that at C no β -form separates and the cooling of the liquid continues along the line CE, which now represents a metastable equilibrium between liquid and vapour. The two metastable curves meet each other at the point E, which represents the melting point of α -form.

Examples of substances exhibiting enantiotropy are sulphur, tin, ammonium nitrate, mercury iodide, carbon tetrachloride, and solid water(ice).

Phase Diagram of Sulphur

Sulphur exists in two enantiotropic forms, namely, rhombic and monoclinic; the former being stable at lower temperatures. To describe the phase diagram shown in Fig. 5.4.2, we start with rhombic sulphur placed in an evacuated vessel maintained at some low temperature. The behaviour of the system at various stages of temperature and pressure is described below.

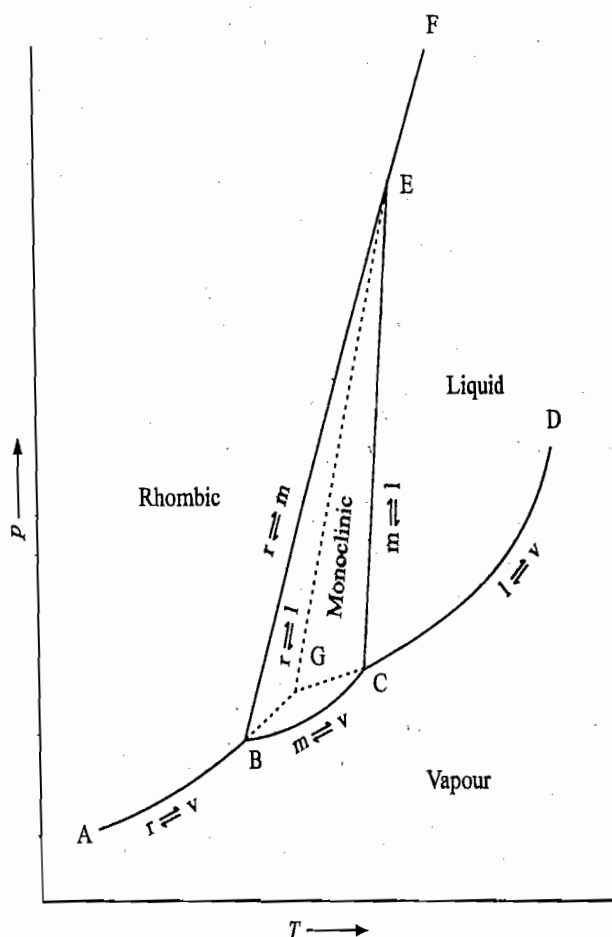


Fig. 5.4.2 Phase diagram of sulphur

**Rhombic Sulphur-
Vapour Equilibrium**

After some time when the system attains equilibrium, the vapour pressure will attain a fixed value. Let the point A in Fig. 5.4.2 represent this state of the system.

Now suppose, the temperature of the system represented by the point A is raised at constant volume. The vapour pressure of rhombic sulphur is also increased. If a plot of vapour pressure versus temperature is drawn, we get the curve AB as shown in Fig. 5.4.2. The curve AB, known as *sublimation curve of rhombic sulphur*, describes the various conditions of temperature and pressure at which rhombic sulphur exists in equilibrium with its vapour.

If a system on the curve AB is subjected to isothermal expansion, more and more of solid sulphur is converted into sulphur vapour to keep the vapour pressure of rhombic sulphur to a constant value. Continued expansion will ultimately lead to the vapour phase only. Similarly, if the original system is subjected to isothermal compression, more and more of vapour phase is condensed to give rhombic sulphur. Continued compression will ultimately lead to only rhombic sulphur. Hence, the phases above and below the curve AB comprise of solid rhombic sulphur and vapour sulphur, respectively.

**Monoclinic Sulphur-
Vapour Equilibrium**

If a system on AB is gradually heated at constant volume, eventually a stage is reached where the vapour pressure of rhombic sulphur becomes equal to that of monoclinic sulphur. Consequently, rhombic sulphur starts converting into monoclinic sulphur and the system contains three phases, viz., rhombic, monoclinic and vapour, in equilibrium with one another. According to the phase rule, the system becomes invariant ($F = C + 2 - P = 1 + 2 - 3 = 0$) and thus temperature and vapour pressure of the system remain constant so long as three phases remain intact. The point B in Fig. 5.4.2 represents such a situation which lies at 95.5 °C and 0.01 Torr.

If the system at point B is slowly heated at constant volume, its temperature and pressure do not change unless whole of rhombic sulphur is converted into monoclinic sulphur. At the latter stage, the system contains two phases, viz., monoclinic sulphur and vapour, in equilibrium with each other and thus the system becomes univariant ($F = C + 2 - P = 1 + 2 - 2 = 1$). If the heating is continued at constant volume, the temperature and vapour pressure of monoclinic sulphur change along the curve BC.

The slopes of curves AB and BC at point B are

$$\left(\frac{dp}{dT}\right)_{\text{rhomb} \rightleftharpoons \text{v}} = \frac{\Delta_{\text{sub}} H_{\text{m, rhomb}}}{T(V_{\text{m, v}} - V_{\text{m, rhomb}})}$$

$$\left(\frac{dp}{dT}\right)_{\text{mono} \rightleftharpoons \text{v}} = \frac{\Delta_{\text{sub}} H_{\text{m, mono}}}{T(V_{\text{m, v}} - V_{\text{m, mono}})}$$

Now since $\Delta_{\text{sub}} H_{\text{m, rhomb}} = \Delta_{\text{trs}} H_{\text{m, rhomb} \rightarrow \text{mono}} + \Delta_{\text{sub}} H_{\text{m, mono}}$, it follows that

$$\Delta_{\text{sub}} H_{\text{m, rhomb}} > \Delta_{\text{sub}} H_{\text{m, mono}}$$

Hence
$$\left(\frac{dp}{dT}\right)_{\text{rhomb} \rightleftharpoons \text{v}} > \left(\frac{dp}{dT}\right)_{\text{mono} \rightleftharpoons \text{v}}$$

that is, the slope of the curve AB at point B is larger than that of the curve BC.

Liq
EqRho
Sul
EqMon
Liq
EqRho
LiqMet
Eq

If a system on the curve BC is subjected to isothermal expansion and compression, it will eventually be converted into the system of one phase comprising of vapour and monoclinic sulphur, respectively. Thus, the system above and below the curve BC consists of solid monoclinic sulphur and vapour sulphur, respectively.

Liquid-Vapour Equilibrium

At point C, the vapour pressure of monoclinic sulphur becomes equal to that of liquid sulphur. Consequently, at this point three phases, viz., monoclinic sulphur, liquid sulphur and vapour sulphur, exist in equilibrium with one another. This point lies at 119.2 °C and 0.025 Torr.

If the system at the point C is heated gradually at constant volume, more and more of monoclinic sulphur converts into liquid sulphur. The temperature and vapour pressure of the system remain constant until whole of solid monoclinic sulphur is converted into liquid sulphur. If the heating is continued, the temperature and vapour pressure of liquid sulphur move along the curve CD.

At point C, the slope of the curve BC is larger than that of the curve CD. This is in accordance with Eq. (5.2.3).

If a system on the curve CD is subjected to isothermal expansion and compression, it would eventually lead to a system of one phase comprising vapour (below the curve CD) and liquid sulphur (above the curve CD), respectively.

Rhombic-Monoclinic Sulphur in Equilibrium

If a system of solid rhombic sulphur at some high pressure is heated slowly, its temperature increases till a stage is reached where it starts converting into monoclinic sulphur. At this stage, temperature of the system remains constant until whole of rhombic sulphur is converted into monoclinic sulphur. The temperature at which this transition takes place depends on the pressure of the system. The line BE in Fig. 5.4.2 represents the various conditions of temperature and pressure at which the above transition takes place. The slope of this line is positive since monoclinic sulphur is less dense than rhombic sulphur. On the left of the line BE, rhombic sulphur exists whereas to its right only monoclinic sulphur exists.

Monoclinic Sulphur-Liquid in Equilibrium

If the heating of monoclinic sulphur is continued, a stage is reached where it starts melting. This happens when the state point moves on the line CE. The temperature of the system remains constant until whole of monoclinic sulphur melts to give liquid sulphur. Thus, on the left and right of the line CE, the system consists of monoclinic sulphur and liquid sulphur, respectively.

The slope of the line CE is larger than that of BE. Consequently, these two lines meet each other at point E, which represents a triple point where rhombic, monoclinic and liquid sulphur are in equilibrium with one another. This point lies at 151°C and 1 290 atm.

Rhombic Sulphur-Liquid Phases

If the pressure of the system is higher than the triple point pressure at point E, then rhombic sulphur passes directly into liquid sulphur along the line EF.

Metastable Equilibria

If a system on the line AB is heated rapidly, it may happen that monoclinic sulphur does not appear at point B but the vapour pressure of the system continues along the line BG, which now represents metastable equilibrium between rhombic sulphur and vapour. Similarly, if a system on DC is cooled rapidly, monoclinic

sulphur might not appear at point C and the system continues to move along CG, which represents metastable equilibrium between liquid sulphur and vapour. The point G where the curves BG and CG meet each other is another triple point (metastable) where rhombic, liquid and vapour sulphur are in equilibrium with one another. This point lies at 114.5 °C and 0.03 Torr.

Similarly, if a system of rhombic sulphur at some high pressure is heated rapidly, transition to monoclinic sulphur might not occur on the line BE but the system might pass over directly to liquid phase. The line GE in Fig. 5.4.2 represents such a type of metastable equilibrium.

It may be pointed out here that the stable and metastable transitions are to be discussed separately. For example, to the left and right of the metastable equilibrium line GE, rhombic and liquid sulphur exist whereas these regions actually are of monoclinic sulphur. The equilibrium involving rhombic and liquid sulphur will exist provided either rhombic sulphur does not pass over to monoclinic sulphur on the line BE or liquid sulphur does not pass over to the monoclinic sulphur on the line CE. If these stable transitions are observed, then the metastable transition involving rhombic to liquid sulphur will not have any existence. Metastable phases to the left and right of the line GE will have a tendency to pass spontaneously over to the stable phase, i.e. monoclinic sulphur.

Table 5.4.1 describes, in brief, the phase diagram of sulphur (Fig. 5.4.2) in the light of the above analysis.

Labelling of the Phase Diagram

MONOTROPY

In the phenomenon of monotropy, one of the crystalline forms is stable while the other one is metastable over the whole range of its existence. In this case, transformation from one form into another can take place only in one direction; from metastable to stable form. The vapour pressure curve for the metastable form lies above that of the stable form as shown in Fig. 5.4.3. The curve AB is

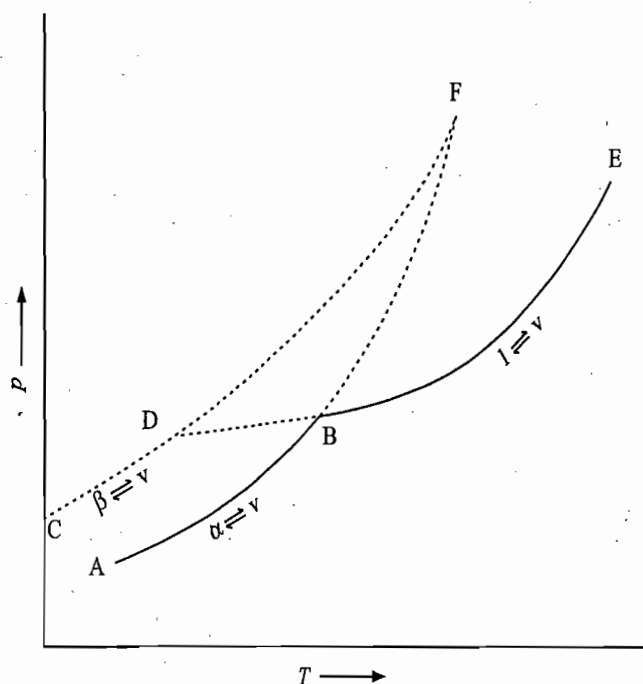
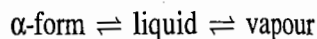


Fig. 5.4.3 The phenomenon of monotropy

Table 5.4.1 Description of the Phase Diagram of Sulphur (Fig. 5.4.2)

Location of the system	Status of the system	Degrees of freedom
AB	Sublimation curve of rhombic sulphur	1
B	Triple point where $\left(\begin{array}{c} \text{rhombic} \\ \text{sulphur} \end{array} \right) \rightleftharpoons \left(\begin{array}{c} \text{monoclinic} \\ \text{sulphur} \end{array} \right) \rightleftharpoons \left(\begin{array}{c} \text{vapour} \\ \text{sulphur} \end{array} \right)$	0
BC	Sublimation curve of monoclinic sulphur	1
C	Triple point where $\left(\begin{array}{c} \text{monoclinic} \\ \text{sulphur} \end{array} \right) \rightleftharpoons \left(\begin{array}{c} \text{liquid} \\ \text{sulphur} \end{array} \right) \rightleftharpoons \left(\begin{array}{c} \text{vapour} \\ \text{sulphur} \end{array} \right)$	0
CD	Vaporization curve of liquid sulphur	1
BE	Transition line of rhombic sulphur to monoclinic sulphur	1
CE	Fusion line of monoclinic sulphur to liquid sulphur	1
E	Triple point where $\left(\begin{array}{c} \text{rhombic} \\ \text{sulphur} \end{array} \right) \rightleftharpoons \left(\begin{array}{c} \text{monoclinic} \\ \text{sulphur} \end{array} \right) \rightleftharpoons \left(\begin{array}{c} \text{liquid} \\ \text{sulphur} \end{array} \right)$	0
EF	Fusion line of rhombic sulphur to liquid sulphur	1
BG	Metastable sublimative curve of rhombic sulphur	1
CG	Metastable vaporization curve of liquid sulphur	1
G	Metastable triple point where $\left(\begin{array}{c} \text{rhombic} \\ \text{sulphur} \end{array} \right) \rightleftharpoons \left(\begin{array}{c} \text{liquid} \\ \text{sulphur} \end{array} \right) \rightleftharpoons \left(\begin{array}{c} \text{vapour} \\ \text{sulphur} \end{array} \right)$	0
GE	Metastable fusion line of rhombic sulphur to liquid sulphur	1
Area to the left of ABF	Rhombic sulphur	2
Area above CD and to the right of CEF	Liquid sulphur	2
Area BCEB	Monoclinic sulphur	2
Area below ABCD	Vapour sulphur	2
Area BGEB	Metastable rhombic sulphur	2
Area CGEC	Metastable liquid sulphur	2

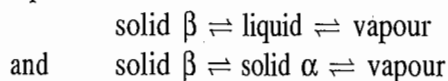
the vapour pressure curve of the stable α -form and the curve CD is that of the metastable β -form. BE is the vaporization curve. The point B is the stable triple point where we have



The point D is the melting point of the β -form which can be obtained by extending the line EB up to the point D where it meets the curve CD. The system will have a hypothetical transition temperature which can be obtained by extending the

lines AB and CD up to the point F where the two curves meet each other. The hypothetical transition temperature F has no real existence as it is above the melting points of the two modifications and the two solids do not exist.

In fact, points D and F are the metastable triple points which respectively represent



Since the effect of pressure on the melting point and the transition point is usually very small, the two points D and F may be referred to as the melting point and the transition point, respectively. Similarly the point B may be referred to as the melting point of the α -form.

Since the β -form has higher vapour pressure, it is metastable with respect to α -form and thus β -form will pass over to the α -form and the reverse of this process (i.e. α -form to β -form) will not take place. The β -form, however, can be obtained from the α -form by an indirect method. First of all, it may be heated to get a liquid and then cooling the liquid rapidly will move the system along the line BD instead of BA and at D, the β -form will separate.

Examples of substances exhibiting monotropy are phosphorus, silica, iodine monochloride and benzophenone.

Example Exhibiting both Monotropy and Enantiotropy

Some substances show both enantiotropy and monotropy. A typical example which exhibits this behaviour is phosphorus, where we have

Monotropy transition White P(both α - and β -forms) \rightarrow Violet P

Enantiotropic transition White P(β -form) \rightarrow White P(α -form)

Phase Diagram of Phosphorus

The phase diagram of phosphorus is shown in Fig. 5.4.4. Its description is given in Table 5.4.2. The vapour pressure curves of unstable phases are shown by dotted lines.

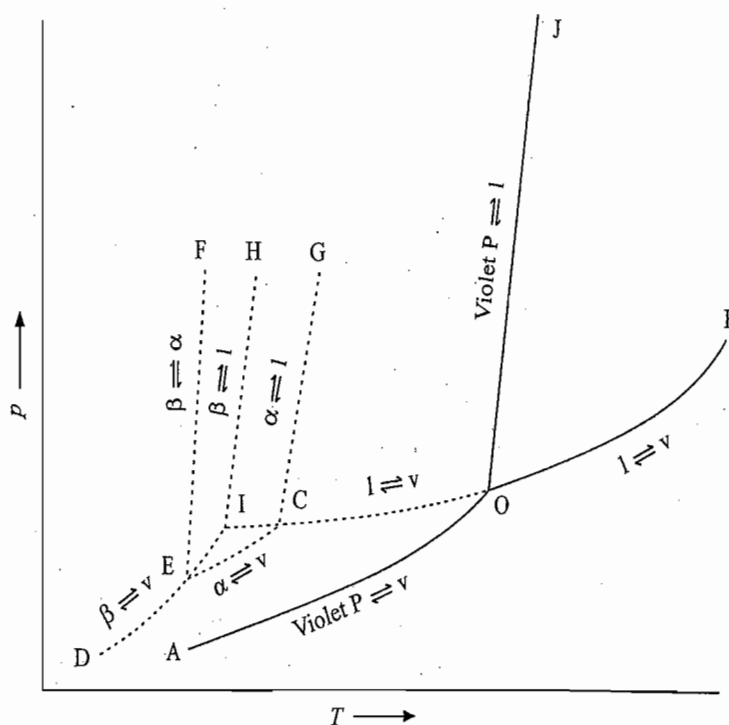


Fig. 5.4.4 Phase diagram of phosphorus

Exam

Solut

Table 5.4.2 Description of the Phase Diagram Shown in Fig. 5.4.4.

Location of the system	Status of the System
AO	Sublimation curve of stable solid violet phosphorus
OB	Vaporization curve of liquid phosphorus
OJ	Fusion point curve of violet phosphorus
O	Triple point where solid violet P \rightleftharpoons liquid P \rightleftharpoons vapour P
OCI	metastable vaporization curve of liquid phosphorus
DE	Sublimation curve of unstable white (β -form) phosphorus
EC	Sublimation curve of unstable white (α -form) phosphorus
EF	Enantiotropic transition point curve involving unstable white P(α -form) and unstable white P(β -form)
CG	Fusion point curve of unstable white P(α -form)
C	Metastable triple point where solid white P(α -form) \rightleftharpoons liquid P \rightleftharpoons vapour P
E	Metastable triple point, where solid white P(β -form) \rightleftharpoons solid white P(α -form) \rightleftharpoons vapour P
EI	Metastable sublimation curve of white P(β -form)
I	Metastable triple point, where solid white P(β -form) \rightleftharpoons liquid P \rightleftharpoons vapour P
IH	Metastable fusion point curve of white P(β -form)

Example 5.4.1

Element X exists in three solid allotropic modifications, known respectively, as 1, 2 and 3. In the vicinity of the 1-2-3 triple point,

$$S_{m,2} > S_{m,3} > S_{m,1} \quad \text{and} \quad V_{m,3} > V_{m,1} > V_{m,2}$$

where S and V stand for entropy and volume, respectively. Sketch an arrangement of the three two-phase equilibrium lines around the 1-2-3 triple point on a pressure-temperature diagram consistent with the given information. Label all the lines and areas.

Solution

From the given information, we have

$$\left(\frac{dp}{dT}\right)_{1=2} = \left(\frac{\Delta S_m}{\Delta V_m}\right)_{1=2} = \frac{S_{m,2} - S_{m,1}}{V_{m,2} - V_{m,1}} = \frac{+ve}{-ve} = -ve$$

$$\left(\frac{dp}{dT}\right)_{1=3} = \left(\frac{\Delta S_m}{\Delta V_m}\right)_{1=3} = \frac{S_{m,3} - S_{m,1}}{V_{m,3} - V_{m,1}} = \frac{+ve}{+ve} = +ve$$

$$\left(\frac{dp}{dT}\right)_{2=3} = \left(\frac{\Delta S_m}{\Delta V_m}\right)_{2=3} = \frac{S_{m,3} - S_{m,2}}{V_{m,3} - V_{m,2}} = \frac{-ve}{+ve} = -ve$$

The possible phase diagram (along with other information) consistent with the information is given in Fig. 5.4.5

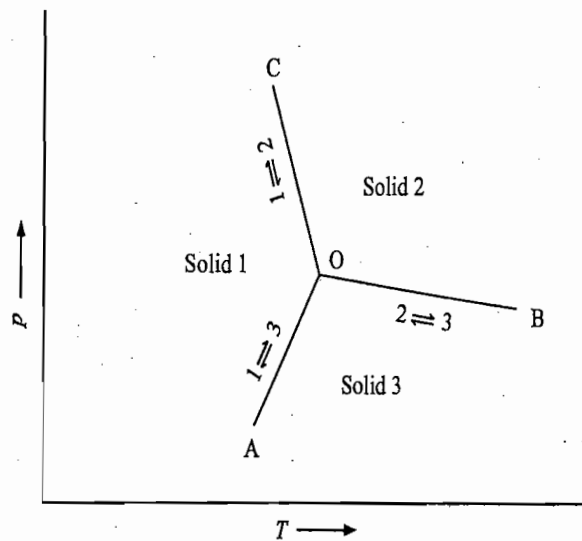


Fig. 5.4.5

Example 5.4.2

A certain substance exists in two solid modifications, α and β , as well as liquid and vapour. Under a pressure of one atmosphere, α is more stable at lower temperatures than β , which melts at a still higher temperature to form the liquid, α is denser than the liquid, but β is less dense than the liquid. No metastable equilibria are observed. Sketch the pressure-temperature phase diagram indicating the significance of each point, line and region. Include in your diagram every triple point that can be observed.

Solution

We are given that

- (i) α is stable at lower temperatures.
- (ii) β is stable at higher temperatures and also that it melts at some higher temperature.
- (iii) $\rho_\alpha > \rho_l$ or $V_{m,\alpha} < V_{m,l}$
- (iv) $\rho_\beta < \rho_l$ or $V_{m,\beta} > V_{m,l}$
- (v) No metastable equilibria.

Taking points (iii) and (iv) together, we have

$$\rho_\alpha > \rho_l > \rho_\beta \quad \text{or} \quad V_{m,\alpha} < V_{m,l} < V_{m,\beta}$$

Since higher temperature favours the form with the greater enthalpy, we must have

$$H_{m,l} > H_{m,\beta} > H_{m,\alpha}$$

Now, we have

$$\left(\frac{dp}{dT}\right)_{\alpha=\beta} = \left(\frac{\Delta H_m}{T\Delta V_m}\right)_{\alpha=\beta} = \frac{H_{m,\beta} - H_{m,\alpha}}{T(V_{m,\beta} - V_{m,\alpha})} = \frac{+ve}{+ve} = +ve$$

$$\left(\frac{dp}{dT}\right)_{\alpha=l} = \left(\frac{\Delta H_m}{T\Delta V_m}\right)_{\alpha=l} = \frac{H_{m,l} - H_{m,\alpha}}{T(V_{m,l} - V_{m,\alpha})} = \frac{+ve}{+ve} = +ve$$

$$\left(\frac{dp}{dT}\right)_{\beta=l} = \left(\frac{\Delta H_m}{T\Delta V_m}\right)_{\beta=l} = \frac{H_{m,l} - H_{m,\beta}}{T(V_{m,l} - V_{m,\beta})} = \frac{+ve}{-ve} = -ve$$

The phase diagram consistent with the above information is given in Fig. 5.4.6.

Fig. 5.4

Descr
Diagra

Exampi

Solution

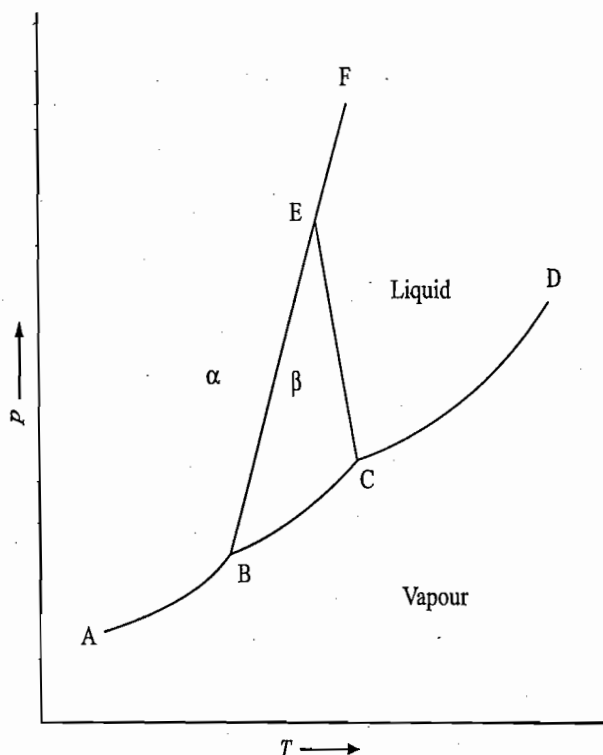


Fig. 5.4.6

Description of the Diagram

The description of various lines, points and regions of Fig. 5.4.6 is given below.

- (i) Curve AB: $\alpha \rightleftharpoons$ vapour.
- (ii) Curve BC: $\beta \rightleftharpoons$ vapour.
- (iii) Point B: Triple point where $\alpha \rightleftharpoons \beta \rightleftharpoons v$.
- (iv) Point C: Triple point where $\beta \rightleftharpoons l \rightleftharpoons v$.
- (v) Curve CD: Liquid \rightleftharpoons vapour.
- (vi) Curve BE: $\alpha \rightleftharpoons \beta$.
- (vii) Curve CE: $\beta \rightleftharpoons l$.
- (viii) Point E: Triple point where $\alpha \rightleftharpoons \beta \rightleftharpoons l$.
- (ix) Curve EF: $\alpha \rightleftharpoons l$.

Example 5.4.3

Show that on the basis of slope sign there are 8 and only 8 possible unique configurations of the two-phase lines around a triple point in a one-component pressure-temperature diagram. Draw the sketch also.

Solution

The slope of each line may be positive or negative. Labelling the three phases as 1, 2, and 3, the possible permutations of the signs of lines representing two phases in equilibrium are given below.

	(I)	(II)	(III)	(IV)	(V)	(VI)	(VII)	(VIII)
1-2 equilibrium line	+	+	+	+	-	-	-	-
2-3 equilibrium line	+	+	-	-	+	+	-	-
1-3 equilibrium line	+	-	+	-	+	-	+	-

Thus there are, in all, eight possible configurations around the triple point. The corresponding diagrams are shown in Fig. 5.4.7.

id and vapour.
than β , which
liquid, but β is
the pressure-
region. Include

r temperature.

must have

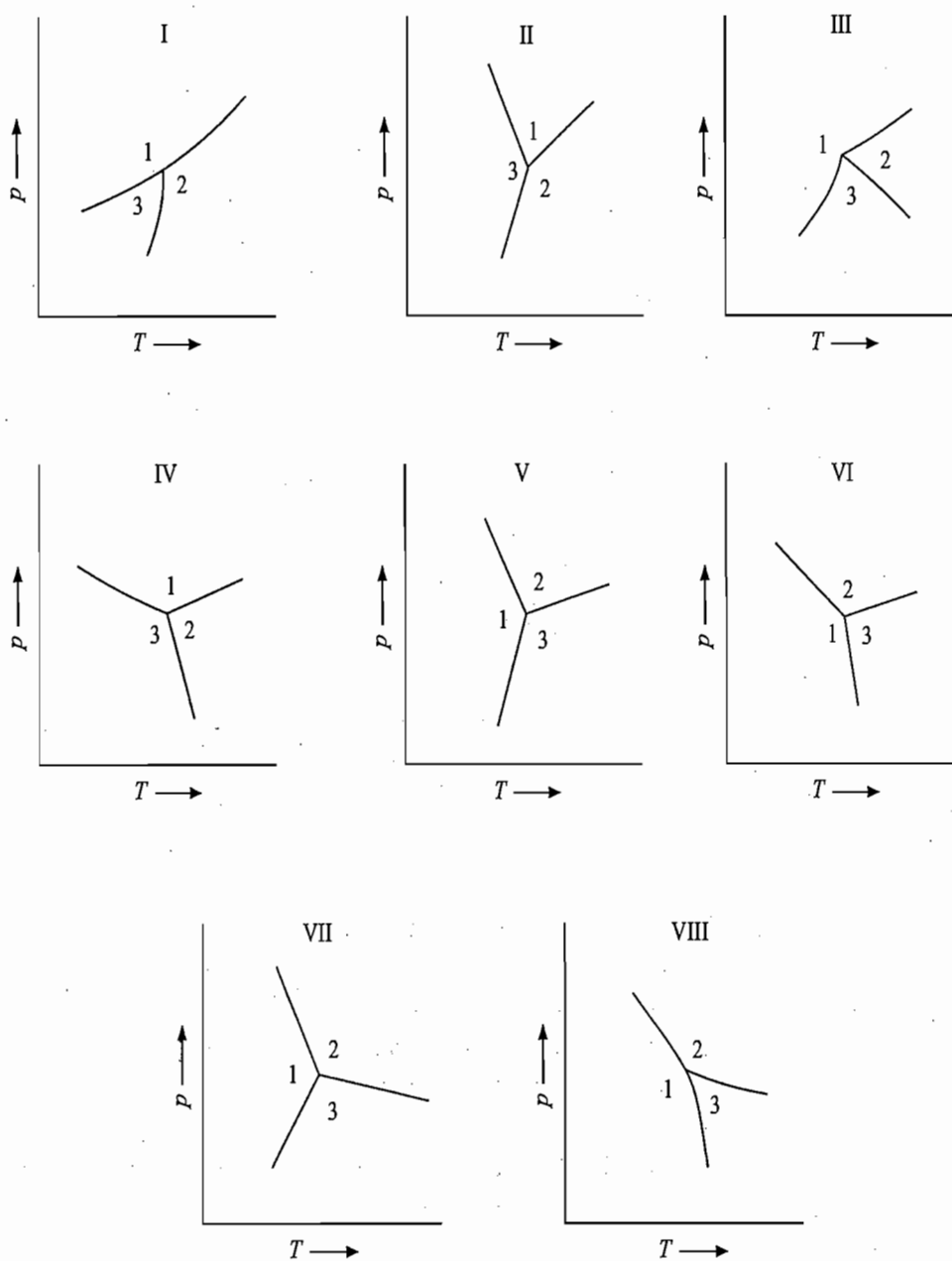


Fig. 5.4.7

Example 5.4.4

A substance S has a low-pressure form, S_α , which melts at about 17°C under its own pressure of about 8 mmHg. It has also a high-pressure form, S_β , and the phases S_α , S_β and liquid are in equilibrium at about 55°C under a pressure of 2 000 atm. The β -form is denser than the α -form, but both are denser than the liquid. Draw the phase diagram.

Solution

We are given that

- (i) Two allotropic form: S_α is stable at lower pressures, and S_β is stable at higher pressures.
- (ii) Melting point of S_α is 17°C at the pressure of 8 mmHg.
- (iii) $S_\alpha \rightleftharpoons S_\beta \rightleftharpoons S_l$ at 55°C and 2 000 atm.
- (iv) $\rho_\beta > \rho_\alpha$.
- (v) $\rho_\beta > \rho_l$ and $\rho_\alpha > \rho_l$.

Fig. 5

Exam

Since higher temperature favours the form with greater enthalpy, we must have

$$H_{m,\alpha} < H_{m,\beta} < H_{m,1}$$

Taking point (iv) and (v) together, we have

$$\rho_{\beta} > \rho_{\alpha} > \rho_1 \quad \text{or} \quad V_{m,\beta} < V_{m,\alpha} < V_{m,1}$$

Now, we have

$$\left(\frac{dp}{dT}\right)_{\alpha \rightleftharpoons \beta} = \left(\frac{\Delta H_m}{T\Delta V_m}\right)_{\alpha \rightleftharpoons \beta} = \frac{H_{m,\beta} - H_{m,\alpha}}{T(V_{m,\beta} - V_{m,\alpha})} = \frac{+ve}{-ve} = -ve$$

$$\left(\frac{dp}{dT}\right)_{\alpha \rightleftharpoons 1} = \left(\frac{\Delta H_m}{T\Delta V_m}\right)_{\alpha \rightleftharpoons 1} = \frac{H_{m,1} - H_{m,\alpha}}{T(V_{m,1} - V_{m,\alpha})} = \frac{+ve}{+ve} = +ve$$

$$\left(\frac{dp}{dT}\right)_{\beta \rightleftharpoons 1} = \left(\frac{\Delta H_m}{T\Delta V_m}\right)_{\beta \rightleftharpoons 1} = \frac{H_{m,1} - H_{m,\beta}}{T(V_{m,1} - V_{m,\beta})} = \frac{+ve}{+ve} = +ve$$

The phase diagram consistent with the given information is shown in Fig. 5.4.8.

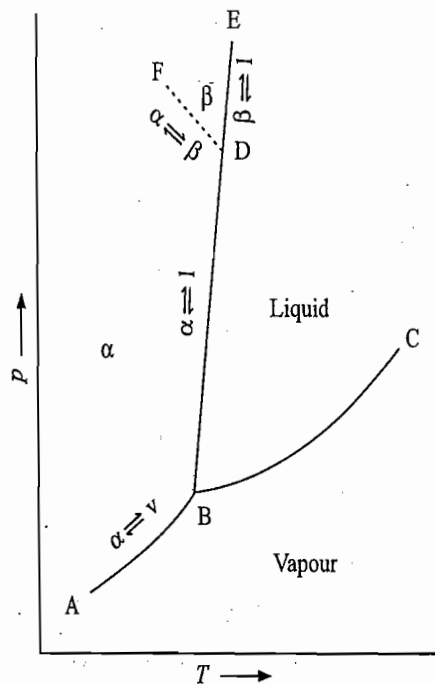


Fig. 5.4.8

The point B is at 17 °C and 8 mmHg where $S_{\alpha} = S_1 = S_v$. The point D is at 55 °C and 2 000 atm where $S_{\alpha} = S_{\beta} = S_1$.

Example 5.4.5

From the following data, sketch the phase diagram of N_2 at low temperatures.

There are three crystal forms α , β , and γ which coexist at 4 650 atm and 44.5 K. At this triple point, the volume changes (ΔV) are

$\alpha \rightarrow \gamma$	0.165 cm ³ mol ⁻¹
$\beta \rightarrow \gamma$	0.208 cm ³ mol ⁻¹
$\beta \rightarrow \alpha$	0.043 cm ³ mol ⁻¹

At 1 atm and 36 K, $\beta \rightarrow \alpha$ has $\Delta V = 0.22$ cm³ mol⁻¹. The ΔS_f values for the transition cited are 1.25, 5.88, 4.59 and 6.52 J K⁻¹ mol⁻¹, respectively.

For its own
uses S_{α} , S_{β}
The β -form
the diagram.

at higher

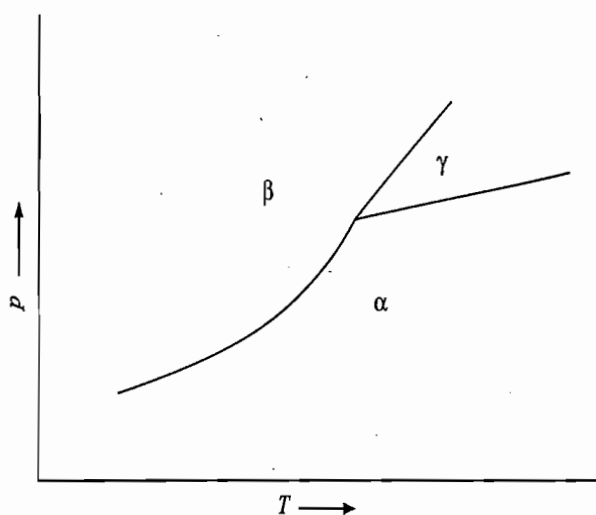
Solution

We have

Transition	$\Delta V/\text{cm}^3 \text{ mol}^{-1}$	$\Delta S/\text{J K}^{-1} \text{ mol}^{-1}$	$\frac{dp}{dT} = \frac{\Delta S}{\Delta V} \infty$
$\alpha \rightarrow \gamma$	0.165	1.25	$\frac{1.25}{0.165} = 7.58$
$\beta \rightarrow \gamma$	0.208	5.88	$\frac{5.88}{0.208} = 28.27$
$\beta \rightarrow \alpha$	0.043	4.59	$\frac{4.59}{0.043} = 106.74$
$\beta \rightarrow \alpha$	0.22	6.52	$\frac{6.52}{0.22} = 29.64$

at 1 atm
and 36 K

The schematic phase diagram consistent with the above information is shown in Fig. 5.4.9.



Example 5.4.6

Substance A exists in two allotropic forms: white and red. White A melts at 44 °C and 0.2 mmHg. Red A melts at 490 °C and 43 atm pressure. White A is more dense than the liquid and the red form is less dense than the liquid. The vapour pressure of white form is everywhere greater than that of red. Sketch p versus T diagram, label the areas and explain the stable and unstable triple points.

Solution

Fig. 5.4.9

From the given data, we conclude

- (i) Melting point of white A: 44 °C at 0.2 mmHg.
- (ii) Melting point of red A: 490 °C at 43 atm.
- (iii) Vapour pressure of white A > Vapour pressure of red A. This indicates that white A is unstable with respect to red A.
- (iv) $\rho_{\text{white A}} > \rho_l$ or $V_{m, \text{white A}} < V_{m, l}$

Therefore

$$\left(\frac{dp}{dT}\right)_{\text{white A}=1} = \frac{\Delta_{\text{fus}}H_m}{T(V_{m, l} - V_{m, \text{white A}})} = \frac{+ve}{+ve} = +ve$$

Fig. phas symt stan liqui resp

Exai

Solu

(v) $\rho_{\text{red A}} < \rho_l$ or $V_{m, \text{red A}} > V_{m, l}$

Therefore

$$\left(\frac{dp}{dT}\right)_{\text{red A} \rightleftharpoons l} = \frac{\Delta_{\text{fus}} H_m}{T(V_{m, l} - V_{m, \text{red A}})} = \frac{+ve}{-ve} = -ve$$

(vi) Since $\rho_{\text{white A}} > \rho_l$ and $\rho_l > \rho_{\text{red A}}$, it is obvious that

$$\rho_{\text{white A}} > \rho_{\text{red A}} \text{ or } V_{m, \text{white A}} < V_{m, \text{red A}}$$

$$\left(\frac{dp}{dT}\right)_{\text{white A} \rightleftharpoons \text{red A}} = \frac{\Delta_{\text{tr}} H_m}{T(V_{m, \text{red A}} - V_{m, \text{white A}})} = \frac{+ve}{+ve} = +ve$$

The phase diagram consistent with the above information is given in Fig. 5.4.10.

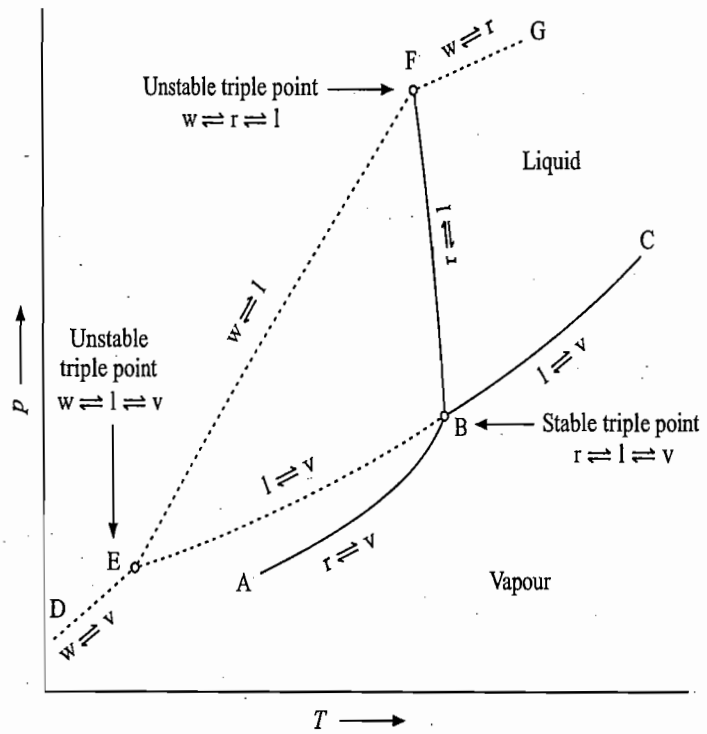


Fig. 5.4.10 The required phase diagram. The symbols w, r, l and v stand for white, red, liquid and vapour, respectively

Example 5.4.7

A substance X exists in two crystalline modifications, here called A and B. At temperature below 90 °C, the vapour pressure of the A-form is less than that of the B-form, and above 90 °C, the reverse is true. The A-form is 5% denser than liquid X and the B-form is 10% less dense than the A-form. There is an A-l-v triple point at 110 °C. Sketch the p-T diagram for X.

Solution

From the given data, we conclude

(i) Since A-form is 5% denser than liquid X, we have

$$\rho_A = 1.05\rho_l \Rightarrow V_{m, A} < V_{m, l}$$

Therefore

$$\left(\frac{dp}{dT}\right)_{A \rightleftharpoons l} = \frac{\Delta_{\text{fus}} H_m}{T(V_{m, l} - V_{m, A})} = \frac{+ve}{+ve} = +ve$$

$\frac{\Delta S}{\Delta V} \infty$
= 7.58
= 28.27
= 106.74
= 29.64

s shown in

t 44 °C and
nse than the
white form
e areas and

s that white

(ii) Since B-form is 10% less dense than the A-form, we have

$$\rho_B = 0.9\rho_A$$

or $\rho_B = 0.9 \times (1.05 \rho_l) = 0.945 \rho_l$

Hence $V_{m,B} > V_{m,l}$

and thus

$$\left(\frac{dp}{dT}\right)_{B \rightleftharpoons l} = \frac{\Delta_{\text{fus}} H_m}{T(V_{m,l} - V_{m,B})} = \frac{+ve}{-ve} = -ve$$

(iii) At temperature below 90 °C, the vapour pressure of A-form is less than that of B-form, It implies that the A-form is stable whereas B-form is unstable at temperatures below 90 °C. On the other hand, the vapour pressure of B-form is smaller than that of A-form at temperature above 90 °C implies that the B-form is stable. Thus, 90 °C is the transition point of A-form to B-form. It also follows that the molar enthalpy of B-form is greater than that of A-form.

(iv) Since $\rho_B = 0.9 \rho_A$, we have

$$V_{m,B} > V_{m,A}$$

and hence

$$\left(\frac{dp}{dT}\right)_{A \rightleftharpoons B} = \frac{\Delta_{\text{tr}} H_m}{T(V_{m,B} - V_{m,A})} = \frac{+ve}{+ve} = +ve$$

(v) The triple point $A \rightleftharpoons l \rightleftharpoons v$ exists at 110 °C.

The phase diagram consistent with the above information is shown in Fig. 5.4.11.

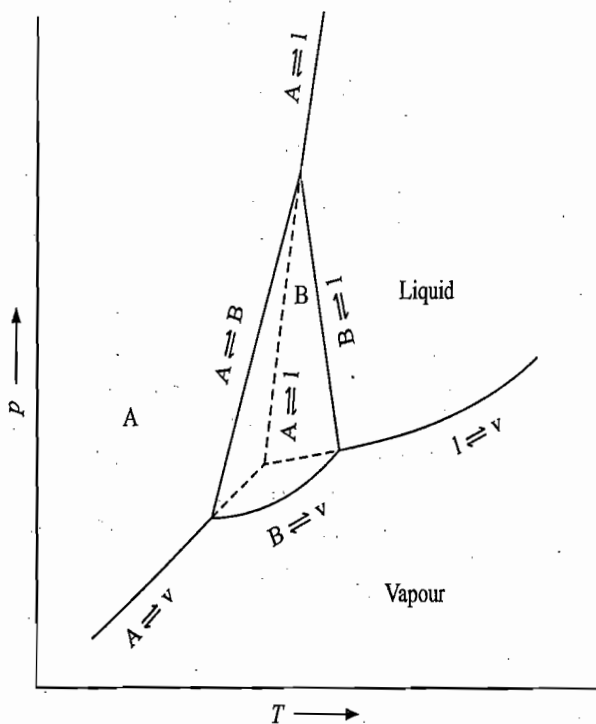
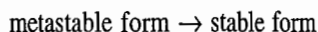


Fig. 5.4.11

REVISIONARY PROBLEMS

- 5.1 (a) Determine the variance of a one-component system having number of phases equal to one, two and three, respectively.
 (b) Show that it is not possible to have more than three phases in equilibrium with each other in a one-component system.
 (c) Show how are the following systems represented in a one-component phase diagram:
 (i) System consisting of only one phase.
 (ii) System consisting of two phases in equilibrium.
 (iii) System consisting of three phases in equilibrium.
- 5.2 Describe the phase diagram of water with due emphasis on the following facts:
 (i) How many triple points does it have?
 (ii) Why is the solid-vapour line more steep than the liquid-vapour line at the triple point?
 (iii) Why is the solid-liquid line almost vertical and slightly tilted to the left?
 (iv) What is the upper limit of the liquid-vapour equilibrium line?
- 5.3 Illustrate with examples the meaning of the terms polymorphism, enantiotropy and monotropy. Describe the type of phase diagram that is expected for the phenomena of enantiotropy and monotropy.
- 5.4 (a) Describe the phase diagram of sulphur which exhibits the phenomenon of enantiotropy. How many triple points are possible in this phase diagram?
 (b) The equilibrium line of rhombic sulphur \rightleftharpoons monoclinic sulphur is slightly tilted to the right. Predict which enantiotropic form is more dense.
 (c) The slope of lines representing rhombic sulphur \rightleftharpoons monoclinic sulphur and monoclinic sulphur \rightleftharpoons liquid sulphur are positive. Predict the slope of the line representing metastable equilibrium of rhombic sulphur \rightleftharpoons liquid.
- 5.5 Describe briefly the phase diagram of phosphorus—an example which exhibit both monotropy as well as enantiotropy.
- 5.6 Starting from the fact that ΔG of the process



is negative (since the process occurs spontaneously), show that the vapour pressure of the metastable form is greater than that of the stable form at the same temperature.

TRY YOURSELF PROBLEMS

- 5.1 Justify the phase diagram of I_2 as shown in Fig. 1 from the following information. Solid iodine (A_1) is in equilibrium with liquid and vapour at 114°C and 90 mmHg pressure. Its second crystalline modification A_2 has a vapour pressure 110 mmHg at 114°C and it has less enthalpy of sublimation than that of A_1 . A_1 is more dense than A_2 and is less dense than the liquid.
 Identify each area, line and point shown in the diagram.
- 5.2 Figure 2 is the phase diagram of a one-component system. Identify the various points, lines and areas shown therein. Discuss the slopes of various lines meeting each other at the points T_1 , T_2 , T_3 , T_4 and T_5 in terms of ΔH_m and ΔV_m of the involved transformations.
 (Hint: Solid exists in three allotropic forms.)
- 5.3 Figure 3 is the phase diagram of a one-component system. Identify the various points, lines and areas shown therein. Discuss the slopes of various lines meeting

n that of B-
 atures below
 it of A-form
 he transition
 m is greater

Fig. 5.4.11.

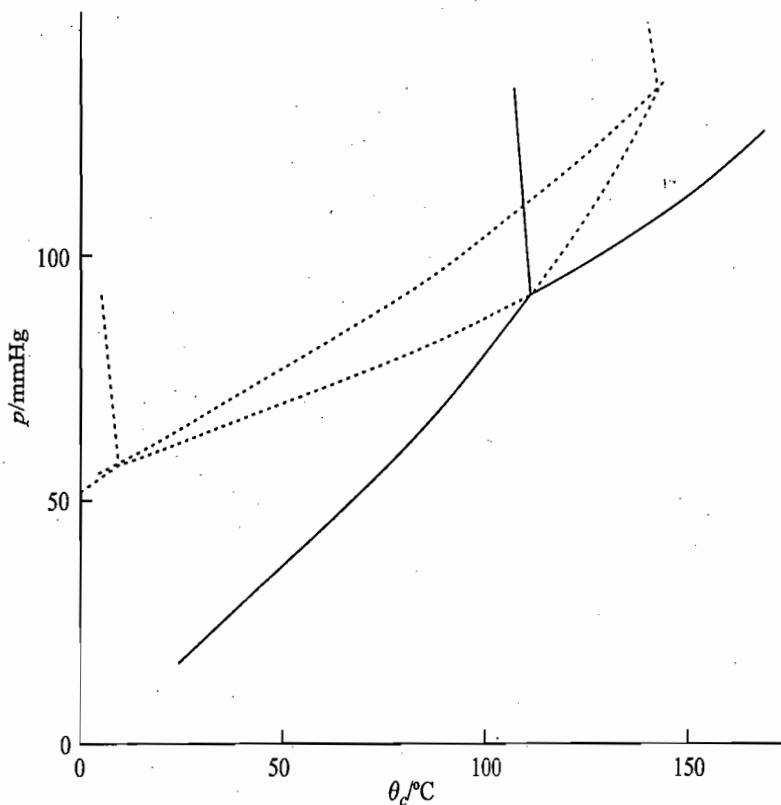


Fig. 1

Fig. 3

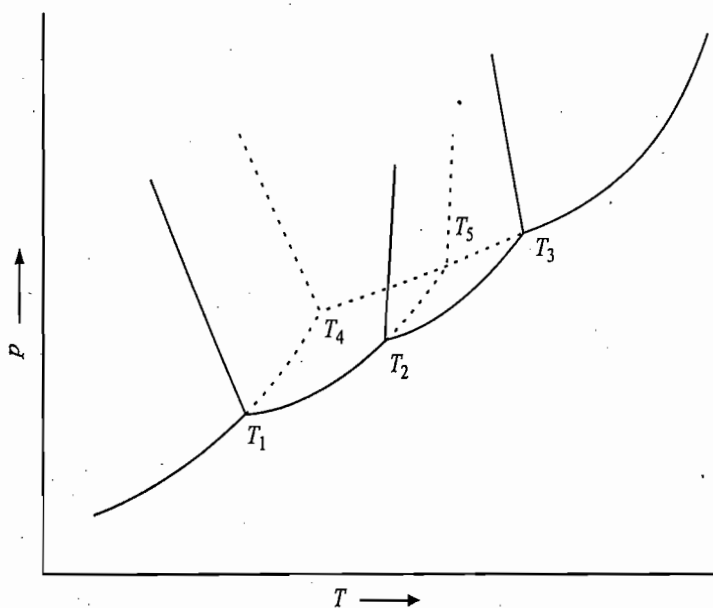


Fig. 2

Fig. 4

each other at the points T_1, T_2, T_3, T_4 and T_5 in terms of ΔH_m and ΔV_m of the involved transformations.

(Hint: Solid has three unstable forms and one stable form.)

- 5.4 A substance S occurs in two solid modifications: S_β and S_α . S_β has a stable melting point at about 119°C (0.05 mmHg). S_β and S_α are enantiotropic with respect to each other and the transition point involving S_α, S_β and vapour has the value 95.5°C (0.007 mmHg). Phases S_α, S_β and liquid are in equilibrium at a triple point 151°C and 1290 atm. The transition temperature of the equilibrium $S_\alpha \rightleftharpoons$ liquid increases with increase in pressure. Draw the phase diagram.
- 5.5 Explain why the phase diagram shown in Fig. 4 is not theoretically possible. (Hint: Slope of $s \rightleftharpoons v$ line at triple point is smaller than that of $l \rightleftharpoons v$ line.)

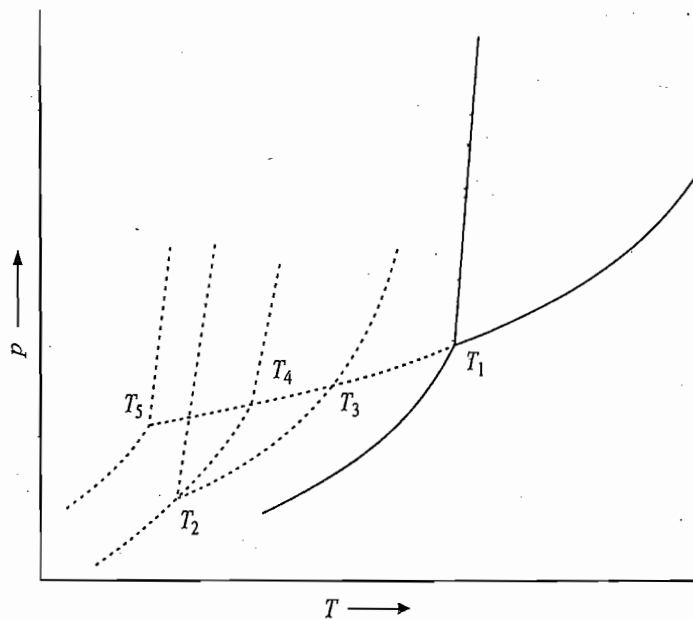


Fig. 3

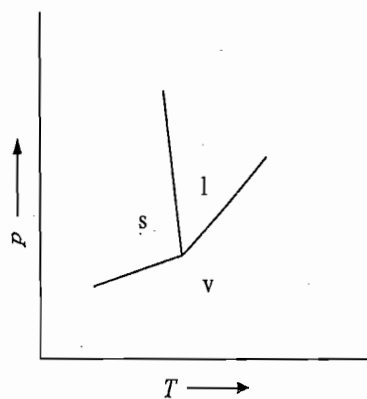


Fig. 4

5.6 Comment on the following statement.

The phase that is stable in equilibrium with the vapour is the phase that has the lower equilibrium vapour pressure.

5.7 Draw a schematic plot of chemical potential versus temperature for sulphur from the following information.

At 95.5 °C rhombic sulphur reversibly transforms to monoclinic sulphur.

At 120 °C monoclinic sulphur melts. From the plot, answer the following.

- (i) Which has the higher melting point, rhombic or monoclinic sulphur?
- (ii) Which form of solid sulphur has greater entropy?
- (iii) Which of the two solids will exhibit more ideal solubility at 25 °C in a good solvent such as diethyl ether?
- (iv) Does the melting point of rhombic sulphur lie above or below the rhombic-monoclinic transition temperature?

(Ans. (i) monoclinic, (ii) monoclinic, (iii) rhombic, (iv) above)

(Hint: Make use of Eq. (2.12.6) for part (iii).

5.8 At higher pressures, ice is known to exist in six different forms and its phase diagram has an appearance as shown in Fig. 5. Ice 1 is the common form which exists under normal conditions. From the figure, answer the following.

- (i) How many triple points are present?
- (ii) Name the phases which are in equilibrium at each triple point.

of the involved

e stable form.)
stable melting
respect to each
95.5 °C (0.007
11 °C and 1290
s with increase

possible.
= v line.)

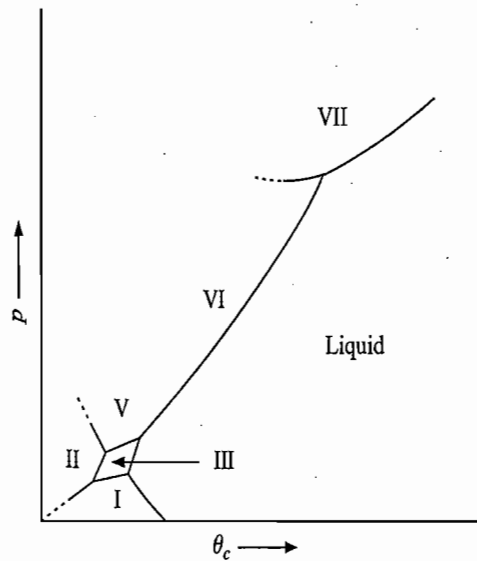


Fig. 5

- (iii) From the slopes of various lines, predict the phase which is more dense than the other.
- (iv) What is the effect of pressure on the melting point of each form of ice?

5.9 Solid ammonium nitrate exists in five crystalline forms with the following triple point temperatures:

Tetragonal	\rightleftharpoons	β -Rhombic	\rightleftharpoons	Vapour	- 18 °C
β -Rhombic	\rightleftharpoons	α -Rhombic	\rightleftharpoons	Vapour	32 °C
α -Rhombic	\rightleftharpoons	Rhombohedral	\rightleftharpoons	Vapour	83 °C
Rhombohedral	\rightleftharpoons	Cubic	\rightleftharpoons	Vapour	125 °C
Cubic	\rightleftharpoons	Liquid	\rightleftharpoons	Vapour	169 °C
β -Rhombic	\rightleftharpoons	α -Rhombic	\rightleftharpoons	Rhombohedral	50 °C

Also, it is known that the order of increasing density is

$$\text{Liquid} < \alpha\text{-Rhombic} < \text{Rhombohedral} < \text{Cubic} < \beta\text{-Rhombic} < \text{Tetragonal}$$

Sketch a reasonable p - T diagram based on this information.

- 5.10 Describe the effects produced of (i) isothermal increase and decrease in pressure and (ii) isobaric increase and decrease in temperature on the following systems of water (Fig. 5.3.1).
- (a) A system on sublimation curve
 - (b) A system on vaporization curve.
 - (c) A system on fusion line.
 - (d) A system at triple point.
 - (e) A system slightly at the left of fusion line.
 - (f) A system slightly at the right of fusion line.
 - (g) A system below the sublimation and vaporization curves.

6.1

System of O₂

System of Tl

System of Th

6

Phase Diagrams of Two-Component Systems

6.1 APPLICATION OF THE PHASE RULE

According to the phase rule, the degrees of freedom of a two-component system is given by

$$F = C - P + 2 = 4 - P$$

Thus, we have:

System Consisting of One Phase

The phase can be gaseous or completely miscible liquid solution or solid solution. In this case, $F = 4 - 1 = 3$, thus three variables, namely, temperature, pressure and composition of the system, will have to be stated in order to define the system completely.

System Consisting of Two Phases

A few typical cases of two-phase equilibrium are given below.

Liquid-vapour The two constituents will be completely miscible with each other in the liquid phase.

Liquid-liquid The two liquids will be partially miscible in each other.

Solid-liquid The solid will consist of either of the two constituents or the solid solution. In the liquid phase, both constituents are completely miscible.

Here since $P = 2$, we will have $F = 4 - 2 = 2$. Thus, stating the values of two variables is sufficient to define the system completely. These variables are temperature and composition of the liquid phase. All other variables will have fixed values.

System Consisting of Three Phases

A few typical cases of three-phase equilibrium are given below.

Liquid-liquid-vapour The two constituents will be partially miscible in the liquid phase.

Solid-liquid-liquid The solid will consist of either of the two constituents or the solid solution. The two constituents are partially miscible in the liquid phase.

Solid-solid-liquid Both the constituents are present in the solid form and are completely miscible in the liquid phase.

Here since $P = 3$, we will have $F = 4 - 3 = 1$. Thus, stating the value of only one variable is sufficient to define the system completely.

nse than
ice?
le point

18 °C
32 °C
83 °C
25 °C
69 °C
50 °C

tragonal

ure and
f water

EA
A
ZU

Comment on the Phase Diagram of Condensed Systems

Generally various types of equilibria are studied at constant external pressure. Thus, the value of one of the degrees of freedom is already stated, and hence their number is reduced by one or alternatively, the degrees of freedom may be calculated by making use of the reduced phase rule $F = C - P + 1$. In such studies, therefore, we have

- (i) $F = 2$ for $P = 1$,
- (ii) $F = 1$ for $P = 2$, and
- (iii) $F = 0$ for $P = 3$.

Since the maximum degrees of freedom to define a two-component system is two (for $p = 1$ atm), the phase diagram of such a system can be drawn on a sheet of paper, choosing the rectangular axes representing temperature and composition, respectively. A complete phase diagram of a system will have to include all the three phases, namely, gaseous, liquid and solid. However, it is more advantageous from the point of view of discussion to draw separately the phase diagram corresponding to the different types of phase equilibria. The equilibria involving liquid-vapour and liquid-liquid have already been considered in Chapter 4. In this chapter, we consider systems involving only solid-liquid equilibria. Such systems are known as *condensed systems*. Since in such systems, the gas phase is absent, the small variation in pressure does not affect the various solid-liquid equilibria of a system.

6.2 CLASSIFICATION OF DIAGRAMS

Solid-liquid equilibria of varying degree of complexity are known. These may be analyzed in terms of the following simpler cases.

1. The pure components only crystallize from the solution.
2. The pure components only crystallize from the solution and one of the solids exists in more than one polymorphic form.
3. The two components form a solid compound stable up to its melting point.
4. The two components form a solid compound which decomposes before its actual melting point.
5. The two components are completely miscible in the solid phase and form a complete series of solid solutions.
6. The two components are partially miscible in the solid phase and form stable solid solutions.
7. The two components form solid solutions which are stable only up to a transition temperature.
8. The two components are partially miscible in the liquid phase and only pure components crystallize from the solution.

The above elementary systems are described in Sections 6.4 to 6.11.

6.3 THERMAL ANALYSIS

General Procedure of Thermal Analysis

The phase diagram representing different types of solid-liquid equilibria can be drawn with the method of thermal analysis (or cooling curves). In this method, a system of known composition is heated so as to obtain it in the molten state.

Cooling
Pure

Fig. 6.1
of a pure

Cooling
Mixture

It is allowed to cool of its own and its temperature after regular interval of time (say, half a minute) is recorded. A cooling curve of temperature versus time is made and from the breaks and arrests in the cooling curve, the useful information regarding the initial and final solidification temperatures are determined. The above procedure is repeated with different compositions of the system.

For an illustration, we take an example where only pure components crystallize on cooling the system. The expected types of cooling curve are described below.

Cooling Curve of a Pure Component

We start with the pure component A (or B) in the liquid state. The rate of cooling of liquid will be smooth till solidification starts. At this stage, the system contains two phases in equilibrium and, according to the phase rule, it becomes invariant ($F = C + 1 - P = 1 + 1 - 2 = 0$). Thus, solidification of A takes place at constant temperature in spite of the fact that heat is released during solidification. This is due to the fact that the rate of liberation of heat during solidification becomes equal to that of transfer of heat from the system to the surroundings. This gives rise to what is known as the complete arrest in the rate of cooling. When the entire liquid has solidified, the system becomes univariant and thus it shows a smooth cooling of solid phase.

Schematic representation of cooling curve The above pattern of cooling is shown in Fig. 6.3.1.

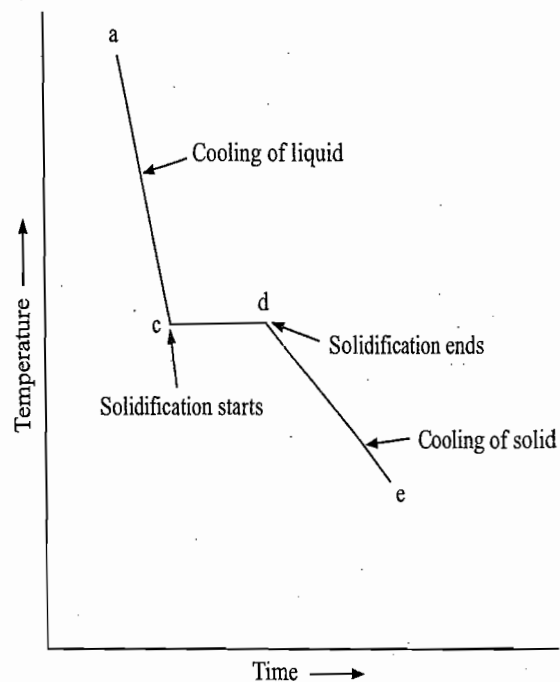


Fig. 6.3.1 Cooling curve of a pure component

Cooling Curve of a Mixture

We start with a mixture of B in A of known composition. The system is heated to get it in the liquid phase. The degree of freedom of the system in liquid phase is

$$F = C + 1 - P = 2 + 1 - 1 = 2$$

Thus, two variables, viz., temperature and composition of liquid phase, have to be stated in order to define the system completely. In other words, it may be

concluded that the liquid phase of known composition can exist at different temperatures. Thus, the liquid phase is expected to exhibit smooth cooling until solid A starts solidifying.

Solidification of A When A starts solidifying, the system becomes univariant, ($F = C + 1 - P = 2 + 1 - 2 = 1$). Thus, the temperature at which solid A starts solidifying from the liquid mixture of known composition will have a fixed value. This temperature is expected to be lesser than the freezing point of A from pure liquid A since the addition of B in A lowers the freezing point of the latter. The separation of A in solid phase changes the composition of liquid phase and thus the separation of A from this liquid will take place at another fixed temperature. The latter is expected to be smaller than the previous temperature as the separation of A increases the molality of B in the solution. Thus, the system is expected to exhibit cooling during more and more solidification of A. However, the rate of cooling is retarded owing to the liberation of heat during solidification of A and thus a break in the cooling curve is observed. The break point indicates the temperature at which first crystal of A is obtained.

Solidification of both A and B If cooling is continued, the solution may become saturated with respect to B and hence B also starts solidifying along with A. At this stage, the system becomes nonvariant ($F = C + 1 - P = 2 + 1 - 3 = 0$) and thus solidification from a solution of fixed composition (corresponding to the saturation solubility of B in A) takes place at constant temperature. This results in a complete arrest of cooling curve. Since at this temperature the saturation solubility of B in A has to be maintained, it follows that the composition of solid phase which separates will have the same composition as that of the liquid phase. The temperature of the system will remain constant until the entire liquid phase has solidified. After this, the system will exhibit smooth cooling of solid phases. Thus, the start and end of horizontal line in cooling curve indicate, respectively, the start of solidification of both components together and the complete solidification of the liquid phase.

Schematic representation of cooling curve The above pattern of cooling is shown in Fig. 6.3.2. The description of Fig. 6.3.2 is also given in Table 6.3.1.

Table 6.3.1 Description of Fig. 6.3.2

Location of system	Description	Degrees of freedom
ab	Cooling of liquid mixture	2
b	Start of solidification of A	1
bc	Solidification of A continues	1
c	B also starts solidifying	0
cd	Solidification of A and B continues. The composition of solid mixture separated here is the same as that of the liquid phase	0
d	Almost complete solidification of liquid phase	0
de	Cooling of solid phases	1

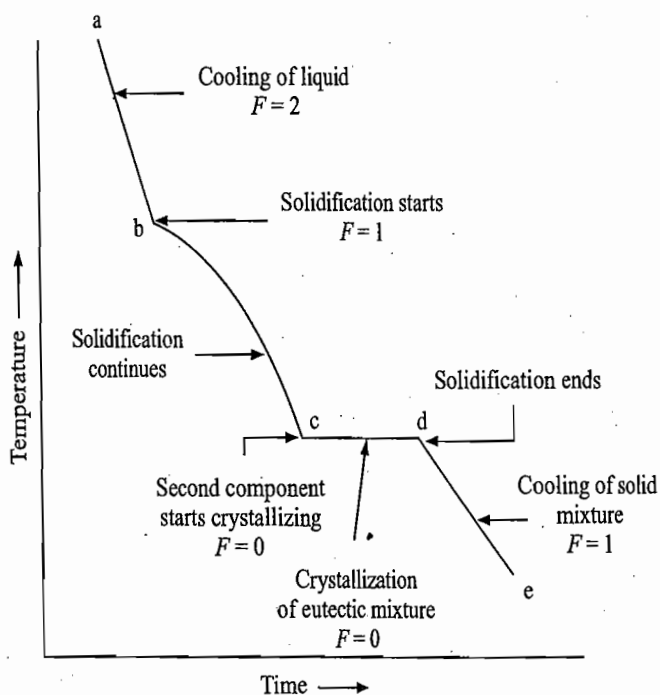


Fig. 6.3.2 Cooling curve of a liquid mixture of a two-component system

Supercooling of liquid In some cases, the separation of solid phase does not occur readily and thus supercooling is observed. The cooling curve instead of showing a break continues along a continuation of ab . Since this represents an unstable state, soon one observes a sudden rise in temperature followed by a smooth cooling along $b'c$ (Fig. 6.3.3). The correct freezing point may then be obtained by extrapolation back to b as shown in Fig. 6.3.3.

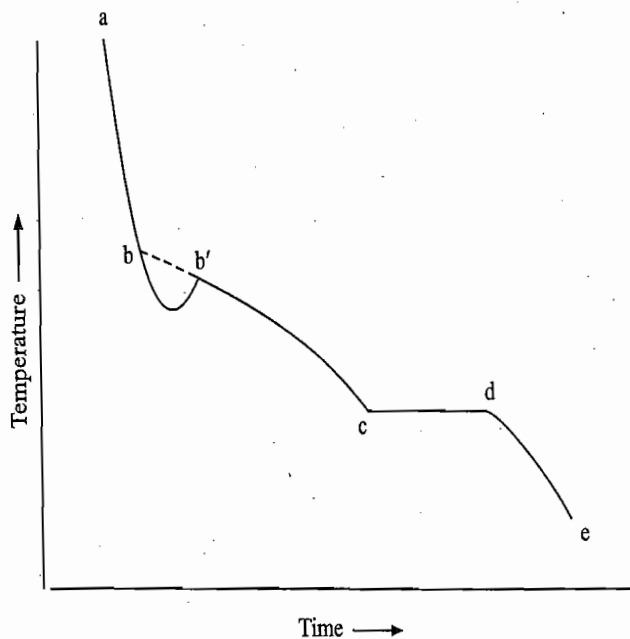


Fig. 6.3.3 Supercooling phenomenon

Comment

The pattern as shown in Fig. 6.3.2 is, however, not shown at a particular composition where on cooling both the components solidify simultaneously. In this case, the first break is not observed and one gets the cooling curve similar to that shown in Fig. 6.3.1. The cooling curve of a system in which solid solution and not the pure component separates on cooling is similar to that given in Fig. 6.3.2 with the exception that the horizontal portion is replaced by a break.

t different
oling until

invariant,
d A starts
xed value.
from pure
latter. The
e and thus
emperature.
separation
pected to
he rate of
of A and
icates the

y become
with A. At
= 0) and
ng to the
is results
saturation
n of solid
he liquid
ire liquid
s of solid
indicate,
and the

ooling is
e 6.3.1.

freedom

6.4 CRYSTALLIZATION OF PURE COMPONENTS — SIMPLE EUTECTIC PHASE DIAGRAM[†]

Description of the Phase Diagram

The general form of the phase diagram along with the expected cooling curves of such a system is shown in Fig. 6.4.1.

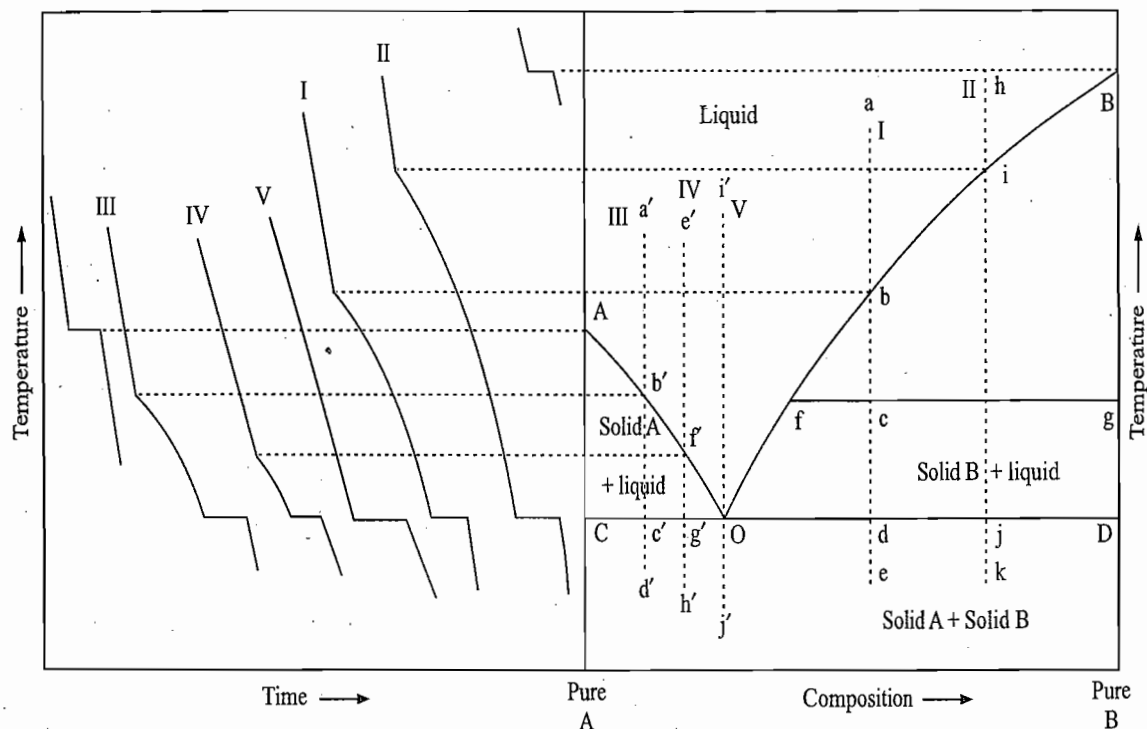


Fig. 6.4.1 Phase diagram of a system exhibiting crystallization of pure components

From the cooling curves shown in Fig. 6.4.1, the following information can be derived.

- From the cooling curves of pure components, the point A and B representing, respectively, the freezing points of the pure components A and B are obtained.
- From the cooling curves I and II of two systems of A in B, the points b and i representing, respectively, the start of solidification of B and the points d and j representing, respectively, the start of solidification of both A and B together are obtained. Since the addition of a solute in a solvent depresses the freezing point of the latter, the temperatures corresponding to the points b and i are smaller than the freezing point of the pure component B.
- Similarly, from the cooling curves III and IV of two systems of B in A, the points b' and f' representing respectively the start of solidification of A and the points c' and g' representing respectively the start of solidification of both A and B together are obtained.
- If a smooth curve passing through the points A, b' and f' is drawn, we get the curve AO which represents the start of freezing of pure component A from liquid solution of different compositions. Similarly, if a line passing through B, i and b is drawn, we get the freezing point curve of the component B.

[†]See Project 1 in vol 6 for the formation of eutectic phase diagram constructed from the consideration of free energies.

Sequence of Effects Produced on Cooling a Liquid Mixture

GRAM
g curves



- If a line passing through the points c' , g' , d and j is drawn, we get a horizontal line CD which indicates the temperature at which both components start solidifying together from the liquid O irrespective of the original composition of the liquid phase. The point O where the freezing point curves AO and BO meet each other also lies on this horizontal line.

The labelling of the phase diagram shown in Fig. 6.4.1 can be easily understood by first considering the expected behaviour of a liquid solution during its cooling. If, for example, a liquid solution represented by the point a is cooled, the state of the overall system will move vertically downward along $abcde$, known as **isopleth**.

- The system will remain in liquid phase till the point b is reached where the first crystal of B starts appearing.
- The removal of solid B from liquid phase makes the composition of liquid phase less rich in B and thus its composition moves towards the A -axis.
- If the crystallization of B is to be continued, the temperature of the liquid phase has to be decreased since its composition point moves on the line bfO . Thus on cooling, more and more of B solidifies and the composition of the liquid phase moves along the curve bfO . For example, if the system has been cooled up to the overall state point c , the system will consist of solid B (represented by the point g) in equilibrium with liquid phase whose composition corresponds to the point f . The point f is the intersection point of the tie line (horizontal line) drawn from the point c with the curve BO . The tie line, by definition, is a line which connects different phases in equilibrium with one another. In the present case, the two phases in equilibrium are represented, respectively, by the points g (solid phase B) and f (liquid phase). The relative amounts of the two phases may be determined by using the lever rule, such that

$$\frac{\text{Amount of solid B}}{\text{Amount of liquid phase f}} = \frac{fc}{cg} \quad (6.4.1)^\dagger$$

- During the cooling of the system from b to d , the relative length of the segment of tie line lying to the left of bcd (i.e. fc) increases indicating that the relative amounts of the two phases change in favour of solid B , i.e. more and more B solidifies during the cooling process.
- When the system has been cooled to the point d the liquid composition will move to the point O . Hence, here A also starts crystallizing along with B . From this, it follows that the yield of pure crystals of B will be maximum when the cooling of the system is carried out up to a point slightly above the point d .

[†]For derivation of the lever rule, see p. 259.

Throughout the Chapter, a system is represented by an alphabet printed in roman style while its composition is represented by the same alphabet printed in italics.

Maximum amount of B recoverable We can compute the maximum amount of pure B that can be separated from the liquid a as shown in the following.

The maximum amount of pure B (which can be separated from the starting liquid a) relative to that of the liquid O is given by

$$\frac{\text{Amount of liquid O}}{\text{Maximum amount of solid B separated}} = \frac{dD}{Od} \quad (6.4.2)$$

Adding one on both sides and inverting the expression, we get

$$\frac{\text{Maximum amount of solid B separated}}{\text{Amount of (liquid O + solid B)}} = \frac{Od}{Od + dD} = \frac{Od}{OD}$$

Hence, the maximum amount of solid B separated

$$= \left(\frac{Od}{OD} \right) (\text{amount of starting liquid a}) \quad (6.4.3)$$

- At point d, the solid mixture which solidifies has the same composition as that of the liquid phase, vis-à-vis, the composition of the liquid phase remains unchanged. The temperature of the system also remains unchanged till whole of liquid phase is solidified. Since now solid phase contains both A and B, the point representing solid phases moves from D towards d along the line Dd as more and more of solid mixture is precipitated. When this point is reached at d, whole of liquid solution is solidified.
- Amount of solid eutectic mixture separated at any point before whole of liquid is solidified can be computed as follows.

At any point in between D to d (say at j), the amount of liquid O relative to the total amount of solids A and B, (that has separated from the liquid a) is given by

$$\frac{\text{Amount liquid O}}{\text{Amount of total solids (A + B) separated}} = \frac{dj}{Od} \quad (6.4.4)$$

Adding one on both sides, we get

$$\frac{\text{Amount of (liquid O + total solids separated)}}{\text{Amount of total solids separated}} = \frac{Od + dj}{Od} = \frac{Oj}{Od}$$

Taking inverse, we get

$$\text{Amount of total solids separated} = \left(\frac{Od}{Oj} \right) (\text{amount of starting liquid a}) \quad (6.4.5)$$

From this amount, if we subtract the pure solid B that has separated on reaching the point d (as given by Eq. 6.4.3), we get the total amount of solid mixture that has separated when the liquid is cooled beyond d till the composition of solid phase is given by the point j. If the composition of solid mixture is analysed, it will correspond to the point O.

Further cooling from d to e, merely decreases the temperature of the solid mixture.

From the above analysis, the following conclusions may be drawn.

- A point within the area BODB represents a system of solid B in equilibrium with a liquid phase.[†] The composition of the latter is given by the intersection point of the tie line drawn from the given point with the curve BO. The relative amounts of two phases can be determined by using the lever rule. Similarly, a point within the area ACOA represents a system of solid A in equilibrium with a liquid solution whose composition lies on the curve AO.
- Along the lines AO and BO and within the areas AOCA and BODB, the system is univariant ($F = C + 1 - P = 2 + 1 - 2 = 1$). Thus for a given temperature, the composition of liquid phase in equilibrium with solid A or solid B has a fixed value.
- A point on the line CD represents an invariant system ($F = C + 1 - P = 2 + 1 - 3 = 0$). For the point O the temperature is lowest at which any liquid of A and B will freeze out and, consequently, represents the lowest melting point of any solution of solids A and B. It is for this reason, the point O is known as the *eutectic point* (Greek: easily melting).
- Line AOB is the *liquidus curve* as it gives composition of the liquid phase in equilibrium with the solid phase. The line ACODB is known as the *solidus curve*; lines AC, COD and DB represent, respectively, solid A, mixtures of solids A and B in equilibrium with liquid phase of composition O and solid B. The two curves AOB and ACODB meet each other at point O.
- Cooling of a system on the line CD will result into the solidification of A and B together from the liquid phase of eutectic composition O. The solid mixture which separates here has the same composition as that of the liquid phase.
- A system below the line CD represents a solid mixture of A and B.

Table 6.4.1 describes, in brief, the phase diagram shown in Fig. 6.4.1.

[†]In general, the two phases in equilibrium within an area are given by the two vertical end lines of the area. For example, for the area BDOB, the two vertical end lines are BD and BO. These lines represent solid phase B and liquid solution, respectively. Thus, within the area BDOB, solid B is in equilibrium with liquid solution whose composition lies on the line BO.

Conclusions of Phase Diagram

Labelling of Eutectic Phase Diagram

Maximum amount of the following from the starting

$$(6.4.2)$$

we get

$$\frac{Od}{OD}$$

$$(6.4.3)$$

composition as the liquid phase remains unchanged as it contains both towards d along d. When this before whole of

liquid O relative from the liquid

$$(6.4.4)$$

$$\frac{dj}{Od} = \frac{Oj}{Od}$$

$$\left. \begin{matrix} \text{starting} \\ a \end{matrix} \right\} (6.4.5)$$

Table 6.4.1 Description of Phase Diagram given in Fig. 6.4.1

Location of the system	Status of the system	Degrees of freedom	
		number	kind
A	Freezing point of A	0	fixed T
B	Freezing point of B	0	fixed T
AO	Start of crystallization of A	1	T or composition
BO	Start of crystallization of B	1	T or composition
O	Eutectic point	0	fixed T and fixed composition
Area above AOB	Liquid phase	2	T and composition
Area below COD	Solid mixture	1	T
Area ACOA	Solid A in equilibrium with liquid phase whose composition lies on the curve AO.	1	T or composition
Area BDOB	Solid B in equilibrium with liquid phase whose composition lies on the curve BO.	1	T or composition
COD	Systems where both A and B crystallize together from liquid phase O.	0	fixed T (eutectic temperature) and fixed composition (eutectic composition O)

Cooling Patterns

We describe below the expected pattern of cooling curves for a few typical cases.

Pure components

Rapid cooling of liquid \rightarrow Halt; solidification of the compound \rightarrow Cooling of solid compound

Composition lying anywhere between AO or BO

Rapid cooling of liquid \rightarrow Break; solidification of A or B \rightarrow Slower cooling; solidification continues
 \downarrow
 Cooling of solid mixture \leftarrow Horizontal portion; eutectic point

Eutectic composition

Rapid cooling of liquid \rightarrow Horizontal portion; eutectic point \rightarrow Cooling of solid mixture

These cooling patterns are also shown in Fig. 6.4.1.

Exa

Soli

Fig.
phas

Exa

Example 6.4.1

The solubility of KBr in water is

$\theta_c/^\circ\text{C}$	0	20	40	60	80	100
g KBr/g H_2O	0.54	0.64	0.76	0.86	0.95	1.04

In a one molal solution, KBr depresses the freezing point of water by 3.29°C . Estimate graphically the eutectic temperature for the KBr- H_2O system.

Solution

In one molal solution of KBr, we have 110 g (molar mass of KBr) of KBr in 1 000 g of water or 0.110 g of KBr per g of water. We are given that ice separates from one molal solution of KBr at -3.29°C , since ice separates from pure water at 0°C . With these two temperatures, viz., 0°C and -3.29°C , we can draw the freezing point curve for ice as shown by the line AB in Fig. 6.4.2. On the other hand, we can draw the solubility curve CD from the given data on the solubility of KBr. If the two lines AB and CD are extended, we get the eutectic point at -13°C .

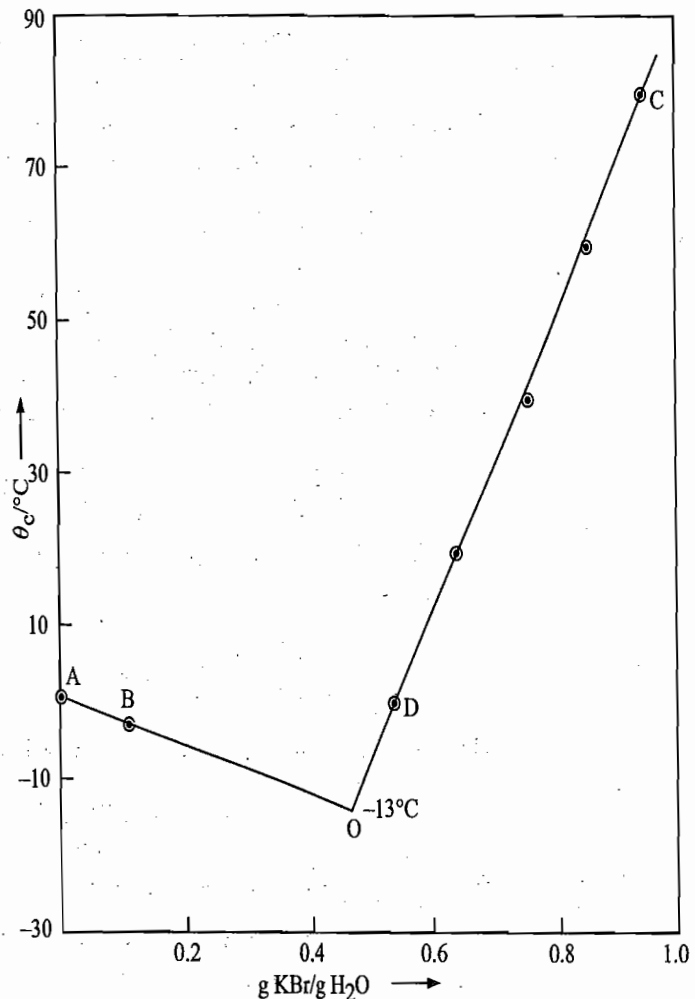


Fig. 6.4.2 Required phase diagram

Example 6.4.2

- (a) KBr is recrystallized from water by saturating the solution at 100°C , then cooling to 20°C ; the crystals obtained are redissolved in water and the solution evaporated until it is saturated at 100°C . Cooling to 20°C produces a second crop of crystals. What is the per cent yield of pure KBr after these two crystallizations? Use data given in Example 6.4.1.
- (b) Two crops of KBr crystals are obtained as follows. A solution saturated at 100°C is cooled to 20°C ; after filtering off the first crop, the mother liquor is evaporated until the

solution is saturated at 100 °C; cooling to 20 °C produces the second crop. What fraction of KBr is recovered in the two crops by this method? Use data of Example 6.4.1.

Solution

(a) At 100 °C, the solubility of KBr is 1.04 g/g H₂O. If this solution is cooled to 20 °C, solubility becomes 0.64 g KBr/g H₂O. Hence, the mass of KBr crystallized is (1.04–0.64) g, i.e. 0.4 g KBr. Now this 0.4 g KBr is again redissolved to give a saturated solution at 100 °C. The mass of water which need to be added is

$$\frac{1 \text{ g H}_2\text{O}}{1.04 \text{ g KBr}} \times 0.4 \text{ g KBr} = \frac{0.4}{1.04} \text{ g H}_2\text{O}$$

If the resultant solution is cooled to 20 °C, the mass of KBr remaining in the solution will be equal to

$$\frac{0.64 \text{ g KBr}}{1 \text{ g H}_2\text{O}} \times \left(\frac{0.4}{1.04} \text{ g H}_2\text{O} \right) = \frac{0.64 \times 0.4}{1.04} \text{ g KBr}$$

Thus, the mass of KBr separated at this stage will be given by

$$0.4 \text{ g} - \frac{0.64 \times 0.4}{1.04} \text{ g} = \frac{0.4 \times 0.4}{1.04} \text{ g} = \frac{0.16}{1.04} \text{ g}$$

Thus, out of 1.04 g of KBr which we had originally in the solution, (0.16/1.04) g of KBr has been separated after these two crystallizations. Hence per cent yield of pure KBr is

$$\frac{0.16}{1.04} \text{ g} \times \frac{100}{1.04 \text{ g}} = 14.79$$

(b) At 100 °C, the solubility is 1.04 g KBr/g H₂O. If this solution is cooled to 20 °C, the solubility becomes 0.64 g KBr/g H₂O. Hence the mass of KBr crystallized is (1.04–0.64) g, i.e. 0.4 g KBr. Now the mother liquor is evaporated until the solution is saturated at 100 °C. The mass of water that remained in the above evaporation process is equal to

$$\frac{1 \text{ g H}_2\text{O}}{1.04 \text{ g KBr}} \times 0.64 \text{ g KBr} = \frac{0.64}{1.04} \text{ g H}_2\text{O}$$

If the resultant solution is cooled to 20 °C, the mass of KBr that remained in the solution is equal to

$$\left(\frac{0.64 \text{ g KBr}}{1 \text{ g H}_2\text{O}} \right) \left(\frac{0.64}{1.04} \text{ g H}_2\text{O} \right)$$

Thus, the mass of KBr separated in the second crop becomes

$$0.64 \text{ g} - \frac{0.64 \times 0.64}{1.04} \text{ g} = \frac{0.64 \times 0.4}{1.04} \text{ g}$$

The total mass of KBr separated in the two crops

$$0.4 \text{ g} + \frac{0.4 \times 0.64}{1.04} \text{ g} = \frac{0.4 \times 1.68}{1.04} \text{ g}$$

Hence

$$\text{Per cent of KBr recovered} \left(\frac{0.4 \times 1.68}{1.04} \text{ g} \right) \left(\frac{100}{1.04 \text{ g}} \right) = 62.15$$

Theoretical Aspects of Fig. 6.4.1

The curve AO of Fig. 6.4.1 gives the freezing point curve of pure solid A and thus it tells us the first temperature at which pure solid A precipitates

(alternatively, at which the last solid A melts) for a system whose starting composition lies between the points C and O. In other words, the curve AO is the saturation solubility curve for the component A. As mentioned earlier, the system anywhere on the line AO is univariant indicating that for a given composition, the temperature at which initial solidification starts has a fixed value.

For ideal systems, the variation of solubility of a component with temperature is given by the van't Hoff relation, which was derived thermodynamically in Section 2.12. The expression at $p = 1$ bar is:

$$\ln x = -\frac{\Delta_{\text{fus}}H_{\text{m}}^{\circ}}{R}\left(\frac{1}{T} - \frac{1}{T^*}\right)$$

where x is the saturation solubility in amount fraction of the component in ideal solution at temperature T , and T^* is the freezing point of the pure component. For the component A, we have

$$\ln x_{\text{A}} = -\frac{\Delta_{\text{fus}}H_{\text{m,A}}^{\circ}}{R}\left(\frac{1}{T_{\text{A}}} - \frac{1}{T_{\text{A}}^*}\right) \quad (6.4.1)$$

Now x_{A} may have value anywhere between 0 and 1, thus $\ln x_{\text{A}}$ is negative. Since $\Delta_{\text{fus}}H_{\text{m,A}}^{\circ}$ is positive (fusion is an endothermic process), it follows that T_{A}^* is greater than T_{A} , i.e. the temperature at which initial solidification of pure A starts from the liquid solution is smaller than the freezing point of pure A.

Similarly, the curve BO of Fig. 6.4.1 represents the solubility curve of the component B. For ideal systems, this solubility curve follows the relation

$$\ln x_{\text{B}} = -\frac{\Delta_{\text{fus}}H_{\text{m,B}}^{\circ}}{R}\left(\frac{1}{T_{\text{B}}} - \frac{1}{T_{\text{B}}^*}\right) \quad (6.4.2)$$

where T_{B} is the temperature at which initial solidification of the pure component B starts from a liquid solution in which the amount fraction of the component B is x_{B} and T_{B}^* is the freezing point of the pure solid B.

At the eutectic point O, the two solubility curves AO and BO meet each other. At the eutectic temperature T_{e} , Eqs (6.4.1) and (6.4.2) become

$$\ln x_{\text{A}} = -\frac{\Delta_{\text{fus}}H_{\text{m,A}}^{\circ}}{R}\left(\frac{1}{T_{\text{e}}} - \frac{1}{T_{\text{A}}^*}\right) \quad (6.4.3)$$

$$\ln x_{\text{B}} = -\frac{\Delta_{\text{fus}}H_{\text{m,B}}^{\circ}}{R}\left(\frac{1}{T_{\text{e}}} - \frac{1}{T_{\text{B}}^*}\right) \quad (6.4.4)$$

Eliminating T_{e} , we get

$$-\frac{R}{\Delta_{\text{fus}}H_{\text{m,A}}^{\circ}}\ln x_{\text{A}} + \frac{1}{T_{\text{A}}^*} = -\frac{R}{\Delta_{\text{fus}}H_{\text{m,B}}^{\circ}}\ln x_{\text{B}} + \frac{1}{T_{\text{B}}^*}$$

Since $x_A + x_B = 1$, we have

$$\frac{1}{T_A^*} - \frac{1}{T_B^*} = \frac{R}{\Delta_{\text{fus}}H_{m,A}^\circ} \ln x_A - \frac{R}{\Delta_{\text{fus}}H_{m,B}^\circ} \ln(1 - x_A) \quad (6.4.5)$$

Thus knowing T_A^* , T_B^* , $\Delta_{\text{fus}}H_{m,A}^\circ$ and $\Delta_{\text{fus}}H_{m,B}^\circ$, Eq. (6.4.5) can be solved for x_A which represents the composition of the liquid mixture at the eutectic point. On substituting x_A in Eq. (6.4.3) or Eq. (6.4.4), we can get the eutectic temperature of the system.

Example 6.4.3

Sodium chloride-sodium sulphate system exhibits the simple eutectic phase diagram with the following characteristics:

Melting point (m.pt.) of sodium chloride = 1 074 K

Enthalpy of fusion of sodium chloride = 28.87 kJ mol⁻¹

Enthalpy of fusion of sodium sulphate = 24.06 kJ mol⁻¹

Eutectic composition = 48.2 mol per cent of sodium sulphate. Assuming ideal behaviour, compute, (i) the m.pt. of sodium sulphate, and (ii) the eutectic temperature of the system,

Solution

(i) From Eq. (6.4.5), we get

$$\frac{1}{T_A^*} - \frac{1}{T_B^*} = \frac{R}{\Delta_{\text{fus}}H_{m,A}^\circ} \ln x_A - \frac{R}{\Delta_{\text{fus}}H_{m,B}^\circ} \ln x_B$$

where T_A^* is the m.pt. of pure A, T_B^* is the m.pt. of pure B, x_A is amount fraction of A at the eutectic point, $\Delta_{\text{fus}}H_{m,A}^\circ$ is the molar enthalpy of fusion of A, and $\Delta_{\text{fus}}H_{m,B}^\circ$ is the molar enthalpy of fusion of B.

Identifying A with NaCl and B with Na₂SO₄ and substituting the given data in the above equation, we get

$$\begin{aligned} \frac{1}{1074 \text{ K}} - \frac{1}{T_B^*} &= \frac{(8.314 \text{ J K}^{-1} \text{ mol}^{-1})}{(28\,870 \text{ J mol}^{-1})} \times 2.303 \times \log(0.518) \\ &\quad - \frac{(8.314 \text{ J K}^{-1} \text{ mol}^{-1})}{(24\,060 \text{ J mol}^{-1})} \times 2.303 \times \log(0.482) \end{aligned}$$

$$\begin{aligned} 0.000\,931 \text{ K}^{-1} - \frac{1}{T_B^*} &= -0.000\,189\,4 \text{ K}^{-1} + 0.000\,252\,2 \text{ K}^{-1} \\ \frac{1}{T_B^*} &= 0.000\,868\,2 \text{ K}^{-1} \end{aligned}$$

Thus $T_B^* = 1\,152 \text{ K}$

(ii) From Eq. (6.4.3), we get

$$\ln x_A = -\frac{\Delta_{\text{fus}}H_{m,A}^\circ}{R} \left(\frac{1}{T_e} - \frac{1}{T_A^*} \right) \quad \text{or} \quad \frac{1}{T_e} = -\frac{R}{\Delta_{\text{fus}}H_{m,A}^\circ} \ln x_A + \frac{1}{T_A^*}$$

Substituting the given data, we get

$$\begin{aligned} \frac{1}{T_e} &= -\frac{(8.314 \text{ J K}^{-1} \text{ mol}^{-1})}{(28\,870 \text{ J mol}^{-1})} \times 2.303 \log(0.518) + \frac{1}{1\,074 \text{ K}} \\ &= 0.000\,189\,4 \text{ K}^{-1} + 0.000\,931 \text{ K}^{-1} = 0.001\,120\,4 \text{ K}^{-1} \end{aligned}$$

Hence $T_e = 892.5 \text{ K}$

Derivation of the Lever Rule

The area BODB (or AOCA) in Fig. 6.4.1 represents the region where solid B (or A) is at equilibrium with the liquid phase whose composition lies on the curve BO (or AO). The composition of the liquid phase corresponding to the given point can be obtained by drawing a horizontal line (known as tie line) through the given point. The point of intersection of the tie line with the curve BO (or AO) gives the composition of the liquid phase. For example, at the point c shown in Fig. 6.4.1, the composition of the liquid phase is given by the point f. In fact, a point anywhere on the line fg represents the liquid phase f in equilibrium with solid B. The only thing that varies along the line is the relative amount of solid and liquid phases. For example, at point c, we have

$$\frac{\text{Amount of solid B}}{\text{Amount in the liquid phase}} = \frac{fc}{gc} \quad (6.4.6)$$

Equation (6.4.6) is the expression of the lever rule and can be derived as follows.

Let X_B be the amount fraction of B in the overall system at the point c. Since at c, only B is solidified, we will have

$$X_B = \frac{n_{B(s)} + n_{B(l)}}{n_{A(l)} + n_{B(s)} + n_{B(l)}} \quad (6.4.7)$$

If x_B is the amount fraction of B in the liquid phase at the point f, we have

$$x_B = \frac{n_{B(l)}}{n_{A(l)} + n_{B(l)}} \quad (6.4.8)$$

Now from Fig. 6.4.1, we have

$$fc = X_B - x_B \quad (6.4.9)$$

$$gc = 1 - X_B \quad (6.4.10)$$

Substituting Eq. (6.4.8) in Eq. (6.4.9), we have

$$fc = X_B - \frac{n_{B(l)}}{n_{A(l)} + n_{B(l)}}$$

$$\text{or } \{n_{A(l)} + n_{B(l)}\} (fc) = \{n_{A(l)} + n_{B(l)}\} X_B - n_{B(l)} \quad (6.4.11)$$

Multiplying Eq. (6.4.10) by $n_{B(s)}$, we get

$$n_{B(s)} (gc) = n_{B(s)} - n_{B(s)} X_B \quad (6.4.12)$$

Subtracting Eq. (6.4.12) from Eq. (6.4.11), we get

$$\{n_{A(l)} + n_{B(l)}\} (fc) - n_{B(s)} (gc) = X_B \{n_{A(l)} + n_{B(l)} + n_{B(s)}\} - \{n_{B(l)} + n_{B(s)}\}$$

According to Eq. (6.4.7), the right side of the above expression is zero.

Hence, we have

$$\frac{(fc)}{(gc)} = \frac{n_{B(s)}}{n_{A(l)} + n_{B(l)}} = \frac{\text{Amount of solid B}}{\text{Amount of liquid phase}}$$

which is the required expression of the lever rule (Eq. 6.4.6).

(6.4.5)

ved for x_A
point. On
emperature

Diagram with

il behaviour,
the system,

raction of A
 $H_{m,B}^\circ$ is the

in the above

82)

 $\frac{1}{T_A^*}$

Example 6.4.4

What mass of antimony crystallizes from 20 kg of Pb-Sb melt containing 35 mass % Pb after cooling to a temperature of 400 °C? What is the maximum mass of pure Sb that can be obtained from the melt? You are provided with the following data: m.pt. of Pb = 327 °C, m.pt. of Sb = 631 °C. Breaks on the cooling curve in thermal analysis were found for the following conditions:

Mass % Pb	30	44	66	80	86 (eutectic)
$\theta, ^\circ\text{C}$	550	500	400	300	250

Solution

First of all, the phase diagram of the Pb-Sb system is plotted from the given data. It is shown in Fig. 6.4.3.

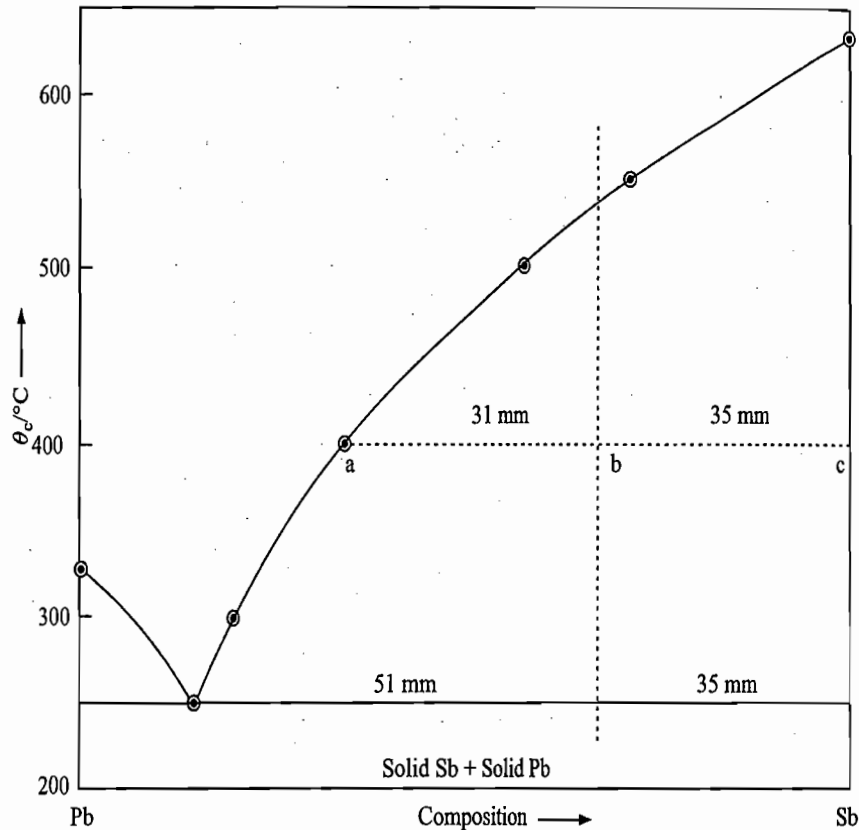


Fig. 6.4.3

At 400 °C the relative ratio of Sb and the melt in the given system of 35 mass % Pb is given by

$$\frac{\text{Mass of melt}}{\text{Mass of Sb}} = \frac{bc}{ba} = \frac{35 \text{ mm}}{31 \text{ mm}}$$

$$\frac{\text{Mass of (melt + Sb)}}{\text{Mass of Sb}} = \frac{35 + 31}{31}$$

Therefore

$$\frac{\text{Mass of Sb}}{\text{Total mass of melt}} = \frac{31}{66}$$

Hence $\text{Mass of Sb} = \left(\frac{31}{66} \times 20 \text{ kg} \right) = 9.39 \text{ kg}$

Exam

6.5 C
M

Descrip
Phase

Since maximum mass of Sb will be obtained just above the eutectic point, we have

$$\frac{\text{Mass of melt}}{\text{Mass of Sb}} = \frac{35 \text{ mm}}{51 \text{ mm}} \quad \text{or} \quad \frac{\text{Mass of Sb}}{\text{Mass of (Sb + melt)}} = \frac{51}{(51 + 35)}$$

Hence $\text{Mass of Sb} = \frac{51}{86} \times 20 \text{ kg} = 11.86 \text{ kg}$

Examples

A few examples of systems exhibiting simple eutectic phase diagram are given in Table 6.4.2.

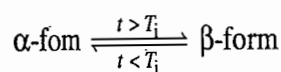
Table 6.4.2 Systems Exhibiting Simple Eutectic Phase Diagrams

A	System		Eutectic		Eutectic composition
	m.pt. °C	B	m.pt. °C	temperature °C	
Sodium sulphate	884	Sodium chloride	800	628	48.2 mol % A
Naphthalene	80.0	Benzoic acid	120	67–69	30 mol % B
Naphthalene	80.0	α -Naphthol	95.0	54.1	48.7 mol % B
Succinimide	123	α -Naphthol	95.0	57.0	\approx 70 mass % B
Benzamide	124.8	α -Naphthol	92.0	38.1	\approx 60 mass % B
Benzamide	124.8	β -Naphthol	122.0	54.1	\approx 60 mass % B
Urea	131	Benzoic acid	121	76.5	\approx 70 mass % B
Acetanilide	112	Benzoic acid	121.4	76.0	42.4 mol % B
Resorcinol	115	Succinic acid	183	100	12.5 mass % B
α -Naphthol	95	Cinnamic acid	133	68	37 mass % B
Diphenyl	69.0	Benzophenone	47.7	25.2	60.7 mol % B
Stilbene	120.4	Benzil	94.0	76.6	71.5 mol % B
β -Naphthol	121	Cinnamic acid	133	87	47 mass % B
Benzoic acid	121	Cinnamic acid	133	81	43.5 mol % B
Benzoic acid	121.4	Resorcinol	110	86	40 mol % A
Resorcinol	115	Cinnamic acid	133	87	41 mass % B

[†]Temperatures mentioned here are the reported temperatures in literature.

6.5 CRYSTALLIZATION OF PURE COMPONENTS AND ONE OF THE SOLIDS EXISTS IN MORE THAN ONE CRYSTALLINE FORM

Let out of the two components A and B, the component B exist in two crystalline forms, namely, α -form and β -form. Let α -form be stable at lower temperatures and β -form at higher temperatures. If T_i is the transition temperature, we will have



The phase diagram of the present system along with the expected cooling curves is shown in Fig. 6.5.1.

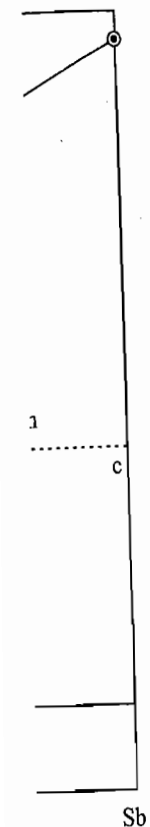
From the cooling curves shown in Fig. 6.5.1, the following information can be derived.

Description of the Phase Diagram

mass % Pb
Sb that can
f Pb = 327
were found

eutectic)

data. It is



mass % Pb

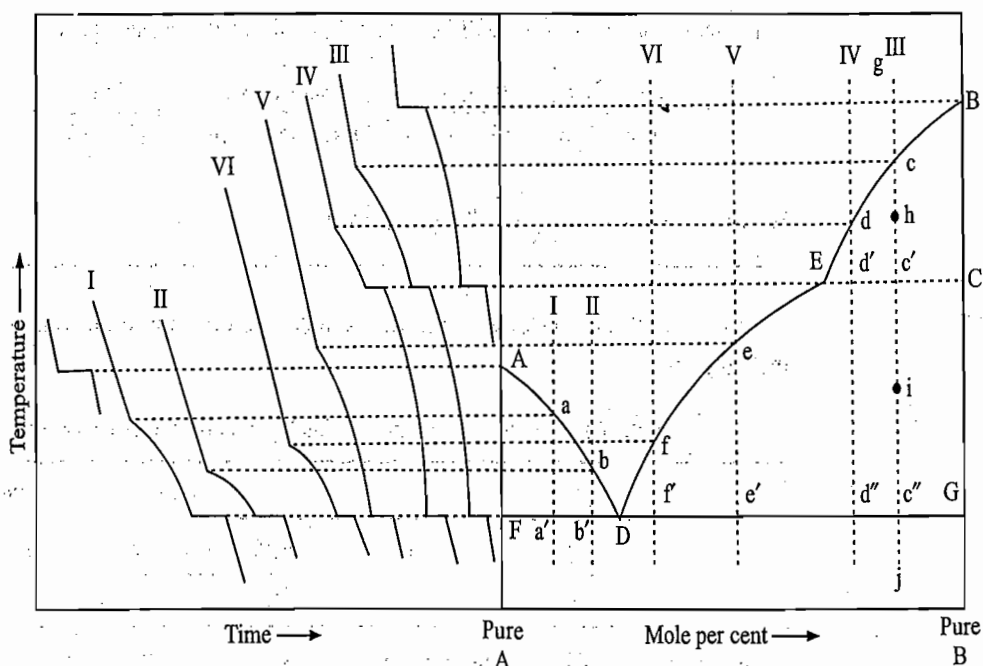


Fig. 6.5.1 Simple eutectic phase diagram for a system exhibiting crystalline modification of one of the components

- From the cooling curve of pure component A, the point A representing the freezing point of A is obtained.
- From the cooling curve of pure component B, the points B and C representing, respectively, the freezing point and the transition temperature of B are obtained.
- From the cooling curves I and II of two systems of B in A, the points a and b representing respectively the start of solidification of A and the points a' and b' representing respectively the start of solidification of both A and B (α -form) together are obtained. Since the addition of B in A lowers the freezing point of the latter, the temperatures corresponding to the points a and b are smaller than the freezing point of pure A.
- From the cooling curves III and IV of two systems of A in B, the points c and d representing respectively the start of solidification of B (β -form); the points c' and d' representing respectively the transition of B (β -form) to B (α -form), and the points c'' and d'' representing respectively the start of solidification of both B (α -form) and A together are obtained.
- From the cooling curves V and VI of two liquid systems of A and B, the points e and f representing respectively the start of solidification of B (α -form) and the points e' and f' representing the start of solidification of both B (α -form) and A together are obtained.
- If a smooth curve passing through the points A, a and b is drawn, we get the curve Aab which represents the start of freezing of pure component A from liquid solutions of different compositions.
- Similarly, the curve passing through the points B, c and d, and that passing through the points e and f give the freezing point curves of B (β -form) and B (α -form), respectively.

- A horizontal line FG passing through the points a' , b' , f' , e' , d'' and c'' gives the temperature at which solid A and solid B (α -form) start crystallizing together.
- The lines Aab and ef on extending meet at the point D. This point, which also lies on the line FG, gives the composition of liquid phase from which two solids A and B (α -form) crystallize together. The overall composition of the solids (i.e. amount of A plus amount of B) separated is the same as that of the liquid phase, vis-à-vis, the composition of the liquid phase remains unchanged during the solidification of A and B (α -form). The temperature of the system remains constant until the entire liquid phase is solidified. This is revealed by the complete arrest of cooling curves at this temperature.
- If a horizontal line passing through the points d' , c' and C is drawn, we get the line Cc'd' over which the transition of B (α -form) to B (β -form) occurs.
- If the lines Bcd, fe and Cc'd' are extended, they meet at the point E which gives the composition of liquid phase at the transition temperature.

Sequence of Effects Produced on Cooling Liquid Mixtures

The phase diagram shown in Fig. 6.5.1 can be easily labelled by considering the behaviour of a system from which solid B crystallizes on cooling. If, for example, the liquid phase given by the point g is cooled, the state of the overall system is moved vertically downward along the isopleth gch'ic''j. The system remains in liquid phase up to the point c. At c solid B (β -form) starts crystallizing. The separation of B from the liquid phase moves its composition towards A-axis. If the crystallization of B is to be continued, the liquid phase has to be cooled so that its composition moves on the line cdE. Thus, as cooling is continued, more and more of solid B (β -form) separates and the composition of liquid phase moves along cdE. For example, if the system has been cooled up to the overall state point h, the system now consists of solid B (β -form) in equilibrium with the liquid phase of composition corresponding to the point d. This point is obtained by drawing a tie line (horizontal line) from the point h which meets the curve BE at d. The relative amounts of two phases can be determined with the help of the lever rule.

If the cooling of the system is done up to the point c' , the system will contain three phases, viz., solid B (β -form), solid B (α -form) and the liquid phase E, in equilibrium with one another. Continued cooling of the system at c' merely causes the polymorphic change of solid B (β -form) into B (α -form) without any change in temperature. This is revealed by an arrest of cooling curve at point c' . Once the transition is complete, the system exhibits cooling during which more and more of solid B (α -form) separates and the composition of liquid phase moves along ED. When the system is cooled up to the point c'' , the composition of the liquid phase has moved up to the point D. Further cooling results into the solidification of B (α -form) and A together from the liquid phase D without any change in temperature. The composition of overall solids separated is the same as that of the liquid phase, vis-à-vis, the composition of the liquid phase remains constant throughout. Once the entire liquid phase has solidified, the system exhibits cooling of solid mixture of A and B (α -form).

For the system V (or VI), the system will remain liquid up to the point e (or f). At this point, solid B(α -form) starts solidifying and continues to solidify till the point e' (or f') is reached. The composition of liquid phase moves along efD. At e', the liquid composition corresponds to the point D. Here solids B(α -form) and A start crystallizing together.

For the system I (or II), it is the solid A which starts crystallizing when the system reaches the point a (or b). Solid A continues to solidify till the point a' (or b') is reached. At a' (or b'), solids A and B(α -form) crystallize together from the liquid phase represented by the point D.

Conclusion of the Phase Diagram

From the above analysis, the following conclusions can be derived.

- A system within the area ADFA represents solid A in equilibrium with liquid phase whose composition lies on the line AD. The point at which the tie line drawn from the given point meets the curve AD gives the required composition. The relative amounts of the two phases can be determined by making use of the lever rule.
- A system within the area DECGD represents solid B(α -form) in equilibrium with a liquid phase whose composition lies on the line DE.
- A system within the area BECB represents solid B(β -form) in equilibrium with a liquid phase whose composition lies on the line BE.
- A point within the area ADFA, DECGD and BECB represents an univariant system ($F = C + 1 - P = 2 + 1 - 2 = 1$). Thus for a given temperature, the composition of the liquid phase in equilibrium with solid A or solid B(α -form) or B(β -form) has a fixed value.
- A point on the line FDG or EC represents a nonvariant system ($F = C + 1 - P = 2 + 1 - 3 = 0$).
- A point below the line FDG represents a mixture of solids A and B(α -form).
- The point D is the eutectic point at which solids A and B(α -form) are in equilibrium with liquid phase represented by the point D.

Labelling of the Phase Diagram

Cooling Patterns

Table 6.5.1 describes, in brief, the phase diagram shown in Fig. 6.5.1

The nature of cooling curve will depend upon the composition of the system. We now describe the expected pattern of cooling curves for a few typical systems shown in Fig. 6.5.1.

- | | | | |
|--|---|------------------------------------|--|
| (i) <i>Composition lying between AD and DE</i> | | | |
| Rapid cooling of liquid phase | → | Break at the appearance of solid | → Slower cooling; solidification continues |
| | | | ↓ |
| | | Cooling of solid mixture | ← Horizontal portion; eutectic point |
| (ii) <i>Eutectic composition:</i> | | | |
| Rapid cooling of liquid phase | → | Horizontal portion; eutectic point | → Cooling of solid mixture |

Table 6.5.1 Description of the Phase Diagram of Fig. 6.5.1

Location of the system	Status of the system
A	Freezing temperature of A
B	Freezing temperature of B
C	Transition temperature of B
AD	Freezing point curve of A
DE	Freezing point curve of B(α -form)
BE	Freezing point curve of B(β -form)
A-axis	Solid A up to the point A, and liquid A beyond A
B-axis	Solid B(α -form) up to the point C, solid B(β -form) from C to B and liquid B beyond the point B
FDG	Solids A and B(α -form) in equilibrium with liquid phase D
EC	Solids B(α -form) and B(β -form) in equilibrium with liquid phase E
Area AFDA	Solid A \rightleftharpoons liquid (whose composition lies on AD)
Area DECGD	Solid B(α -form) \rightleftharpoons liquid (whose composition lies on DE)
Area BECB	Solid B(β -form) \rightleftharpoons liquid (whose composition lies on EB)
Area above ADEB	Liquid phase
Area below FDG	Solid mixtures

(iii) Composition lying between EB

Rapid cooling of liquid phase	→ Break at the appearance of B(β -form)	→ Slower cooling, solidification of solid B(β -form) continues
		↓
Horizontal portion; eutectic point	→ Slower cooling; appearance of B(α -form) continues	← Horizontal portion; conversion of solid B(β -form) to B(α -form)
↓		
Cooling of solid mixture		

(iv) Composition corresponding to the Point E

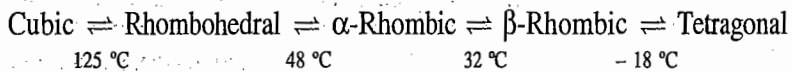
Rapid cooling of liquid phase	→ Break at the appearance of solid B(β -form)	→ Slower cooling; appearance of solid B(α -form) continues
		↓
Cooling of solid mixture	← Horizontal portion; eutectic point	

Examples

Examples in which one of the components exhibits more than one crystalline form are given below.

(i) Solid carbon tetrachloride exists in two forms, with a transition point at -48°C . All systems with CCl_4 as one of the components show a break in the phase diagram at this transition temperature provided the eutectic temperature of the system lies below -48°C .

(ii) Solid ammonium nitrate exists in five crystalline forms with the following transition temperatures:



Consequently, four breaks corresponding to these transitions are observed in the phase diagram of ammonium nitrate-water system.

Theoretical Aspects of Fig. 6.5.1

The entire phase diagram of Fig. 6.5.1 may be constructed by drawing the simple eutectic phase diagram AO'B of the system A - B(β) and then superimposing on it the simple eutectic phase diagram AOB' of the system A - B(α) as shown in Fig. 6.5.2. In order to construct these two phase diagrams, we should have data on T_A^* , $\Delta_{\text{fus}}H_{m,A}^\circ$, $T_{B(\beta)}^*$, $\Delta_{\text{fus}}H_{m,B(\alpha)}^\circ$, $\Delta_{\text{fus}}H_{m,B(\beta)}^\circ$ and the melting point of the solid B(α).

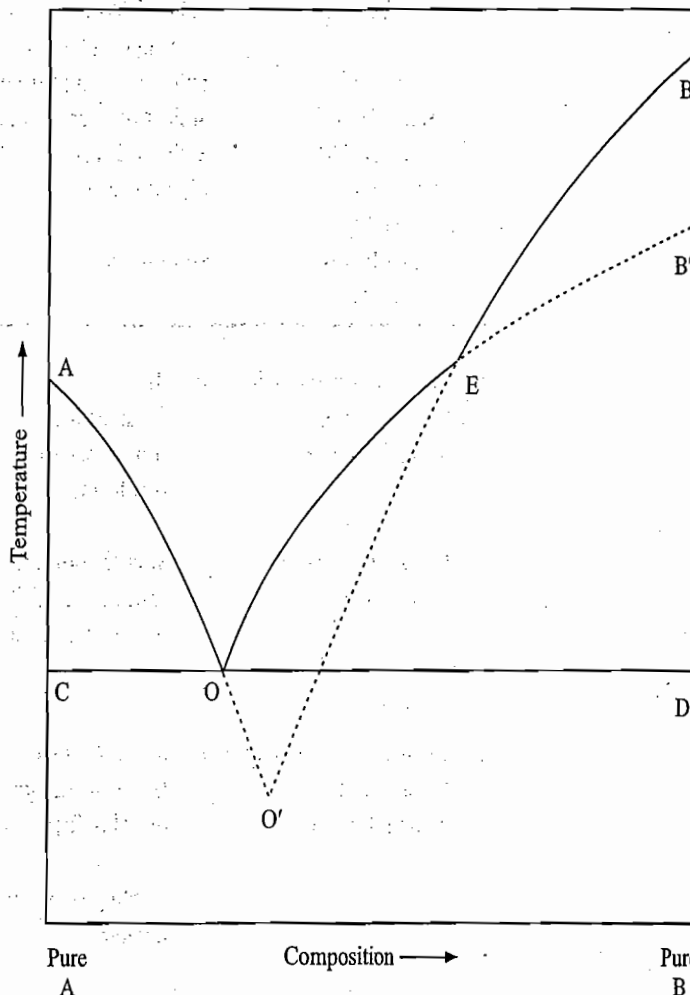


Fig. 6.5.2 Construction of the phase diagram for a system exhibiting allotropic modification of one of the components

6.6 FORMATION OF A COMPOUND STABLE UP TO ITS MELTING POINT

Application of the Phase Rule

Let the two components A and B form a stable compound AB. This compound will have its own characteristic melting point which may be greater or smaller than the melting points of pure components A and B. Since the compound is stable and melts only at its melting point, it is obvious that the compound on heating will remain in the solid phase up to its melting point where it melts to produce a liquid whose composition is the same as that of the compound. At

Fig. 6.

Desc
Phas

Temperature ↑

this stage, the system becomes nonvariant. This may be proved with the help of the lever rule:

$$F = (C - r) + 1 - P$$

Here $r = 1$, since the compositions of solid and liquid phases are identical. Thus

$$F = (2 - 1) + 1 - 2 = 0$$

Hence, the temperature of the system remains constant till the entire solid compound melts. Such a melting point where both solid and liquid of the same composition can coexist is known as the *congruent melting point*.

Conversely, if a liquid of composition AB is cooled, it will exhibit uniform cooling up to the freezing point of solid AB. At this temperature, solid AB separates and continues to separate without any change in temperature until whole of the liquid phase is solidified. After this, the system will exhibit cooling of solid AB. Thus, the cooling pattern of the liquid phase of composition AB is similar to that of a pure component.

Description of the Phase Diagram

The phase diagram of the present system along with the expected cooling curves is shown in Fig. 6.6.1.

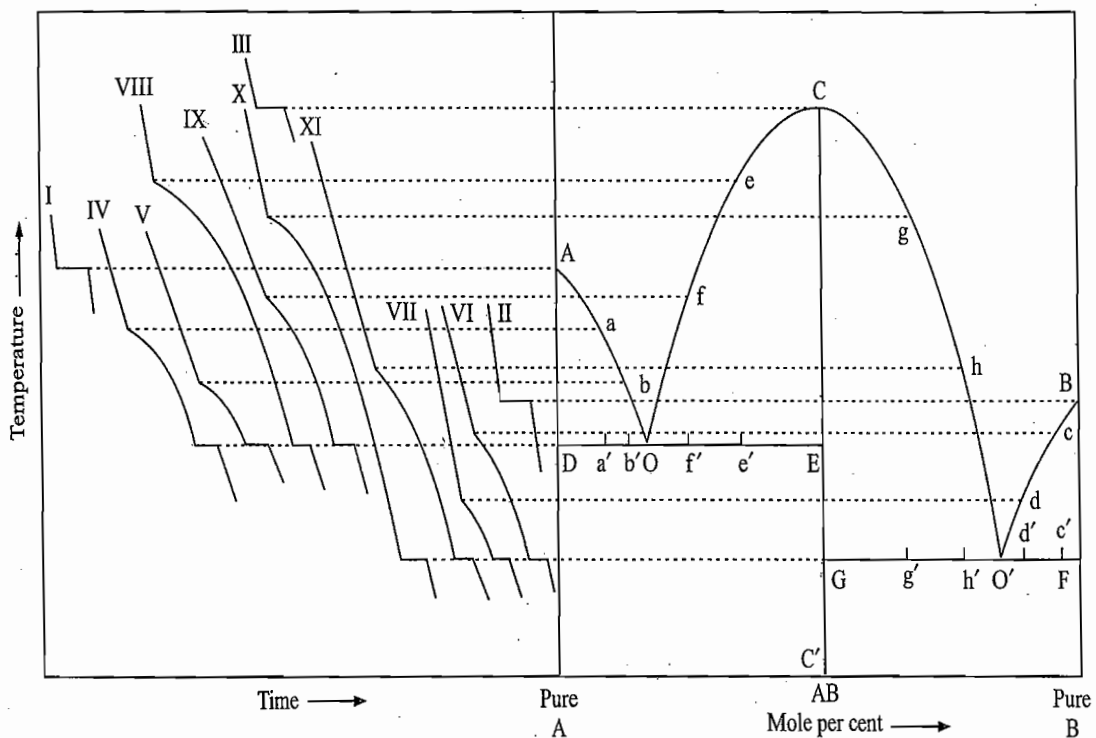


Fig. 6.6.1 Phase diagram of a system exhibiting a congruent melting point

From the cooling curves shown in Fig. 6.6.1, the following information can be derived.

- From the cooling curve I and II of pure components, the points A and B representing respectively the freezing points of A and B are obtained.

- The point C' represents the composition of the compound AB. If this compound is heated, its state point will move vertically along the line CC' . At C , the compound melts to give a liquid of composition AB. Alternatively, the point C can be obtained from the cooling curve III of a liquid of composition AB.
- The addition of a solute in a solvent depresses the freezing point of the latter. Keeping this in mind, the following facts are revealed:
 - (i) From the cooling curves IV and V of two liquid systems of B in A, the points a and b representing respectively the start of freezing of A are obtained.
 - (ii) From the cooling curves VI and VII of two liquid systems of A in B, the points c and d representing respectively the start of freezing of B are obtained.
 - (iii) If the component A or B is added to the liquid of composition AB, it will depress the freezing point of the compound AB. Thus, from the cooling curves VIII to XI, the points e, f, g and h representing respectively the start of freezing of AB are obtained.
- If a line passing through the points A, a and b is drawn, we get the freezing point curve of A.
- If a line passing through the points B, c and d is drawn, we get the freezing point curve of B.
- If a line passing through the points C, e and f , and C, g and h are drawn, we get the freezing point curves of AB.
- If the lines Aab and Cef are extended, they meet at the point O which gives the eutectic point where solid A and solid AB are present in equilibrium with liquid phase O.
- Through the point O, the tie-line DOE can be drawn. A point on this line represents solid A (point D) and solid AB (point E) in equilibrium with liquid phase of composition corresponding to the point O.
- The lines Cgh and Bcd on extending meet at O' which gives the eutectic point where solid B and solid AB are present in equilibrium with liquid phase O' .
- Through the point O' , the tie line $GO'F$ can be drawn. A point on this line represents solid B (point F), and solid AB (point G) in equilibrium with liquid phase O' .
- The systems at the arrest of temperature on the cooling curves IV, V, VIII and IX are shown respectively by the points a', b', e' and f' on the line DE. Similarly, the points, $c', d', g',$ and h' represent the systems at the arrest of temperature on the cooling curves VI, VII, X and XI, respectively.

Labelling of the Phase Diagram

Theoretical Aspects of Fig. 6.6.1

The labelling of the phase diagram shown in Fig. 6.6.1 is described in Table 6.6.1

The phase diagram as given in Fig. 6.6.1 may be considered to be made up of two simple eutectic diagrams placed side by side. To the left of the dividing line CC' , we have the simple eutectic phase diagram of A and AB, whereas to the right of this line we have that of B and AB. Theoretically, the curves OC and $O'C$

Examp

Example

Table 6.6.1 Labelling of Fig. 6.6.1

Location of the system	Status of the system
A	Freezing point of A
B	Freezing point of B
C	Freezing point of AB
AO	Freezing point curve of A
BO'	Freezing point curve of B
OC and O'C	Freezing point curves of AB
O	Eutectic point involving solid A, solid AB and liquid O
A-axis	Solid A up to the point A, liquid A beyond A
B-axis	Solid B up to the point B, liquid B beyond B
C'C	Solid AB, liquid AB beyond C
O'	Eutectic point involving solid B, solid AB and liquid O'
DOE	A system on this line represent solid A and solid AB in equilibrium with liquid O
GO'F	A system on this line represents solid B and solid AB in equilibrium with liquid O'
Area AODA	Solid A \rightleftharpoons liquid (whose composition lies on AO)
Area BO'FB	Solid B \rightleftharpoons liquid (whose composition lies on BO')
Area COEC	Solid AB \rightleftharpoons liquid (whose composition lies on OC)
Area CGO'C	Solid AB \rightleftharpoons liquid (whose composition lies on CO')
Area below DOE	Solid mixtures of A and AB
Area below GO'F	Solid mixtures of B and AB
Area above AOCO'B	Liquid

should meet at C to give a sharp point. Instead, we usually observe rounded maximum at this point. This is due to the fact that the compound AB is not very much stable at its melting point. It partly dissociates and the products of dissociation in the liquid phase depresses the actual melting point of the compound with the result that the curve has a flattened portion at the point C.

A few examples of the systems exhibiting one compound formation with their congruent melting points are given in Table 6.6.2.

FORMATION OF MORE THAN ONE COMPOUND

In many cases, two components on combination form more than one compound. In such cases, the equilibrium phase diagram has a curve analogous to OCO' for each and every compound. Figure 6.6.2 displays one such case where the two compounds AB_2 and A_2B are formed. The melting points of the compounds are given by the points C and D, respectively. This phase diagram may be considered to be formed by the union of three simple eutectic diagrams. These are $A - A_2B$, $A_2B - AB_2$ and $AB_2 - B$. The interpretation of the diagram can be carried out as usual and is shown in Fig. 6.6.2.

A few examples of systems exhibiting the formation of more than one congruent compound are given in Table 6.6.3.

Examples

Examples

Table 6.6.2 Systems Exhibiting Compound Formation with Congruent Melting Point

System [†]		Com- pound	Congruent m.pt. °C	Eutectic temperature °C	Eutectic composition		
A	B						
	<i>m.pt.</i> °C	<i>m.pt.</i> °C					
Gold	1 064	Tin	232	AB	425		
Calcium chloride	777	Potassium chloride	776	AB	754		
Diphenyl- amine	52.8	Benzo- phenone	47.7	AB	40.2	34.1	70 mol % A
Urea	132	Phenol	42.5	AB ₂	61	31.9	25.5 mol % A
Acetamide	79.4	Phenol	41	AB ₂	43	60.0	65 mol % B
Urea	133	Resorcinol	110	AB	≈ 102.5	34.0	90 mol % B
Benzamide	124.8	Resorcinol	108.5	AB	≈ 88.5	29	45 mol % B
Phenol	42.5	Picric acid	122	AB	86	30.2	90 mol % B
						86.5	26 mol % B
						≈ 84	≈ 78 mol % B
						76.1	≈ 66.5 % B
						80.2	≈ 34.5 % B
						80.5	

[†]Temperatures mentioned here are the reported temperatures in literature.

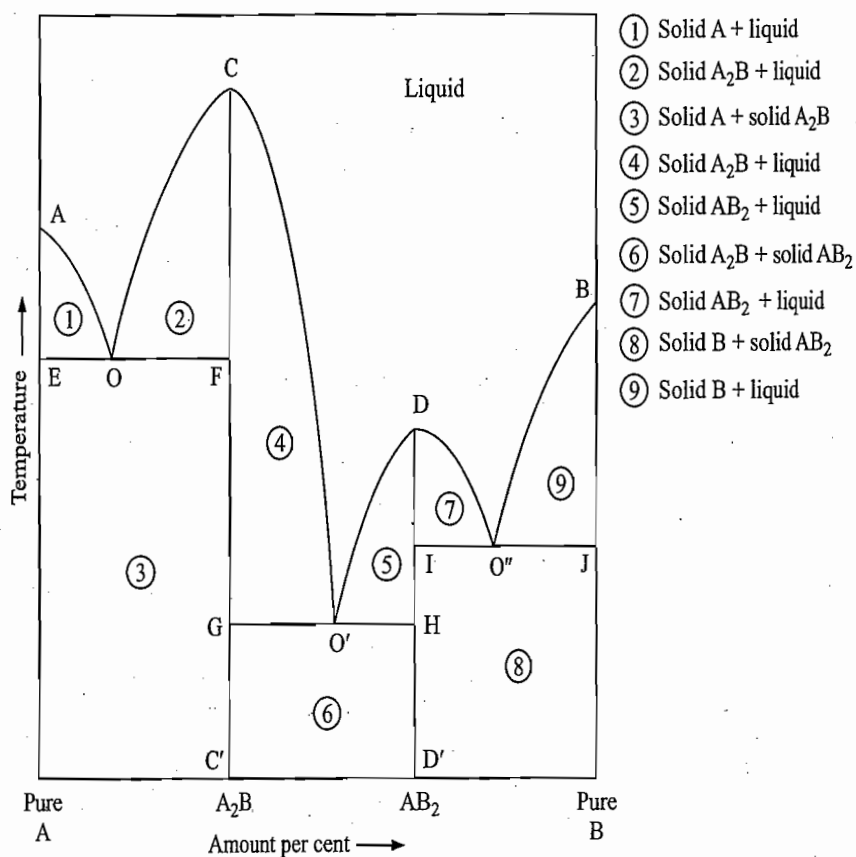


Fig. 6.6.2 Formation of two congruent compounds

Exempl

Table 6.6.3 System Exhibiting more than One Congruent Compound Formation

System	Compound Congruent		Eutectic temperatures	
	A	B	m.pt./°C	°C
K	63.6	Sb	613	485; 34.9 % (A + A ₃ B) of Sb
			A ₃ B	812
			AB	605
				400; 68 % Sb (B + AB)
Ag	960.5	Sr	757	750
			A ₄ B	781
			A ₅ B ₃	760
			AB	680
			A ₂ B ₃	665
				645
				436

Example 6.6.1

For the water(A) and ethylene glycol(B) system, the following data were obtained from the cooling curves of different compositions. The solid phase or phases that first appear at the break or halt on cooling (that is, at the beginning of freezing processes) are given in the last column:

Solution composition mol % of ethylene glycol	Freezing point/°C	Solid phases that separate out at the beginning of freezing process
0	0	A
10.5	-14.1	A
14.1	-20.9	A
18.1	-28.3	A
24.9	-41.8	A
28.0	-51.2	A+B · 2A
31.8	-49.6	B · 2A
34.1	-49.6	B · 2A
44.0	-58.6	B · 2A
47.5	-63.3	B · 2A + 3B · 2A
50.2	-54.6	3B · 2A
60.9	-40.7	3B · 2A
66.0	-49.4	3B · 2A + B
67.8	-45.3	B
75.3	-36.4	B
90.1	-22.4	B
100.0	-12.8	B

Plot the phase diagram and label it.

Solution

First of all, the points corresponding to the given data were located in a temperature versus composition phase diagram. After this, the points corresponding to the given two compounds $B \cdot 2A$ and $3B \cdot 2A$ were located on the composition axis and the vertical lines were drawn from these points as shown in Fig. 6.6.3.

From the given data, we find that the temperature at which solid A (ice) separates out from the solution decreases as the amount per cent of B (ethylene glycol) in the solution is increased. This decrease in temperature is continued up to the temperature -51.2°C where the solution composition is 28 mol per cent of B. At this temperature, two solids, viz., A and $B \cdot 2A$, are separated out. On increasing the amount per cent of B from 28 to 31.8, we find that there is a separation of only $B \cdot 2A$ and the freezing point of the solution increases from -51.2 to -49.6°C . Obviously, the temperature -51.2°C is the lowest temperature where the two solids are separated out and thus must represent eutectic temperature. So, we draw a horizontal line at this temperature starting from the pure solid A line to the vertical line of solid $B \cdot 2A$. The solid $B \cdot 2A$ has a congruent melting point as the freezing curve of $B \cdot 2A$ has a maximum right above the vertical line of solid $B \cdot 2A$. A similar analysis indicates that the solid $3B \cdot 2A$ has a congruent melting point. The temperature -63.3°C and -49.4°C where two solid phases separate out are lowest ones and hence these are the eutectic temperatures. Thus, we draw horizontal lines through these points meeting vertical lines of solids $B \cdot 2A$ and $3B \cdot 2A$, and solids $3B \cdot 2A$ and pure B, respectively.

Finally a smooth curve passing through the points of temperature versus composition is drawn. This gives us the phase diagram of the present system. Labelling of different areas is straightforward and is described in Fig. 6.6.3 itself.

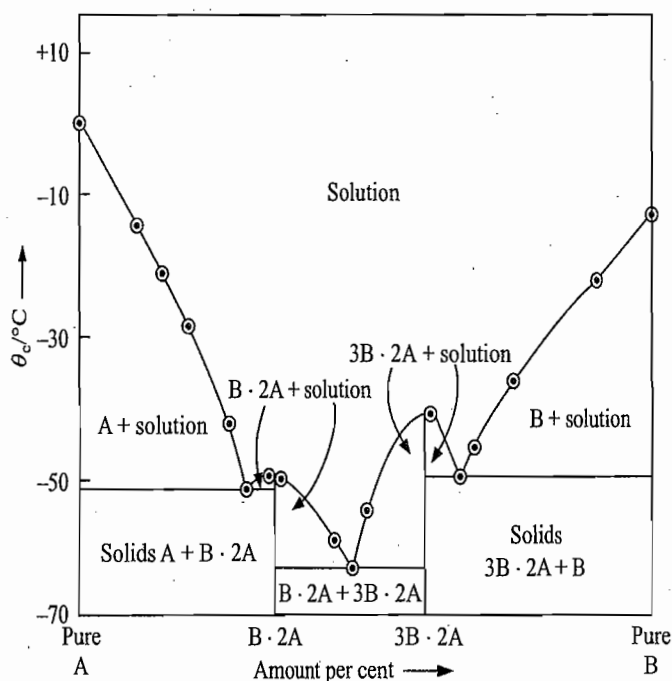


Fig. 6.6.3 Required phase diagram

6.7 FORMATION OF A COMPOUND WHICH DECOMPOSES BEFORE ATTAINING ITS MELTING POINT

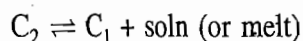
Definition of Incongruent Melting Point

Sometimes a solid compound formed by the union of two components is not stable up to its true melting point. It decomposes before reaching the true melting point into another solid, whose composition is different from that of the

Exp
Diag

Temperature ↑

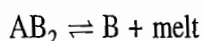
compound, and a solution. In fact, the compound does not possess a true melting point. Whenever this happens, the compound is said to undergo a transition or *peritectic* (Greek: melting around) *reaction* or *incongruent fusion* which may be represented as



where C_2 is the compound and C_1 is new solid formed as a result of decomposition of C_2 . This new solid may be a new congruent or incongruent compound or a pure component. Its melting point is always greater than that of C_2 . The above reaction takes place at a definite temperature and is reversible in nature. The composition of the melt is also definite. These facts are in agreement with the phase rule requirement, as $C = 2$, $P = 3$ and $F = C - P + 1 = 2 - 3 + 1 = 0$. Thus, the system at this stage is invariant. The temperature at which this reaction takes place is known as the *incongruent melting point* of the compound or the *peritectic temperature* or the *transition temperature*.

Expected Phase Diagram

Let the incongruent compound formed from A and B be AB_2 and let it undergo the following reaction



The phase diagram of a system exhibiting above reaction has an appearance as shown in Fig. 6.7.1.

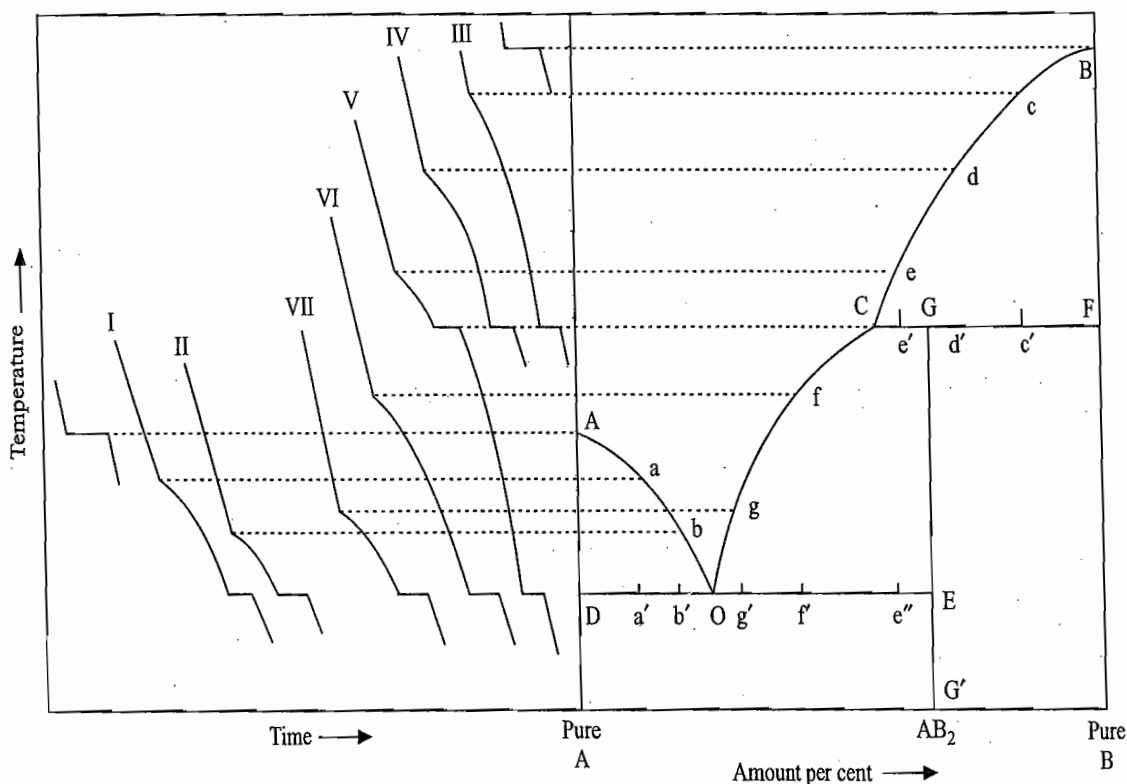
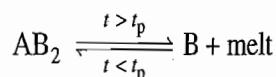


Fig. 6.7.1 Phase diagram of a system exhibiting the formation of an incongruent compound AB_2

Description of the Phase Diagram

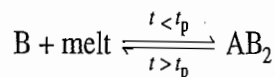
From the cooling curves shown in Fig. 6.7.1, the following information may be drawn.

- From the cooling curves of pure components, the points A and B representing respectively the freezing points of A and B are obtained.
- From the cooling curves I and II of two liquid systems of B in A, the points a and b representing respectively the start of freezing of A are obtained.
- From the cooling curves III, IV and V of liquid systems of A in B, points c, d and e representing respectively the start of freezing of B are obtained.
- If a line passing through the points A, a and b is drawn, we get the freezing point curve of A.
- If a line passing through the points B, c and d is drawn, we get the freezing point curve of B.
- The point G' on the composition axis corresponds to the composition of the compound AB₂. If this compound is heated, it remains in the solid phase until the point G at temperature t_p (peritectic temperature) is reached. At the point G, the following peritectic reaction occurs:



Because of the separation of solid B from solid AB₂, the melt will be less rich in B as compared to the compound AB₂. Thus, the point representing the composition of the melt will lie left to the point G, say, at point C. Since a tie line connects different phases in equilibrium, such a line drawn at the point G (solid AB₂) will have its ends at point C (representing the melt) and F (representing solid B), respectively. Thus, a point anywhere on the tie line CGF represents solid AB₂ in equilibrium with solid B and the melt C. The system here will be invariant ($F = C + 1 - P = 2 + 1 - 3 = 0$).

- If heating of the compound AB₂ at G is continued, more and more of the compound decomposes into solid B and the melt C. The temperature of the system will remain constant till whole of the compound AB₂ has decomposed. At this stage, the system becomes univariant ($F = C + 1 - P = 2 + 1 - 2 = 1$) and thus heating will cause an increase in temperature, only solid B exists in equilibrium with liquid phase. Hence, the curve Bcd which represents the freezing point curve of B will end at the point C. The cooling curve III, IV and V will exhibit an arrest of temperature when the respective system reaches on the line CGF.
- The state of the system at a temperature below the peritectic temperature depends upon the overall composition of the system. We will have either solid B and solid AB₂ or solid AB₂ and the liquid phase. This can be explained on the basis of the peritectic reaction:



The reaction between B and melt proceeds isothermally to form the compound AB₂ until either all the solid B or all the melt has been consumed. Thus, we have

- (i) If solid B is present in excess amount than the requisite quantity that is required for the formation of the compound with whole of the melt, then solid B will remain in excess and hence the system will possess this excess quantity of solid B and the solid compound AB_2 .
- (ii) If solid B is present in deficient amount than the requisite quantity that is required for the formation of the compound with whole of the melt, then whole of solid B will disappear and the system will possess the excess quantity of the melt and the solid compound AB_2 .

A point on the right of the line GG' , i.e. from G to F, represents excess of solid B and thus on cooling below the peritectic temperature, we would get a mixture of solid B and solid AB_2 . The relative amounts of the two at a given point can be determined with the help of the lever rule. On the other hand, a point between CG represents the deficiency of solid B and thus on cooling just below the peritectic temperature, we would get the compound AB_2 in equilibrium with the melt.

- From the cooling curves VI and VII of the two liquid systems of compositions slightly left to the point C, we get the points f and g which represent respectively the start of freezing of the compound AB_2 . If a smooth line passing through the points g and f is drawn, it will meet at the point C because just below the line CG, we have an equilibrium between solid AB_2 and the liquid phase.
- If the line Cfg is extended on the other side, it meets the freezing point curve Aab at the point O. This point represents an eutectic point involving solid A and solid AB_2 in equilibrium with liquid O. A tie line drawn from the point O will start from the point D (representing solid A) and will end at the point E (representing solid AB_2).
- The cooling curves I, II, VI and VII will exhibit an arrest of temperature (horizontal line) at the eutectic temperature corresponding to the point O.
- The cooling curve V besides exhibiting an arrest on the line CG will also exhibit one more arrest corresponding to the line OE.

Sequence of Effects Produced on Cooling Liquid Mixtures

The phase diagram shown in Fig. 6.7.1 can be easily labelled by considering the behaviour of the systems I, III and V during the cooling.

System I The system will remain in the liquid phase till the point a is reached. Solid A starts crystallizing at a and continues to crystallize till the point a' is reached. At a', both A and AB_2 crystallize together from the liquid O.

System III The system will remain in the liquid phase till the point c is reached. Solid B starts crystallizing at c and continues to crystallize till the point c' is reached. At c', the peritectic reaction starts and continues isothermally till whole of the liquid C is exhausted. The system now contains solid mixture of B and AB_2 which will show smooth cooling.

System V The system will remain in the liquid phase till the point e is reached. Solid B starts crystallizing at e and continues to crystallize till the point e' is reached. At e', the peritectic reaction starts and continues isothermally till whole of solid B has disappeared. The system now contains solid AB_2 in equilibrium

with the melt C. Further cooling will result in more and more separation of AB_2 with the composition of liquid moving along the line CO. This continues till the point e'' is reached where the liquid composition corresponds to the point O. Here, the solid mixture of A and AB_2 crystallize isothermally without any change in the composition of the liquid phase. This continues till whole of the liquid phase is exhausted. The system now consists of a solid mixture of A and AB_2 which will show smooth cooling.

Labelling of the Phase Diagram

With the help of above analysis, the phase diagram shown in Fig. 6.7.1 can be easily labelled and is described in Table 6.7.1.

Table 6.7.1 Labelling of Fig. 6.7.1

Location of the system	Status of the system
A	Freezing point of A
B	Freezing point of B
F	Peritectic temperature of AB_2
AO	Freezing point curve of A
BC	Freezing point curve of B
CO	Freezing point curve of AB_2
O	Eutectic point involving solid A, solid AB_2 and liquid O
C	Peritectic point involving solid B, solid AB_2 and liquid C
A-axis	Solid A up to the point A, liquid A beyond A
B-axis	Solid B up to the point B, liquid B beyond B
G'G	Solid AB_2
CGF	A point on this line represents solid B and solid AB_2 in equilibrium with liquid C
DOE	A point on this line represents solid B and solid AB_2 in equilibrium with liquid O
Area ADOA	Solid A \rightleftharpoons liquid (whose composition lies on AO)
Area BCFB	Solid B \rightleftharpoons liquid (whose composition lies on BC)
Area COGC	Solid AB_2 \rightleftharpoons liquid (whose composition lies on CO)
Area below GF	Solid B and solid AB_2
Area below DOE	Solid A and solid AB_2
Area above AOCB	Liquid

Cooling Patterns

The nature of the cooling curve will depend on the composition of the system. We describe below the expected pattern for a few typical systems.

- (i) *Composition lying anywhere between AO or OC*
 Rapid cooling of liquid \rightarrow Break at the appearance of solid A or AB_2 \rightarrow Slower cooling; solidification continues
 \downarrow
 Cooling of solid mixture of A and AB_2 \leftarrow Horizontal portion; eutectic point
- (ii) *Eutectic composition*
 Rapid cooling of liquid \rightarrow Horizontal portion eutectic point \rightarrow Cooling of the solid mixture of A and AB_2

Exempl

Solution

(iii) Composition corresponding to the peritectic point C

Rapid cooling of liquid → Break at the appearance of solid → Slower cooling; appearance of more and more of AB₂
 ↓
 Cooling of solid mixture of A and AB₂ ← Horizontal portion; eutectic point

(iv) Composition anywhere between C and G

Rapid cooling of liquid → Break; appearance of solid B → Slower cooling; appearance of more and more of solid B
 ↓
 Horizontal portion; eutectic temperature ← Slower cooling appearance of more and more of AB₂ ← Horizontal portion at the peritectic temperature
 ↓
 Cooling of solid mixture of A and AB₂

(v) Composition anywhere between G and F

Rapid cooling of liquid → Break; appearance of solid B → Slower cooling; appearance of more and more of solid B
 ↓
 Cooling of solid mixture of B and AB₂ ← Horizontal portion at the peritectic temperature

These cooling patterns are also shown in Fig. 6.7.1.

Example 6.7.1

Na and K melt at 98 °C and 65 °C, respectively. They form one compound NaK which decomposes at 10 °C to give a solid and a melt containing 60 mol % K. There is an eutectic at -5 °C and the eutectic composition is 75 mol % of K. Sketch the phase diagram and level it.

Solution

Analysis of data

- (i) At 10 °C, the compound NaK decomposes to give a new solid and melt. Thus, the temperature 10 °C must be a peritectic temperature. This also follows from the fact that the compositions of the compound (50 mol % K) and the melt (60 mol % K) are not identical. The new solid phase can be either Na or K. Since K content of the melt is larger than of the compound NaK, we may conclude that this new solid phase must be Na. This is also supported by the fact that K appears at the eutectic point. So we draw a horizontal line at 10 °C from the Na-axis right up to the melt composition. The vertical line representing NaK compound will have its end at this horizontal line (Fig. 6.7.2).
- (ii) Since K separates out at the eutectic point, we join the melting point of K with the point representing eutectic point.
- (iii) Since Na appears on decomposition of the compound NaK, we join the melting point of Na with the peritectic point representing the melt composition at 10 °C.
- (iv) Finally, we join the peritectic point representing the melt with the eutectic point and draw a horizontal line from the NaK-axis to the K-axis passing through the eutectic point.

Labelling of the obtained phase diagram is straightforward and is included in Fig. 6.7.2.

ration of AB₂ continues till s to the point y without any l whole of the ture of A and

s. 6.7.1 can be

, and liquid O b₂ and liquid C id A d B

l solid AB₂ in

l solid AB₂ in

on AO) on BC) ies on CO)

t of the system. ms.

ooling; tion continues ↓ al portion; joint

of the solid of A and AB₂

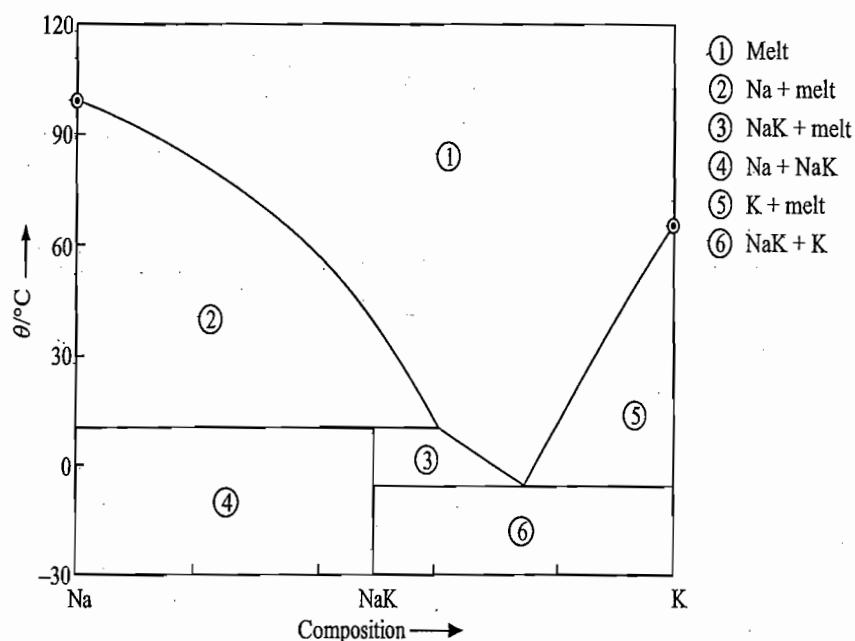


Fig. 6.7.2 Required phase diagram

Theoretical aspect of Fig. 6.7.1

The curves AO, OC and CB of Fig. 6.7.1 are the solubility curves for substances A, AB_2 and B, respectively. The entire phase diagram shown in Fig. 6.7.1 may be considered to be made up of two systems, namely, A-B system and incomplete subsystem A- AB_2 . Since B does not equilibrate with AB_2 at temperatures above the incongruent melting point T_p of the latter, the solubility curve BC is determined by its composition in the system A-B. The solubility curves AO and OC are determined by their compositions in the subsystem A- AB_2 . In other words, if the compound AB_2 is considered to exist as such in the form of a liquid at temperatures below T_p , then the composition of A in the solubility curve AO depends on the AB_2 composition and the composition of AB_2 in the solubility curve OC depends on the A composition. Thus from the given data on T_A^* , T_B^* , $\Delta_{\text{fus}}H_{m,A}^\circ$ and $\Delta_{\text{fus}}H_{m,B}^\circ$ we can construct the simple eutectic diagram of the system A-B and on this diagram we can superimpose the simple eutectic diagram of the subsystem A- AB_2 (after performing the appropriate amount fractions transformation) constructed from the given T_A^* , $\Delta_{\text{fus}}H_{m,A}^\circ$, $\Delta_{\text{fus}}H_{m,AB_2}^\circ$ and the hypothetical melting point $T_{AB_2}^*$ as shown in Fig. 6.7.3.

Examples

A few examples of systems exhibiting incongruent melting points are given in Table 6.7.2

Table 6.7.2 System Exhibiting Incongruent Melting Point

System		Compound
A	B	
Au	Sb	AB_2
KCl	CuCl_2	$2A \cdot B$
Picric acid	Benzene	AB
Acetamide (79.9 °C)	Salicylic acid (156 °C)	AB
		$t_p = 70 \text{ °C}$ and 44 mol % salicylic acid
NaCl	H_2O	$A \cdot 2B$
Na_2SO_4	H_2O	$A \cdot 10B$

Fig. of th a sys comp with melti

Exam

Solu.

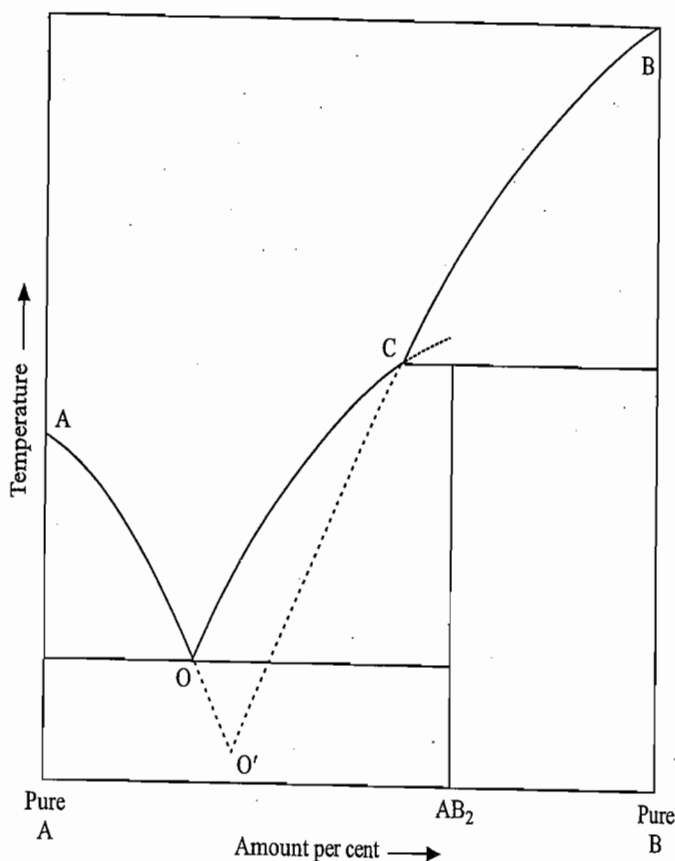
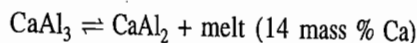


Fig. 6.7.3 Construction of the phase diagram for a system exhibiting compound formation with an incongruent melting point

Example 6.7.2

The Ca-Al system exhibits the following peritectic equilibrium:



Without using the lever rule, predict the nature and the respective masses of the system just below the incongruent point for the systems: (i) 40 g Ca + 70 g Al, and (ii) 20 g Ca + 90 g Al.

Solution

At temperature just below incongruent point, we will have either a mixture of solids CaAl_2 and CaAl_3 or solid CaAl_3 in equilibrium with the melt.

(i) Let the mass x of Ca be present in the form of the compound CaAl_2 and let us assume that the remaining mass of Ca (i.e. $40 \text{ g} - x$) be present in the form of the compound CaAl_3 . Thus, the total quantity of Al present in these two compounds is $(54/40)x + (81/40)(40 \text{ g} - x)$ and this must be equal to the given quantity of Al, i.e. 70 g. Thus, we have

$$\left(\frac{54}{40}\right)x + \left(\frac{81}{40}\right)(40 \text{ g} - x) = 70 \text{ g}$$

Solving for x , we have $x = 16.3 \text{ g}$

Thus the given system will consist of a mixture of CaAl_2 and CaAl_3 just below the incongruent point with the following compositions.

$$\text{In } \text{CaAl}_2 \quad \text{Ca} = 16.3 \text{ g} \quad \text{Al} = \left(\frac{54}{40}\right) \times 16.3 \text{ g} = 22.0 \text{ g}$$

$$\text{and in CaAl}_2 \quad \text{Ca} = (40 \text{ g} - 16.3 \text{ g}) = 23.7 \text{ g} \quad \text{Al} = \left(\frac{81}{40}\right) \times 23.7 \text{ g} = 48.0 \text{ g}$$

(ii) Let the mass x of Ca be present in the form of the compound CaAl_2 and let us assume that the remaining mass of Ca (i.e. $20 \text{ g} - x$) be present in the form of the compound CaAl_3 . Then the total quantity of Al present in these two compounds is $(54/40)x + (81/40)(20 \text{ g} - x)$ and this must be equal to the given mass of Al, i.e. 90 g. Thus, we have

$$\left(\frac{54}{40}\right)x + \left(\frac{81}{40}\right)(20 \text{ g} - x) = 90 \text{ g}$$

Solving for, x we get $x = -73.33 \text{ g}$

Since x is coming out to be negative, our assumption that the system consists of $\text{CaAl}_2 + \text{CaAl}_3$ must be wrong. Let us now imagine that the system consists of melt + CaAl_3 . Let us again suppose that the mass x of Ca be present in the form CaAl_3 and the remaining in the melt containing 14 mass % Ca. The total quantity of Al present in these two forms is $(81/40)x + (86/14)(20 \text{ g} - x)$, and this must be equal to the given quantity of 90 g. Thus, we have

$$\left(\frac{81}{40}\right)x + \left(\frac{86}{14}\right)(20 \text{ g} - x) = 90 \text{ g}$$

Solving for x , we get $x = 7.98 \text{ g}$

Thus, we have

$$\text{Ca present in CaAl}_3 = 7.98 \text{ g} \quad \text{Al present in CaAl}_3 = \left(\frac{81}{40}\right)(7.98 \text{ g}) = 16.16 \text{ g}$$

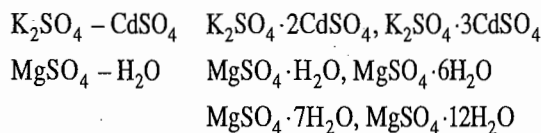
$$\text{Ca present in the melt} = (20 \text{ g} - 7.98 \text{ g}) = 12.02 \text{ g}$$

$$\text{Al present in the melt} = \left(\frac{86}{14}\right)(12.02 \text{ g}) = 73.84 \text{ g}$$

Hence the system just below the incongruent melting point consists of solid CaAl_3 and melt.

More than one Incongruent Compounds

In some systems, more than one compound exhibiting peritectic temperature is formed. Many systems are known where all the compounds formed have incongruent melting points. A few examples are



Example 6.7.3

Construct a phase diagram of Au-Pb system from the following data:

- Melting point of Au = 1 063 °C; m.pt. of Pb = 327 °C.
- Compound Au_2Pb decomposes at 418 °C to give a liquid 44 mol % of Pb.
- Compound AuPb_2 has a peritectic at 254 °C and the melt is 71 mol % of Pb.
- Eutectic is at 215 °C and is 84 mol % of Pb.
- No solid solution is formed.

Label the areas of the diagram.

Analysis of data

- (i) At 418 °C, the compound Au_2Pb (33.3 mol % Pb) decomposes to give a liquid containing 44 mol % Pb. Since the compositions of solid and melt are different, the temperature 418 °C must be a peritectic temperature. The solid phase which appears at this temperature must not be Pb as the Pb content in the melt is higher than that in the compound Au_2Pb . Since there is no other compound with Au content larger than in the compound Au_2Pb , it follows that this solid phase must be Au. So, we join the melting point of Au with the point representing the melt composition at 418 °C (Fig. 6.7.4). We also draw a horizontal line at 418 °C starting from the point representing melt composition to the Au-axis. The vertical line representing Au_2Pb compound must end at this horizontal line.
- (ii) At 254 °C, we have a peritectic reaction where the compound AuPb_2 decomposes to give the melt containing 71 mol % of Pb. The solid phase appearing here will not be pure Pb as the melt contains more of Pb than the compound AuPb_2 . This also follows from the fact that Pb appears at the eutectic point. Since in the composition range AuPb_2 - Au_2Pb , there is no other compound, we conclude that the new solid phase appearing at 254 °C must be the compound Au_2Pb . So, we join the points representing the two melts at 418 °C and 254 °C. We also draw a horizontal line starting from the point of the melt at 254 °C to the vertical line representing the compound Au_2Pb . The vertical line representing the compound AuPb_2 must end at this horizontal line.
- (iii) It is given that at the eutectic point Pb separates out. The second solid which separates out here must be the compound AuPb_2 as there exists no other compound between the composition range of eutectic point and the compound AuPb_2 . So, we join the melting point of Pb and the melt composition at 254 °C with the eutectic point. We also draw a horizontal line through the eutectic point starting from Pb-axis to the vertical line representing the compound AuPb_2 .

Now the labelling of the phase diagram is straightforward and is included in Fig. 6.7.4.

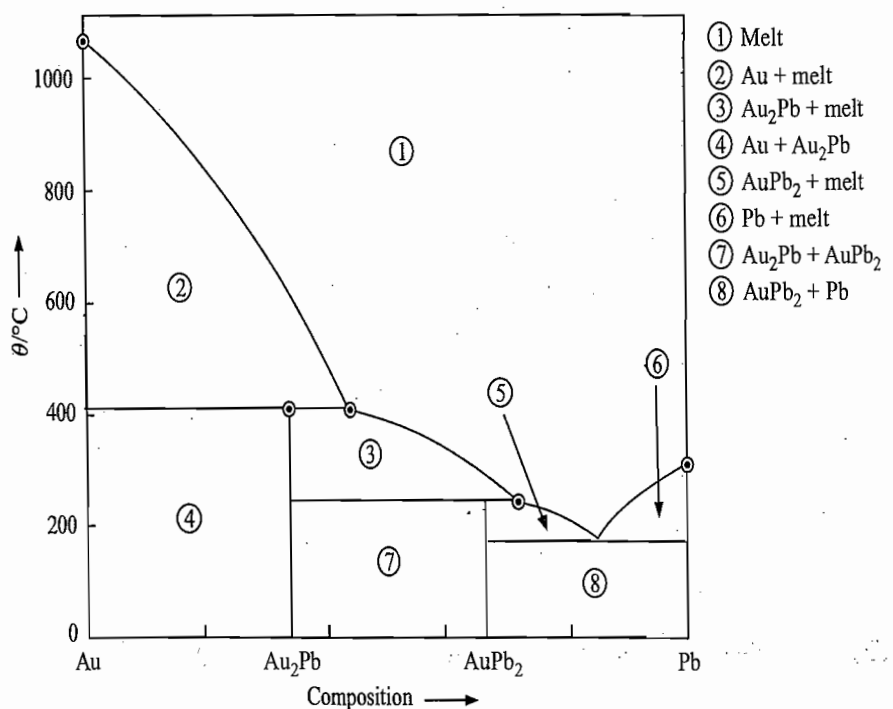


Fig. 6.7.4 Required phase diagram

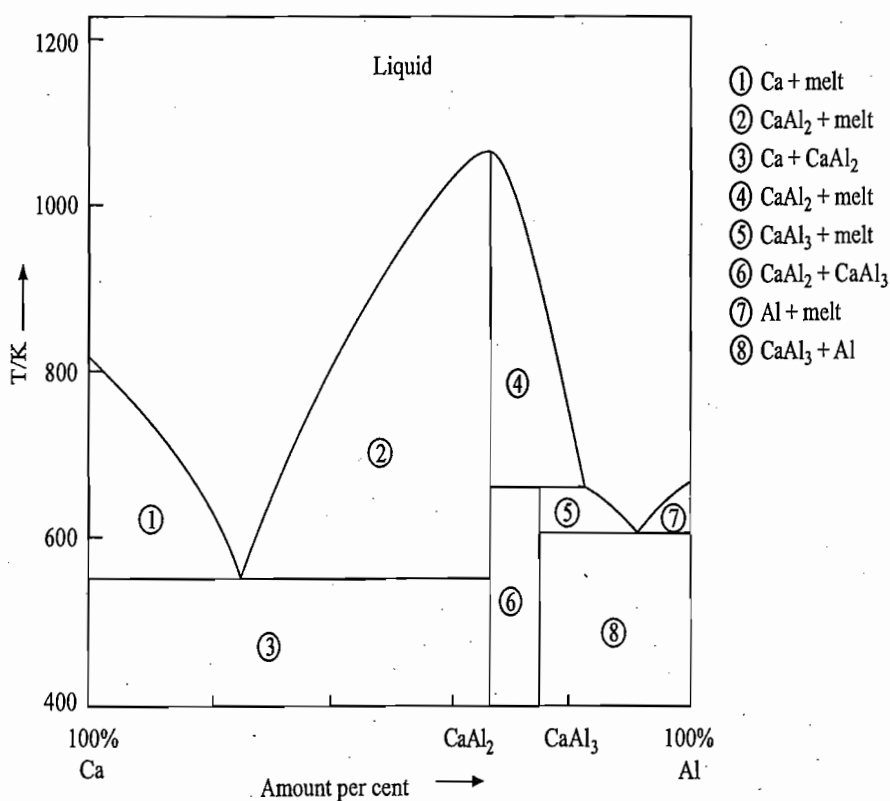
Systems Exhibiting both Congruent and Incongruent Compounds

In some systems, more than one compound is formed, some of them have congruent melting points while others have incongruent melting points. A few examples are given in Table 6.7.3. The phase diagram of such a system will exhibit characteristics of both congruent and incongruent melting points:

Table 6.7.3 Systems Exhibiting both Congruent and Incongruent Compounds Formation

A	B	Congruent compound	Incongruent compound
Ca	Al	CaAl_2	CaAl_3
Mg	Ni	MgNi_2	Mg_2Ni
Na	Bi	Na_3Bi	NaBi

Figure 6.7.5 displays such a diagram for the Ca-Al systems. The phase diagram may be considered to be made up of two simple systems of Ca- CaAl_2 and CaAl_2 -Al. The former shows a simple eutectic whereas in the latter a compound CaAl_3 with the incongruent melting point is formed. This way the labelling of different areas becomes very simple and is shown in Fig. 6.7.5 itself.



Exam

Solutio

Fig. 6.7.6

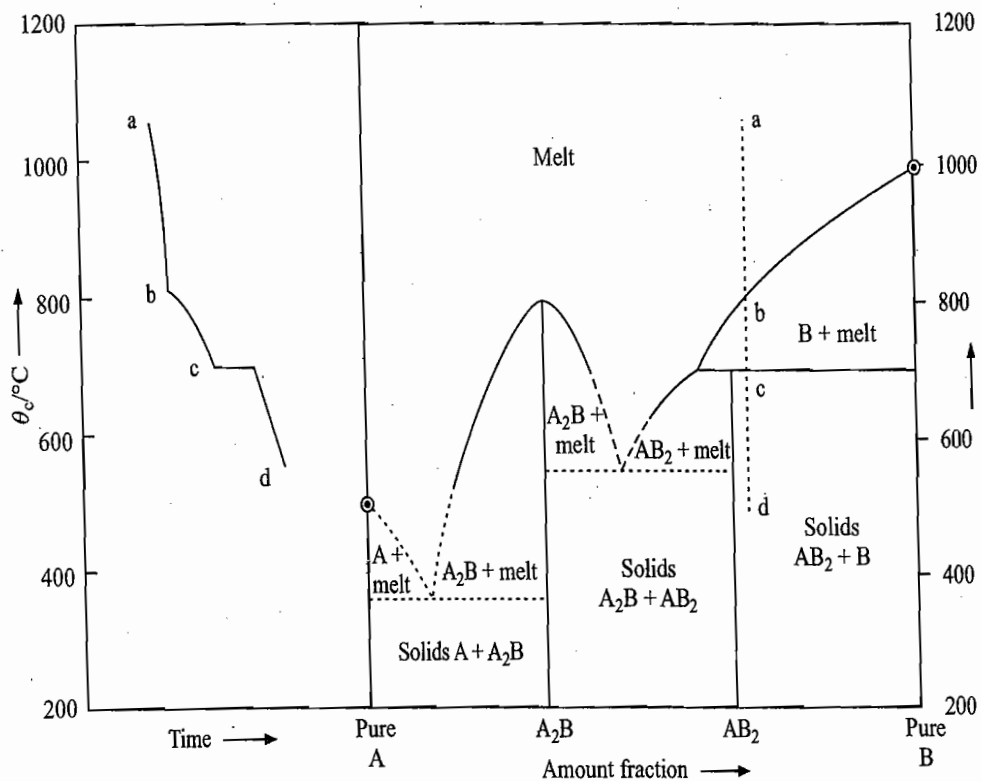
Fig. 6.7.5 Phase diagram of Ca-Al system

Example 6.7.4

A and B form two solid compounds A_2B and AB_2 . The compound A_2B melts at 800°C to give a liquid having the same composition as that of A_2B . The compound AB_2 melts with decomposition at 700°C to give solid B and a liquid containing 60 mol % of B. The melting point of A is 500°C and of B is 1000°C . No solid solutions are formed. Sketch temperature versus amount fraction of the system and label it. Draw cooling curves for a mixture containing 70 mol % of B.

Solution*Analysis of data*

- (i) The compound A_2B is a congruent compound as on melting it produces the liquid of its own composition.
- (ii) The compound AB_2 is an incongruent compound as on melting it produces a melt of composition different from its own composition.
- (iii) Since solid B appears on melting AB_2 at 700°C , we join the melting point of B with the melt composition at 700°C . We also draw a horizontal line from this melt composition to the pure B axis. The vertical line representing the compound AB_2 must end at this horizontal line.
- (iv) Since the compound A_2B melts congruently, on either sides of the vertical line at A_2B composition, we will have the solubility curves of A_2B which will pass through the melting point of the compound A_2B .
- (v) Since no other compound formation is there, we conclude that the systems A- A_2B and A_2B - AB_2 form the eutectic pairs. So, we draw the curves characteristic of eutectic pairs as shown in Fig. 6.7.6.

**Fig. 6.7.6**

The labelling of the phase diagram is straight forward and is shown in Fig. 6.7.6 itself. The expected cooling curve for the given composition is also shown in the phase diagram.

congruent
examples
ll exhibit

congruent
compound

CaAl_3
 Mg_2Ni
 NaBi

e diagram
and CaAl_2 -
and CaAl_3
f different

a + melt
 $a\text{Al}_2$ + melt
a + CaAl_2
 $a\text{Al}_2$ + melt
 $a\text{Al}_3$ + melt
 $a\text{Al}_2$ + CaAl_3
l + melt
 $a\text{Al}_3$ + Al

6.8 FORMATION OF A COMPLETE SERIES OF SOLID SOLUTIONS

A solid may dissolve in another solid to give a solid solution. This solution is perfectly homogeneous in character. X-ray examination of the lattice of solid solution reveals that one constituent enters the lattice of the other and is uniformly distributed throughout. There is no indication of two crystalline lattices as is in the case of solid mixture and thus only one crystal lattice characteristic of the solid solution is formed.

Theoretical Aspects

Before drawing phase diagram of the present case, we consider the following two facts regarding the general nature of the diagram.

(A) *Shift in the freezing point of the solvent when a solid solution separates out on cooling the solution* An expression for the shift in freezing point of the solvent when a solid solution separates out can be derived thermodynamically. If we assume that the solid solution also behaves like an ideal solution, then the chemical potentials of its constituents will be given by an expression analogous to that of an ideal gaseous mixture or ideal liquid solution. This expression is

$$\mu_i = \mu_i^* + RT \ln x_i$$

where μ_i^* is the chemical potential of the pure solid (at pressure p , if $p = 1$ bar, μ_i^{*o} replaces μ_i^*) and x_i is the amount fraction of the constituent in the solid solution.

The condition of phase equilibrium between the solid solution and liquid solution for one of the components (say, solvent) is

$$\mu_{1(s)} = \mu_{1(l)} \quad (6.8.1)$$

where the subscripts s and l within the brackets stand for solid and liquid, respectively.

Now if it is assumed that both the solutions are ideal, we have

$$\mu_{1(s)}^* + RT \ln x_{1(s)} = \mu_{1(l)}^* + RT \ln x_{1(l)}$$

Rearranging the above relation, we have

$$R(\ln x_{1(s)} - \ln x_{1(l)}) = \frac{\mu_{1(l)}^* - \mu_{1(s)}^*}{T} = \frac{\Delta_{\text{fus}} \mu_1^*}{T} \quad (6.8.2)$$

where $\Delta_{\text{fus}} \mu_1^*$ is the molar free energy of fusion of the pure solvent at temperature T and pressure p . Since

$$\Delta_{\text{fus}} \mu_1^* = \Delta_{\text{fus}} H_{1,m}^* - T \Delta_{\text{fus}} S_{1,m}^*$$

and at the normal melting point T_1^* of the pure solvent

$$\Delta_{\text{fus}} S_{1,m}^* = \Delta_{\text{fus}} H_{1,m}^* / T_1^*$$

we have

$$\Delta_{\text{fus}} \mu_1^* = \Delta_{\text{fus}} H_{1,m}^* - T \frac{\Delta_{\text{fus}} H_{1,m}^*}{T_1^*} = \Delta_{\text{fus}} H_{1,m}^* \left(1 - \frac{T}{T_1^*} \right) \quad (6.8.3)$$

Condit
be Neg

Substituting Eq. (6.8.3) in Eq. (6.8.2), we get

$$R(\ln x_{1(s)} - \ln x_{1(l)}) = \frac{\Delta_{\text{fus}} H_{1,m}^*}{T} \left(1 - \frac{T}{T_1^*} \right) = \Delta_{\text{fus}} H_{1,m}^* \left(\frac{-\Delta T_f}{TT_1^*} \right) \quad (6.8.4)$$

where $\Delta T_f = T - T_1^*$.

Equation (6.8.4) can be simplified under the following approximations.

(i) For a dilute solution, T will be very near to T_1^* so that the term TT_1^* may be replaced by T_1^{*2} .

(ii) Again for dilute solution, we have

$$\ln x_{1(s)} = \ln(1 - x_{2(s)}) \simeq -x_{2(s)}$$

$$\ln x_{1(l)} = \ln(1 - x_{2(l)}) \simeq -x_{2(l)}$$

With these approximations, Eq. (6.8.4) reduces to

$$R(-x_{2(s)} + x_{2(l)}) = \Delta_{\text{fus}} H_{1,m}^* \left(\frac{-\Delta T_f}{T_1^{*2}} \right)$$

$$\text{or} \quad (-\Delta T_f) = \frac{RT_1^{*2}}{\Delta_{\text{fus}} H_{1,m}^*} x_{2(l)} \left(1 - \frac{x_{2(s)}}{x_{2(l)}} \right) \quad (6.8.5)$$

This expression can be written in terms of molality of the liquid solution by using the following approximation.

$$x_{2(l)} = \frac{n_{2(l)}}{n_{1(l)} + n_{2(l)}} \simeq \frac{n_{2(l)}}{n_{1(l)}} = \frac{n_{2(l)}}{m_{1(l)}/M_1} = \left(\frac{n_{2(l)}}{m_{1(l)}} \right) M_1 = mM_1$$

Thus, Eq. (6.8.5) modifies to

$$-\Delta T_f = \frac{RT_1^{*2} M_1}{\Delta_{\text{fus}} H_{1,m}^*} m \left(1 - \frac{x_{2(s)}}{x_{2(l)}} \right)$$

$$\text{or} \quad -\Delta T_f = K_f m(1 - K) \quad (6.8.6)$$

where K is the distribution coefficient and is given by

$$K = \frac{\text{Amount fraction of the solute in the solid phase}}{\text{Amount fraction of the solute in the solution}} \quad (6.8.7)$$

In Eq. (6.8.6), $\Delta T_f = T - T_1^*$. The value of ΔT_f can be positive or negative depending upon the value of K . Thus, we have

Condition for ΔT_f to be Negative

If $K < 1$, then $T < T_1^*$ and thus a depression in freezing point of the solvent is observed. The presence of $1 - K$ factor in Eq. (6.8.6) makes the numerical value of ΔT_f smaller than the value where only the solvent separates on cooling.

(6.8.3)

Condition for ΔT_f to be Positive

If $K > 1$, then $T > T_1^*$ and an elevation in the freezing point of the solvent is observed.

These conclusions, in fact, are similar to those derived earlier for the liquid-vapour system and thus may be regarded as the expressions for the *Konowaloff's rule* as applicable to solid-liquid system. These conclusions may be stated as follows.

At any temperature, the liquid phase contains relatively more than solid phase of that component whose addition to the solvent (or solution) causes a decrease in the freezing point of the latter or the solid phase contains relatively more than liquid phase of the component whose addition to the liquid phase causes an increase in the freezing point of the latter.

(B) Nature of cooling curve when a solid solution is formed Since in a solid solution, the two components are completely miscible with each other and form a homogeneous solution, it is obvious that such a solution will always constitute a single solid phase. Thus, the system at the most can have two phases, namely, liquid and solid solutions, in equilibrium with each other. According to the phase rule, this system is univariant ($F = C - P + 1 = 2 - 2 + 1 = 1$). Thus, the value of one variable has to be stated in order to define the system completely. This variable may be temperature or composition of one of the solutions. In other words, the equilibrium between solid and liquid solutions can exist at different temperatures. For a given temperature, the compositions of the two solutions in equilibrium will have fixed values. The cooling curves will exhibit two breaks corresponding to the start of freezing of solid solution (where P changes from 1 to 2 and F changes from 2 to 1) and the end of freezing of solid solution (where P changes from 2 to 1 and F changes from 1 to 2), respectively.

If the composition of solid and liquid solutions in equilibrium are identical, the system becomes nonvariant ($F = (C - r) + 1 - P = (2 - 1) + 1 - 2 = 0$). Here, the freezing or melting of solid solution takes place at a constant temperature. Consequently, the cooling curve will exhibit an arrest at this temperature.

Classification of Phase Diagrams

For real systems, Eq. (6.8.6) is expected to be applicable only in very dilute solutions of A in B or B in A. Three types of phase diagrams may be distinguished depending upon the values of $K_{A \text{ in } B}$ (i.e. $x_{A(s)}/x_{A(l)}$, A acting as a solute and B as a solvent) and $K_{B \text{ in } A}$ (i.e. $x_{B(s)}/x_{B(l)}$, B acting as a solute and A as a solvent). These are:

Ascending solid solution In this case $K_{B \text{ in } A} > 1$ and $K_{A \text{ in } B} < 1$ or vice versa. The freezing point of A (or B) gradually increases as more and more of B (or A) is added to it whereas that of B (or A) gradually decreases as more and more of A (or B) is added to it. In such a case, freezing point of a solution containing different amounts of A and B always lies between those of pure components.

Minimum type solid solution In this case $K_{B \text{ in } A} < 1$ and $K_{A \text{ in } B} < 1$. The freezing points of both the components gradually decrease on addition of more and more of the second component. Thus, the freezing point curves show

downward trends at both ends of the phase diagram and meet each other at a minimum point, i.e. the freezing point curve of such a system exhibits a minimum.

Maximum type solid solution In this case $K_{B \text{ in } A} > 1$ and $K_{A \text{ in } B} > 1$. The freezing points of both the components gradually increase on addition of more and more of the second component. Thus, the freezing point curves show upward trends at both ends of the phase diagram and meet each other at a maximum point, i.e. the freezing point curve of such a system exhibits a maximum.

We now draw the expected phase diagrams for the above three cases and describe their main characteristics.

ASCENDING TYPE SOLID SOLUTION

Theoretical Aspects

Before drawing the expected phase diagram, it is worthwhile to consider a few general conclusions regarding the nature of liquidus and solidus curves. From Eq. (6.8.4), we have

$$R(\ln x_{1(s)} - \ln x_{1(l)}) = \Delta_{\text{fus}} H_{1,m}^* \left(\frac{1}{T} - \frac{1}{T_1^*} \right)$$

$$\text{or} \quad \ln \left(\frac{x_{1(l)}}{x_{1(s)}} \right) = - \frac{\Delta_{\text{fus}} H_{1,m}^*}{R} \left(\frac{1}{T} - \frac{1}{T_1^*} \right) \quad (6.8.8)$$

$$\text{or} \quad \frac{x_{1(l)}}{x_{1(s)}} = e^{-a} \quad (6.8.9)$$

$$\text{where} \quad a = \frac{\Delta_{\text{fus}} H_{1,m}^*}{R} \left(\frac{1}{T} - \frac{1}{T_1^*} \right)$$

Similarly, for the second component,

$$\frac{x_{2(l)}}{x_{2(s)}} = e^{-b} \quad (6.8.10)$$

$$\text{where} \quad b = \frac{\Delta_{\text{fus}} H_{2,m}^*}{R} \left(\frac{1}{T} - \frac{1}{T_2^*} \right)$$

Now in the liquid and solid phases, we will have

$$x_{1(l)} = 1 - x_{2(l)} \quad (6.8.11)$$

$$x_{1(s)} = 1 - x_{2(s)} \quad (6.8.12)$$

In Eq. (6.8.9), $x_{1(s)}$ may be rewritten in terms of $x_{1(l)}$ with the help of Eqs (6.8.10), (6.8.11) and (6.8.12). Substituting Eq. (6.8.12) in Eq. (6.8.9), we get

$$\frac{x_{1(l)}}{1 - x_{2(s)}} = e^{-a}$$

In view of Eq. (6.8.10), the above equation becomes

$$\frac{x_{1(l)}}{1 - x_{2(l)}/e^{-b}} = e^{-a}$$

Now employing Eq. (6.8.11), we get

$$\frac{x_{1(l)}}{1 - (1 - x_{1(l)})/e^{-b}} = e^{-a}$$

Solving for $x_{1(l)}$, we have

$$x_{1(l)} = \frac{e^{-a}(e^{-b} - 1)}{e^{-b} - e^{-a}} \quad (6.8.13)$$

Substitution of Eq. (6.8.13) in Eq. (6.8.9) gives

$$x_{1(s)} = \frac{x_{1(l)}}{e^{-a}} = \frac{e^{-b} - 1}{e^{-b} - e^{-a}} \quad (6.8.14)$$

Finally, we have

$$x_{2(l)} = 1 - x_{1(l)} = \frac{e^{-b}(e^{-a} - 1)}{e^{-a} - e^{-b}} \quad (6.8.15)$$

$$x_{2(s)} = 1 - x_{1(s)} = \frac{e^{-a} - 1}{e^{-a} - e^{-b}} \quad (6.8.16)$$

From Eq. (6.8.13)-(6.8.16), the following conclusions may be drawn:

- None of the relationship is linear.
- Since the relationship for $x_{1(s)}$ and $x_{1(l)}$ are different, it is evident that the liquidus and solidus curves do not coincide except at T_1^* and T_2^* .
- For a case in which $T_1^* \leq T \leq T_2^*$, we will have:

a is negative (thus e^{-a} is greater than one)

and b is positive (thus e^{-b} is less than one).

Hence from Eq. (6.8.13), we get

$$x_{1(l)} = \frac{e^{-a}(e^{-b} - 1)}{e^{-b} - e^{-a}} = \frac{\text{negative}}{\text{negative}} = \text{positive}$$

Similarly from Eqs (6.8.14)-(6.8.16), we get that $x_{1(s)}$, $x_{2(l)}$ and $x_{2(s)}$ all are positive quantities. The same conclusions are obtained for the case $T_2^* \leq T \leq T_1^*$. Thus, it may be concluded that if T lies in the interval between the melting points of the two components, physically meaningful composition of the system is obtained. Conversely, it follows that if the amount fraction of the system lies between 0 and 1, then the temperatures of the liquidus and solidus curves lie between the melting points of the two components.

D
PFig
dia
exh
seri
wit
mixCo
of

- For a case in which $T_1^* \leq T \leq T_2^*$. Eqs (6.8.9) and (6.8.10) yield

$$\frac{x_{1(l)}}{x_{1(s)}} > 1 \quad \text{and} \quad \frac{x_{2(l)}}{x_{2(s)}} < 1 \quad (6.8.17)$$

Similarly for a case $T_1^* \geq T \geq T_2^*$, we have

$$\frac{x_{1(l)}}{x_{1(s)}} < 1 \quad \text{and} \quad \frac{x_{2(l)}}{x_{2(s)}} > 1 \quad (6.8.18)$$

Equations (6.8.17) and (6.8.18) demonstrate that the liquid is richer than solid in the lower melting point component and the solid is richer than liquid in the higher melting point component.

Keeping in mind the above conclusions the phase diagram of the ascending type solution is shown in Fig. 6.8.1.

Depiction of the Phase Diagram

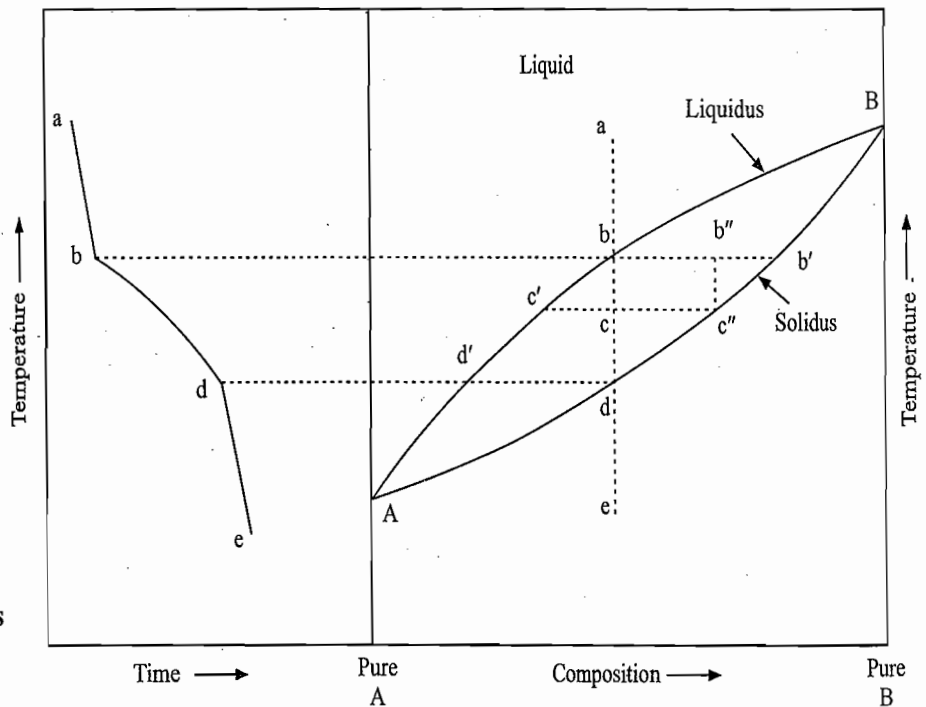


Fig. 6.8.1 Phase diagram for a system exhibiting continuous series of solid solutions with no maximum or minimum

Cooling Behaviour of a Liquid System

The labelling of the phase diagram shown in Fig. 6.8.1 can be easily understood by first considering the expected cooling behaviour of the liquid solution represented by the point a. On cooling, the state of the overall system will move vertically downward along the isopleth abcde. The system remains in the liquid phase till the point b is reached where the first crystal of solid solution b' starts appearing. The point b' can be obtained by drawing a tie line from the point b. Since the obtained solid solution is more rich in B as compared to the liquid phase, the latter becomes less rich in B and thus its composition point moves towards the A-axis. If the crystallization of solid solution is to be continued, the temperature of the liquid phase has to be decreased so that its state point moves on the line bc'd'A. For example, if the system has been cooled

13)
14)
15)
16)
the
are
 T_1^*
ting
tem
lies
lie



up to the overall state point c , the system now consists of solid solution c'' in equilibrium with liquid solution c' . The points c' and c'' are obtained by drawing a tie line from the point c . The relative amounts of solid solution c'' and liquid solution c' at c can be obtained by making use of the lever rule.

During the cooling of the system from b to d , the relative length of the segment of tie line lying to the left of bcd increases indicating that the relative amounts of the two solutions change in favour of solid solution, i.e. more and more of solid solution solidifies during the cooling process. When the system has been cooled to the point d , the last trace of liquid solution d' remains to be solidified and thus represents the point where practically whole of liquid phase is solidified to produce solid solution d whose composition is the same as that of starting liquid solution (i.e. point a). Further cooling from d to e , merely decreases the temperature of solid solution.

Conclusion

From the above analysis, the following conclusions can be drawn.

A point within the area $AbBdA$ represents a solid solution in equilibrium with a liquid solution. Their compositions are given by the intersection points of the tie line (horizontal line) drawn from the given point with those of solidus (AdB) and liquidus (AbB) curves, respectively. The relative amounts of the two are given by the lever rule. On gradually cooling, the composition of liquid solution moves along BbA and that of solid solution along the curve BdA .

Labelling of the Phase Diagram

Table 6.8.1 describes, in brief, the phase diagram shown in Fig. 6.8.1.

Table 6.8.1 Description of the Phase Diagram shown in Fig. 6.8.1

Location of the system	Status of the system
A	Freezing point of A
B	Freezing point of B
Curve AbB	Freezing point curve of solid solution
Curve AdB	Fusion point curve of solid solution
Area above AbB	Liquid
Area below AdB	Solid solution
Area $AbBdA$	A point within this area represents a solid solution (whose composition lies on the curve AdB) in equilibrium with a liquid solution (whose composition lies on the curve AbB).

Fractional Crystallization

Since the present system has phase diagram very similar to that of liquid-vapour system exhibiting ideality or little deviations from ideality, the two components can be separated from each other following the method of *fractional crystallization*—a method very similar to the fractional distillation employed in the liquid-vapour system. This method involves alternative cooling and heating repeatedly which results in the preferential separation of the two constituents—the solid carries more of the component of higher freezing point and the liquid carries lesser of this constituent (or larger of the other constituent of lesser freezing

Zone Refining

point). Finally, we can collect the pure component of larger freezing point in the solid form and the component of lesser freezing point in the liquid form.

The technique of zone refining is based on the principle of fractional crystallization. It is employed to remove impurities from a given substance. The end products obtained in fractional crystallization have been described above. The principle of fractional crystallization may be outlined again in order to facilitate the description of the technique of zone refining.

Principle Consider a solid solution of composition e as shown in Fig. 6.8.1. Let it be heated to the point c . At this point, the system consists of two phases, liquid solution c' and solid solution c'' in equilibrium with each other. Let the two phases be separated and the solid solution c'' be heated separately to the point b'' . Again we get two phases, a liquid solution b and a solid solution b' . Again let the two phases be separated and the solid phase be heated separately and so on. Ultimately, we will get the solid phase consisting of pure B. The liquid solutions at different stages may be mixed together, solidified and subjected to the same sequence of steps as discussed above. At each stage, the preferential separation of the two constituents takes place, solid carries more of the constituent of higher freezing point and the liquid carries lesser of this constituent (or more of the other constituent of lesser freezing point). Carrying the above process repeatedly will result into the separation of the two constituents—the constituent of higher freezing point in the solid phase and that of lesser freezing point in the liquid phase.

Process Now the process of zone refining may be described. The substance to be purified is taken in the form of a narrow cylinder and is heated in a narrow, disc-like zone which is swept from one end of the sample to the other (Fig. 6.8.2).

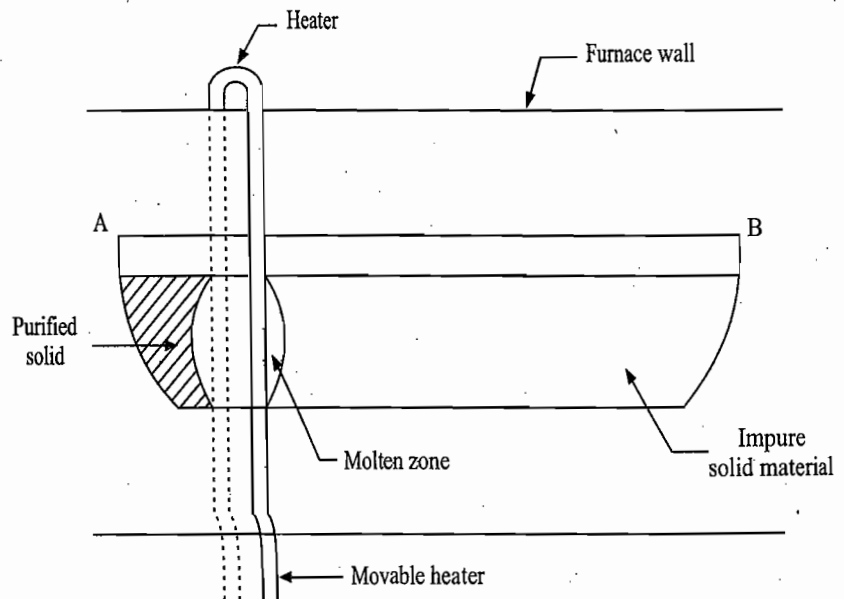


Fig. 6.8.2 Schematic representation of a zone refining apparatus

Immediately in front of the heater, the solid melts forming a liquid zone which carries more of impurity provided it has a lower melting point. As the heater moves forward this liquid zone also moves forward and immediately at the back of the heater, we get a solid which carries lesser of impurity. The liquid

zone as it moves forward becomes more and more enriched in the impurity as it is preferentially partitioned into the liquid phase. One pass of the heater from one end of the substance to the other may have the effect of reducing the impurity content only slightly. In order to get rid of more and more of impurity, the heater is passed repeatedly from one end to the other.

Examples

Substances of similar constitution or closely related elements usually form solid solutions of the the type discussed above. A few examples are: Co-Ni, Au-Ag, Au-Pt, AgCl-NaCl, PbCl₂-PbBr₂, and naphthalene-β-naphthol.

Example 6.8.1

The following data were observed for Si-Ge system:

% Si (by mass)	0	10	25	40	45	62	75	80	90	100
(θ _c /°C) at which first solid appears	940	1062	1160	1235	1252	1310	1350	1370	1395	1412
(θ _c /°C) at which complete solidification occurs	940	697	1010	1070	1090	1170	1245	1275	1340	1412

- (a) Plot the phase diagram and indicate the phases present in each region.
- (b) What is composition of the phases present when the solid mixture containing 50 mass % Si is heated at 1 200 °C.
- (c) Explain, how you would attain a pure Si from a solid mixture containing 70 mass % Si.

Solution

- (a) The phase diagram plotted from the given data is shown in Fig. 6.8.3. The present system of Si-Ge will form a complete series of solid solutions.
- (b) The phases present in equilibrium with each other when the solid mixture containing 50 mass % Si is heated to 1200 °C are:
 Liquid solution containing 32.5 mass % Si
 Solid solution containing 70 mass % Si.
- (c) Pure Si can be obtained by the method of fractional crystallization. The residue will finally consist of pure Si.

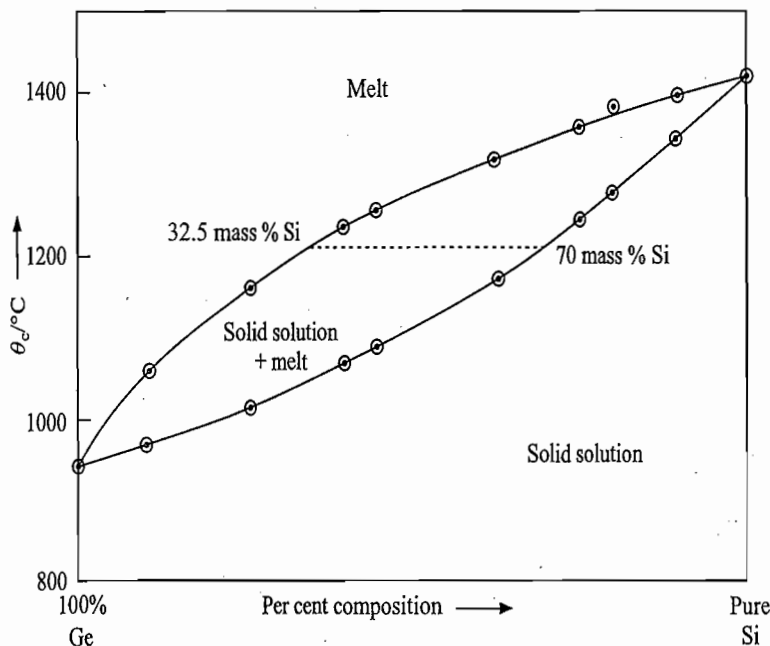


Fig. 6.8.3 Required phase diagram

Depi
Phas

Fig. 6.1
diagram
exhibit
series
with a
point

Labell
Phase

MINIMUM TYPE SOLID SOLUTION

Depiction of the Phase Diagram

Systems with these characteristics have phase diagram as shown in Fig. 6.8.4.

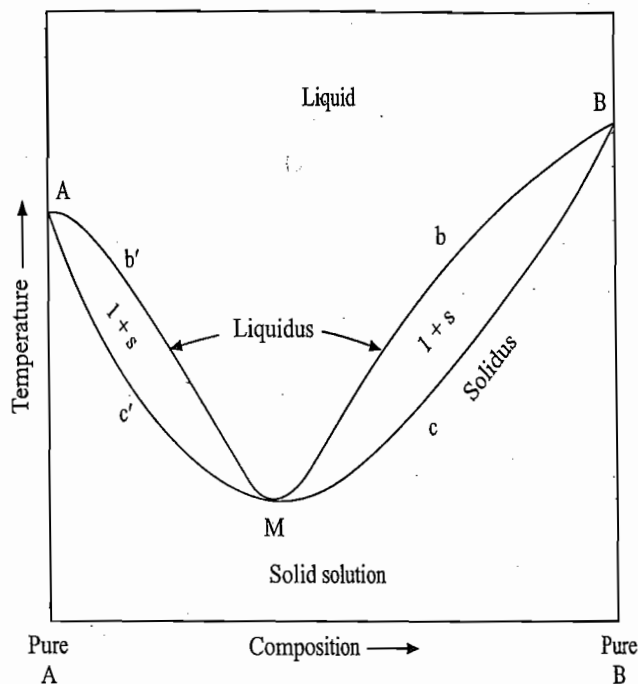


Fig. 6.8.4 Phase diagram of a system exhibiting continuous series of solid solutions with a minimum freezing point

Labelling of the Phase Diagram

The labelling of Fig. 6.8.4 is shown in Table 6.8.2.

Table 6.8.2 Description of the Phase Diagram shown in Fig. 6.8.4

Location of the system	Status of the system
A	Freezing point of A
B	Freezing point of B
M	Minimum freezing point of the liquid solution. Here, the composition of liquid and solid solutions are identical. The system here is nonvariant. Thus freezing or fusion takes place at constant temperature. This is exhibited by the arrest of temperature in the cooling curve
Area above Ab'MbB	Liquid
Area below Ac'McB	Solid solution
Area Ab'Mc'A	Solid solution (composition lies on Ac'M) in equilibrium with liquid solution (composition lies on Ab'M)
Area BbMcB	Solid solution (composition lies on BcM) in equilibrium with liquid solution (composition lies on BbM)

impurity as
water from
using the
impurity,

form solid
i, Au-Ag,

90 100
95 1412

40 1412

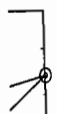
ng 50 mass

70 mass %

The present

: containing

residue will



Pure
Si

Comment on the Phase Diagram

Phase diagram of this system is similar to that of the liquid-vapour system exhibiting positive deviation from ideality (Fig. 4.16.1) and thus has characteristics resembling those of the liquid-vapour system. Depending on the composition, the fractional crystallization of this system will yield either pure A or pure B as a solid phase (to the left to point M, pure A and to the right of M, pure B) and a liquid of composition corresponding to the minimum freezing point M.

Examples

Table 6.8.3 includes a few examples of a system exhibiting minimum type solid solution.

Table 6.8.3 Systems Exhibiting Continuous Series of Solid Solutions with a Minimum Freezing Point

System		Minimum point M			
		Temperature		Composition	
A	<i>m.pt.</i> °C	B	<i>m.pt.</i> °C	°C	% B
Cu		Mn			
Mn		Ni			
Co		Mn			
HgBr ₂		HgI ₂			
KCl	781	AgCl	748	716	60 mol % B
<i>p</i> -dichloro- benzene	52.8	<i>p</i> -chloro- iodobenzene	53	41	50 mol % B
Chloro- benzene	-44	iodobenzene	-29	-51.3	39.02 mass % B
Stilbene	123.5	Hydrazo- benzene	130.5	93	52.26 mass % B
Dibenzyl	52.5	Hydrazo- benzene	130.5	45.9	13.8 mass % B

In most cases, the two members of a system are found to have the same crystal structure (isostructural or isomorphous). Thus, in each of the solid solution-liquid fields shown in Fig. 6.8.4, it is the same solid phase that coexists with liquid. Besides, as indicated above, both the solidus and liquids curves are continuous, which meet each other only at a single point.

MAXIMUM TYPE SOLID SOLUTION**Depiction of the Phase Diagram**

In this case, the addition of one component into another elevates the freezing point of the latter and thus the phase diagram has an appearance as shown in Fig. 6.8.5. Description of the diagram is straightforward and is not given here.

Comment on the Phase Diagram

The phase diagram shown in Fig. 6.8.5 resembles that of a liquid-vapour system exhibiting negative deviation from ideality (Fig. 4.16.2) and thus has characteristics similar to those of a liquid-vapour system. Depending on the initial composition, the fractional crystallization will yield either pure A or pure B in the liquid phase (to the left of point M, pure A and to the right of point M pure B) and a solid phase of composition corresponding to the maximum freezing point M.

Fig. 6.8.
diagram
exhibitin
series of
with a n
Examp

Slope c
Curve a
Temper

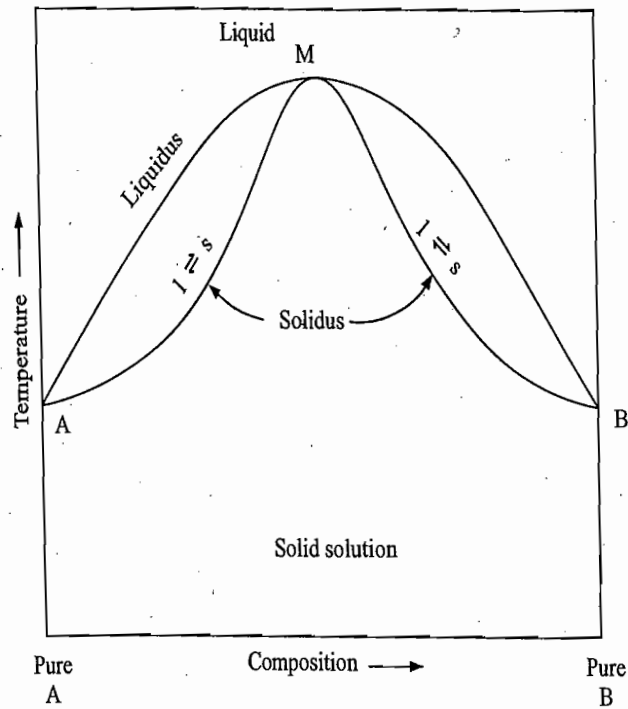


Fig. 6.8.5 Phase diagram for a system exhibiting continuous series of solid solutions with a maximum

Examples

Very few examples of systems yielding a continuous solid solutions and having a freezing-point curve with a maximum are known. A few examples are *d*- and *l*-monobornyl esters of malonic acid.

The two constituents are the *d*- and *l*-forms of the same optically active compound. Since both of them have the same melting point, the phase diagrams are symmetrical with the maximum at a midway point. It has been suggested that the maximum may represent a racemic compound.

Slope of T versus x Curve at Azeotropic Temperature

For a binary mixture, Gibbs-Duhem equation is

$$S dT - V dp + n_A d\mu_A + n_B d\mu_B = 0 \tag{6.8.19}$$

For a unit amount of mixture, we have

$$S_m dT - V_m dp + x_A d\mu_A + x_B d\mu_B = 0 \tag{6.8.20}$$

Using the expression $\mu = \mu^* + RT \ln a$ (where *a* is activity), Eq. (6.8.20) may be written as

$$S_m dT - V_m dp + RT [x_A d \ln a_A + x_B d \ln a_B] \tag{6.8.21}$$

For a system of two binary solutions in equilibrium, Eq. (6.8.21) holds good separately for both the solutions. Hence, we write

$$S_m^{(\alpha)} dT - V_m^{(\alpha)} dp + RT [x_{A(\alpha)} d \ln a_A + x_{B(\alpha)} d \ln a_B] = 0 \tag{6.8.22}$$

$$S_m^{(\beta)} dT - V_m^{(\beta)} dp + RT [x_{A(\beta)} d \ln a_A + x_{B(\beta)} d \ln a_B] = 0 \tag{6.8.23}$$

Note that the chemical potential and thus activity of A (as well as those of B) in both the solutions will have the same value as the component A is in equilibrium between the two solutions.

our system
 aracteristics
 osition, the
 B as a solid
 l a liquid of

 n type solid

 as with

 int M

 omposition

) mol % B
) mol % B

 9.02 mass
 % B
 2.26 mass
 % B
 13.8 mass
 % B

 ve the same
 lid solution-
 oexists with
 curves are

 eezing point
 n Fig. 6.8.5.
 e.

 pour system
 aracteristics
 omposition,
 liquid phase
 a solid phase

Subtraction of Eq. (6.8.23) from Eq. (6.8.22) gives

$$\Delta_{\text{trs}} S_m dT - \Delta_{\text{trs}} V_m dp + RT [x_{A(\alpha)} - x_{A(\beta)}] d \ln a_A + RT [x_{B(\alpha)} - x_{B(\beta)}] d \ln a_B = 0 \quad (6.8.24)$$

where $\Delta_{\text{trs}} S_m = S_m^{(\alpha)} - S_m^{(\beta)}$ and $\Delta_{\text{trs}} V_m = V_m^{(\alpha)} - V_m^{(\beta)}$

Since the solutions are at equilibrium at temperature T , we will have

$$\Delta_{\text{trs}} S_m = \frac{\Delta_{\text{trs}} H_m}{T}$$

With this, Eq. (6.8.24) may be written as

$$\frac{\Delta_{\text{trs}} H_m}{RT^2} dT - \frac{\Delta_{\text{trs}} V_m}{RT} dp + [x_{A(\alpha)} - x_{A(\beta)}] d \ln a_A + [x_{B(\alpha)} - x_{B(\beta)}] d \ln a_B = 0 \quad (6.8.25)$$

At azeotropic temperature

$$x_{A(\alpha)} = x_{A(\beta)} \quad \text{and} \quad x_{B(\alpha)} = x_{B(\beta)}$$

With these, Eq. (6.8.25) become

$$\frac{\Delta_{\text{trs}} H_m}{RT^2} dT - \frac{\Delta_{\text{trs}} V_m}{RT} dp = 0 \quad (6.8.26)$$

From Eq. (6.8.26) it follows that

$$\left(\frac{\partial T}{\partial x_B} \right)_p = 0 \quad \text{and} \quad \left(\frac{\partial p}{\partial x_B} \right)_T = 0$$

Thus, the slope of T versus x_B curves in Figs (6.8.4) and (6.8.5) will have zero slope at the point M.

6.9 FORMATION OF PARTIAL MISCIBILITY IN THE SOLID STATE LEADING TO STABLE SOLID SOLUTIONS

Depiction of the Phase Diagram

In some cases, solids are miscible with each other in limited range of concentrations. Outside this range, they form two solid solutions in equilibrium with each other. These are saturated solutions of A in B and B in A. This phenomenon is quite analogous to that of the partially miscible liquids and thus the phase diagram of the present system has an appearance similar to that of Fig. 4.18.8. This diagram can be relabelled by writing liquid and solid in places of vapour and liquid, respectively (Fig. 6.9.1).

This type of diagram is observed only when $K_{B \text{ in } A} < 1$ and $K_{A \text{ in } B} < 1$, i.e. the freezing point of A (or B) is lowered when B (or A) is added to it.

Construction of the Phase Diagram

- From the cooling curves of pure components, the points A and B representing respectively the freezing temperatures of A and B are obtained.
- From the cooling curves I and II of two systems of B in A, the points a and b indicating respectively the start of freezing of solid solution of B in A (hereafter referred to as S_1) and a' and b' indicating respectively the end of solidification of S_1 are obtained.
- From the cooling curve III, the point c representing the start of freezing of solid solution S_1 is obtained.

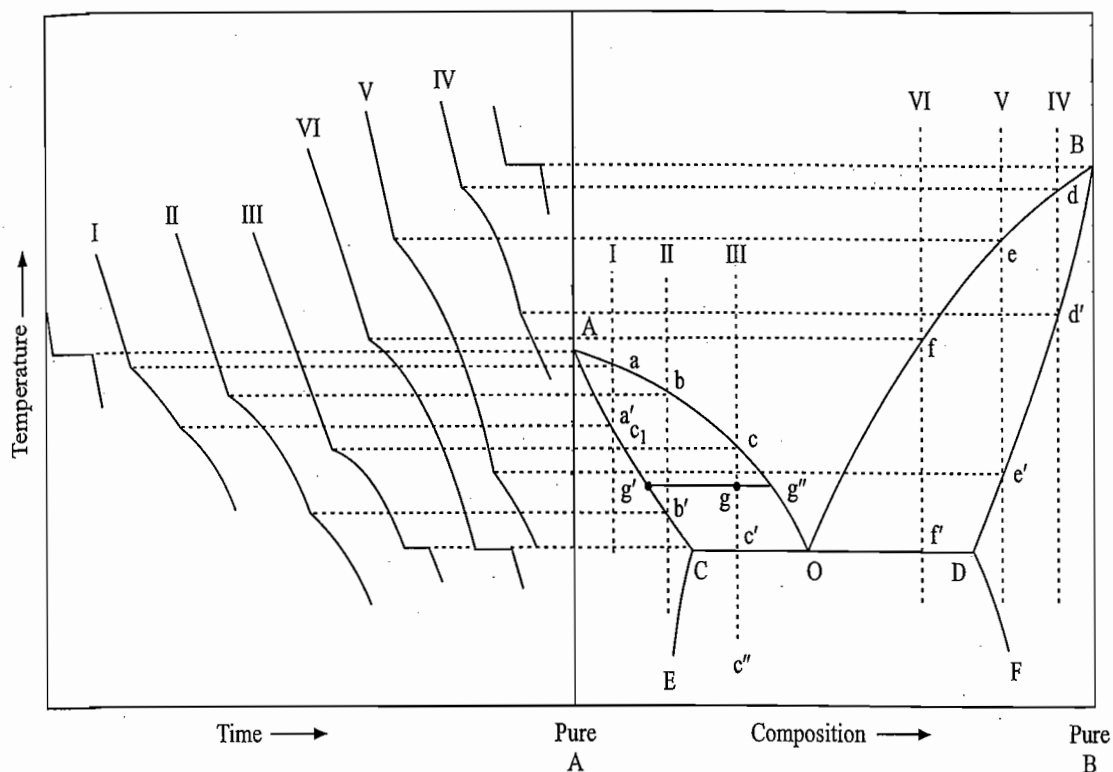


Fig. 6.9.1 Phase diagram exhibiting partial miscibility in the solid state with the eutectic point

- If a line passing through A, a, b and c is drawn, we get the freezing point curve Aabc of solid solution S_1 . Similarly, if a line passing through A, a' and b' is drawn, we get the fusion point curve of solid solution S_1 .
- From the cooling curves IV and V of two systems of A in B, the points d and e indicating respectively the start of freezing of solid solution of A in B (hereafter referred to as S_2) and d' and e' indicating respectively the end of solidification of S_2 are obtained.
- From the cooling curve VI, the point f representing the start of freezing of solid solution S_2 is obtained.
- If a line passing through B, d, e and f is drawn, we get the freezing point curve Bdef of solid solution S_2 . Similarly, if a line passing through B, d' and e' is drawn, we get the fusion point curve Bd'e' of solid solution S_2 .
- Along the line Aabc, liquid solution is in equilibrium with solid solution S_1 whose composition lies on the line Aa'b'. For a given point on Aabc, the composition of solid solution in equilibrium is represented by the intersection point of the tie line (horizontal line) drawn from the given point with the line Aa'b'. Similarly, the lines Bdef and Bd'e', respectively, describe the compositions of liquid solution and solid solution S_2 in equilibrium with each other.
- If the lines Aabc and Bdef are extended they meet at the point O. Here both solid solutions S_1 and S_2 will be in equilibrium with liquid phase O. The compositions of S_1 and S_2 can be obtained by extending the lines Aa'b' and Bd'e' up to the points where they meet the tie line (horizontal line) drawn from the point O. Thus, the points C and D shown in Fig. 6.9.1 represent the two solid solutions S_1 and S_2 in equilibrium with liquid O.

- A system on the line COD contains three phases in equilibrium and, according to the phase rule, is an invariant system. Hence, the temperature corresponding to the line COD will have a fixed value. Moreover, solidification of solid solutions S_1 and S_2 from the liquid O occurs isothermally. Consequently, the cooling curves III and VI exhibit arrest of temperature at points c' and f' , respectively. The overall composition of solid phase (i.e. total amount of S_1 and S_2) separated on the line COD is the same as that of liquid phase, vis-à-vis, the composition of liquid phase remains unchanged.
- When the solidification of liquid O is complete, the system contains two solid solutions C and D in equilibrium with each other. According to the phase rule, the system becomes univariant ($F = C + 1 - P = 2 + 1 - 2 = 1$). Consequently, the system will exhibit cooling during which the compositions of solid solutions S_1 and S_2 change along the lines CE and DF, respectively.

Effect produced on Cooling a System

The labelling of the phase diagram can be done easily with the help of the above discussions. However, to make it more understandable, it is worth considering the sequence of effects that is produced during the cooling of the system III.

- Up to the point c, the system remains in the liquid phase.
- At c, the solid solution corresponding to the point c_1 starts precipitating. Since the solid solution c_1 is rich in A as compared to the liquid phase c, the composition of the latter moves towards B axis. If the crystallization of S_1 is to be continued, the temperature of the liquid phase has to be lowered so that its composition moves on the line cO. Thus, on cooling the system from c to c' , the composition of liquid phase moves along cO whereas that of solid phase along c_1C . The relative amounts of solid and liquid solutions at any stage of cooling can be determined with the help of the lever rule. For example, if the system is cooled up to the point g, then we have

$$\frac{\text{Amount of solid solution } g'}{\text{Amount of liquid solution } g''} = \frac{gg''}{gg'}$$

- When the system is cooled up to the point c' , the solid solution C is in equilibrium with liquid O. The relative amounts of the two solutions are given by

$$\frac{\text{Amount of solid solution C}}{\text{Amount of liquid solution O}} = \frac{Oc'}{c'C}$$

If the cooling is continued, both S_1 and S_2 are separated isothermally from the liquid O. Since now solid contains both S_1 and S_2 , the point representing solid phases moves from C towards c' as more and more solid solutions are solidified. When this point is reached at c' , whole of liquid solution is solidified.

- From c' to c'' , only cooling of solid solutions S_1 and S_2 takes place. The composition of the former moves along CE whereas that of the latter moves along DF.

Labelling of the Phase Diagram

Table 6.9.1 describes the labelling of Fig. 6.9.1

Cool

Table 6.9.1 Labelling of the Diagram shown in the Fig. 6.9.1

Location of the system	Status of the system
A	Freezing point of A
B	Freezing point of B
AO	Freezing point curve of solid solution S_1
AC	Fusion point curve of solid solution S_1
BO	Freezing point curve of solid solution S_2
BD	Fusion point curve of solid solution S_2
O	Eutectic point where solid solutions S_1 and S_2 represented by C and D, respectively, are in equilibrium with the liquid O.
CE and DF	Compositions of the two conjugate solid solutions S_1 and S_2
Area to the left of ACE	Solid solution S_1
Area to the right of BDF	Solid solution S_2
Area AOCA	A point in this area represents a solid solution S_1 in equilibrium with a liquid phase; composition of the former lies on the line AC, whereas that of the latter on the line AO. These compositions can be determined by drawing a tie line from the given point.
Area BODB	A point in this area represents a solid solution S_2 in equilibrium with a liquid phase; composition of the former lies on the line BD whereas that of the latter on the line BO.
Area within the lines CE and DF	A point within this area represents two conjugate solutions S_1 and S_2 in equilibrium with each other. The compositions of these two solutions are given by the two intersection points of the tie line drawn from the given point with the lines CE and DF, respectively.
Area above AOB	Liquid

Cooling Patterns

The nature of the cooling curve will depend on the composition of the system. The following are a few typical patterns.

(i) *Composition anywhere between AC (or BD):*

Rapid cooling of liquid → Break at the appearance of solid solution → Slower cooling; solidification continues
 ↓
 Cooling of solid solution ← Break; solidification completes

(ii) *Composition anywhere between CO (or DO):*

Rapid cooling of liquid → Break at the appearance of solid solution → Slower cooling; solidification continues
 ↓
 Cooling of the two conjugate solutions ← Horizontal portion at eutectic point

(iii) *Eutectic composition:*

Rapid cooling of liquid → Horizontal portion at eutectic point → Cooling of the two conjugate solid solutions

These cooling patterns are shown in Fig. 6.9.1

Fractional Crystallization

Results of fractional crystallization are also very similar to those of fractional distillation of the liquid-vapour system showing partial miscibility in the liquid phase. We give below the end products that are obtained in fractional crystallization of the present system.

(i) *When the original composition of the system lies to the left of the eutectic point O:*

Solid phase—pure A,
and liquid phase—a liquid of eutectic composition.

(ii) *When the original composition of the system lies to the right of the eutectic point O:*

Solid phase—pure B,
and liquid phase—a liquid of eutectic composition.

(iii) *When the original composition of the system is the eutectic composition:*
In this case, no fractional crystallization is possible as the melt has the same composition as that of the solid phase.

Examples

A few examples of system exhibiting the phase diagram of Fig. 6.9.1 are given below: Au-Ni, Bi-Pb, Cd-Sn, Fe-Cr, naphthalene-monochloroacetic acid, azobenzene-azoxybenzene, and dibenzyl and benzylphenate.

Theoretical Aspects of Fig. 6.9.1

Phase diagram of Fig. 6.9.1, in fact, lies between those for components which are completely miscible in the solid state with the minimum freezing point and those which form completely immiscible mixture in the solid phase. If the solids in Fig. 6.9.1 are assumed to become more and more miscible, points C and D will eventually coincide and the phase diagram will resemble Fig. 6.8.4—a phase diagram in which solid solution with a minimum freezing point is formed. On the other hand, if the two solids become less miscible, points C and D will recede from each other and eventually lie on the axes of pure A and pure B, respectively, and the phase diagram will resemble Fig. 6.4.1, which represents the separation of solid mixture.

Limited solid-phase solubility may result because of the contamination of each of the two members of a binary system by the other. If we assume that the two members A and B have different crystal structures, then if B contaminates A, the atoms of B in A conform to the crystal structure of A. Conversely, if A contaminates B, the atoms of A in B conform to the crystal structure of B. As mentioned above, if the contaminations are vanishingly small, phase diagram of the system will have the major characteristics of a simple eutectic system. If the two substances exhibit considerable solid solubility in each other, then the liquidus and solidus of A and B regions acquire the appearances of descending solid solutions of A in B, and B in A, respectively. Since the crystal structures of the two members are identical in the solid solution region, it is expected that the contaminated phase in this region is present in the metastable form whose crystal structure is identical with that of the primary phase. Thus, the entire phase diagram of Fig. 6.9.1 may be visualized to be formed as a result of two intersecting descending diagram as shown in Fig. 6.9.2.

Fig. 6.9
extensi-
and sol
system
solubili
temper.

6.10

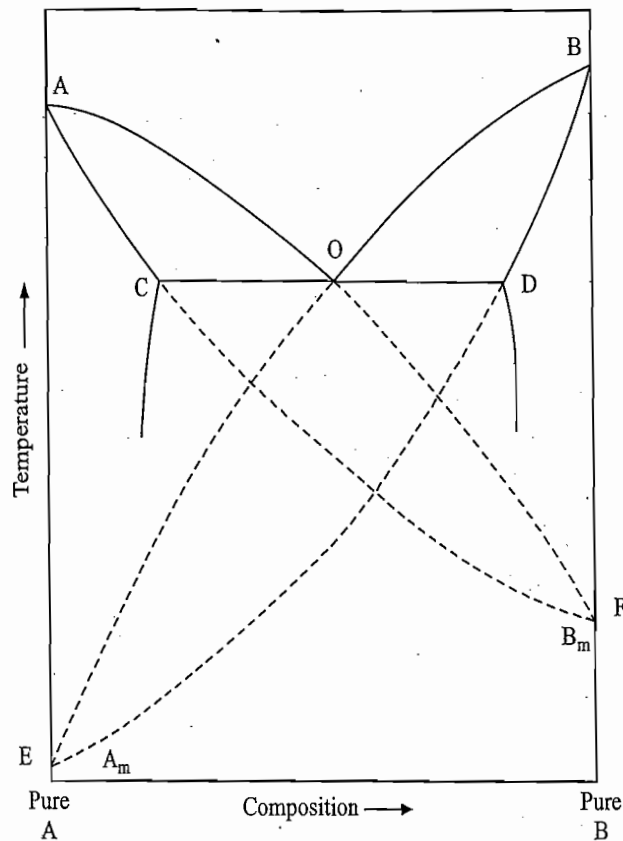
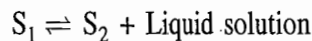


Fig. 6.9.2 Metastable extensions of the liquids and solidus curves of a system exhibiting limited solubility with eutectic temperature

To be specific, let the crystal structures of A and B be α and β , respectively. The solid solution in the regions ACE and ACO of Fig. 6.9.1 has α -structure of primary phase A. The component B in this solid solution has the metastable α -structure whose metastable melting point is represented by the point F in Fig. 6.9.2. Thus the region CAO may be considered to be a portion of complete descending solid solution diagram AOFCA. Similarly, the regions BOD and BDF of Fig. 6.9.1 have a solid solution of β -structure and is formed as a result of stable β -structure of B and metastable β -structure of A. The metastable melting point of the latter is shown by the point E in Fig. 6.9.2. Hence the region OBD may be considered to be a portion of complete descending solid solution diagram BOEDB. From Fig. 6.9.2, it is obvious that a system will exhibit the phase diagram of Fig. 6.9.1 only when the metastable melting points E and F lie below the stable melting points A and B, respectively.

6.10 FORMATION OF PARTIAL MISCIBILITY IN THE SOLID PHASE LEADING TO SOLID SOLUTIONS STABLE UP TO A TRANSITION TEMPERATURE

Instead of exhibiting an eutectic, two solid solutions may undergo a peritectic reaction of the type



The above reaction takes place at a constant temperature since the system with three phases in equilibrium is an invariant system.

The phase diagram exhibiting the above peritectic reaction has an appearance as shown in Fig. 6.10.1. This type of diagram is observed only when $K_{B \text{ in } A} > 1$

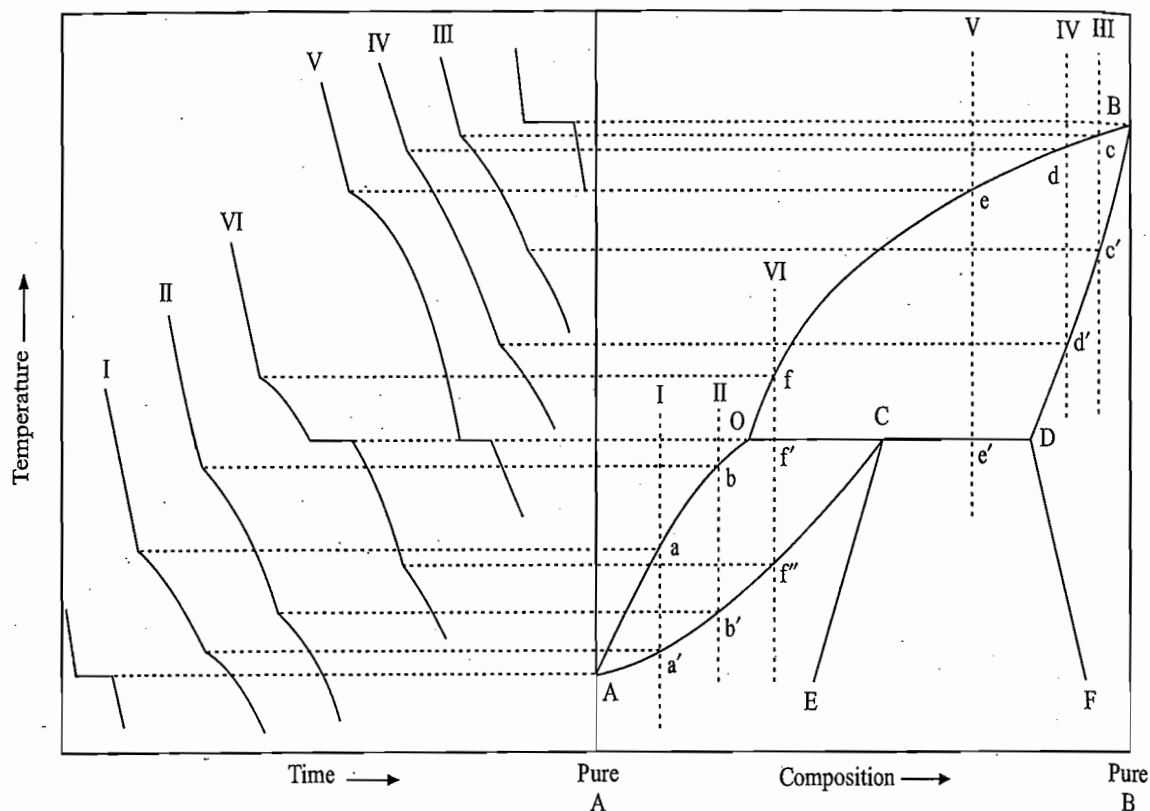


Fig. 6.10.1 Phase diagram exhibiting partial miscibility in the solid state with a peritectic transition

and $K_{A \text{ in } B} < 1$, i.e., the freezing point A is elevated when B is added to it and that of B is lowered when A is added to it (or vice versa).

Construction of the Phase Diagram

- From the cooling curves of pure components, the points A and B representing respectively the freezing temperatures of components A and B are obtained.
- From the cooling curves I and II of two systems of B in A, the points a and b representing respectively the start of freezing of solid solution S_1 and the points a' and b' representing respectively the end of freezing of solid solution S_1 are obtained.
- If a line passing through the points A, a and b is drawn, we get the freezing point curve Aab of solid solution S_1 . Similarly, if a line passing through the points A, a' and b' is drawn, we get the fusion point curve Aa'b' of solid solution S_1 .
- From the cooling curves III and IV of two liquid systems of A and B, the points c and d representing respectively the start of freezing of solid solution S_2 and the points c' and d' representing respectively the end of freezing of solid solution S_2 are obtained.
- From the cooling curves V and VI of two systems of A and B, the points e and f representing respectively the start of freezing of solid solution S_2 are obtained.
- If a line passing through the point B, c, d, e and f is drawn, we get the freezing point curve Bcdef of solid solution S_2 . Similarly, if a line passing through the points B, c' and d' is drawn, we get the fusion point curve Bc'd' of solid solution S_2 .

- Since the equilibrium

Solid solution S_1 (on $Aa'b'$) \rightleftharpoons liquid solution (on Aab)

exists at lower temperatures whereas the equilibrium

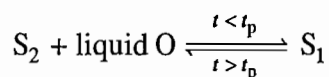
Solid solution S_2 (on $Bc'd'$) \rightleftharpoons liquid solution (on Bcd)

exists at higher temperatures, the peritectic reaction

$S_1 + \text{solution} \rightleftharpoons S_2 + \text{solution}$

will take place at a temperature (peritectic) which will lie in between the freezing temperatures of pure components A and B. The composition of the associated liquid phase will have a fixed value since the peritectic reaction involves three phases in equilibrium ($F = C + 1 - P = 2 + 1 - 3 = 0$).

- Since the curves Aab and $Bcdef$ describe respectively the start of freezing of solid solutions S_1 and S_2 , these two curves on extending will meet at point O which describes the composition of the liquid phase in equilibrium with solid solutions S_1 and S_2 . The compositions of two solid solutions will be given by the intersection points C and D of the tie line drawn from the point O with the extensions of the fusion point curves $Aa'b'$ and $Bc'd'$, respectively. Thus, a point on the line OCD represents a system where solid solution S_1 of composition C , solid solutions S_2 of composition D and liquid solution of composition O exist together in equilibrium with one another.
- Since a system on the line OCD has three phases in equilibrium, it will be invariant. Thus, so long three phases remain in equilibrium, the temperature of the system will remain constant. Thus, the cooling curves V and VI will exhibit a complete arrest of temperature at the points e' and f' , respectively.
- The point C on the line OCD represents solid solution S_1 in equilibrium with liquid O . If this system is heated gradually, more and more of this solid solution is converted isothermally into solid solution S_2 and liquid solution O . Thus, at a temperature greater than the peritectic temperature the system will consist of a solid solution S_2 in equilibrium with a liquid solution. In fact, a system anywhere on the line OCD on heating will yield a system of solid solution S_2 (whose composition lies on the curve BD) in equilibrium with a liquid solution (whose composition lies on the curve BO).
- The state of the system at a temperature below the peritectic temperature depends upon the overall composition of the system. We will have either solid solutions S_1 in equilibrium with solid solution S_2 or solid solution S_1 in equilibrium with a liquid solution. This can be explained on the basis of the peritectic reaction:



The reaction between S_2 and liquid O proceeds isothermally to form the solid solution S_1 until either all the solid solution S_2 or all the liquid O has been consumed. We have

- (i) If solid solution S_2 is present in excess amount than the requisite quantity that is required for the formation of the solid solution S_1 with whole of liquid O, then solid solution S_2 will remain in excess and hence the system will possess this excess quantity of S_2 and the solid solution S_1 . This happens when the point representing $S_2 \rightleftharpoons$ solution lies in between the points C and D. Thus, a system below the line CD represents solid solution S_1 in equilibrium with solid solution S_2 .
- (ii) If solid solution S_2 is present in deficient amount than the requisite quantity that is required for the formation of S_1 with whole of the liquid O; then whole of solid solution S_2 will disappear and the system will possess the excess quantity of liquid phase and the solid solution S_1 . This happens when the point representing $S_2 \rightleftharpoons$ solution lies in between the points O and C. Thus, the system below the line OC represents solid solution S_1 (whose composition lies on the line CA) in equilibrium with liquid phase (whose composition lies on the line OA).

Labelling of the Phase Diagram

With the help of above analysis, the labelling of the phase diagram can be easily done and is described in Table 6.10.1.

Table 6.10.1 Labelling of the Phase Diagram shown in Fig. 6.10.1

<i>Location of the system</i>	<i>Status of system</i>
A	Freezing point of A
B	Freezing point of B
AO	Freezing point curve of solid solution S_1
AC	Fusion point curve of solid solution S_1
BO	Freezing point curve of solid solution S_2
BD	Fusion point curve of solid solution S_2
O	Composition of liquid phase at the peritectic temperature
OCD	A system on this line represents a solid solution S_1 of composition C, a solid solution S_2 of composition D, and a liquid solution O in equilibrium with one another
CE and DF	Compositions of two conjugate solutions S_1 and S_2
Area AOCA	A point in this area represents a solid solution S_1 (whose composition lies on the line AC) in equilibrium with a liquid phase (whose composition lies on the line AO)
Area BODB	A point in this area represents a solid solution S_2 (whose composition lies on the line BD) in equilibrium with a liquid phase (whose composition lies on the line BO)
Area within the lines EC, CD and DF	A point in this area represents a solid solution S_1 (whose composition lies on the line EC) in equilibrium with a solid solution S_2 (whose composition lies on the line DF)
Area within the lines AC and CE	Solid solution S_1
Area to the right of BDF	Solid solution S_2
Area above the curve AOB	Liquid

Cooling Patterns

The nature of cooling curve will depend upon the composition of the system. A few typical cases shown in Fig. 6.10.1 are described below.

- (i) *Composition anywhere between A and O*
- | | | |
|-------------------------|---|--|
| Rapid cooling of liquid | → Break; appearance of solid solution S_1 | → Slower cooling; solidification continues |
| | Cooling of solid solution S_1 | ↓ Break; solidification completes |
- (ii) *Composition anywhere between O and C*
- | | | |
|---|---|--|
| Rapid cooling of liquid | → Break; appearance of solid solution S_2 | → Slower cooling; solidification continues |
| Break solidification completes | ← Slower cooling; solidification of S_1 continues | ↓ Horizontal portion; transformation of solid solution S_2 to solid solution S_1 |
| Smooth cooling; cooling of solid solution S_1 | → Break if second solid solution appears | → Slower cooling of two solid solutions |
- (iii) *Composition anywhere between C and D*
- | | | |
|-------------------------|--|---|
| Rapid cooling of liquid | → Break appearance of solid solution S_2 | → Slower cooling; solidification continues |
| | Slower cooling of two solid solutions | ↓ Horizontal portion; appearance of two solid solutions |
- (iv) *Composition anywhere between D and B*
- | | | |
|---|---|--|
| Rapid cooling of liquid | → Break; appearance of solid solution S_2 | → Slower cooling; solidification continues |
| Break; if second solid solution appears | ← Slower cooling of solid solution S_2 | ↓ Break; solidification completes |
| Cooling of two solid solutions | | |

Examples

A few examples of system exhibiting partial miscibility in the solid state with a peritectic transition are given below.

AgCl–LiCl, AgNO₃–NaNO₃, Co–Fe and *p*-iodochlorobenzene-*p*-diiodobenzene.

Theoretical Aspects of Fig. 6.10.1

Limited solid-phase solubility with a peritectic temperature is observed when the metastable melting point of one of the components (e.g., B_m) lies above the melting point of other stable component (e.g., A) so that the two ascending solid solution diagrams ascend in the same direction (Fig. 6.10.2)

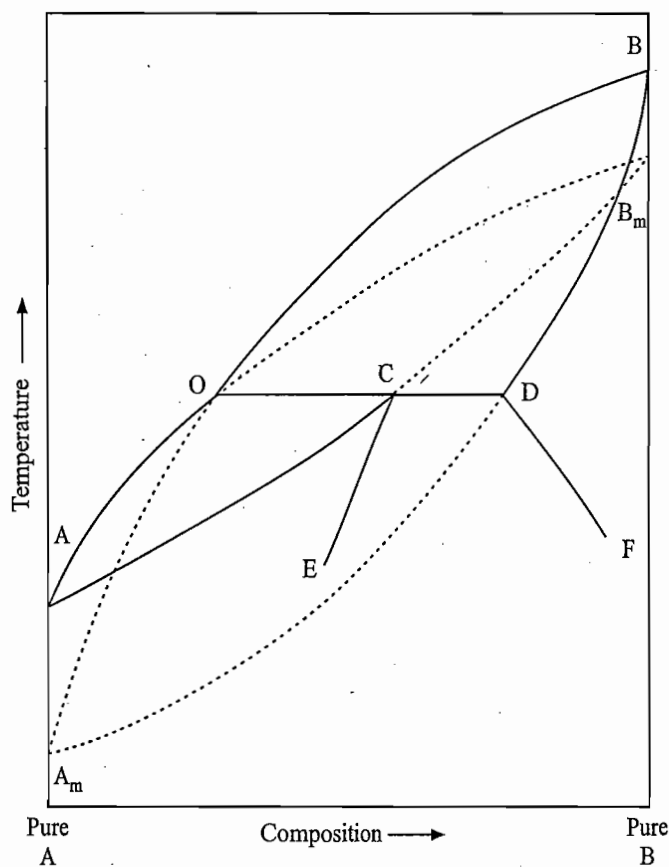


Fig. 6.10.2 Metastable extensions of the liquidus and solidus curves of a system exhibiting limited solubility with peritectic temperature

Example 6.10.1

Metals A and B melt at 1 200 °C and 1 600 °C, respectively. Thermal analysis shows presence of the following three-phase equilibria at 1 600 °C, melt containing 10 mol % B and two solid solutions containing 20 mol % B and 30 mol % B, respectively, at 1 250 °C, solid solution containing 65 mol % B, melt containing 75 mol % B and solid solution containing 95 mol % B. There is one compound A_2B_3 which melts at 1 700 °C (congruently). Construct the phase diagram and label the phase regions.

Solution

Analysis of data

- (i) Since there is a formation of a congruently melting compound A_2B_3 , we may draw the phase diagrams of systems A- A_2B_3 and A_2B_3 -B separately (Fig. 6.10.1).
- (ii) At 1 600 °C, the melt contains lesser of B as compared to those present in the two solid solutions. This implies the formation of two solid solutions with a peritectic temperature. Therefore, the nature of the phase diagram of A- A_2B_3 system will be similar to that shown in Fig. 6.10.1.
- (iii) At 1 250 °C, composition of B in the melt is between those present in the two solid solutions. This implies the formation of stable solid solutions with an eutectic point and hence the nature of the phase diagram will be similar to that shown in Fig. 6.9.1.

Keeping in mind the above information, we obtain the phase diagram as shown in Fig. 6.10.3. The labelling of areas is also shown in the figure.

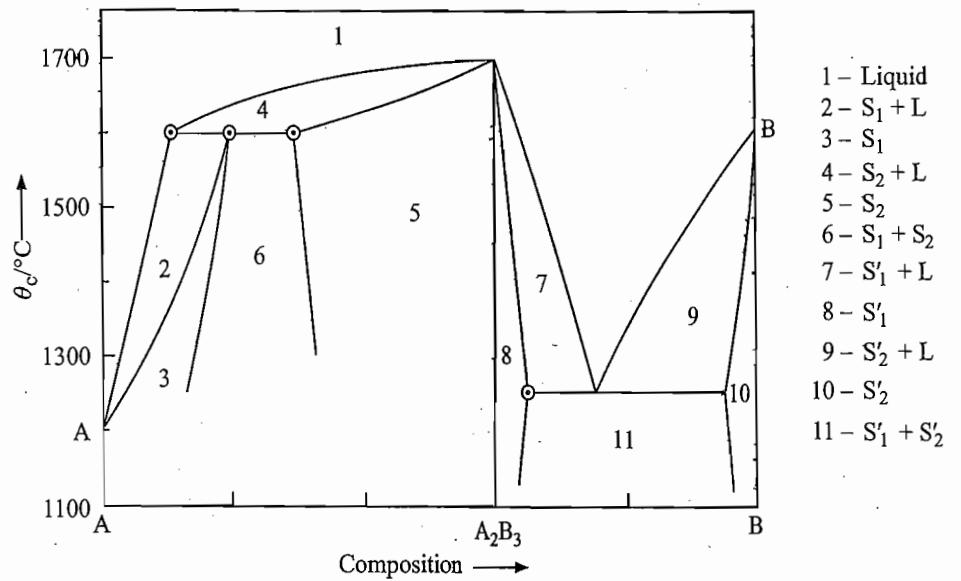


Fig. 6.10.3 Required phase diagram

6.11 FORMATION OF PARTIAL MISCIBILITY IN THE LIQUID PHASE AND CRYSTALLIZATION OF PURE COMPONENTS

The phase diagram of the present system has an appearance as shown in Fig. 6.11.1.

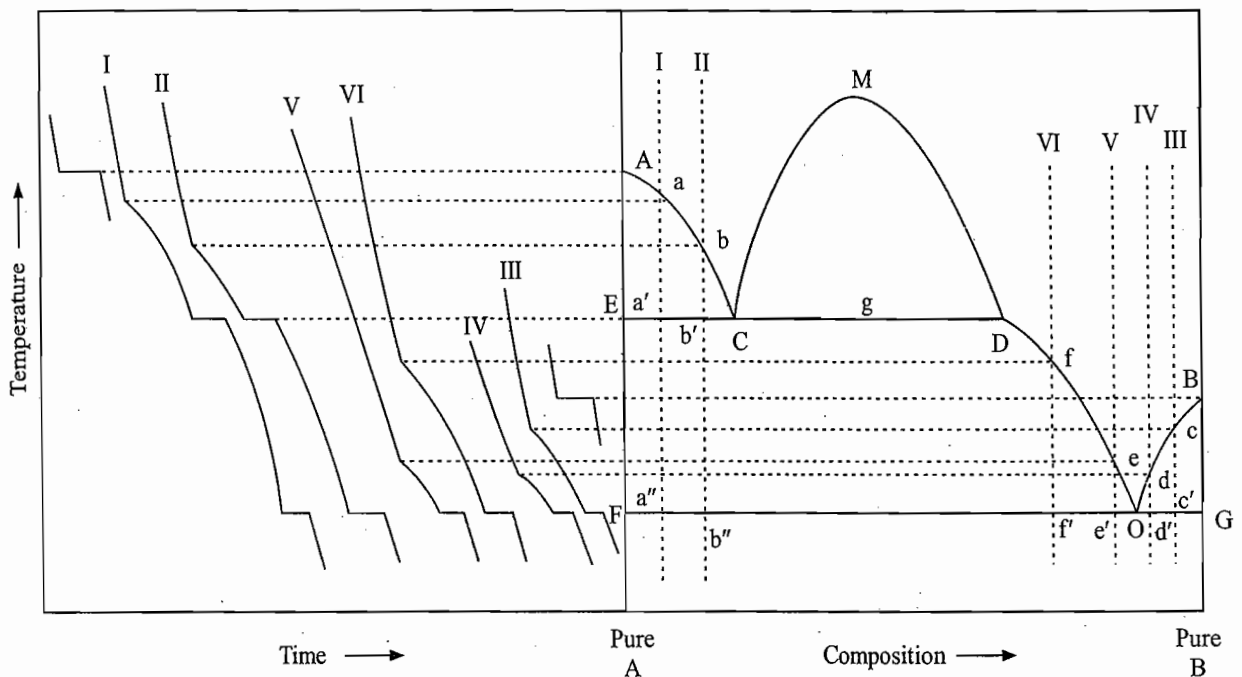


Fig. 6.11.1 Phase diagram exhibiting partial miscibility in the liquid phase

Construction of the Phase Diagram

- If the two components are partially miscible in the liquid phase, they will form two conjugate liquid solutions within certain range of concentrations. In the phase diagram, compositions of these two conjugate solutions will be represented by a dome-shaped curve such as CMD in Fig. 6.11.1. The curve CM represents compositions of saturated solutions of B in A whereas DM represents compositions of corresponding conjugate saturated solutions of A in B. The point M is the upper critical solution temperature.

- From the cooling curves of pure components, the points A and B representing respectively the freezing temperatures of A and B are obtained.
- From the cooling curves I and II of two systems of B in A, the points a and b representing respectively the start of freezing of A are obtained. If a line passing through A, a and b is drawn, we get the freezing point curve Aab of the component A.
- From the cooling curves III and IV of two systems of A in B, the points c and d representing respectively the start of solidification of B are obtained. If a line passing through B, c and d is drawn, we get the freezing point curve Bcd of the component B.
- If the line Aab is extended, it meets the saturation solubility curve CM of B in A at the point C. At this point, a single solution in equilibrium with solid A just splits into two conjugate solutions C and D, respectively. Thus, at the temperature corresponding to the point C, three phases, viz., solid A and two solutions C and D are in equilibrium with one another. Since, the three phases in equilibrium constitutes an invariant system ($F = C + 1 - P = 2 + 1 - 3 = 0$), the temperature corresponding to the the point C will have a fixed value. Thus, the cooling curves I and II will exhibit an arrest of temperature at points a' and b', respectively.
- The tie line drawn at the point a' or b' starts from the point E (representing solid A) and after passing through the point C (representing one conjugate solution) ends at the point D (representing another conjugate solution). Thus, a point on the line ECD will represent solid A and two liquid solutions C and D in equilibrium with one another. The relative amounts of solid A and the two solutions taken together may be determined with the help of the lever rule. For example, at point a', we have

$$\frac{\text{Amount of solid A}}{\text{Amount of solutions C and D}} = \frac{a'C}{Ea'}$$

- Further cooling of the system at a' (or b') causes more and more solidification of A without any change in temperature. The removal of A from the liquid phases moves the composition point C towards D along the line CD. As the point C moves towards D, the relative length of the segment of the tie line lying right to the point a' increases indicating that more of A is precipitated. Besides this, the relative amounts of conjugate solutions change in favour of solution D. These facts are in agreement with the lever rule. For example, if the overall composition of solutions is moved to the point g, we will have

$$\frac{\text{Amount of solid A}}{\text{Amount of solutions C and D}} = \frac{a'g}{Ea'}$$

$$\frac{\text{Amount of solution C}}{\text{Amount of solutions D}} = \frac{Dg}{Cg}$$

From the above expressions, the individual amounts of solid A, solution C and solution D can be determined for the given amount of the total system.

- When the overall composition of the solution is moved to the point D, virtually whole of solution C disappears and the system contains solid A and the solution D in equilibrium with each other. At this stage, the system a'

becomes univariant ($F = C + 1 - P = 2 + 1 - 2 = 1$) and thus it is expected to exhibit cooling along $a'a''$.

- If the cooling curves V and VI of two systems situated slightly right to the point D are studied, they will exhibit a break at the points e and f, respectively, where the solidification of A will just start. Thus, if a line passing through D, f and e is drawn, we get the freezing point curve Dfe of A from liquid whose compositions lie to the right of the point D. Hence, cooling of the system from a' to a'' , merely causes more and more solidification of A from a solution whose composition moves along the line Dfe. This fact is in agreement with the lever rule as the relative length of the segment of tie line right to the cooling line $a'a''$ increases as temperature is lowered.
- When the system a' has been cooled up to the point a'' , the solution (on the extension of line Dfe) becomes saturated with respect to B and hence both solids A and B start solidifying together. This occurs at the eutectic point O where solid A and solid B are in equilibrium with the solution O. The system at this stage is invariant ($F = C + 1 - P = 2 + 1 - 3 = 0$). Thus, the temperature corresponding to the point O will have a fixed value. The cooling curves I, II, V and VI will exhibit an arrest of temperature at points a'' , b'' , e' and f' , respectively.
- If the freezing point curve Bcd is extended, it will meet the freezing point curve Dfe at the eutectic point O. Thus, the cooling curves III and IV will exhibit an arrest of temperature at the points c' and d' , respectively.

Labelling of the Phase Diagram

With the help of the above analysis, the phase diagram shown in Fig. 6.11.1 can be easily labelled. Table 6.11.1 describes the labelling of Fig. 6.11.1.

Table 6.11.1 Labelling of the Phase Diagram shown in Fig. 6.11.1

<i>Location of the system</i>	<i>Status of the system</i>
A	Freezing point of A
B	Freezing point of B
Curve CMD	Composition of two conjugate solutions
M	Critical solution point
AabCDfe	Freezing point curve of A
BcD	Freezing point curve of B
O	Eutectic point involving solid A, solid B and liquid solution O
ECD	A system on this line represents solid A in equilibrium with the two conjugate solutions C and D
GOF	A system on this line represents solid A and solid B in equilibrium with solution O
Area ACDOFA	Solid A in equilibrium with liquid solution whose composition lies on the line ACDO
Area BGOB	Solid B in equilibrium with liquid solution whose composition lies on the line OB
Area below GOF	Solid mixtures of A and B
Area above ACMDOB	Liquid
Area CMDC	Two conjugate solutions (compositions lie on the curves CM and DM) in equilibrium with each other.

Cooling Patterns

The nature of cooling curve will depend upon the composition of the system. A few typical cases shown in Fig. 6.11.1 are now described:

(i) *Composition anywhere between AC*

Rapid cooling of liquid	→	Break; appearance of solid A	→	Slower cooling; solidification of A continues and the composition of melt moves along AC
				↓
Horizontal portion at the eutectic point O; solidification of solid mixture	←	Slower cooling; solidification of A continues, composition of the melt moves along DO	←	Horizontal portion; formation of two liquid solutions. Solidification of A continues till the melt has composition D
				↓
Cooling of solid mixture				

(ii) *Composition corresponding to the point C*

Rapid cooling of liquid	→	Horizontal portion; formation of two liquid solutions; solidification of A continues till the melt has composition D	→	Slower cooling; solidification of A continues and the composition of the melt moves along DO
				↓
	←	Cooling of solid mixture	←	Horizontal portion at the eutectic point O

(iii) *Composition anywhere between C and D*

Rapid cooling of liquid	→	Break; formation of two liquid solutions	→	Cooling of two liquid solutions continues
				↓
Horizontal portion at the eutectic point O	←	Slower cooling; solidification of A continues, composition of the melt moves along DO	←	Horizontal portion; solid A starts forming and continues till the composition of the melt is D
				↓
Cooling of solid mixture				

(iv) *Composition anywhere between B and O (or D and O)*

Cooling of liquid	→	Break; solidification of B (or A) starts	→	Slower cooling; solidification of B (or A) continues and the composition of the melt moves along BO (or DO)
				↓
	←	Cooling of solid mixture	←	Horizontal portion at the eutectic point

Examples

A few examples which form two liquid layers are; benzoic acid-water, phenol-water, succinic nitrile-water, resorcinol-benzene and Zn-Bi.

6.12 PHASE DIAGRAMS OF AQUEOUS SOLUTIONS OF SALTS

An aqueous solution of a salt is an example of a two-component system where we may have

- (1) Formation of a simple eutectic or cryohydrate.
- (2) Formation of compounds (hydrates) with congruent melting points.
- (3) Formation of compounds (hydrates) with incongruent or meritectic points.

At atmospheric pressure, the solubilities of most of salts in water are limited and, therefore, such systems are usually studied at high pressures. In this section, we shall discuss phase diagrams listed above by taking a typical example of each.

FORMATION OF A SIMPLE EUTECTIC OR CRYOHYDRATE

An aqueous solution of KI constitutes a simple eutectic system the phase diagram of which is shown in Fig. 6.12.1. It has an appearance similar to that of Fig. 6.4.1. The description of the phase diagram is included in the figure itself. Along AO, ice separates and thus this curve represents the freezing point curve of water; along BO, solid KI separates and thus it represents the solubility curve of KI. Point O is the eutectic point where both ice and KI separate, the corresponding eutectic temperature is -23°C . Thus, this is the lowest temperature at which the system can exist in the liquid form.

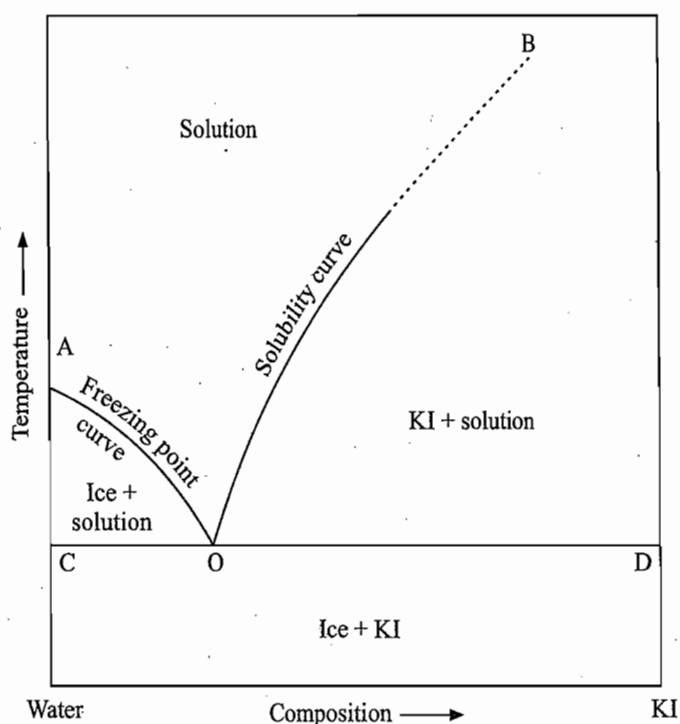


Fig. 6.10.3 Required phase diagram

Eutectic systems involving a salt and water were the first to be studied and were named as *cryohydrates* (Greek: frost water). Earlier, it was thought that at the cryohydric point (eutectic point) formation of a definite compound occurs. However, this view-point was rejected on the basis of following experimental facts:

- Composition of the eutectic varies with the external pressure and it seldom corresponds to a simple molecular proportion
- The heterogeneous structure of the solution can be seen under a microscope.

- Alcohol or acetone may dissolve the ice and leave behind a network of KI.
- X-ray analysis reveals the existence of two solid phases.
- The enthalpy of solution and density are the mean of the values for the two components.

Besides these facts, the phase rule also predicts that the formation of two solid phases at the cryohydric point is an invariant point.

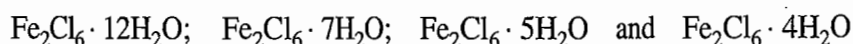
Production of Freezing Mixture with a Salt and Ice

When a salt is added to ice and a little water at 0 °C, a freezing mixture is produced. The principle of the freezing mixture can be explained on the basis of the phase diagram shown in Fig. 6.12.1. Initially, we have three phases, namely, ice, solution and the salt; such a system can be stable only at the eutectic point which lies far below 0 °C. Thus at 0 °C, the system is not stable and it tries to attain the eutectic point by melting ice and dissolving more and more salt in the produced water. Since the melting of ice and in most cases the dissolution of the salt are endothermic processes, a fall in temperature of the system is observed. This is continued till either one of the phases is completely used up or the eutectic point is reached. The temperature of the system when this point is attained remains constant till sufficient heat from the surroundings is absorbed to cause all the ice to melt or all the salt to dissolve. The resultant system has two phases in equilibrium and, therefore, becomes univariant. Further absorption of heat from the surroundings will result in an increase in temperature of the system.

FORMATION OF COMPOUNDS WITH CONGRUENT MELTING POINTS

Ferric Chloride-Water System

The best known example in which more than one congruent melting compound is formed is that of ferric chloride-water system. This salt forms four stable hydrates. These are



where double formula are used for ferric chloride in order to avoid a fractional number of molecules of water of crystallization. The phase diagram of this system has an appearance as shown in Fig. 6.12.2. The description of the diagram is given in Table 6.12.1.

Isothermal Evaporation of Solution

The cooling curve of a solution for a given composition can be drawn following the principles outlined earlier. For the present system it is of interest to consider isothermal evaporation of the solution. One such case is described below.

Let the solution be isothermally evaporated from the point a to m (Fig. 6.12.1). The sequence of events that takes place is as follows.

Point a to b: Unsaturated solution of ferric chloride.

At b: Solid $\text{Fe}_2\text{Cl}_6 \cdot 12\text{H}_2\text{O}$ commences.

From b to c: More and more of dodecahydrate separates, composition of the liquid remains unchanged and has a value corresponding to the point b. The volume of the solution decreases.

Point c: The solution completely disappears and the system consists of only solid $\text{Fe}_2\text{Cl}_6 \cdot 12\text{H}_2\text{O}$.

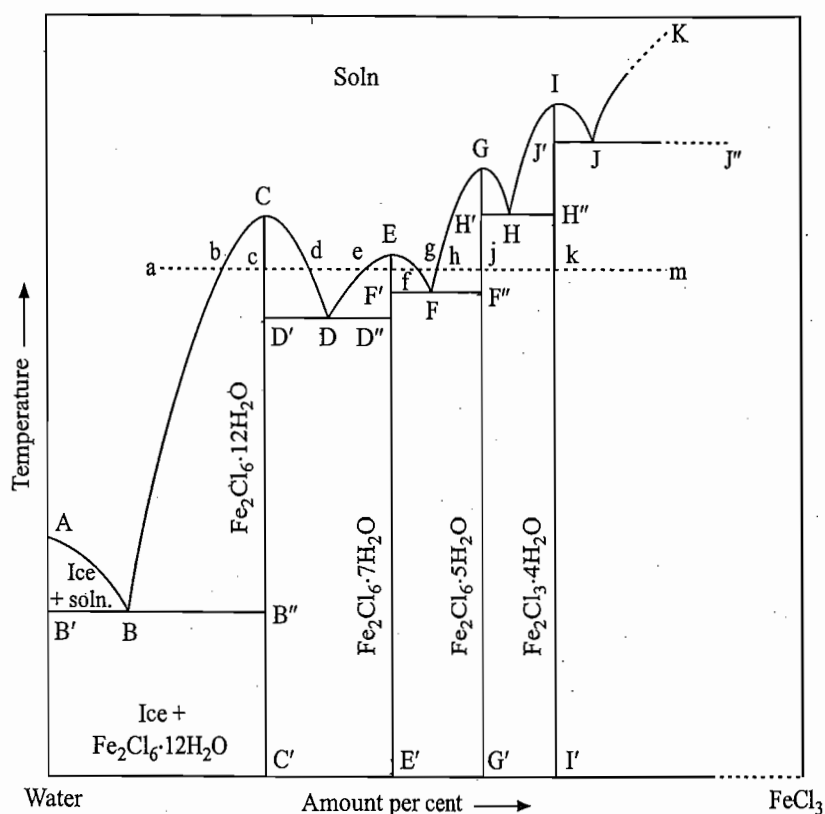


Fig. 6.12.2 Phase diagram of $\text{FeCl}_3\text{-H}_2\text{O}$ system

Table 6.12.1 Description of the Phase Diagram shown in Fig. 6.12.2

Location of the system	Status of the system
A	Freezing point of water
C'	Composition point of dodecahydrate
C	Congruent melting point of dodecahydrate (37 °C)
C'C	Solid dodecahydrate
E'	Composition point of heptahydrate
E	Congruent melting point of heptahydrate (32.5 °C)
E'E	Solid heptahydrate
G'	Composition point of pentahydrate
G	Congruent melting point of pentahydrate (56 °C)
G'G	Solid pentahydrate
I'	Composition point of tetrahydrate
I	Congruent melting point of tetrahydrate (78.5 °C)
I'I	Solid tetrahydrate
B	Eutectic point involving ice, dodecahydrate and solution B (-55 °C)
B'BB''	Tie line at the point B. It starts from B' (ice) and after passing through the point B (solution) ends at B'' (dodecahydrate)
D	Eutectic point involving dodecahydrate, heptahydrate and solution D (27.4 °C)
D'DD''	Tie line at the point D. It starts from D' (dodecahydrate) and after passing through the point D (solution) ends at D'' (heptahydrate)
F	Eutectic point involving heptahydrate, pentahydrate and solution F (30 °C)

(Contd.)

Table 6.12.1 (Contd.)

Location of the system	Status of the system
F'FF''	Tie line at the point F. It starts from F' (heptahydrate) and after passing through the point F (solution) ends at F'' (pentahydrate)
H	Eutectic point involving pentahydrate, tetrahydrate and solution H (55 °C)
H'HH''	Tie line at the point H. It starts from H' (pentahydrate) and after passing through the point H (solution) ends at H'' (tetrahydrate)
J	Eutectic point involving tetrahydrate, anhydrous salt and solution J (66 °C)
J'JJ''	Tie line at the point J. It starts from J' (tetrahydrate) and after passing through the point J (solution) will end at J'' (anhydrous salt)
AB	Freezing point curve of ice
BCD	Solubility curve of dodecahydrate
DEF	Solubility curve of heptahydrate
FGH	Solubility curve of pentahydrate
HIJ	Solubility curve of tetrahydrate
JK	Solubility curve of anhydrous salt
Areas	
ABB'A	Ice \rightleftharpoons solution (AB)
BCB''B	Dodecahydrate \rightleftharpoons solution whose composition lies on BC
DCD'D	Dodecahydrate \rightleftharpoons solution whose composition lies on DC
DED''D	Heptahydrate \rightleftharpoons solution whose composition lies on DE
FEF'F	Heptahydrate \rightleftharpoons solution whose composition lies on FE
FGF''F	Pentahydrate \rightleftharpoons solution whose composition lies on FG
HGH'H	Pentahydrate \rightleftharpoons solution whose composition lies on HG
HIH''H	Tetrahydrate \rightleftharpoons solution whose composition lies on HI
IJJ'J	Tetrahydrate \rightleftharpoons solution whose composition lies on IJ
J''JKJ''	Anhydrous salt \rightleftharpoons solution whose composition lies on JK
Area below B'BB''	Solid mixtures of ice and dodecahydrate
D'DD''	Solid mixtures of dodecahydrate and heptahydrate
F'FF''	Solid mixtures of heptahydrate and pentahydrate
H'HH''	Solid mixtures of pentahydrate and tetrahydrate
J'JJ''	Solid mixtures of tetrahydrate and anhydrous salt
Area above the curve	
ABCDEFGHIJK	Aqueous solution

Between c and d: There exists an equilibrium between dodecahydrate and the solution, but now composition of the latter corresponds to the point d. From c to d, more and more of the solution is produced and less and less of the solid is left.

Point d: Solid dodecahydrate disappears and the system is completely a solution.

Between d and e: Once again the solution becomes unsaturated.

At e: Solid $\text{Fe}_2\text{Cl}_6 \cdot 7\text{H}_2\text{O}$ starts separating.

Between e and f: More and more of heptahydrate separates from the solution of e, volume of the solution decreases gradually.

Point f: Complete solidification of $\text{Fe}_2\text{Cl}_6 \cdot 7\text{H}_2\text{O}$ occurs at this point.

Point f to g: Again solution g appears, volume of the solution increases, and the amount of solid heptahydrate decreases.

Point g: Solid heptahydrate disappears and the system is completely a solution.

Between g and h: Again the solution becomes unsaturated.

Point h: $\text{Fe}_2\text{Cl}_6 \cdot 5\text{H}_2\text{O}$ starts appearing.

Point h to j: More and more of pentahydrate appears, volume of the solution h decreases.

Point j: Complete solidification to give $\text{Fe}_2\text{Cl}_6 \cdot 5\text{H}_2\text{O}$.

Point j to k: Transformation of more and more of the solid $\text{Fe}_2\text{Cl}_6 \cdot 5\text{H}_2\text{O}$ to $\text{Fe}_2\text{Cl}_6 \cdot 4\text{H}_2\text{O}$.

At k: Transformation of $\text{Fe}_2\text{Cl}_3 \cdot 5\text{H}_2\text{O}$ to $\text{Fe}_2\text{Cl}_3 \cdot 4\text{H}_2\text{O}$ is completed and we have only $\text{Fe}_2\text{Cl}_6 \cdot 4\text{H}_2\text{O}$.

From k to m: Transformation of solid $\text{Fe}_2\text{Cl}_6 \cdot 4\text{H}_2\text{O}$ to anhydrous salt.

If the evaporation is continued, then ultimately one would get the pure anhydrous salt.

Other Examples of Hydrates

Hydrates of congruent melting points have also been discovered in which one of the components is not a salt. A few examples are

$\text{N}_2\text{O}_5 \cdot \text{H}_2\text{O}$ system: Compounds are $\text{N}_2\text{O}_5 \cdot 7\text{H}_2\text{O}$
 $\text{N}_2\text{O}_5 \cdot 3\text{H}_2\text{O}$ and $\text{N}_2\text{O}_5 \cdot \text{H}_2\text{O}$
 and $\text{SO}_3 \cdot \text{H}_2\text{O}$ system: Compounds are $\text{SO}_3 \cdot 5\text{H}_2\text{O}$, $\text{SO}_3 \cdot 3\text{H}_2\text{O}$
 $\text{SO}_3 \cdot 2\text{H}_2\text{O}$, $\text{SO}_3 \cdot \text{H}_2\text{O}$ and $2\text{SO}_3 \cdot \text{H}_2\text{O}$

Example 6.12.1

Sulphuric acid forms three hydrates. All have congruent melting points. There are no solid solutions.

Compound	Melting point / °C
H_2SO_4 (anhydrous)	10.5
$\text{H}_2\text{SO}_4 \cdot \text{H}_2\text{O}$	8.6
$\text{H}_2\text{SO}_4 \cdot 2\text{H}_2\text{O}$	-39.9
$\text{H}_2\text{SO}_4 \cdot 4\text{H}_2\text{O}$	-24.5
Eutectic (ice + $\text{H}_2\text{SO}_4 \cdot 4\text{H}_2\text{O}$)	≈ -74
Eutectic ($\text{H}_2\text{SO}_4 \cdot 4\text{H}_2\text{O}$ + $\text{H}_2\text{SO}_4 \cdot 2\text{H}_2\text{O}$)	≈ -51
Eutectic ($\text{H}_2\text{SO}_4 \cdot 2\text{H}_2\text{O}$ + $\text{H}_2\text{SO}_4 \cdot \text{H}_2\text{O}$)	≈ -44
Eutectic ($\text{H}_2\text{SO}_4 \cdot \text{H}_2\text{O}$ + H_2SO_4)	≈ -38

- Sketch the temperature-amount fraction phase diagram. Label each area to indicate the phases present.
- Describe all the changes that occur when sulphuric acid is added in small increment to a sample of ice being maintained at -30°C .

Solution

(i) The temperature-amount fraction phase diagram from the given data is shown in Fig. 6.12.3. Labelling of the phase diagram is shown in Table 6.12.2.

(ii) The changes that occur when sulphuric acid is added in small increment to a sample of ice maintained at -30°C can be described by drawing a horizontal line at -30°C such as shown in Fig. 6.12.3. The effects produced will be as follows.

From a to b, the system consists of solid ice and solution of composition corresponding to the point b. The only things that vary from a to b are the relative amounts of the two; the amount of ice decreases whereas that of solution increases. At b, the last crystal of H_2O disappears and from b to c, the system is in liquid state. At c, crystals of $\text{H}_2\text{SO}_4 \cdot 4\text{H}_2\text{O}$ start

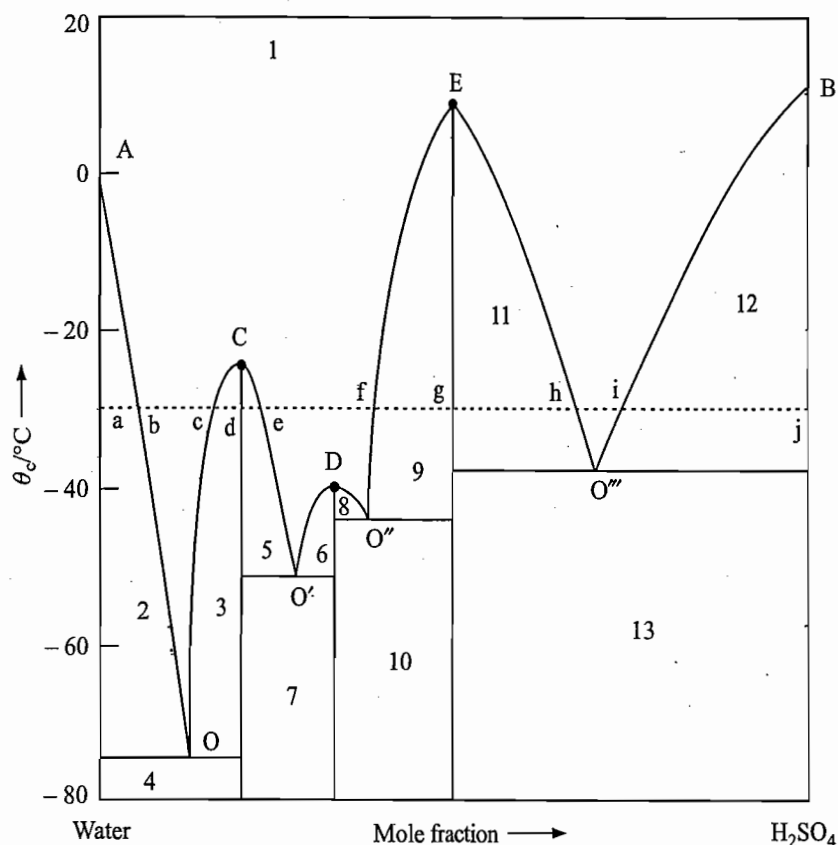


Fig. 6.12.3 Required phase diagram of H_2SO_4 - H_2O system

Table 6.12.2 Labelling of the Phase Diagram

Area	System
1	solution
2	ice + solution
3	solid $\text{H}_2\text{SO}_4 \cdot 4\text{H}_2\text{O}$ + solution (OC)
4	ice + solid $\text{H}_2\text{SO}_4 \cdot 4\text{H}_2\text{O}$
5	solid $\text{H}_2\text{SO}_4 \cdot 4\text{H}_2\text{O}$ + solution (CO')
6	solid $\text{H}_2\text{SO}_4 \cdot 2\text{H}_2\text{O}$ + solution (O'D)
7	solid $\text{H}_2\text{SO}_4 \cdot 4\text{H}_2\text{O}$ + solid $\text{H}_2\text{SO}_4 \cdot 2\text{H}_2\text{O}$
8	solid $\text{H}_2\text{SO}_4 \cdot 2\text{H}_2\text{O}$ + solution (O''D)
9	solid $\text{H}_2\text{SO}_4 \cdot \text{H}_2\text{O}$ + solution (O''E)
10	solid $\text{H}_2\text{SO}_4 \cdot 2\text{H}_2\text{O}$ + solid $\text{H}_2\text{SO}_4 \cdot \text{H}_2\text{O}$
11	solid $\text{H}_2\text{SO}_4 \cdot \text{H}_2\text{O}$ + solution (EO''')
12	solid $\text{H}_2\text{SO}_4 \cdot \text{H}_2\text{O}$ + solution (BO''')
13	solid $\text{H}_2\text{SO}_4 \cdot \text{H}_2\text{O}$ + solid H_2SO_4

appearing and continue to appear till the point d is reached keeping all the while the solution composition at c. At d the system consists of only solid $\text{H}_2\text{SO}_4 \cdot 4\text{H}_2\text{O}$. From d to e, again we have solid $\text{H}_2\text{SO}_4 \cdot 4\text{H}_2\text{O}$ and solution, but now the solution composition is represented by the point e. The only thing that varies from d to e is that the amount of solid $\text{H}_2\text{SO}_4 \cdot 4\text{H}_2\text{O}$ decreases whereas the amount of solution increases. At e, the last crystal of solid $\text{H}_2\text{SO}_4 \cdot 4\text{H}_2\text{O}$ disappears and from e to f, the system is present in the solution form. From f to g, solid $\text{H}_2\text{SO}_4 \cdot \text{H}_2\text{O}$ is in equilibrium with the solution of composition corresponding to the point f. At g, the system consists of only solid $\text{H}_2\text{SO}_4 \cdot \text{H}_2\text{O}$. From g to h, the system contains solid

$\text{H}_2\text{SO}_4 \cdot \text{H}_2\text{O}$ in equilibrium with solution of composition corresponding to the point h. From h to i, it is present in the solution form and from i to j, the system consists of anhydrous H_2SO_4 and solution of composition corresponding to the point i. At j, the system consists of only solid anhydrous H_2SO_4 .

FORMATION OF COMPOUNDS WITH INCONGRUENT MELTING POINTS

Sodium Sulphate-Water System

Formation of compounds (hydrates) with incongruent or meritectic melting points are more common, one of the well-known examples is the sodium sulphate and water system. The phase diagram of this system is shown in Fig. 6.12.4 and is described in Table 6.12.3.

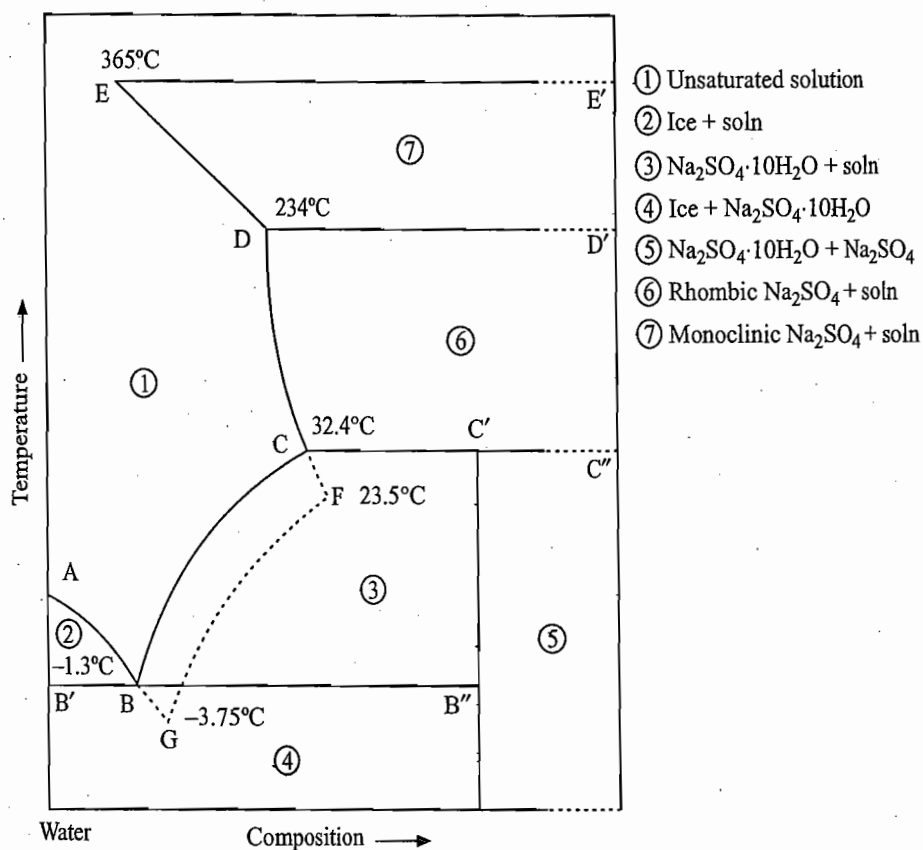


Fig. 6.12.4 Phase diagram of $\text{Na}_2\text{SO}_4 - \text{H}_2\text{O}$ system

Table 6.12.3 Description of The Phase Diagram shown in Fig. 6.12.4

Location of the system	Status of system
A	Freezing point of water
C'	Incongruent point where solid $\text{Na}_2\text{SO}_4 \cdot 10\text{H}_2\text{O}$ undergoes the following peritectic reaction $\text{Na}_2\text{SO}_4 \cdot 10\text{H}_2\text{O} \rightleftharpoons \text{Na}_2\text{SO}_4(\text{rhombic}) + \text{Solution C}$
C	Composition of solution which is produced at point C'
CC'C''	Tie line at the point C. It starts from C (solution) and after passing through C' ($\text{Na}_2\text{SO}_4 \cdot 10\text{H}_2\text{O}$) ends at C'' (rhombic Na_2SO_4)
B	Eutectic point where ice and $\text{Na}_2\text{SO}_4 \cdot 10\text{H}_2\text{O}$ are in equilibrium with solution B

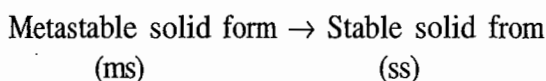
(Contd.)

Table 6.12.3 (Contd.)

B'BB''	Tie-line at the point B. If starts from B' (ice) and after passing through the point B (solution) ends at B''(Na ₂ SO ₄ · 10H ₂ O)
AB	Freezing point curve of ice
BC	Solubility curve of Na ₂ SO ₄ · 10H ₂ O.
CD	Solubility curve of rhombic Na ₂ SO ₄ . This curve is slightly curved at left up to about 125 °C since solubility of rhombic Na ₂ SO ₄ decreases with increase in temperature. Beyond this temperature, the solubility increases with increase in temperature
D	At temperature corresponding to the point D, polymorphic modification of rhombic Na ₂ SO ₄ into monoclinic Na ₂ SO ₄ takes place
DE	Solubility curve of monoclinic Na ₂ SO ₄ (solubility of monoclinic Na ₂ SO ₄ decreases with increase in temperature)
E	This point gives the maximum limit of the temperature up to which the system can be studied and represents critical temperature of water in solution. Above this temperature, liquid water does not exist. This temperature is very close to the critical temperature of pure water since the solubility of Na ₂ SO ₄ at this temperature is very small
Areas	
ABB'A	ice ⇌ solution (AB)
BCC'B''B	Na ₂ SO ₄ · 10H ₂ O(s) ⇌ solution (BC)
Below the line B'BB''	Solid mixtures of ice and Na ₂ SO ₄ · 10H ₂ O
CDD'C''C	Rhombic Na ₂ SO ₄ (s) ⇌ solution (CD)
Below the line C'C''	Solid mixtures of Na ₂ SO ₄ (rhombic) and Na ₂ SO ₄ · 10H ₂ O
DEE'D'D	Monoclinic Na ₂ SO ₄ (s) ⇌ solution (DE)
Line CF	Extension of the curve DC where metastable equilibrium between rhombic Na ₂ SO ₄ and solution exists. This curve is continued up to the point F where metastable heptahydrate (Na ₂ SO ₄ · 7H ₂ O) is deposited
Line BG	Extension of the curve AB where metastable equilibrium between ice and solution exists. This curve is extended up to the point G where both ice and Na ₂ SO ₄ · 7H ₂ O solidify together
GF	Metastable solubility curve of heptahydrate
G	Metastable eutectic point where ice and heptahydrate are in equilibrium with the solution G
F	The temperature corresponding to this point represents an incongruent melting point where the following equilibrium exists
	$\text{Na}_2\text{SO}_4 \cdot 7\text{H}_2\text{O}(\text{s}) \rightleftharpoons \text{Na}_2\text{SO}_4 (\text{rhombic}) + \text{Solution F}$

Solubilities of Stable and Metastable Forms

The fact that the metastable curve GF lies to the right of the stable curve BC indicates that at a given temperature, the metastable form is more soluble than the stable form. This is a universal rule and can be derived thermodynamically. Since, the reaction



is a spontaneous process (and the reverse of this reaction can never occur), we must have

$$\mu_{\text{ss}} < \mu_{\text{ms}}$$

Since both these salts exist in equilibrium with the corresponding saturated solutions, we also have

$$\mu_{ss} = \mu_{ss(\text{soln})}$$

$$\mu_{ms} = \mu_{ms(\text{soln})}$$

With these, the previous expression modifies to

$$\mu_{ss(\text{soln})} < \mu_{ms(\text{soln})}$$

that is, the chemical potential of the stable solute $\text{Na}_2\text{SO}_4 \cdot 10\text{H}_2\text{O}$ in the saturated solution (represented by the curve BC) is less than that of the unstable solute $\text{Na}_2\text{SO}_4 \cdot 7\text{H}_2\text{O}$ in the corresponding saturated solution (represented by the curve GF). If it is assumed that both the solutions behave ideally (or depart from ideality to the same extent), then it is obvious that

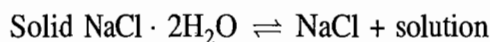
$$x_{ss(\text{soln})} < x_{ms(\text{soln})}$$

More Examples

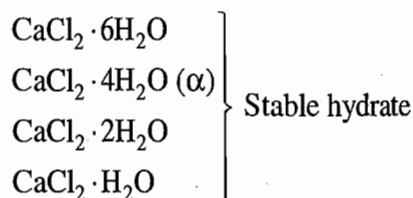
A few other examples in which compounds of incongruent melting points are formed are now described.

Sodium Chloride-Water System In this system, we have

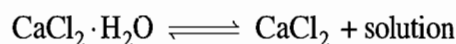
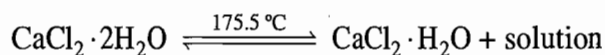
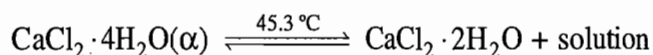
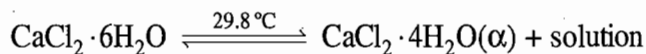
- (i) Stable eutectic temperature at -21.2°C , where ice, $\text{NaCl} \cdot 2\text{H}_2\text{O}$ and the solution are in equilibrium.
- (ii) Meritectic temperature at 0.15°C where the following transformation takes place:



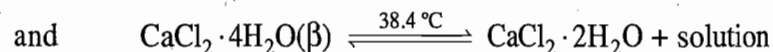
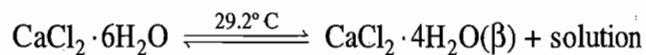
Calcium Chloride-Water System In $\text{CaCl}_2\text{-H}_2\text{O}$ system, we have more than one compound formation. There are four stable hydrates and one metastable hydrate. These are



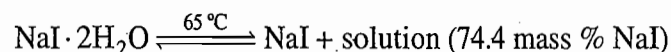
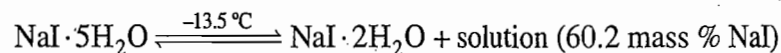
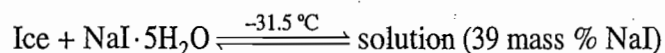
Four stable transition points will be present in the phase diagram corresponding to the following transformations.



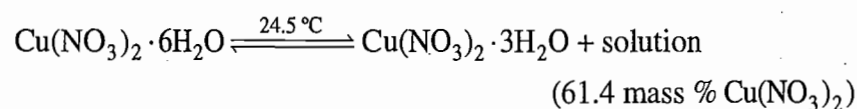
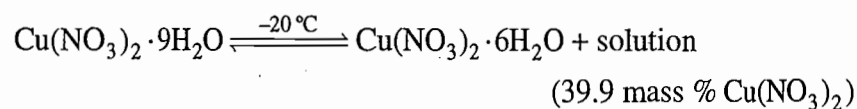
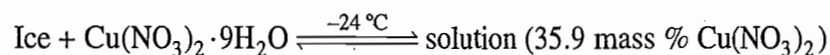
Besides these four points, two more points will exist corresponding to the following two unstable transformations.



Sodium Iodide-Water System We have



Cupric Nitrate-Water System We have



Example 6.12.2

Given below are the data of the binary system ferrous sulphate-water. Construct the phase diagram and label it.

Composition of Saturated Solution at Various Temperatures

Temperature °C	$m(\text{FeSO}_4)/\text{g}$ per 100 g solution	Solid phase
-0.7	5.18	Ice
-1.3	9.47	"
-1.8	12.99	Ice + $\text{FeSO}_4 \cdot 7\text{H}_2\text{O}$
0	13.53	$\text{FeSO}_4 \cdot 7\text{H}_2\text{O}$
+ 10	17.02	"
20	21.0	"
30	24.78	"
40	28.67	"
50	32.7	"
52	33.42	"
54	34.25	"
56.17	35.32	$\text{FeSO}_4 \cdot 7\text{H}_2\text{O} + \text{FeSO}_4 \cdot 4\text{H}_2\text{O}$
60	35.46	$\text{FeSO}_4 \cdot 4\text{H}_2\text{O}$
64	35.65	$\text{FeSO}_4 \cdot 4\text{H}_2\text{O} + \text{FeSO}_4 \cdot \text{H}_2\text{O}$
68	34.35	$\text{FeSO}_4 \cdot \text{H}_2\text{O}$
77	31.46	"
80.4	30.35	"
85	28.8	"
90	27.15	"

$\text{FeSO}_4 \cdot 7\text{H}_2\text{O} = 54.6 \text{ mass \% FeSO}_4$
 $\text{FeSO}_4 \cdot 4\text{H}_2\text{O} = 67.8 \text{ mass \% FeSO}_4$
 $\text{FeSO}_4 \cdot \text{H}_2\text{O} = 89.4 \text{ mass \% FeSO}_4$

Solution

First of all, the points corresponding to the given data on temperature versus composition were located in a two-dimension phase diagram. After this, the points corresponding to the given three compounds, viz., $\text{FeSO}_4 \cdot 7\text{H}_2\text{O}$, $\text{FeSO}_4 \cdot 4\text{H}_2\text{O}$ and $\text{FeSO}_4 \cdot \text{H}_2\text{O}$, were located on the composition axis and the vertical lines were drawn from these points as shown in Fig. 6.12.5.

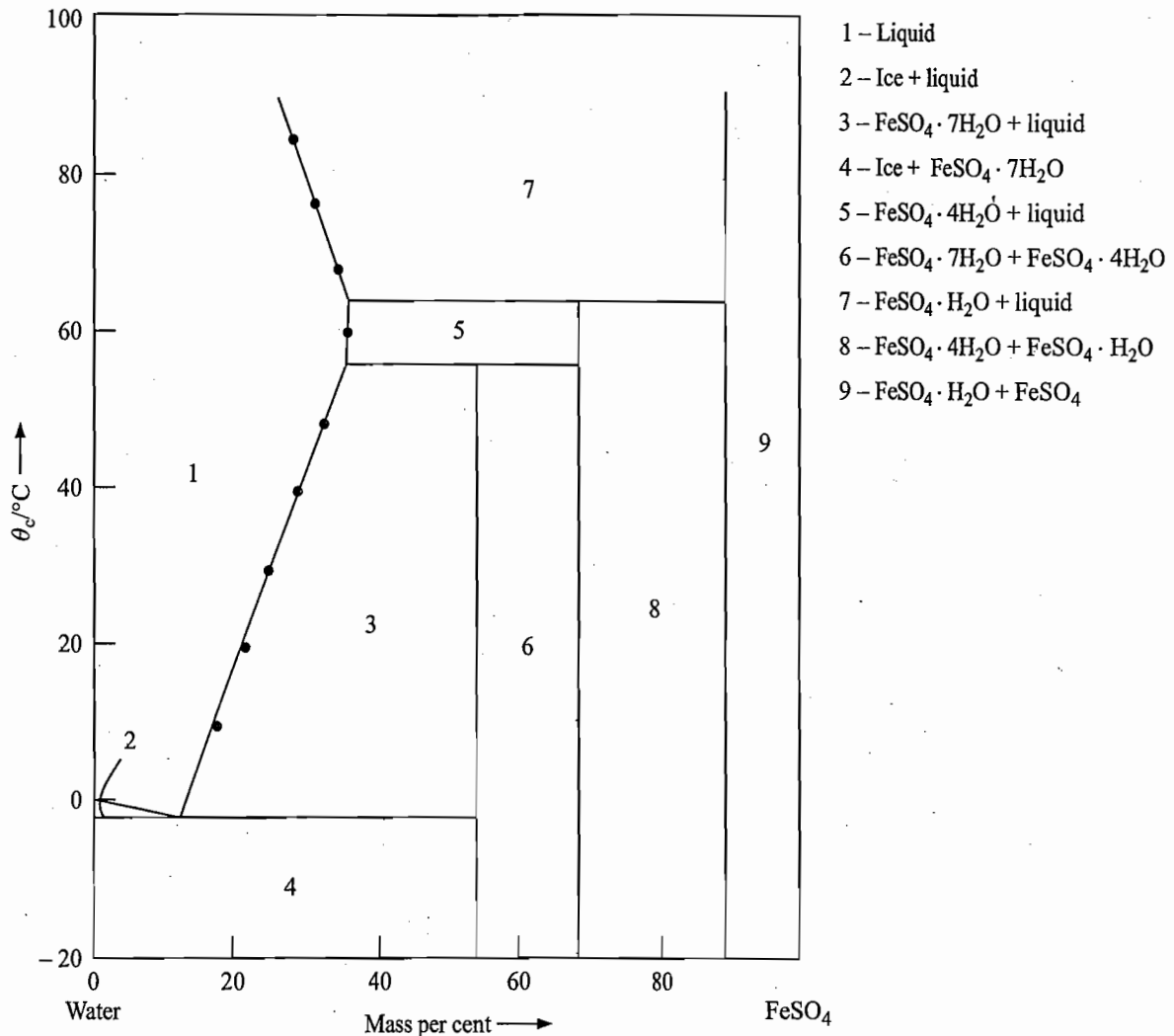


Fig. 6.12.5 Required phase diagram of $\text{FeSO}_4\text{-H}_2\text{O}$ system

From the given data, we find that the temperature at which ice separates out from the solution decreases as more and more of FeSO_4 is dissolved in it. This decrease of temperature is continued up to the temperature of -1.8°C where the solution composition is 12.99 mass per cent of FeSO_4 . At this temperature, the two solids, viz., ice and $\text{FeSO}_4 \cdot 7\text{H}_2\text{O}$ separate out. On increasing the mass per cent of FeSO_4 from 12.99 to 13.53, we find that there is a separation of only $\text{FeSO}_4 \cdot 7\text{H}_2\text{O}$ and the freezing point of the solution increases from -1.8 to 0°C . Obviously, the temperature -1.8°C is the lowest temperature at which the two solids separate out and thus must represent eutectic temperature. So, we draw a horizontal line at this temperature starting from the pure ice line to the vertical line of $\text{FeSO}_4 \cdot 7\text{H}_2\text{O}$. At temperature 56.17°C , the two solids $\text{FeSO}_4 \cdot 7\text{H}_2\text{O}$ and $\text{FeSO}_4 \cdot 4\text{H}_2\text{O}$ are present in equilibrium with the solution which contains 35.32 mass per cent of FeSO_4 . Since this composition is different from the mass per cent of FeSO_4 in the compound $\text{FeSO}_4 \cdot 7\text{H}_2\text{O}$, it is obvious that the compound $\text{FeSO}_4 \cdot 7\text{H}_2\text{O}$ has decomposed at a temperature lower than its actual melting point, i.e. the compound $\text{FeSO}_4 \cdot 7\text{H}_2\text{O}$ has an incongruent melting point of 56.17°C . Thus, the vertical line representing this compound

must end at this temperature. Since $\text{FeSO}_4 \cdot 4\text{H}_2\text{O}$ is separated out at temperature immediately higher than 56.17°C , we draw a horizontal line from the peritectic point (56.17°C and 35.32 mass per cent of FeSO_4) up to the vertical line representing the compound $\text{FeSO}_4 \cdot 4\text{H}_2\text{O}$ (Fig. 6.12.5). Similar arguments at temperature 64°C , where again two phases $\text{FeSO}_4 \cdot 4\text{H}_2\text{O}$ and $\text{FeSO}_4 \cdot \text{H}_2\text{O}$ are separated out, indicates that the compound $\text{FeSO}_4 \cdot 4\text{H}_2\text{O}$ also has an incongruent melting point. So the vertical line representing this compound must end at the temperature 64°C . Since $\text{FeSO}_4 \cdot \text{H}_2\text{O}$ separates out at temperature immediately above 64°C , we draw a horizontal line from the peritectic point (64°C and 35.65 mass percent of FeSO_4) up to the vertical line representing the compound $\text{FeSO}_4 \cdot \text{H}_2\text{O}$. At higher temperatures, we have only the solubility curve of $\text{FeSO}_4 \cdot \text{H}_2\text{O}$.

Finally a smooth curve passing through the points of temperature versus composition is drawn. This gives us the phase diagram of the present system. Labelling of different areas is straightforward and is described in Fig. 6.12.5 itself.

Example 6.12.3

Given below are the data of the binary system sodium hydroxide-water. Construct the phase diagram and label it.

Composition of Saturated Solutions at Various Temperatures

<i>Temperature</i> °C	<i>m(NaOH)/g per</i> 100 g <i>solution</i>	<i>Solid phase</i>
- 5.27	5.78	Ice
- 10.29	10.03	"
- 17.20	14.11	"
- 25.2	18.17	"
-28.0	19.0	Ice + $\text{NaOH} \cdot 7\text{H}_2\text{O}$
-26.0	19.98	$\text{NaOH} \cdot 7\text{H}_2\text{O}$
-25.2	21.1	"
-24.0	22.1	$\text{NaOH} \cdot 7\text{H}_2\text{O} + \text{NaOH} \cdot 5\text{H}_2\text{O}$
-21.7	23.31	$\text{NaOH} \cdot 5\text{H}_2\text{O}$
-19.95	23.97	"
-18.0	24.7	$\text{NaOH} \cdot 5\text{H}_2\text{O} + \text{NaOH} \cdot 4\text{H}_2\text{O}$
-12.60	25.47	$\text{NaOH} \cdot 4\text{H}_2\text{O}$
-8.45	26.91	"
+ 1.62	30.38	"
5.40	32.3	$\text{NaOH} \cdot 4\text{H}_2\text{O} + \text{NaOH} \cdot 3.5\text{H}_2\text{O}$
7.00	32.97	$\text{NaOH} \cdot 3.5\text{H}_2\text{O}$
13.2	35.51	"
15.55	38.83	"
13.95	42.28	"
10.75	44.22	"
5.00	45.5	$\text{NaOH} \cdot 3.5\text{H}_2\text{O} + \text{NaOH} \cdot 2\text{H}_2\text{O}$
7.80	47.3	$\text{NaOH} \cdot 2\text{H}_2\text{O}$
10.30	49.11	"
12.30	50.8	$\text{NaOH} \cdot 2\text{H}_2\text{O} + \text{NaOH} \cdot \text{H}_2\text{O}$
18.00	51.7	$\text{NaOH} \cdot \text{H}_2\text{O}$
40.25	56.44	$\text{NaOH} \cdot \text{H}_2\text{O}$
57.85	62.85	"
63.23	66.45	"

(Contd.)

(Contd.)

Temperature °C	$m(\text{NaOH})/\text{g}$ per 100 g solution	Solid phase
64.3	68.49	"
63.0	71.17	"
62.0	74.2	$\text{NaOH} \cdot \text{H}_2\text{O} + \text{NaOH}$
80.0	75.83	NaOH
110.0	78.15	NaOH
	$\text{NaOH} \cdot 7\text{H}_2\text{O} = 24.1$ mass % NaOH	
	$\text{NaOH} \cdot 5\text{H}_2\text{O} = 30.7$ mass % NaOH	
	$\text{NaOH} \cdot 4\text{H}_2\text{O} = 35.7$ mass % NaOH	
	$\text{NaOH} \cdot 3.5 \text{H}_2\text{O} = 38.9$ mass % NaOH	
	$\text{NaOH} \cdot 2\text{H}_2\text{O} = 52.7$ mass % NaOH	
	$\text{NaOH} \cdot \text{H}_2\text{O} = 69.0$ mass % NaOH	

Solution*Analysis of data*

- (i) The temperature -28.0°C must be an eutectic temperature as the temperatures of data above and below this are higher than -28.0°C .
- (ii) The temperature -24.0°C , where the two solids $\text{NaOH} \cdot 7\text{H}_2\text{O}$ and $\text{NaOH} \cdot 5\text{H}_2\text{O}$ appear must be a peritectic temperature as solution composition of 22.1 mass per cent of NaOH is different from the corresponding composition in the compound $\text{NaOH} \cdot 7\text{H}_2\text{O}$ (24.1 mass per cent). Thus, the compound $\text{NaOH} \cdot 7\text{H}_2\text{O}$ decomposes earlier than its actual melting point. The vertical line representing $\text{NaOH} \cdot 7\text{H}_2\text{O}$ must end at the temperature -24°C , and the horizontal line representing the range of peritectic reaction at -24.0°C will end at the vertical line of $\text{NaOH} \cdot 5\text{H}_2\text{O}$.
- (iii) The temperature -18.0°C , where the two solids $\text{NaOH} \cdot 5\text{H}_2\text{O}$ and $\text{NaOH} \cdot 4\text{H}_2\text{O}$ appear, is also a peritectic temperature as solution composition of 24.7 mass per cent of NaOH is different from the corresponding composition in the compound $\text{NaOH} \cdot 5\text{H}_2\text{O}$ (30.7 mass per cent). The vertical line representing $\text{NaOH} \cdot 5\text{H}_2\text{O}$ will end at the temperature -18.0°C and the horizontal line representing peritectic reaction at -18.0°C will end at the vertical line of $\text{NaOH} \cdot 4\text{H}_2\text{O}$.
- (iv) The temperature 5.4°C , where the two solids $\text{NaOH} \cdot 4\text{H}_2\text{O}$ and $\text{NaOH} \cdot 3.5\text{H}_2\text{O}$ appear, is also a peritectic temperature as solution composition of 32.3 mass per cent of NaOH is less than that in the compound $\text{NaOH} \cdot 4\text{H}_2\text{O}$ (35.7 mass per cent). Thus, the compound $\text{NaOH} \cdot 4\text{H}_2\text{O}$ decomposes earlier than its actual melting point. The vertical line representing $\text{NaOH} \cdot 4\text{H}_2\text{O}$ will end at the temperature 5.4°C , and the horizontal line representing peritectic reaction at 5.4°C will end at the vertical line of $\text{NaOH} \cdot 3.5\text{H}_2\text{O}$.
- (v) The compound $\text{NaOH} \cdot 3.5\text{H}_2\text{O}$ is a congruently melting compound as its solubility curve passes through a maximum around 15.55°C .
- (vi) The temperature 5.0°C , where the two solids $\text{NaOH} \cdot 3.5\text{H}_2\text{O}$ and $\text{NaOH} \cdot 2\text{H}_2\text{O}$ appear, must be an eutectic temperature as it has a minimum value in the composition range under study (44.22–47.3 mass per cent of NaOH).
- (vii) The temperature 12.30°C , where the two solids $\text{NaOH} \cdot 2\text{H}_2\text{O}$ and $\text{NaOH} \cdot \text{H}_2\text{O}$ appear, is a peritectic temperature as the solution composition of 50.8 mass per cent of NaOH is less than that in the compound $\text{NaOH} \cdot 2\text{H}_2\text{O}$. Thus, the

compound $\text{NaOH} \cdot 2\text{H}_2\text{O}$ decomposes earlier than its actual melting point. The vertical line representing $\text{NaOH} \cdot 2\text{H}_2\text{O}$ will end at the temperature 12.30°C and the horizontal line representing peritectic reaction at 12.30°C will end at the vertical line of $\text{NaOH} \cdot \text{H}_2\text{O}$.

- (viii) The compound $\text{NaOH} \cdot \text{H}_2\text{O}$ is a congruently melting compound as its solubility curve passes through a maximum around 64.3°C .
- (ix) The temperature 62.0°C where the two solids $\text{NaOH} \cdot \text{H}_2\text{O}$ and NaOH appear must be an eutectic temperature as it has a minimum value in the composition range under study (71.17 – 75.83 mass per cent NaOH).

Keeping in mind the above analysis, the phase diagram of the present system can be drawn as shown in Fig. 6.12.6. The labelling of various areas is also shown in Fig. 6.12.6

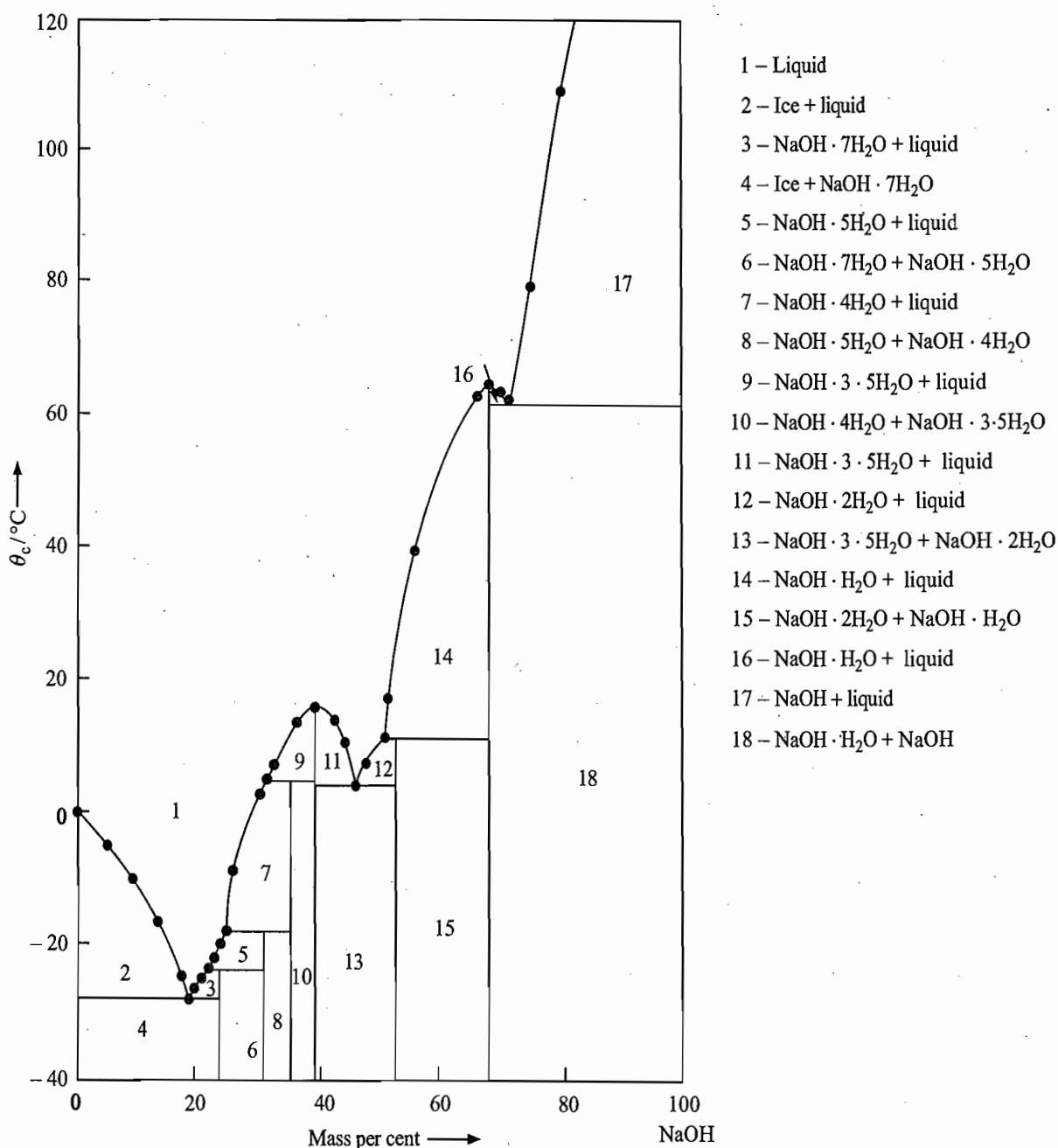


Fig. 6.12.6 Required phase diagram of $\text{NaOH} - \text{H}_2\text{O}$ system

REVISIONARY PROBLEMS

- 6.1 (a) Determine the variance of a two-component system having number of phases equal to one, two and three, respectively.
 (b) Show that in a system where the external pressure remains constant, the degrees of freedom can be calculated by employing the reduced phase rule $F = C - P + 1$.
- 6.2 (a) What do you understand by condensed systems? Classify various solid-liquid equilibria based on the nature of the liquid phase and the solid phase in two-component systems.
 (b) Explain why we should exclude a case of forming a series of solid solutions when the two components are partially miscible in the liquid state?
- 6.3 Explain, how does thermal analysis help in drawing the phase-diagram of one and two-component systems? Support your answer by drawing a few typical cooling curves.
- 6.4 (a) Draw the phase diagram of a two-component system exhibiting simple eutectic behaviour.
 Explain, why the melting point of a pure component and the eutectic point are invariant points. How will you establish that the solid which separates out at the eutectic point is a solid mixture and not a compound?
 (b) Derive thermodynamically the relation governing the solubility curve of an ideal binary system.
 (c) Explain, how the eutectic temperature and composition be determined by making use of the relation derived in part (b)?
 (d) Derive the lever rule as applicable to the solid-liquid region of a simple eutectic phase diagram.
- 6.5 Explain, what modifications in the phase diagram of a simple eutectic system take place when one of the components exists in two allotropic forms. Show that the transition point is an invariant point.
- 6.6 (a) What do you understand by the congruent and incongruent melting points? What are the number of components and the variance at the congruent melting point of a system consisting of two constituents?
 (b) Explain, why the curve passing through the congruent melting point shows a rounded maximum instead of a sharp intersecting point.
 (c) Draw a typical phase diagram with complete labelling of a two-component system exhibiting a single congruent melting point. Draw also a few typical cooling curves.
- 6.7 (a) What do you understand by the peritectic reaction or incongruent fusion? Show with the help of phase rule that the above reaction takes place at a definite temperature, i.e. the system at the peritectic point is invariant.
 (b) Draw a typical phase diagram of a system exhibiting incongruent compound formation. Explain in what respect it differs from that of a system exhibiting allotropic modification by one of its components.
- 6.8 What is meant by a binary solid solution? How does it differ from a solid mixture? Show that the minimum number of degrees of freedom when a solid solution is in equilibrium with a liquid solution is one. What do you conclude from this regarding the general nature of phase diagram of such a system?
- 6.9 (a) Show that the shift in the freezing point of solvent when a binary solid solution separates on cooling is given by

$$-\Delta T_f = K_f m_{2(l)}(1 - K)$$

where $m_{2(l)}$ is the molality of the solute in the liquid phase and K is the distribution constant defined as

$$K = \frac{\text{Amount fraction of solute in the solid phase}}{\text{Amount fraction of solute in the solution}}$$

What approximations are involved in deriving the above expression?

(b) Under what conditions, (i) an increase in the freezing point of the solvent, and (ii) a decrease in the freezing point of the solvent is observed when a solute is added to the solvent?

From the derived conditions, deduce the statements of Konowaloff's rule as applicable to the solid-liquid equilibria.

6.10 Derive the following relations as applicable to the ascending type solid solution.

$$x_{1(l)} = \frac{\exp(-A) \{ \exp(-B) - 1 \}}{\exp(-B) - \exp(-A)}$$

$$x_{1(s)} = \frac{\exp(-B) - 1}{\exp(-B) - \exp(-A)}$$

where $A = \frac{\Delta_{\text{fus}}H_{1,m}^{\circ}}{R} \left(\frac{1}{T} - \frac{1}{T_1^*} \right)$ and $B = \frac{\Delta_{\text{fus}}H_{2,m}^{\circ}}{R} \left(\frac{1}{T} - \frac{1}{T_2^*} \right)$

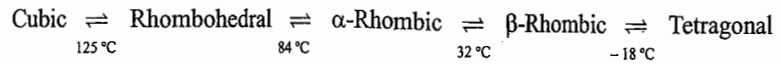
Derive the following conclusions from the above relations:

- (1) None of the relationships is linear.
 - (2) The liquidus and solidus curves do not coincide except at T_1^* and T_2^* .
 - (3) For any composition between 0 and 1, temperature of the liquid and solid curves lies between the melting points of the two components.
- 6.11 Classify phase diagrams involving solid solutions of nonideal binary systems on the basis of the distribution constants $K_{A \text{ in } B}$ (i.e. $x_{A(s)}/x_{A(l)}$, A is acting as a solute and B as a solvent) and $K_{B \text{ in } A}$ (i.e. $x_{B(s)}/x_{B(l)}$, B acting as a solute and A as a solvent). Draw their phase diagrams and label each area and line. Discuss the sequence of events that takes place on cooling a system in the above cases.
- 6.12 (a) What are the end products of fractional crystallization of a system exhibiting (i) ascending type solid solution, (ii) minimum type solid solution, and (iii) maximum type solid solution? (b) Describe the principle underlying the technique of zone refining.
- 6.13 Draw a typical phase diagram of a two-component system in which the two constituents are partially miscible in the solid state and form stable solid solutions. Is it possible to separate completely the two components in such a system by the method of fractional crystallization?
- 6.14 Draw a typical phase diagram of a two-component system in which the two constituents are partially miscible in the solid state and form solid solutions which are stable only up to a transition point. Is it possible to separate completely the two constituents in such a system through fractional crystallization?
- 6.15 Draw a typical phase diagram of a two-component system in which the two constituents are partially miscible in the liquid state and the solid phases consist of pure components.
- 6.16 (a) Draw a simple eutectic phase diagram as shown by KI-H₂O system. Explain, why the name cryohydrate is given to this type of system. Explain, with the help of the phase diagram, the formation of a cooling mixture when a salt is added to ice containing a small amount of water.
- (b) Ferric chloride forms four stable hydrates. These are Fe₂Cl₆·12H₂O, Fe₂Cl₆·7H₂O, Fe₂Cl₆·5H₂O and Fe₂Cl₆·4H₂O. Draw the phase diagram of FeCl₃-H₂O system with complete labelling. Explain, what do you understand by the isothermal evaporation of the solution. Selecting any point in the unsaturated solution region, describe the sequence of steps that takes place during the isothermal evaporation of water.

(c) Draw the phase diagram of Na_2SO_4 -water system and describe its complete labelling. Show thermodynamically that at a given temperature the metastable form is more soluble in water than the stable form.

TRY YOURSELF PROBLEMS

- 6.1 Derive the lever rule for the point c given in Fig. 6.4.1.
 6.2 What types of cooling curves are expected for a one-component system?
 6.3 Solid ammonium nitrate can exist in five crystalline forms with the following transition temperatures:



Explain the type of phase-diagram which you would expect for the $\text{NH}_4\text{NO}_3\text{-H}_2\text{O}$ system.

- 6.4 Explain, why the congruent and incongruent melting points are invariant points.
 6.5 Explain, why we observe a region over which binary solid solution is in equilibrium with the melt. How are the relative amounts of the two solutions, namely, solid and liquid, in equilibrium with each other determined?
 6.6 Figure 6.9.1 shows an eutectic phase diagram of a system exhibiting limited solubility in the solid state. Besides this, if a system also exhibits a compound formation, then the phase diagram has an appearance as shown in Fig. 1. Label the diagram with adequate explanation.

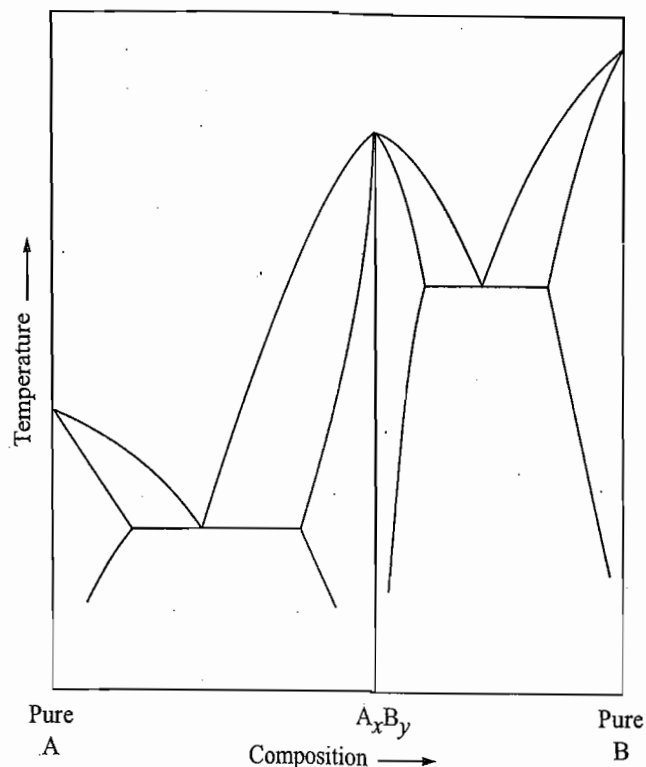


Fig. 1

- 6.7 Figure 6.10.1 is a peritectic phase diagram of a system exhibiting limited solubility in the solid state. Besides this, if a system also exhibits an incongruent compound formation, then the phase diagram has an appearance as shown in Fig. 2. Label the diagram with adequate explanation

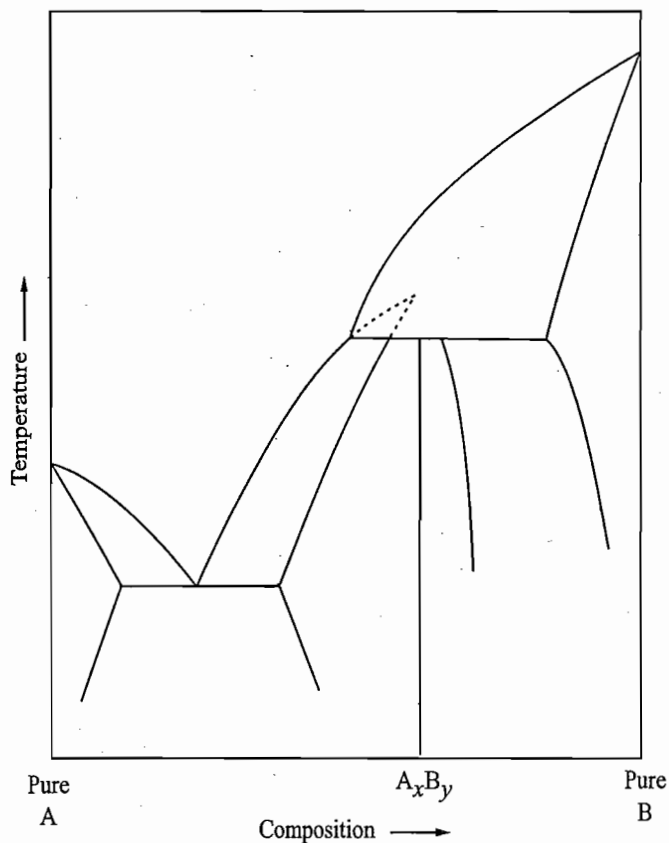


Fig. 2

6.8 Figure 3 depicts the phase diagram of a system where (i) the two components are partially miscible in the liquid phase over a certain range of compositions and (ii) the two components also form two solid solutions. Label the diagram and sketch the cooling curves for the system shown therein.

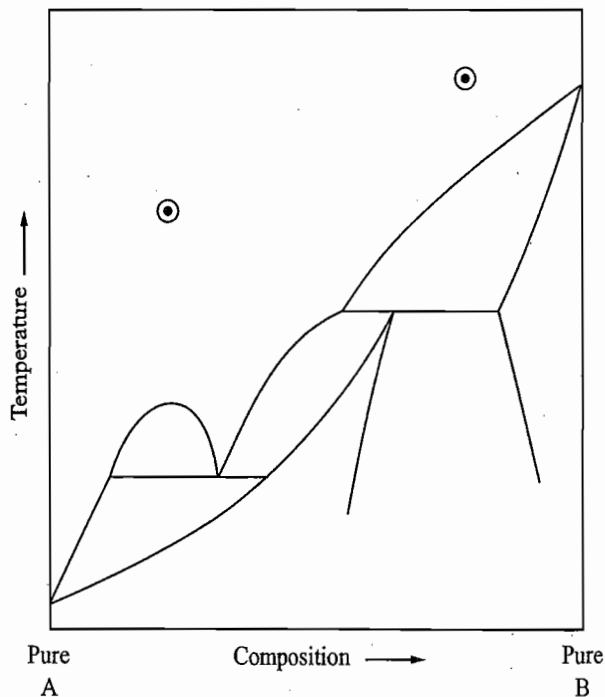


Fig. 3

- 6.9 (a) Given are the following equilibria:
- (i) $\text{CuSO}_4 \cdot 5\text{H}_2\text{O}(\text{s}) \rightleftharpoons \text{CuSO}_4 \cdot 3\text{H}_2\text{O}(\text{s}) + 2\text{H}_2\text{O}(\text{g})$
 - (ii) $\text{CuSO}_4 \cdot 3\text{H}_2\text{O}(\text{s}) \rightleftharpoons \text{CuSO}_4 \cdot \text{H}_2\text{O}(\text{s}) + 2\text{H}_2\text{O}(\text{g})$
 - (iii) $\text{CuSO}_4 \cdot \text{H}_2\text{O}(\text{s}) \rightleftharpoons \text{CuSO}_4(\text{s}) + \text{H}_2\text{O}(\text{g})$

With the help of the phase rule, show that each of the above equilibria is univariant. (b) Let the various equilibria given in part (a) be studied at a constant temperature. Since each equilibrium is univariant, it implies that the pressure of water vapour in equilibrium with two solid salts will have a definite value. Show that this conclusion is in agreement with that derived from a consideration of the equilibrium constant.

(c) At 25 °C, the pressures of water vapour of various equilibria given in part (a) are found to be $p_i = 7.8$ mmHg, $p_{ii} = 5.6$ mmHg and $p_{iii} = 0.8$ mmHg, respectively. The dehydration of $\text{CuSO}_4 \cdot 5\text{H}_2\text{O}$ is studied by enclosing it in a closed container (attached to a vacuum pump and manometer) followed by evacuation. The pressure of the system is determined from time to time and the results obtained are shown in Fig. 4. Explain the results shown therein.

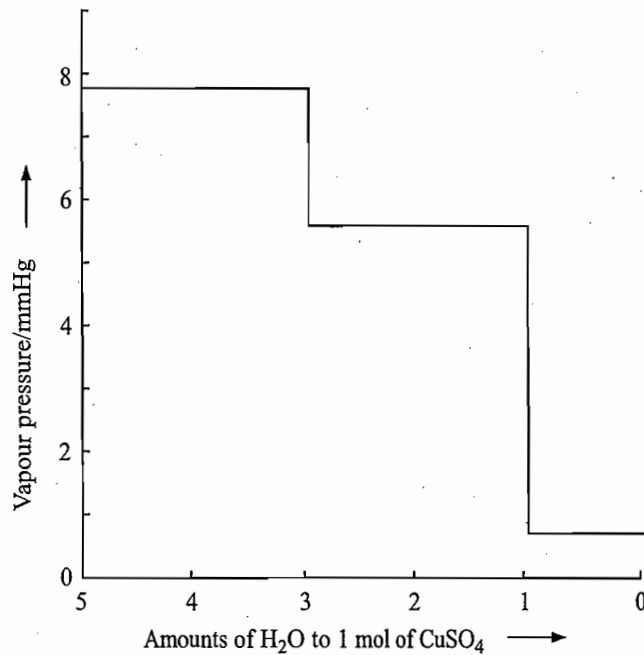


Fig. 4

- 6.10 What type of cooling curve do you expect for a pure substance?
- 6.11 The phase diagram of a binary system exhibiting partial miscibility both in liquid and solid phases has an appearance as shown in Fig. 5. Label the diagram and draw the cooling curves for the points shown therein.
(Ans. (1) L_1 , (2) L_2 , (3) $L_1 + L_2$, (4) solid solution α , (5) α and L_1 , (6) α and L_2 , (7) solid solution β , (8) β and L_2 , and (9) α and β)
- 6.12 The elements Ag and Sr form four stable congruent compounds. Construct the phase diagram of Ag-Sr system from the following data:

m.pt. of Ag 960.5 °C	}	Eu ₁ 750 °C
m.pt. of Ag ₄ Sr 781 °C		
m.pt. of Ag ₅ Sr ₃ 760 °C	}	Eu ₂ 693 °C
m.pt. of AgSr 680°C		
m.pt. of Ag ₂ Sr ₃ 665 °C	}	Eu ₃ 638 °C
m.pt. of Sr 757 °C		
	}	Eu ₄ 645 °C

Label the entire phase diagram.

- 6.13 (a) The phase diagram of the Ca-Al system has the following data:
 m.pt. of Ca 840 °C
 m.pt. of Al 660 °C
 Congruent m.pt. of CaAl_2 1063 °C
 Incongruent m.pt. of CaAl_3 700 °C

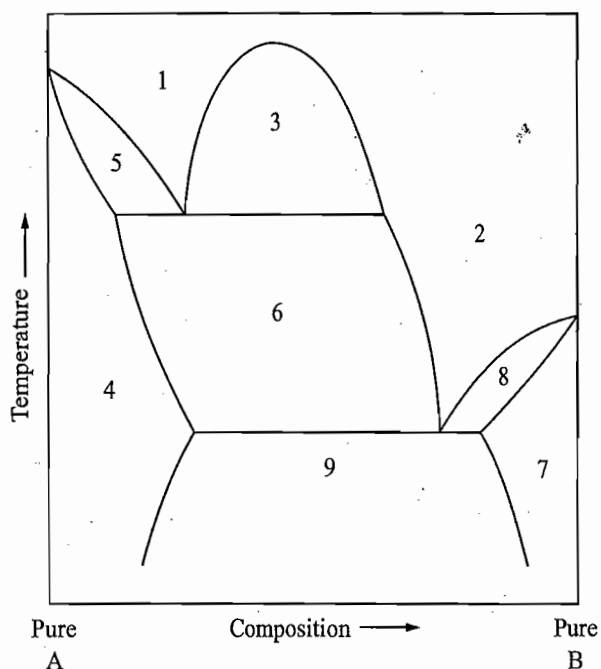


Fig. 5

Composition of the melt at 700 °C is 14 mass % Ca.

Eutectic point involving Ca and CaAl_2 is at 540 °C and has 75 mass % of Ca.

Eutectic point involving Al and CaAl_3 is at 600 °C and has 8 mass % Ca.

(b) Draw the phase diagram and from it predict the nature of the system for the following data:

- | | |
|----------------------------------|-----------------------------------|
| (i) 80 mass % Ca at 700 °C. | (vi) 25 mass % of Ca at 650 °C. |
| (ii) 60 mass % Ca at 800 °C. | (vii) 25 mass % of Ca at 500 °C. |
| (iii) 37 mass % of Ca at 800 °C. | (viii) 10 mass % of Ca at 650 °C. |
| (iv) 37 mass % of Ca at 600 °C. | (ix) 5 mass % of Ca at 640 °C. |
| (v) 25 mass % of Ca at 750 °C. | (x) 5 mass % of Ca at 500 °C. |

Also calculate wherever possible the relative amounts of the two phases.

6.14 Figure 6 depicts the phase diagram of $\text{CuSO}_4\text{-H}_2\text{O}$ system. Label the various

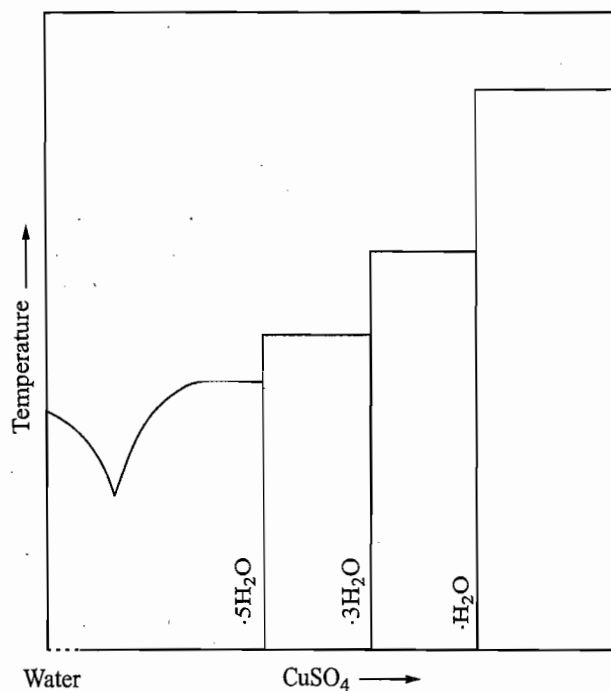


Fig. 6

points, lines and areas of the diagram. Describe the sequence of phase changes if a dilute solution of copper sulphate is dehydrated at 5 °C ending up with anhydrous copper sulphate.

- 6.15 Cooling curves for the binary alloy system, gold-antimony, give the following data:

Mass % Sb	Start of freezing	Completion of freezing
	°C	°C
0	1 063	1 063
10	830	360
20	470	360
30	400	360
40	445	360
45	455	360
55	460	460
60	495	460
70	545	460
80	580	460
90	610	460
100	631	631

- (a) Plot the phase diagram for the system and identify all areas and phases.
 (b) Describe the sequence of events when liquid melts of 20, 50 and 80 amount per cent antimony are cooled from 800 °C to 300 °C.
 (c) If a sample of overall composition 40% by mass Sb were examined at 200 °C. what components would be present and in roughly what proportions?
- 6.16 The following information is known about the two-component A-B system: m.pt. of pure A 660 °C, m.pt. of pure B 1 500 °C. Compound C having 24 mol % B decomposes at 950 °C to give D (50 mol% of B) and liquid containing 20 mol % of B. Compound D melts congruently at 1 650 °C. (Eutectic)₁ at 600 °C, corresponding composition is 10 mol % B. (Eutectic)₂ at 1 380 °C, corresponding composition is 80 mol % B. Draw the phase diagram. Give the form of compounds involved. A melt containing 40 mol % of B is cooled from 1 650 °C. Indicate the various phase changes which take place.
- 6.17 The following information is known about the two-component A-B system:
 Molar mass of A = 24.3 g mol⁻¹, m.pt. of A = 651 °C
 Molar mass of B = 59.7 g mol⁻¹, m.pt. of B = 450 °C
 Two compounds C and D are formed.
 C contains 54.7% by mass of B and melts incongruently at 770 °C yielding D and a liquid containing 38% by mass of B.
 D melts sharply at 1 180 °C yielding a liquid containing 83% by mass of B.
 Two eutectics at 510 °C with 28% by mass of B and at 1 080 °C with 88% by mass of B.
 Solids are immiscible in the solid state and completely miscible in the liquid phase. Construct the phase diagram, and label it. Draw cooling curves for 45% and 60% by mass of B. Deduce the forms of C and D.
- 6.18 The system CaF₂(m.pt., 1 360 °C) and CaCl₂ (m. pt. 772 °C) shows an incongruent behaviour, forming a compound at 1 : 1 ratio. The compound melts at 737 °C giving a liquid containing 60 mol % of CaCl₂. The eutectic point is at 625 °C with the eutectic composition of 80 mol % of CaCl₂. Draw the phase diagram and label it. Draw cooling curves for 50% and 60% by mol of CaCl₂.

- 6.19 Given here are the data of the binary system copper nitrate-water. Construct the phase diagram and label it.

Composition of Saturated Solution at Various Temperatures

<i>Temperature</i> °C	<i>Cu(NO₃)₂</i> g per 100 g <i>solution</i>	<i>Solid phase</i>
- 2.35	8.0	Ice
- 9.3	21.3	"
- 20.0	34.3	"
- 24.0	35.9	Ice + Cu(NO ₃) ₂ · 9H ₂ O
- 21.0	37.4	Cu(NO ₃) ₂ · 9H ₂ O
- 20.0	39.8	Cu(NO ₃) ₂ · 9H ₂ O + Cu(NO ₃) ₂ · 6H ₂ O
0	45.0	Cu(NO ₃) ₂ · 6H ₂ O
+ 20.0	55.6	"
24.5	61.4	Cu(NO ₃) ₂ · 6H ₂ O + Cu(NO ₃) ₂ · 3H ₂ O
40.0	61.5	Cu(NO ₃) ₂ · 3H ₂ O
60.0	64.2	"
80.0	67.5	"
114.5	77.6	"
		Cu(NO ₃) ₂ · 9H ₂ O = 53.7 mass % of Cu(NO ₃) ₂
		Cu(NO ₃) ₂ · 6H ₂ O = 63.5 mass % of Cu(NO ₃) ₂
		Cu(NO ₃) ₂ · 3H ₂ O = 77.7 mass % of Cu(NO ₃) ₂

- 6.20 Give below are the data of the binary system sodium iodide-water. Construct phase diagram and label it.

Composition of Saturated Solution at Various Temperatures

<i>Temperature</i> °C	<i>NaI</i> g per 100 g <i>solution</i>	<i>Solid phase</i>
- 4.25	14.6	Ice
- 9.75	26.5	"
- 31.4	39	Ice + NaI · 5H ₂ O
- 15.2	57.2	NaI · 5H ₂ O
- 13.5	60.2	NaI · 5H ₂ O + NaI · 2H ₂ O
0	61.3	NaI · 2H ₂ O
10	62.8	"
20	64.2	"
30	65.5	"
40	67.2	"
50	69.5	"
60	72.0	"
65	74.4	NaI · 2H ₂ O + NaI
80	74.7	NaI
100	75.1	"
120	76.3	"
140	77.2	"
		NaI · 5H ₂ O = 62.5 mass % NaI
		NaI · 2H ₂ O = 80.6 mass % NaI

6.21 A system of A (1100 °C) and B (600 °C) shows incongruent behaviour. It has a peritectic temperature at 700 °C where a solid containing 25 mol % of B melts giving a liquid of 48 mol % of B. The eutectic temperature is 400 °C and the corresponding composition is 85 mol % of B. Plot a phase diagram and label it. Draw cooling curves for solutions containing 25 mol % B, 48 mol % B and 56 mol % of B.

6.22 The following data were obtained for Mg-Ni system:

m.pt. of Mg = 651 °C

m.pt. of Ni = 1 450 °C

Compound MgNi₂ melts congruently at 1 180 °C.

Compound Mg₂Ni melts incongruently at 770 °C giving a melt of 38 mass % of Ni.

First eutectic at 510 °C with eutectic composition of 28 mass % of Ni

Second eutectic at 1 080 °C with eutectic composition of 88 mass % of Ni

No solid solution formation

Construct phase diagram and label it.

6.23 Describe the sequence of effects that is produced when a 10% solution of ferrous sulphate of Fig. 6.12.5 is subjected to the isothermal dehydration at 10 °C.

6.24 The following data were obtained for the copper-lanthanum system:

Melting point of Cu = 1 083 °C

Melting point of La = 812 °C

The compound LaCu₆ melts congruently at 913 °C

The compound LaCu₄ melts incongruently at 735 °C

The compound LaCu₂ melts congruently at 834 °C

The compound LaCu melts incongruently at 551 °C

Three eutectic temperatures were observed:

840 °C (Cu + LaCu₆)

725 °C (LaCu₂ + LaCu₄)

468 °C (LaCu + La)

Sketch the phase diagram and label each area.

6.25 The melting points and enthalpies of fusion of Pb and Sb are

Pb 327.4 °C 5.10 kJ mol⁻¹

Sb 630.5 °C 20.08 kJ mol⁻¹

Calculate the solid-liquid equilibrium lines. Estimate the eutectic composition graphically and then calculate the eutectic temperature.

(Ans. $x_{Pb} = 0.855$, 520 K)

6.26 Metals A and B form compounds AB₃ and A₂B₃. Solids A, B, AB₃ and A₂B₃ are immiscible in each other as solids but are completely miscible as liquids. Melting points of A and B are 600 °C and 1 100 °C, respectively. Compound A₂B₃ melts congruently at 900 °C and gives a simple eutectic with A at 450 °C. Compound AB₃ decomposes at 800 °C to give another compound and the melt. This gives another eutectic with B at 650 °C. Draw the simplest phase diagram with these facts and label it. Draw cooling curves for melts of 90 mol% A and 30 mol% A.

6.27 The following phase transitions are observed for iron:

Body-centred cubic structure (α-iron) $\xrightleftharpoons{910\text{ °C}}$ Face-centred cubic structure (γ-iron) $\xrightleftharpoons{1401\text{ °C}}$ Body-centred cubic structure (δ-iron) $\xrightleftharpoons{1535\text{ °C}}$ liquid

The iron-rich portion of the phase diagram of iron-carbon system is of interest and is shown in Fig. 7

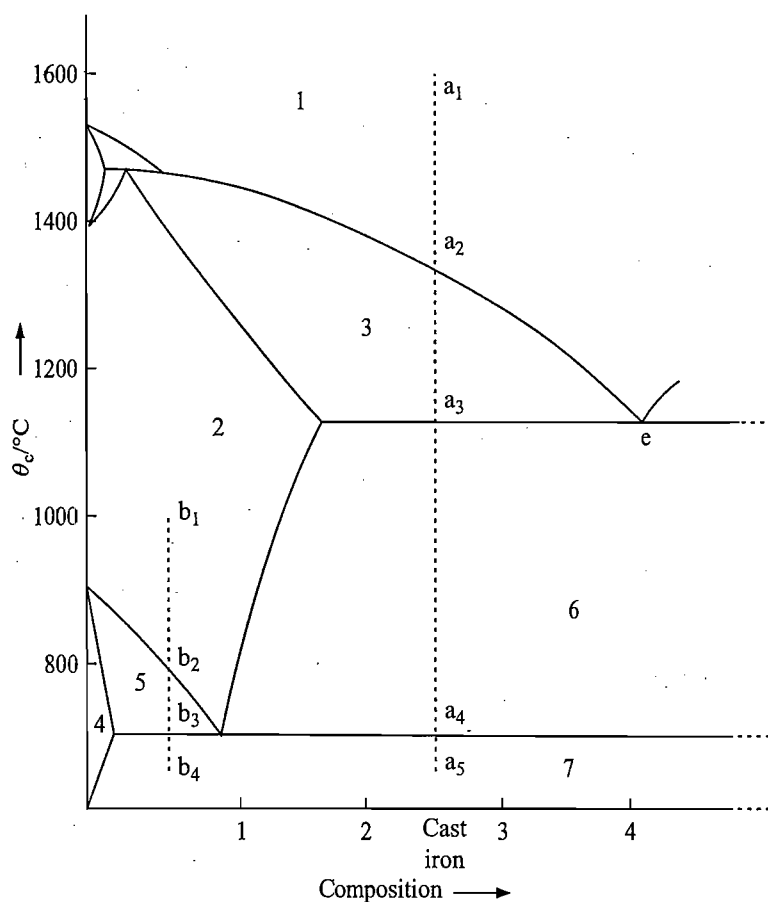


Fig. 7

The description of the phase diagram is as follows.

Location of the system	Status of the system
Areas	
1	Liquid phase
2	Solid solution of Fe and C known as austenite
3	Austenite \rightleftharpoons Liquid
4	α -Fe containing some C
5	Austenite + α -Fe (with some C)
6	Austenite + Fe_3C (called cementite)
7	α -Fe + cementite
Lines	
at 700 °C	A eutectic-type three phase line at 700 °C Phases are α -Fe with some C, austenite and cementite
at 1125 °C	A eutectic-type three phase line. Phases are austenite, liquid and cementite.

Answer the following:

(a) Iron with about 2 per cent carbon forms a fairly crude steel known as cast iron. It has valuable corrosion-resistant properties. One such system in liquid phase is shown by the point a_1 in Fig. 7. Describe the sequence of events that takes place when this system is cooled along the isopleth $a_1a_2a_3a_4a_5$.

(Note: The system of composition of cast iron does not become a single phase until its melting point is reached. If the composition is close to the eutectic, its melting point is low enough to allow a fairly easy casting procedure.)

(b When more of carbon is eliminated, a higher grade of steel is obtained. One such system in the austenite form is shown by the point b_1 in Fig. 7

Describe the sequence of events that takes place when this system is cooled along the isopleth $b_1b_2b_3b_4$.

(Note: Steel when present in austenite form can be rolled very easily. At temperature below 700 °C, it contains α -Fe (with some C) and cementite. The rigidity of steel is due to extreme hardness of cementite.)

6.28 In Mg-Zn system, there are four temperatures at which three phases exist with mass percentage of Zn as follows:

340 °C solid solution α (8%) + liquid (53%) + MgZn

354 °C liquid (55%) + MgZn + MgZn₂

380 °C liquid (96%) + MgZn₂ + MgZn₅

364 °C liquid (97%) + MgZn₅ + Zn

Melting points of Mg, Zn and MgZn₂ are 923 K, 693 K, and 863 K, respectively. Sketch the phase diagram and label it.

7

Phase Diagrams of Three-Component Systems

7.1 APPLICATION OF THE PHASE RULE

The expression of the degrees of freedom of a three-component system as given by the phase rule is

$$F = C - P + 2 = 3 - P + 2 = 5 - P$$

As in the case of a two-component system, various equilibria studied in this chapter do not involve any gaseous phase. Hence, the degrees of freedom of a system are reduced by one. Thus for a condensed three component system, we have

$$F = C - P + 1 = 3 - P + 1 = 4 - P$$

System of One Phase only

In this case, $F = 4 - 1 = 3$, and therefore, the values of three variables have to be stated in order to define the system completely. These are temperature and the amount fractions of any of the two components.

System of Two Phases

Here $F = 4 - 2 = 2$, and thus the values of two variables have to be specified in order to define the system completely. These are temperature and the amount fraction of any one component in either of the two phases. These two phases will be in equilibrium with each other and thus the amount fraction of the stated component in the second phase will have a definite value.

System of Three Phases

In this case, $F = 4 - 3 = 1$, and this degree of freedom is the temperature of the system. All the three phases will have definite compositions at a given temperature.

7.2 SCHEME OF TRIANGULAR PLOT

The most commonly used scheme for plotting the two-dimensional equilibrium diagram for three-component systems is the scheme of triangular plot as suggested by Stokes and Roozeboom. In this scheme, various equilibria are studied at a constant temperature and are plotted in an equilateral triangle as shown in Fig. 7.2.1. The sides of this triangle are divided into 10 (or sometimes more, say 100) equal parts and within the triangle, various lines parallel to the three sides are drawn. The concentrations of various species are represented according to the following scheme.

System Involving One Component

Each apex of the triangle represents a single component system and is designated by the symbol used for the component. For example, point A represents 100% of the component A, or at this point the composition of the ternary system is $x_A = 1$, $x_B = 0$ and $x_C = 0$. In terms of mass per cent, we have 100 mass % of A, 0 of mass % of B and 0 mass % of C.

System Involving Two Components

A point on the sides of the triangle represents a two-component system consisting of the constituents written on either ends of the line. For example, a point anywhere on the line BC in Fig. 7.2.1 represents a two-component system of B and C. The component A is completely absent here and thus has $x_A = 0$. Since the line BC is divided into 10 equal parts, the compositions of systems at the points shown on this line can be determined easily and are described in Table 7.2.1.

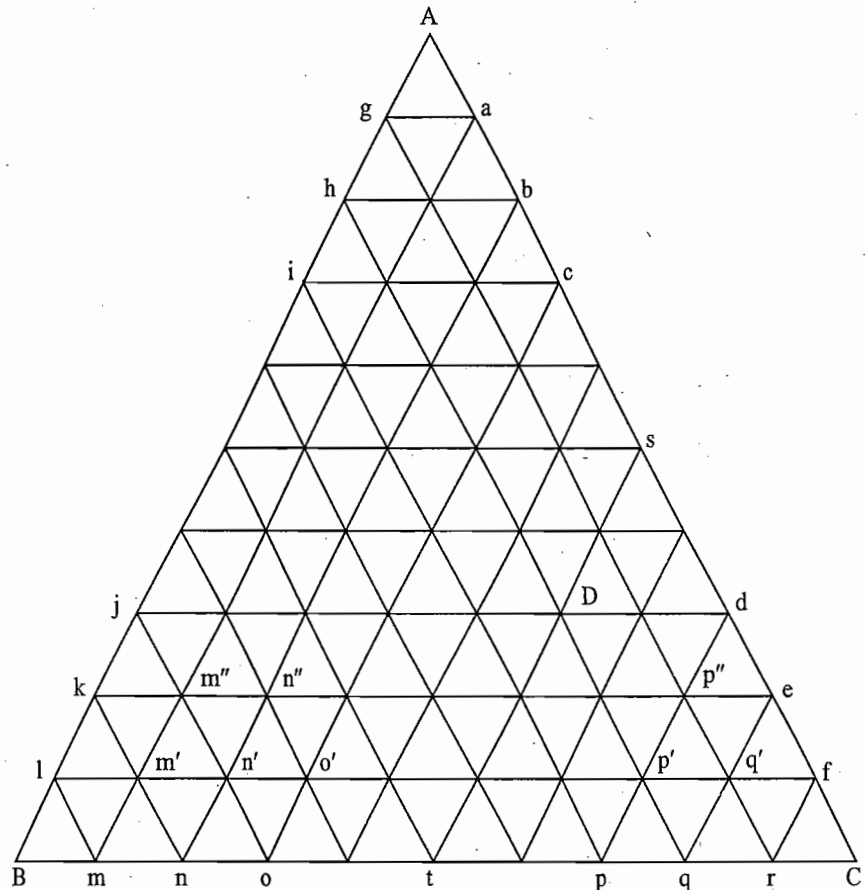


Fig. 7.2.1 The triangle plot

Table 7.2.1 Compositions of Ternary System on the Line BC

Point	Amount fractions		
	x_A	x_B	x_C
B	0.0	1.0	0.0
m	0.0	0.9	0.1
n	0.0	0.8	0.2
—	—	—	—
—	—	—	—
—	—	—	—
q	0.0	0.2	0.8
r	0.0	0.1	0.9
C	0.0	0.0	1.0

Alternatively, the composition at any point on the line BC (or on the other two lines) can be determined with the help of the lever rule. For example, at the point n, we have

$$\frac{\text{Amount of B in the system}}{\text{Amount of C in the system}} = \frac{nC}{Bn} = \frac{8 \text{ units}}{2 \text{ units}}$$

If concentrations are expressed in amount fractions, it is obvious that at the point *n*, the amount fraction of B is equal to 0.8 whereas that of C is 0.2.

System Involving Three Components

The perpendicular distance from A to BC is also divided into ten equal parts with lines drawn parallel to the line BC, and thus these parallel lines represent systems with different proportions of the component A; x_A being one at A and zero on the line BC. Points anywhere on one of the parallel lines represent systems with a constant amount fraction of the component A. For example, the line *lf* represents the systems with $x_A = 0.1$. It can be verified that the length of this line is 9/10 of the line BC and thus it represents a total amount fraction of 0.9 of both the components B and C. At the point *l*, composition of the system is $x_A = 0.1$, $x_B = 0.9$ and $x_C = 0.0$ and that at the point *f* is $x_A = 0.1$, $x_B = 0.0$ and $x_C = 0.9$. The line *lf* is divided into nine equal parts. The compositions of systems at the points shown on this line are described in Table 7.2.2.

Table 7.2.2 Compositions of Ternary Systems on the Line *lf*

Point	Amount fractions		
	x_A	x_B	x_C
<i>l</i>	0.1	0.9	0.0
<i>m'</i>	0.1	0.8	0.1
<i>n'</i>	0.1	0.7	0.2
—	—	—	—
—	—	—	—
—	—	—	—
<i>p'</i>	0.1	0.2	0.7
<i>q'</i>	0.1	0.1	0.8
<i>f</i>	0.1	0.0	0.9

On the line *ke*, compositions of systems represented by the points as shown in Fig. 7.2.1 are given in Table 7.2.3.

Table 7.2.3 Compositions of Ternary Systems on the Line *ke*

Point	Amount fractions		
	x_A	x_B	x_C
<i>k</i>	0.2	0.8	0.0
<i>m''</i>	0.2	0.7	0.1
<i>n''</i>	0.2	0.6	0.2
—	—	—	—
—	—	—	—
—	—	—	—
<i>p''</i>	0.2	0.1	0.7
<i>e</i>	0.2	0.0	0.8

The compositions of ternary systems on the other parallel lines can be similarly written down.

The composition of a ternary system with non-zero amount fractions of components can be represented by a point within the triangle. The composition corresponding to any given point (or the location of the point corresponding to any given composition) can be readily determined by the above method. Take, for example, the point D shown in Fig. 7.2.1, the composition corresponding to this point can be determined as follows:

- (i) This point lies on the third parallel line from the bottom of BC and thus has $x_A = 0.3$.
- (ii) This point also lies on the second parallel line from the line AC and thus has $x_B = 0.2$.
- (iii) This point lies on the fifth parallel line from the line AB and thus has $x_C = 0.5$.

Hence, the composition of the system is

$$x_A = 0.3, \quad x_B = 0.2 \quad \text{and} \quad x_C = 0.5$$

METHODS OF COMPUTING COMPOSITION OF A TERNARY SYSTEM

The following general methods may be employed for computing the composition of a ternary system.

Method of Parallel Lines

From the given point (say, D in Fig. 7.2.1) draw three lines parallel to the three sides of the triangle. It can be proved that the sum of the lengths of these three such lines is always constant and is equal to the side of the triangle.[†] Moreover, distance of the line from the point D to any side is proportional to the amount fraction of the component occupied by the opposite corner. Thus, we have

Length of the line Dd (or Ds) \propto amount fraction of B

Length of the line Dt (or Dq) \propto amount fraction of A

Length of the line Dh (or Dj) \propto amount fraction of C

The ratio of the lengths of these lines are

$$Dd : Dh : Dt :: 2 : 5 : 3$$

and thus the composition of the system is

$$x_B = 0.2, \quad x_C = 0.5 \quad \text{and} \quad x_A = 0.3$$

[†]The parallel lines drawn from the point D are Dh, Dt and Dd. We have the following equalities:

$$Dt = Dq, \quad Dd = qe = eC, \quad hq = Ae$$

Now the sum of the lengths of the three sides is

$$Dh + Dt + Dd = Dh + Dq + eC = hq + eC = Ae + eC = AC$$

**Method of
Perpendicular Lines**

From the given point, draw three perpendiculars De, Df and Dg on the three sides of the triangle as shown in Fig. 7.2.2.

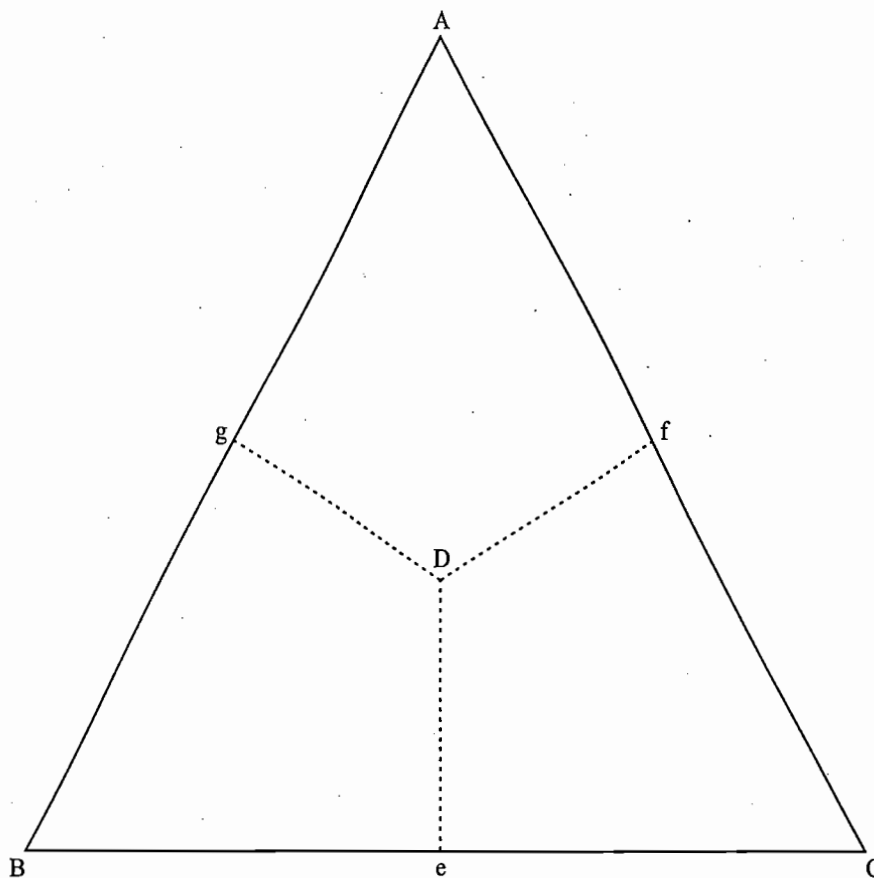


Fig 7.2.2 Computation of composition of a ternary system

The distances De, Df and Dg will be proportional to the amounts of A, B and C, respectively. Thus

$$\frac{\text{Length of line De}}{\text{Sum of the lengths of lines De, Df and Dg}} = x_A$$

$$\frac{\text{Length of line Df}}{\text{Sum of the lengths of lines De, Df and Dg}} = x_B$$

$$\frac{\text{Length of line Dg}}{\text{Sum of the lengths of lines De, Df and Dg}} = x_C$$

It can be shown that the sum of the three perpendiculars De, Df and Dg is equal to $0.867 \times$ edge-length of the triangle. Thus, if edge-length is 100 mm, the above relations of amount fractions are modified as follows:

$$\frac{\text{Length of line De}}{86.7 \text{ mm}} = x_A$$

$$\frac{\text{Length of line Df}}{86.7 \text{ mm}} = x_B$$

$$\frac{\text{Length of line Dg}}{86.7 \text{ mm}} = x_C$$

A Direct Method

If the edge-length of the triangle is 100 mm, a direct method for computing composition for a given point D (or vice versa) may be employed. At point D, a scale parallel to the side BC is placed and the distances in mm between the point D and the sides AB and AC are measured. These distance yield directly the per cent of C and B, respectively.[†] The per cent of A at the point D will be $100 - (\% B + \% C)$.

For locating a point corresponding to the given composition, we adopt the following procedure. The distance of perpendicular from apex A to the side BC is

$$0.867 (\text{edge-length}) = 0.867 \times 100 \text{ mm} = 86.7 \text{ mm}$$

This length represents 100 per cent of A. The per cent composition of A in the given ternary system is multiplied by 0.867 and let it be x . A scale at a distance of x (in mm) parallel to the side BC is placed and a point at a distance (in mm) equal to the per cent of C from the side AB is located. This point represents the required composition of the given ternary system.

Alternatively, a point at a distance (in mm) equal to the given per cent of A along the side BA or CA (i.e. from B or C towards A) is located. A scale at this point parallel to the side BC is placed and a point at a distance (in mm) equal to the given per cent of C from the side AB as located. This point represents the required composition of the given ternary system.

By Using the Lever Rule

The composition corresponding to a given point can be determined by making use of the lever rule twice. For example, for the point a shown in Fig. 7.2.3, we can determine its composition as follows.

A line Aa joining the apex A and the given point a is drawn and is extended up to the side BC. Applying the lever rule at a along the line Ab, we get

$$\frac{\text{Total mass of B and C}}{\text{Mass of A}} = \frac{Aa}{ab} \quad (7.2.1)$$

Adding one on both sides and taking its inverse, we have

$$\frac{\text{Mass of A}}{\text{Total mass of A, B and C}} = \frac{ab}{Ab}$$

$$\text{or} \quad \text{Mass of A} = \left(\frac{ab}{Ab} \right) (\text{Total mass of A, B and C}) \quad (7.2.2)$$

Now applying the lever rule at b along the line BC, we get

$$\frac{\text{Mass of C}}{\text{Mass of B}} = \frac{Bb}{bC} \quad (7.2.3)$$

[†]If the edge-length is not equal to 100 mm (say, x) the lengths may be multiplied by a factor of $100 \text{ mm}/x$ to yield directly the per cent compositions C and B, respectively.

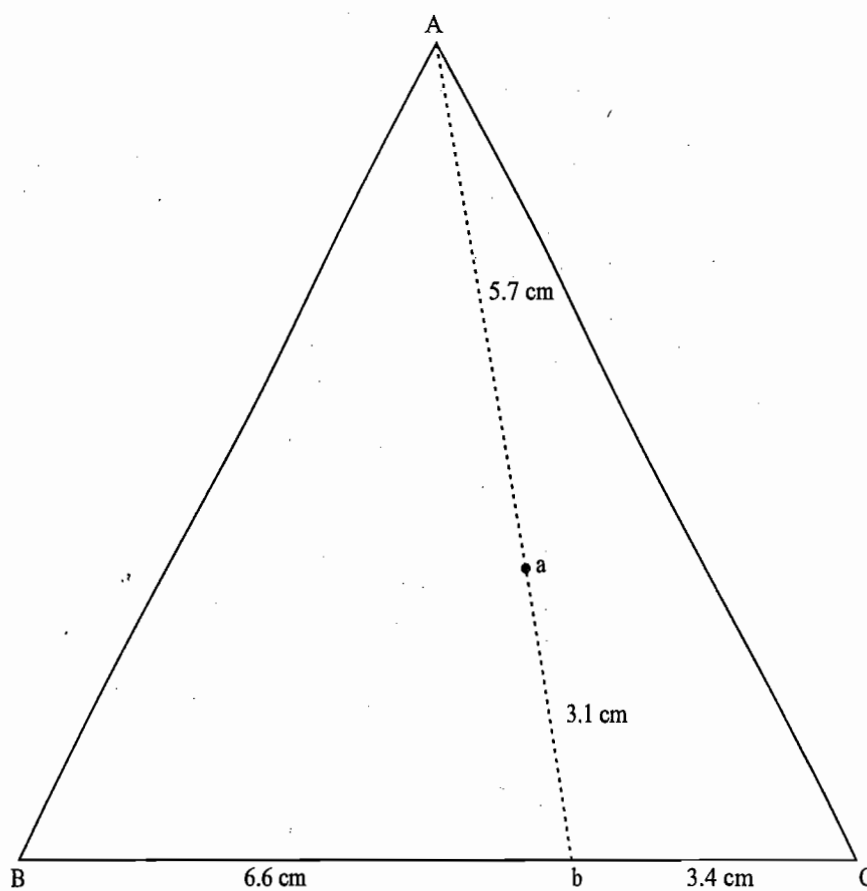


Fig. 7.2.3 Use of the lever rule within a triangle

Adding one on both sides and taking its inverse, we get

$$\frac{\text{Mass of B}}{\text{Mass of B and C}} = \frac{bC}{BC}$$

or
$$\text{Mass of B} = \left(\frac{bC}{BC} \right) (\text{Mass of B and C}) \quad (7.2.4)$$

Finally, we will have

$$\text{Mass of C} = (\text{Total mass of A, B and C}) - (\text{Mass of A and B}) \quad (7.2.5)$$

For calculating per cent composition, total mass of A, B and C will be equal to 100 g. Thus, Eqs (7.2.2), (7.2.4) and (7.2.5) will be reduced to

$$\text{Mass of A} = \left(\frac{ab}{Ab} \right) (100 \text{ g})$$

$$\text{Mass of B} = \left(\frac{bC}{BC} \right) (100 \text{ g} - \text{mass of A})$$

$$\text{Mass of C} = 100 \text{ g} - (\text{mass of A and B})$$

Hence, for the point a, shown in Fig. 7.2.3, we have

$$\text{Mass of A} = \left(\frac{3.1 \text{ cm}}{8.8 \text{ cm}} \right) (100 \text{ g}) = 35.23 \text{ g}$$

$$\text{Mass of B} = \left(\frac{3.4 \text{ cm}}{10 \text{ cm}} \right) (100 \text{ g} - 35.23 \text{ g}) = 22.02 \text{ g}$$

$$\text{Mass of C} = 100 \text{ g} - (35.23 \text{ g} + 22.02 \text{ g}) = 42.75 \text{ g}$$

Method Based on the Two Features of an Equilateral Triangle

The following two features of an equilateral triangle can also be used to locate the point corresponding to a given ternary system or vice versa.

(1) Various systems with a constant ratio of two components and the varying amount of the third component will lie on a line drawn from the apex representing the third component to the opposite side of the triangle. Take, for example, the perpendicular line AX from the corner A to the opposite side BC in Fig. 7.2.4.

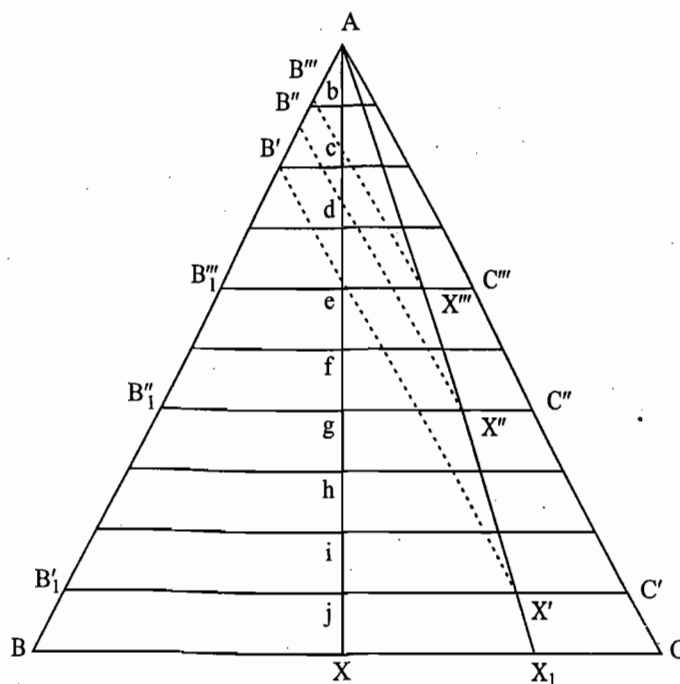


Fig. 7.2.4 Triangular plot showing various systems of constant ratio of B and C and varying amount of A.

This line intersects just in the middle of various lines drawn parallel to BC and hence a point anywhere on this line represents a system in which the ratio of the components B and C is always one (i.e. equal amount fractions of B and C). The compositions of systems represented by the points on this line as shown in Fig. 7.2.4 are given in Table 7.2.4.

Table 7.2.4 Compositions of the Ternary System on the Line AX.

Point	Amount fractions		
	A	B	C
A	1.0	0	0
b	0.9	0.05	0.05
c	0.8	0.1	0.1
—	—	—	—
—	—	—	—
—	—	—	—
i	0.2	0.4	0.4
j	0.1	0.45	0.45
X	0.0	0.5	0.5

The fact that a point on the line AX represents a constant ratio of B and C is also true for any line drawn from A to BC. For example, on the line AX₁ of Fig. 7.2.4, the constant ratio of B and C is

$$\frac{\text{Amount fraction of B}}{\text{Amount fraction of C}} = \frac{CX_1}{BX_1} = \frac{C'X'}{B_1'X' \text{ (or } B'X')} \\ = \frac{C''X''}{B_1''X'' \text{ (or } B''X'')} = \frac{C'''X'''}{B_1'''X''' \text{ (or } B'''X''')}$$

The above feature can also be used to locate the point corresponding to the composition of a given ternary system (say, for example, x mass % A, y mass % B and z mass % C). First of all, a binary system (say B-C) having the given ratio of B and C in the ternary system is imagined. In the present case, the binary system B-C will contain $y/(y+z) \times 100$ mass per cent of B). A point on the line BC corresponding to this composition (say, b in Fig. 7.2.3) is chosen and it is joint with the apex A. The distance bA represents 100 mass % A. The length corresponding to the given mass per cent A is determined. In the present case, it is

$$\left(\frac{bA}{100 \text{ mass \% A}} \right) (\text{mass \% A})$$

A point at the above distance on the line bA from the side BC is located. This point represents the required composition of the ternary system.

(2) The fact that the binary systems A-B, B-C and A-C are represented by points on the lines AB, BC and AC, respectively, and the ternary system A-B-C by a point within the triangle ABC can be extended to any line or smaller triangle within bigger triangle ABC. For example, a point on the line DE in Fig. 7.2.5 represents a system that is composed of two systems D and E with their relative amounts as given by the lever rule. Take, for example, the point G on the line DE. The system corresponding to this point can be prepared from the two systems D and E by mixing them in the following ratio.

$$\frac{\text{Amount of D in the system}}{\text{Amount of E in the system}} = \frac{GE}{DG}$$

In other words, we can say that all systems that can be prepared from D and E will lie on the line DE. The same is also true on the lines EF and FD. Thus, all those systems which can be prepared by mixing E and F will lie on the line EF whereas those prepared from F and D will lie on FD. In a similar manner, all possible combinations that can be prepared from D, E and F will lie within the triangle DEF. Their relative amounts may be determined by employing the lever rule twice.

Classification of Three-Component Systems

Many categories of three-component systems are possible depending on the characteristics of the components. For example, the given component may exist either in the liquid form or in the solid form and may be miscible or partially miscible or completely immiscible with other components. In the present chapter, we will consider only two important categories of these systems. These are:

- (i) Systems composed of three liquid components which exhibit partial miscibility.
- (ii) Systems composed of two solid components and a liquid.

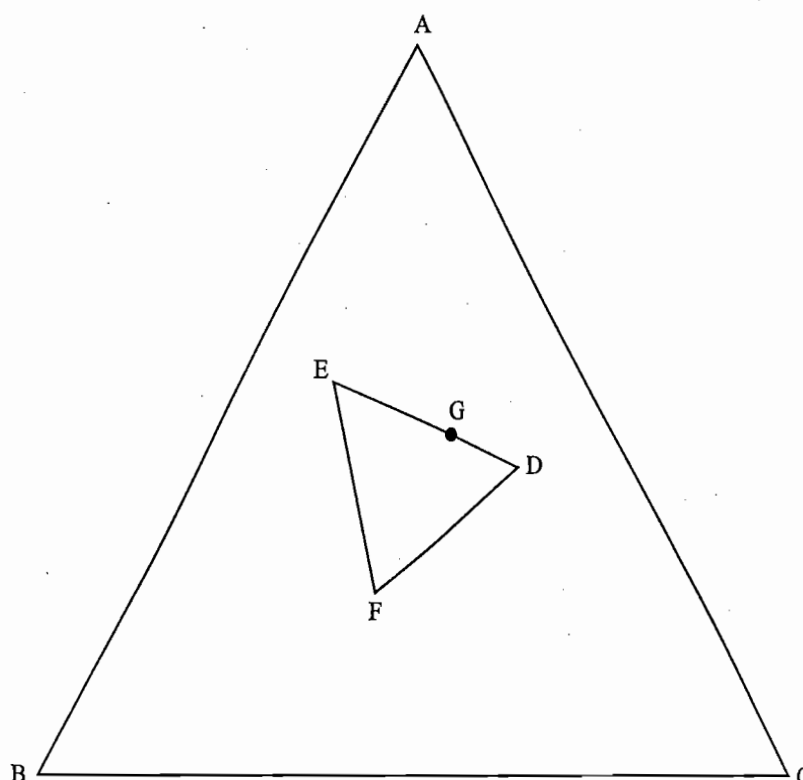


Fig. 7.2.5 Triangular plot showing the application of the lever rule on any line drawn within the triangle

In the next two sections, we shall consider the triangular plots of systems belonging to the above two categories.

7.3 SYSTEMS OF THREE LIQUID COMPONENTS EXHIBITING PARTIAL MISCIBILITY

In this section, we consider the following three possibilities based on the mutual solubilities of the three components.

- Formation of one pair of partially miscible liquids.
- Formation of two pairs of partially miscible liquids.
- Formation of three pairs of partially miscible liquids.

The general appearance of triangular plots of these three possibilities are discussed below one after the other.[†]

FORMATION OF ONE PAIR OF PARTIALLY MISCIBLE LIQUIDS

System of Two Partially Miscible Liquids

We assume that out of the three components A, B and C, the components B and C show partial mutual solubility with each other and the third component A exhibits complete miscibility with both the components B and C. Let us start with only two components B and C. The state of such a system can be represented

[†]Throughout this Chapter, a system is represented by an alphabet, printed in roman type, and its composition is represented by the same alphabet printed in italics.

by a point on the line BC. The two components will be completely miscible in each other only in the limited range of concentrations and will exhibit partial miscibilities beyond these ranges with the formation of two conjugate saturated solutions, one composed of a solution of C in B and the other of B in C. These two solutions will have definite compositions at a given temperature and will be independent of individual amounts of the two liquids. Let these compositions be represented by the points b and c on the line BC as shown in Fig. 7.3.1. Thus, the two liquids B and C will be completely miscible in each other from the range B to b and from c to C and form two conjugate solutions b and c in the range b to c.

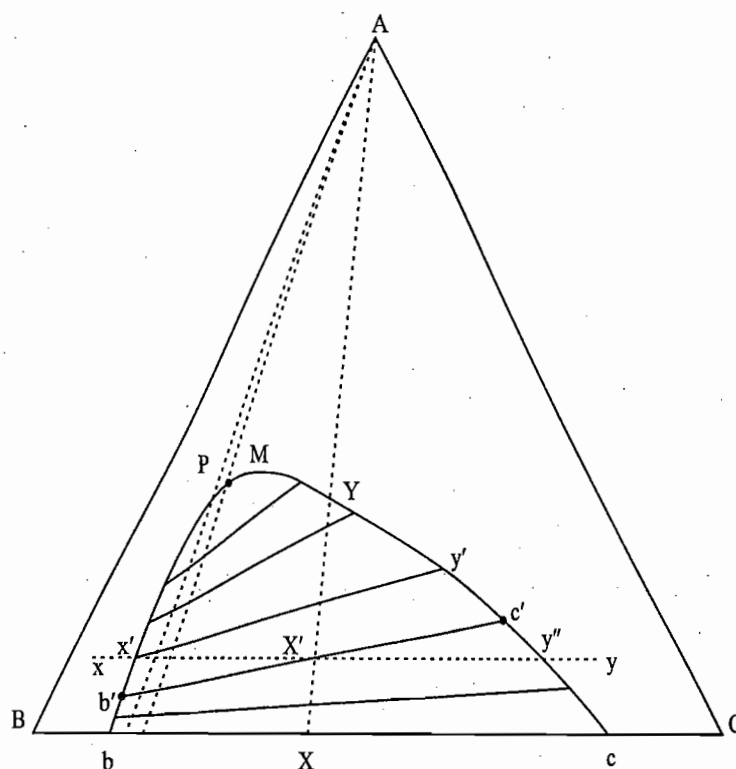


Fig. 7.3.1 Triangular plot showing the formation of one pair of partially miscible liquids

The relative amounts of these two solutions can be determined with the help of the lever rule. For example, at the point X, we have

$$\frac{\text{Amount of the solution of C in B}}{\text{Amount of the solution of B in C}} = \frac{Xc}{Xb}$$

Effect of Adding Third Component

If now the component A is added to a system represented by a point on the line BC, the state of the system will move along a line obtained by joining the given point with the apex A. Let us add this component to a system represented by the point X. Since A is miscible in both the conjugate solutions, the addition of A will cause an increase in the mutual solubilities of the two components B and C. Consequently, compositions of the two conjugate solutions will now become more close to each other.

Nature of the Tie Line

As usual the compositions of the two conjugate solutions will be given by the two ends of a tie line. In general, the various tie lines are neither parallel to the line BC nor parallel to each other, if the added component A is not equally

soluble in both the solutions. If the component A is relatively more soluble in the layer rich in C than it is in the layer rich in B, then obviously the state point of the layer rich in C will lie nearer to the apex A than that of the layer rich in B. The tie line becomes shorter and shorter as more of A is added to the system indicating that the compositions of the two solutions become closer and closer to each other. This is consistent with the fact that the mutual solubilities of the two components increase as more and more of A is added to the system.

Plait Point

At point P, compositions of the two solutions become identical and thus two solutions merge into each other and form a single solution. This is an invariant point (at constant T and p , $F = C - r - P + 0 = 3 - 1 - 2 = 0$) and is known as *plait point*.

Binodal Curve

When a smooth curve passing through various points representing the compositions of the conjugate solutions is drawn, one gets a *binodal curve* bPc, with a maximum at M. In general, the plait point P lies either to the left or to the right of this maximum point M since various tie lines are not horizontal. The plait point will coincide with the maximum only in one particular case when the added constituent distributes equally in both the layers. In this particular case, various tie lines are horizontal and thus at the maximum point M, the two solutions have identical compositions and thus merge into each other to form a single solution.

General Characteristics of the Phase Diagram

The general characteristics of the phase diagram of a system exhibiting one pair of partially miscible liquids can now be summarized as follows:

Point outside the binodal curve A point outside the binodal curve bPmC represents one liquid layer only. According to the phase rule, such a system can be completely defined if the values of two degrees of freedom, apart from temperature and pressure, are stated ($F = C - P + 2 = 3 - 1 + 2 = 4$, minus 2 of temperature and pressure, and thus $F = 4 - 2 = 2$). These two degrees of freedom are the two composition terms corresponding to any of the two components of the liquid phase.

Point within the binodal curve A point inside the binodal curve represents a system in which the two partially miscible liquid solutions are formed. The compositions of these two solutions are the intersection points of the tie line drawn from the point under study with the binodal curve. The relative amounts of the two solutions are given by the lever rule. For example, at the point X', we have

$$\text{Composition of the solution of B in C (i.e. richer in C)} = c'$$

$$\text{Composition of the solution of C in B (i.e. richer in B)} = b'$$

$$\text{and } \frac{\text{Amount of the solution of B in C (i.e. richer in C)}}{\text{Amount of the solution of C in B (i.e. richer in B)}} = \frac{b'X'}{c'X'}$$

Applying the phase rule to a system within the binodal curve (where $P = 2$), we have

$$F = C - P + 2 = 3 - 2 + 2 = 3$$

Leaving two degrees of freedom corresponding to the constant temperature and pressure, we have

$$F = 1$$

and thus one concentration term, which allows the position of one layer to be fixed on the binodal curve, is sufficient to define the system completely.

Effects Produced When the Component A is Added to a Binary System of B and C

As indicated earlier the state of the overall system will move along a line obtained by joining the state point, say X in Fig. 7.3.1, of the binary system with the apex A of the triangle. In general, the following two types of behaviour are observed depending on the original composition of the binary system.

When the line AX does not pass through the plait point P Suppose the line AX lies to the right of the plait point P. Then as we move from X to A, we observe that the relative lengths of tie lines right to the line AX decrease steadily till the point Y is reached. The net effect that is produced is that the relative amounts of the two solutions change as more and more of A is added to the system; the amount of the solution of C in B decreases steadily whereas that of B in C steadily increases.[†] At the point Y, practically whole of the solution of C in B disappears and the system mainly consists of the solution of B in C. Above the point Y, the system remains that of one liquid only. Thus, the conversion of two liquid layers into one takes place through the vanishing of liquid layer of C in B. The same is also true if the line AX lies left to the point P. Here, it is the solution of B in C that gradually decreases and ultimately disappears completely.

When the line AX passes through the plait point P The above behaviour of conversion of two liquid layers into one layer through the vanishing of one of the layers, however, is not observed when the line AX passes through the plait point P. In this case, both the solutions remain intact right up to the point P but their compositions approach each other and become identical at the point P. Consequently, the two liquid layers merge into each other at the point P to give a single liquid layer. Thus, the production of a single layer is not through the disappearance of one of the liquid layers but through the merger of the two solutions into each other at the point P. Similarly, the effects produced when component B (or C) is added to a mixture of A and C (or A and B) can be analysed.

Effects Produced When the Proportion of A is Kept Constant and the Amounts of Other Two Components are Varied

The state of the system in which the proportion of A is kept constant and the

[†]Strictly speaking, after adding A, we get a ternary system of A, B and C. However, for the sake of discussion, we retain the original terminology of binary system. Thus for a ternary system, a solution of B in C means a solution of A and B in C or a solution that is richer in C.

amounts of the other two are varied will be represented by the points on a line drawn parallel to the side BC of the type xy shown in Fig. 7.3.1. The sequence of effects that is produced as one moves from x to y can be readily interpreted with the help of Fig. 7.3.1. The system continues to be a single layer till the binodal curve is reached where the single liquid splits into two layers x' and y' ; the former being the solution of C in B whereas the latter is of B in C. Now as one moves from x' to y'' , one finds that the line xy cuts various tie lines in different ratios as can be seen from the lengths of tie-lines below the line $x'y''$ and those lying above this line; the former increases gradually whereas the latter decreases. Consequently, the relative amounts of the two solutions vary as one moves from x' to y'' ; the amount of the solution of B in C gradually increases whereas that of C in B gradually decreases. Besides this, composition of the solution of C in B moves along $x'b'$ whereas that of B in C moves along $y'y''$. At the point y'' , the solution of C in B completely disappears and thus the system mainly consists of the solution of B in C. From y'' to y , the system continues to be a single liquid. The above sequence of conversion from one layer to two, and then back to one layer will be observed only for those liquids which contain lesser amount of component A as compared to that present in a solution corresponding to the maximum point M of the binodal curve.

If the original composition of the system happens to lie between P and M, it is obvious that the single solution that splits into two is of the one of B in C. The two solutions again merge on the other side of the binodal curve to the given back the solution of B in C. This behaviour is observed whenever the amount of A in the original system lies between *plait* point P and maximum point M. Such solutions are said to show *retrograde solubility*.

Effect of Temperature

Area within the binodal curve of a triangular plot represents the region of partial miscibility where two conjugate solutions are formed. If it be assumed that the mutual solubilities of these two solutions increase with increasing temperature, the compositions of the two solutions will come more close to each other when the temperature is increased. Consequently, the area enclosed by the binodal curve will become smaller and smaller. In order to express these effects adequately, we will have to construct triangular plots at different temperatures and then correlate them with each other or, alternatively, a 3-dimensional plot can be constructed with an equilateral triangle as a base and the vertical axis representing temperature of the system. This model, in fact, will be a triangular prism. Any horizontal section of such a three-dimensional diagram gives a triangular plot at a constant temperature. However, in the present case, the general behaviour can be understood by plotting a number of isothermal binodal curves in the same triangle as shown in Fig. 7.3.2. The binodal curve enclosing larger area corresponds to a lower temperature as the mutual solubilities of the two conjugate solutions are lesser at lower temperatures. At a sufficiently low temperature, the area covered may become so large that the binodal curve may cut the side AB as shown in Fig. 7.3.2 indicating that the two components A and B like B and C also become partially miscible with each other.

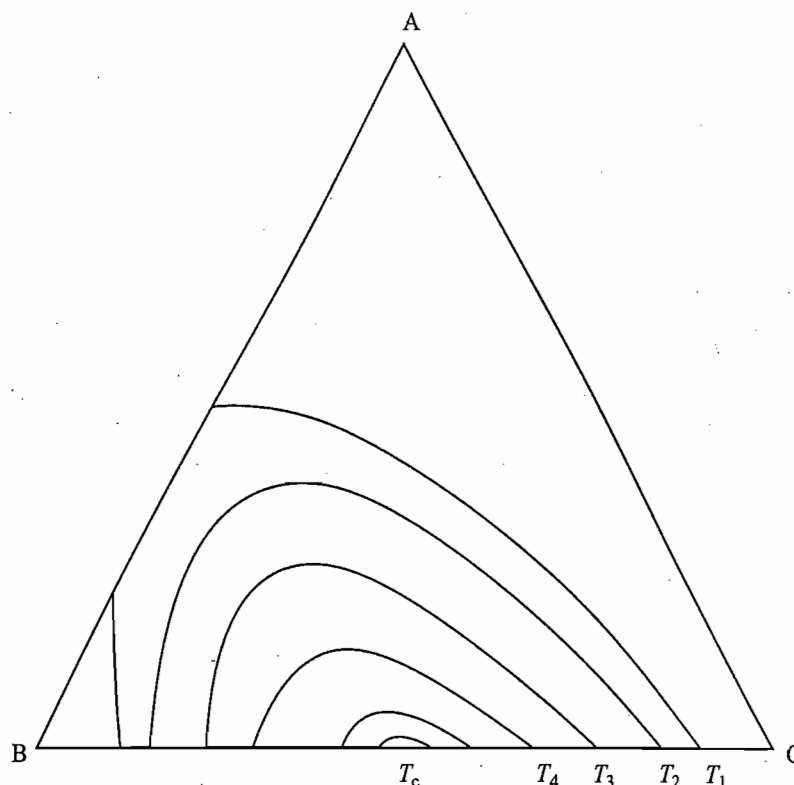


Fig. 7.3.2 Effect of temperature on the binodal curve, $T_1 < T_2 < T_3 < T_4 < \dots < T_c$

Critical Solution Temperature

When the temperature is raised, the area enclosed by the binodal curve becomes smaller and smaller and is ultimately reduced to a point at a sufficiently high temperature (say, at T_c). Thus, the three liquids will become completely miscible in all proportions at temperatures greater than T_c . The temperature T_c for this reason is known as the *critical solution temperature* for the ternary system. This, however, is not true as on the line BC, where this point lies, we have a system of two components of B and C, and thus more precisely, temperature T_c should be known as the *binary critical solution temperature*.

The true critical solution temperature for the ternary system is observed only when the various binodal curves have the general appearance as shown in Fig. 7.3.3. In this particular case, the binodal curves at high temperatures consists of closed curves and thus have two plait points. The area of the closed curve decreases as the temperature is raised and ultimately reduces to a point K at some higher temperature. It is obvious that at temperatures higher than this, the three liquids will be completely miscible and thus the system consists of a single liquid layer only. The temperature corresponding to the point K is, in fact, the true critical solution temperature for the ternary system.

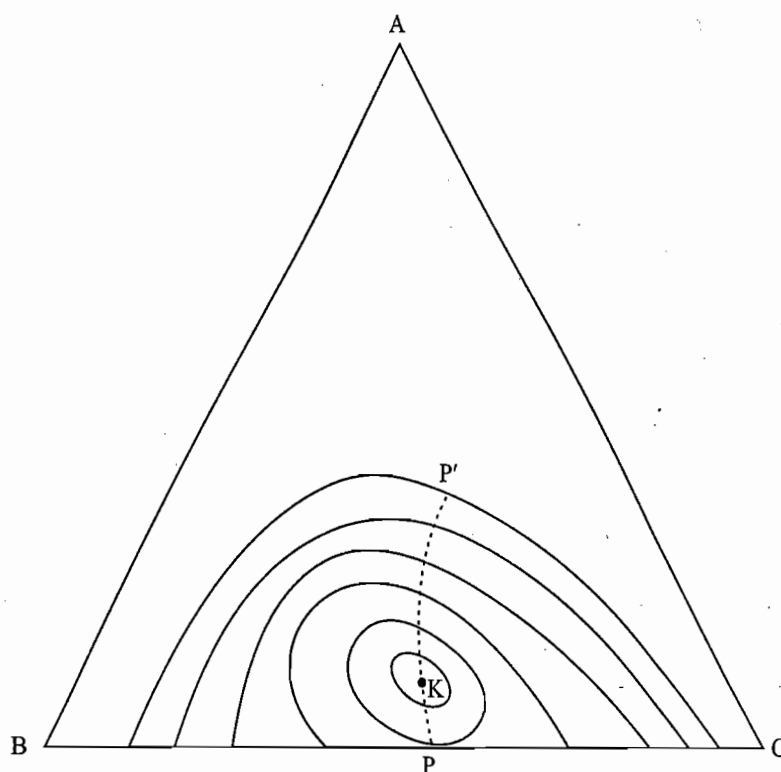
Examples Examples of system yielding one pair of partial miscible liquids are

Acetic acid-chloroform-water (Fig. 7.3.1)

Aniline-phenol-water at 50 °C (Fig. 7.3.2)

Acetone-phenol-water (Fig. 7.3.3)

Fig. 7.3.3 Triangular plot showing the critical solution temperature for the ternary system



Example 7.3.1

For the ternary system benzene-isobutanol-water at 25 °C and 1 atm, the following compositions have been obtained for the two phases in equilibrium.

Water-rich phase		Benzene-rich phase	
<i>isobutanol</i>	<i>water</i>	<i>isobutanol</i>	<i>benzene</i>
<i>mass %</i>	<i>mass %</i>	<i>mass %</i>	<i>mass %</i>
2.33	97.39	3.61	96.20
4.30	95.44	19.87	79.07
5.23	94.59	39.57	57.09
6.04	93.83	59.48	33.98
7.32	92.64	76.51	11.39

Plot these data on a triangular graph, indicating the tie lines.

- (a) Estimate the compositions of phases that will be produced from a mixture of 20 mass % isobutanol, 55 mass % water and 25 mass % benzene and also calculate their relative amounts.
- (b) What will be the composition of the principal phase if the first drop of the second phase separates when water is added to a solution of 80 mass % isobutanol in benzene?

Solution

The triangular plot obtained is shown in Fig. 7.3.4.

(a) The compositions of the two conjugate solutions produced at the given composition point a (20 mass % isobutanol + 55 mass % water and 25 mass % benzene) are

- (i) Water-rich layer: 5.23 mass % isobutanol, 94.5 mass % water
 (ii) Benzene-rich layer: 39.57 mass % isobutanol, 57.09 mass % benzene

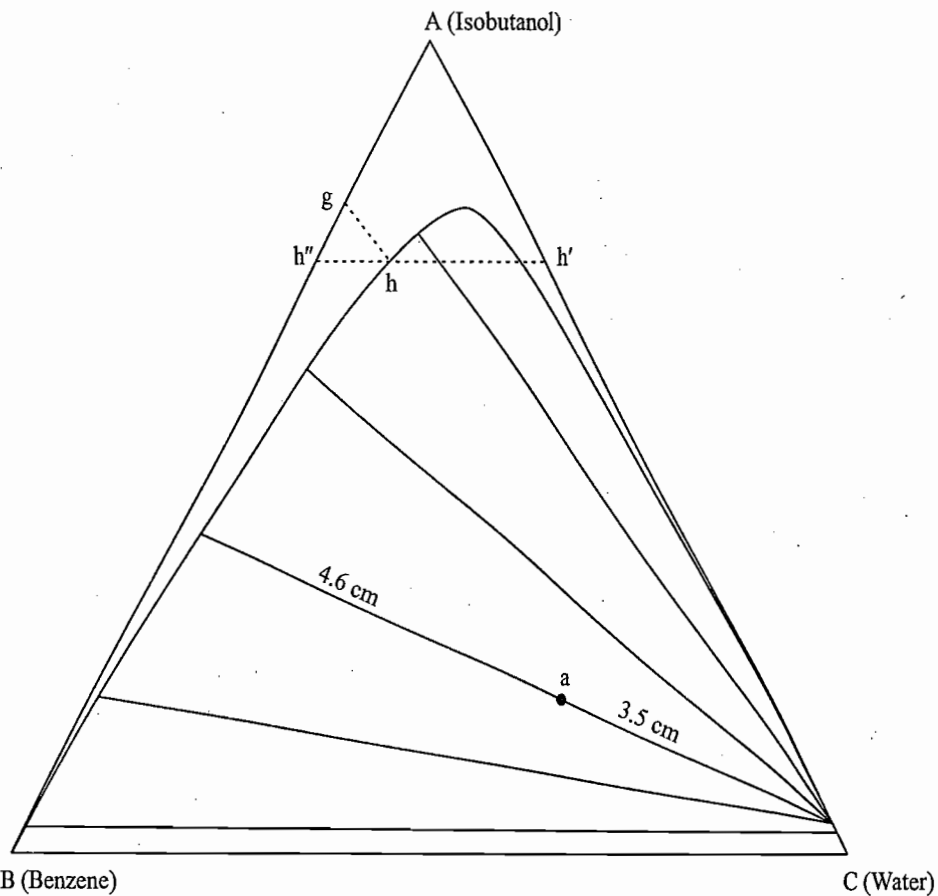


Fig. 7.34

The relative masses of the two solutions can be determined from the lever rule. Thus, we have

$$\frac{\text{Mass of water-rich layer}}{\text{Mass of benzene-rich layer}} = \frac{4.6 \text{ cm}}{3.5 \text{ cm}} = \frac{1.3}{1}$$

(b) Point *g* represents a solution of 80 mass % isobutyl alcohol in benzene. If water is added to this system, the state of the overall system will move along *gh*—a line obtained by joining *g* to the apex *C*. At the point *h*, the solution will just split into two. The composition of the system at *h* is

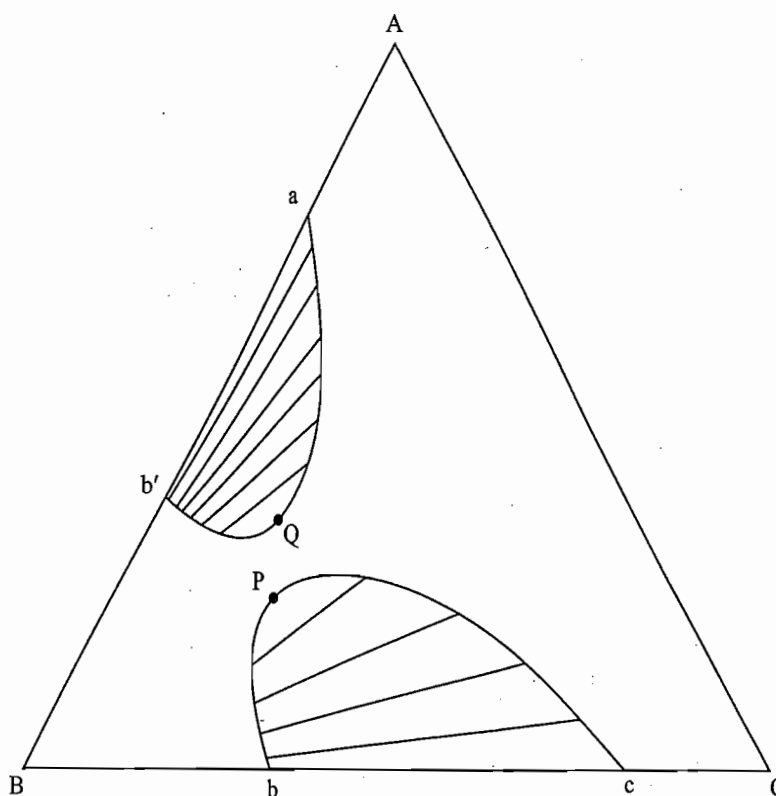
mass % benzene	=	$hh'/mm = 18$
mass % water	=	$hh''/mm = 10$
and mass % isobutanol	=	$100 - 18 - 10 = 72$

FORMATION OF TWO PAIRS OF PARTIALLY MISCIBLE LIQUIDS

Expected Phase Diagram

Let us assume that out of the three components *A*, *B* and *C*, two pairs of liquids which show partial miscibilities be *A* and *B*, and *B* and *C*, and let the third pair of liquids *A* and *C* be completely miscible with each other. In such a case, the triangular plot will contain two binodal curves with their own plait points and various tie lines corresponding to each of these two pairs of partially miscible liquids as shown in Fig. 7.3.5. The binodal curve *aQb'* is for the mixtures of two liquids *A* and *B* containing *C* and the curve *bPc* is for *B* and *C* containing *A*. Points *Q* and *P* are the respective plait points. The area enclosed within the curve *aQb'* represents the region of compositions where two conjugate solutions of *A*

Fig. 7.3.5 Triangular plot depicting the formation of two pairs of partially miscible liquids



in B (containing C) and B in A (containing C) are formed; composition of the former lies on Qb' and that of the latter on the line Qa . Compositions of the two conjugate solutions are joined with each other through various tie lines. At the point Q , the two solutions have identical compositions and thus merge into each other to give a single liquid layer. In a similar manner, the area enclosed within the curve bPc represents the region of compositions where two conjugate solutions of C in B (containing A) and B in C (containing A) are formed; composition of the former lies on bP and that of the latter on the line cP . Again compositions of the two conjugate solutions are joined with each other through various tie-lines drawn within this area. At point P , the two solutions have identical compositions and thus merge into each other to give a single liquid layer.

The area outside of these two binodal curves gives the region where the three components are completely miscible and thus form a single liquid layer.

Example

The system ethyl alcohol-water-succinic nitrile shows this type of behaviour between 18.5 °C to 31 °C and thus has a triangular plot similar to Fig. 7.3.5

Effect of Temperature

If it be assumed that the mutual solubilities decrease as temperature is lowered, the area covered by the two binodal curves will become larger and larger on decreasing the temperature. Ultimately a stage would be reached where the two curves may overlap with each other and thus form a band type diagram, such as shown in Fig. 7.3.6.

This diagram is very similar to the binodal curve of a system exhibiting one pair of partially miscible liquids at some low temperature (e.g. the binodal curve at T_1 of Fig. 7.3.2). It is thus obvious that if the binodal curve forms a band, it is not possible to predict the behaviour of the system when the temperature

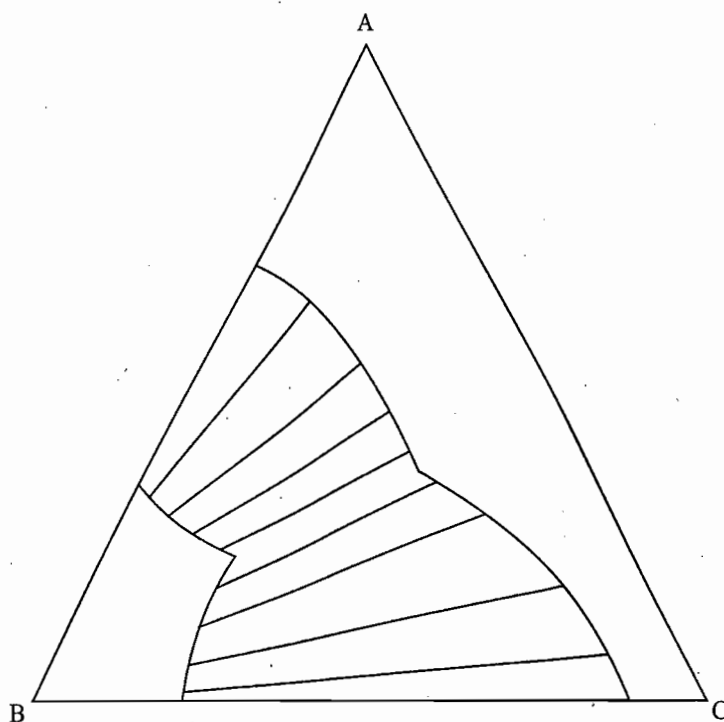


Fig. 7.3.6 Overlapping of the two binodal curves

is raised, that is, whether it will form a system containing only one pair or two pairs of partially miscible liquids.

Examples of systems exhibiting binodal bands are

Water-phenol-aniline

Water-ethyl acetate-*n*-butyl alcohol

Water-ethyl acetate-isobutyl alcohol

Water-ethyl acetate-*sec*-butyl alcohol

Example 7.3.2

Following are the compositions of the phases in equilibrium with each other in the system methylcyclohexane-aniline-*n*-heptane at 1 atm and 25 °C.

Hydrocarbon layer		Aniline layer	
Methylcyclohexane	<i>n</i> -Heptane	Methylcyclohexane	<i>n</i> -Heptane
mass %	mass %	mass %	mass %
0.0	92.0	0.0	6.2
9.2	83.0	0.8	6.0
18.6	73.4	2.7	5.3
33.8	57.6	4.6	4.5
46.0	45.0	7.4	3.6
59.7	30.7	9.2	2.8
73.6	16.0	13.1	1.4
83.3	4.4	15.6	0.6
88.1	0.0	16.9	0.0

- Draw the triangular plot including tie lines.
- Characterize the system to which this triangle plot represents.
- Calculate the composition of the solution which just splits into two

obtained by adding sufficient amount of aniline to a solution of 40 mass % of methylcyclohexane in *n*-heptane.

(d) 100 g of a solution having composition 30 mass % methylcyclohexane + 28 mass % *n*-heptane was prepared. What is the nature of the system, whether it forms a single solution or two solutions? If two solutions are formed what will be their compositions and the respective amounts?

(e) If the system as given in part (d) represents two solutions, calculate the mass of methylcyclohexane which should be added so that the system becomes one of a single solution. What would be the composition of the resultant solution?

Solution

(a) The triangular plot obtained is shown in Fig. 7.3.7. The edge length of the triangle is 100 mm.

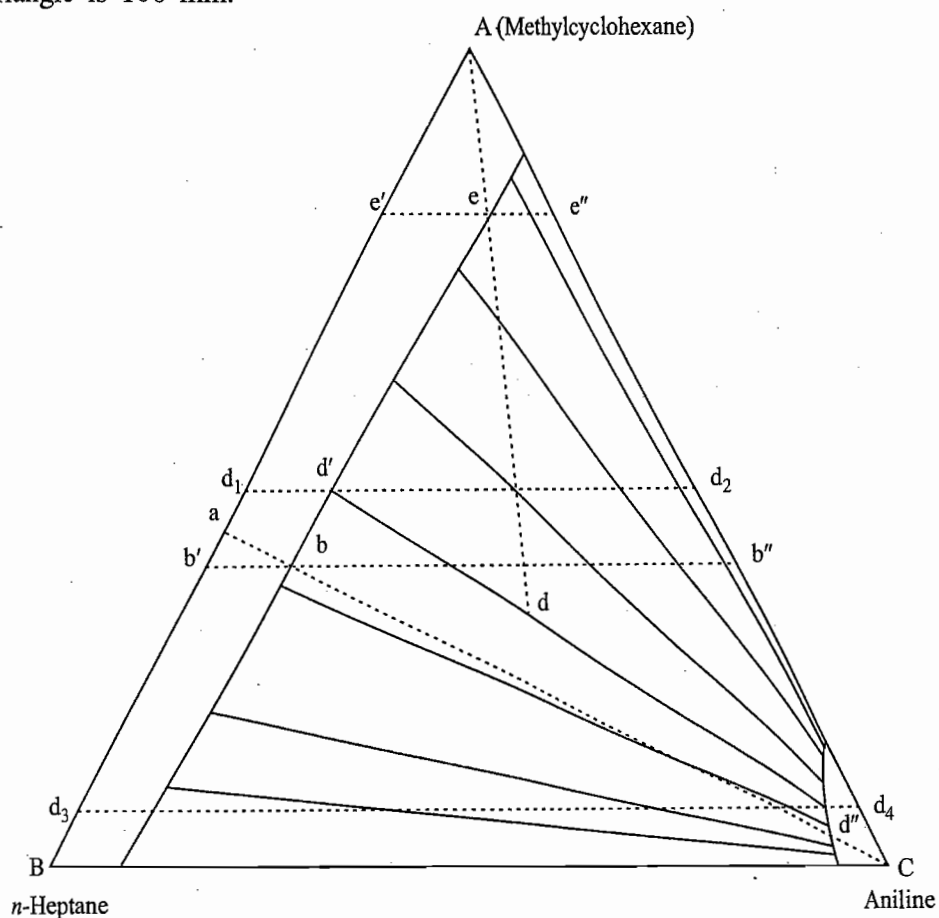


Fig. 7.3.7 Required ternary plot

(b) The present system represents a case where two pairs of partially miscible liquids are formed with an overlapping of the two binodal curves. The two pairs are

n-Heptane-Aniline
Methylcyclohexane-Aniline

The two liquids in the third pair, namely, methylcyclohexane and *n*-heptane, are completely miscible with each other.

(c) Point a on the line AB represents a binary system of 40 mass % methylcyclohexane in *n*-heptane. If aniline is added to this system, the state of the overall system will move along abC. At point b, the single solution will just

split into two solutions. The composition of the system corresponding to the point b can be calculated as follows.

$$\text{Mass \% of aniline, } W_a = \frac{\text{length ab}}{\text{length aC}} \times 100 = \frac{7.5 \text{ mm}}{86.6 \text{ mm}} \times 100 = 8.662 = 9$$

Since the edge length of the triangle plot is 100 mm, the length bb' in mm on the line $b'bb''$ will also represent the mass % of aniline. This length is 9 mm as may be verified from Fig. 7.3.7. Similarly, mass % of *n*-heptane will be equal to the length bb'' , which is equal to 55 mm. Thus

$$\text{Mass \% } n\text{-heptane, } W_h = \text{length } bb''/\text{mm} = 55$$

and mass % methylcyclohexane, $W_m = 100 - W_a - W_h = 100 - 9 - 55 = 36$

(d) The point d represents the system of 30 mass % methylcyclohexane and 28 mass % *n*-heptane. The system will consist of two conjugate solution of compositions given below.

(i) *Hydrocarbon layer*: Its composition is given by the point d' at which we have

$$\text{Mass \% aniline} = d_1d'/\text{mm} = 4$$

$$\text{Mass \% } n\text{-heptane} = d_2d'/\text{mm} = 45$$

(ii) *Aniline layer*: Its composition is given by the point d'' at which, we have

$$\text{Mass \% aniline} = d_3d''/\text{mm} = 89$$

$$\text{Mass \% } n\text{-heptane} = d_4d''/\text{mm} = 4$$

The relative amounts of the two solutions may be calculated by employing the lever rule as follows.

$$\frac{\text{Mass of hydrocarbon layer}}{\text{Mass of aniline layer}} = \frac{dd''}{dd'} = \frac{4.1 \text{ mm}}{2.8 \text{ mm}}$$

Adding one to both sides, we get

$$\frac{\text{Mass of hydrocarbon layer} + \text{Mass of aniline layer}}{\text{Mass of aniline layer}} = \frac{4.1 + 2.8}{2.8}$$

$$\text{or } \frac{\text{Mass of aniline layer}}{\text{Total mass in the system}} = \frac{2.8}{6.9}$$

$$\text{or } \text{Mass \% of aniline layer} = \frac{2.8}{6.9} \times 100 = 40.59$$

Thus mass % of hydrocarbon layer = $100 - 40.59 = 59.41$

(e) When methylcyclohexane is added to a system represented by the point d, the state of the overall system will move along dA . At the point e, the two solutions will just merge into one. The composition of the solutions at e is

$$\text{Mass \% } n\text{-heptane} = ee''/\text{mm} = 8$$

$$\text{Mass \% } n\text{-aniline} = ee'/\text{mm} = 12$$

$$\text{Mass \% methylcyclohexane} = 100 - 12 - 8 = 80$$

The relative ratio of *n*-heptane and aniline at the point e will be the same as that of the point d. Thus 8 mass % of *n*-heptane at e represents 28 g of *n*-heptane

(same as that at point d) and 12 mass % of aniline at e represents 42 g of aniline. Thus the mass of methylcyclohexane at the point d (80 mass %) is given as

$$\text{Mass of methylcyclohexane} = \frac{28 \text{ g}}{8\%} \times 80\% = 280 \text{ g}$$

Thus, the amount of methylcyclohexane that need to be added to get one solution

$$\begin{aligned} &= 280 \text{ g} - \text{Mass of methylcyclohexane at the point d} \\ &= 280 \text{ g} - 30 \text{ g} = 250 \text{ g} \end{aligned}$$

FORMATION OF THREE PAIRS OF PARTIALLY MISCIBLE LIQUIDS

Expected Phase Diagram

Here all the three pairs A and B, B and C, and A and C show partial mutual solubilities with each other and thus the triangle plot will contain three binodal curves corresponding to each of these three pairs of partially miscible liquids (Fig. 7.3.8). Each binodal curve will have its own plait point and the various lines indicating the compositions of the two conjugate solutions that are formed.

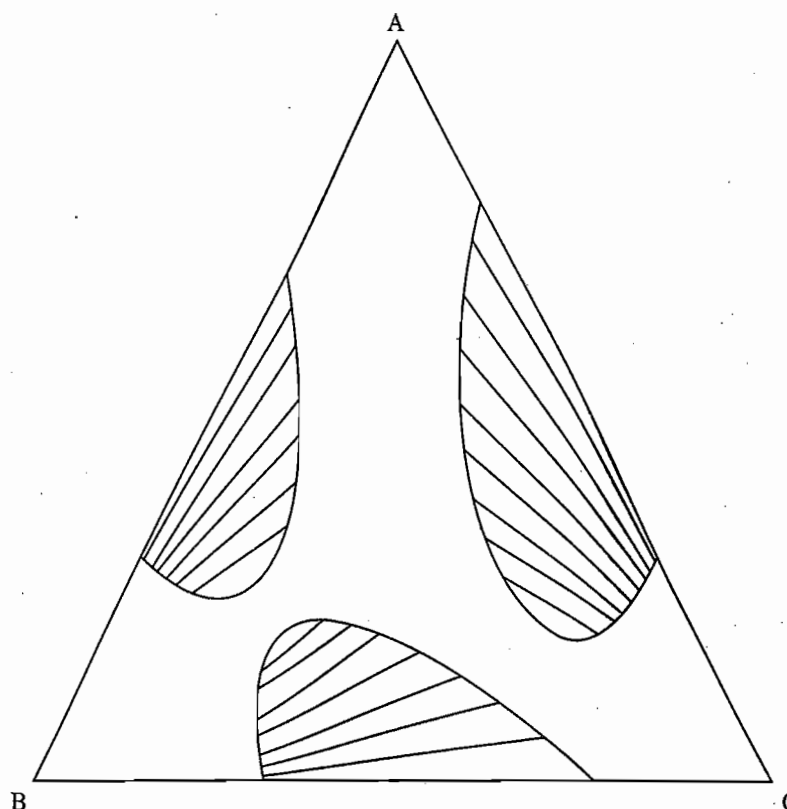


Fig. 7.3.8 Triangular plot for the formation of three pairs of partially miscible liquids

Interpretation of the phase diagram of Fig. 7.3.8 is straightforward. A point anywhere within the three binodal curves represents a system of the two conjugate solutions and that outside of these curves represents a single solution. At lower temperatures, the partial mutual solubilities of the two components become smaller, and thus the area enclosed by each of these binodal curves becomes larger as temperature of the system is lowered. Eventually a stage may be reached where the three binodal curves overlap each other and the triangular plot takes the form as given in Fig. 7.3.9. A point anywhere in the area (marked as 1) near each of the three corners of the triangle represents one liquid phase,

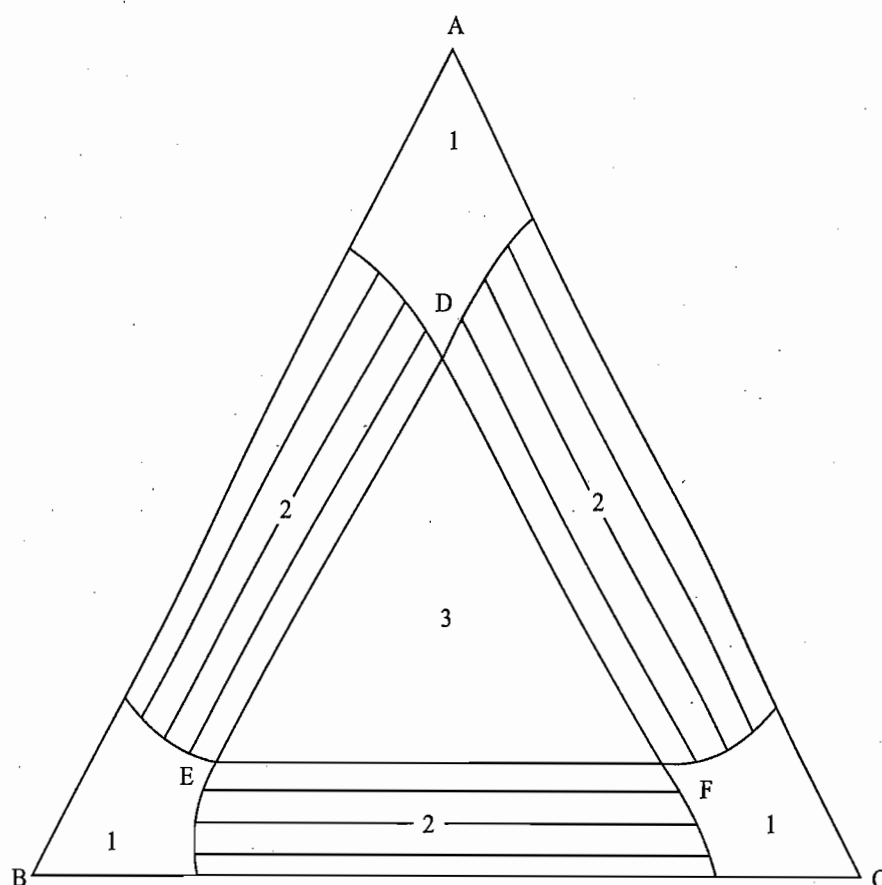


Fig. 7.3.9 Overlapping of the three binodal curves

whereas any point within the areas (marked as 2) traversed by tie lines implies two conjugate liquids whose compositions are given by the two ends of the tie line passing through the given point. Area within the smaller triangle DEF (marked as 3) represents the region where three liquid layers in equilibrium are formed, their compositions are given by the points D, E and F, respectively.

The compositions of these three liquids are definite at a given temperature and pressure; this fact is in agreement with the phase rule since for $P = 3$, $F = C - P + 0 = 3 - 3 + 0 = 0$.

An example of a system yielding three liquid phases in equilibrium is succinic nitrile-ether-water.

7.4 TRIANGULAR PLOTS OF A TERNARY SYSTEM DEPICTING CRYSTALLIZATION OF ITS COMPONENTS AT VARIOUS TEMPERATURES

It was stated in Section 7.3 that the triangular plots of a ternary system at various temperatures can be represented in a 3-dimensional model of a triangular prism. In this model, we have a base of an equilateral triangle and a vertical axis which represents temperature of the system. Thus, any horizontal section of this 3-dimensional model gives the triangular plot at that particular temperature. The understanding of the planar model involving the crystallization of the solid components becomes much simplified if the qualitative nature of the above 3-dimensional model is studied at a glance. In this model, we have the following characteristics.

Depiction of Pure Components

Each *vertical axis* represents the pure component at different temperatures. Thus, the axis AA' in Fig. 7.4.1 represents the component A only, while BB' and CC' represent the components B and C, respectively. On each of these axes, the melting point of the corresponding component can be shown. The points a, b and c in Fig. 7.4.1 represent the melting points of the components A, B and C, respectively. Thus, the component above its melting point is present in the liquid form and that below this point is present in the solid form.

Depiction of Two-Component System

Each *vertical face* of the triangular prism represents a two-component system involving components occupied by the two corners of the triangle. Thus, the vertical faces AA'B'BA, BB'C'CB and AA'C'CA represent the two-component systems of A-B, B-C and A-C, respectively. On each of these faces, one can draw the binary equilibrium phase diagram of the respective two-component system. If, at present, it is assumed that the three two-component systems show simple phase diagrams involving only the formation of eutectics with no compound formation and solid solution, then the general appearance of the three two-component phase diagrams will be as shown in Fig. 7.4.1. The curve adb is the equilibrium phase diagram of A and B; along the line ad, solid A separates out and along bd solid B separates out. At point d, both A and B separate out simultaneously. It is thus the eutectic point of the system A-B. Similarly, the curves bec and afc are the equilibrium diagrams of the systems B-C and A-C, respectively, and the points e and f are the respective eutectic points.

Depiction of Three-Component System

If the third component, say A, is added to a system B-C, the resultant system will be represented by a point that lies within the triangular prism. Addition of the third component will also affect the equilibrium curves depicting the start of crystallization of the two components. In fact, the addition of A to B-C will shift the eutectic point e to g along the line eg while the addition of B to A-C will shift the eutectic point f to g along the line fg and that of C into A-B will shift the eutectic point d to g along the line dg.

Crystallization of One component from Ternary System

The three lines dg, eg and fg divide the total surface area of the prism into three distinct surfaces begdb, cegfc and adgfa. Previously, along the lines be and bd, we have the separation of solid B from the binary liquid mixtures of B-C and A-B, respectively, and now the separation of B in the ternary system is represented by the surface area begdb. Similarly, the separation of A and C is represented by the points on the surface areas adgfa and cegfc, respectively. Thus, these three surfaces describe the conditions of equilibrium of the melt and one of the solids; melt \rightleftharpoons solid A on the surface adgfa, melt \rightleftharpoons solid B on the surface begdb and melt \rightleftharpoons solid C on the surface cegfc.

The fact that the separation of the solid in a ternary system is represented by the surface is consistent with the requirements of the phase rule since $P = 2$ and thus $F = C - P + 1 = 3 - 2 + 1 = 2$. Thus, two degrees of freedom must be stated in order to define the system completely. These are temperature and the amount fraction of one of the components.

At temperature above any one surface, the system consists of only melt and the moment the surface is reached on cooling the system, the pure component

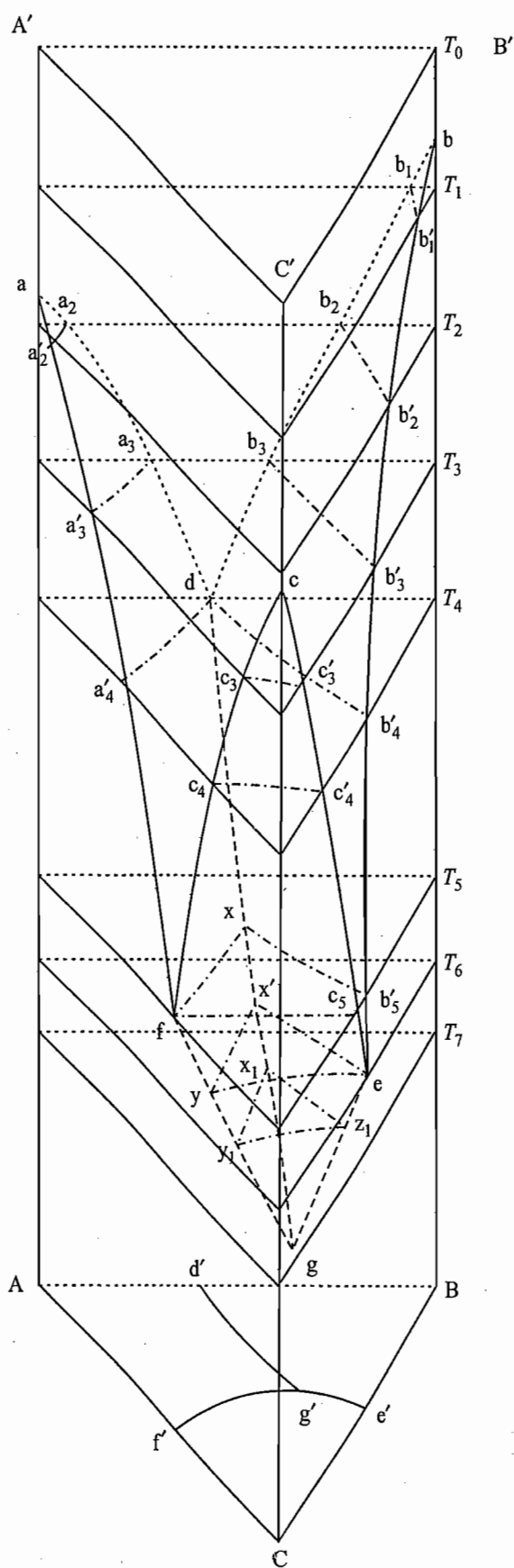


Fig. 7.4.1 Triangular plots at various temperatures on a 3-dimensional triangular prism

starts crystallizing. Thus, on cooling, the first crystal that separates out will consist of pure A if the original composition of the system lies above the surface of *adgfa*, it is pure B if the composition lies above the surface of *begdb* and is pure C if the composition lies above the surface *cegfc*.

Crystallization of Two Components from a Ternary System

The surfaces *begdb* and *cegfc* intersect each other along the line *eg*. Thus, the line *eg* represents various equilibria involving solid B, solid C and the melt. The line *eg*, in fact, is the ternary eutectic curve. In a similar manner the lines *dg* and *gf* are other eutectic curves where solids A and B, and solids A and C are in equilibrium with the melt, respectively. Thus, these three lines *eg*, *dg* and *gf* indicate the conditions for separation of the two solid phases from the liquid of different compositions. Systems along these lines are univariant as $P = 3$ and thus $F = C - 1 + 1 = 3 - 3 + 1 = 1$.

Crystallization of all the Three Components

The three ternary eutectic *eg*, *dg* and *fg* curves meet one another at the common point *g* which now represents a system when three solids A, B and C are in equilibrium with the melt of composition *g*. According to the phase rule, the point *g* is an invariant point since $P = 4$ and thus $F = C - P + 1 = 3 - 4 + 1 = 0$. Thus, temperature and composition of the melt corresponding to the point *g* are quite definite and are independent of the relative amounts of the three components. At all temperatures below the temperature corresponding to the point *g*, the system simply consists of a mixture of three solids A, B and C.

Depiction of Crystallization on an Equilateral Triangle

In order to show the process of initial crystallization from ternary melts of various compositions on a two-dimensional model of an equilateral triangle, we project out the boundaries *eg*, *dg* and *fg* separating the three surfaces on the base of the triangular prism as shown in Fig. 7.4.1. These projections are *e'g'*, *d'g'* and *f'g'* and they divide this phase triangle into three areas.

Crystals of pure component A freeze out first of all from systems whose compositions lie within the area *Ad'g'f'A* and components B and C freeze out respectively from systems whose compositions lie within the other two areas. If the composition of the system corresponds to any of the three lines, then on cooling two components will appear simultaneously; along *d'g'*, the components are A and B, along *f'g'*, the components are A and C and along *e'g'*, we have B and C. If composition of the system corresponds to the point *g*, then on cooling all the three components will crystallize simultaneously the moment point *g* is reached.

Description of the System at Different Temperatures

In order to exhibit the behaviour of a ternary system at any particular temperature, we draw a horizontal plane passing through the three-dimensional triangular prism corresponding to the given temperature. This plane may or may not intersect the three surface areas *adgfa*, *bdgeb* and *cfgec* depending upon the temperature of the system. In Fig. 7.4.1, we have also drawn planes corresponding to the temperatures T_0 , T_1 , T_2 , T_3 , T_4 , T_5 , T_6 and T_7 . We will now consider the behaviour of the system at these temperatures one by one.

At Temperature T_0

The temperature T_0 is greater than the respective melting points of the three components with the result that the horizontal plane at this temperature does not

intersect any of the three surfaces. Therefore, no crystallization takes place and the ternary system consists of one liquid layer.

At Temperature T_1

The temperature T_1 is greater than the melting points of A and C and is smaller than that of B. Consequently, the plane drawn at this temperature intersects only the surface $bdgeb$ along the curve $b_1b'_1$ as shown in Fig. 7.4.1. The equilateral triangle along with this intersection curve is also shown separately in Fig. 7.4.2. The curve $b_1b'_1$ gives the compositions of various systems at which initial solidification of B will start at the given temperature of T_1 . Since the plane under study does not intersect the other two surfaces (i.e. $adgfa$ and $cegfc$), crystallization of A and C will not take place. The portion $Ab_1b'_1CA$ of the triangle (Fig. 7.4.2) lies above the surface areas $adgfa$ and $cegfc$ and, therefore, represents the region where the system can exist only in the molten state consisting of only one liquid layer. The portion $b_1Bb'_1b_1$ of the triangle lies below the surface area $begdb$ but above the points e and d . Thus at a point anywhere in this region, we have solid B in equilibrium with the melt. The composition of the latter lies on the curve $b_1b'_1$. Take, for example, the point n in the region $b_1Bb'_1b_1$. This point represents a system in which solid B is in equilibrium with the melt of composition m . The latter can be obtained by joining the apex B with the point n and then extending the line Bn to m where it meets the curve $b_1b'_1$. The relative amounts of the two phases, viz., solid B and the melt, can be determined as usual with the help of the lever rule. For example, at n , we have

$$\frac{\text{Amount of solid phase B}}{\text{Amount of melt}} = \frac{mn}{nB}$$

It may be pointed out here that for an ideal ternary system, the line $b_1b'_1$

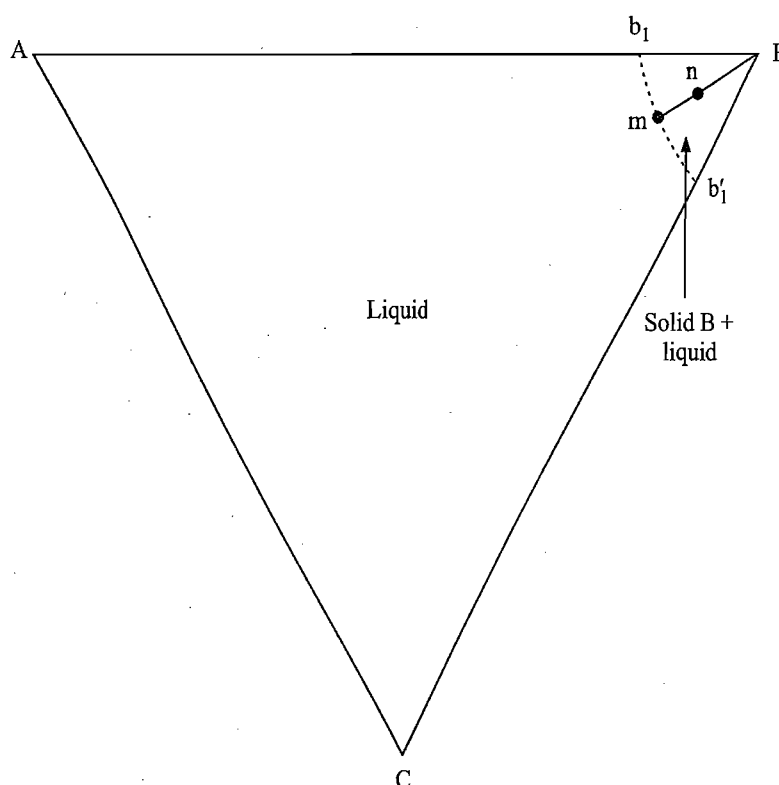


Fig. 7.4.2 Triangular plot at the temperature T_1 just below the melting point of B but above the melting points of A and C

of Fig. 7.4.2 would be a straight line parallel to the side AC of the equilateral triangle. The implication of this parallel line is that the precipitation of the solid B from the melt depends solely on the amount fraction of B in the solution and is independent of the nature of the components A and C. In other words, it is the total concentration of A and C that determines the melting point depression of B rather than the nature of A and C. Thus, if the amount fraction of B in the liquid phase of a binary solid-liquid equilibrium has the value of $x_{B(\text{liquid})}$, its melting point will be lowered by an amount given by the simple van't Hoff equation. In a ternary system where the amount fraction of B is again $x_{B(\text{liquid})}$, the melting point of B will be lowered by precisely the same amount as in the binary case, the sum of total of the amount fractions of A and C acting as if only a single additional component were present. In real cases, this situation is perturbed and thus the line $b_1b'_1$ may be curved as shown in Fig. 7.4.2.

At Temperature T_2

The temperature T_2 is greater than the melting point of the component C and is smaller than those of A and B. Consequently, the plane drawn at this temperature intersects two surfaces $begdb$ and $adgfa$ along the curves $b_2b'_2$ and $a_2a'_2$, respectively, and does not intersect with the third surface $cegfc$. The curve $b_2b'_2$ gives compositions of various systems at which initial solidification of B will start at the given temperature of T_2 while the curve $a_2a'_2$ gives compositions at which the initial solidification of A will start. Since the plane at temperature T_2 lies above the melting point of the third component C, vis-à-vis, does not intersect the curve $cegfc$, crystallization of the component C will not take place at temperature T_2 .

The equilibrium curve obtained at this temperature is also shown in Fig. 7.4.3. The interpretation of the diagram is described below

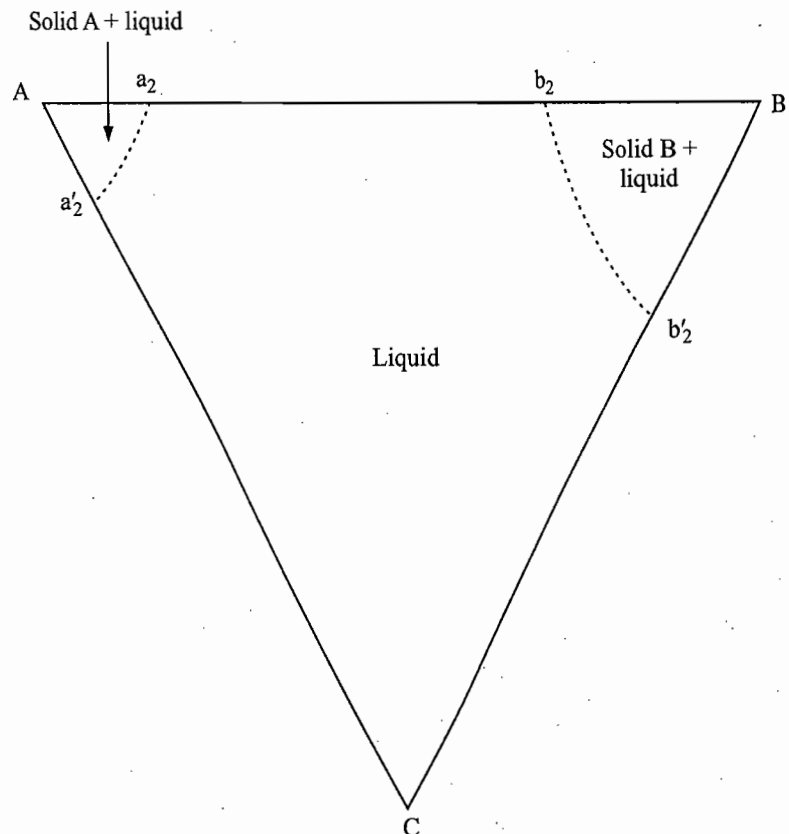


Fig. 7.4.3 Triangular plot at temperature T_2 which lies below T_A^* and T_B^* but above T_C^*

- Apex A: Solid component A.
 Apex B: Solid component B.
 Apex C: Liquid component C.
 Side a_2b_2 : Binary liquid mixtures of A and B.
 Side b'_2C : Binary liquid mixtures of B and C.
 Side a'_2C : Binary liquid mixtures of A and C.

Area $Aa_2a'_2A$: A point in this region represents solid A in equilibrium with the melt whose composition lies on the line $a_2a'_2$.

Area $Bb_2b'_2B$: A point in this region represents solid B in equilibrium with the melt whose composition lies on the line $b_2b'_2$.

Area $Ca'_2a_2b_2b'_2C$: A point in this region represents a liquid system consisting of a single layer only.

At Temperature T_3

The temperature T_3 is smaller than all the three melting points of the three components, vis-à-vis, the plane drawn at this temperature intersects all the three surfaces $adgfa$, $begdb$ and $cegfc$ along the curves $a_3a'_3$, $b_3b'_3$ and $c_3c'_3$, respectively. The equilibrium curve obtained is also shown in Fig. 7.4.4. The interpretation of the diagram can be done as usual, only the main features are described below.

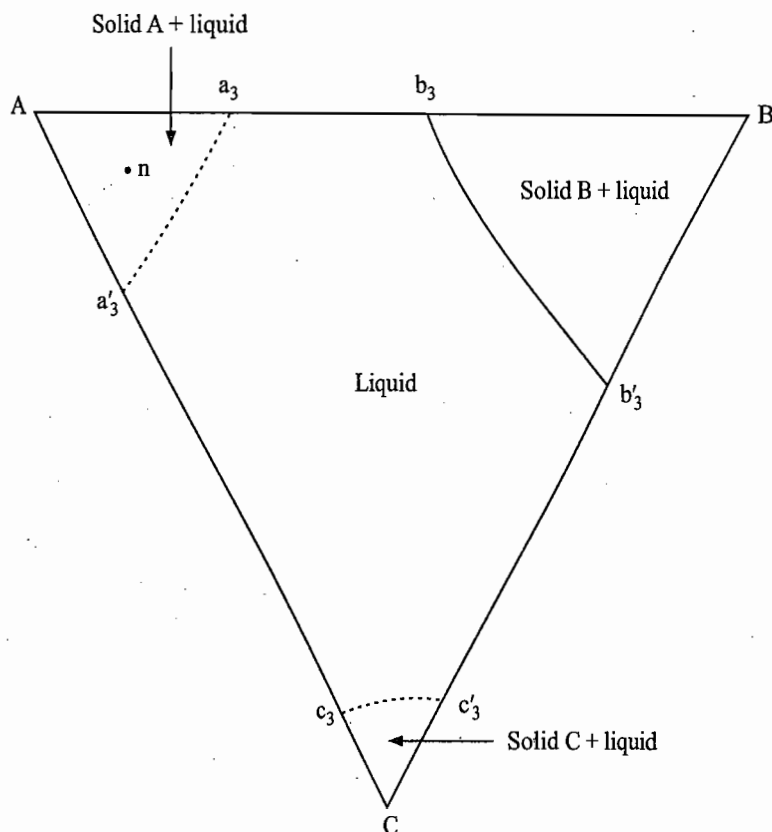


Fig. 7.4.4 Triangular plot at the temperature T_3 which lies below T_A^* , T_B^* and T_C^*

Curve $a_3a'_3$: A point on this line represents a system where the crystallization of solid A has just started from the melt of composition corresponding to the given point.

Area within the curve $Aa_3a'_3A$: A point (say, n) in this region represents a system where again solid A is in equilibrium with the melt. The composition of the latter will lie on the line $a_3a'_3$ and can be obtained by extending the line An

up to the curve $a_3a'_3$. The relative amounts of the two phases can be determined with the help of the lever rule.

In a similar manner, along the curves $b_3b'_3$ and $c_3c'_3$ the precipitation of solids B and C, respectively, has just started. A point within the curve $Bb_3b'_3B$ (or $Cc_3c'_3C$) represents a system where solid B (or solid C) is in equilibrium with the melt whose composition lies on the curve $b_3b'_3$ (or $c_3c'_3$). The latter can be obtained by joining the apex B (or C) with the given point and extending it to the curve $b_3b'_3$ (or $c_3c'_3$). The intersecting point gives the required composition of the melt.

Area within the curve $a_3a'_3c_3c'_3b'_3b_3a_3$: A point inside this region represents a system of a single liquid layer.

At Temperature T_4

This temperature corresponds to the eutectic temperature of the A-B system. The equilateral triangle at this temperature intersects the two surfaces $adgfa$ and $bdgeb$ along a'_4d and b'_4d , respectively. The two intersection curves a'_4d and b'_4d meet each other at the eutectic point d which lies on the side AB of the triangle, the equilibrium curve at this temperature is also shown in Fig. 7.4.5. The interpretation of the diagram can be done as usual, though the main features are described below.

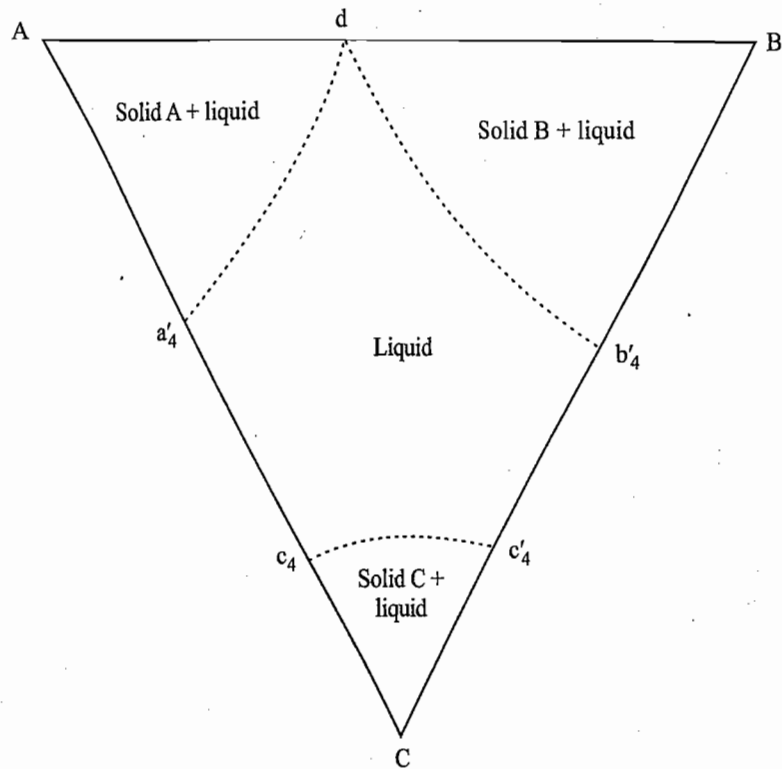


Fig. 7.4.5 Triangular plot at the temperature T_4 which corresponds to the eutectic temperature of binary system A and B

Along the line a'_4d , solid A is in equilibrium with the melt and along b'_4d , solid B is in equilibrium with the melt. Both these curves meet at d . Thus at this point, we have an equilibrium involving both the solids A and B and the melt of composition d . The relative amounts of the two solids can be calculated by using the lever rule as follows:

$$\frac{\text{Amount of solid A}}{\text{Amount of solid B}} = \frac{Bd}{Ad}$$

At Temperature T_5

This temperature lies below the eutectic temperature of the system A-B and also corresponds to the eutectic temperature of the system A-C. The equilateral triangle at this temperature intersects the two surfaces $adgfa$ and $begdb$ along fx and b'_5x , respectively. These two intersection curves meet each other at the point x which lies on the line dg . The triangle intersects the surface $cegfc$ along the curve fc_5 . The intersection curves fx and fc_5 meet each other at the eutectic point f . These three intersection curves are shown separately in Fig. 7.4.6. The interpretation of the diagram can be done as usual, however, the main features are now described.

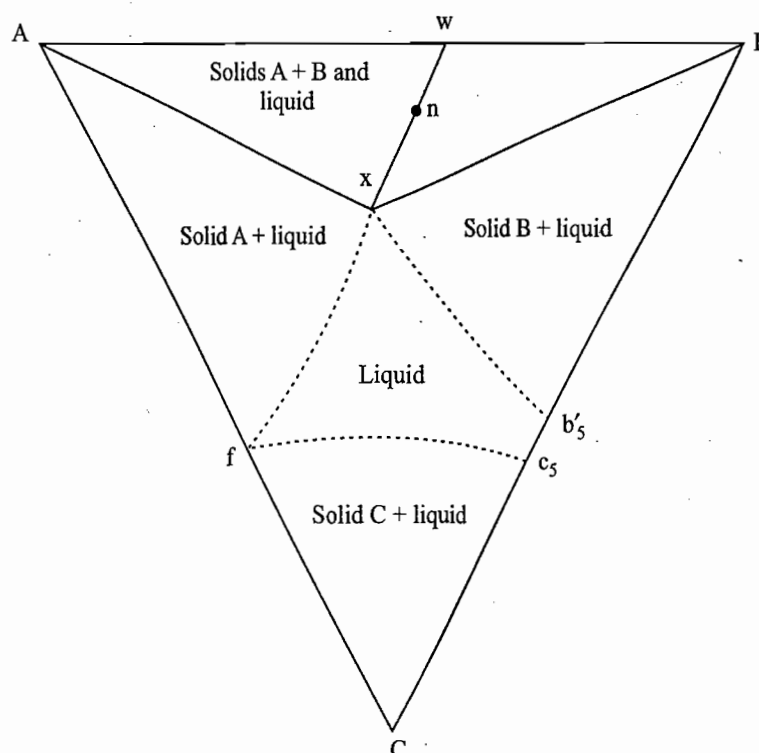


Fig. 7.4.6 Triangular plot at the temperature T_5 which lies at the eutectic point of A and C system as well as below that of A and B

- (i) Along the curve fx , the initial solidification of A starts and within the area $AxfA$, we have solid A in equilibrium with the melt. The composition of the latter lies on the line fx and can be obtained by joining the apex A with the point under study and then extending it to the curve fx . The relative amounts of solid and melt, as usual, can be obtained with the help of the lever rule.
- (ii) A point on the curve b'_5x , represents a system in which solidification of B has just started from the melt whose composition corresponds to the point under study. Within the area Bb'_5xB , we have solid B in equilibrium with the melt. The composition of the latter lies on the curve b'_5x and can be obtained by joining apex B with the point under study and then extending it to the curve b'_5x .
- (iii) The curve c_5f represents systems where solidification of C has just started from the melt whose composition lies on the curve c_5f . A point anywhere within the area fc_5Cf represents an equilibrium of solid C with the melt whose composition again lies on the curve c_5f .

- (iv) The point *f* is the eutectic point of the system A and C. Thus at *f* both solids A and C are in equilibrium with the melt of composition *f*. The relative amounts of the two solids will be given by the lever rule.
- (v) The point *x* lies on the line *dg* and thus represents a system where both solids A and B are in equilibrium with the melt of composition *x*. At this point, solidification of mixture of A and B have just started.
- (vi) A point inside the region AB*x*A corresponds to a system where two solids A and B are in equilibrium with the melt of composition *x*. The amounts of the melt and the solid components in equilibrium can be determined with the help of the lever rule. Take, for example, the point *n* within this triangle (Fig. 7.4.6). This point will represent an equilibrium involving solid A, solid B and the melt of composition *x*. The relative amounts of the total solid present and the melt can be determined from the lever rule by drawing a line *xn* and then extending it to the side AB. If the line *xn* intersects AB at point *w*, then we have

$$\frac{\text{Total amount of solid separated}}{\text{Amount of melt}} = \frac{nx}{nw}$$

Knowing the total amount of crystals separated, we can determine the amount of each of the crystalline components by applying again the lever rule at *w* on the line AB. Thus

$$\frac{\text{Amount of A}}{\text{Amount of B}} = \frac{wB}{wA}$$

- (vii) A point in the middle portion *b₅x₅fc₅b₅* of the triangle (Fig. 7.4.6) represents a system of a single liquid layer.

At Temperature T_6

This temperature lies below the eutectic temperatures of systems A–B and A–C and also corresponds to the eutectic temperature of system B–C. The equilateral triangle at this temperature intersects the three surfaces *adgfa*, *begdb* and *cegc* along *x'y*, *ex'* and *ey*, respectively. The curves *ex'* and *ey* meet each other at point *e* which lies on the side BC. Since the temperature T_6 lies below the eutectic temperatures of A–B and A–C systems, the intersection curve *x'y* does not cut the sides AB and AC but lies within the triangle. This curve meets the solubility curves of B and C (i.e. *ex'* and *ey*) at points *x'* and *y*, respectively. The three intersection curves are shown separately in Fig. 7.4.7. The interpretation of the diagram can be done as usual, however, the main features are described below.

<i>Line ex'</i>	Solubility curve of B.
<i>Line ey</i>	Solubility curve of C.
<i>Line x'y</i>	Solubility curve of A.
<i>Area Bex'B</i>	Solid B is in equilibrium with the melt whose composition lies on the line, <i>ex'</i>
<i>Area CeyC</i>	Solid C is in equilibrium with the melt whose composition lies on the line <i>ey</i> .
<i>Area Ax'yA</i>	Solid A is in equilibrium with the melt whose composition lies on the line <i>x'y</i> .

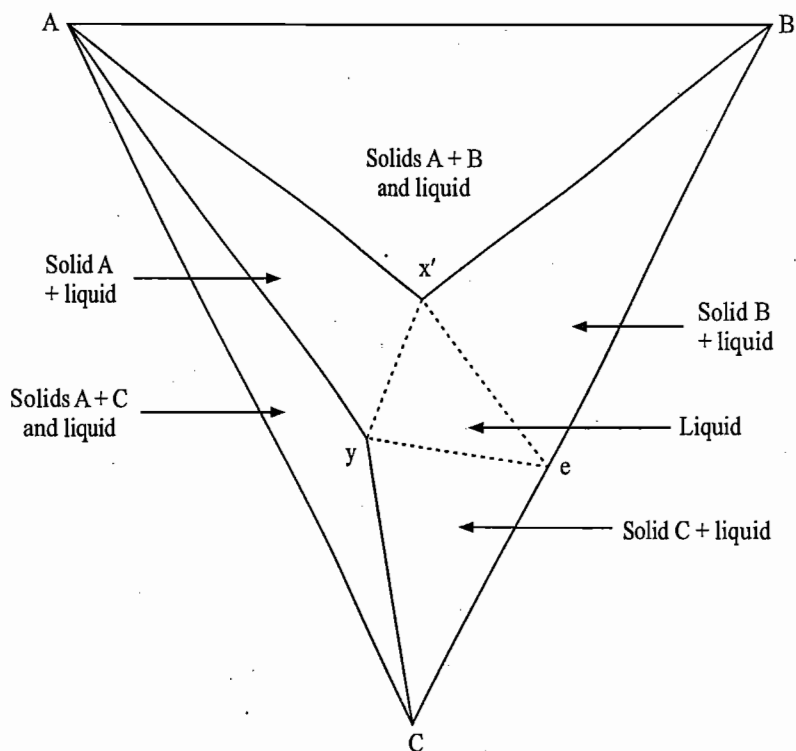


Fig. 7.4.7 Triangular plot at temperature T_6 which lies at the eutectic point of B–C system as well as below those of A–B and A–C systems

Area Ax'BA: Solids A and B are in equilibrium with the melt of composition corresponding to the point x' .

Area AyCA: Solids A and C are in equilibrium with the melt of composition corresponding to the point y .

Area x'yex': Single liquid phase.

At Temperature T_7

This temperature lies below all the three eutectic temperatures. Thus, the equilateral triangle at this temperature intersects the three surfaces $adgfa$, $begdb$ and $cegc$ of Fig. 7.4.1 within the triangle along x_1y_1 , x_1z_1 and y_1z_1 , respectively. In Fig. 7.4.8 these three lines are shown by $x'y'$, $x'z$ and $y'z$ respectively. The main features of the diagram are described below.

Area Ax'y'A: Solid A is in equilibrium with melt whose composition lies on the curve $x'y'$.

Area Bx'zB: Solid B is in equilibrium with the melt whose composition lies on the curve $x'z$.

Area Cy'zC: Solid C is in equilibrium with the melt whose composition lies on the curve $y'z$.

Area Ax'BA: Solids A and B are in equilibrium with the melt of composition corresponding to the point x' .

Area Ay'CA: Solids A and C are in equilibrium with the melt of composition corresponding to the point y' .

Area BzCB: Solids B and C are in equilibrium with the melt of composition corresponding to the point z .

Area x'y'zx': Single liquid phase.

Crystallization Scheme At a Glance

Figures 7.4.2 to 7.4.8 have been shown together in Fig. 7.4.9 along with the projections of binary eutectic points d , e and f , ternary eutectic point g , and the

three ternary eutectic curves dg , fg and eg . A few comments about the behaviour of the system at a particular temperature may be made here.

- (i) If the temperature of the system is above the melting point of any one component, then the crystallization of that component will not take place at the given temperature, i.e. the triangular plot will not include the solubility curve for that component.

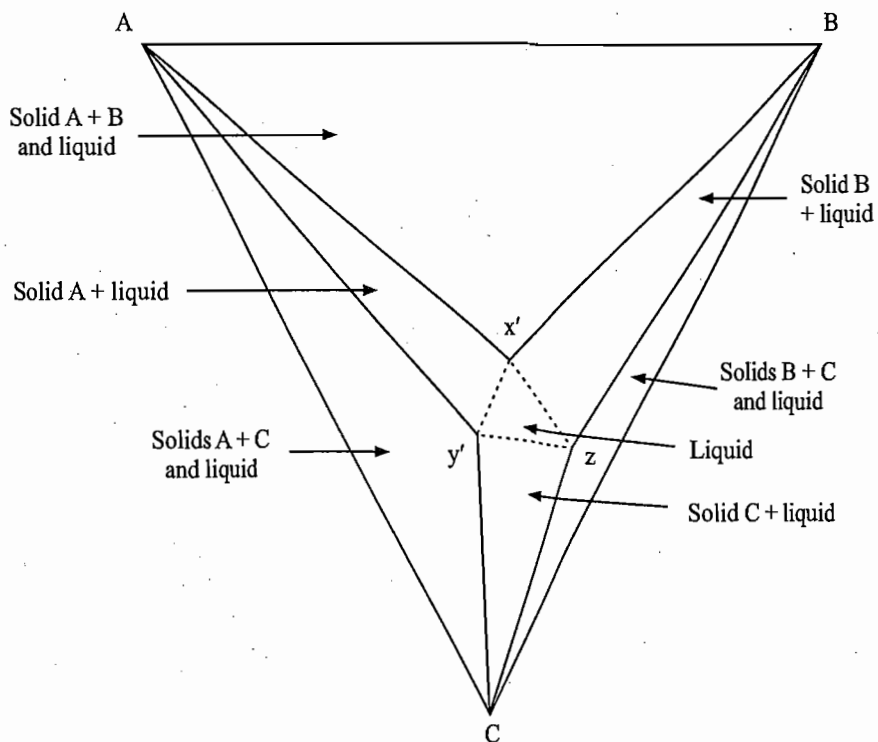


Fig. 7.4.8 Triangular plot at temperature T_7 which lies below the eutectic temperatures of A-B, A-C and B-C systems

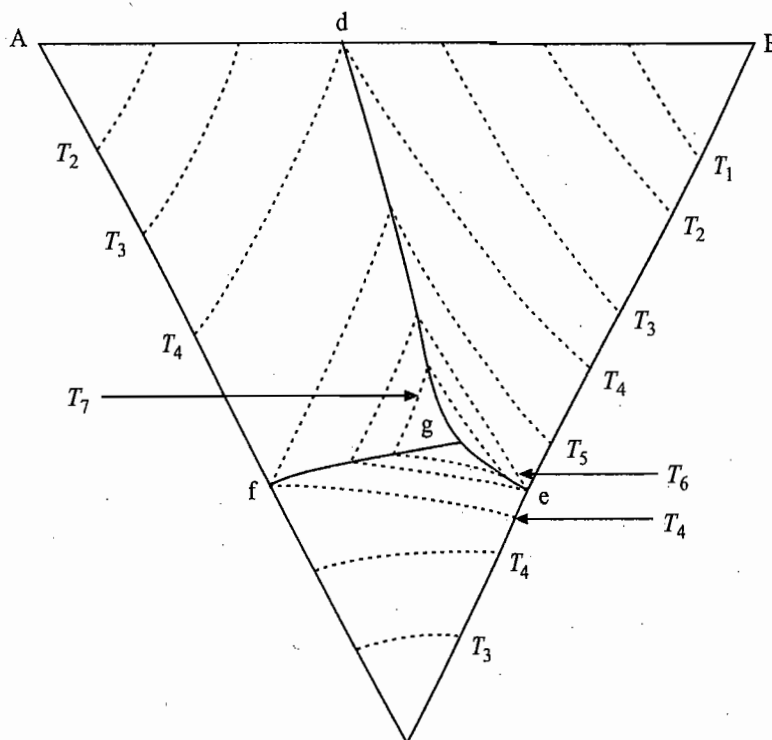


Fig. 7.4.9 Triangular plots at different temperatures on a single triangle

- (ii) The triangular plot will contain as many solubility curves as the number of components having their freezing points above the temperature at which the system is being studied. These solubility curves will not meet each other if the temperature of the system is greater than the three binary eutectic temperatures and thus the triangular plot will have separate regions of crystallizations.
- (iii) The solubility curves will meet each other on a side of the triangle if the temperature of the system is the same as that of the binary eutectic point for a system involving the two components which lie on either ends of the involved side. If the temperature of the system is lesser than the binary eutectic temperature but greater than the ternary eutectic temperature, the two solubility curves of components of the binary system will meet each other on the ternary eutectic curve which lies within the triangle. In such a case, the triangular plot will also include a region where the two solids can exist in equilibrium with a solution of constant composition.
- (iv) If the temperature of the system lies below the eutectic temperatures of A–B, A–C and B–C systems but above the ternary eutectic temperature, the solubility curves of A, B and C will intersect each other on the respective ternary eutectic curves and thus lie within the triangle. In this case, the triangle plot will include the regions where (a) pure components are in equilibrium with the respective solubility curves, and (b) two components, viz., A and B, A and C, and B and C, are in equilibrium with the respective solution of fixed composition.
- (v) If the temperature of the system is less than the ternary eutectic temperature, the system merely consists of a mixture of the three solids.

Effects Produced on Cooling a Ternary System

Suppose we have a ternary system represented by the point *h* of Fig. 7.4.10. Let the temperature of the system at the point *h* be T_0 . Since the point *h* lies above the solid A-liquid surface *afgda*, the system is in the liquid state.

On lowering the temperature, the system moves along the line *hi* and it remains in the liquid state till the temperature T_1 is reached. At this temperature the system has reached to solid A-liquid surface *afgda*. Thus solid A starts precipitating.

On lowering the temperature further, the system moves below the surface *afgda* and thus represents solid A in equilibrium with the liquid. Since only solid A precipitates, the amounts of the components B and C in the liquid phase will remain unaffected. That is, so long as only solid A is in equilibrium with liquid, the ratio B : C in the liquid would remain constant. Thus during cooling of the system, the composition of the liquid phase is shifted on the surface *afgda* along the line *ijkl* which represents the constant ratio of B/C in the liquid phase. If the projections of the points *i*, *j*, *k* and *l* are made on the equilateral triangle, the projected points *i*, *j*, *k* and *l* would make a straight line which on extending will pass through the point A. This is shown at the bottom of Fig. 7.4.10. Each system on the line *Aijkl* represents the liquid composition with constant ratio of B/C and different amounts of A. Since the line *ijkl* passes through the apex A, it is the solid A which is in equilibrium with the liquid. At the point *i*, the temperature of the system is T_1 , and at this point, solid A just starts precipitating. At the point *j*,

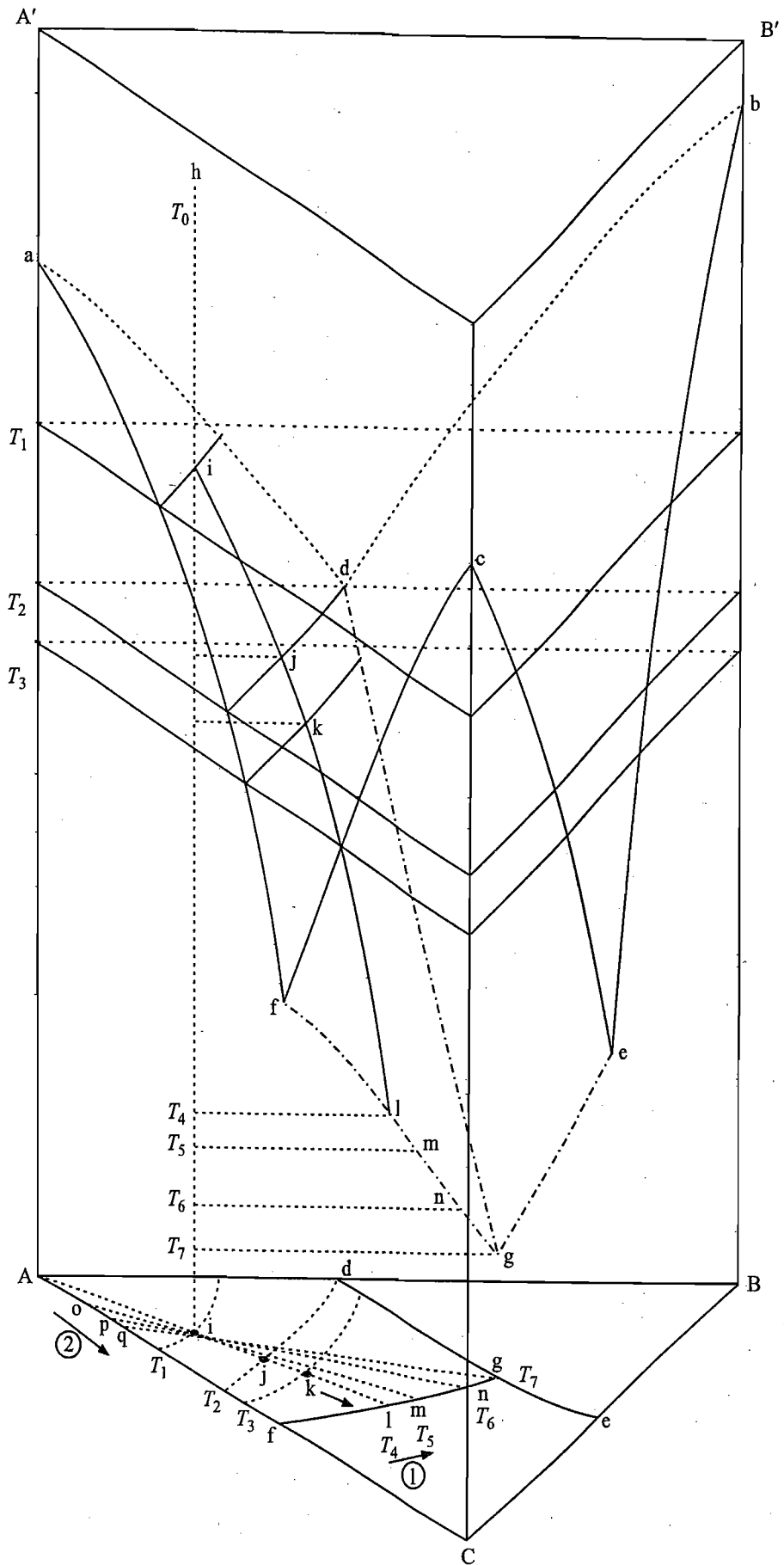


Fig. 7.4.10 The sequence of effects produced on cooling a ternary system. The tie-lines are as follows. Ai at T_1 , Aij at T_2 , Aik at T_3 , Ail at T_4 , oim at T_5 , pin at T_6 , and qig at T_7 . The arrows 1 and 2 indicate the directions of change in compositions of liquid and solid phases, respectively.

temperature of the system is T_2 and the relative amounts of solid A and liquid as given by the lever rule are:

$$\frac{\text{Amount of solid A}}{\text{Amount of liquid}} = \frac{ij}{Ai}$$

At temperature T_3 , the composition of liquid phase is given by the point k and the relative amounts of solid A and liquid are

$$\frac{\text{Amount of solid A}}{\text{Amount of liquid}} = \frac{ik}{Ai}$$

Obviously, the amount of solid A at T_3 is more than that at T_2 .

Solid A continues to appear till the system has been cooled to temperature T_4 , where the liquid composition lies on the intersection line fg of A and C liquidus surfaces. Thus, at temperature T_4 , solid C also starts crystallizing along with solid A. As the solid C is also being removed from the liquid, the amount of C in the latter decreases, consequently, the C/B ratio in the liquid is decreased, and hence its composition will shift away from the apex C and towards the apex B, i.e. along the line lg shown at the bottom triangle of Fig. 7.4.10. Since the solid is no longer pure A but is a mixture of A and C, it is obvious that the line passing through the liquid composition and the point i does not pass through the apex A but will intersect the line AC. Thus on lowering the temperature further, the composition of liquid is shifted along lg and that of the solid along the line AC. For example, at temperature T_5 , the liquid composition is represented by the point m and that of solid by the point o. At T_6 , the liquid composition is n and that of the solid is p. It may be seen that the length of the tie-line from the point i to the liquid composition increases while that from the point i to the solid composition decreases as a result of lowering the temperature of the system. This, according to the lever rule, implies that the amount of solid relative to that of liquid is increasing with the decrease in temperature. The composition of the solid mixture at any instant can be determined again with the help of the lever rule. For example, at temperature T_6 , the relative amounts of A and C in the solid mixture is

$$\frac{\text{Amount of solid A}}{\text{Amount of solid C}} = \frac{pC}{Ap}$$

Finally, when the temperature of the system is lowered to T_7 , the composition of liquid has reached the point g which represents the ternary eutectic point. Thus, at this temperature solid B also starts crystallizing along with A and C in such a manner that the composition of liquid remains unaltered. The process of crystallization at this point is isothermal in nature. The composition of solid must now reflect a composition increasing in B from its zero value on the line AC up to the original amount of B in the starting mixture at point i. Thus, the solid composition moves from point q to i keeping all the while temperature and composition of liquid to constant values. When the solid acquires the composition of point i, the entire liquid is solidified and further cooling results only in the cooling of the three-phase solid mixture.

7.5 TERNARY SYSTEMS OF TWO SOLID COMPONENTS AND A LIQUID

In this section, we shall describe phase diagrams of systems involving crystallization of solid phases from an aqueous solution containing two components. We consider these diagrams with reference to an important type of systems in which the two solid components are salts with an ion common between them. The condition of a common ion is essential to keep the system to a three-component one, since otherwise the number of components will become four. In the present treatment, it will be assumed that temperature at which the system is being studied lies above 0 °C, as otherwise one would also have to include an equilibrium curve corresponding to the separation of ice in the triangular plot.

The description of various equilibria diagrams can be conveniently discussed according to the following classification depending upon the nature of solids that crystallize at a given temperature.

- (1) Crystallization of pure components only.
- (2) Formation of binary compounds such as hydrates.
- (3) Formation of a double salt.
- (4) Formation of a ternary compound.
- (5) Formation of a complete series of solid solutions.
- (6) Formation of solid solutions with partial miscibility.

We discuss below phase diagrams of the above categories one after the other.

7.6 CRYSTALLIZATION OF PURE COMPONENTS ONLY

Expected Triangular Plot

Figure 7.6.1 shows the triangular plot of a ternary system in which only pure components crystallize from the aqueous solution.

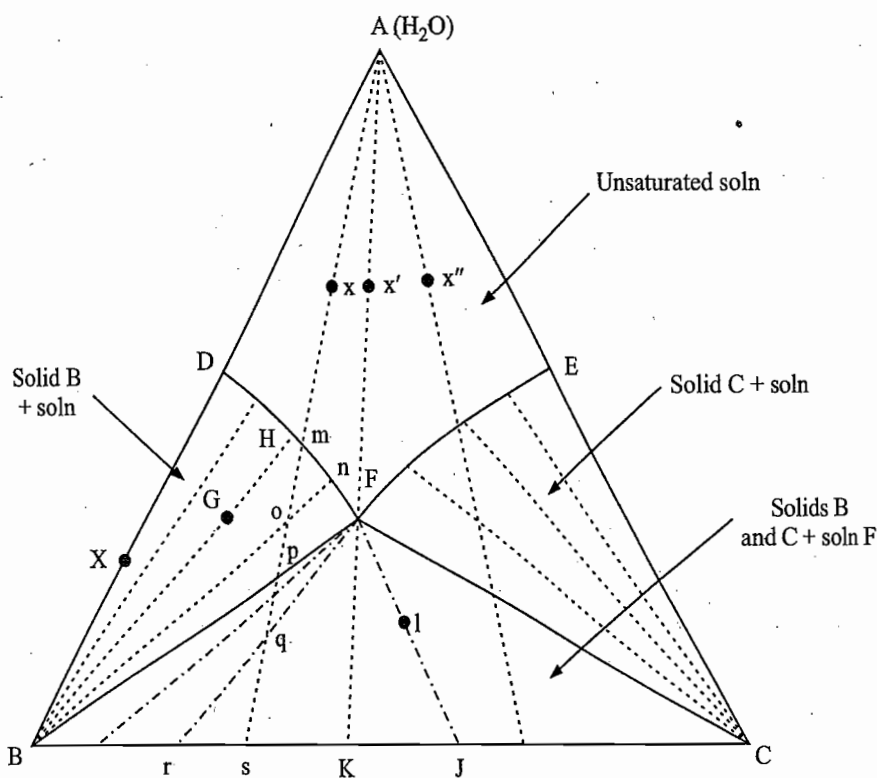


Fig. 7.6.1 Triangular plot for a system where only pure components crystallize from the solution

Description of the Diagram

Point D: This point represents the saturation solubility of component B in water. Thus from D to A(H₂O), we have unsaturated solution of B in water and from D to B, we have saturated solution of B of composition D in equilibrium with the solid B; their relative amounts are given by the lever rule. For example, at the point X, this ratio is given as

$$\frac{\text{Amount of solid B}}{\text{Amount of saturated solution of B}} = \frac{XD}{XB}$$

Line DF: This line represents the saturation solubility of B in water in the presence of the component C.

Point E: This point represents the saturation solubility of the component C in water.

Line EF: This line represents the saturation solubility of C in water in the presence of the component B.

Point F: At the point F, the two lines DF and EF meet each other and thus represents a system where both solids B and C are in equilibrium with the solution F. According to the phase rule, the point F is an invariant point since $P = 3$ and $F = C - P + 0 = 3 - 3 + 0 = 0$.

Area ADFEA: A point within this area represents an unsaturated solution of B and C.

Area BDFB: A point within this area represents a system where solid B is in equilibrium with the solution. The composition of the solution lies on the line DF and can be obtained by joining the apex B with the point under study and then extending it to the line DF. For example, at the point G, we have solid B in equilibrium with the solution of composition corresponding to the point H. Their relative amounts as given by the lever rule are

$$\frac{\text{Amount of solid B}}{\text{Amount of solution H}} = \frac{GH}{BG}$$

The line BGH is, in fact, the tie line.

Area CEFC: A point in this region represents a system where solid C is in equilibrium with the solution whose composition lies on the line EF. The composition of the solution can be obtained by joining the apex C with the given point under study and then extending it to the line EF.

Area BFCB: A point in this area represents a system of two solids B and C in equilibrium with the melt of composition corresponding to the point F. In this area, each system is invariant as $P = 3$ and $F = C - P + 0 = 3 - 3 + 0 = 0$. The relative amounts of the two solids and those of total solid and the solution F can be obtained by making use of the lever rule twice as indicated below for the point I (Fig. 7.6.1).

The composition of the solid mixture at the point I can be obtained by joining the point F to the point I and then extending the line FI up to the side BC where it meets at the point J. The composition of the solid mixture is given by the point J. The ratio of the amounts of the two solids as given by the lever rule is

$$\frac{\text{Amount of solid B}}{\text{Amount of solid C}} = \frac{CJ}{BJ}$$

The ratio of amounts of the total solid and the solution as given by the lever rule is

$$\frac{\text{Amount of total solid}}{\text{Amount of solution F}} = \frac{FI}{IJ}$$

In fact, a point on the line JIF represents a system where the solid mixture of composition J is in equilibrium with the solution F. The only thing that varies from point to point is the relative amounts of the total solid and the solution.

Process of Isothermal Evaporation

The sequence of events that takes place when an unsaturated solution is subjected to isothermal evaporation (i.e. when more and more of water is gradually removed) can be easily predicted from Fig. 7.6.1. Let the unsaturated solution x be subjected to isothermal evaporation. The state of the overall system will move along the line xs during the isothermal evaporation. The line xs can be obtained by joining the apex representing water with the point x and then extending it to side BC where it meets at the point s . From the point x to m , the solution remains unsaturated. At m the solution becomes saturated with respect to the component B and thus the pure component B starts precipitating. The removal of B from the solution shifts the composition of the solution away from the apex B , i.e. along the line mF . As more of water is removed, the state of the system moves along mp with the removal of more and more of B . This may be verified from the increasing length of the portion of various tie lines lying right to the line mp relative to those lying left to this line. At the point m , the relative ratio of solid B and the solution is zero while at the point o , this ratio is

$$\frac{\text{Amount of solid B}}{\text{Amount of the solution n}} = \frac{on}{Bo}$$

and that at p is

$$\frac{\text{Amount of solid B}}{\text{Amount of the solution F}} = \frac{pF}{Bp}$$

At the point p , the removal of a very small amount of water further brings the state of the system within the area $BFCB$. Thus, now the system consists of two solids B and C in equilibrium with the solution F . The following effects are produced when the state of the system moves along the line ps as a result of the removal of more and more water from the system.

(i) The composition of the solid mixture steadily shifts from the point B to s and thus the proportion of C steadily increases.

(ii) The relative amounts of the total solid mixture and the solution are shifted more and more in favour of the solid mixture as may be seen from the increasing length of the portion of various tie lines lying right above the line ps relative to those lying below it.

At the point s , complete evaporation of water has taken place and the system merely consists of the mixture of solids B and C in the ratio given below.

$$\frac{\text{Amount of solid B}}{\text{Amount of solid C}} = \frac{Cs}{Bs}$$

This ratio will also be equal to the original ratio of B and C present in the unsaturated solution x.

If the composition of the original unsaturated solution lies at the point x'', then on gradual evaporation, it is the solid C that separates first as the line joining A to x'' passes through the saturation curve EF. If the original composition of the solution lies on the line obtained by joining the invariant point F to the apex representing H₂O, then both solids B and C will appear simultaneously. Moreover, the proportion of the two solids present in the mixture will be the same as that present in the solution F, since the composition of the latter remains unchanged during the process of evaporation.

Process of Isothermal Addition of Water

In a similar manner the effects produced during the isothermal addition of water to a mixture of salts can be predicted. In fact, the sequence of steps that is produced is exactly reverse of those seen during the isothermal evaporation. Take, for example, the system represented by the point s. The addition of water to this system will cause the system to move initially along the line sp and then along pm and finally along mx. From s to p, the addition of water will result in the formation of a saturated solution of constant composition corresponding to the point F keeping all the while both solids B and C in equilibrium with the solution; the relative amounts of the two solids increase in favour of solid B, i.e. the composition of the mixture will move along the line sB. At the point p, solid C has completely dissolved and we get a system of solid B in equilibrium with the saturated solution of composition corresponding to the point F. The addition of more water now causes the dissolution of more and more of solid B, and thus composition of the solution is shifted to the left along the line Fm. The relative amount of the remaining solid B decreases as may be seen from the decreasing portion of various tie lines lying above the line pm relative to those present below it. Finally from m to x, the solution becomes more and more unsaturated.

Maximum Amount of B or C Recoverable

The equilibrium diagram as given in Fig. 7.6.1 can also be utilized for determining the maximum amount of solid B (or C) that can be separated from a mixture of B and C of the given composition. Pure solid B will be obtained if the original composition of the solid mixture lies to the left of the point K, but pure solid C will be obtained if the composition lies to the right of this point. The maximum amount of solid B (or solid C) is obtained when enough water has been added so that the composition of the resultant system lies on the line BF (or CF). This amount can be calculated as follows.

Let the composition of the original solid mixture of B and C be represented by the point s. Let enough water be added so that the point p is reached. Applying the lever rule at the point p on the line BF, we have

$$\frac{\text{Amount of solution F}}{\text{Amount of solid B}} = \frac{pB}{pF}$$

Adding one to both sides, we have

$$\frac{\text{Amount of solution F} + \text{Amount of solid B}}{\text{Amount of solid B}} = \frac{pB + pF}{pF} = \frac{BF}{pF}$$

$$\text{or Amount of solid B} = \left(\frac{pF}{BF} \right) (\text{Total amount of the system}) \quad (7.6.1)$$

Total amount of the system at the point p may be determined again through the application of the lever rule at the point p on the line sA(H₂O). Thus, we have

$$\frac{\text{Amount of water to be added to reach the point p}}{\text{Amount of solid mixture is}} = \frac{ps}{pA}$$

Adding one on either sides, we have

$$\frac{\text{Amount of water} + \text{Amount of solid mixture}}{\text{Amount of solid mixture}} = \frac{ps + pA}{pA}$$

$$\text{i.e. } \frac{\text{Total amount of the system}}{\text{Amount of solid mixture}} = \frac{sA}{pA}$$

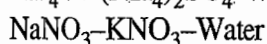
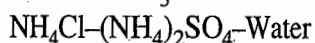
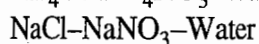
Thus, Eq. (7.6.1)

$$\text{Amount of solid B} = \left(\frac{pF}{BF} \right) \left(\frac{sA}{pA} \right) (\text{amount of solid mixture}) \quad (7.6.2)$$

It may also be seen from Fig. 7.6.1 that solid B can be recovered only when the original composition does not exceed the composition K. Once this composition is exceeded towards C, then the line joining the given point to the apex representing water will pass through the region of saturated solution of C and hence only C can be recovered from the mixture. If the original composition corresponds to the point K, the two substances cannot be recovered separately in pure forms from the system.

Examples

Examples of systems exhibiting triangular plot of Fig. 7.6.1 are



Example 7.6.1

For the system KNO₃-NaNO₃-H₂O, a ternary point exists at 5 °C at which the two anhydrous salts are in equilibrium with a saturated solution containing 9.04% by mass of KNO₃ and 41.01% NaNO₃. Determine analytically the maximum mass of KNO₃ which could be recovered pure from a salt mixture containing 70 g of KNO₃ and 30 g of NaNO₃ by crystallization from an aqueous solution at 5 °C.

Solution

First of all, the point a corresponding to the given composition of the ternary point, viz., 9.04% by mass of KNO₃ and 41.01% NaNO₃, was located (Fig. 7.6.2). Then the point b corresponding to the given salt mixture, viz., 70 g of KNO₃ and 30 g of NaNO₃, was located. Points a and b were joined with the apexes B and A, respectively. The lengths bc, cA, Bc and ca were measured and found to be 2.3 cm, 6.6 cm, 4.1 cm and 3.7 cm, respectively. At the point c, we have

$$\frac{\text{Mass of water}}{\text{Total mass of salt}} = \frac{2.3}{6.6}$$

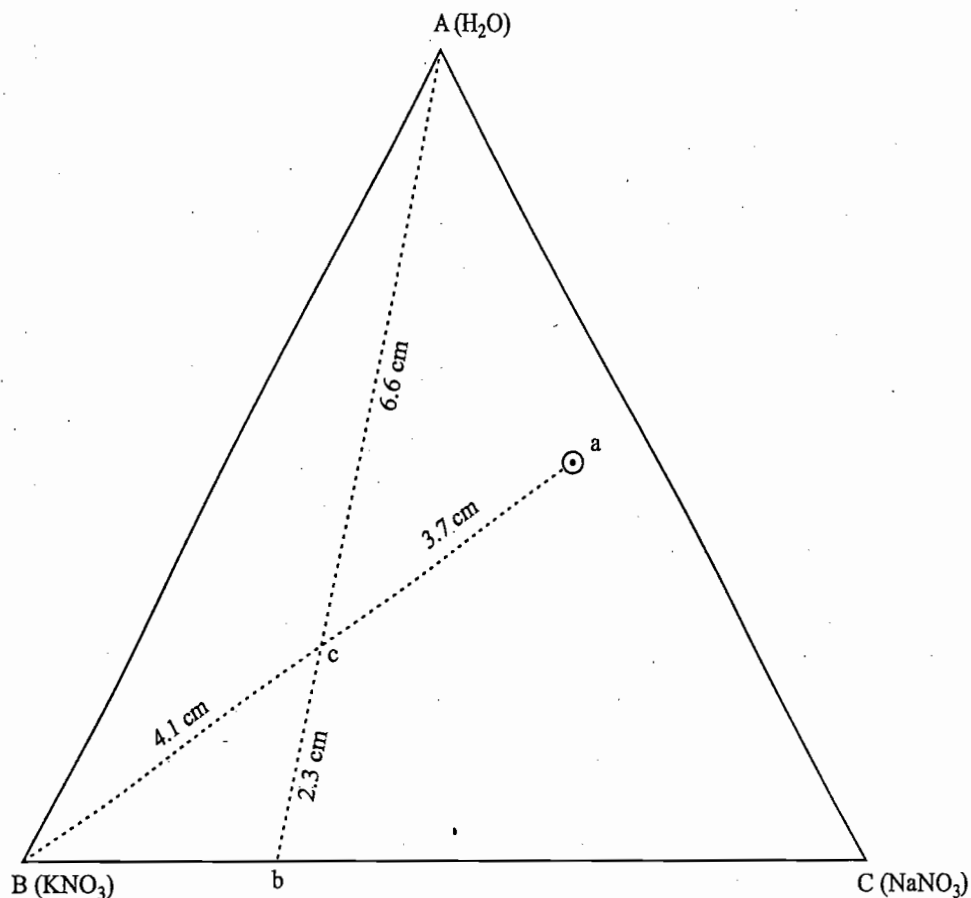


Fig. 7.6.2

$$\begin{aligned} \text{Mass of water} &= \left(\frac{2.3}{6.6} \right) (\text{Total mass of salt}) = \frac{2.3}{6.6} \times 100 \text{ g} \\ &= 34.83 \text{ g} \end{aligned}$$

Total mass of the system at c = 100 g + 34.83 g = 134.83 g.

The point c represents solid KNO_3 in equilibrium with the ternary solution a. Applying the lever rule on the line Bca, we have

$$\frac{\text{Mass of the ternary solution}}{\text{Mass of } \text{KNO}_3} = \frac{4.1}{3.7}$$

or
$$\frac{\text{Mass of the ternary solution} + \text{mass of } \text{KNO}_3}{\text{Mass of } \text{KNO}_3} = \frac{7.8}{3.7}$$

or
$$\frac{\text{Mass of } \text{KNO}_3}{\text{Total mass of the system at c}} = \frac{3.7}{7.8}$$

or
$$\begin{aligned} \text{Mass of } \text{KNO}_3 &= \left(\frac{3.7}{7.8} \right) (\text{Total mass of the system at c}) = \frac{3.7}{7.8} \times 134.83 \text{ g} \\ &= 63.96 \text{ g} \end{aligned}$$

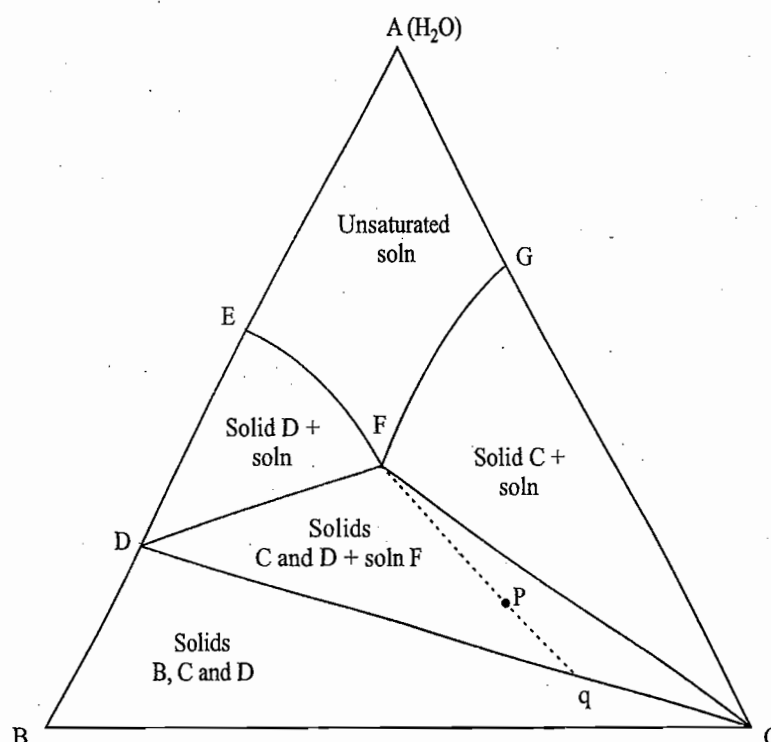
$$\text{Per cent of } \text{KNO}_3 \text{ recovered} = \frac{63.96 \text{ g}}{70 \text{ g}} \times 100 = 91.37$$

7.7 FORMATION OF BINARY COMPOUNDS SUCH AS HYDRATES

Description of the Diagram

Let $B \cdot nH_2O$ be the stable hydrate which is formed by salt B in contact with water. The composition of the hydrate can be shown on the line $BA(H_2O)$ and is given by the point D in Fig. 7.7.1. Let the saturation solubility of this stable hydrate in the presence of a salt C varies along the line EF. The point G represents the saturation solubility of the salt C in water and the line GF is the corresponding solubility curve in the presence of the salt B. The two curves EF and GF meet each other at the point F and thus this point F gives a system where the stable hydrate D and the salt C are in equilibrium with the solution F. With these facts, the labelling of rest of the lines and various areas can be done without any difficulty as summarized below.

Fig. 7.7.1 Triangular plot for system where the salt-hydrate is formed



Area AEFGA: A point in this area represents an unsaturated aqueous solution of B and C.

Area DEFD: A point in this area represents a system in which stable hydrate D is in equilibrium with the solution. The composition of the solution lies on the line EF. Various tie lines start from the line EF and will merge at the point D.

Area CGFC: A point in this area represents a system in which solid C is in equilibrium with the solution. The composition of the solution lies on the line GF. Obviously, various tie lines start from the line FG and will merge at the apex C.

Line DC: All possible mixtures of D and C will lie on the line DC.

Area DFCD: Since the line DC represents the lowest limit up to which both solids D and C can exist, a point in this area represents a system in which solids D and C are in equilibrium with the solution of composition corresponding to the point F. Various tie lines in this region start from the line DC and will merge at the point F.

The relative amounts of solids D and C, and also of the total solid and the solution F can be determined by using the lever rule twice. For example, at the point p, we have

$$\frac{\text{Total amount of solid}}{\text{Amount of solution F}} = \frac{Fp}{pq}$$

$$\frac{\text{Amount of solid D}}{\text{Amount of solid C}} = \frac{Cq}{Dq}$$

From these, the respective amounts of solids C and D and the solution can be determined.

Area BDCB: Since the liquid phase disappears on the line DC, a point below the line DC will represent a solid mixture of B, D and C. The respective amounts of B, D and C can be determined by the method given above.

Example

The system sodium sulphate-sodium chloride-water at 15 °C exhibits phase diagram as given in Fig. 7.7.1. The stable salt formed is $\text{Na}_2\text{SO}_4 \cdot 10\text{H}_2\text{O}$.

Formation of Two Hydrates

Sometimes both the salts form stable hydrates. For example, in the system magnesium chloride-calcium chloride-water at 0 °C, the two salts $\text{MgCl}_2 \cdot 6\text{H}_2\text{O}$ and $\text{CaCl}_2 \cdot 6\text{H}_2\text{O}$ are formed. The triangular plot of such a system will have an appearance as shown in Fig. 7.7.2. Labelling of various lines and areas can be done as usual, but attention must be paid to the lowest region of the plot where either the line CD (as shown) or the line BE (but not together) is observed depending upon the vapour pressure data of the system. If the vapour pressure of the system (E + C) has a value greater than that of the system (B + D), the hydrate E begins to dehydrate as soon as last drop of the solution disappears and

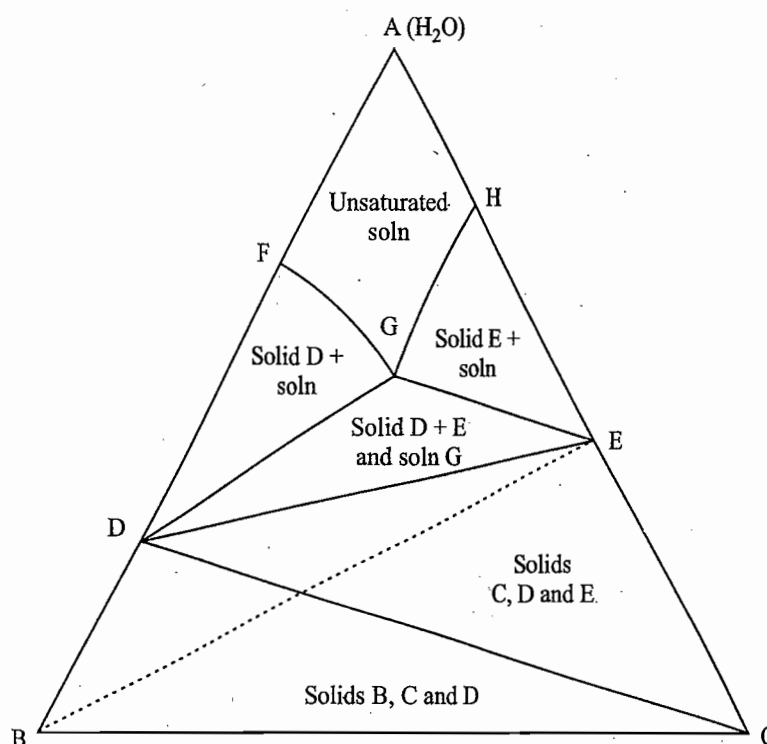


Fig. 7.7.2 Triangular plot for system where two hydrates are formed

we get a system consisting of (C + D + E). Consequently, the line CD is observed. When all of E has dehydrated, we reach the line CD and the pressure of the system falls to the vapour pressure of (B + D). After this, D starts dehydrating and we move into a region of (B + D + C). Conversely, if the vapour pressure of the system (B + D) has a value greater than that of (E + C), then D dehydrates first and E starts dehydrating on the dashed line BE.

Formation of One Hydrate and Two Anhydrous Salts

Sometimes, under certain condition of temperature, the stable hydrate as well as the anhydrous salt can exist in equilibrium with the solution. In such cases, the triangular plot has an appearance as shown in Fig. 7.7.3. The labelling of various points, lines and areas is straightforward and is being summarized now.

Point E: Saturation solubility of the hydrate D.

Line EF: Saturation solubility curve of the hydrate D observed in the solution in the presence of C.

Point H: Saturation solubility of the component C.

Line HG: Saturation solubility curve of the component C observed in the solution in the presence of B.

Line FG: Saturation solubility curve for the pure component B.

Point F: Invariant point where solid hydrate D and solid B are in equilibrium with solution F.

Point G: Another invariant point where solid B and solid C are in equilibrium with the solution G.

Area AEFGHA: A point in this region represents an unsaturated solution.

Area DEFD: A point in this region represents solid hydrate D in equilibrium with the solution; composition of the solution lies on the line EF.

Area BFGB: A point in this region represents solid B in equilibrium with the solution; composition of the solution lies on the line FG.

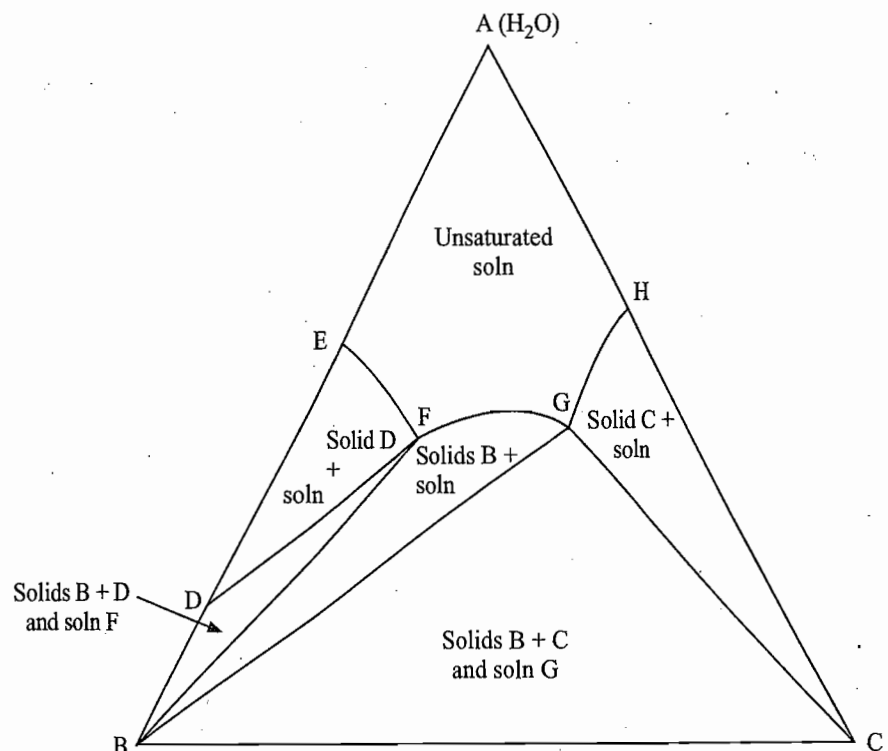


Fig. 7.7.3 Triangular plot where both stable hydrate and the anhydrous salt crystallize together

Area BDFB: Invariant region, where solid hydrate D and solid B are in equilibrium with solution of composition corresponding to the point F.

Area HGCH: A point in this region represents solid C in equilibrium with the solution; composition of the solution lies on the line HG.

Area BGCB: Another invariant region, where solid B and solid C are in equilibrium with solution of composition corresponding to the point G.

Example

The system $\text{Na}_2\text{SO}_4\text{-NaCl-H}_2\text{O}$ between 17.9°C and 32.4°C exhibits the triangular plot as shown in Fig. 7.7.3.

7.8 FORMATION OF A DOUBLE SALT

Description of Diagram

In some cases the two salts B and C combine with each other to form a double salt of general formula B_mC_n . Its composition will be represented by a point such as D on the line BC as shown in Fig. 7.5.5. The triangular plot will now include three solubility curves corresponding to the salts B, D and C. These are shown in Fig. 7.8.1 by the curves EF, FG and GH, respectively.

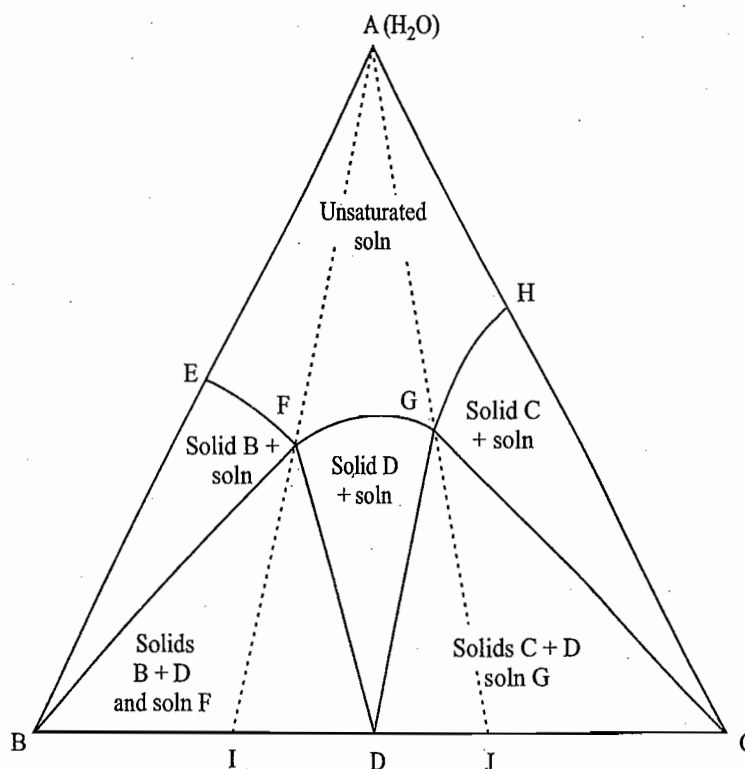


Fig. 7.8.1 Triangular plot of a system where congruently saturating double salt is formed

The points F and G are the two invariant points where we have

- (i) At point F: Solid B and solid double salt D are in equilibrium with the solution of F.
- (ii) At point G: Solid C and solid double salt D are in equilibrium with the solution of G.

Various tie lines start from the lines EF, FG and GH will meet at the points B, D and C, respectively. With this information, labelling of the triangular plot can be done without any difficulty and is summarized below.

Area AEFGHA; A point in this region represents an unsaturated solution of B and C.

Area BEFB: A point in this region represents a system in which solid B is in equilibrium with the solution whose composition lies on the line EF.

Area HGCH: A point in this region represents a system in which solid C is in equilibrium with the solution whose composition lies on the line HG.

Area DFGD: A point in this region represents a system in which solid double salt D is in equilibrium with the solution whose composition lies on the line FG.

Area BFDB: This region represents solids B and D in equilibrium with the solution F and, therefore, a point in this region represents an invariant system. Various tie lines in this region on starting from the line BD will merge at the point F. With the help of the lever rule, we can determine the relative amounts of the total solid (B + D) and the solution and those of solid B and solid D in the total solid mixture.

Area CDGC: A point in this area represents a system of solids C and D in equilibrium with solution G. Various tie lines start from the line CD and meet together at the point G.

Example 7.8.1

The following data are available for the system nickel sulphate-sulphuric acid-water at 25 °C. Sketch the triangular plot and label it.

Liquid phase		Solid phase
NiSO ₄ /mass %	H ₂ SO ₄ /mass %	
28.13	0	NiSO ₄ · 7H ₂ O
27.34	1.79	NiSO ₄ · 7H ₂ O
27.16	3.86	NiSO ₄ · 7H ₂ O
26.15	4.92	NiSO ₄ · 6H ₂ O
15.64	19.34	NiSO ₄ · 6H ₂ O
10.56	44.68	NiSO ₄ · 6H ₂ O
9.65	48.46	NiSO ₄ · H ₂ O
2.67	63.73	NiSO ₄ · H ₂ O
0.12	91.38	NiSO ₄ · H ₂ O
0.11	93.74	NiSO ₄
0.08	96.80	NiSO ₄

Solution

The state points corresponding to the given data are chosen and then a smooth curve passing through these points is drawn. On this curve, different regions of solubility curve are selected. Each solubility curve is then joined to the appropriate point representing composition of the corresponding solid phase (Fig. 7.8.2). Labelling of the triangular plot is shown in the figure itself.

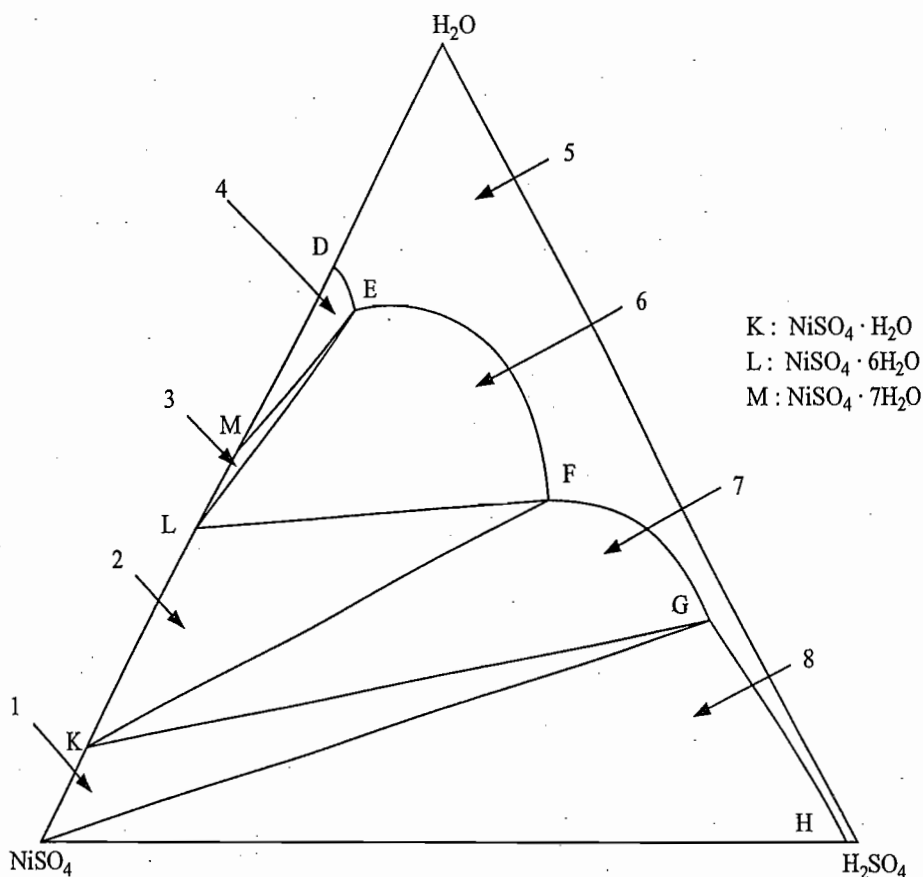
Stability of a Double Salt

The stability of a double salt in the presence of water depends on the placements of its composition point and its solubility curve. If the apex representing water in Fig. 7.8.1 is joined with the two invariant points F and G and the resultant lines are extended right up to the line BC, we get two lines AFI and AGJ.

For congruently saturating salt If the composition of the double salt (represented by the point D) lies anywhere between I and J, then on gradually adding water to the double salt, the state of the overall system will move along DA which will

Fig. 7.8.2 The required phase diagram:

- (1) NiSO_4 and $\text{NiSO}_4 \cdot \text{H}_2\text{O}$
+ soln. G
- (2) $\text{NiSO}_4 \cdot 6\text{H}_2\text{O}$ and
 $\text{NiSO}_4 \cdot \text{H}_2\text{O}$ + soln. F;
- (3) $\text{NiSO}_4 \cdot 7\text{H}_2\text{O}$ and
 $\text{NiSO}_4 \cdot 6\text{H}_2\text{O}$ + soln. E;
- (4) $\text{NiSO}_4 \cdot 7\text{H}_2\text{O}$
+ soln.(DE);
- (5) unsaturated soln.;
- (6) $\text{NiSO}_4 \cdot 6\text{H}_2\text{O}$
+ soln.(EF);
- (7) $\text{NiSO}_4 \cdot \text{H}_2\text{O}$
+ soln.(FG), and
- (8) NiSO_4 + soln.(GH)



pass through the region DFGD. This implies that on adding water, a saturated solution of the double salt can be prepared and thus the double salt remains intact in the presence of water. In other words, the double salt is stable in the presence of water. Such a double salt is called *congruently saturating*.

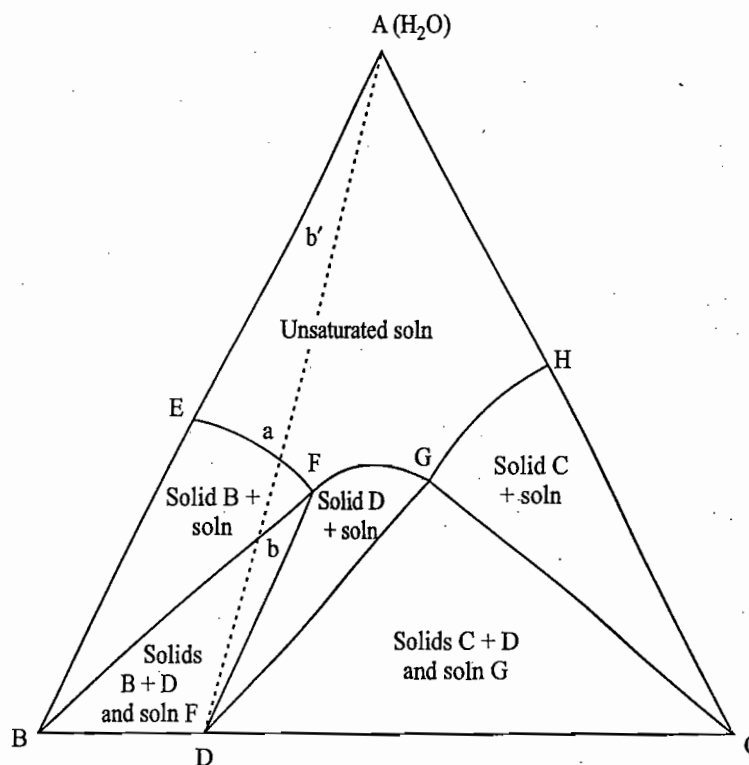
Incongruently Saturating Salt If composition of the salt lies outside the range IJ, then the line connecting the point under study with the apex A(H_2O) will not pass through the region DFGD but will pass initially through the area BFDB or CGDC and then through BEFB or CGHC and finally through AEFGHA depending upon whether the point D lies on the left of the point I or to the right of the point J. In such a case, it is obvious that a saturated solution of the double salt alone cannot be prepared and the double salt on adding water will undergo partial or complete decomposition. Such a salt is known as *incongruently saturating*.

Illustration

Let us illustrate the stability of double salt with the help of a specific example as shown in Fig. 7.8.3.

The point D representing the composition of the double salt lies outside the region of stability. On adding water, we move into the region BDFB where both solid B and the double salt are in equilibrium with the solution F. Thus the double salt besides dissolving in water also dissociates to give solid salt B. In other words, the double salt is no longer stable in the presence of water. As more and more of water is added, composition of the solution will remain unaltered corresponding to the point F while the relative amounts of solid B and double salt are shifted more and more in favour of B. This implies that more and more of double salt decomposes as the state point moves from D to b. At the latter

Fig. 7.8.3 Triangular plot for a system where incongruently saturating double salt is formed



point, the double salt completely decomposes to give a saturated solution of B of composition F in equilibrium with solid B only. On adding more water, we move along ba where more and more of solid B dissolves and the composition of the solution moves along Fa . At the point a , there is a complete dissolution of B and the addition of more of water gives the unsaturated solution of B and C.

Process of Isothermal Evaporation

We now consider the process of isothermal evaporation in which water is gradually removed until the system becomes one of solid mixture. In fact, this process is just the reverse of the above process and the effects produced can be conveniently described with the help of a triangular plot. We consider some of the typical cases for both congruently saturating and incongruently saturating double salts. These are discussed below.

For Congruently Saturating Double Salt

In general, the effects produced will depend on the original composition of the unsaturated solution and can be predicted by drawing lines from the apex representing water to the point under study and then extending it to a point where it meets the side BC . We shall consider four typical solutions x_1 , x_2 , x_3 and x_4 as shown in Fig. 7.8.4.

For the solution x_1 This solution contains the same proportion of B and C as that of the double salt. Thus the line Ax_1 will on extending meet at the point D corresponding to composition of the double salt. From x_1 to a , the solution remains unsaturated, at the point a , the double salt starts appearing and continues to appear till the point D is reached.

For the solution x_2 This system contains more than the requisite amount of B (corresponding to the point x_1) to form the double salt. Thus, the end-products

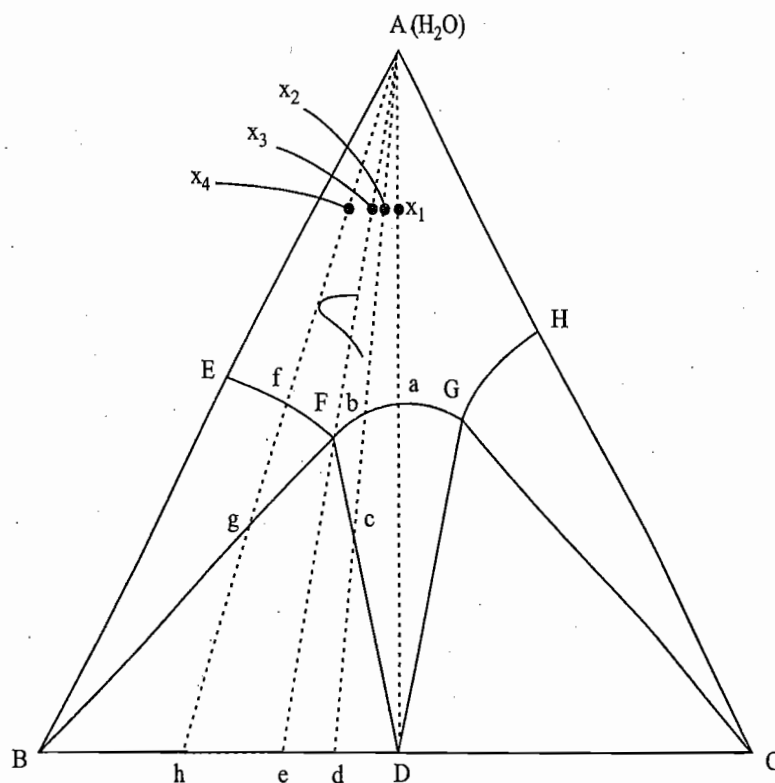


Fig. 7.8.4 The process of isothermal evaporation as applied to four systems involving congruently saturating double salt

consist of the double salt and the excessive amount of solid B. From x_2 to b, the solution remains unsaturated, at b the double salt starts appearing and continues to appear till the point c is reached. Since the double salt contains more of C as compared to the amount present in the solution, removal of more and more of double salt along bc shifts the composition of the solution along the line bF. At c, the composition of the solution is F. From c to d both the solids, i.e. B and the double salt, start precipitating simultaneously from the solution, keeping all the while composition of the solution to a constant value of F.[†]

For the solution x_3 Here the line Ax_3 passes through the invariant point F. From x_3 to F, the solution remains unsaturated and from F onwards both the solids, B and the double salt, appear together till the point e is reached.

For the solution x_4 From x_4 to f, the solution remains unsaturated. At f, it is the solid B which appears first and continues to appear till the point g is reached, while composition of the solution has moved along fF. From g to h, again both the solids, B and the double salt, appear together keeping all the while constant composition of the solution at the point F.

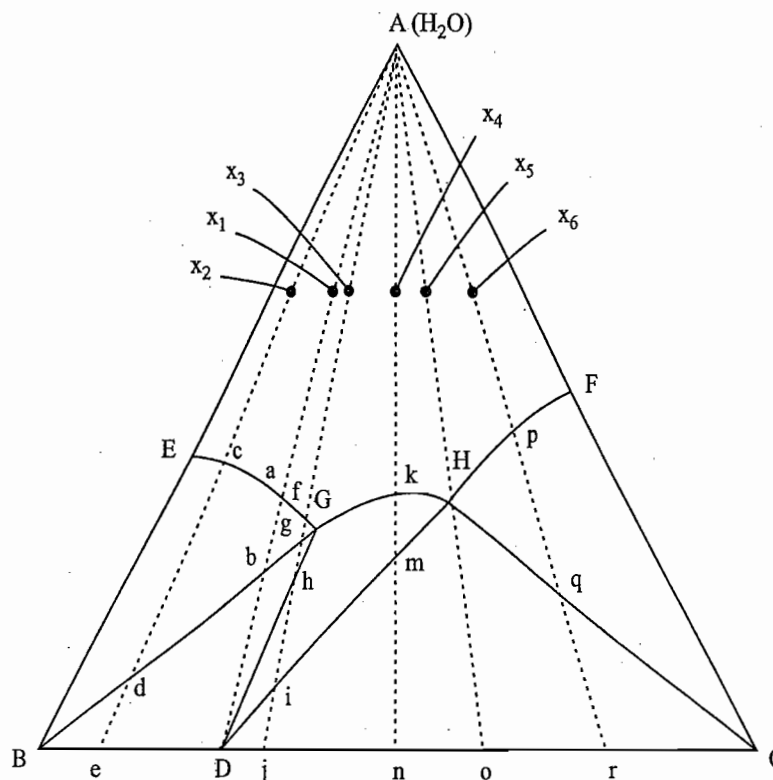
The solution F is known as *congruently saturated solution*.

[†]Since the solution F contains more proportion of B than that present in the double salt, the appearance of solid B from c onwards is due to its precipitation from the solution. The removal of B from the solution will have to be associated with the removal of double salt since only then composition of the solution can be kept at a constant value of F. The appearance of B is not through dissociation of the double salt, since in that case the solution will become richer in the component C.

For Incongruently Saturating Double Salt

Here again the effects produced will depend upon the original composition of the unsaturated solution. We shall consider six typical solutions x_1, x_2, x_3, x_4, x_5 and x_6 as shown in Fig. 7.8.5.

Fig. 7.8.5 Process of isothermal evaporation as applied to six systems involving incongruently saturating double salt



For the solution x_1 The solution x_1 contains the same proportion of B and C as that of the double salt and thus the line Ax_1 on extending will meet at the point D corresponding to the composition of the double salt. From x_1 to a, the solution remains unsaturated. At a, the salt B starts appearing and continues to appear till the point b is reached. Removal of B from the solution makes the solution deficient in B and thus its composition moves along aG. At the point b, the solution has a composition of G, an invariant point where both the solids, B and the double salt D, are in equilibrium with the solution.

Since the double salt contains more proportion of B than is present in the solution, removal of the double salt from the solution will be associated with the dissolution of already precipitated B, since only then the composition of the solution can remain constant at the point G. In other words, the solution at G is *incongruently saturated*. Further removal of water causes the system to move on the line bD. The net result observed along the line bD is the dissolution of more and more solid B and precipitation of more and more double salt, keeping all the while the composition of the solution at the point G. The fact that the proportion of solid B decreases whereas that of solid D increases can be seen from the composition of the solid mixture which moves from B to D during the isothermal evaporation from point b to D. Finally, at the point D whole of water has been removed and the system consists of only double salt D; the composition of which is the same as that present in the original solution.

For the solution x_2 This system contains more of B than the requisite amount of B (corresponding to the point x_1) to form the double salt. Thus the end products of isothermal evaporation are the double salt and the excessive amount of solid B. From x_2 to c, the solution remains unsaturated, at c solid B starts appearing and continues to appear till the point d is reached. At d, composition of the solution corresponds to the point G and thus the system now contains solid B and double salt D in equilibrium with the solution. From d to e, more and more of double salt appears and simultaneously more and more of the salt B dissolves in order to keep the composition of the solution at the point G. Finally at e, the system contains solid mixture consisting of double salt and the excess amount of B. The relative amount of two solids is given as

$$\frac{\text{Amount of solid double salt}}{\text{Amount of solid B}} = \frac{Be}{eD}$$

For the solution x_3 The system contains more of C than the requisite amount of C to form the double salt and thus the end products of isothermal evaporation are the double salt and the excessive amount of C. From x_3 to f, the solution remains unsaturated. At f, the salt B starts appearing and continues to appear till the point g is reached. From g to h, more and more of the double salt is formed with the dissolution of more and more of the salt B. At h, practically whole of solid B has dissolved and the system consists of solid double salt of D and solution G. The system once again becomes univariant as only one solid phase is present in contact with the solution. The removal of more water causes the system to move along hi. Here more and more of the double salt is precipitated out. This may be verified from the increasing length of the portion of various tie lines (if drawn) lying right above the line hi relative to those lying left below it. The composition of the solution changes along the line GH. At the point i, the system again becomes invariant as now two solids, namely, double salt and C, are in contact with the solution H. From i to j, both the solids, C and the double salt, precipitate simultaneously from the solution, keeping all the while composition of the solution to a constant value H.[†] Thus the solution H is a *congruently saturated solution*.

For the solution x_4 From x_4 to k, the solution remains unsaturated. At k, solid double salt starts appearing and continues to appear till the point m is reached. The composition of the solution will move along kH. At the point m, the system becomes invariant and thus removal of more and more water causes the separation of more and more of the solids C and D from the solution, keeping all the while the composition of the solution H to a constant value. The composition of the solid mixture will move along Dn as one moves from m to n and finally at the point n, complete evaporation of water has taken place and the system consists of a solid mixture of C and D with the relative proportion as given below:

[†]The solution of composition H contains more proportion of C than is present in the double salt. Thus, the appearance of solid C from i onwards is due to its precipitation from the solution. The removal of solid C from the solution will have to be associated with the removal of double salt since only then the solution can be kept at constant composition H. The appearance of C cannot be through the dissociation of the double salt, since in that case the solution will become richer in the component B.

$$\frac{\text{Amount of solid C}}{\text{Amount of solid D}} = \frac{Dn}{Cn}$$

For the solution x_5 Here the line Ax_5 on extending will pass through the invariant point H. Thus from x_5 to H, the solution remains unsaturated. At the point H, both salts, C and D, appear together and this continues till the point o is reached where the system consists of a solid mixture of C and D.

For the solution x_6 From x_6 to p, the solution remains unsaturated, from p to q more and more of salt C appears and from q to r both the salts, that is, C and the double salt, appear together. Finally, we reach to the point r where only a solid mixture of C and D is present.

Examples

The system $\text{NH}_4\text{NO}_3\text{-AgNO}_3\text{-H}_2\text{O}$ at 30°C forms congruently saturating double salt $\text{NH}_4\text{NO}_3 \cdot \text{AgNO}_3$ and the system $\text{KNO}_3\text{-AgNO}_3\text{-H}_2\text{O}$ at 30°C forms incongruently saturating double salt.

7.9 FORMATION OF A TERNARY COMPOUND

Expected Triangular Plot

In some systems a ternary compound consisting of all three components (two salts and water) is formed which may be congruently saturating or incongruently saturating. The triangular plot for such type of systems will include a solubility curve corresponding to the ternary compound and the various tie lines start from this curve and meet together at a point D which represents the composition of the ternary compound. Obviously, such a point will lie within the triangle as it includes all the three components. The general appearance of the triangular plot is of the type shown in Fig. 7.9.1. The labelling of various areas is straightforward and is shown along with Fig. 7.9.1.

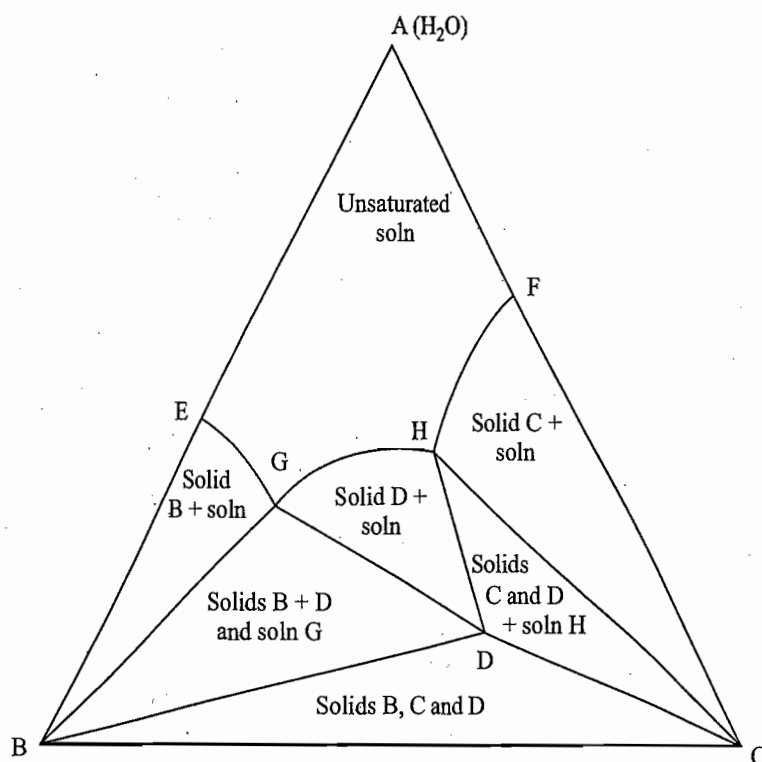


Fig. 7.9.1 Triangular plot for a system in which a ternary compound is formed

Many systems form binary as well as ternary compounds. In such cases the triangular plot takes the form as shown in Fig. 7.9.2.

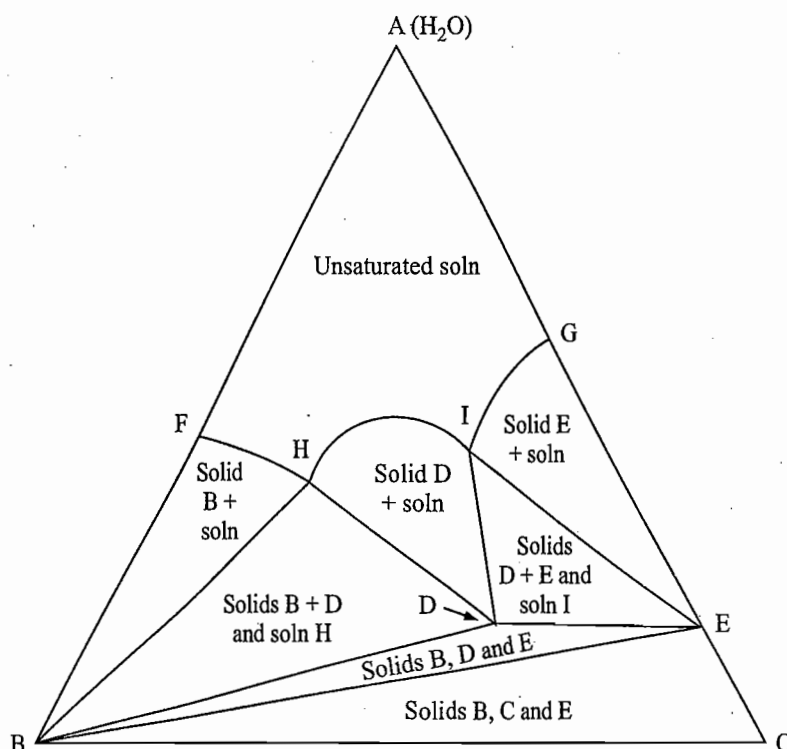
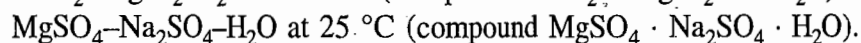
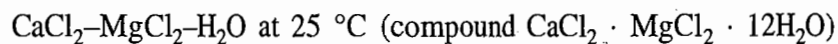


Fig. 7.9.2 Description of different areas in the obtained triangular plot

Examples

Examples of systems exhibiting congruently saturating ternary compound are the various alums with the general formula $B_2(SO_4) \cdot C_2(SO_4)_3 \cdot 24H_2O$ and examples of systems exhibiting incongruently saturating ternary compound are:



Example 7.9.1

The following data give compositions of the liquid and solid phase in equilibrium at $25^\circ C$ in the system ammonium sulphate-beryllium sulphate-water.

Liquid phase		Wet solid phase	
$(NH_4)_2SO_4$	$BeSO_4$	$(NH_4)_2SO_4$	$BeSO_4$
mass %	mass %	mass %	mass %
43.45	0	—	—
38.60	8.62	82.29	2.82
35.88	16.04	71.09	7.59
37.56	19.72	—	—
34.26	22.08	42.93	32.83
32.20	24.04	42.84	33.64
28.09	26.79	—	—
24.99	26.68	9.12	46.90
15.66	27.26	3.07	52.18
5.77	28.56	1.37	51.16
0	29.94	0	59.35

In each case the difference from 100% represents water, (a) Plot the phase diagram identifying all phases, (b) What will be the composition of the first crystals to deposit when solutions containing 10 mass % $(\text{NH}_4)_2\text{SO}_4$ + 25 mass % BeSO_4 and 20 mass % $(\text{NH}_4)_2\text{SO}_4$ + 10 mass % BeSO_4 are evaporated?

Solution

(a) Plotting of the triangular diagram can be conveniently done as follows:

- (i) Draw an equilateral triangle of an edge length of 100 mm.
- (ii) Designate the corners as shown in Fig. 7.9.3.
- (iii) The perpendicular distance A to BC is

$$100 \text{ mm} \times \sin 60^\circ = 100 \text{ mm} \times \frac{\sqrt{3}}{2} = 86.6 \text{ mm}$$

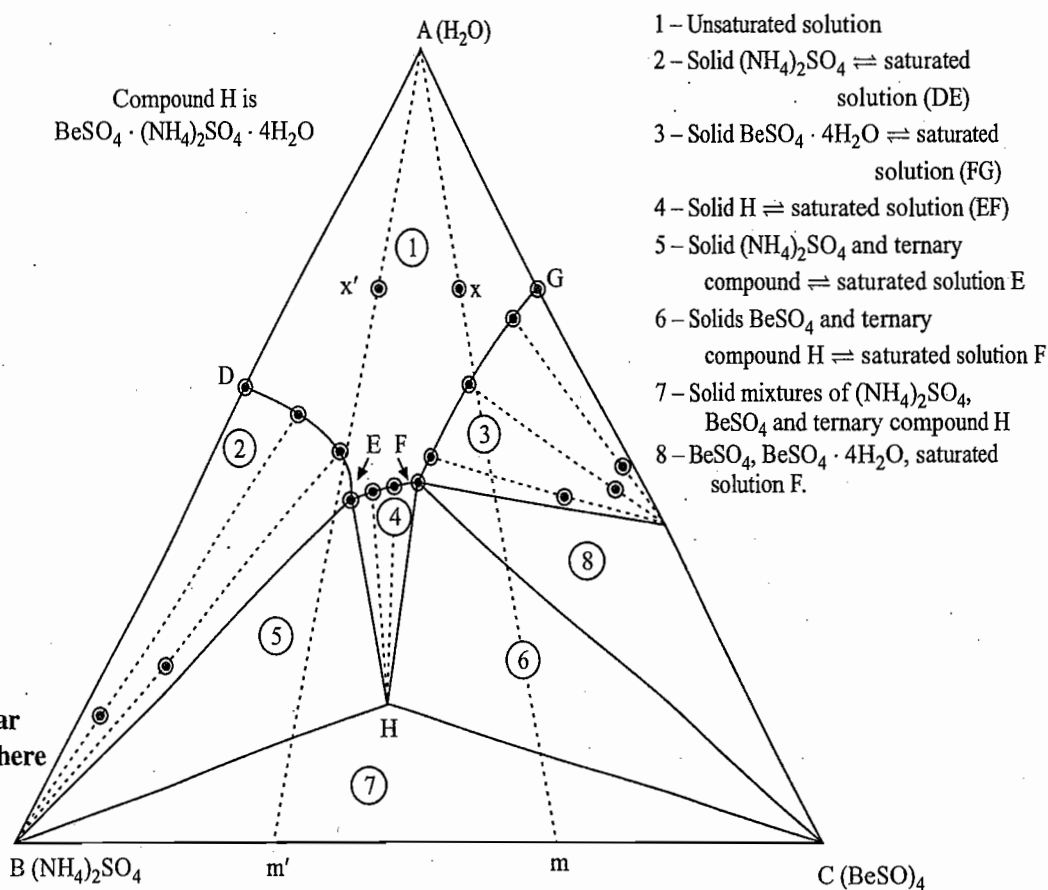
Now this length 86.6 mm represents the various proportions of water. It is zero on the line BC and 100% at the corner A. First of all, the point on this perpendicular line is chosen corresponding to the given proportion of water. Taking, for example, the data of the liquid phase containing 38.60 mass % of $(\text{NH}_4)_2\text{SO}_4$ and 8.62 mass % BeSO_4 , we have

$$\text{Water composition} = 100 - (38.60 + 8.62) = 52.78 \text{ mass \%}$$

The length representing this percentage on the perpendicular line

$$= \frac{52.78}{100} \times 86.6 \text{ mm} = 45.7 \text{ mm}$$

A point at a length 45.7 mm perpendicularly from the side BC is chosen and then a line parallel to the side BC passing through the chosen point is drawn (not shown in the figure). Then on this line, a point at a distance of 38.6 mm (mass % of $(\text{NH}_4)_2\text{SO}_4$ from



the side AC) or at a distance of 8.6 mm from the side AB is chosen. This point represents the required composition.

Alternatively, a point at a distance of 52.78 mm (equal to the water composition) on the side BA or CA (i.e. from B or C towards A) is chosen. A scale at this point parallel to the side BC is placed and a point at a distance of 38.6 mm (equal to the composition of ammonium sulphate) from the side AC is located. This point represents the required composition.

Following either of the above procedures, the various points corresponding to given compositions are chosen. The nature of the solid present in the wet solid phase can be determined by following the method of wet residues (*see*, page 398). Figure 7.9.3 depicts the triangular plot obtained from the given data along with the description of different areas.

(b) When the solution containing 10 mass % $(\text{NH}_4)_2\text{SO}_4$ + 20 mass% BeSO_4 (point x) is subjected to the isothermal evaporation, the system will move along xm, the first crystals which appear will be of salt hydrate $\text{BeSO}_4 \cdot 4\text{H}_2\text{O}$. For the system containing 20 mass % $(\text{NH}_4)_2\text{SO}_4$ + 10 mass % BeSO_4 (point x'), it is the solid $(\text{NH}_4)_2\text{SO}_4$ that separates first as shown in Fig. 7.9.3.

7.10 FORMATION OF SOLID SOLUTIONS

If the two solid components B and C are completely miscible in each other, they will form a continuous series of solid solutions ranging from pure B to pure C. If the components A and B and A and C form eutectic phase diagram and temperature of the system is below the melting points of B and C but above that of A, the ternary phase diagram will have an appearance as shown in Fig. 7.10.1. The system have only two phases in equilibrium and thus will never be invariant. Consequently, in the triangular plot, we have only one solubility curve corresponding to the solid solution of B and C as shown by the line DE in Fig. 7.10.1.

A point in the area below DE represents a system of unsaturated solution whereas that above DE represents a system in which the solid solution is in equilibrium with the corresponding saturated solution. The compositions of the two phases, as usual, are connected through various tie lines. The system $\text{Ba}(\text{NO}_3)_2$ - $\text{Pb}(\text{NO}_3)_2$ - H_2O exhibits the phase diagram as shown in Fig. 7.10.1

Consider a case in which all the three pairs A-B, B-C and C-A form a complete series of solid solution both in the solid and liquid phases. Each of the three faces of a three-dimensional triangular prism will include the phase diagram of complete series of solid solution of the respective binary system as shown in Figs 7.10.2 to 7.10.4.

Figure 7.10.2 depicts the ternary triangular phase diagram in which $T_C^* > T_B^* > T > T_A^*$. The horizontal triangle at temperature T intersects the binary phase diagrams of A-B and A-C as shown in Fig. 7.10.2. The solidus and liquidus lines obtained in this intersection when projected on the base of triangular prism gives the expected ternary phase diagram of the system. The labelling of the phase diagram is straight forward and is shown in the figure itself.

Figures 7.10.3 and 7.10.4 depict the ternary triangular phase diagrams in which (i) $T_C^* > T_B^* = T > T_A^*$ and (ii) $T_C^* > T > T_B^* > T_A^*$, respectively. The expected phase diagrams are shown in the bottom triangle of the respective triangular prisms along with the labelling of the phase diagrams.

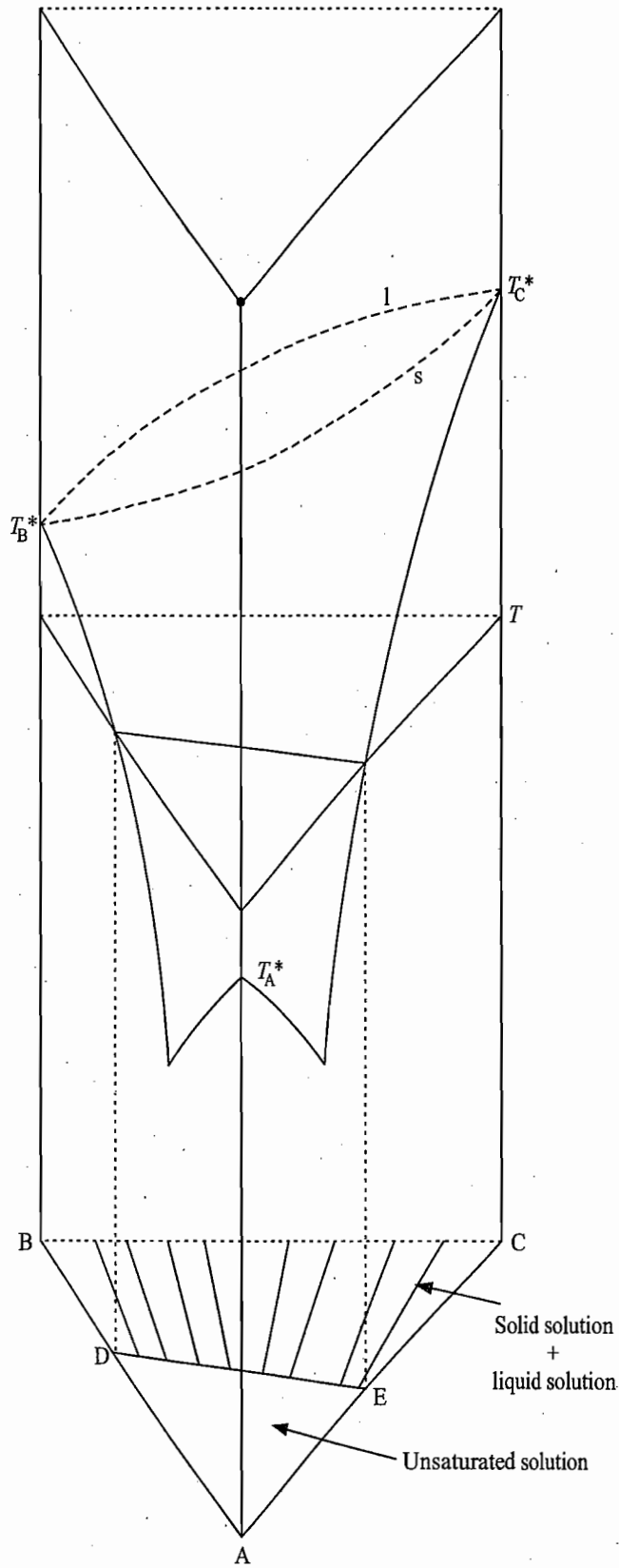


Fig. 7.10.1 Triangular plot for a system exhibiting only one pair B-C of solid solution

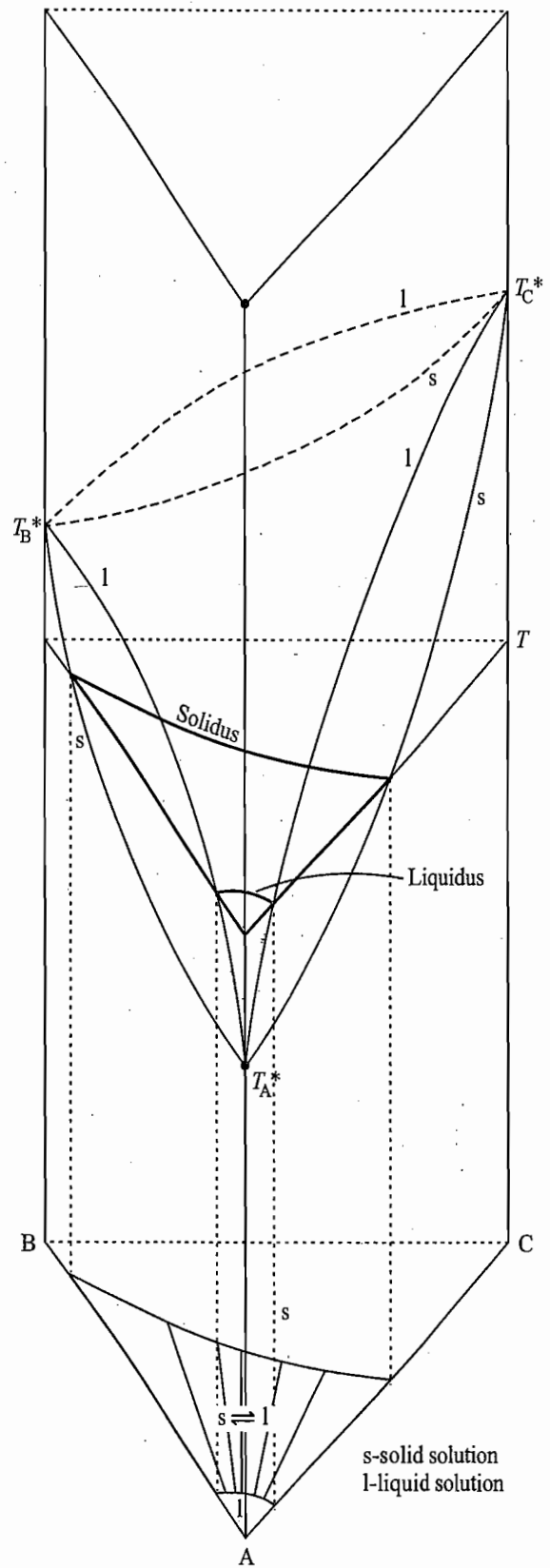


Fig. 7.10.2 Triangular plot for a system exhibiting three pairs A-B, B-C and C-A of solid solutions with $T_C^* > T_B^* > T > T_A^*$

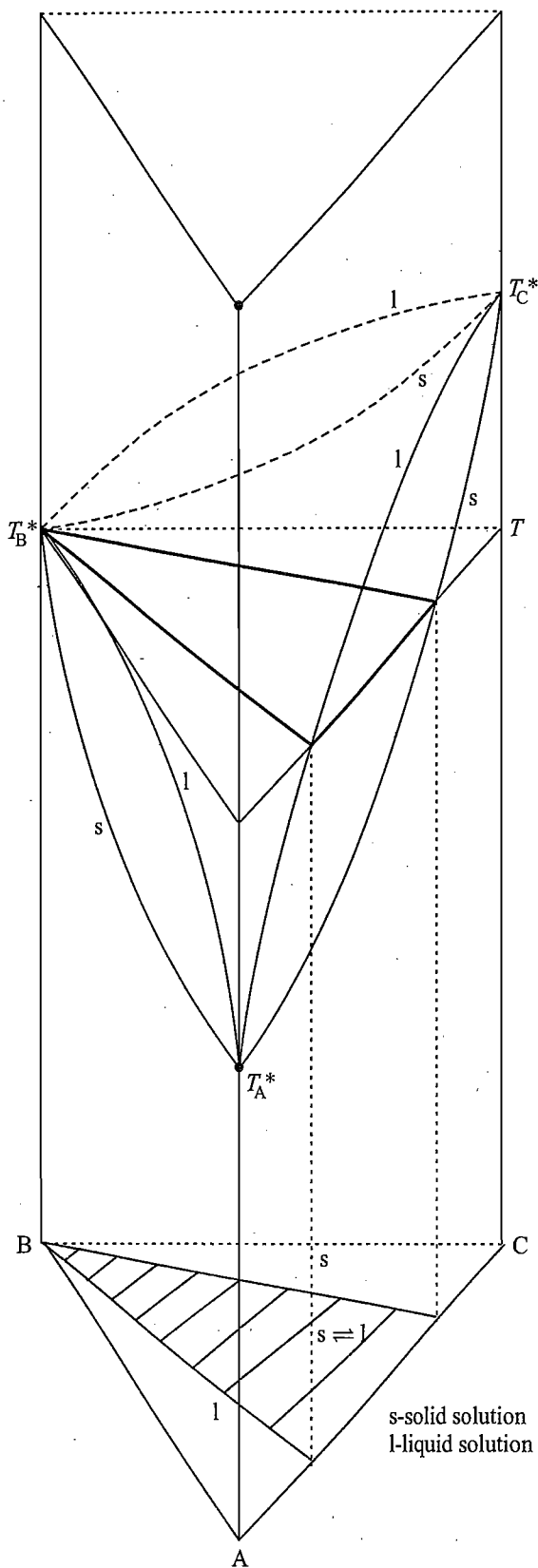


Fig. 7.10.3 Triangular plot for a system exhibiting three pairs A-B, B-C and A-C of solid solutions with $T_C^* > T_B^* = T > T_A^*$

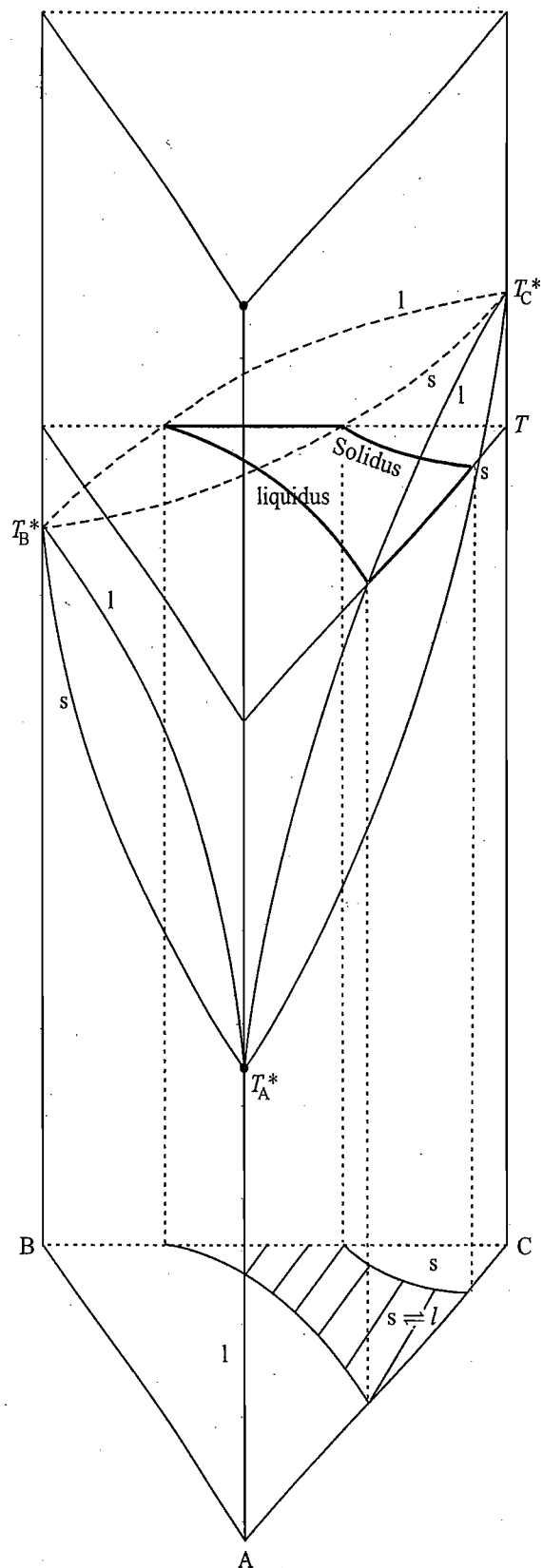


Fig. 7.10.4 Triangular plot for a system exhibiting three pairs A-B, B-C and A-C of solid solutions with $T_C^* > T > T_B^* > T_A^*$

7.11 FORMATION OF SOLID SOLUTIONS WITH PARTIAL MISCIBILITY

Expected Triangular Plot

If the two components B and C form solid solutions with partial miscibility, then within certain range of concentrations they will form two solid solutions, one of C in B and the other of B in C. Both these solutions will have definite compositions. Beyond this range, both the components will be completely miscible and will form a single solid solution. Thus along the line BC of the triangular, we will have two points corresponding to the compositions of the two solid solutions such as shown by the points D and E in Fig. 7.11.1.

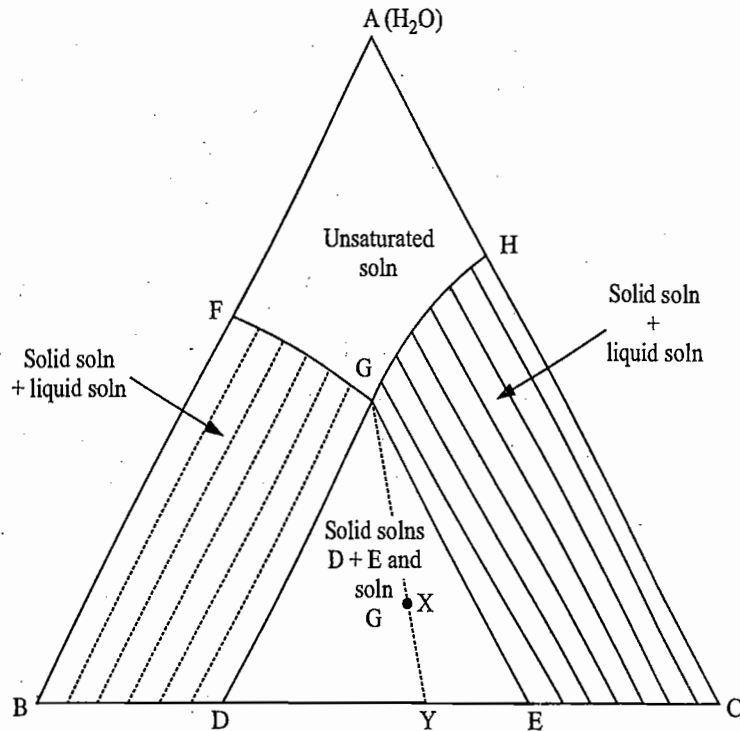


Fig. 7.11.1 Triangular plot exhibiting solid solution with partial miscibility

Description of the Diagram

From B to D and E to C, the two components are completely miscible and from D to E they are partially miscible and thus form two solid solutions D and E, respectively. The lines FG and GH are the corresponding solubility curves of the two solid solutions. With this information the labelling of various areas of Fig. 7.11.1 can be done as usual and is summarized below.

Area AFGHA: A point in this region represents a system of an unsaturated solution.

Area FGDBF: A point in this region represents a system of solid solution of C in B in equilibrium with the saturated solution. The composition of the latter lies on the line FG.

Area GHCEG: A point in this region represents a system of solid solution of B in C in equilibrium with the saturated solution. The composition of the solution lies on the line GH.

Area DEGD: A point in this region represents an invariant system of solid solutions D and E in equilibrium with the saturated solution G. The relative amounts of the two solid solutions D and E and that of total solid and the liquid solution can be calculated as follows.

Join the point G with the given point (say, X) and then extend it to the point Y where it meets the side BC. Thus, we have

$$\frac{\text{Amount of solid solution rich in C}}{\text{Amount of solid solution rich in B}} = \frac{DY}{EY}$$

$$\frac{\text{Amount of total solid}}{\text{Amount of solution G}} = \frac{GX}{YX}$$

7.12 SALTING OUT PHENOMENON

Sometimes two liquids which show complete miscibility become partially miscible in the presence of a third component. This type of behaviour is common among organic solvents where a single solution of organic liquid in water splits into two layers in the presence of sufficient quantity of a salt. One such example is the ternary system of $\text{H}_2\text{O}-\text{K}_2\text{CO}_3-\text{CH}_3\text{OH}$ where H_2O and CH_3OH are completely miscible in each other but become partially miscible in the presence of sufficient quantity of K_2CO_3 . The triangular plot of the above system is shown in Fig. 7.12.1. The points D and E represent the saturation solubility of K_2CO_3 in water and CH_3OH , respectively. Thus from D to A, we have an unsaturated solution of K_2CO_3 in water, whereas that from D to B, solid K_2CO_3 is in equilibrium with the saturated solution D. Similarly, from E to C, we have an unsaturated solution of K_2CO_3 in CH_3OH and from E to B, a saturated solution E in equilibrium with solid K_2CO_3 is formed.

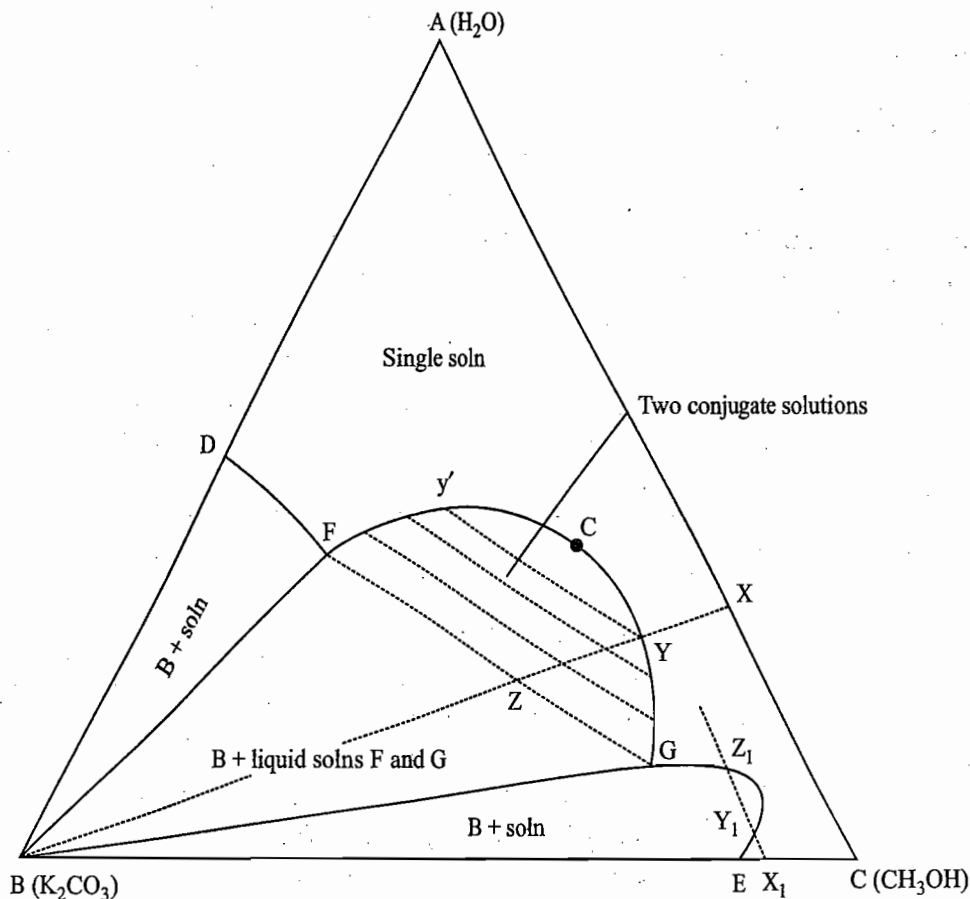


Fig. 7.12.1 Triangle plot for the system $\text{H}_2\text{O}-\text{K}_2\text{CO}_3-\text{CH}_3\text{OH}$

The line DF is the saturation solubility curve of K_2CO_3 in water in the presence of CH_3OH and the line EG is the corresponding curve of K_2CO_3 in CH_3OH in the presence of water. Between these two curves, we have the formation of two layers along the curve FCG. As usual, the compositions of the two conjugate layers are connected through various tie lines. With this information, the labelling of different areas can be done as usual and is described below.

Area above the curve DFCGE: A point in this region represents one liquid layer consisting of all the three components.

Area BDFB: A point in this region represents solid K_2CO_3 in equilibrium with a saturated solution whose composition lies on the line DF.

Area BGEB: A point in this region represents solid K_2CO_3 in equilibrium with a saturated solution whose composition lies on the line EG.

Area FCGF: A point in this area represents the two conjugate solutions.

Area BFGB: A point in this region represents an invariant system where solid K_2CO_3 is in equilibrium with the two conjugate liquid layers F and G, respectively.

Effect of Adding Salt

With the help of Fig. 7.12.1 we can describe the behaviour of the binary system consisting of H_2O and CH_3OH when solid K_2CO_3 is added to it. Let us start with a system as represented by the point X. On adding K_2CO_3 , the state of the system will move along X-B(K_2CO_3). The system remains of one liquid layer up to the point Y, where it splits into two layers Y and y' . The former is present in major amount while the latter is just formed. On moving from Y to Z, the system continues to have two layers of varying compositions—the composition of the layer rich in water will move from y' to F, whereas that rich in CH_3OH will move along YG. At the point Z, K_2CO_3 no longer dissolves and thus the system from Z to B consists of three phases—solid K_2CO_3 and two liquid layers F and G, respectively.

Effect of Adding Organic Solvent

In a similar manner, behaviour of the system when CH_3OH (or H_2O) is added to binary system of K_2CO_3 and H_2O (or K_2CO_3 and CH_3OH) can be explained from Fig. 7.12.1. The addition of organic compound to an aqueous solution of a salt is often employed for salting out the dissolved salt in the solution. The principle underlying this method can be easily explained from the triangular plot of Fig. 7.12.1. We will have to simply enter into the region of BDFB or BFGB or BGEB where solid salt is present in equilibrium with the solution of different compositions. The behaviour of the system when H_2O is added to a system represented by the point X_1 is interesting; from X_1 to Y_1 , the system continues to be a single layer, at Y_1 solid K_2CO_3 precipitates and remains in equilibrium with the solution up to the point Z_1 where it redissolves to give once again a single solution. From Z_1 onwards, the system continues to be of a single layer.

7.13 EXPERIMENTAL METHODS EMPLOYED FOR OBTAINING TRIANGULAR PLOTS

For systems of three liquids showing partial mutual solubilities To a mixture of the two partially miscible liquids, the third component is added until the system previously consisting of two layers becomes homogeneous, i.e. forms a

single layer. The amounts of three components are noted and the corresponding point in the triangle is determined. This point must lie on the binodal curve. The experiment is repeated with different proportions of the two partially miscible liquids and many more such points are determined. A smooth curve passing through these points gives the required binodal curve. To obtain the various tie lines, definite amounts of the three liquids are mixed up corresponding to any point within the binodal curve and then the amount of one of the components in either of the two solutions is determined. The point corresponding to this composition is determined on the binodal curve. The determined point is joined with the point representing the overall composition of the solution within the binodal curve. This gives one tie line. The experiment is repeated at different points and similar lines are then drawn.

For systems consisting of two salts and water To plot a triangular plot for such a system, the method of *wet residues* of F.A.H. Schreinmakers is most commonly employed. In this method, first of all a system consisting of a saturated solution in equilibrium with solid is prepared. Then the saturated solution and the wet crystals are analysed and the corresponding points on the triangle are plotted and joined together by a line. The above experiment is repeated over many other systems of different compositions and various such lines are drawn. In the method of wet residues, the wet crystals are considered as the mixture of dry solid and the corresponding saturated solution. Hence the point representing the dry solid must lie on the extension of the line joining the state point of the saturated solution with that of the wet crystals. Moreover, as several solutions may have the same solid phase, all the tie lines for such solutions must intersect at a common point, which is the composition of the solid phase. Thus all lines are extended and the intersection points are determined. These intersection points give the compositions of various solid phases.

REVISIONARY PROBLEMS

- 7.1 (a) Determine the variance of a three-component system having number of phases equal to one, two and three, respectively.
 (b) Outline the salient features of the scheme of triangular plot employed for three-component systems.
- 7.2 Draw typical phase diagrams for the following cases:
 (a) Systems exhibiting formation of one pair of partially miscible liquids,
 (b) systems exhibiting formation of two pairs of partially miscible liquids, and
 (c) systems exhibiting formation of three pairs of partially miscible liquids.
- 7.3 (a) What do you understand by the terms binodal curve and plait point?
 (b) Explain why, in general, the various tie lines within the binodal curve are parallel neither to the sides of the triangle nor to each other? Under what conditions will the various tie lines be parallel to each other?
 (c) Explain why, in general, the plait point lies either to the left or to the right of the maximum point in the binodal curve. Under what condition will the plait point coincide with the maximum point?
 (d) What are the variances of the system within and outside the binodal curve?

- 7.4 (a) Describe the sequence of events that takes place when the component A (assumed to be in liquid form) is added to a binary system of two partially immiscible liquids B and C.
 (b) What is the retrograde solubility?
- 7.5 (a) Describe the changes observed in the binodal curves when temperature of the system exhibiting one pair of partially miscible liquids is changed? Under what conditions will the above system exhibit true critical solution temperature?
 (b) Justify the statement that it is not possible to predict the behaviour of a system exhibiting binodal band when its temperature is raised, that is, whether it will form a system containing only one pair or two pairs of partially miscible liquids.
- 7.6 Draw phase diagrams of a three-component system involving water and two solid salts with an ion in common for the following typical cases:
 (a) Crystallization of pure components.
 (b) Formation of binary compounds such as hydrates.
 (c) Formation of a double salt.
 (d) Formation of a ternary compound.
 (e) Formation of complete series of solid solutions.
 (f) Formation of solid solutions with partial miscibility.
- 7.7 Taking a few typical cases, discuss the sequence of events that takes place in the following cases when the system is subjected to isothermal evaporation and/or isothermal addition of water:
 (a) Crystallization of pure components.
 (b) Formation of a double salt with special emphasis on the stability of the double salt.
- 7.8 What do you understand by the congruently saturating double salt and incongruently saturating double salt? Support your answer by drawing typical phase diagrams.
- 7.9 What do you understand by the phenomenon of salting out? Describe this by drawing the triangular plot of K_2CO_3 - CH_3OH - H_2O system.
- 7.10 Describe the method of *wet residues* of the F.A.H. Schreinmakers employed in constructing the phase diagram of three-component systems involving two salts and water.

TRY YOURSELF PROBLEMS

- 7.1 For the phase diagram given in Fig. 7.6.1 which of the following temperature conditions are true?
 (i) $T >$ or $<$ or $= 0$ °C
 (ii) $T >$ or $<$ or $=$ eutectic temperature of A-B system.
 (iii) $T >$ or $<$ or $=$ eutectic temperature of B-C system.
 (iv) $T >$ or $<$ or $=$ eutectic temperature of A-C system.
 (v) $T >$ or $<$ or $=$ ternary eutectic temperature of A-B-C system.
- 7.2 A ternary system consists of a solid and two partially miscible liquids. The solid is soluble in both the liquids. Construct the probable triangular plot when the solubility curves (i) overlap (ii) do not overlap the region of partial miscibility.
- 7.3 If a binary system A-B forms a congruently melting compound A_xB_y , and the systems A-C and B-C exhibit simple eutectic behaviour, the phase diagram of the ternary system A-B-C takes the form as shown in Fig. 1. Label the diagram with adequate explanation. (Hint: Label, as usual, the two triangles ACD and BCD separately.)
- 7.4 If in a ternary system A-B-C, a ternary congruently melting compound is formed, the phase diagram of the system takes the form as shown in Fig. 2. Label the diagram with adequate explanation. (Hint: Label, as usual, the three triangles ABD, ACD and BCD separately.)

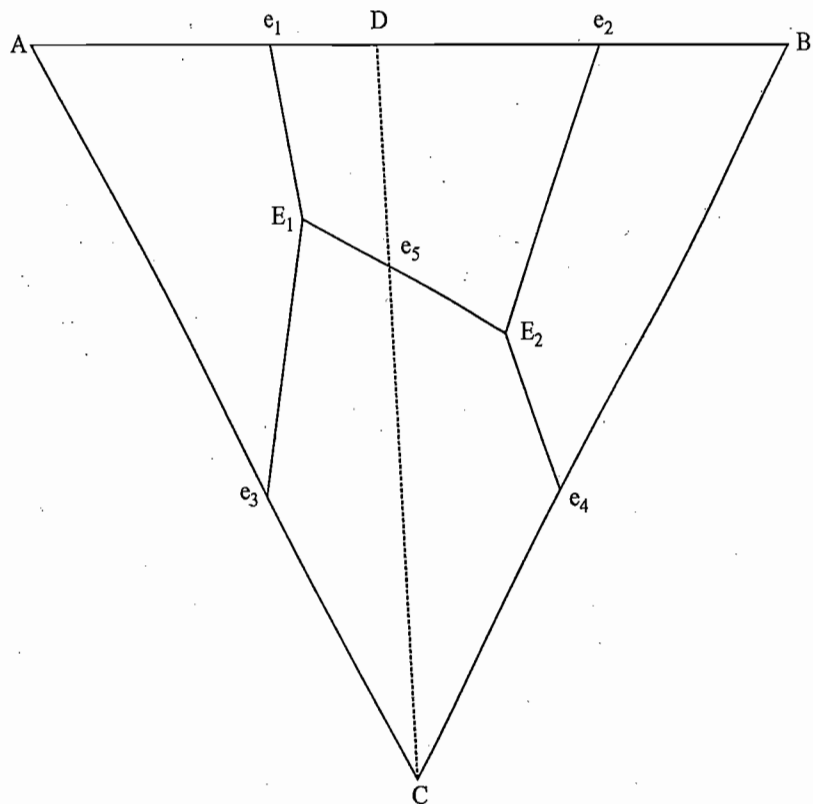


Fig. 1

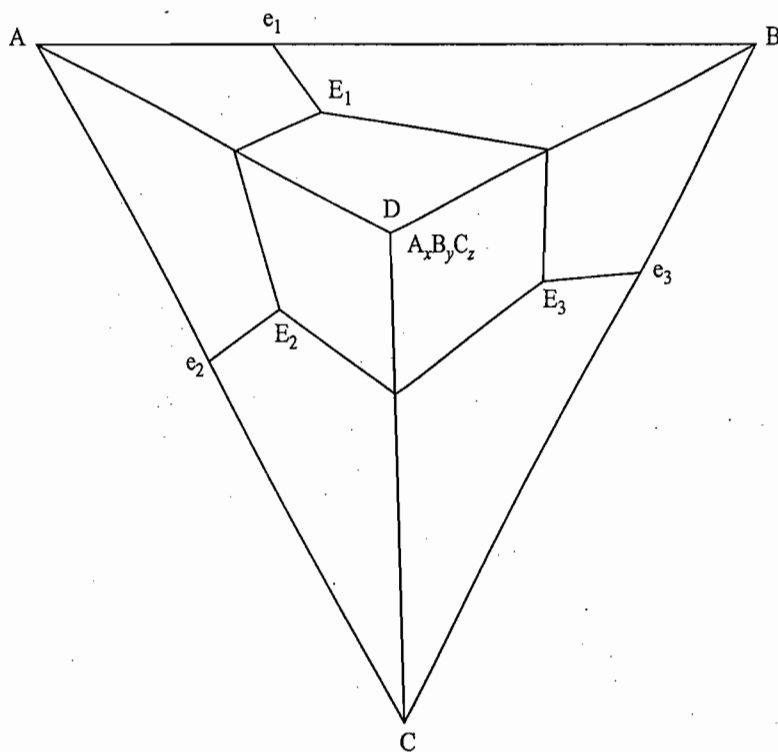


Fig. 2

- 7.5 If the temperature of the system exhibiting the phase diagram of Fig. 1 is greater than both the ternary eutectic temperatures, the phase diagram has an appearance of Fig. 3. Label the diagram with adequate explanation.
- 7.6 Construct a ternary plot of a three-component system exhibiting the crystallization of $A \cdot H_2O$, A, B and $A \cdot B$ substances.
- 7.7 Construct a ternary plot of a three-component system exhibiting the crystallization of $A \cdot H_2O$, $B \cdot 2H_2O$, A, B, $A \cdot 2B$ and $A \cdot B \cdot H_2O$ substances.

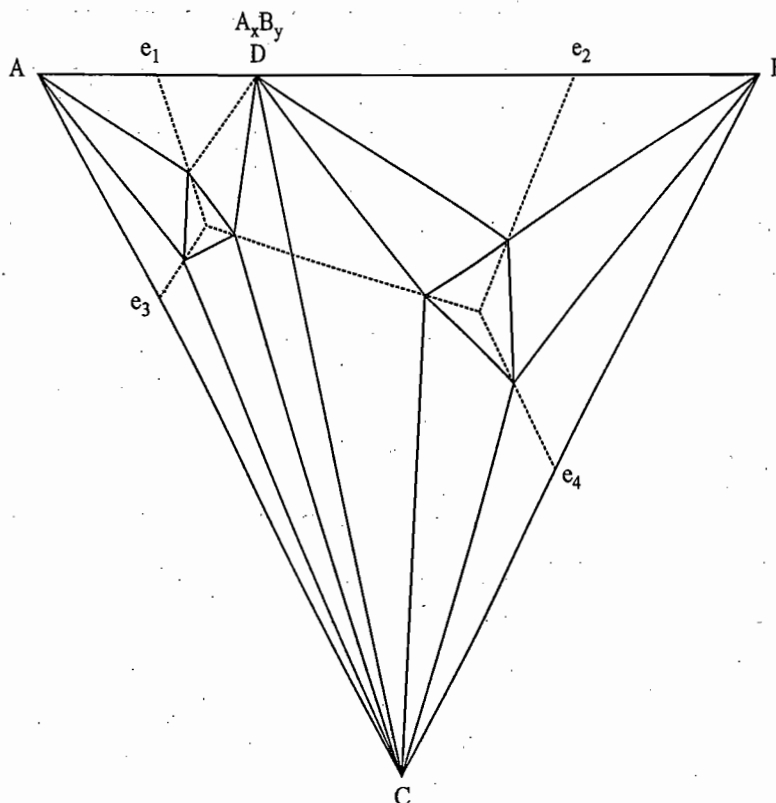


Fig. 3

- 7.8 Given a point within the triangle DEF of Fig. 7.3.9. How many phases are present at this point? What are their compositions? How will you determine the relative amounts of the different phases at this point?

NUMERICAL PROBLEMS

- 7.1 The following data, in amount per cent, were obtained for the ternary system; aniline, toluene, *n*-heptane at 25 °C.

<i>Aniline-rich phase</i>		<i>Heptane-rich phase</i>	
<i>aniline</i>	<i>n-heptane</i>	<i>aniline</i>	<i>n-heptane</i>
95.6	4.4	8.4	91.6
89.1	7.2	12.2	81.3
74.0	13.2	21.0	60.7
62.6	19.3	32.5	45.4

- (a) Plot these data in a triangular graph and indicate 1- and 2-phase regions.
 (b) Using this graph, indicate the changes that occur when successive increments of toluene are added to a system containing equal amounts of aniline and *n*-heptane.
- 7.2 The following hydrates may under proper conditions be crystallized from the system $\text{Ba}(\text{OH})_2\text{-NaOH-H}_2\text{O}$ at 30 °C.
 $\text{Ba}(\text{OH})_2 \cdot 8\text{H}_2\text{O}$, $\text{Ba}(\text{OH})_2 \cdot 3\text{H}_2\text{O}$, $\text{Ba}(\text{OH})_2 \cdot \text{H}_2\text{O}$, $\text{NaOH} \cdot \text{H}_2\text{O}$
 Sketch and interpret the phase diagram for this system.
- 7.3 The following data are available for the system $\text{Na}_2\text{SO}_4\text{-Al}_2(\text{SO}_4)_3\text{-H}_2\text{O}$ at 42 °C.
 Draw the phase diagram on triangular coordinate paper, and draw appropriate tie lines.

Liquid phase		Solid phase
mass % of Na ₂ SO ₄	mass % of Al ₂ (SO ₄) ₃	
33.20	0	Na ₂ SO ₄ $\frac{1}{6}$
32.00	1.52	Na ₂ SO ₄
31.79	1.87	Na ₂ SO ₄
28.75	1.71	Na ₂ SO ₄ · Al ₂ (SO ₄) ₃ · 14H ₂ O
24.47	2.84	Na ₂ SO ₄ · Al ₂ (SO ₄) ₃ · 14H ₂ O
16.81	5.63	Na ₂ SO ₄ · Al ₂ (SO ₄) ₃ · 14H ₂ O
10.93	10.49	Na ₂ SO ₄ · Al ₂ (SO ₄) ₃ · 14H ₂ O
4.72	17.11	Na ₂ SO ₄ · Al ₂ (SO ₄) ₃ · 14H ₂ O
1.75	18.59	Al ₂ (SO ₄) ₃
0	16.45	Al ₂ (SO ₄) ₃

7.4 Draw the triangular plot for the system NH₄Cl–NH₄NO₃–H₂O at 25 °C from the following data.

Saturated solution		Wet residue	
mass % of NH ₄ NO ₃	mass % of NH ₄ Cl	mass % of NH ₄ NO ₃	mass % of NH ₄ Cl
67.73	0	—	—
66.27	2.0	88.20	0.79
64.73	3.82	88.00	1.34
62.24	5.58	90.25	1.65
61.68	6.97	87.65	2.28
53.49	11.08	23.31	62.22
36.99	15.80	13.63	66.29
19.05	21.81	7.09	72.75
0	28.33	—	—

Answer the following with the help of the plot obtained.

- What is the ternary composition?
 - Is there evidence of hydrate or double salt formation?
 - Determine the maximum theoretical recovery of NH₄Cl from a dry salt mixture of NH₄Cl–NH₄NO₃ containing 80% by mass of NH₄Cl.
- 7.5 The following data are given for the system Na₂SO₄–MgSO₄–H₂O at 40 °C and 1 atm.

Composition of saturated solution	Nature of solid phase in equilibrium
(1) 35 mass % Na ₂ SO ₄ 0 mass % MgSO ₄	Na ₂ SO ₄
(2) 0 mass % Na ₂ SO ₄ 30 mass % MgSO ₄	MgSO ₄
(3) 25 mass % Na ₂ SO ₄ 15 mass % MgSO ₄	Na ₂ SO ₄ + Na ₂ SO ₄ · MgSO ₄ · 4H ₂ O
(4) 5 mass % Na ₂ SO ₄ 28 mass % MgSO ₄	MgSO ₄ + Na ₂ SO ₄ · MgSO ₄ · 4H ₂ O

Composition of $\text{Na}_2\text{SO}_4 \cdot \text{MgSO}_4 \cdot 4\text{H}_2\text{O}$ is 42.4 mass % Na_2SO_4 and 36 mass % MgSO_4 .

(a) Sketch the phase diagram.

(b) If a solution containing 10 mass % Na_2SO_4 and 10 mass % MgSO_4 is evaporated, what solid will appear first, and what is the composition of the last solution to exist before the system becomes entirely solid?

(c) If equal masses of Na_2SO_4 and of solution (b) above are mixed, how many phases will be present at equilibrium and what will be their compositions?

7.6 (a) The following data were obtained for the ternary system sodium nitrate-potassium nitrate-water at 50 °C.

Composition of saturated solution			Solid phase
NaNO_3	KNO_3	Water	
mass %	mass %	mass %	
53.2	0	46.8	NaNO_3
47.6	12.3	40.1	NaNO_3
43.3	21.6	35.1	NaNO_3
39.8	28.9	31.3	$\text{NaNO}_3 + \text{KNO}_3$
31.7	31.3	37.0	KNO_3
19.1	35.9	45.0	KNO_3
0	46.2	53.8	

Construct the ternary phase diagram on an equilateral triangle. What is the nature of the system at each of the following compositions?

Constituents	Percentage compositions by mass					
	(1)	(2)	(3)	(4)	(5)	(6)
Sodium nitrate	20	43.7	15	70	16.0	47.0
Potassium nitrate	25	20.0	28	6	60.0	41.0
Water	55	36.3	57	24	24.0	12.0

If the system consists of more than one phase, determine also their compositions and relative amounts.

(b) Given is the system containing 10 mass % NaNO_3 and 30 mass % KNO_3 . What will be the nature of first crystal obtained during the isothermal evaporation of the above system? Up to what limit the above evaporation should be carried out so that the yield of separated crystals is maximum?

(c) Given is the system containing 30 mass % NaNO_3 and 60 mass % KNO_3 . Describe if it is possible to get the pure crystals of KNO_3 by adding more of water. If so, indicate up to what limit the dilution should be carried out to get the maximum amount of KNO_3 crystals.

(d) Describe the sequence of effects that are produced during the isothermal evaporation of the system 1 (i.e. 20 mass % NaNO_3 , 25 mass % KNO_3).

(e) Given the system containing 30 mass % NaNO_3 and 60 mass % KNO_3 . To this system a solution of 20 mass % KNO_3 is added. Indicate on which line composition of the resultant solution would move.

(Ans. (a)(1) unsaturated solution of KNO_3 and NaNO_3 , (2) saturated solution of NaNO_3 in the presence of KNO_3 , (3) saturated solution of KNO_3 in the presence of NaNO_3 , (4) solid NaNO_3 in equilibrium with a solution of composition 48.5 mass % NaNO_3 , 10.0 mass % KNO_3 and 41.5 mass % water; relative amounts are 41.7 parts by mass of solid NaNO_3 and 58.3 parts by mass of liquid, (5) solid KNO_3 in equilibrium with a solution of composition 27 mass % NaNO_3 , 33 mass % KNO_3 and 40.0 mass % water; relative amounts are 40.3 parts by mass of solid KNO_3 and 59.7 parts by mass of water, and (6) solid mixture of 51.5 mass % NaNO_3 and 48.5 mass % KNO_3 in equilibrium with a solution of composition 39.8 mass % NaNO_3 , 28.9 mass % KNO_3 and 31.3 mass % water; relative amounts are 38% by mass of liquid and 62% by mass of solid;

(b) KNO_3 , 21 mass % NaNO_3 , 63 mass % KNO_3 and 16 mass % water, and

(c) 25 mass % NaNO_3 , 53 mass % KNO_3 and 22 mass % water.)

- 7.7 (a) In the ternary system potassium sulphate-sodium sulphate-water, a double salt of composition $3\text{K}_2\text{SO}_4 \cdot \text{Na}_2\text{SO}_4$ (known as Glaserite, 78.6 mass % K_2SO_4 and 21.4 mass % Na_2SO_4) is formed. The following compositions of the saturated solutions were obtained.

Composition of saturated solution			Solid phase
K_2SO_4	Na_2SO_4	Water	
mass %	mass %	mass %	
14.19	0	85.81	K_2SO_4
13.8	5.68	80.52	K_2SO_4 -Glaserite
5.85	29.4	64.75	Na_2SO_4 -Glaserite
0	31.6	68.4	Na_2SO_4

Construct the phase diagram and determine the nature of system at the following compositions.

Constituent	Percentage compositions by mass			
	(1)	(2)	(3)	(4)
Potassium sulphate	8	38	75	30
Sodium sulphate	17	22	10	45
Water	75	40	15	25

If the system consists of more than one phase, determine also their compositions and relative amounts.

(b) Is the double salt stable in the presence of water?

(c) Show that the solution at which Na_2SO_4 and glaserite are in equilibrium is a congruently saturated whereas the solution at which K_2SO_4 and glaserite are in equilibrium is an incongruently saturated.

(d) Suppose the apex representing water is joined with the point representing the composition of the double salt. Take a point on the line in the unsaturated solution region and describe the sequence of effects that is produced if the above system is subjected to the isothermal evaporation.

(e) Take a point corresponding to the binary system containing solid Na_2SO_4 and the saturated solution of Na_2SO_4 . Describe the sequence of effects that is produced if K_2SO_4 is added to this binary system.

- 7.8 In the ternary system $\text{NaCl}-\text{Na}_2\text{SO}_4-\text{H}_2\text{O}$, a stable hydrate $\text{Na}_2\text{SO}_4 \cdot 10\text{H}_2\text{O}$ (44.1 mass % Na_2SO_4 and 55.9 mass % H_2O) is formed. The following compositions of saturated solutions were obtained at 25 °C.

Composition of saturated solution			Solid phase
NaCl	Na_2SO_4	Water	
mass %	mass %	mass %	
0	21.6	78.4	$\text{Na}_2\text{SO}_4 \cdot 10\text{H}_2\text{O}$
7.6	16.0	76.4	$\text{Na}_2\text{SO}_4 \cdot 10\text{H}_2\text{O}$
14.5	14.5	71.0	$\text{Na}_2\text{SO}_4 + \text{Na}_2\text{SO}_4 \cdot 10\text{H}_2\text{O}$
18.4	10.4	71.2	Na_2SO_4
22.7	7.1	70.2	$\text{Na}_2\text{SO}_4 + \text{NaCl}$
24.65	3.35	72.0	NaCl
26.6	0	73.4	NaCl

Construct the phase diagram and determine the nature of system at the following compositions.

Constituent	Percentage composition by mass					
	(1)	(2)	(3)	(4)	(5)	(6)
NaCl	8	5	5	24.5	40	24
Na_2SO_4	8	30	55	30.5	40	6
Water	84	65	40	45	20	70

If the system consists of more than one phase, determine also their compositions and relative amounts.

- 7.9 In the ternary system $\text{NaCl}-\text{Na}_2\text{SO}_4-\text{H}_2\text{O}$ at 17.5 °C, it is found that solid Na_2SO_4 is never in equilibrium with the solution. The following compositions of saturated solutions were obtained:

Composition of saturated solution			Solid phase
Na_2SO_4	NaCl	Water	
mass %	mass %	mass %	
13.8	0	86.2	$\text{Na}_2\text{SO}_4 \cdot 10\text{H}_2\text{O}$
8.5	8.1	83.4	$\text{Na}_2\text{SO}_4 \cdot 10\text{H}_2\text{O}$
6.8	16.9	76.3	$\text{Na}_2\text{SO}_4 \cdot 10\text{H}_2\text{O}$
7.4	22.3	70.3	$\text{Na}_2\text{SO}_4 \cdot 10\text{H}_2\text{O} + \text{NaCl}$
0	26.5	73.5	NaCl

Construct the phase diagram and determine the nature of system at the following compositions.

Constituent	Percentage composition by mass				
	(1)	(2)	(3)	(4)	(5)
NaCl	10	5	50	24	45
Na ₂ SO ₄	10	35	10	6	45
Water	80	60	40	70	10

If the system consists of more than one phase, determine also their compositions and relative amounts.

- 7.10 (a) In the ternary system NaNO₃-Na₂SO₄-H₂O, a simple hydrate Na₂SO₄ · 10H₂O and the hydrated double salt (ternary compound) NaNO₃ · Na₂SO₄ · H₂O (darapskite 34.6 mass % NaNO₃, 58.0 mass % Na₂SO₄ and 7.4 mass % H₂O) are formed. The following compositions of saturated solutions were obtained:

Composition of saturated solution		Solid phase
NaNO ₃ mass %	Na ₂ SO ₄ mass %	
47.9	0	NaNO ₃
46.5	1.57	NaNO ₃
45.2	3.05	NaNO ₃ + Darapskite
44.6	3.40	Darapskite
43.1	3.74	Darapskite
37.7	6.17	Darapskite
31.1	10.2	Darapskite
29.5	11.3	Darapskite
27.7	12.7	Darapskite
26.8	13.4	Darapskite + Na ₂ SO ₄
25.0	14.6	Na ₂ SO ₄ + Na ₂ SO ₄ · 10H ₂ O
21.2	14.8	Na ₂ SO ₄ · 10H ₂ O
12.6	16.5	Na ₂ SO ₄ · 10H ₂ O
0	21.6	Na ₂ SO ₄ · 10H ₂ O

Construct the phase diagram and label it.

- (b) Show that the ternary salt is unstable in the presence of water.
(c) Show that the solution at which NaNO₃ and the ternary compound are in equilibrium is a congruently saturated whereas the solution at which Na₂SO₄ and the ternary compound are in equilibrium is an incongruently saturated.
- 7.11 (a) Figure 4 shows the solubility curves of A · H₂O, A, A · B and B. Complete the phase diagram and label it.
(b) Given a point X in Fig. 4. What does it represent? Describe the sequence of events that is produced when the system X is subjected to the isothermal dehydration.
(c) Is it possible to obtain the crystals of pure A on evaporating the system X? If yes, at what point will the yield of crystal A be maximum?
(d) Is the double salt A · B congruently saturating?
(e) How does Fig. 4 help in obtaining the crystals of A · H₂O from a solution containing both A and B?
(f) Is the temperature of the phase diagram of Fig. 4 greater than, equal to or less than 0 °C?

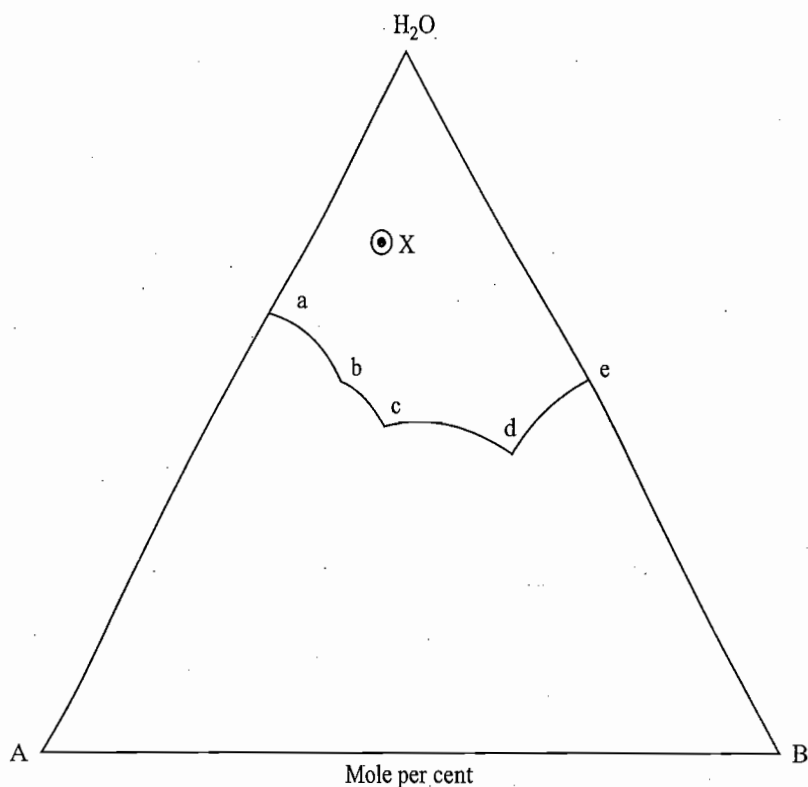


Fig. 4

7.12 The following data were obtained on the system $\text{CaCl}_2\text{-KCl-H}_2\text{O}$ at 75°C .

<i>Composition of saturated solution</i>		<i>Solid phase</i>
CaCl_2	KCl	
<i>mass %</i>	<i>mass %</i>	
0	33.16	KCl
11.73	21.68	KCl
18.27	16.10	KCl
28.47	9.62	KCl
37.65	6.77	KCl
47.65	8.43	KCl
50.19	11.32	KCl and $2\text{KCl} \cdot \text{CaCl}_2 \cdot 2\text{H}_2\text{O}$
50.92	9.36	$2\text{KCl} \cdot \text{CaCl}_2 \cdot 2\text{H}_2\text{O}$
53.85	6.21	$2\text{KCl} \cdot \text{CaCl}_2 \cdot 2\text{H}_2\text{O}$
56.33	4.51	$2\text{KCl} \cdot \text{CaCl}_2 \cdot 2\text{H}_2\text{O}$
57.62	3.60	$2\text{KCl} \cdot \text{CaCl}_2 \cdot 2\text{H}_2\text{O}$ and $\text{CaCl}_2 \cdot 2\text{H}_2\text{O}$
57.77	2.56	$\text{CaCl}_2 \cdot 2\text{H}_2\text{O}$
58.58	0	$\text{CaCl}_2 \cdot 2\text{H}_2\text{O}$

Construct the triangular plot and label each area. Describe what would happen on isothermal evaporation at 75°C of a solution initially containing 85 mass % water, 10 mass % CaCl_2 and 5 mass % KCl. Assume 100 g of solution. What mass of H_2O have been evaporated when half the mass of the system is in solids?

7.13 The following data refer to the system K_2SO_4 - $(\text{NH}_4)_2\text{SO}_4$ - H_2O at 30°C .

<i>Composition of saturated solution</i>		<i>Composition of moist solid solution</i>	
K_2SO_4	$(\text{NH}_4)_2\text{SO}_4$	K_2SO_4	$(\text{NH}_4)_2\text{SO}_4$
<i>mass %</i>	<i>mass %</i>	<i>mass %</i>	<i>mass %</i>
0	44.2	only $(\text{NH}_4)_2\text{SO}_4$	
1.2	42.7	1.6	90.3
2.4	40.9	22.1	69.3
4.1	37.8	33.9	57.8
4.9	33.5	50.8	42.3
6.4	31.0	62.2	30.0
9.1	18.5	84.0	12.7
10.7	8.4	93.2	3.1
11.2	0	only K_2SO_4	

Draw the phase diagram and label each area. A system containing 90 g of water and 10 g each of K_2SO_4 and $(\text{NH}_4)_2\text{SO}_4$ is evaporated isothermally at 30°C . (i) What is the composition of the solution when a precipitate first appears and what is the composition of the precipitate? (ii) What is the composition of the last solution to exist before the system solidifies? Give the compositions and amounts of the solid (s) present. (iii) When the system reaches the point containing 40% by mass of water what phases are present and in what amounts?

8

Electrochemical Cells

8.1 INTRODUCTION

Electrochemical cells can be broadly classified into two categories, viz., electrolytic cells and galvanic (or voltaic) cells. In the former, a chemical reaction (more precisely electrolysis) is carried out with the help of an electrical current, whereas in the latter an electrical current is produced as a result of some spontaneous chemical reaction. Thus, an electrolytic cell is a device to convert electrical energy into chemical energy whereas in the galvanic cell, the reverse of this process takes place. In this section, we will outline the working of these two types of cells along with their sign conventions.

Electrolytic Cell

Consider an electrolytic cell involving the electrolysis of molten sodium chloride using platinum electrodes as shown in Fig. 8.1.1.

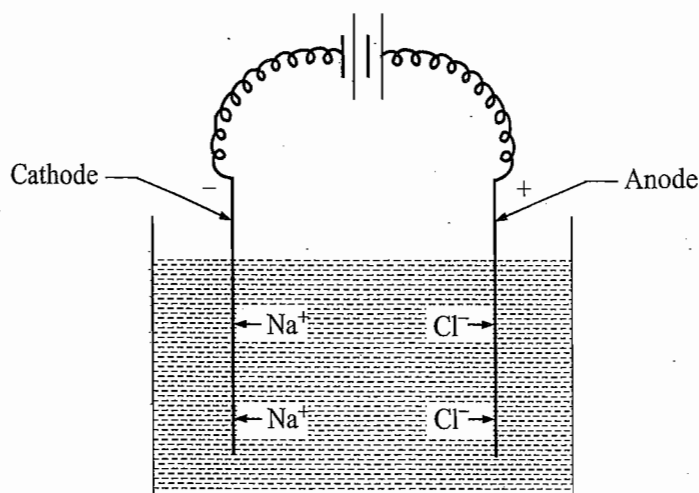
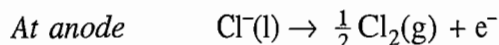
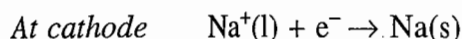


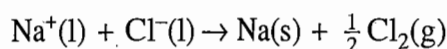
Fig. 8.1.1 Electrolysis of molten sodium chloride

The left-side electrode is connected to the negative terminal of an external battery which supplies electrons to this electrode. It is because of this, the left-side electrode becomes negatively charged. Electrons are being sucked but of the right-side electrode by the positive terminal of the battery and thus this electrode acquires a positive charge. Within the solution, electricity is carried out by the movements of ions. The positive ions (i.e. cations) are attracted towards the negative electrode and the negative ions (i.e. anions) towards the positive electrode. Since cations are attracted towards the negative electrode, the latter is known as the *cathode*. Similarly the positive electrode is known as the

anode. Electrode reactions involve reduction at the cathode and oxidation at the anode. Thus in the present case, we have



The overall transformation is

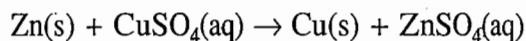


Galvanic Cell

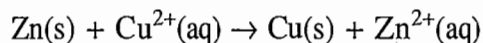
As stated above, in the galvanic cell, electric current is generated as a result of some spontaneous chemical reaction that takes place in the cell.

Working of Daniell Cell

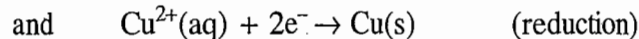
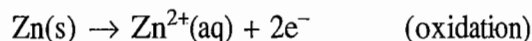
To understand how electric current is generated, let us consider an example of Daniell cell where the following reaction is produced:



or, in ionic form



This reaction occurs at a very fast speed, i.e. the moment zinc is added in copper sulphate solution, copper is immediately formed. In this reaction, we have basically the following two partial reactions:



If the two partial reactions are carried out in two physically separate places, the electrons will have to flow from a place where oxidation occurs to a place where reduction occurs through an external wire. This flow of electrons constitutes a current, which can be used to drive a motor, lift a mass, or do any other work.

Formulation of Daniell Cell

The most obvious way to separate the partial reactions occurring in Daniell cell is to insert the Zn electrode into a solution containing Zn^{2+} ions (but not Cu^{2+} ions) and the Cu electrode (or some unreactive metal) into a solution containing Cu^{2+} ions as shown in Fig. 8.1.2. From Zn electrode, a minute amount of Zn can go into the solution as Zn^{2+} ions leaving a negative charge on the electrode (because of electrons left behind) and a positive charge in the solution. These charges stop the ionization process of zinc almost immediately; for every Zn^{2+} ion entering the solution, it or another ion will be driven back to the Zn electrode by the attraction of the negative electrode and the repulsion of the positive solution. Similarly, on the Cu electrode a few Cu^{2+} ions from the solution may be deposited as Cu atoms. This process will make the electrode positive and the solution negative and thus the deposition process is stopped.[†] However, these

[†]It may be that both Cu and Zn electrodes give up positive ions to solution and become negatively charged or they may both become positively charged by neutralization of positive ions from the solution. But from the knowledge that Zn is more electropositive than Cu, we can say that Zn has a greater tendency to dissolve as Zn^{2+} than Cu has to dissolve as Cu^{2+} .

processes at the two electrodes, namely, oxidation at Zn electrode and reduction at Cu electrode, can be resumed provided we connect the two electrodes by a wire to allow the electrons to flow from Zn electrode to the electron-deficient Cu electrode and bring the two solutions into contact through a porous plug or a salt bridge[†] so as to neutralize the charges of the two solutions and prevent a direct flow of Cu^{2+} ions towards Zn electrode.

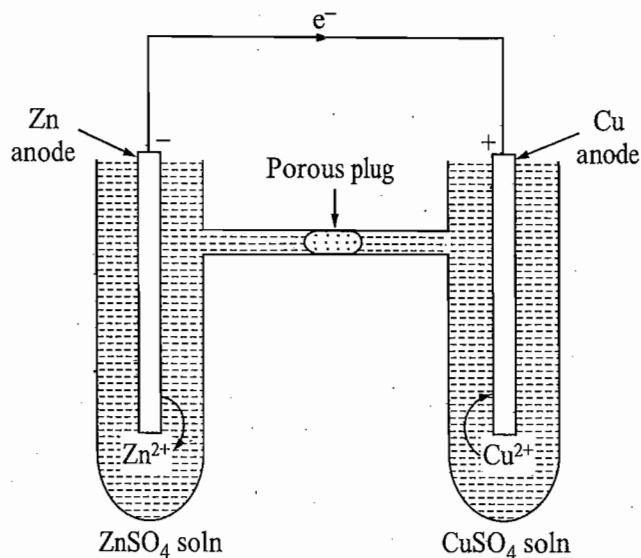


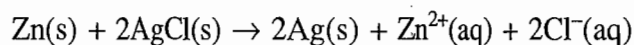
Fig. 8.1.2 Daniell cell

Sign and Nomenclature of Electrodes

In the cell shown in Fig. 8.1.2, the Zn electrode becomes negatively charged as the electrons released in the oxidation reaction ($\text{Zn} \rightarrow \text{Zn}^{2+} + 2\text{e}^-$) reside at this electrode. Similarly, the Cu electrode becomes positively charged as the electrons are taken out of this electrode for the reduction reaction ($\text{Cu}^{2+} + 2\text{e}^- \rightarrow \text{Cu}$) which takes place at this electrode. As in the electrolytic cell, the electrode at which oxidation reaction takes place is known as the anode and that where reduction reaction occurs is known as the cathode. Thus, the negative electrode of the galvanic cell is known as anode and the positive one as the cathode.

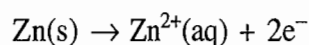
Galvanic Cell Without a Salt Bridge

In the above example of Daniell cell, we have two solutions which have to be connected so that no intermixing takes place. An example in which this difficulty does not arise is due to the following spontaneous reaction:



If the two solids Zn and AgCl are brought into contact, the reaction will take place very slowly owing to the difficulty of establishing sufficient intimate contact between them. But the reaction has a strong tendency to take place and can be carried out by using the cell shown in Fig. 8.1.3.

The reaction at the Zn electrode is



[†]The salt bridge is an agar jelly saturated with either KCl or NH_4NO_3 and is used to connect the two electrode compartments. See also Section 8.21.

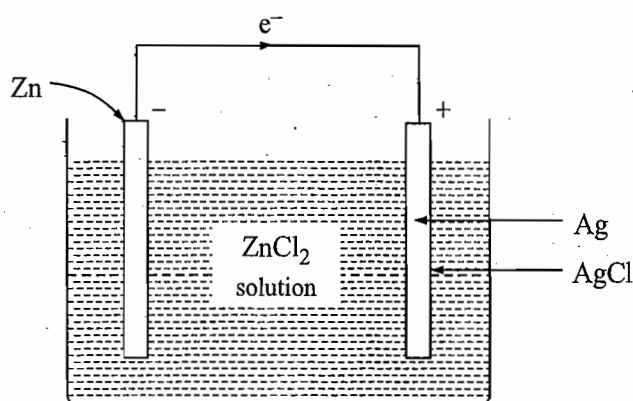
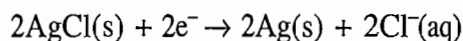
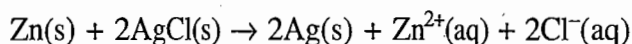


Fig. 8.1.3 Another example of a galvanic cell

The two electrons left behind on the Zn can travel through the external wire to the silver-silver chloride electrode where the following reaction occurs.



Thus, the overall process is given by the reaction:



Resume of Sign Conventions

In a galvanic cell, electrons are fed into the anode by the oxidation reaction that takes place at the electrode. The anode pushes these electrons into the external circuit and is, therefore, regarded as the negative electrode—the source of negative charge. The cathode is an electron sink and is, therefore, called the positive electrode.

In an electrolytic cell, the cathode is still the electron sink, but, this time, we are forcibly feeding electrons into the cathode by connecting it to the negative terminal of a generator or a galvanic cell. It is because of this that the cathode of an electrolytic cell is a negative electrode. Since electrons are being sucked out of the anode by the positive terminal of the external battery, the anode is considered a positive electrode.

Oxidation takes place at anode and reduction at cathode in a cell of either type. The only difference is about the sign of the electrodes. Table 8.1.1 gives the sign convention and electrode reactions in both cells.

Table 8.1.1 Sign Convention and Electrode Reactions in a Cell

Cell	Anode		Cathode	
	Sign	Type of reaction	Sign	Type of reaction
Galvanic	Negative	Oxidation	Positive	Reduction
Electrolytic	Positive	Oxidation	Negative	Reduction

Diagrammatic Distinction between Galvanic and Electrolytic Cells

Figure 8.1.4 illustrates the distinction between the sign conventions of the two types of cells.

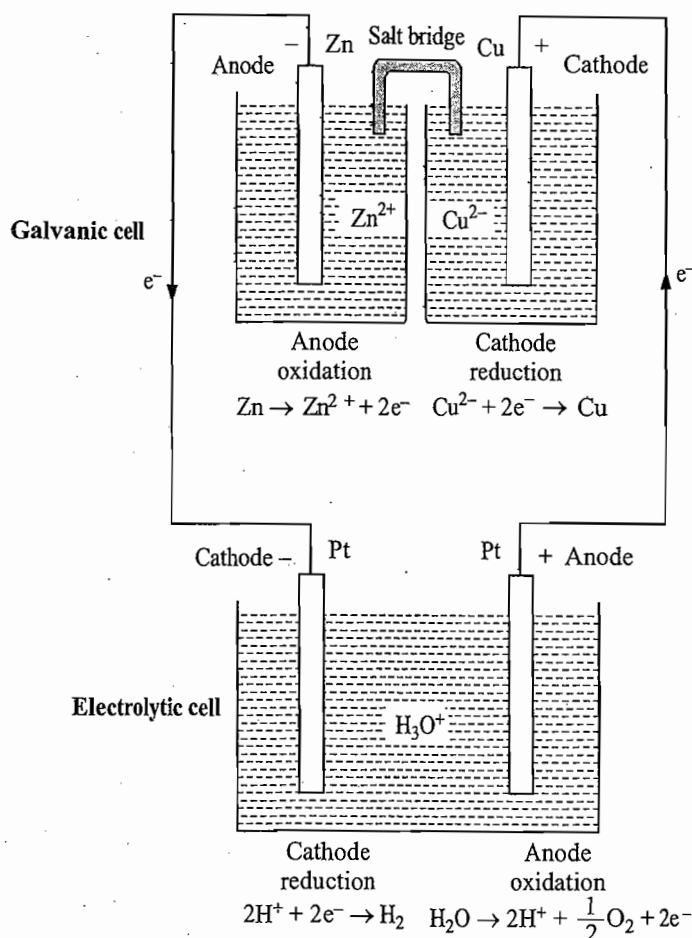


Fig. 8.1.4 Sign conventions in the galvanic and the electrolytic cells

8.2 REVERSIBLE AND IRREVERSIBLE CELLS

The use of thermodynamic principles when applied to a system is subject to one important restriction, namely, that the system must be reversible in the thermodynamic sense. This requires that:

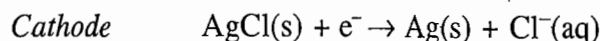
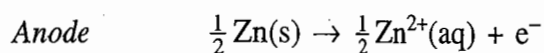
- (1) the driving and opposing forces be infinitesimally different from each other, and
- (2) it should be possible to reverse any change taking place by applying a force infinitesimally greater than the acting one.

A cell satisfying the above two requirements constitutes a reversible cell. The potential difference of the cell can be substituted into the relevant thermodynamic relations and hence the values of thermodynamic properties such as free energy change, entropy change and enthalpy change of the cell reaction can be determined. When the above conditions are not satisfied, the cell is said to be irreversible, and thermodynamic relations do not apply.

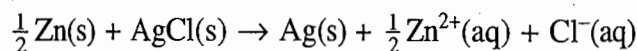
The difference between reversible and irreversible cells may be illustrated with the following two examples.

An Example of Reversible Cell

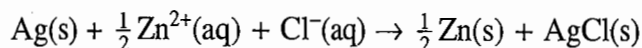
Consider a cell composed of Zn and Ag-AgCl electrodes dipping into an aqueous solution of zinc chloride. As seen earlier, the following reactions take place on connecting the electrodes externally



with the net reaction



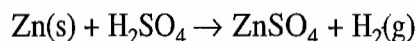
The above process continues as long as the external opposing potential is infinitesimally smaller than that of the cell. However, if the opposing potential becomes slightly larger than that of the cell, the direction of current flow is reversed, and so is the cell reaction. Now zinc ions are converted to zinc at one electrode, silver chloride is formed from silver and chloride ions at the other, and the overall cell reaction becomes



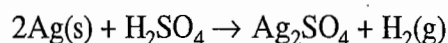
Thus, it is obvious that the second condition of reversibility mentioned above is satisfied. The first condition can be satisfied by drawing from or passing through the cell a very minute current. Hence, the cell is reversible.

An Example of Irreversible Cell

Consider a cell composed of zinc and silver electrodes immersed in a solution of sulphuric acid. When the two electrodes are short circuited, (i.e. connected externally by a wire) zinc dissolves with the evolution of hydrogen to form zinc sulphate according to the reaction:



However, when the cell is connected with an external source of potential slightly greater than its own, silver dissolves at one electrode, hydrogen is evolved at the other, and the cell reaction becomes



Thus, it is obvious that though the first condition of reversibility can be satisfied, the second cannot. Hence, the cell is an irreversible cell. The potential of such a cell does not have any definite thermodynamic significance.

8.3 ELECTROMOTIVE FORCE AND ITS MEASUREMENT

Definition of Electromotive Force

In the Daniell cell, electrons flow from Zn electrode to Cu electrode. This is due to the fact that Zn atom can be more easily oxidized to Zn^{2+} ion than Cu atom to Cu^{2+} ion. On the other side, Cu^{2+} ion can be more easily reduced than the Zn^{2+} ion. Consequently, Zn atom is oxidized to Zn^{2+} ion and the electrons set free at the Zn electrode move towards Cu electrode where Cu^{2+} ion is reduced to Cu atom. Basically, we can say that the flow of electrons is due to the difference of oxidation tendencies of the two atoms, or it is due to the difference of reduction tendencies of the two ions. The relative oxidation tendencies of atoms can be represented by the oxidation potentials. A more easily oxidizable atom will have a larger value of oxidation potential and a less easily oxidizable atom will have a low value of oxidation potential. Thus, Zn atom has a larger oxidation potential than the Cu

atom. Electrons in the external circuit flow from the electrode of higher oxidation potential to the electrode of lower oxidation potential. The difference of potential which causes a current to flow from the electrode of higher potential to the lower one is known as the *electromotive force*, abbreviated as emf, of the cell and is expressed in volts. We will represent emf of a cell by the symbol E_{cell} . Thus

$$E_{\text{cell}} = \text{Higher oxidation potential} - \text{Lower oxidation potential} \quad (8.3.1a)$$

EMF in Terms of Reduction Potentials

By convention, E_{cell} is expressed in terms of reduction potentials (known as *standard potentials*) of the two electrodes. The reduction potentials measure the relative reduction tendencies of ions and their values are simply negative of oxidation potentials of the corresponding atoms. This follows from the fact that an atom with the maximum tendency of oxidation (i.e. highest value of oxidation potential) will yield an ion with the least tendency of reduction (i.e. the minimum reduction potential) and vice versa. Thus, Eq. (8.3.1a) may be written as

$$\begin{aligned} E_{\text{cell}} &= -(-\text{Higher oxidation potential}) + (-\text{Lower oxidation potential}) \\ &= -\text{Lower reduction potential} + \text{Higher reduction potential} \end{aligned}$$

$$\text{i.e. } E_{\text{cell}} = \text{Higher reduction potential} - \text{Lower reduction potential} \quad (8.3.1b)$$

Measurement of EMF

To determine the accurate emf of a cell, direct use of voltmeter cannot be made, since it draws some current from the cell, which will change the emf due to the changes in the concentrations of species caused by the electrode reactions. Again, with appreciable current flow part of the emf will have to be utilized to overcome the internal resistance of the cell, and hence the potential measured on the voltmeter will not be the accurate cell emf.

The precise value of the emf of a cell can be determined by using *potentiometric method*. In this method, an unknown emf is opposed by another emf until the two are equal. Figure 8.3.1 illustrates the experimental set up for determining the emf of a cell with the potentiometric method, where we have:

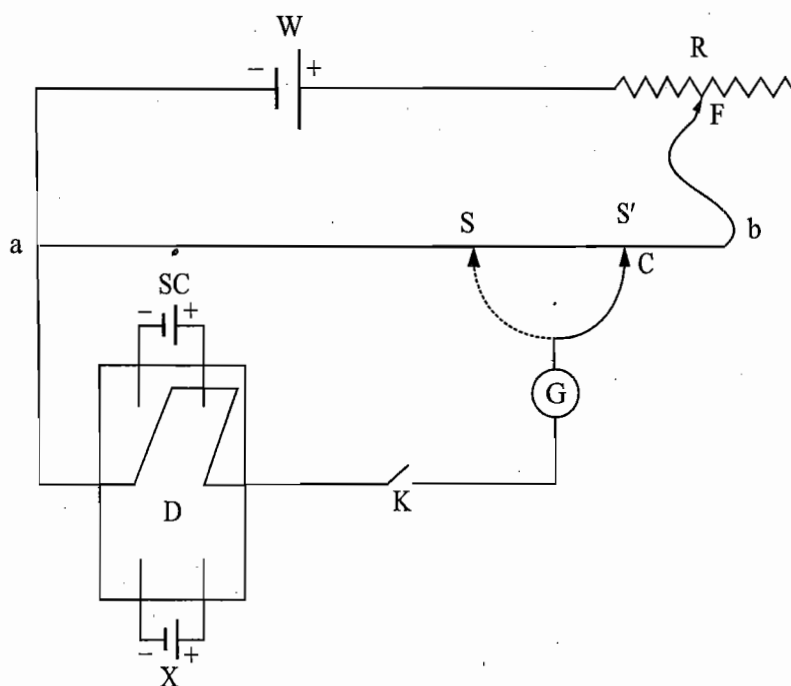


Fig. 8.3.1 Experimental set up for determining the emf of a cell

- ab is a uniform wire. The resistance offered by the wire is directly proportional to its length and is calibrated in volts.
- SC is the standard cell, whose emf is reproducible, constant with time. Usually a standard cadmium cell is used whose emf is 1.018 3 V at 20 °C.
- X is an unknown cell, whose emf is to be determined.
- W is a working cell, whose potential is larger than SC and X. All the three cells have their negative terminals attached to one end of the wire ab.
- R is a resistor of variable resistance.
- G is a galvanometer.

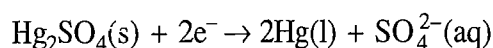
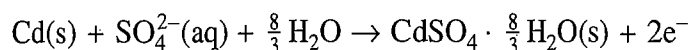
Because of the working cell W, there is a uniform potential gradient along the wire ab. First, the pointer C is set at a point S' along ab corresponding to the value of the emf of the standard cell, say 1.018 3 V. Next SC is thrown into the circuit and F is moved along the resistor R until the galvanometer G shows no deflection. When this balance is established, the current flowing through ab is of such a magnitude as to make the potential drop between a and S' exactly 1.018 3 V and the voltage drop anywhere along ab is the same as the voltage marking on the slide wire. Now the given cell is thrown into circuit and the pointer C is moved along ab until a point S is found at which the galvanometer G again shows no deflection. The reading of the slide wire at S gives the voltage directly.

Standard Cell

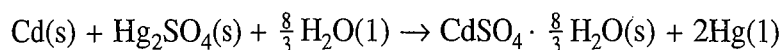
The standard cell should be such that its potential should be reproducible, constant with time and also it should be reversible. It should not suffer permanent damage due to passage of current and should preferably have a low temperature coefficient of emf. The cells that most closely approximate these requirements are Weston unsaturated and saturated standard cells.

This type of cell consists of a H-shaped glass vessel containing in each arm one of the electrodes as shown in Fig. 8.3.2. The positive electrode consists of a platinum wire dipped into mercury that is covered with a paste of mercurous sulphate and mercury. The negative electrode consists of a platinum wire dipped into cadmium amalgam containing 12 to 14 mass % of cadmium. Over both electrodes are sprinkled some crystals of solid $\text{CdSO}_4 \cdot \frac{8}{3} \text{H}_2\text{O}$. The entire cell is filled with a saturated solution of cadmium sulphate, and the cell is closed with corks and sealing wax. The function of the solid crystals of $\text{CdSO}_4 \cdot \frac{8}{3} \text{H}_2\text{O}$ is to keep the solution saturated with CdSO_4 at all temperatures.

The working of the Weston saturated cell depends on the following reversible reactions:



with the overall reaction as



The reaction occurs when the cell is acting as a source of current, while reverse reaction takes place when current is passed through the cell.

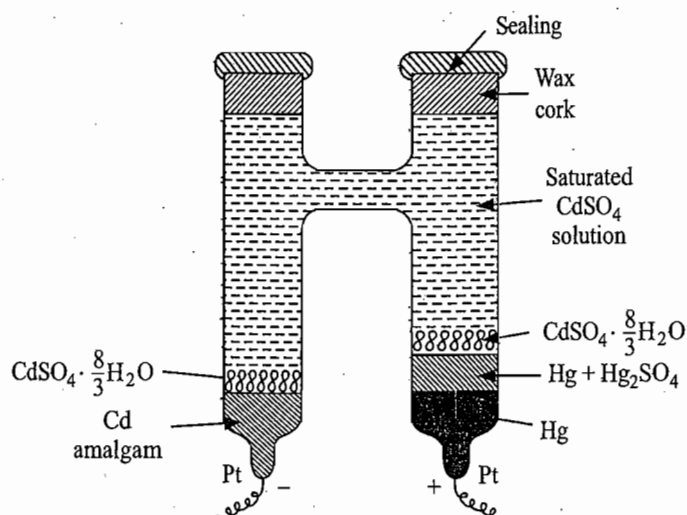


Fig. 8.3.2 The standard Weston saturated cell

The potential of the cell at any temperature is given by the equation

$$E/V = 1.01830 - 4.06 \times 10^{-5} \{(\theta_c/^\circ\text{C}) - 20\} - 9.5 \times 10^{-7} \{(\theta_c/^\circ\text{C}) - 20\}^2$$

8.4 FORMULATION OF A GALVANIC CELL

Half-Cell

An electrochemical cell requires two electrodes for a reaction to occur. The assembly comprising of the electrode and the reagents that are involved with it is called the *half-cell* and the component of the total chemical reaction that occurs in the half-cell is the *half-cell reaction* or *electrode reaction*. Thus, we require two half-cells to produce an electrochemical cell.

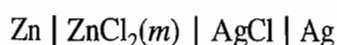
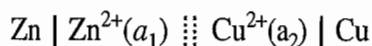
Cell Diagram

A half-cell or an electrochemical cell can be briefly represented by a cell diagram following a few rules given below.

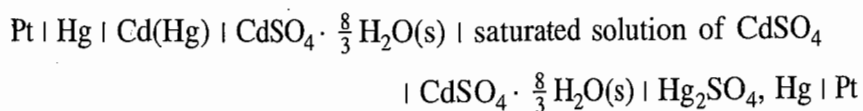
- The separation of two phases is shown by a vertical line (|).
- The various materials present in the same phase are shown together with the help of commas.
- The two half-cells are joined with the help of a dashed vertical line (⋮) if the two liquids at the junction are miscible and by a double dashed vertical lines (⋮⋮) if the liquid junction potential at the junction of the two liquids is assumed to be eliminated.
- The significant features of the substances such as fugacity of gas, activity of ion, etc., are indicated in brackets drawn immediately after writing the substance.

Illustrations

Taking the examples of galvanic cells given in Figs 8.1.4 and 8.1.3, we represent respectively, the two cells as



The Weston cadmium cell shown in Fig. 8.3.2 will be written as



8.5 ELECTRICAL AND ELECTROCHEMICAL POTENTIALS

Definition of Electric Potential The electrical potential at a point in space is defined as the work involved in bringing a unit charge from infinity, where the electric potential is zero, to the point under study. If w_{el} is the electrical work involved in bringing a charge Q from infinity to a given point, then the potential V at this point is given by

$$V = \frac{w_{el}}{Q} \quad (8.5.1)$$

Work Involved in Moving a Charge If a charge dQ moves from a point at a potential V_1 to a point at a potential V_2 the work involved in this process is given by

$$dw_{el} = (V_2 - V_1) dQ \quad (8.5.2)$$

If one coulomb of the charge is transferred under the potential difference of one volt, the work done is 1 volt-coulomb. The latter is numerically equal to 1 J of work.

Electrochemical and Chemical Potentials of a Species The escaping tendency (i.e. chemical potential) of a charged particle (an ion or an electron) in a phase depends on the electrical potential of that phase. To find the relation between the electrical potential and the escaping tendency of a charged particle, we consider a system of two phases M and M' of the same material at two different potentials ϕ and ϕ' , respectively. If the amount dn of the i th species carrying z_i charge is transferred from M to M' , then

$$dQ = z_i F dn \quad (8.5.3)$$

and
$$dw_{el} = (\phi' - \phi) dQ = (\phi' - \phi) z_i F dn \quad (8.5.4)$$

If the transfer is carried out reversibly, the electrical work dw_{el} will be equal to the change in the free energy of the system, i.e.

$$dG = dw_{el} \quad (8.5.5)$$

Substituting the relation of dw_{el} from Eq. (8.5.4), we get

$$dG = (\phi' - \phi) z_i F dn \quad (8.5.6)$$

Let $\tilde{\mu}_{z_i}$ and $\tilde{\mu}'_{z_i}$ be the chemical potentials of the i th species in the phases M and M' , respectively. If the amount dn of this species is transferred from M to M' , the free energy change of the system is given by

$$dG = \tilde{\mu}'_{z_i} dn - \tilde{\mu}_{z_i} dn \quad (8.5.7)$$

Comparing Eqs (8.5.6) and (8.5.7), we get

$$\tilde{\mu}'_{z_i} - \tilde{\mu}_{z_i} = (\phi' - \phi) z_i F \quad (8.5.8)$$

Let μ_{z_i} be the chemical potential of the i th species when the potential of the phase M' is zero. With this, Eq. (8.5.8) becomes

$$\tilde{\mu}_{z_i} = \mu_{z_i} + z_i F \phi \quad (8.5.9)$$

Equation (8.5.9) relates the chemical potential (or the escaping tendency) of the i th species of charge z_i in a phase to its electrical potential. The escaping tendency is a linear function of ϕ . Equation (8.5.9) divides the chemical potential $\tilde{\mu}_{z_i}$ of a charged species in two terms; the first term, μ_{z_i} is the *chemical contribution* and the second term $z_i F \phi$ is the *electrical contribution*. The former has the same value in two phases of the same chemical composition since its value is a function of T , p and the composition. The electrical contribution of the phase depends upon the value of ϕ . On account of these two contributions, the chemical potential $\tilde{\mu}_i$ is commonly referred to as the *electrochemical potential*.

Electrochemical Potential of an Electron in a Metal

For a metal, $z_i = 0$ and hence its electrochemical and chemical potentials have the same value. For an electron in a metal electrode, Eq. (8.5.9) becomes

$$\tilde{\mu}_{e(M)} = \mu_{e(M)} - F\phi \quad (8.5.10)$$

From Eq. (8.5.10), it follows that the electrochemical potential $\tilde{\mu}_{e(M)}$ and the electrical potential ϕ have opposite trends, if the value ϕ is increased, the value of $\tilde{\mu}_{e(M)}$ is decreased and vice versa.

Electric Potential and Type of Reaction Occurring at the Electrode

Since $\tilde{\mu}_{e(M)}$ in Eq. (8.5.10) represents the escaping tendency of electron from the electrode, it is obvious that if a negative electrical potential is applied to an electrode, the electrochemical potential becomes larger than the chemical potential indicating that the escaping tendency of an electron from the electrode is enhanced. This, in turn, implies that the tendency of an oxidation reaction to take place at the electrode is increased. On the other hand, the tendency of electrons to escape from the electrode is diminished if a positive potential is applied to it. Alternatively, we may state that the tendency of the electrode to accept electrons is increased and hence the process that can take place at the electrode is the reduction one. Now, if two electrodes of different electrical potentials (both positive or both negative or one positive and the other negative) are coupled to make a cell, it is obvious that the oxidation reaction will take place at the electrode of higher negative potential (or lesser positive potential) and the reduction at the electrode of lower negative potential (or higher positive potential).

Reduction Potentials

Since on increasing the value of electrical potential, the tendency of reduction reaction to occur at the electrode is increased, the electrical potential is commonly referred to as the *reduction potential*. It is for this reason, the equilibrium reaction at the electrode is also written as the reduction reaction.

8.6 DIFFERENT TYPES OF HALF-CELLS AND THEIR REDUCTION POTENTIALS

In this section, we consider various types of half-cells that are employed and the expressions which relate the half-cell potential with the activity and fugacity of the constituents of the half-cell.

GAS-ION HALF-CELL

In the gas-ion half-cell, an inert collector of electrons, platinum or graphite is in contact with gas and a solution containing a specified ion.

Hydrogen Gas-Hydrogen Ion Half-Cell

One of the most important gas-ion half-cell is the hydrogen gas-hydrogen ion half-cell (also commonly known as hydrogen electrode). In this half-cell, purified hydrogen gas at a constant pressure is passed over a platinum electrode which is in contact with an acid solution (Fig. 8.6.1).

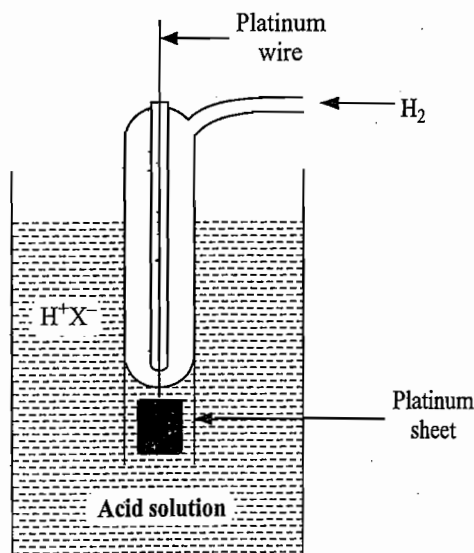
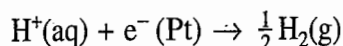


Fig. 8.6.1 Hydrogen gas-hydrogen ion half-cell

Expression of Reduction Potential (Nernst Equation)

The expression of $E_{\text{half-cell}}$ can be derived by considering the reversible reduction reaction that occurs at the electrode. For the present case, we have



The equilibrium condition at the electrode is

$$\tilde{\mu}_{\text{H}^+(\text{aq})} + \tilde{\mu}_{\text{e}^-(\text{Pt})} = \frac{1}{2} \tilde{\mu}_{\text{H}_2(\text{g})} \quad (8.6.1)$$

Making use of Eq. (8.5.9), the above expression becomes

$$\{\mu_{\text{H}^+(\text{aq})} + F\phi_{\text{aq}}\} + \{\mu_{\text{e}^-(\text{Pt})} - F\phi_{\text{Pt}}\} = \frac{1}{2} \mu_{\text{H}_2(\text{g})} \quad (8.6.2)$$

Substituting the expressions

$$\mu_{\text{H}^+(\text{aq})} = \mu_{\text{H}^+(\text{aq})}^{\circ} + RT \ln a_{\text{H}^+(\text{aq})} \quad (8.6.3)^{\dagger}$$

and
$$\mu_{\text{H}_2(\text{g})} = \mu_{\text{H}_2(\text{g})}^{\circ} + RT \ln (f_{\text{H}_2(\text{g})}/f^{\circ}) \quad (8.6.4)$$

in Eq. (8.6.2) and rearranging it, we get

$$\phi_{\text{Pt}} - \phi_{\text{aq}} = \frac{\mu_{\text{H}^+(\text{aq})}^{\circ} - \frac{1}{2} \mu_{\text{H}_2(\text{g})}^{\circ} + \mu_{\text{e}^-(\text{Pt})}}{F} - \frac{RT}{F} \ln \frac{(f_{\text{H}_2(\text{g})}/f^{\circ})^{1/2}}{a_{\text{H}^+(\text{aq})}}$$

[†]See Annexure I at the end of this chapter for the concept of activity

By definition, $E_{\text{half-cell}} = \phi_{\text{Pt}} - \phi_{\text{aq}}$. Thus, we have

$$E_{\text{H}^+ | \text{H}_2 | \text{Pt}} = \frac{\mu_{\text{H}^+(\text{aq})}^\circ - \frac{1}{2}\mu_{\text{H}_2(\text{g})}^\circ + \mu_{\text{e}^-(\text{Pt})}}{F} - \frac{RT}{F} \ln \frac{(f_{\text{H}_2(\text{g})}/f^\circ)^{1/2}}{a_{\text{H}^+}} \quad (8.6.5)$$

If the fugacity of the gas is unity and the activity of H^+ in solution is unity, the half-cell is said to be in the standard state and the corresponding potential, the standard reduction potential (or simply as the standard potential), is given by

$$E_{\text{H}^+ | \text{H}_2 | \text{Pt}}^\circ = \frac{\mu_{\text{H}^+(\text{aq})}^\circ - \frac{1}{2}\mu_{\text{H}_2(\text{g})}^\circ + \mu_{\text{e}^-(\text{Pt})}}{F} \quad (8.6.6)$$

With this, Eq. (8.6.5) modifies to

$$E_{\text{H}^+ | \text{H}_2 | \text{Pt}} = E_{\text{H}^+ | \text{H}_2 | \text{Pt}}^\circ - \frac{RT}{F} \ln \frac{(f_{\text{H}_2(\text{g})}/f^\circ)}{a_{\text{H}^+}} \quad (8.6.7)$$

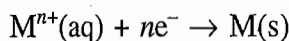
Equation of the above type is known as the *Nernst equation*.

METAL-METAL ION HALF-CELL

Metal-metal ion half-cell consists of a bar of metal M in contact with a solution containing M^{n+} ions. Examples include zinc-zinc ion, copper-cupric ion, silver-silver ion and gold-auric ion half-cells.

Expression of Reduction Potential

The equilibrium reaction at the electrode is



Equality of electrochemical potentials yields

$$\tilde{\mu}_{M^{n+}(\text{aq})} + n\tilde{\mu}_{\text{e}^-(M)} = \mu_{M(\text{s})}$$

$$\text{or } \{\mu_{M^{n+}(\text{aq})} + nF\phi_{\text{aq}}\} + n\{\mu_{\text{e}^-(M)} - F\phi_M\} = \mu_{M(\text{s})} \quad (8.6.8)$$

Substituting the expression

$$\mu_{M^{n+}} = \mu_{M^{n+}}^\circ + RT \ln a_{M^{n+}(\text{aq})}$$

in Eq. (8.6.8) and rearranging the resultant expression, we get

$$\phi_M - \phi_{\text{aq}} = \frac{\mu_{M^{n+}(\text{aq})}^\circ + n\mu_{\text{e}^-(M)} - \mu_{M(\text{s})}}{nF} - \frac{RT}{nF} \ln \frac{1}{a_{M^{n+}(\text{aq})}} \quad (8.6.9)$$

If the activity of M^{n+} is unity, we get the standard potential of $M-M^{n+}$ half-cell, such that

$$E_{M^{n+}|M}^\circ = \frac{\mu_{M^{n+}(\text{aq})}^\circ + n\mu_{\text{e}^-(M)} - \mu_{M(\text{s})}}{nF} \quad (8.6.10)$$

Substituting the above expression in Eq. (8.6.9), we get

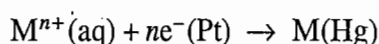
$$E_{M^{n+}|M} = E_{M^{n+}|M}^{\circ} - \frac{RT}{nF} \ln \frac{1}{a_{M^{n+}}} \quad (8.6.11)$$

METAL AMALGAM-METAL ION HALF-CELL

In this electrode, metal amalgam is placed in contact with a solution containing metal ion. Electrical contact is made by a platinum wire dipping into the amalgam pool.

Expression of Reduction Potential

The equilibrium reaction at the electrode is



Equality of electrochemical potentials yields

$$\tilde{\mu}_{M^{n+}(\text{aq})} + n\tilde{\mu}_{e^{-}(\text{Pt})} = \mu_{M(\text{Hg})} \quad (8.6.12)$$

$$\text{or } \{ \mu_{M^{n+}(\text{aq})} + nF\phi_{\text{aq}} \} + n\{ \mu_{e^{-}(\text{Pt})} - F\phi_{\text{Pt}} \} = \mu_{M(\text{Hg})} \quad (8.6.13)$$

Substituting the expressions

$$\mu_{M^{n+}(\text{aq})} = \mu_{M^{n+}(\text{aq})}^{\circ} + RT \ln a_{M^{n+}(\text{aq})}$$

$$\text{and } \mu_{M(\text{Hg})} = \mu_{M}^{\circ} + RT \ln a_{M(\text{Hg})}$$

in Eq. (8.6.13) and rearranging the resultant expression, we get

$$\phi_{\text{Pt}} - \phi_{\text{aq}} = \frac{\mu_{M^{n+}(\text{aq})}^{\circ} + n\mu_{e^{-}(\text{Pt})} - \mu_{M}^{\circ}}{nF} - \frac{RT}{nF} \ln \frac{a_{M(\text{Hg})}}{a_{M^{n+}}} \quad (8.6.14)$$

The reduction potential of $M^{n+} | M(\text{Hg}) | \text{Pt}$ assembly will be given by

$$\begin{aligned} E_{M^{n+}|M(\text{Hg})|\text{Pt}} &= \{ \phi_{\text{Pt}} - \phi_{M(\text{Hg})} \} + \{ \phi_{M(\text{Hg})} - \phi_{\text{aq}} \} \\ &= \phi_{\text{Pt}} - \phi_{\text{aq}} \end{aligned}$$

Hence Eq. (8.6.14) becomes

$$E_{M^{n+}|M(\text{Hg})|\text{Pt}} = \frac{\mu_{M^{n+}(\text{aq})}^{\circ} + n\mu_{e^{-}(\text{Pt})} - \mu_{M}^{\circ}}{nF} - \frac{RT}{nF} \ln \frac{a_{M(\text{Hg})}}{a_{M^{n+}}} \quad (8.6.15)$$

If the activities of $M(\text{Hg})$ and $M^{n+}(\text{aq})$ are unity, we get the standard potential of $M-M^{n+}$ half-cell, such that

$$E_{M^{n+}|M|\text{Pt}}^{\circ} = \frac{\mu_{M^{n+}(\text{aq})}^{\circ} + n\mu_{e^{-}(\text{Pt})} - \mu_{M}^{\circ}}{nF}$$

With this, Eq. (8.6.15) modifies to

$$E_{M^{n+}|M(\text{Hg})|\text{Pt}} = E_{M^{n+}|M|\text{Pt}}^{\circ} - \frac{RT}{nF} \ln \frac{a_{M(\text{Hg})}}{a_{M^{n+}}} \quad (8.6.16)$$

Equation (8.6.16) may be written as

$$\begin{aligned} E_{M^{n+} | M(Hg) | Pt} &= E_{M^{n+} | M | Pt}^{\circ} - \frac{RT}{nF} \ln a_{M(Hg)} - \frac{RT}{nF} \ln \frac{1}{a_{M^{n+}}} \\ &= E_{M^{n+} | M(Hg) | Pt}^{\circ} - \frac{RT}{nF} \ln \frac{1}{a_{M^{n+}}} \end{aligned} \quad (8.6.17)$$

where $E_{M^{n+} | M(Hg) | Pt}^{\circ}$ is the standard potential of the given metal amalgam. Its value may be determined by using a solution of known activity of M^{n+} .

Alternatively, the following procedure may be employed.

A cell is constructed with the given metal amalgam electrode and the pure metal electrode dipping into a solution of metal ion, i.e.



The emf of the cell is determined experimentally. It is given by the expression

$$E_{\text{cell}} = E_{M^{n+} | M} - E_{M^{n+} | M(Hg) | Pt} \quad (8.6.18)$$

$$\text{where } E_{M^{n+} | M} = E_{M^{n+} | M}^{\circ} - \frac{RT}{nF} \ln \frac{1}{a_{M^{n+}}} \quad (8.6.19)$$

$$\text{and } E_{M^{n+} | M(Hg) | Pt} = E_{M^{n+} | M(Hg) | Pt}^{\circ} - \frac{RT}{nF} \ln \frac{1}{a_{M^{n+}}} \quad (8.6.20)$$

Substituting Eqs (8.6.19) and (8.6.20) in Eq. (8.6.18), we get

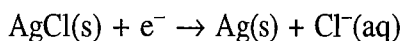
$$E_{\text{cell}} = E_{M^{n+} | M}^{\circ} - E_{M^{n+} | M(Hg) | Pt}^{\circ} \quad (8.6.21)$$

Knowing $E_{M^{n+} | M}^{\circ}$ from the table of standard potentials and E_{cell} experimentally, the value of $E_{M^{n+} | M(Hg) | Pt}^{\circ}$ may be determined from Eq. (8.6.21).

METAL-INSOLUBLE SALT-ANION HALF-CELL

In this half-cell, a metal coated with its insoluble salt is in contact with a solution containing the anion of the insoluble salt. Three such half-cells are described below.

Silver-Silver Chloride-Chloride Ion Half-Cell This half-cell is represented as $Cl^{-} | AgCl | Ag$. The equilibrium reaction that occurs at the electrode is



**Expression of
Reduction Potential**

The equality of electrochemical potentials gives

$$\mu_{\text{AgCl(s)}} + \tilde{\mu}_{e^-(\text{AgCl}|\text{Ag})} = \mu_{\text{Ag(s)}} + \tilde{\mu}_{\text{Cl}^-(\text{aq})}$$

Making use of Eq. (8.5.9), the above expression becomes

$$\mu_{\text{AgCl(s)}} + \{\mu_{e^-(\text{AgCl}|\text{Ag})} - F\phi_{\text{AgCl}|\text{Ag}}\} = \mu_{\text{Ag(s)}} + \{\mu_{\text{Cl}^-(\text{aq})} - F\phi_{\text{aq}}\} \quad (8.6.22)$$

Substituting

$$\mu_{\text{Cl}^-(\text{aq})} = \mu_{\text{Cl}^-(\text{aq})}^{\circ} + RT \ln a_{\text{Cl}^-}$$

in Eq. (8.6.22) and rearranging it, we get

$$\phi_{\text{AgCl}|\text{Ag}} - \phi_{\text{aq}} = - \frac{\mu_{\text{Ag(s)}} + \mu_{\text{Cl}^-(\text{aq})}^{\circ} - \mu_{\text{AgCl(s)}} - \mu_{e^-(\text{AgCl}|\text{Ag})}}{F} - \frac{RT}{F} \ln a_{\text{Cl}^-}$$

Defining the standard potential when $a_{\text{Cl}^-} = 1$, we get

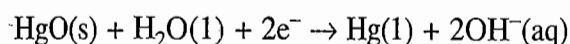
$$E_{\text{Cl}^-|\text{AgCl}|\text{Ag}} = E_{\text{Cl}^-|\text{AgCl}|\text{Ag}}^{\circ} - \frac{RT}{F} \ln a_{\text{Cl}^-} \quad (8.6.23)$$

where $E_{\text{Cl}^-|\text{AgCl}|\text{Ag}} = \phi_{\text{AgCl}|\text{Ag}} - \phi_{\text{eq}}$

and $E_{\text{Cl}^-|\text{AgCl}|\text{Ag}}^{\circ} = - \frac{\mu_{\text{Ag(s)}} + \mu_{\text{Cl}^-(\text{aq})}^{\circ} - \mu_{\text{AgCl(s)}} - \mu_{e^-(\text{AgCl}|\text{Ag})}}{F}$

**Mercury-Mercuric
Oxide-Hydroxide Ion
Half-Cell**

In this half-cell, a pool of mercury is covered with a paste of solid HgO and a solution of a base. The equilibrium reaction that takes place at the platinum electrode is

**Expression of
Reduction Potential**

The equality of chemical potential yields

$$\mu_{\text{HgO(s)}} + \mu_{\text{H}_2\text{O(l)}} + 2\tilde{\mu}_{e^-(\text{Pt})} = \mu_{\text{Hg(l)}} + 2\tilde{\mu}_{\text{OH}^-(\text{aq})}$$

Replacing $\tilde{\mu}$ in terms of μ , we get

$$\mu_{\text{HgO(s)}} + \mu_{\text{H}_2\text{O(l)}} + \{2\mu_{e^-(\text{Pt})} - 2F\phi_{\text{Pt}}\} = \mu_{\text{Hg(l)}} + \{2\mu_{\text{OH}^-(\text{aq})} - 2F\phi_{\text{aq}}\}$$

Substituting

$$\mu_{\text{OH}^-(\text{aq})} = \mu_{\text{OH}^-(\text{aq})}^{\circ} + RT \ln a_{\text{OH}^-}$$

in the previous expression and rearranging it, we get

$$\phi_{\text{Pt}} - \phi_{\text{aq}} = - \frac{\mu_{\text{Hg}(1)} + 2\mu_{\text{OH}^-(\text{aq})}^{\circ} - \mu_{\text{HgO}(s)} - \mu_{\text{H}_2\text{O}(1)} - 2\mu_{e^-(\text{Pt})}}{2F} - \frac{RT}{F} \ln a_{\text{OH}^-}$$

Defining the standard potential when $a_{\text{OH}^-} = 1$, we get

$$\phi_{\text{Pt}} - \phi_{\text{aq}} = (\phi_{\text{Pt}}^{\circ} - \phi_{\text{aq}}^{\circ}) - \frac{RT}{F} \ln a_{\text{OH}^-} \quad (8.6.24)$$

where
$$\phi_{\text{Pt}}^{\circ} - \phi_{\text{aq}}^{\circ} = - \frac{\mu_{\text{Hg}(1)} + 2\mu_{\text{OH}^-(\text{aq})}^{\circ} - \mu_{\text{HgO}(s)} - \mu_{\text{H}_2\text{O}(1)} - 2\mu_{e^-(\text{Pt})}}{2F}$$

The half-cell potential will be given by

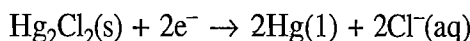
$$\begin{aligned} E_{\text{OH}^- | \text{HgO} | \text{Hg}} &= (\phi_{\text{Pt}} - \phi_{\text{HgO} | \text{Hg}}) + (\phi_{\text{HgO} | \text{Hg}} - \phi_{\text{aq}}) \\ &\equiv \phi_{\text{Pt}} - \phi_{\text{aq}} \end{aligned}$$

Thus, Eq. (8.6.24) becomes

$$E_{\text{OH}^- | \text{HgO} | \text{Hg}} = E_{\text{OH}^- | \text{HgO} | \text{Hg}}^{\circ} - \frac{RT}{F} \ln a_{\text{OH}^-} \quad (8.6.25)$$

Mercury-Mercurous Chloride-Chloride Ion Half-Cell

This half-cell is known as calomel half-cell. The equilibrium reaction is



Its Nernst equation is

$$E_{\text{Cl}^- | \text{Hg}_2\text{Cl}_2 | \text{Hg}} = E_{\text{Cl}^- | \text{Hg}_2\text{Cl}_2 | \text{Hg}}^{\circ} - \frac{RT}{F} \ln a_{\text{Cl}^-} \quad (8.6.26)$$

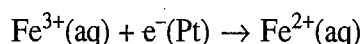
where
$$E_{\text{Cl}^- | \text{Hg}_2\text{Cl}_2 | \text{Hg}}^{\circ} = - \frac{2\mu_{\text{Hg}(1)} + 2\mu_{\text{Cl}^-}^{\circ} - \mu_{\text{Hg}_2\text{Cl}_2} - 2\mu_{e^-(\text{Pt})}}{2F}$$

OXIDATION-REDUCTION HALF-CELL

An oxidation-reduction half-cell has an inert metal collector, usually platinum, immersed in a solution which contains two ions of the same element in different states of oxidation.

Ferric-Ferrous Half-Cell

One of the examples is ferric-ferrous half-cell. The equilibrium reaction to be considered is



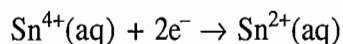
The Nernst equation is

$$E_{\text{Fe}^{3+}, \text{Fe}^{2+} | \text{Pt}} = E_{\text{Fe}^{3+}, \text{Fe}^{2+} | \text{Pt}}^{\circ} - \frac{RT}{F} \ln \frac{a_{\text{Fe}^{2+}}}{a_{\text{Fe}^{3+}}} \quad (8.6.27)$$

$$\text{where } E_{\text{Fe}^{3+}, \text{Fe}^{2+} | \text{Pt}}^{\circ} = - \frac{\mu_{\text{Fe}^{2+}}^{\circ} - \mu_{\text{Fe}^{3+}}^{\circ} - \mu_{e^{-}(\text{Pt})}}{F}$$

Stannic-Stannous Half-Cell

Another example is stannic-stannous half-cell where the reduction reaction to be considered is



and the Nernst equation is

$$E_{\text{Sn}^{4+}, \text{Sn}^{2+} | \text{Pt}} = E_{\text{Sn}^{4+}, \text{Sn}^{2+} | \text{Pt}}^{\circ} - \frac{RT}{2F} \ln \frac{a_{\text{Sn}^{2+}}}{a_{\text{Sn}^{4+}}} \quad (8.6.28)$$

General Expression of Nernst Equation

From the derived expressions of Nernst equation for the various half-cells (Eqs 8.6.5–8.6.28), it may be concluded that the form of Nernst equation for a given half-cell reaction can be written down without undergoing the explicit derivation by making use of the relation

$$E = E^{\circ} - \frac{RT}{nF} \ln \left\{ \prod_j (a_j)^{v_j} \right\}; \quad v_j \equiv \begin{cases} +\text{ve for product species in the reaction} \\ -\text{ve for reactant species in the reaction} \end{cases} \quad (8.6.29)$$

where n is the number of electrons involved in the half-cell reaction and v_j is the stoichiometry number of the j th species in the half-cell reaction. The latter has a positive/negative value for the species appeared on the right/left side of the cell reaction. The symbol Π stands for the multiplication of activity or fugacity of all the j species (except those appeared in the solid and liquid forms) involved in the cell reaction.


8.7 THE EMF OF A CELL AND ITS CELL REACTION

When the two half cells are combined and their electrodes are connected by an external electrical conductor, an electrical current will flow and chemical reactions will occur in the two half-cells. The nature of the reaction proceeding in a cell can be deduced from the manner in which the electrodes are connected to the standard cell in order to obtain a balance in the potentiometer.

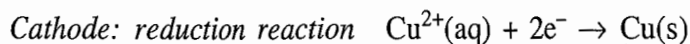
- Electrode connected to the negative side of the standard cell is the negative electrode while the one connected to the positive side is the positive electrode.
- As stated earlier (Section 8.1), oxidation reaction occurs at the negative electrode and thus electrons are released at this electrode.
- The electrons are taken out from the negative electrode by the external conductor and are absorbed at the positive electrode for the reduction reaction.

Cell Reaction

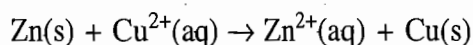
The cell reaction can be determined by writing these oxidation and reduction reactions with equal number of electrons and then adding the two reactions. Thus



Taking an example of Daniell cell, we have



Adding the two, we get

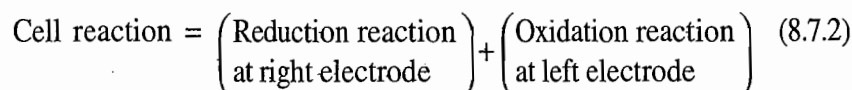


Recommendations for Cell Diagram

The emf of the cell under consideration is due to the spontaneous reaction that takes place within the cell. Under balanced reversible conditions a cell reaction can proceed in either direction. Which process—whether forward or backward—corresponds to a given cell? This, of course, can be decided experimentally but not from the manner of writing cell on paper, unless the following recommended convention in this regard is accepted.

If a cell is written on a piece of paper, then the cell reaction will be written so that electrons are accepted from the external circuit by the electrode written on the right and are given out by the electrode written on the left.

In other words, once the cell has been written, it will be understood that the left electrode (represented by the symbol L) is the anode (where oxidation reaction takes place and thus electrons are set free) and the right electrode (represented by the symbol R) is the cathode (where reduction reaction occurs and thus electrons are absorbed). With this convention, Eq. (8.7.1) may be written as

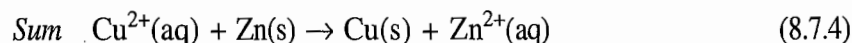
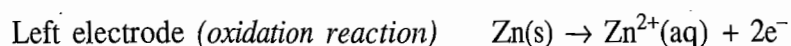
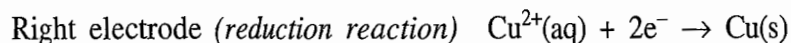


Illustrations

To illustrate the procedure, we write the Daniell cell as



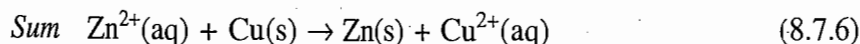
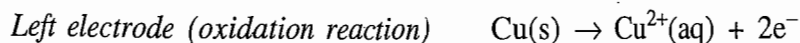
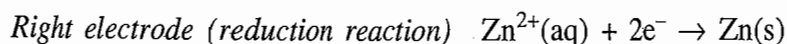
Now, according to the above stated rule, the left electrode will be considered as the anode (or the negative terminal) and the right electrode as the cathode (or the positive terminal). Thus, the cell reaction would be



Note that if the cell has been written as



then while writing the cell reaction, the left electrode (i.e. Cu electrode) will be considered as the negative terminal and the right electrode (i.e. Zn electrode) as the positive terminal. The cell reaction would be



EMF of a Cell

In Section 8.3, we have stated that the spontaneous cell reaction is due to the difference of relative reduction tendencies of the two ions at the respective electrodes. The ion with a higher reduction potential is reduced and the one with lower reduction potential is formed by the oxidation of the corresponding atom. Thus, electrons flow from the electrode of lower reduction tendency of ions to the one of higher reduction tendency of ions. The reduction tendency of an ion can be represented by reduction potential and hence emf of the cell can be written as the difference of the two reduction potentials, i.e.

$$\text{emf} = \text{Higher reduction potential} - \text{Lower reduction potential}$$

Keeping in view the convention of writing a cell, the above expression may be written as

$$\text{emf} = \left(\text{Reduction potential of right electrode} \right) - \left(\text{Reduction potential of left electrode} \right) \quad (8.7.7)$$

Now if a cell as written produces a spontaneous cell reaction, it is obvious that the reduction potential of the ion appeared at the right electrode (where reduction reaction occurs) will be greater than the ion appeared at the left electrode (where oxidation reaction occurs). Hence emf of such a cell will be positive. Conversely, if the cell as written has a positive emf, it implies that it would produce a spontaneous cell reaction with reduction at right electrode and oxidation at left electrode. On the other hand, if the cell reaction is not spontaneous, then the reduction potential of right electrode will be smaller than that of left electrode. Consequently, emf of the cell will have a negative value.

Cell Reaction

Equation (8.7.2) may be written in the form similar to that of Eq. (8.7.7). Since oxidation is just reverse of reduction, it is obvious that

$$\text{Oxidation reaction} = - \text{Reduction reaction}$$

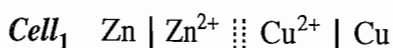
Thus, Eq. (8.7.2) may be written as

$$\text{Cell reaction} = \left(\text{Reduction reaction at right electrode} \right) - \left(\text{Reduction reaction at left electrode} \right) \quad (8.7.8)$$

We shall adopt Eq. (8.7.8) in order to determine the cell reaction.

Illustrations

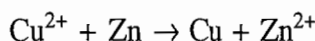
To illustrate the procedure of determining cell reaction and cell potential, we once again take the example of Daniell cell.



We have

Electrode	Reduction reaction	Reduction potential
Right	$\text{Cu}^{2+} + 2e^- \rightarrow \text{Cu}$	$E_{\text{Cu}^{2+} \text{Cu}} = E_{\text{Cu}^{2+} \text{Cu}}^\circ - \frac{RT}{2F} \ln \frac{1}{a_{\text{Cu}^{2+}}}$
Left	$\text{Zn}^{2+} + 2e^- \rightarrow \text{Zn}$	$E_{\text{Zn}^{2+} \text{Zn}} = E_{\text{Zn}^{2+} \text{Zn}}^\circ - \frac{RT}{2F} \ln \frac{1}{a_{\text{Zn}^{2+}}}$

Subtracting reduction reaction of left electrode from that of right electrode, we get the cell reaction:



Since the emf of the cell is

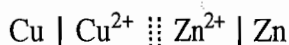
$$E_{\text{cell}_1} = E_R - E_L$$

we have

$$\begin{aligned} E_{\text{cell}_1} &= E_{\text{Cu}^{2+}|\text{Cu}} - E_{\text{Zn}^{2+}|\text{Zn}} \\ &= \left(E_{\text{Cu}^{2+}|\text{Cu}}^\circ - \frac{RT}{2F} \ln \frac{1}{a_{\text{Cu}^{2+}}} \right) - \left(E_{\text{Zn}^{2+}|\text{Zn}}^\circ - \frac{RT}{2F} \ln \frac{1}{a_{\text{Zn}^{2+}}} \right) \\ &= (E_{\text{Cu}^{2+}|\text{Cu}}^\circ - E_{\text{Zn}^{2+}|\text{Zn}}^\circ) - \frac{RT}{2F} \ln \frac{a_{\text{Zn}^{2+}}}{a_{\text{Cu}^{2+}}} \end{aligned}$$

$$\text{or } E_{\text{cell}_1} = E_{\text{cell}_1}^\circ - \frac{RT}{2F} \ln \frac{a_{\text{Zn}^{2+}}}{a_{\text{Cu}^{2+}}} \quad (8.7.9)$$

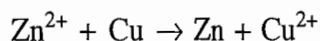
Cell₂ If the cell were written as



then we would have

Electrode	Reduction reaction	Reduction potential
Right	$\text{Zn}^{2+} + 2e^- \rightarrow \text{Zn}$	$E_{\text{Zn}^{2+} \text{Zn}} = E_{\text{Zn}^{2+} \text{Zn}}^\circ - \frac{RT}{2F} \ln \frac{1}{a_{\text{Zn}^{2+}}}$
Left	$\text{Cu}^{2+} + 2e^- \rightarrow \text{Cu}$	$E_{\text{Cu}^{2+} \text{Cu}} = E_{\text{Cu}^{2+} \text{Cu}}^\circ - \frac{RT}{2F} \ln \frac{1}{a_{\text{Cu}^{2+}}}$

Subtracting reduction reaction of left electrode from that of right electrode, we get the cell reaction as



The emf of the cell is given by

$$E_{\text{cell}_2} = E_{\text{Zn}^{2+}|\text{Zn}} - E_{\text{Cu}^{2+}|\text{Cu}}$$

$$E_{\text{cell}_2} = E_{\text{cell}_2}^{\circ} - \frac{RT}{2F} \ln \frac{a_{\text{Cu}^{2+}}}{a_{\text{Zn}^{2+}}}$$

where $E_{\text{cell}_2}^{\circ} = E_{\text{Zn}^{2+} | \text{Zn}}^{\circ} - E_{\text{Cu}^{2+} | \text{Cu}}^{\circ}$

Obviously,

$$E_{\text{cell}_2} = -E_{\text{cell}_1}$$

and the reaction of cell₂ is just a reverse of that of cell₁.

General Expression of Cell Potential

The expression of cell potential, in general, can be written down directly from the cell reaction by making use of the relation

$$E_{\text{cell}} = E_{\text{cell}}^{\circ} - \frac{RT}{nF} \ln \left\{ \prod_j (a_j)^{\nu_j} \right\}; \nu_j \equiv \begin{cases} +\text{ve for the right-side species} \\ -\text{ve for the left-side species} \end{cases} \quad (8.7.10)$$

where n is the number of electrons involved in the cell reaction, ν_j is the stoichiometry of the j th species and E_{cell}° is given by

$$E_{\text{cell}}^{\circ} = E_{\text{R}}^{\circ} - E_{\text{L}}^{\circ} \quad (8.7.11)$$

The symbol \prod_j stands for the multiplication of activity or fugacity raised to the corresponding stoichiometric number of all the j species (except those appeared in the solid and liquid forms) involved in the cell reaction.

Criterion for the Spontaneity of the Cell Reaction

The connection between the sign of emf of a cell and the nature of the associated cell reaction may be derived thermodynamically. As stated above, the electrons flow spontaneously from left electrode to right electrode provided the reduction potential of right electrode is greater than that of left electrode. The amount of electrical work involved in moving the amount n of electrons from left electrode to right electrode as given by Eq. (8.5.4) is

$$w = -nF(E_{\text{R}} - E_{\text{L}}) = -nFE_{\text{cell}}$$

where, F is Faraday constant ($= 96\,500 \text{ C mol}^{-1}$), E_{R} and E_{L} are the reduction potentials of right electrode and left electrode, respectively, and E_{cell} is the emf of the cell. Now, according to thermodynamics, the above work will be equal to the change in free energy of the cell (i.e. more precisely of the cell reaction). Hence, we have

$$\Delta G = -nFE_{\text{cell}} \quad (8.7.12)$$

From Eq. (8.7.12), we observe that ΔG and E_{cell} have opposite signs, i.e. if ΔG is negative then E_{cell} is positive and vice versa. Thus, we have the following criteria about the nature of cell reaction and its emf.

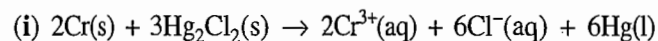
ΔG	Nature of cell reaction	Sign of E_{cell}
Negative	Spontaneous	Positive
Positive	Nonspontaneous	Negative
Zero	At equilibrium	Zero

From Eq. (8.7.12), we observe that the cell emf is proportional to $\Delta G/n$. Since $\Delta G/n$ is an intensive property, it follows that E_{cell} is also an intensive property and hence does not depend upon the size of the cell and the number of electrons that are associated while writing the half-cell reactions.

Example 8.7.1

Construct the galvanic cell for each of the following reactions and write down the corresponding expression for the cell potential.

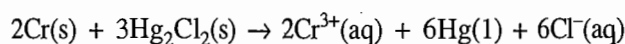
- (i) $2\text{Cr}(s) + 3\text{Hg}_2\text{Cl}_2(s) \rightarrow 2\text{Cr}^{3+}(\text{aq}) + 6\text{Cl}^{-}(\text{aq}) + 6\text{Hg}(l)$
 (ii) $\text{Ni}^{2+}(\text{aq}) + \text{H}_2(\text{g}) + 2\text{OH}^{-}(\text{aq}) \rightarrow \text{Ni}(s) + 2\text{H}_2\text{O}(l)$
 (iii) $\text{AgCl}(s) + \text{I}^{-}(\text{aq}) \rightarrow \text{AgI}(s) + \text{Cl}^{-}(\text{aq})$
 (iv) $\text{Zn}(s) + \text{H}_2\text{SO}_4(\text{aq}) \rightarrow \text{ZnSO}_4(\text{aq}) + \text{H}_2(\text{g})$
 (v) $\text{Fe}(s) + \text{Cl}_2(\text{g}) \rightarrow \text{FeCl}_2(\text{aq})$
 (vi) $\text{Ag}(s) + \frac{1}{2}\text{Br}_2(l) \rightarrow \text{AgBr}(s)$
 (vii) $\text{Ag}^{+}(\text{aq}) + \text{Cl}^{-}(\text{aq}) \rightarrow \text{AgCl}(s)$
 (viii) $\text{HgO}(s) + \text{H}_2(\text{g}) \rightarrow \text{Hg}(l) + \text{H}_2\text{O}(l)$

Solution

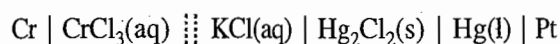
Cr is oxidized to Cr^{3+} and Hg_2^{2+} is reduced to Hg. Thus, we would have:

Electrode	Reduction reaction	
Right	$\text{Hg}_2\text{Cl}_2(s) + 2e^{-} \rightarrow 2\text{Hg}(l) + 2\text{Cl}^{-}(\text{aq})$	(i)
Left	$\text{Cr}^{3+}(\text{aq}) + 3e^{-} \rightarrow \text{Cr}(s)$	(ii)

Multiplying Eq. (i) by 3 and Eq. (ii) by 2 and then subtracting Eq. (ii) from Eq. (i), we get



The required cell would be



and the cell potential will be given by

$$E_{\text{cell}} = E_{\text{cell}}^{\circ} - \frac{RT}{6F} \ln (a_{\text{Cr}^{3+}})^2 (a_{\text{Cl}^{-}})^6$$

i.e.
$$E_{\text{cell}} = E_{\text{cell}}^{\circ} - \frac{RT}{3F} \ln (a_{\text{Cr}^{3+}}) (a_{\text{Cl}^{-}})^3$$

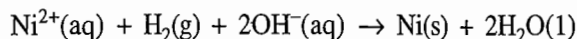
where
$$E_{\text{cell}}^{\circ} = E_{\text{Cl}^{-} \mid \text{Hg}_2\text{Cl}_2 \mid \text{Hg}}^{\circ} - E_{\text{Cr}^{3+} \mid \text{Cr}}^{\circ}$$



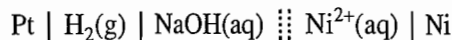
Ni^{2+} is reduced to Ni and hydrogen in alkaline medium is oxidized to H_2O . Thus, we have:

Electrode	Reduction reaction	
Right	$\text{Ni}^{2+}(\text{aq}) + 2e^{-} \rightarrow \text{Ni}(s)$	(i)
Left	$2\text{H}_2\text{O}(l) + 2e^{-} \rightarrow \text{H}_2(\text{g}) + 2\text{OH}^{-}(\text{aq})$	(ii)

Subtracting Eq. (ii) from Eq. (i), we get



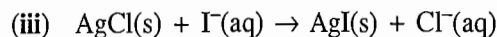
The required cell would be



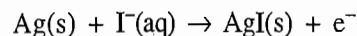
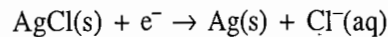
and the cell potential will be given by

$$E_{\text{cell}} = E_{\text{cell}}^{\circ} - \frac{RT}{2F} \ln \frac{1}{(f_{\text{H}_2}/f^{\circ})(a_{\text{OH}^-})^2 (a_{\text{Ni}^{2+}})}$$

where $E_{\text{cell}}^{\circ} = E_{\text{Ni}^{2+} \mid \text{Ni}}^{\circ} - E_{\text{OH}^- \mid \text{H}_2 \mid \text{Pt}}^{\circ}$



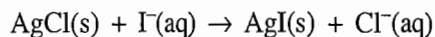
The given reaction may be considered to involve the following two half-cell reactions:



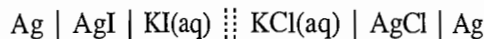
Thus, we have:

<i>Electrode</i>	<i>Reduction reaction</i>	
Right	$\text{AgCl}(\text{s}) + \text{e}^- \rightarrow \text{Ag}(\text{s}) + \text{Cl}^-(\text{aq})$	(i)
Left	$\text{AgI}(\text{s}) + \text{e}^- \rightarrow \text{Ag}(\text{s}) + \text{I}^-(\text{aq})$	(ii)

Subtracting Eq. (ii) from Eq. (i), we have



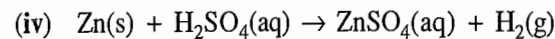
The required cell would be



and the cell potential will be given by

$$E_{\text{cell}} = E_{\text{cell}}^{\circ} - \frac{RT}{F} \ln \frac{a_{\text{Cl}^-}}{a_{\text{I}^-}}$$

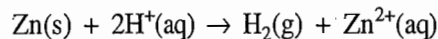
where $E_{\text{cell}}^{\circ} = E_{\text{Cl}^- \mid \text{AgCl} \mid \text{Ag}}^{\circ} - E_{\text{I}^- \mid \text{AgI} \mid \text{Ag}}^{\circ}$



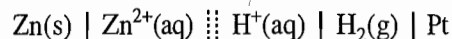
Zn is oxidized to Zn^{2+} and H^+ is reduced to H_2 . Thus, we have:

<i>Electrode</i>	<i>Reduction reaction</i>	
Right	$2\text{H}^+(\text{aq}) + 2\text{e}^- \rightarrow \text{H}_2(\text{g})$	(i)
Left	$\text{Zn}^{2+}(\text{aq}) + 2\text{e}^- \rightarrow \text{Zn}(\text{s})$	(ii)

Subtracting Eq. (ii) from Eq. (i), we have



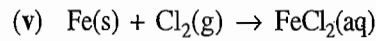
The cell would be



and the cell potential will be given by

$$E_{\text{cell}} = E_{\text{cell}}^{\circ} - \frac{RT}{2F} \ln \frac{(f_{\text{H}_2} f^{\circ})(a_{\text{Zn}^{2+}})}{(a_{\text{H}^+})^2}$$

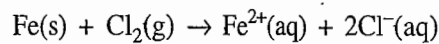
where $E_{\text{cell}}^{\circ} = E_{\text{H}^+ | \text{H}_2 | \text{Pt}}^{\circ} - E_{\text{Zn}^{2+} | \text{Zn}}^{\circ}$



Fe is oxidized to Fe^{2+} and Cl_2 is reduced to Cl^- . Thus, we have:

Electrode	Reduction reaction	
Right	$\text{Cl}_2(\text{g}) + 2\text{e}^- \rightarrow 2\text{Cl}^-(\text{aq})$	(i)
Left	$\text{Fe}^{2+}(\text{aq}) + 2\text{e}^- \rightarrow \text{Fe(s)}$	(ii)

Subtracting Eq. (ii) from Eq. (i), we have



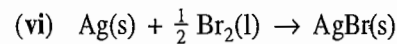
The cell would be



and the cell potential is given by

$$E_{\text{cell}} = E_{\text{cell}}^{\circ} - \frac{RT}{2F} \ln \frac{(a_{\text{Fe}^{2+}})(a_{\text{Cl}^-})^2}{(f_{\text{Cl}_2} f^{\circ})}$$

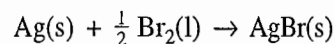
with $E_{\text{cell}}^{\circ} = E_{\text{Cl}^- | \text{Cl}_2 | \text{Pt}}^{\circ} - E_{\text{Fe}^{2+} | \text{Fe}}^{\circ}$



Ag in the presence of Br^- is changed to AgBr and Br_2 is changed to Br^- , thus, we have:

Electrode	Reduction reaction	
Right	$\frac{1}{2} \text{Br}_2(\text{l}) + \text{e}^- \rightarrow \text{Br}^-(\text{aq})$	(i)
Left	$\text{AgBr(s)} + \text{e}^- \rightarrow \text{Ag(s)} + \text{Br}^-(\text{aq})$	(ii)

Subtracting Eq. (ii) from Eq. (i), we have

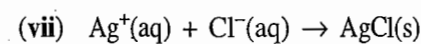


The required cell would be



and the cell potential is given by

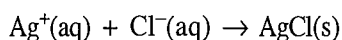
$$E_{\text{cell}} = E_{\text{cell}}^{\circ} = E_{\text{Br}^- | \text{Br}_2 | \text{Pt}}^{\circ} - E_{\text{Br}^- | \text{AgBr} | \text{Ag}}^{\circ}$$



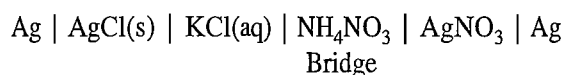
This overall reaction may be produced through the following two half-cell reactions:

<i>Electrode</i>	<i>Reduction reaction</i>	
Right	$\text{Ag}^+(\text{aq}) + \text{e}^- \rightarrow \text{Ag}(\text{s})$	(i)
Left	$\text{AgCl}(\text{s}) + \text{e}^- \rightarrow \text{Ag}(\text{s}) + \text{Cl}^-(\text{aq})$	(ii)

Subtracting Eq. (ii) from Eq. (i), we have



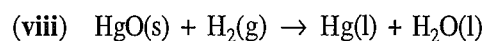
The required cell would be



and the cell potential is given by

$$E_{\text{cell}} = E_{\text{cell}}^{\circ} - \frac{RT}{F} \ln \frac{1}{(a_{\text{Ag}^+})(a_{\text{Cl}^-})}$$

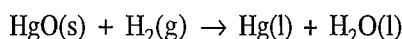
where $E_{\text{cell}}^{\circ} = E_{\text{Ag}^+ \mid \text{Ag}}^{\circ} - E_{\text{Cl}^- \mid \text{AgCl} \mid \text{Ag}}^{\circ}$



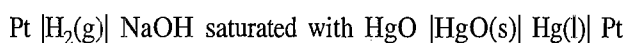
This overall reaction may be produced through the following two half-cell reactions:

<i>Electrode</i>	<i>Reduction reaction</i>	
Right	$\text{HgO}(\text{s}) + \text{H}_2\text{O}(\text{l}) + 2\text{e}^- \rightarrow \text{Hg}(\text{l}) + 2\text{OH}^-(\text{aq})$	(i)
Left	$2\text{H}_2\text{O}(\text{l}) + 2\text{e}^- \rightarrow \text{H}_2(\text{g}) + 2\text{OH}^-(\text{aq})$	(ii)

Subtracting Eq. (ii) from Eq. (i), we have



The required cell would be



and the cell potential is given by

$$E_{\text{cell}} = E_{\text{cell}}^{\circ} - \frac{RT}{2F} \ln \frac{1}{(f_{\text{H}_2}/f^{\circ})}$$

with $E_{\text{cell}}^{\circ} = E_{\text{OH}^- \mid \text{HgO} \mid \text{Hg}}^{\circ} - E_{\text{OH}^- \mid \text{H}_2 \mid \text{Pt}}^{\circ}$

8.8 DETERMINATION OF STANDARD POTENTIALS

Expression of Cell Potential

At the very outset, it may be stated that the absolute value for the reduction potential of any single half-reaction cannot be determined experimentally or theoretically since the activity of single ionic species, such as hydrogen ion or

chloride ion, can never be known exactly. However, difference between the two reduction potentials can be determined by constructing a suitable cell and then determining its emf experimentally. By definition, the emf of a cell is given by

$$E_{\text{cell}} = E_{\text{R}} - E_{\text{L}} \quad (8.8.1)$$

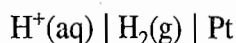
where E_{R} and E_{L} are the reduction potentials of right and left electrodes, respectively.

Reference Half-Cell

If E_{L} is arbitrarily assigned some value, then the value of E_{R} can be determined using the expression

$$E_{\text{R}} = E_{\text{cell}} + E_{\text{L}} \quad (8.8.2)$$

In the study of electrochemical cell, the *hydrogen-hydrogen ion half-cell has been adopted as the reference half-cell and its standard potential has been assigned the value zero at all temperatures*. By standard potential of hydrogen-hydrogen ion half-cell, we mean that the hydrogen ion and hydrogen gas involved in half-cell



are present in their standard states of unit activity and unit fugacity (taken as 1 bar pressure), respectively.

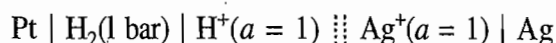
Thus, if we have a cell in which the left half-cell is the standard hydrogen-hydrogen ion half-cell and the right half-cell constitutes the electrode system whose potential relative to that of standard hydrogen-hydrogen ion half-cell is required, then according to Eq. (8.8.2), we have

$$\begin{aligned} E_{\text{R}} &= E_{\text{cell}} + 0 \\ &= E_{\text{cell}} \end{aligned}$$

that is, the reduction potential of the given half-cell is numerically equal to the emf of the cell. Proceeding in this way, the standard potentials of other half-cell relative to the standard hydrogen-hydrogen ion half-cell can be determined.

Illustrations

To illustrate the procedure, we cite below two typical examples of silver-silver ion and zinc-zinc ion half-cells. If the silver-silver ion half-cell is coupled with the standard hydrogen-hydrogen ion half-cell (to be kept on left side), we get a cell



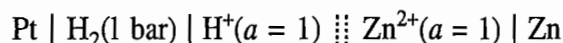
The standard emf of the cell is given by

$$E_{\text{cell}}^{\circ} = E_{\text{Ag}^+ \mid \text{Ag}}^{\circ} - E_{\text{H}^+ \mid \text{H}_2 \mid \text{Pt}}^{\circ}$$

and its value as determined experimentally is found to be 0.799 1 V. Hence

$$\begin{aligned} E_{\text{Ag}^+ \mid \text{Ag}}^{\circ} &= E_{\text{cell}}^{\circ} + E_{\text{H}^+ \mid \text{H}_2 \mid \text{Pt}}^{\circ} \\ &= E_{\text{cell}}^{\circ} = 0.799 \text{ 1 V} \end{aligned}$$

Taking the example of zinc-zinc ion half-cell, we have



Its emf as determined experimentally is found to be -0.763 V . Hence

$$\begin{aligned} E_{\text{Zn}^{2+} \mid \text{Zn}}^{\circ} &= E_{\text{cell}}^{\circ} + E_{\text{H}^+ \mid \text{H}_2 \mid \text{Pt}}^{\circ} \\ &= E_{\text{cell}}^{\circ} = -0.763 \text{ V} \end{aligned}$$

Note that the cell emf is negative. It implies that the cell as written above will not produce spontaneous reaction. In fact, while determining emf of the cell, the electrode of zinc-zinc ion half-cell will serve as the negative terminal and Pt electrode of hydrogen-hydrogen ion half-cell as the positive terminal, in order to get a positive potential of 0.763 V . Since the cell has been written in the reverse direction (i.e. Pt electrode as the negative terminal and Zn as the positive terminal), it follows that the emf of the written cell will be -0.763 V .

Values of Standard Potentials

Table 8.8.1 records the standard potentials for some of the half-cell reactions at 298.15 K along with their respective half-cell assembly.[†]

Important Comment

From the two examples cited above, it may be concluded that if an electrode of a half-cell with a positive reduction potential is coupled with the standard hydrogen-hydrogen ion half-cell, it will constitute the positive terminal of the cell in order to have a spontaneous cell reaction. Similarly, an electrode of a half-cell with a negative reduction potential will constitute the negative terminal of the cell so as to get the spontaneous cell reaction. In other words, the nature of the electrode of half-cell (whether positive or negative) in a cell in which the other half-cell is the standard hydrogen-hydrogen ion half-cell is determined by the sign of the reduction potential of the given half-cell.

8.9 SIGNIFICANCE OF STANDARD HALF-CELL POTENTIALS

Significance of Half-Cell Potentials

The standard half-cell potential of the reaction



is a measure of reduction tendency of M^{n+} to M relative to that of H^+ to H_2 . The standard potential of the latter reaction, i.e.



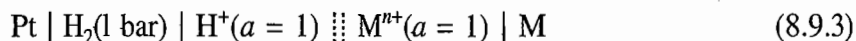
is taken to be zero (reference level). A positive potential implies that the ion M^{n+} can be more easily reduced to M relative to that of H^+ ion to H_2 . On the other hand, a negative potential implies that the ion M^{n+} is more difficult to reduce as compared to the H^+ ion.

[†]The representation of a half-cell corresponds to the right half-cell of the cell diagram in which the left half-cell is the hydrogen-hydrogen ion half-cell.

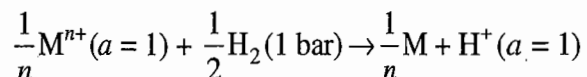
Table 8.8.1 Standard Half-cell Potentials at 298.15 K

Half-cell reaction	E°/V	Half-cell representation
$\text{Li}^+ + \text{e}^- \rightarrow \text{Li}$	- 3.045	$\text{Li}^+ \text{Li}$
$\text{K}^+ + \text{e}^- \rightarrow \text{K}$	- 2.925	$\text{K}^+ \text{K}$
$\text{Na}^+ + \text{e}^- \rightarrow \text{Na}$	- 2.714	$\text{Na}^+ \text{Na}$
$\text{Mg}^{2+} + 2\text{e}^- \rightarrow \text{Mg}$	- 2.37	$\text{Mg}^{2+} \text{Mg}$
$\text{H}_2 + 2\text{e}^- \rightarrow 2\text{H}^-$	- 2.25	$\text{H}^- \text{H}_2 \text{Pt}$
$\text{Al}^{3+} + 3\text{e}^- \rightarrow \text{Al}$	- 1.66	$\text{Al}^{3+} \text{Al}$
$2\text{H}_2\text{O} + 2\text{e}^- \rightarrow \text{H}_2 + 2\text{OH}^-$	- 0.828	$\text{OH}^- \text{H}_2 \text{Pt}$
$\text{Zn}^{2+} + 2\text{e}^- \rightarrow \text{Zn}$	- 0.763	$\text{Zn}^{2+} \text{Zn}$
$\text{Cd}(\text{NH}_3)_4^{2+} + 2\text{e}^- \rightarrow \text{Cd} + 4\text{NH}_3$	- 0.61	$\text{Cd}(\text{NH}_3)_4^{2+}, \text{NH}_3 \text{Cd}$
$2\text{CO}_2 + 2\text{H}^+ + 2\text{e}^- \rightarrow \text{H}_2\text{C}_2\text{O}_4$	- 0.49	$\text{H}_2\text{C}_2\text{O}_4, \text{H}^+ \text{CO}_2 \text{Pt}$
$\text{Fe}^{2+} + 2\text{e}^- \rightarrow \text{Fe}$	- 0.44	$\text{Fe}^{2+} \text{Fe}$
$\text{Cr}^{3+} + \text{e}^- \rightarrow \text{Cr}^{2+}$	- 0.41	$\text{Cr}^{3+}, \text{Cr}^{2+} \text{Pt}$
$\text{Cd}^{2+} + 2\text{e}^- \rightarrow \text{Cd}$	- 0.40	$\text{Cd}^{2+} \text{Cd}$
$\text{Ag}(\text{CN})_2^- + \text{e}^- \rightarrow \text{Ag} + 2\text{CN}^-$	- 0.31	$\text{Ag}(\text{CN})_2^-, \text{CN}^- \text{Ag}$
$\text{Cu}(\text{OH})_2 + 2\text{e}^- \rightarrow \text{Cu} + 2\text{OH}^-$	- 0.224	$\text{OH}^-, \text{Cu}(\text{OH})_2 \text{Cu}$
$\text{AgI} + \text{e}^- \rightarrow \text{Ag} + \text{I}^-$	- 0.151	$\text{I}^- \text{AgI} \text{Ag}$
$\text{Sn}^{2+} + 2\text{e}^- \rightarrow \text{Sn}$	- 0.136	$\text{Sn}^{2+} \text{Sn}$
$\text{Pb}^{2+} + 2\text{e}^- \rightarrow \text{Pb}$	- 0.126	$\text{Pb}^{2+} \text{Pb}$
$\text{Cu}(\text{NH}_3)_4^{2+} + 2\text{e}^- \rightarrow \text{Cu} + 4\text{NH}_3$	- 0.12	$\text{Cu}(\text{NH}_3)_4^{2+}, \text{NH}_3 \text{Cu}$
$\text{Fe}^{3+} + 3\text{e}^- \rightarrow \text{Fe}$	- 0.036	$\text{Fe}^{3+} \text{Fe}$
$2\text{H}^+ + 2\text{e}^- \rightarrow \text{H}_2$	0.000	$\text{H}^+ \text{H}_2 \text{Pt}$
$\text{AgBr} + \text{e}^- \rightarrow \text{Ag} + \text{Br}^-$	0.095	$\text{Br}^- \text{AgBr} \text{Ag}$
$\text{Cu}^{2+} + \text{e}^- \rightarrow \text{Cu}^+$	0.153	$\text{Cu}^{2+}, \text{Cu}^+ \text{Pt}$
$\text{Sn}^{4+} + 2\text{e}^- \rightarrow \text{Sn}^{2+}$	0.15	$\text{Sn}^{4+}, \text{Sn}^{2+} \text{Pt}$
$\text{AgCl} + \text{e}^- \rightarrow \text{Ag} + \text{Cl}^-$	0.222	$\text{Cl}^- \text{AgCl} \text{Ag}$
$\text{Hg}_2\text{Cl}_2 + 2\text{e}^- \rightarrow 2\text{Hg} + 2\text{Cl}^-$	0.267 6	$\text{Cl}^- \text{Hg}_2\text{Cl}_2 \text{Hg}(\text{Pt})$
$\text{Cu}^{2+} + 2\text{e}^- \rightarrow \text{Cu}$	0.337	$\text{Cu}^{2+} \text{Cu}$
$\text{Ag}(\text{NH}_3)_2^+ + \text{e}^- \rightarrow \text{Ag} + 2\text{NH}_3$	0.373	$\text{Ag}(\text{NH}_3)_2^+, \text{NH}_3 \text{Ag}$
$\text{O}_2(\text{g}) + 2\text{H}_2\text{O} + 4\text{e}^- \rightarrow 4\text{OH}^-$	0.401	$\text{OH}^- \text{O}_2 \text{Pt}$
$\text{Cu}^+ + \text{e}^- \rightarrow \text{Cu}$	0.521	$\text{Cu}^+ \text{Cu}$
$\frac{1}{2} \text{I}_2 + \text{e}^- \rightarrow \text{I}^-$	0.535 5	$\text{I}_2, \text{I}^- \text{Pt}$
$\text{Fe}^{3+} + \text{e}^- \rightarrow \text{Fe}^{2+}$	0.771	$\text{Fe}^{3+}, \text{Fe}^{2+} \text{Pt}$
$\frac{1}{2} \text{Hg}_2^{2+} + \text{e}^- \rightarrow \text{Hg}$	0.789	$\text{Hg}_2^{2+} \text{Hg}(\text{Pt})$
$\text{Ag}^+ + \text{e}^- \rightarrow \text{Ag}$	0.799 1	$\text{Ag}^+ \text{Ag}$
$\text{Br}_2(\text{l}) + 2\text{e}^- \rightarrow 2\text{Br}^-$	1.086 2	$\text{Br}^-, \text{Br}_2 \text{Pt}$
$\text{O}_2 + 4\text{H}^+ + 4\text{e}^- \rightarrow 2\text{H}_2\text{O}$	1.229	$\text{H}^+ \text{O}_2 \text{Pt}$
$\text{Cr}_2\text{O}_7^{2-} + 14\text{H}^+ + 6\text{e}^- \rightarrow 2\text{Cr}^{3+} + 7\text{H}_2\text{O}$	1.33	$\text{Cr}_2\text{O}_7^{2-}, \text{Cr}^{3+}, \text{H}^+ \text{Pt}$
$\frac{1}{2} \text{Cl}_2(\text{g}) + \text{e}^- \rightarrow \text{Cl}^-$	1.359 5	$\text{Cl}^- \text{Cl}_2 \text{Pt}$
$\text{Ce}^{4+} + \text{e}^- \rightarrow \text{Ce}^{3+} (1 \text{ mol dm}^{-3} \text{ H}_2\text{SO}_4)$	1.44	$\text{Ce}^{4+}, \text{Ce}^{3+} \text{Pt}$
$\text{Au}^{3+} + 3\text{e}^- \rightarrow \text{Au}$	1.455	$\text{Au}^{3+} \text{Au}$
$\text{MnO}_4^- + 8\text{H}^+ + 5\text{e}^- \rightarrow \text{Mn}^{2+} + 4\text{H}_2\text{O}$	1.51	$\text{MnO}_4^-, \text{Mn}^{2+}, \text{H}^+ \text{Pt}$
$\text{Co}^{3+} + \text{e}^- \rightarrow \text{Co}^{2+}$	1.82	$\text{Co}^{3+}, \text{Co}^{2+} \text{Pt}$

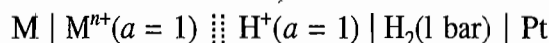
If $E_{M^+|M}^\circ$ is positive, then the cell



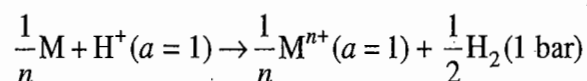
will have a positive emf and, therefore, the cell reaction



will be spontaneous and hence M^{n+} can be reduced to M by hydrogen gas. On the other hand, if $E_{M^+|M}^\circ$ is negative, the cell emf will also be negative and hence the cell reaction will not be spontaneous. Thus, M^{n+} cannot be reduced to M by hydrogen gas. In the present case, if the cell as given by Eq. (8.9.3) is written in the reverse direction, i.e.



the cell will have a positive emf and hence the reaction



will be a spontaneous reaction. Thus, H^+ ions can be reduced to hydrogen gas by the metal M.

Illustration

Taking the typical examples of $\text{Ag}^+|\text{Ag}$ and $\text{Zn}^{2+}|\text{Zn}$ half-cells, we find that

$$E_{\text{Ag}^+|\text{Ag}}^\circ = 0.799 \text{ V} \quad \text{and} \quad E_{\text{Zn}^{2+}|\text{Zn}}^\circ = -0.763 \text{ V}$$

Hence we conclude that under standard conditions, Ag^+ ions can be reduced to Ag by hydrogen gas whereas Zn^{2+} cannot be reduced. Alternatively, zinc metal can reduce H^+ ions to hydrogen gas whereas silver metal cannot reduce H^+ ions.

Active metals such as Zn, Na and Mg have highly negative standard potentials indicating that their compounds are not reduced by hydrogen but rather the metal itself can be oxidized by H^+ to yield H_2 . Noble metals such as Cu, Ag and Au have positive E° s and hence their compounds are readily reduced by H_2 gas; the metals themselves are not oxidized in the presence of H^+ ions.

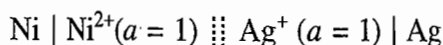
Making a Galvanic Cell

Table 8.8.1 records the values of standard potentials in increasing order, i.e. at the top we have the most negative potential with the least tendency for reduction and at the bottom we have the most positive potential with maximum tendency for reduction. If a pair of half-cells is coupled to make a cell, the half-cell with more positive potential will constitute the positive terminal whereas the half-cell with less positive potential will constitute the negative terminal. In other words, the half-cell of the higher positive potential (which stands lower in the table) will constitute the right half-cell with the reduction half-cell reaction and the half-cell of less positive potential will constitute the left half-cell with the oxidation half-

cell reaction. Consider, for example, the two half-cells $\text{Ni}^{2+} | \text{Ni}$ and $\text{Ag}^+ | \text{Ag}$. Their reduction potentials are

$$E_{\text{Ni}^{2+}|\text{Ni}}^{\circ} = -2.250 \text{ V} \quad \text{and} \quad E_{\text{Ag}^+|\text{Ag}}^{\circ} = 0.799 \text{ V}$$

Since $E_{\text{Ag}^+|\text{Ag}}^{\circ}$ is more positive than $E_{\text{Ni}^{2+}|\text{Ni}}^{\circ}$, it is obvious that silver electrode will constitute the positive terminal (i.e. right half-cell) and nickel electrode as the negative terminal (i.e. left half-cell). Thus the required cell with the positive emf and hence spontaneous cell reaction would be



Example 8.9.1

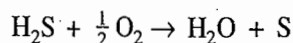
In acid solution the following are true under the standard conditions.

- H_2S will react with oxygen to give H_2O and sulphur.
- H_2S will not react in the corresponding reaction with selenium and tellurium.
- H_2Se will react with sulphur giving to H_2S and Se but not react with tellurium.

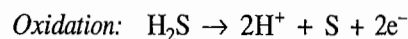
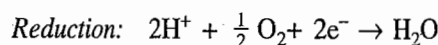
Arrange the hydrides H_2O , H_2S , H_2Se and H_2Te in order of their tendency to lose electrons to form the corresponding elements.

Solution

- The reaction is



This can be broken into two partial reactions:



A cell corresponding to the given reaction can be constructed with the oxidation reaction at anode and reduction reaction at cathode. The cell potential would be

$$E_{\text{cell}}^{\circ} = E_{\text{R}}^{\circ} - E_{\text{L}}^{\circ} = E_{\text{H}^+|\text{O}_2|\text{Pt}}^{\circ} - E_{\text{H}^+|\text{H}_2\text{S}|\text{S}}^{\circ}$$

Since the cell reaction is spontaneous, it follows that

$$E_{\text{H}^+|\text{O}_2|\text{Pt}}^{\circ} > E_{\text{H}^+|\text{H}_2\text{S}|\text{S}}^{\circ}$$

- Proceeding similarly as in the part (a), we have

$$E_{\text{H}^+|\text{H}_2\text{S}|\text{S}}^{\circ} > E_{\text{H}^+|\text{H}_2\text{Se}|\text{Se}}^{\circ} \quad \text{and} \quad E_{\text{H}^+|\text{H}_2\text{S}|\text{S}}^{\circ} > E_{\text{H}^+|\text{H}_2\text{Te}|\text{Te}}^{\circ}$$

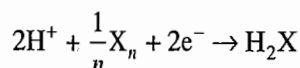
- Similarly in this case, we have

$$E_{\text{H}^+|\text{H}_2\text{S}|\text{S}}^{\circ} > E_{\text{H}^+|\text{H}_2\text{Se}|\text{Se}}^{\circ} \quad \text{and} \quad E_{\text{H}^+|\text{H}_2\text{Se}|\text{Se}}^{\circ} > E_{\text{H}^+|\text{H}_2\text{Te}|\text{Te}}^{\circ}$$

Arranging the above reduction potentials in the decreasing order, we get

$$E_{\text{H}^+|\text{O}_2|\text{Pt}}^{\circ} > E_{\text{H}^+|\text{H}_2\text{S}|\text{S}}^{\circ} > E_{\text{H}^+|\text{H}_2\text{Se}|\text{Se}}^{\circ} > E_{\text{H}^+|\text{H}_2\text{Te}|\text{Te}}^{\circ}$$

The above order implies that the tendency for the reduction reaction



to take place is the greatest for oxygen and least for Te. The tendency for the reverse reaction, i.e. the oxidation of hydride to the corresponding element will be greatest for H_2Te and least for H_2O .

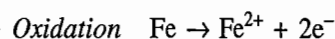
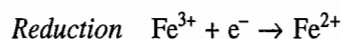
Example 8.9.2

Answer whether under standard conditions the following reactions are possible or not.

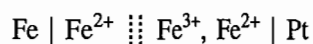
- (i) Will Fe reduce Fe^{3+} to Fe^{2+} ?
- (ii) Will the permanganate ion MnO_4^- liberate O_2 from water in the presence of an acid?
- (iii) Will O_2 oxidize gold to $\text{Au}(\text{CN})_2^-$ in the presence of CN^- and OH^- ions?
- (iv) Would you use silver spoon to stir a solution of $\text{Cu}(\text{NO}_3)_2$?
- (v) Will ceric sulphate react with KI?
- (vi) Will lead react with AgNO_3 solution?
- (vii) Will permanganate ions in acidic medium oxidize oxalic acid?
- (viii) Will dichromate ions in acidic medium oxidize Fe^{2+} to Fe^{3+} ?
- (ix) Will Fe^{3+} ions be reduced to Fe^{2+} by Sn^{2+} ions?
- (x) Will Fe^{3+} ions in acidic medium oxidize diphenylbenzidine and *N*-phenylanthranilic acid indicators?

Solution

- (i) The reactions would be



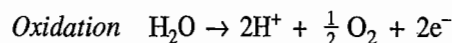
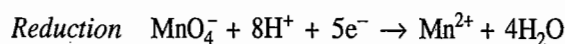
The cell giving these half-cell reactions would be



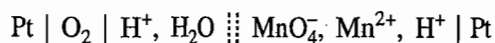
$$\text{with } E_{\text{cell}}^{\circ} = E_{\text{Fe}^{3+}, \text{Fe}^{2+} \mid \text{Pt}}^{\circ} - E_{\text{Fe}^{2+} \mid \text{Fe}}^{\circ} = 0.771 \text{ V} - (-0.440 \text{ V}) = 1.211 \text{ V}$$

Since E_{cell}° is positive, the reduction of Fe^{3+} to Fe^{2+} by Fe is possible,

- (ii) The reactions would be



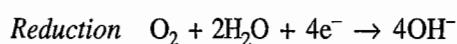
The cell giving these half-cell reactions would be



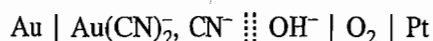
$$\text{with } E_{\text{cell}}^{\circ} = E_{\text{MnO}_4^-, \text{Mn}^{2+}, \text{H}^+ \mid \text{Pt}}^{\circ} - E_{\text{H}^+ \mid \text{O}_2 \mid \text{Pt}}^{\circ} = 1.510 \text{ V} - 1.223 \text{ V} = 0.287 \text{ V}$$

The reaction is possible.

- (iii) The reactions would be



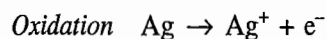
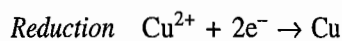
The cell giving these half-cell reactions would be



$$\text{with } E_{\text{cell}}^{\circ} = E_{\text{OH}^{-} | \text{O}_2 | \text{Pt}}^{\circ} - E_{\text{Au}(\text{CN})_2^{-}, \text{CN}^{-} | \text{Au}}^{\circ} = 0.401 \text{ V} - (-0.601 \text{ V}) = 1.002 \text{ V}$$

The reaction is possible.

(iv) The reactions would be



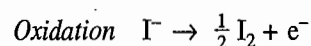
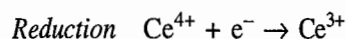
The cell giving these half-cell reactions would be



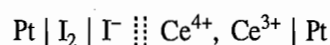
$$\text{with } E_{\text{cell}}^{\circ} = E_{\text{Cu}^{2+} | \text{Cu}}^{\circ} - E_{\text{Ag}^{+} | \text{Ag}}^{\circ} = 0.337 \text{ V} - 0.799 \text{ V} = -0.462 \text{ V}$$

Since E_{cell}° is negative, the cell reaction will not be spontaneous. Hence, we can use the silver spoon to stir a solution of $\text{Cu}(\text{NO}_3)_2$.

(v) The reactions would be



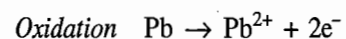
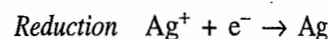
The cell giving these half-cell reactions would be



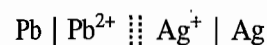
$$\text{with } E_{\text{cell}}^{\circ} = E_{\text{Ce}^{4+}, \text{Ce}^{3+} | \text{Pt}}^{\circ} - E_{\text{I}^{-} | \text{I}_2 | \text{Pt}}^{\circ} = 1.44 \text{ V} - 0.536 \text{ V} = 0.904 \text{ V}$$

The reaction is possible.

(vi) The reactions would be



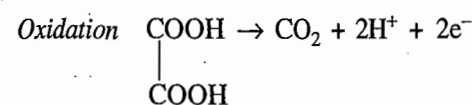
The cell giving these half-cell reactions would be



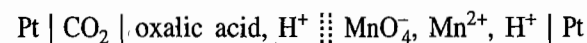
$$\text{with } E_{\text{cell}}^{\circ} = E_{\text{Ag}^{+} | \text{Ag}}^{\circ} - E_{\text{Pb}^{2+} | \text{Pb}}^{\circ} = 0.799 \text{ V} - (-0.126 \text{ V}) = 0.925 \text{ V}$$

The reaction is possible.

(vii) The reactions would be



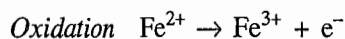
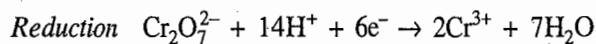
The cell giving these half-cell reactions would be



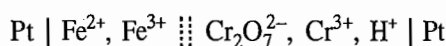
$$\begin{aligned} \text{with } E_{\text{cell}}^{\circ} &= E_{\text{MnO}_4^-, \text{Mn}^{2+}, \text{H}^+ | \text{Pt}}^{\circ} - E_{\text{oxalic acid}, \text{H}^+ | \text{CO}_2 | \text{Pt}}^{\circ} \\ &= 1.51 \text{ V} - (-0.49 \text{ V}) = 2.00 \text{ V} \end{aligned}$$

The reaction is possible.

(viii) The reactions would be



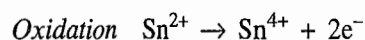
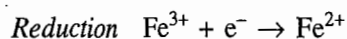
The cell giving these half-cell reactions would be



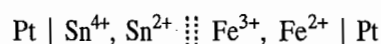
$$\begin{aligned} \text{with } E_{\text{cell}}^{\circ} &= E_{\text{Cr}_2\text{O}_7^{2-}, \text{Cr}^{3+}, \text{H}^+ | \text{Pt}}^{\circ} - E_{\text{Fe}^{3+}, \text{Fe}^{2+} | \text{Pt}}^{\circ} \\ &= 1.33 \text{ V} - 0.771 \text{ V} = 0.559 \text{ V} \end{aligned}$$

The reaction is possible.

(ix) The reactions would be



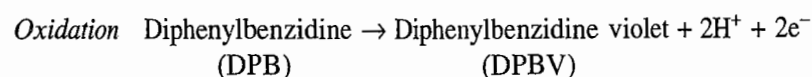
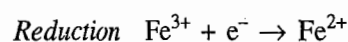
The cell giving these half-cell reactions would be



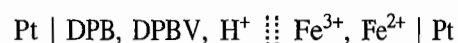
$$\begin{aligned} \text{with } E_{\text{cell}}^{\circ} &= E_{\text{Fe}^{3+}, \text{Fe}^{2+} | \text{Pt}}^{\circ} - E_{\text{Sn}^{4+}, \text{Sn}^{2+} | \text{Pt}}^{\circ} \\ &= 0.771 \text{ V} - 0.150 \text{ V} = 0.621 \text{ V} \end{aligned}$$

The reaction is possible.

(x) The reactions for the diphenylbenzidine indicator would be



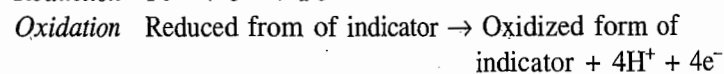
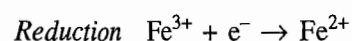
The cell producing these half-cell reactions would be



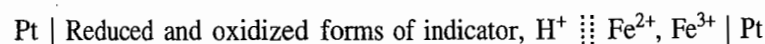
$$\begin{aligned} \text{with } E_{\text{cell}}^{\circ} &= E_{\text{Fe}^{3+}, \text{Fe}^{2+} | \text{Pt}}^{\circ} - E_{\text{DPB}, \text{DPBV}, \text{H}^+ | \text{Pt}}^{\circ} \\ &= 0.771 \text{ V} - 0.76 \text{ V} = 0.011 \text{ V} \end{aligned}$$

The reaction is possible.

The reactions for the *N*-phenylanthranilic acid would be



The cell producing these half-cell reactions would be

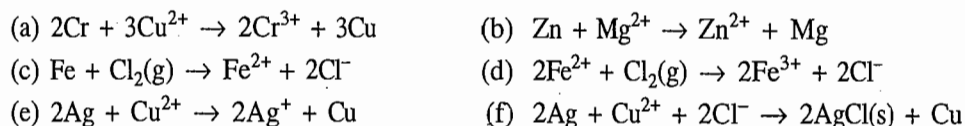


$$\begin{aligned} \text{with } E_{\text{cell}}^{\circ} &= E_{\text{Fe}^{3+}, \text{Fe}^{2+} | \text{Pt}}^{\circ} - E_{\text{indicator}}^{\circ} \\ &= 0.771 \text{ V} - 1.080 \text{ V} = -0.309 \text{ V} \end{aligned}$$

The reaction is not possible.

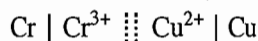
Example 8.9.3

Ascertain, with a little calculation, whether or not each of the following reactions will proceed to the forward or backward direction at 25 °C when all concentrations and pressures are unity.



Solution

(a) Cr is oxidized to Cr^{3+} and Cu^{2+} is reduced to Cu, the cell giving this reaction would be



$$\text{with } E_{\text{cell}}^{\circ} = E_{\text{Cu}^{2+} | \text{Cu}}^{\circ} - E_{\text{Cr}^{3+} | \text{Cr}}^{\circ} = 0.337 \text{ V} - (-0.774) = 1.111 \text{ V}$$

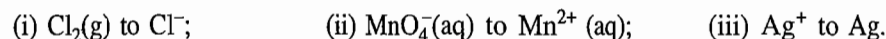
Since E° is positive, the given reaction will proceed in the forward direction.

We can proceed similarly for other reactions. The given reaction, the corresponding cell, E_{cell}° and conclusion regarding whether the reaction proceeds in the forward or backward direction are tabulated below:

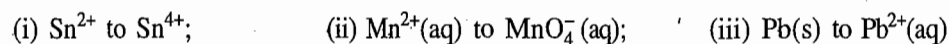
Reaction	Cell	$\frac{E_{\text{cell}}^{\circ}}{\text{V}}$	Direction of reaction
(b) $\text{Zn} + \text{Mg}^{2+} \rightarrow \text{Zn}^{2+} + \text{Mg}$	$\text{Zn} \text{Zn}^{2+} \text{Mg}^{2+} \text{Mg}$	$-2.37 - (-0.763)$	Backward
(c) $\text{Fe} + \text{Cl}_2(\text{g}) \rightarrow \text{Fe}^{2+} + 2\text{Cl}^-$	$\text{Fe} \text{Fe}^{2+} \text{Cl}^- \text{Cl}_2 \text{Pt}$	$1.359 - (-0.440)$	Forward
(d) $2\text{Fe}^{2+} + \text{Cl}_2(\text{g}) \rightarrow 2\text{Fe}^{3+} + 2\text{Cl}^-$	$\text{Pt} \text{Fe}^{2+}, \text{Fe}^{3+} \text{Cl}^- \text{Cl}_2 \text{Pt}$	$1.359 - 0.771$	Forward
(e) $2\text{Ag} + \text{Cu}^{2+} \rightarrow 2\text{Ag}^+ + \text{Cu}$	$\text{Ag} \text{Ag}^+ \text{Cu}^{2+} \text{Cu}$	$0.337 - 0.799$	Backward
(f) $2\text{Ag} + \text{Cu}^{2+} + 2\text{Cl}^- \rightarrow 2\text{AgCl}(\text{s}) + \text{Cu}$	$\text{Ag} \text{AgCl} \text{Cl}^- \text{Cu}^{2+} \text{Cu}$	$0.337 - 0.222$	Forward

Example 8.9.4

(a) Which of the following half-reactions will oxidize Cu(s) to Cu^{2+} under standard conditions?

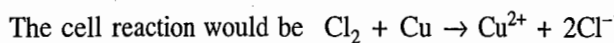


(b) Which of the following half-reactions will reduce Fe^{3+} to Fe^{2+} under standard conditions?



Solution

(a) Since Cu is to be oxidized to Cu^{2+} , it will constitute the left electrode. Each of the given reactions with which this oxidation reaction is to be carried out will constitute the right electrode. Thus, we have

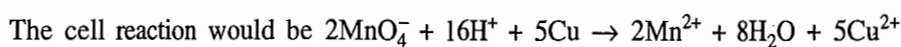

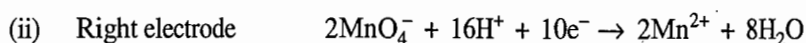


and its emf would be

$$E_{\text{cell}}^{\circ} = E_{\text{Cl}^- | \text{Cl}_2 | \text{Pt}}^{\circ} - E_{\text{Cu}^{2+} | \text{Cu}}^{\circ}$$

$$= 1.3595 \text{ V} - 0.337 \text{ V} = 1.0225 \text{ V}$$

Since E_{cell}° is positive, Cl_2 can oxidize Cu to Cu^{2+} .

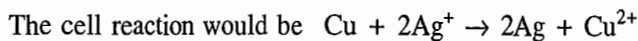


and its emf would be

$$E_{\text{cell}}^{\circ} = E_{\text{MnO}_4^-, \text{Mn}^{2+}, \text{H}^+ | \text{Pt}}^{\circ} - E_{\text{Cu}^{2+} | \text{Cu}}^{\circ}$$

$$= 1.510 \text{ V} - 0.337 \text{ V} = 1.173 \text{ V}$$

Thus oxidation of Cu to Cu^{2+} is possible.



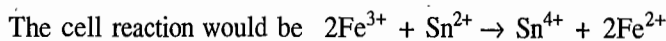
and its emf would be

$$E_{\text{cell}}^{\circ} = E_{\text{Ag}^+ | \text{Ag}}^{\circ} - E_{\text{Cu}^{2+} | \text{Cu}}^{\circ}$$

$$= 0.7791 \text{ V} - 0.337 \text{ V} = 0.4421 \text{ V}$$

Thus oxidation of Cu to Cu^{2+} is possible.

(b) In this case, we would have

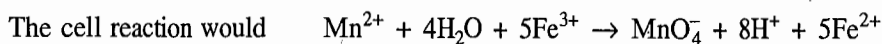
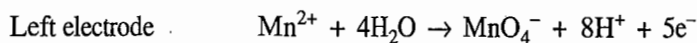


and its emf would be

$$E_{\text{cell}}^{\circ} = E_{\text{Fe}^{3+}, \text{Fe}^{2+} | \text{Pt}}^{\circ} - E_{\text{Sn}^{4+}, \text{Sn}^{2+} | \text{Pt}}^{\circ}$$

$$= 0.771 \text{ V} - 0.150 \text{ V} = 0.621 \text{ V}$$

Since E_{cell}° is positive, Sn^{2+} can reduce Fe^{3+} to Fe^{2+} .

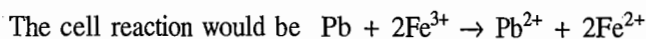


and its emf would be

$$E_{\text{cell}}^{\circ} = E_{\text{Fe}^{3+}, \text{Fe}^{2+} | \text{Pt}}^{\circ} - E_{\text{MnO}_4^-, \text{Mn}^{2+}, \text{H}^+ | \text{Pt}}^{\circ}$$

$$= 0.771 \text{ V} - 1.51 \text{ V} = -0.739 \text{ V}$$

Thus, reduction of Fe^{3+} to Fe^{2+} by Mn^{2+} ions is not possible.



and its emf would be

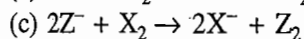
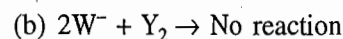
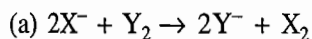
$$E_{\text{cell}}^{\circ} = E_{\text{Fe}^{3+}, \text{Fe}^{2+} | \text{Pt}}^{\circ} - E_{\text{Pb}^{2+} | \text{Pb}}^{\circ}$$

$$= 0.771 \text{ V} - (-0.126 \text{ V}) = 0.897 \text{ V}$$

Thus reduction of Fe^{3+} to Fe^{2+} by Pb is possible.

Example 8.9.5

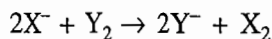
The four elements W, X, Y, Z form diatomic molecules and also form singly charged negative ions. The following observations are made in a series of experiments:




Use these observations to write equation for each half-reaction. Arrange them in the decreasing reduction potential series. Which ion is the strongest reducing agent? Which molecule is the strongest oxidizing agent?

Solution

(a) The given reaction is



Here Y_2 is reduced to Y^- and X^- is oxidized to X_2 , therefore, the half-reactions would be

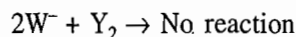


The cell emf would be $E_{\text{cell}} = E_{\text{Y}^- | \text{Y}_2 | \text{Pt}} - E_{\text{X}^- | \text{X}_2 | \text{Pt}}$

Since the reaction is feasible, E_{cell} will be positive. This yields

$$E_{\text{Y}^- | \text{Y}_2 | \text{Pt}} > E_{\text{X}^- | \text{X}_2 | \text{Pt}} \quad (1)$$

(b) We have



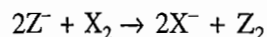
Had the reaction occurred, then Y_2 would have been reduced to Y^- and W^- would have been oxidized to W_2 . The cell emf for these half-reaction would be

$$E_{\text{cell}} = E_{\text{Y}^- | \text{Y}_2 | \text{Pt}} - E_{\text{W}^- | \text{W}_2 | \text{Pt}}$$


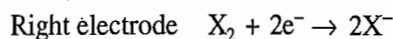
Since the reaction is not possible, it means E_{cell} is negative and thus

$$E_{\text{W}^- | \text{W}_2 | \text{Pt}} > E_{\text{Y}^- | \text{Y}_2 | \text{Pt}} \quad (2)$$

(c) Here, we have



X_2 is reduced to X^- and Z^- is oxidized to Z_2 . The half-cell reactions are



$$\text{The cell emf would be } E_{\text{cell}} = E_{X^- | X_2 | \text{Pt}} - E_{Z^- | Z_2 | \text{Pt}}$$

Since the reaction is possible, E_{cell} will be positive and hence

$$E_{X^- | X_2 | \text{Pt}} > E_{Z^- | Z_2 | \text{Pt}} \quad (3)$$

Combining Eqs (1), (2) and (3), we get

$$E_{W^- | W_2 | \text{Pt}} > E_{Y^- | Y_2 | \text{Pt}} > E_{X^- | X_2 | \text{Pt}} > E_{Z^- | Z_2 | \text{Pt}}$$

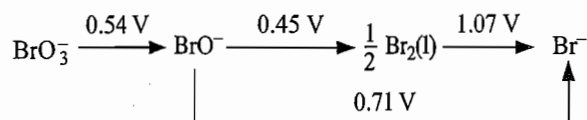
Out of these, W_2 will have the greatest tendency for reduction and, therefore, will be the strongest oxidizing agent. Z_2 will have the least tendency for reduction or Z^- will show the greatest tendency for oxidation. Thus, Z^- is the strongest reducing agent.

Example 8.9.6

Sometimes a species in a given oxidation state undergoes self-oxidation reduction reaction (disproportionation) in aqueous medium to give products of lower and higher oxidation states. For example, when Br_2 is added in an alkaline solution ($[\text{OH}^-] = 1 \text{ mol dm}^{-3}$), it disproportionates to give bromide and hypobromite ions. Rationalize the above results from the standard potentials given below:

- (i) $\frac{1}{2} \text{Br}_2 + e^- \rightarrow \text{Br}^- \quad E^\circ = 1.07 \text{ V}$
 (ii) $\text{BrO}^- + \text{H}_2\text{O} + e^- \rightarrow \frac{1}{2} \text{Br}_2 + 2\text{OH}^- \quad E^\circ = 0.45 \text{ V}$
 (iii) $2\text{BrO}^- + 2\text{H}_2\text{O} + 4e^- \rightarrow 2\text{Br}^- + 4\text{OH}^- \quad E^\circ = 0.71 \text{ V}$
 (iv) $\text{BrO}_3^- + 2\text{H}_2\text{O} + 4e^- \rightarrow \text{BrO}^- + 4\text{OH}^- \quad E^\circ = 0.54 \text{ V}$

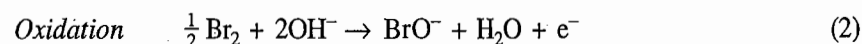
The above data may be presented in a condensed form as



What would be the overall reaction of Br_2 in an alkaline solution?

Solution

The self-reduction oxidation reactions of Br_2 are



The cell producing the above two half-cell reactions would be

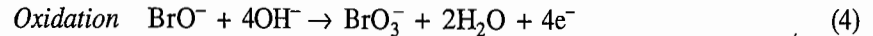
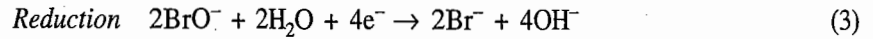


with the cell potential given as

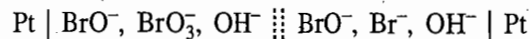
$$E_{\text{cell}}^\circ = E_{\text{R}}^\circ - E_{\text{L}}^\circ = 1.07 \text{ V} - 0.45 \text{ V} = 0.62 \text{ V}$$

Since the cell potential is positive, it is obvious that Br_2 can be converted to Br^- and BrO^- simultaneously. Hence, Br_2 disproportionates in the alkaline solution to give Br^- and BrO^- .

Similarly, the self-reduction oxidation reactions of BrO^- are



Thus, a cell producing the above two half-cell reactions would be



with the cell potential given as

$$E_{\text{cell}}^{\circ} = E_{\text{R}}^{\circ} - E_{\text{L}}^{\circ} \approx 0.71 \text{ V} - 0.54 \text{ V} = 0.17 \text{ V}$$

Since the cell potential is positive, it is obvious that BrO^- can be converted to Br^- and BrO_3^- simultaneously. Hence BrO^- disproportionates in alkaline solution to give Br^- and BrO_3^- .

The overall reaction of Br_2 in an alkaline solution may be obtained by adding the two disproportionation reactions.

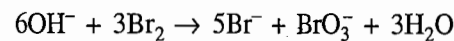
Disproportionate reaction of Br_2 Adding Eqs (1) and (2), we get



Disproportionate reaction of BrO^- Adding Eqs (3) and (4), we get

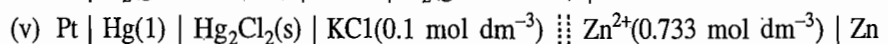
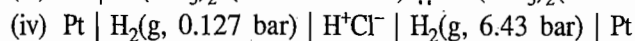
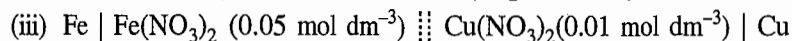
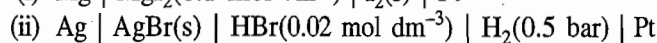
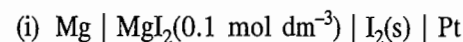


Hence multiplying Eq. (5) by 3 and then adding it to Eq. (6), we have



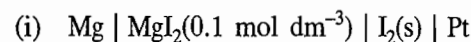
Example 8.9.7

Determine the cell reaction and E_{cell} for each of the following cells at 25 °C. Assume activity and fugacity equal to molar concentration and pressure (bar), respectively.



Solution

Throughout this chapter c° represents unit concentration and p° represents unit pressure,



We have

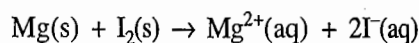
Electrode	Reduction reaction	Half-cell potential
Right	$\text{I}_2(\text{s}) + 2\text{e}^- \rightarrow 2\text{I}^-(\text{aq})$	$E_{\text{I}^- \mid \text{I}_2} = E_{\text{I}^- \mid \text{I}_2}^{\circ} - \frac{RT}{2F} \ln ([\text{I}^-]/c^\circ)^2$
Left	$\text{Mg}^{2+}(\text{aq}) + 2\text{e}^- \rightarrow \text{Mg}(\text{s})$	$E_{\text{Mg}^{2+} \mid \text{Mg}} = E_{\text{Mg}^{2+} \mid \text{Mg}}^{\circ} - \frac{RT}{2F} \ln \frac{1}{([\text{Mg}^{2+}]/c^\circ)}$

Since

cell reaction = reduction reaction at (right – left) electrode

and $E_{\text{cell}} = E_{\text{R}} - E_{\text{L}}$

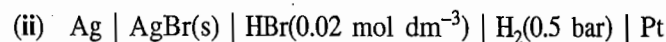
we have



$$E_{\text{cell}} = (E_{\text{I}^{-}|\text{I}_2}^{\circ} - E_{\text{Mg}^{2+}|\text{Mg}}^{\circ}) - \frac{RT}{2F} \ln \left[\left(\frac{[\text{Mg}^{2+}]}{c^{\circ}} \right) \left(\frac{[\text{I}^{-}]}{c^{\circ}} \right)^2 \right]$$

Substituting the data, we get

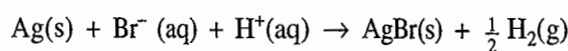
$$\begin{aligned} E_{\text{cell}} &= (0.535 \text{ V}) - (-2.363 \text{ V}) - \left(\frac{0.059 \text{ V}}{2} \right) \log (0.1 \times 0.2^2) \\ &= 2.898 \text{ V} + 0.0708 \text{ V} = 2.969 \text{ V} \end{aligned}$$



We have

<i>Electrode</i>	<i>Reduction reaction</i>
Right	$\text{H}^{+}(\text{aq}) + \text{e}^{-} \rightarrow \frac{1}{2} \text{H}_2(\text{g})$
Left	$\text{AgBr(s)} + \text{e}^{-} \rightarrow \text{Ag(s)} + \text{Br}^{-}(\text{aq})$

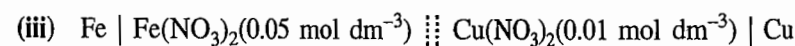
The cell reaction (reduction reaction at right electrode – reduction reaction at left electrode) is



Hence
$$E_{\text{cell}} = (E_{\text{H}^{+}|\text{H}_2|\text{Pt}}^{\circ} - E_{\text{Br}^{-}|\text{AgBr}|\text{Ag}}^{\circ}) - \frac{RT}{F} \ln \frac{(p_{\text{H}_2}/p^{\circ})^{1/2}}{\{[\text{H}^{+}]/c^{\circ}\} \{[\text{Br}^{-}]/c^{\circ}\}}$$

Substituting the data, we get

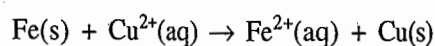
$$\begin{aligned} E_{\text{cell}} &= (0.0 \text{ V} - 0.071 \text{ V}) - (0.059 \text{ V}) \log \left(\frac{0.5^{1/2}}{0.02 \times 0.02} \right) \\ &= -0.071 \text{ V} - 0.192 \text{ V} = -0.263 \text{ V} \end{aligned}$$



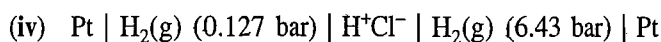
We have

<i>Electrode</i>	<i>Reduction reaction</i>
Right	$\text{Cu}^{2+}(\text{aq}) + 2\text{e}^{-} \rightarrow \text{Cu(s)}$
Left	$\text{Fe}^{2+}(\text{aq}) + 2\text{e}^{-} \rightarrow \text{Fe(s)}$

The cell reaction is



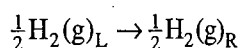
$$\begin{aligned}
 \text{Hence } E_{\text{cell}} &= (E_{\text{Cu}^{2+}|\text{Cu}}^{\circ} - E_{\text{Fe}^{2+}|\text{Fe}}^{\circ}) - \left(\frac{0.05915 \text{ V}}{2}\right) \log \left\{ \frac{[\text{Fe}^{2+}]/c^{\circ}}{[\text{Cu}^{2+}]/c^{\circ}} \right\} \\
 &= \{0.337 \text{ V} - (-0.441 \text{ V})\} - \left(\frac{0.05915 \text{ V}}{2}\right) \log \left(\frac{0.05}{0.01}\right) \\
 &= 0.778 \text{ V} - 0.0207 \text{ V} = 0.7573 \text{ V}
 \end{aligned}$$



We have

Electrode	Reduction reaction
Right	H ⁺ (aq) + e ⁻ → $\frac{1}{2}$ H ₂ (g) _R
Left	H ⁺ (aq) + e ⁻ → $\frac{1}{2}$ H ₂ (g) _L

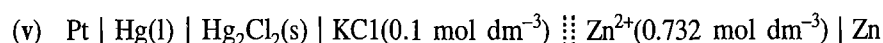
The cell reaction is



$$\begin{aligned}
 \text{Hence } E_{\text{cell}} &= -\left(\frac{0.05915 \text{ V}}{1}\right) \log \left\{ \frac{p_{\text{H}_2(\text{R})}/p^{\circ}}{p_{\text{H}_2(\text{L})}/p^{\circ}} \right\}^{1/2} \\
 &= -\left(\frac{0.05915 \text{ V}}{2}\right) \log \left\{ \frac{p_{\text{H}_2(\text{R})}/p^{\circ}}{p_{\text{H}_2(\text{L})}/p^{\circ}} \right\}
 \end{aligned}$$

Substituting the given data, we get

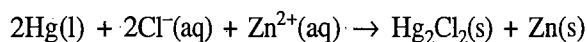
$$\begin{aligned}
 E_{\text{cell}} &= -\left(\frac{0.05915 \text{ V}}{2}\right) \log \left(\frac{6.43}{0.127}\right) \\
 &= -(0.02957 \text{ V})(1.7044) = -0.5037 \text{ V}
 \end{aligned}$$



We have

Electrode	Reduction reaction
Right	Zn ²⁺ (aq) + 2e ⁻ → Zn(s)
Left	Hg ₂ Cl ₂ (s) + 2e ⁻ → 2Hg(l) + 2Cl ⁻ (aq)

The cell reaction is



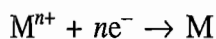
$$\begin{aligned}
 \text{Hence } E_{\text{cell}} &= (E_{\text{Zn}^{2+}|\text{Zn}}^{\circ} - E_{\text{Cl}^-|\text{Hg}_2\text{Cl}_2|\text{Hg}}^{\circ}) - \frac{RT}{2F} \ln \frac{1}{\{[\text{Cl}^-]/c^{\circ}\}^2 \{[\text{Zn}^{2+}]/c^{\circ}\}} \\
 &= (E_{\text{Zn}^{2+}|\text{Zn}}^{\circ} - E_{\text{Cl}^-|\text{Hg}_2\text{Cl}_2|\text{Hg}}^{\circ}) + \frac{RT}{2F} \ln (\{[\text{Cl}^-]/c^{\circ}\}^2 \{[\text{Zn}^{2+}]/c^{\circ}\})
 \end{aligned}$$

Substituting the data, we get

$$E_{\text{cell}} = (-0.763 \text{ V} - 0.337 \text{ V}) + \left(\frac{0.05915 \text{ V}}{2} \right) \log (0.1^2 \times 0.733) \\ = -1.1 \text{ V} - 0.063 \text{ V} = -1.163 \text{ V}$$

8.10 INFLUENCE OF IONIC ACTIVITY ON REDUCTION POTENTIAL

The reduction potential for the reaction



as given by the Nernst equation is

$$E_1 = E_{M^{n+} | M}^{\circ} - \frac{RT}{nF} \ln \left(\frac{1}{a_{M^{n+}}} \right) \quad (8.10.1)$$

From Eq. (8.10.1), it follows that the reduction potential $E_{M^{n+} | M}$ depends on the activity of M^{n+} ; it increases as the activity of M^{n+} is increased. If the activity of M^{n+} is decreased to one-tenth of its original activity, then the reduction potential becomes

$$E_2 = E_{M^{n+} | M}^{\circ} - \frac{RT}{nF} \ln \left(\frac{1}{0.1 a_{M^{n+}}} \right) \quad (8.10.2)$$

The resulting change in potential is given by

$$E_2 - E_1 = -\frac{RT}{nF} \ln \left(\frac{1}{0.1 a_{M^{n+}}} \right) + \frac{RT}{nF} \ln \left(\frac{1}{a_{M^{n+}}} \right) \\ = -\frac{RT}{nF} \ln 10 = -\frac{2.303RT}{nF} \quad (8.10.3)$$

At 298 K, we have

$$E_2 - E_1 = -\frac{(0.0592 \text{ V})}{n} \quad (8.10.4)$$

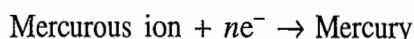
Thus every ten-fold decrease in the activity of cation produces a decrease of $(0.0592/n)$ volt of the reduction potential, where n is the valence of the cation. For univalent cations n is 1, and hence reduction potential decreases by a factor of 0.0592 V. For bivalent cations n is 2, and hence reduction potential decreases by a factor of $(0.0592/2)$ V, i.e. 0.0296 V. The magnitude of reduction potential will change by the same factor $(= (0.0592 \text{ V})/n)$ for every ten-fold change in the activity of cation. For a hundred-fold change in the activity; the change of potential will be $(2 \times 0.0592 \text{ V})/n$ volt and for a thousand-fold change in activity, the potential will change by a factor of $(3 \times 0.0592 \text{ V})/n$ volt.

The change in reduction potential on dilution is determined by the ratio of activities of ions before and after dilution. Thus, if two solutions containing

Molecular Formula of Mercurous salts

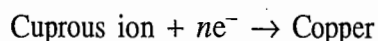
different amounts of a cation are diluted by the same factor (say, 10 times), the change in potential will be the same for both cases. For example, a change of concentration of a cation from 1.0 mol dm^{-3} to 0.1 mol dm^{-3} will produce the same change in potential as a decrease from $10^{-6} \text{ mol dm}^{-3}$ to $10^{-7} \text{ mol dm}^{-3}$ since the ratio of the two concentrations is the same, viz., 10 to 1.

The mercurous chloride is written as Hg_2Cl_2 instead of HgCl and hence the mercurous cation is represented as Hg_2^{2+} . One argument for writing the double formula for mercurous ion comes from the effect of dilution on the reduction potential of the half-cell reaction



It is found that the reduction potential changes by a factor of 0.029 6 V for a ten-fold change in concentration of mercurous ions. This result indicates that for mercurous ions n is 2, so that they carry two unit charges per ion and hence its formula must be written as Hg_2^{2+} and not as Hg^+ .

The above principle can also be extended to other ions. For example, cuprous iodide is written as Cu_2I_2 and not as CuI . This can be derived from the change of reduction potential with dilution for the reaction



Example 8.10.1

The emf of the cell

$\text{Hg} \mid \text{Mercurous nitrate (0.01 M)} \parallel \text{Mercurous nitrate (0.1 M)} \mid \text{Hg}$
is found to be 0.029 5 V at 25 °C. Determine the molecular formula of mercurous nitrate.

Solution

For the given cell, we have

Electrode	Reduction reaction	Reduction potential
Right	$\text{Hg}_n^{n+} + ne^- \rightarrow n\text{Hg}$	$E_R = E_R^\circ - \frac{RT}{nF} \ln \frac{1}{([\text{Hg}_n^{n+}]_R/c^\circ)}$ (i)
Left	$\text{Hg}_n^{n+} + ne^- \rightarrow n\text{Hg}$	$E_L = E_L^\circ - \frac{RT}{nF} \ln \frac{1}{([\text{Hg}_n^{n+}]_L/c^\circ)}$ (ii)

Since $E_{\text{cell}}^\circ = E_R^\circ - E_L^\circ$, on subtracting Eq. (ii) from Eq. (i), we get

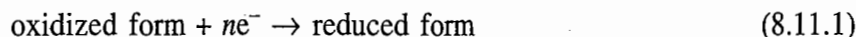
$$\begin{aligned} E_{\text{cell}} &= E_R - E_L = \frac{RT}{nF} \ln \frac{([\text{Hg}_n^{n+}]_R/c^\circ)}{([\text{Hg}_n^{n+}]_L/c^\circ)} = \frac{0.05915 \text{ V}}{n} \log \left(\frac{0.1}{0.01} \right) \\ &= \frac{0.05915 \text{ V}}{n} = 0.0295 \text{ V} \end{aligned}$$

Thus $n = 2$

Hence, the molecular formula is $\text{Hg}_2(\text{NO}_3)_2$.

8.11 EFFECT OF COMPLEX FORMATION ON REDUCTION POTENTIAL

In general, a reduction reaction may be represented as



The corresponding Nernst equation is

$$E = E^\circ - \frac{RT}{nF} \ln \left(\frac{[\text{reduced form}]/c^\circ}{[\text{oxidized form}]/c^\circ} \right) \quad (8.11.2)$$

Thus, if the concentration of the oxidized form is lowered by some means keeping the concentration of the reduced form unchanged, a decrease in the reduction potential will be observed. On the other hand, if the concentration of the reduced form is lowered, an increase in the reduction potential will be observed.

The number of electrons n involved in Eq. (8.11.1) can be determined by plotting a graph between E and $\ln ([\text{reduced form}]/[\text{oxidized form}])$. According to Eq. (8.11.2), a straight line will be obtained with a slope equal to $-RT/nF$. Hence knowing the slope and temperature T , the value of n can be determined.

Substance which forms the soluble complex (or precipitate) with the oxidized member of the couple (Eq. 8.11.1) will decrease the effective concentration of the oxidized form. Consequently, the reduction potential of the system is lowered. For example, if some CN^- is added to the half-cell $\text{Ag}^+ | \text{Ag}$, its reduction potential is decreased owing to the formation of complex between Ag^+ and CN^- ions. Thus, a metal which otherwise behaves as a noble metal may be converted into an active metal by lowering its reduction potential by some means. Hence whether a metal is a noble metal or an active metal, it all depends upon its environments. For example, ordinarily silver is a noble metal but in the presence of I^- , S^{2-} and CN^- ions, it becomes an active metal.

In an analogous way, if the concentration of the reduced form of the couple is lowered, the potential of the electrode is increased. If the reduced form is a metal, the most useful method of lowering its activity is to form an alloy of the metal with another metal. In amalgam electrodes, mercury is used for this purpose.

Example 8.11.1

A cell consists of a Pt electrode immersed in the redox system $\text{A}^{x+} \rightarrow \text{A}^{(x+n)+} + ne^-$ is combined with a saturated calomel electrode (right-side electrode). From the following data at 303 K, determine the value of n .

Per cent of reduced form	24.4	48.8	73.2	84.5
emf/V	0.101	0.116	0.129	0.139

The standard potential of the calomel electrode at 303 K is 0.238 V.

Solution

For the given half-cells, we have

$$\begin{aligned} 2.303 RT/F &= (2.303) (8.314 \text{ J K}^{-1} \text{ mol}^{-1}) (303 \text{ K}) / (96500 \text{ C mol}^{-1}) \\ &= 0.0601 \text{ V} \end{aligned}$$

Electrode	Reduction reaction	Expression of reduction potential
Right	$\text{Hg}_2\text{Cl}_2 + 2e^- \rightarrow 2\text{Hg} + 2\text{Cl}^-$	$E_R = E_R^\circ - \frac{0.0601 \text{ V}}{2} \log ([\text{Cl}^-]/c^\circ)^2$ (i)
Left	$\text{A}^{(x+n)+} + ne^- \rightarrow \text{A}^{x+}$	$E_L = E_L^\circ - \frac{0.0601 \text{ V}}{n} \log \frac{([\text{A}^{x+}]/c^\circ)}{([\text{A}^{(x+n)+}]/c^\circ)}$ (ii)

Subtracting Eq. (ii) from Eq. (i), we get

$$\begin{aligned}
 E_{\text{cell}} &= E_R - E_L \\
 &= \left(E_R^\circ - \frac{0.0601 \text{ V}}{2} \log ([\text{Cl}^-]/c^\circ)^2 \right) \\
 &\quad - \left(E_L^\circ - \frac{0.0601 \text{ V}}{n} \log \frac{([\text{A}^{x+}]/c^\circ)}{([\text{A}^{(x+n)+}]/c^\circ)} \right)
 \end{aligned}$$

$$\text{or } E_{\text{cell}} = \left(E_R^\circ - E_L^\circ - \frac{0.0601 \text{ V}}{2} \log ([\text{Cl}^-]/c^\circ)^2 \right) + \frac{0.0601 \text{ V}}{n} \log \frac{([\text{A}^{x+}]/c^\circ)}{([\text{A}^{(x+n)+}]/c^\circ)}$$

$$\text{or } E_{\text{cell}} = \text{constant} + \frac{0.0601 \text{ V}}{n} \log \frac{([\text{reduced form}]/c^\circ)}{([\text{oxidized form}]/c^\circ)}$$

If a plot is made between E_{cell} and $\log ([\text{reduced}]/[\text{oxidized}])$ a straight line will be obtained. The slope of the line will be equal to $0.0601 \text{ V}/n$ and hence the value of n can be calculated.

From the given data, we have

Per cent reduced form	24.0	48.8	73.2	85.4
$\log \left(\frac{[\text{reduced}]}{[\text{oxidized}]} \right)$	-0.491 1	-0.020 9	0.436 4	0.767 1
E_{cell}/V	0.101	0.116	0.129	0.139

A plot between E_{cell} and $\log ([\text{reduced}]/[\text{oxidized}])$ is shown in Fig. 8.11.1.

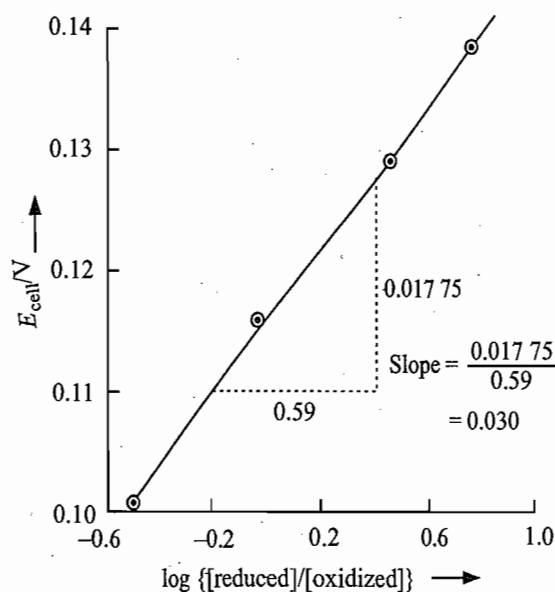


Fig. 8.11.1 Graph between E_{cell} and $\log ([\text{reduced}]/[\text{oxidized}])$

The slope of the line was found to be 0.030 V. Thus

$$\frac{0.0601 \text{ V}}{n} = 0.0300 \text{ V} \quad \text{which gives } n = \frac{0.0601}{0.0300} = 2$$

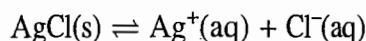
8.12 RELATION BETWEEN METAL-METAL ION HALF-CELL AND THE CORRESPONDING METAL-INSOLUBLE SALT-ANION HALF-CELL

Consider a silver electrode dipped into a solution of silver nitrate. The potential of the electrode as given by the Nernst equation is

$$E_{\text{Ag}^+|\text{Ag}} = E_{\text{Ag}^+|\text{Ag}}^\circ - \frac{RT}{F} \ln \left(\frac{1}{a_{\text{Ag}^+}} \right) \quad (8.12.1)$$

with $E_{\text{Ag}^+|\text{Ag}}^\circ = 0.799 \text{ V}$.

If now NaCl is added, the following equilibrium will be established:



with its standard solubility product K_{sp}° as

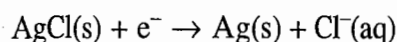
$$K_{\text{sp}}^\circ = (a_{\text{Ag}^+})(a_{\text{Cl}^-})$$

Multiplying and dividing the term within parantheses in Eq. (8.12.1) by a_{Cl^-} , we get

$$\begin{aligned} E_{\text{Ag}^+|\text{Ag}} &= E_{\text{Ag}^+|\text{Ag}}^\circ - \frac{RT}{F} \ln \left(\frac{a_{\text{Cl}^-}}{a_{\text{Ag}^+} a_{\text{Cl}^-}} \right) \\ &= E_{\text{Ag}^+|\text{Ag}}^\circ - \frac{RT}{F} \ln \left(\frac{a_{\text{Cl}^-}}{K_{\text{sp}}^\circ(\text{AgCl})} \right) \end{aligned}$$

$$\text{or } E_{\text{Ag}^+|\text{Ag}} = \left(E_{\text{Ag}^+|\text{Ag}}^\circ + \frac{RT}{F} \ln K_{\text{sp}}^\circ(\text{AgCl}) \right) - \frac{RT}{F} \ln a_{\text{Cl}^-} \quad (8.12.2)$$

Now the electrode can also be treated as $\text{Cl}^-|\text{AgCl}|\text{Ag}$ since part of AgCl will deposit on solid Ag. Writing the reaction for this electrode, we have



The corresponding Nernst equation gives

$$E_{\text{Cl}^-|\text{AgCl}|\text{Ag}} = E_{\text{Cl}^-|\text{AgCl}|\text{Ag}}^\circ - \frac{RT}{F} \ln a_{\text{Cl}^-} \quad (8.12.3)$$

Equations (8.12.2) and (8.12.3) must be identical (i.e. $E_{\text{Ag}^+|\text{Ag}} = E_{\text{Cl}^-|\text{AgCl}|\text{Ag}}$) and hence on comparing these two equations, we get

$$E_{\text{Cl}^-|\text{AgCl}|\text{Ag}}^{\circ} = E_{\text{Ag}^+|\text{Ag}}^{\circ} + \frac{RT}{F} \ln K_{\text{sp}}^{\circ}(\text{AgCl})$$

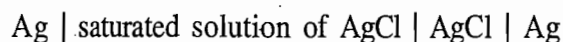
$$\text{or } E_{\text{Cl}^-|\text{AgCl}|\text{Ag}}^{\circ} = E_{\text{Ag}^+|\text{Ag}}^{\circ} - \frac{2.303 RT}{F} \text{p}K_{\text{sp}}^{\circ}(\text{AgCl}) \quad (8.12.4)$$

where $\text{p}K_{\text{sp}}^{\circ}(\text{AgCl}) = -\log K_{\text{sp}}^{\circ}(\text{AgCl})$

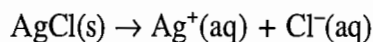
Equation (8.12.4) can also be derived by the following two methods.

Alternative Procedures

(i) Consider the cell



Its cell reaction is



and the cell-potential is

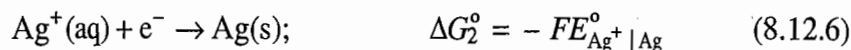
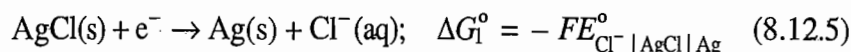
$$E = (E_{\text{Cl}^-|\text{AgCl}|\text{Ag}}^{\circ} - E_{\text{Ag}^+|\text{Ag}}^{\circ}) - \frac{RT}{F} \ln (a_{\text{Ag}^+})(a_{\text{Cl}^-})$$

For the reaction at equilibrium, we will have $E = 0$ (see Section 8.18) and thus

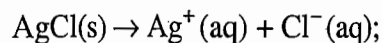
$$E_{\text{Cl}^-|\text{AgCl}|\text{Ag}}^{\circ} - E_{\text{Ag}^+|\text{Ag}}^{\circ} = \frac{RT}{F} \ln (a_{\text{Ag}^+})(a_{\text{Cl}^-})$$

$$\text{or } E_{\text{Cl}^-|\text{AgCl}|\text{Ag}}^{\circ} = E_{\text{Ag}^+|\text{Ag}}^{\circ} + \frac{RT}{F} \{\ln K_{\text{sp}}^{\circ}(\text{AgCl})\}$$

(ii) We have



Subtracting Eq. (8.12.6) from Eq. (8.12.5), we get



$$\text{with } \Delta G^{\circ} = -FE_{\text{Cl}^-|\text{AgCl}|\text{Ag}}^{\circ} + FE_{\text{Ag}^+|\text{Ag}}^{\circ}$$

Since $\Delta G^{\circ} = -RT \ln K_{\text{sp}}^{\circ}$, we will have

$$E_{\text{Cl}^-|\text{AgCl}|\text{Ag}}^{\circ} = E_{\text{Ag}^+|\text{Ag}}^{\circ} + \frac{RT}{F} \ln K_{\text{sp}}^{\circ}(\text{AgCl})$$

Computation of Potentials

At 298 K, we have

$$E_{\text{Cl}^-|\text{AgCl}|\text{Ag}}^{\circ} = E_{\text{Ag}^+|\text{Ag}}^{\circ} - (0.05915 \text{ V}) \text{p}K_{\text{sp}}^{\circ}(\text{AgCl})$$

Now $E_{\text{Ag}^+|\text{Ag}}^\circ = 0.799 \text{ V}$ and $\text{p}K_{\text{sp}}^\circ(\text{AgCl}) = 9.75$. Thus, we have

$$\begin{aligned} E_{\text{Cl}^-|\text{AgCl}|\text{Ag}}^\circ &= 0.799 \text{ V} - (0.05915 \text{ V})(9.75) \\ &= 0.222 \text{ V} \end{aligned}$$

Equation (8.12.4) may also be used to calculate the solubility product of silver chloride by measuring the standard potentials of $\text{Ag}^+|\text{Ag}$ and $\text{Cl}^-|\text{AgCl}|\text{Ag}$ half-cells.

Generalization of Eq. (8.12.4)

Equation (8.12.4) may be generalized as

$$E_{\text{X}^-|\text{AgX}|\text{Ag}}^\circ = E_{\text{Ag}^+|\text{Ag}}^\circ - \frac{2.303 RT}{F} \{\text{p}K_{\text{sp}}^\circ(\text{AgX})\} \quad (8.12.7)$$

where X^- stands for the halide ion (Cl^- , Br^- and I^-). From Eq. (8.12.7) it follows that larger the $\text{p}K_{\text{sp}}^\circ$, lesser the reduction potential of silver halide-silver electrode. Table 8.12.1 records the standard potentials for some of the metal-insoluble salt-anion electrodes.

Table 8.12.1 Standard Potentials of Some of the Metal-Insoluble Salt-Anion Electrodes

Electrode reaction	E°/V
$\text{AgCl(s)} + \text{e}^- \rightarrow \text{Ag} + \text{Cl}^-$	0.222
$\text{AgBr(s)} + \text{e}^- \rightarrow \text{Ag} + \text{Br}^-$	0.03
$\text{AgI(s)} + \text{e}^- \rightarrow \text{Ag} + \text{I}^-$	-0.151
$\text{Ag}_2\text{S(s)} + 2\text{e}^- \rightarrow 2\text{Ag} + \text{S}^{2-}$	-0.69

It follows from Table 8.12.1 that

$$\text{p}K_{\text{sp}}^\circ(\text{Ag}_2\text{S}) > \text{p}K_{\text{sp}}^\circ(\text{AgI}) > \text{p}K_{\text{sp}}^\circ(\text{AgBr}) > \text{p}K_{\text{sp}}^\circ(\text{AgCl}) \quad (8.12.8)$$

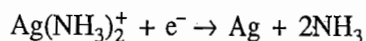
which implies that

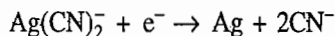
$$K_{\text{sp}}(\text{AgCl}) > K_{\text{sp}}(\text{AgBr}) > K_{\text{sp}}(\text{AgI}) > K_{\text{sp}}(\text{Ag}_2\text{S}) \quad (8.12.9)$$

From Eq. (8.12.8), it follows that silver chloride is more soluble than silver bromide which, in turn, is more soluble than silver iodide. The fact that the silver-silver iodide couple has a negative potential means that silver should dissolve in HI with the release of hydrogen gas. This, in fact, occurs, but the action ceases promptly due to the layer of insoluble AgI which forms and protects the silver surface from further attack.

Example 8.12.1

Calculate E° for the following reactions at 298 K.





Given: $E_{\text{Ag}^+|\text{Ag}}^\circ = 0.799 \text{ V}$, $K_{\text{Ins}}^\circ(\text{Ag}(\text{NH}_3)_2^+) = 6.02 \times 10^{-8}$ and

$$K_{\text{Ins}}^\circ(\text{Ag}(\text{CN})_2^-) = 1.995 \times 10^{-19}$$

Solution

The equation which relates $E_{\text{Ag}^+|\text{Ag}}^\circ$ with E° of the given expression is

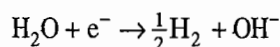
$$E^\circ = E_{\text{Ag}^+|\text{Ag}}^\circ - (0.059 \text{ 15 V}) \text{p}K_{\text{Ins}}^\circ$$

Thus
$$\begin{aligned} E_{\text{NH}_3, \text{Ag}(\text{NH}_3)_2^+|\text{Ag}}^\circ &= 0.799 \text{ 1 V} - (0.059 \text{ 15 V})(-\log 6.02 \times 10^{-8}) \\ &= 0.799 \text{ 1 V} - 0.427 \text{ V} \\ &= 0.372 \text{ 1 V} \end{aligned}$$

and
$$\begin{aligned} E_{\text{CN}^-|\text{Ag}(\text{CN})_2^-|\text{Ag}}^\circ &= 0.799 \text{ 1 V} - (0.059 \text{ 15 V})(-\log 1.995 \times 10^{-19}) \\ &= 0.799 \text{ 1 V} - 1.106 \text{ 1 V} \\ &= 0.307 \text{ V} \end{aligned}$$

Example 8.12.2

Show that the standard potential of the reaction



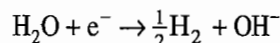
is given as

$$E^\circ = \frac{RT}{F} \ln K_w^\circ$$

Determine its value at 298 K.

Solution

The reduction potential of the reaction



is given by
$$E = E^\circ - \frac{RT}{F} \ln \{(f_{\text{H}_2}/f^\circ)^{1/2} a_{\text{OH}^-}\} \quad (1)$$

Since $K_w = (a_{\text{H}^+})(a_{\text{OH}^-})$, Eq. (1) may be written as

$$E = E^\circ - \frac{RT}{F} \ln \frac{(f_{\text{H}_2}/f^\circ)^{1/2}}{a_{\text{H}^+}} - \frac{RT}{F} \ln K_w^\circ \quad (2)$$

The cell in which the given half-cell reaction occurs may equally be considered as the hydrogen-hydrogen ion half cell. Hence, its potential will be given as

$$E = - \frac{RT}{F} \ln \frac{(f_{\text{H}_2}/f^\circ)^{1/2}}{a_{\text{H}^+}} \quad (3)$$

Comparing Eqs (2) and (3), we get

$$E^{\circ} = \frac{RT}{F} \ln K_w^{\circ} \quad (4)$$

At 298 K, the value of E° is

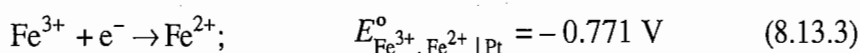
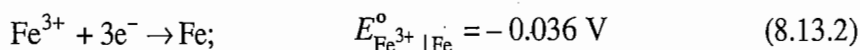
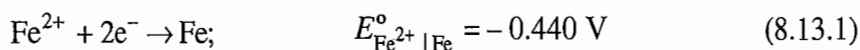
$$\begin{aligned} \frac{RT}{F} \ln K_w^{\circ} &= \frac{(2.303)(8.314 \text{ J K}^{-1} \text{ mol}^{-1})(298 \text{ K})}{(96500 \text{ C mol}^{-1})} \log(10^{-14}) \\ &= -0.828 \text{ V} \end{aligned}$$

8.13 CELL REACTION AND ITS RELATION WITH CELL POTENTIAL

The electrical work that is obtainable when the amount n of electrons flow from left electrode to right electrode of a cell will be equal to the change in free energy of the cell reaction. The relation between the cell potential and the free energy change of the associated cell reaction was derived in Section 8.5 and may be derived from Eq. (8.5.6) by replacing dn by n and z by -1 . Thus, we have

$$\Delta G = -nF(E_R - E_L) = -nFE_{\text{cell}}$$

Superficially, it might appear that ΔG and E differ only by a numerical factor, but actually they also differ in a qualitative sense. ΔG is uniquely determined by the overall cell reaction; E_{cell} is determined by the overall reaction and the make up of the cell. To illustrate this difference, we consider the various ways in which the following three half-cell reactions

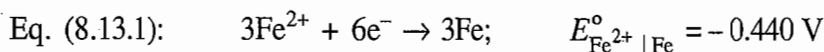
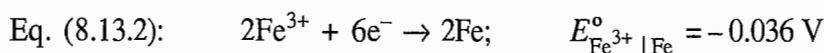


may be combined to form a cell with the following overall cell reaction.

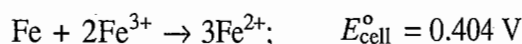


Combination of Eqs (8.13.1) and (8.13.2)

The overall cell reaction (Eq. 8.13.4) may be obtained from Eqs (8.13.1) and (8.13.2) by multiplying the former by 3 and the latter by 2 (so that the electrons involved in the two half-cell reactions are same) and then subtracting the resultant Eq. (8.13.1) from the resultant Eq. (8.13.2). Thus, we have



with the overall reaction

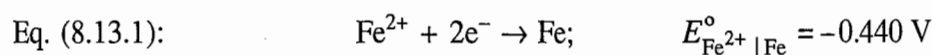
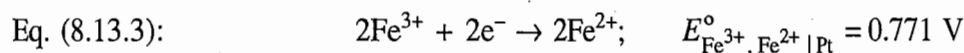


The cell producing this reaction would be

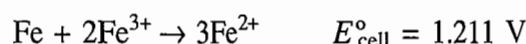


Combination of Eqs (8.13.1) and (8.13.3)

In this case, we multiply Eq. (8.13.3) by 2 and then subtract from it Eq. (8.13.1). Thus, we have



with the overall reaction

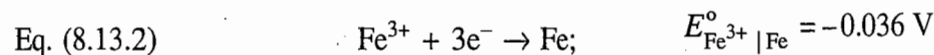
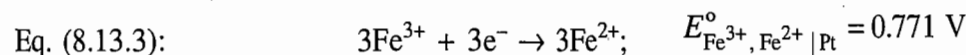


The cell producing this reaction would be

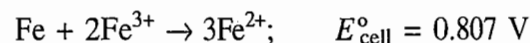


Combination of Eqs (8.13.2) and (8.13.3)

In this case, we multiply Eq. (8.13.3) by 3 and then subtract from it Eq. (8.13.2). Thus, we have



with the cell reaction



The cell producing this reaction would be



Thus, we observe that the voltage developed by a cell depends on the half-cell reactions, i.e. what occurs at the electrodes (or in other words on the make up of the cell) as well as on the overall reaction. But ΔG depends only on the overall cell reaction as may be seen from the ΔG values recorded in Table 8.13.1.

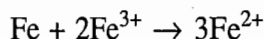
Conclusion

From Table 8.13.1, it is obvious that for all the three cells, ΔG° is the same but n and E_{cell}° vary from cell to cell. The variations in n and E_{cell}° are such that the

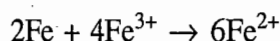
Table 8.13.1 Cell, E_{cell}° and ΔG° Values

Cell	$\frac{E_{\text{cell}}}{\text{V}}$	Number of electrons associated in the half-cell reactions n	$\Delta G^\circ = -nFE^\circ$
$\text{Fe} \mid \text{Fe}^{2+} \parallel \text{Fe}^{3+} \mid \text{Fe}$	0.404	6	-2.424 F
$\text{Fe} \mid \text{Fe}^{2+} \parallel \text{Fe}^{3+}, \text{Fe}^{2+} \mid \text{Pt}$	1.211	2	-2.422 F
$\text{Fe} \mid \text{Fe}^{3+} \parallel \text{Fe}^{3+}, \text{Fe}^{2+} \mid \text{Pt}$	0.807	3	-2.421 F

product of two always remains constant. Thus, we conclude that ΔG° depends only on the cell reaction but E_{cell}° depends on the make up of the cell. It may be emphasized once again here that E_{cell}° is an intensive property (being equal to $\Delta G^\circ/n$) and thus its value does not depend upon the size of the cell and the extent to which the cell reaction is carried out. To make the latter point more clear, we take up the cell as given by Eq. (8.13.5). If the overall cell reaction



is written as



then E_{cell}° remains the same but ΔG° changes from $-2.424 F$ to $-4.848 F$. This change in ΔG° will be brought about by the change in the number of electrons involved in the two-half reactions. Thus, n changes from 6 to 12.

8.14 CALCULATION OF STANDARD POTENTIAL FOR AN UNKNOWN HALF-CELL REACTION

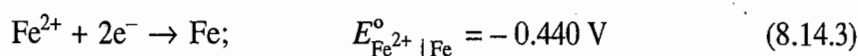
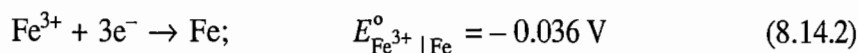
A given reaction may be obtained from other reactions by carrying out the simple mathematical manipulations such as addition, subtraction, multiplication by a number and so on. Since G° is a state function, the ΔG° of the given reaction may be obtained by carrying out the corresponding manipulations on ΔG° 's values of the reactions. This procedure, however, cannot be adopted while calculating E° of a half-cell reaction from the values of other half-cell reactions. Nevertheless, we can determine the potential of a half-cell reaction from the potentials of other half-cell reactions via the associated ΔG° values. First of all, we write

$$\Delta G^\circ = -nFE^\circ$$


for each and every half-cell reaction and then carry out the appropriate manipulations of the reactions along with the corresponding ΔG° 's values to give the given half-cell reaction and its ΔG° value. Knowing the number n of electrons involved in the given reaction and the obtained value of ΔG° , the value E° may be determined. To illustrate the procedure, we compute E° for the reaction



from E° 's of the reactions



The half-cell reaction of Eq. (8.14.1) can be obtained by subtracting the half-cell reaction of Eq. (8.14.3) from that of Eq. (8.14.2). Accordingly, ΔG° for the reaction of Eq. (8.14.1) may be obtained by subtracting the ΔG° of the reaction of Eq. (8.14.3) from that of Eq. (8.14.2). Thus, we have



Subtracting, we get

$$\begin{aligned} \text{Eq. (8.14.1): } \text{Fe}^{3+} + \text{e}^- \rightarrow \text{Fe}^{2+}; \quad \Delta G^\circ &= \Delta G_1^\circ - \Delta G_2^\circ \\ &= (0.108 \text{ V}) F - (0.880 \text{ V}) F \\ &= (-0.772 \text{ V}) F \end{aligned}$$

Since the number of electrons involved in Eq. (8.14.1) is one, it follows that

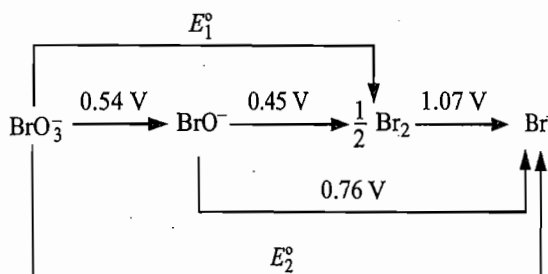
$$\Delta G^\circ = (-0.772 \text{ V}) F = -1 F E_{\text{Fe}^{3+}, \text{Fe}^{2+}|\text{Pt}}^\circ$$

$$\text{Hence } E_{\text{Fe}^{3+}, \text{Fe}^{2+}|\text{Pt}}^\circ = 0.772 \text{ V}$$

Note that if we had subtracted the two half-cell potentials, we would have got 0.404 V, a wrong result.

Example 8.14.1

From the standard potentials shown in the following diagram, calculate the potentials E_1° and E_2° .



Solution

The reaction corresponding to the potential E_1° is



This reaction can be obtained by adding the following two reduction reactions:



Hence the free energy change of reaction (1) will be

$$\Delta G_{\text{reaction (1)}}^\circ = \Delta G_{\text{reaction (2)}}^\circ + \Delta G_{\text{reaction (3)}}^\circ$$

Replacing ΔG° 's in terms of potentials, we get

$$\begin{aligned} -5FE_1^\circ &= -4F(0.54 \text{ V}) - 1F(0.45 \text{ V}) \\ &= (-2.61 \text{ V})F \end{aligned}$$

Hence $E_1^\circ = \frac{2.61 \text{ V}}{5} = 0.52 \text{ V}$

Now the reaction corresponding to the potential E_2° is



This reaction can be obtained by adding the following three reactions.



Hence $\Delta G_{\text{reaction (4)}}^\circ = \Delta G_{\text{reaction (2)}}^\circ + \Delta G_{\text{reaction (3)}}^\circ + \Delta G_{\text{reaction (5)}}^\circ$

or
$$\begin{aligned} -6F(E_2^\circ) &= -4F(0.54 \text{ V}) - 1F(0.45 \text{ V}) - 1F(1.07 \text{ V}) \\ &= (-3.68 \text{ V})F \end{aligned}$$

or $E_2^\circ = \frac{3.68 \text{ V}}{6} = 0.61 \text{ V}$

8.15 REFERENCE HALF-CELLS

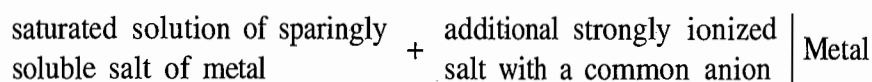
Desirability of a Reference Half-Cell

In Section 8.8, we have seen that the standard potential of a given half-cell may be determined by constructing a cell in which the left half-cell is the standard hydrogen-hydrogen ion half-cell and the right side is the given half-cell and determining its emf experimentally. By definition, the standard potential of the given half-cell will be equal to the obtained value of emf of the cell. However, the hydrogen-hydrogen ion half-cell suffers from a large number of limitations. For example, it is very inconvenient to use it in practice as a constant supply of hydrogen gas at 1 bar pressure is required. Moreover, the potential of hydrogen-hydrogen ion half-cell is very sensitive to dissolved oxygen, hydrogen sulphide and the reducible species. The hydrogen-hydrogen ion half-cell is also very susceptible to electrode poisoning. It is for these reasons, the hydrogen-hydrogen ion half-cell may be replaced by a suitable reference half-cell whose potential has been accurately determined with respect to the hydrogen-hydrogen ion half-cell.

Reference half-cell systems are chosen to give reproducible potentials over a long period of time.

Common Examples of Reference Half-Cell

The most common type of reference half-cell has the following form:



Examples include:

- | | |
|---|---|
| (1) Calomel half-cell: | $\text{KCl(aq)} \mid \text{Hg}_2\text{Cl}_2(\text{s}) \mid \text{Hg}$ |
| (2) Silver-silver chloride half-cell: | $\text{KCl(aq)} \mid \text{AgCl(s)} \mid \text{Ag}$ |
| (3) Mercury-mercurous sulphate half-cell: | $\text{K}_2\text{SO}_4(\text{aq}) \mid \text{Hg}_2\text{SO}_4(\text{s}) \mid \text{Hg}$ |

The potential adopted by each of these reference half-cells is controlled by the activity of the anion in solution. We give below a brief discussion of these three half-cells.

Calomel Half-Cell

The half-cell set up is shown in Fig. 8.15.1.

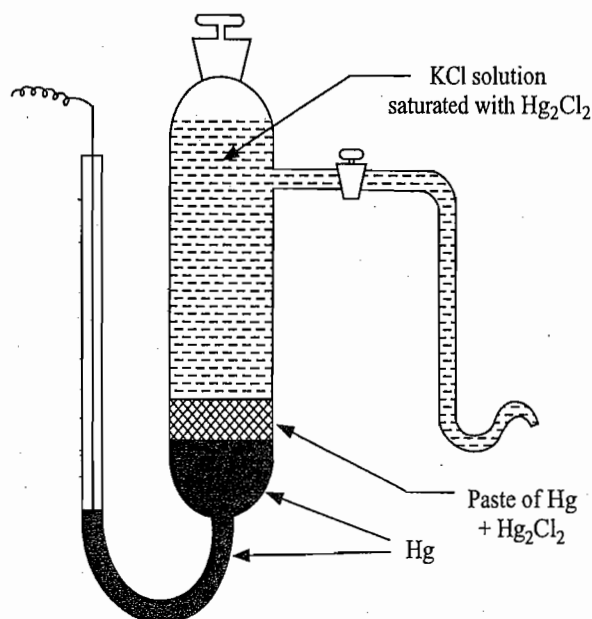
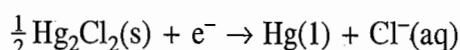


Fig. 8.15.1 Calomel half-cell

The half-cell reaction is



and the Nernst equation has the form

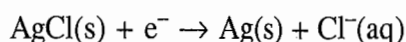
$$E_{\text{Cl}^- \mid \text{Hg}_2\text{Cl}_2 \mid \text{Hg}} = E_{\text{Cl}^- \mid \text{Hg}_2\text{Cl}_2 \mid \text{Hg}}^\circ - \frac{RT}{F} \ln(a_{\text{Cl}^-})$$

with $E_{\text{Cl}^- \mid \text{Hg}_2\text{Cl}_2 \mid \text{Hg}}^\circ = 0.2676 \text{ V}$

Thus, the calomel half-cell functions as the reversible chloride electrode. Three types of calomel half-cell are commonly used. These are corresponding to 0.1 mol dm^{-3} , 1 mol dm^{-3} and saturated KCl solution having potentials 0.336 V, 0.283 V and 0.244 V, respectively at 25 °C.

Silver-Silver Chloride-Chloride Ion Half-Cell

The half-cell reaction is



Hence the half-cell potential is given by

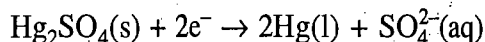
$$E_{\text{Cl}^- \mid \text{AgCl} \mid \text{Ag}} = E_{\text{Cl}^- \mid \text{AgCl} \mid \text{Ag}}^\circ - \frac{RT}{F} \ln(a_{\text{Cl}^-})$$

with $E_{\text{Cl}^- \mid \text{AgCl} \mid \text{Ag}}^\circ = 0.222 \text{ V}$

This half-cell cannot be used in a solution which contains HNO_3 , I^- and CN^- ions.

Mercury-Mercurous Sulphate-Sulphate Ion Half-Cell

The half-cell set up is very similar to that of calomel half-cell. The cell-reaction is



Hence the half-cell potential is given by

$$E_{\text{SO}_4^{2-} | \text{Hg}_2\text{SO}_4 | \text{Hg}} = E_{\text{SO}_4^{2-} | \text{Hg}_2\text{SO}_4 | \text{Hg}}^\circ - \frac{RT}{2F} \ln(a_{\text{SO}_4^{2-}})$$

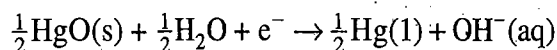
with $E_{\text{SO}_4^{2-} | \text{Hg}_2\text{SO}_4 | \text{Hg}}^\circ = 0.615 \text{ V}$.

This half-cell potential depends upon the activity of SO_4^{2-} ions.

Mercury-Mercuric Oxide-Hydroxide Ion Half-Cell

Another half-cell which finds its utility in strongly alkaline solutions is the mercury-mercuric oxide half-cell. It consists of a pool of mercury in contact with a solution of NaOH or KOH which is saturated with HgO .

The half-cell reaction is

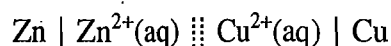


and thus the Nernst equation has the form

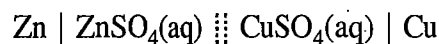
$$E_{\text{OH}^- | \text{HgO} | \text{Hg}} = E_{\text{OH}^- | \text{HgO} | \text{Hg}}^\circ - \frac{RT}{F} \ln(a_{\text{OH}^-})$$

8.16 EXPRESSION OF E_{cell} IN THE UNIT OF MOLALITY

If the emf of a cell has to be written in terms of mean activity of the electrolytes, we will have to consider the cell involving the electrolytes rather than the ions. For example, the Daniell cell



will be written as



The emf of the cell as given by Eq. (8.7.9) is

$$E_{\text{cell}} = E_{\text{cell}}^\circ - \frac{RT}{2F} \ln \frac{a_{\text{Zn}^{2+}}}{a_{\text{Cu}^{2+}}}$$

Expressing a in terms of molality and activity coefficient, we get

$$E_{\text{cell}} = E_{\text{cell}}^\circ - \frac{RT}{2F} \ln \frac{m'_{\text{Zn}^{2+}}}{m'_{\text{Cu}^{2+}}} - \frac{RT}{2F} \ln \frac{\gamma_{\text{Zn}^{2+}}}{\gamma_{\text{Cu}^{2+}}} \quad (8.16.1)$$

[†]See Annexure I at the end of this Chapter for the discussion on activity and its relation with molality. Throughout this Chapter, m' represents m/m° , where m is the molality and m° is the unit molality.

The expression of m' and γ in terms of mean molality and mean activity coefficient are as follows. In the present case

$$x = y = 1, \quad v = 2 \quad \text{and} \quad m'_+ = m'_-$$

$$\text{Hence} \quad m'_{\text{Zn}^{2+}} = m'_\pm(\text{ZnSO}_4) \quad m'_{\text{Cu}^{2+}} = m'_\pm(\text{CuSO}_4)$$

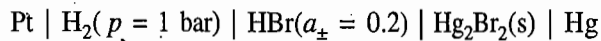
$$\gamma_{\text{Zn}^{2+}} = \gamma_\pm(\text{ZnSO}_4) \quad \gamma_{\text{Cu}^{2+}} = \gamma_\pm(\text{CuSO}_4) \quad (8.16.2)$$

Thus, Eq. (8.16.1) become

$$E_{\text{cell}} = E_{\text{cell}}^\circ - \frac{RT}{2F} \ln \frac{m'_\pm(\text{ZnSO}_4)}{m'_\pm(\text{CuSO}_4)} - \frac{RT}{2F} \ln \frac{\gamma_\pm(\text{ZnSO}_4)}{\gamma_\pm(\text{CuSO}_4)}$$

Example 8.16.1

Calculate the potential at 25 °C for the cell

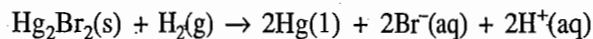


Solution

We have

Electrode	Reduction
Right	$\text{Hg}_2\text{Br}_2(\text{s}) + 2e^- \rightarrow 2\text{Hg}(\text{l}) + 2\text{Br}^-(\text{aq})$
Left	$2\text{H}^+(\text{aq}) + 2e^- \rightarrow \text{H}_2(\text{g})$

The cell reaction is



$$\text{Hence} \quad E_{\text{cell}} = (E_{\text{Br}^- \mid \text{Hg}_2\text{Br}_2 \mid \text{Hg}}^\circ - E_{\text{H}^+ \mid \text{H}_2 \mid \text{Pt}}^\circ) - \frac{RT}{2F} \ln \frac{(a_{\text{H}^+})^2 (a_{\text{Br}^-})^2}{(p(\text{H}_2)/p^\circ)}$$

$$\text{or} \quad E_{\text{cell}} = E_{\text{Br}^- \mid \text{Hg}_2\text{Br}_2 \mid \text{Hg}}^\circ - \frac{RT}{F} \ln \frac{(a_{\text{H}^+})(a_{\text{Br}^-})}{(p(\text{H}_2)/p^\circ)^{1/2}}$$

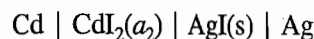
$$\text{or} \quad E_{\text{cell}} = E_{\text{Br}^- \mid \text{Hg}_2\text{Br}_2 \mid \text{Hg}}^\circ - \frac{RT}{F} \ln \frac{\{(a_\pm(\text{HBr}))\}^2}{(p(\text{H}_2)/p^\circ)^{1/2}}$$

Substituting the data, we get

$$\begin{aligned} E_{\text{cell}} &= 0.1385 \text{ V} - (0.05915 \text{ V}) (2) \log(0.2) \\ &= 0.1385 \text{ V} + 0.0827 \text{ V} = 0.2212 \text{ V} \end{aligned}$$

Example 8.16.2

The potential of the cell



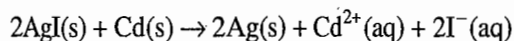
is 0.2860 V at 25 °C. Calculate the mean ionic activity of the ions in the solution, and the activity of electrolyte.

Solution

We have

<i>Electrode</i>	<i>Reduction reaction</i>
Right	$2\text{AgI(s)} + 2\text{e}^- \rightarrow 2\text{Ag(s)} + 2\text{I}^-\text{(aq)}$
Left	$\text{Cd}^{2+}\text{(aq)} + 2\text{e}^- \rightarrow \text{Cd(s)}$

The cell reaction is



$$\text{Hence } E_{\text{cell}} = (E_{\text{I}^-|\text{AgI}|\text{Ag}}^\circ - E_{\text{Cd}^{2+}|\text{Cd}}^\circ) - \frac{RT}{2F} \ln (a_{\text{Cd}^{2+}})(a_{\text{I}^-})^2$$

$$\text{or } E_{\text{cell}} = (E_{\text{I}^-|\text{AgI}|\text{Ag}}^\circ - E_{\text{Cd}^{2+}|\text{Cd}}^\circ) - \frac{RT}{2F} \ln (a_{\pm})^3$$

Substituting the data, we get

$$0.286 \text{ V} = \{-0.152 \text{ V} - (-0.403 \text{ V})\} - \left(\frac{3 \times 0.059 \text{ V}}{2}\right) \log a_{\pm}$$

$$\text{or } 0.286 \text{ V} = 0.250 \text{ V} - (0.088 \text{ V}) \log a_{\pm}$$

$$\text{or } \log a_{\pm} = \frac{0.250 \text{ V} - 0.286 \text{ V}}{0.088 \text{ V}} = -\frac{0.035 \text{ V}}{0.088 \text{ V}} = -0.396 \text{ V}$$

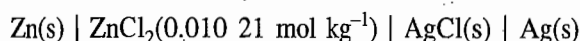
$$\text{Thus } a_{\pm} = 0.401 \text{ V}$$

Now since $a_2 = a_{\pm}^3$, we get

$$a_2 = (0.401 \text{ V})^3 = 0.064 \text{ V}$$

Example 8.16.3

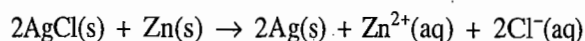
The potential of the cell

is found to be 1.156 V. What is the mean ionic activity coefficient of ZnCl_2 in the solution?**Solution**

We have

<i>Electrode</i>	<i>Reduction reaction</i>
Right	$2\text{AgCl(s)} + 2\text{e}^- \rightarrow 2\text{Ag(s)} + 2\text{Cl}^-\text{(aq)}$
Left	$\text{Zn}^{2+}\text{(aq)} + 2\text{e}^- \rightarrow \text{Zn(s)}$

The cell reaction is



$$\text{Hence } E_{\text{cell}} = (E_{\text{Cl}^-|\text{AgCl}|\text{Ag}}^\circ - E_{\text{Zn}^{2+}|\text{Zn}}^\circ) - \frac{RT}{2F} \ln (a_{\text{Zn}^{2+}})(a_{\text{Cl}^-})^2$$

$$\begin{aligned}
 &= (E_{\text{Cl}^- | \text{AgCl} | \text{Ag}}^\circ - E_{\text{Zn}^{2+} | \text{Zn}}^\circ) - \frac{RT}{2F} \ln a_{\pm}^3 \\
 &= (E_{\text{Cl}^- | \text{AgCl} | \text{Ag}}^\circ - E_{\text{Zn}^{2+} | \text{Zn}}^\circ) - \frac{RT}{2F} \ln (m'_{\pm})^3 \gamma_{\pm}^3
 \end{aligned}$$

Now $(m'_{\pm})^3 = (m'_+) (m'_-)^2$

$$\begin{aligned}
 &= (0.01021) (2 \times 0.01021)^2 \\
 &= 4 \times 0.01021^3 = 4.257 \times 10^{-6}
 \end{aligned}$$

Substituting this along with other data in the expression of E_{cell} , we have

$$\begin{aligned}
 1.1566 \text{ V} &= \{0.222 \text{ V} - (-0.762 \text{ V})\} - \left(\frac{0.05915 \text{ V}}{2}\right) \log m_{\pm}^3 \\
 &\quad - \left(\frac{0.05915 \text{ V}}{2}\right) \log \gamma_{\pm}^3 \\
 &= 0.984 \text{ V} - (0.02957 \text{ V}) \log (4.257 \times 10^{-6}) \\
 &\quad - 3(0.02957 \text{ V}) \log \gamma_{\pm} \\
 &= 1.143 \text{ V} - (0.0887 \text{ V}) \log \gamma_{\pm}
 \end{aligned}$$

or $\log \gamma_{\pm} = -\frac{1.1566 - 1.143}{0.0887} = -\frac{0.0136}{0.0887} = -0.1533$

Hence $\gamma_{\pm} = 0.7026$

8.17 DETERMINATION OF ACCURATE VALUE OF HALF-CELL POTENTIAL

The standard half-cell potentials are employed for calculating accurate values of various quantities such as equilibrium constant of a weak acid and ionic product of water. It is, therefore, essential to know their accurate values. For this purpose, the method of extrapolation is employed. To illustrate the method, we consider the following cell.



The cell reaction is



and the cell potential is given by

$$E = E^\circ - \frac{RT}{F} \ln \frac{(a_{\text{H}^+})(a_{\text{Cl}^-})}{(f_{\text{H}_2}/f^\circ)^{1/2}} \quad (8.17.3)$$

Assuming ideal behaviour for the gas, we get

$$E = E^\circ - \frac{RT}{F} \ln (a_{\text{H}^+})(a_{\text{Cl}^-}) \quad (8.17.4)$$

Since individual ionic activities cannot be determined, we express a_{H^+} and a_{Cl^-} in terms of mean activity a_{\pm} of hydrochloric acid by the relation

$$a_{\pm}^2 = (a_{\text{H}^+})(a_{\text{Cl}^-}) \quad (8.17.5)$$

Now the mean activity may be expressed in terms of mean molality m_{\pm} of the ions and the mean activity coefficient γ_{\pm} by the relation

$$a_{\pm} = m'_{\pm} \gamma_{\pm} \quad (8.17.6)$$

For HCl solution

$$m'_{\pm} = m' = m/m^\circ \quad (8.17.7)$$

where m is the molality of the solution. Using Eqs (8.17.5), (8.17.6) and (8.17.7) in Eq. (8.17.4), we get

$$E = E^\circ - \frac{2RT}{F} \ln m' - \frac{2RT}{F} \ln \gamma_{\pm} \quad (8.17.8)^\dagger$$

If the measurements are done in dilute solutions, then γ_{\pm} can be expressed in terms of the ionic strength of the solution using the Debye-Hückel limiting law^{††}

$$\log \gamma_{\pm} = -Az_+|z_-|\mu^{1/2} \quad (8.17.9)$$

where A is equal to $0.514 (\text{mol dm}^{-3})^{-1/2}$, z_+ and z_- are the charge numbers of ions, and μ is the ionic strength of the solution. The latter is defined as

$$\mu = \frac{1}{2} \sum_i c_i z_i^2 \quad (8.17.10)$$

where c_i is the molar concentration of the i th ions. The summation is to be carried over all the ions present in the solution. For uni-univalent electrolyte such as the given one

$$\mu = c = m \quad (8.17.11)$$

Thus for HCl solution, Eq. (8.17.9) becomes

$$\log \gamma_{\pm} = -0.509 m^{1/2} \quad (8.17.12)$$

[†]Throughout this chapter, $m' = m/m^\circ$.

^{††}See Annexure II for the derivation of Debye-Hückel limiting law.

Substituting Eq. (8.17.12) in Eq. (8.17.8), we get

$$E = E^{\circ} - \frac{2RT}{F} \ln m' - \frac{2.303 \times 2RT}{F} (-0.509 m'^{1/2})$$

or
$$E + \frac{2RT}{F} \ln m' = E^{\circ} + \frac{2.303 \times 2RT}{F} (0.509 m'^{1/2})$$

At 25 °C, the above equation becomes

$$E + (0.1183 \text{ V}) \log m' = E^{\circ} + (0.0602 \text{ V}) \sqrt{m'}$$

The value E of the cell is determined at various values of m' and then a plot between $E + (0.1183 \text{ V}) \log m'$ and $\sqrt{m'}$ is made. The plot will be a straight line at lower values of $\sqrt{m'}$ which can be extended to $\sqrt{m'} = 0$ as shown in Fig. 8.17.1. The intercept at $\sqrt{m'} = 0$ gives the value of E° .

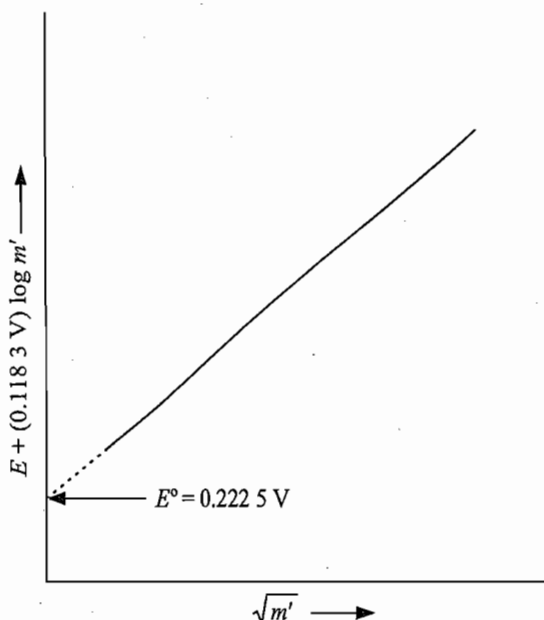


Fig. 8.17.1 A graph of $E + (0.1183 \text{ V}) \log m'$ versus $\sqrt{m'}$

Since the standard potential of the cell (Eq. 8.17.1) is given by

$$E_{\text{cell}}^{\circ} = E_{\text{Cl}^- | \text{AgCl} | \text{Ag}}^{\circ} - E_{\text{H}^+ | \text{H}_2}^{\circ}$$

and the fact that

$$E_{\text{H}^+ | \text{H}_2}^{\circ} = 0$$

it follows that

$$E_{\text{Cl}^- | \text{AgCl} | \text{Ag}}^{\circ} = E_{\text{cell}}^{\circ} = 0.2225 \text{ V}$$

Following the method outlined above, the accurate values of half-cell potentials of other electrodes can be determined.

8.18 APPLICATIONS OF ELECTROCHEMICAL CELLS

The emf measurement of electrochemical cells provides one of the convenient methods to determine the values of various physical quantities such as the equilibrium constant, ionization constant, ionic product of water, pH of a solution, and the values of thermodynamic properties of ions. Besides these, the quantitative estimation of species can be carried out with the help of potentiometric titration. In this section, we describe the above applications with specific examples.

1. DETERMINATION OF THERMODYNAMIC DATA

Expression of Free Energy Change

The free energy change accompanying a cell reaction can be obtained from the emf of the cell through the relation

$$\Delta G = -nFE_{\text{cell}} \quad (8.18.1)$$

Expression of Enthalpy Change

The changes in enthalpy and entropy of the cell reaction can also be determined if the temperature dependence of the emf of the cell is available. For this, we make use of the Gibbs-Helmholtz equation

$$\Delta G = \Delta H + T \left[\frac{\partial(\Delta G)}{\partial T} \right]_p \quad (8.18.2)$$

Now since

$$\Delta G = -nFE$$

we, therefore, get

$$\left[\frac{\partial(\Delta G)}{\partial T} \right]_p = -nF \left(\frac{\partial E}{\partial T} \right)_p \quad (8.18.3)$$

Substituting Eqs (8.18.1) and (8.18.3) in Eq. (8.18.2), we get

$$-nFE = \Delta H - nFT \left(\frac{\partial E}{\partial T} \right)_p$$

Rearranging, we have

$$\Delta H = -nF \left[E - T \left(\frac{\partial E}{\partial T} \right)_p \right] \quad (8.18.4)$$

Thus, ΔH of the cell reaction can be determined from the knowledge of E and $(\partial E/\partial T)_p$. Since E and F are expressed respectively in volt and coulomb, the units of ΔH is in volt-coulomb and is equal to the joule unit.

Expression of Entropy Change

Now since $\Delta G = \Delta H - T\Delta S$, therefore

$$\Delta S = \frac{\Delta H - \Delta G}{T} \quad (8.18.5)$$

Substituting the expressions of ΔH and ΔG from Eqs (8.18.4) and (8.18.1), we get

$$\Delta S = nF \left(\frac{\partial E}{\partial T} \right)_p \quad (8.18.6)$$

Thus knowing $(\partial E/\partial T)_p$, ΔS of the cell reaction can be computed from Eq. (8.18.6).

Standard Free Energies and Entropies of Aqueous Ions

Free Energy of $H^+(aq)$

The assignment of zero potential to the standard hydrogen-hydrogen ion half-cell provides the conventional zero for free energy of formation of hydrogen ions in aqueous solution. This follows immediately from the potential expression of the standard hydrogen-hydrogen ion half-cell (Eq. 8.6.6). We have

$$E_{H^+ | H_2}^\circ = \frac{\mu_{H^+}^\circ - \frac{1}{2}\mu_{H_2}^\circ + \mu_{e^-(Pt)}}{F} \quad (\text{Eq. 8.6.6})$$

Since the electrons are not emitted as such from the neutral metal, we set $\mu_{e^-(Pt)} = 0$. Also $\mu_{H_2}^\circ$ at 298 K and 1 bar is zero. Hence

$$E_{H^+ | H_2}^\circ = \frac{\mu_{H^+}^\circ}{F}$$

Now since $E_{H^+ | H_2}^\circ$ is assigned a zero value, it follows that

$$\mu_{H^+}^\circ = 0$$

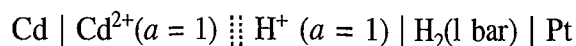
(Alternatively, we may assume $\mu_{H^+}^\circ = 0$ and proceed to prove that $E_{H^+ | H_2 | Pt}^\circ = 0$)

Thus the reference standard for free energies of formation of ions in solution is the hydrogen ion at $a = 1$, which is assigned a zero value.

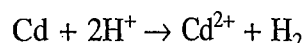
Free Energy of Other Ions

The standard free energies of formation of ions relative to the above reference may be determined as follows.

Let the free energy of formation of Cd^{2+} ion be required. We construct a cell involving $Cd^{2+} | Cd$ half-cell and the standard hydrogen-hydrogen ion half-cell:



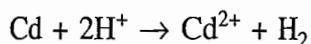
The cell reaction is



The cell potential is given by

$$\begin{aligned} E_{\text{cell}}^\circ &= E_{H^+ | H_2 | Pt}^\circ - E_{Cd^{2+} | Cd}^\circ \\ &= 0 - (-0.403 \text{ V}) = 0.403 \text{ V} \end{aligned}$$

The change in the standard free energy of the cell reaction



is given by

$$\begin{aligned}\Delta G^\circ &= -nFE_{\text{cell}}^\circ \\ &= -2(96487 \text{ C mol}^{-1})(0.403 \text{ V}) = -77769 \text{ J mol}^{-1}\end{aligned}$$

ΔG° will also be given by

$$\Delta G^\circ = \mu_{\text{Cd}^{2+}}^\circ + \mu_{\text{H}_2}^\circ - \mu_{\text{Cd}}^\circ - 2\mu_{\text{H}^+}^\circ$$

By convention,

$$\mu_{\text{Cd}}^\circ = 0; \quad \mu_{\text{H}_2}^\circ = 0 \quad \text{and} \quad \mu_{\text{H}^+}^\circ = 0$$

$$\text{Thus} \quad \Delta G^\circ = \mu_{\text{Cd}^{2+}}^\circ = -77769 \text{ J mol}^{-1}$$

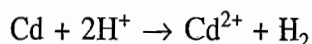
Proceeding this way, we can determine the free energy of formation or other ions in the solution.

Standard Entropy of Formation of Ions

The standard ionic entropies in solution is also determined relative to that of hydrogen ion at unit activity. By convention, the latter is assigned a zero value[†], i.e.

$$S_{\text{H}^+}^\circ = 0$$

To illustrate the procedure of calculating standard ionic entropy, we take an example of Cd^{2+} . Consider again the reaction



The standard entropy change is

$$\Delta S^\circ = S_{\text{Cd}^{2+}}^\circ + S_{\text{H}_2}^\circ - 2S_{\text{H}^+}^\circ - S_{\text{Cd}}^\circ$$

Since $S_{\text{H}^+}^\circ = 0$, we have

$$\Delta S^\circ = S_{\text{Cd}^{2+}}^\circ + S_{\text{H}_2}^\circ - S_{\text{Cd}}^\circ$$

The standard entropies of Cd and H_2 at 298 K are 51.46 and 130.58 $\text{J K}^{-1} \text{ mol}^{-1}$, respectively.

$$\text{Hence} \quad S_{\text{Cd}^{2+}}^\circ = \Delta S^\circ + S_{\text{Cd}}^\circ - S_{\text{H}_2}^\circ = \Delta S^\circ - 79.12 \text{ J K}^{-1} \text{ mol}^{-1}$$

The value of ΔS° can be obtained from the relation

[†]The absolute value of third law entropy of proton in water is $-20.99 \text{ J K}^{-1} \text{ mol}^{-1}$.

$$\Delta G^\circ = \Delta H^\circ - T\Delta S^\circ$$

$$\text{i.e. } \Delta S^\circ = \frac{\Delta H^\circ - \Delta G^\circ}{T}$$

The values of ΔG° of the reaction as determined above is $-77.769 \text{ kJ mol}^{-1}$. The standard enthalpy change ΔH° can be determined experimentally by dissolving 1 mol of Cd^{2+} in a large excess of dilute acid. The value obtained is $-69.83 \text{ kJ mol}^{-1}$. Hence

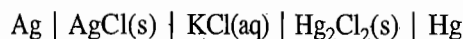
$$\Delta S^\circ = \frac{-69\,830 \text{ J mol}^{-1} + 77\,769 \text{ J mol}^{-1}}{298 \text{ K}} = 26.64 \text{ J K}^{-1} \text{ mol}^{-1}$$

$$\begin{aligned} \text{Thus } S_{\text{Cd}^{2+}}^\circ &= \Delta S^\circ - 79.12 \text{ J K}^{-1} \text{ mol}^{-1} = (26.64 - 79.12) \text{ J K}^{-1} \text{ mol}^{-1} \\ &= -52.48 \text{ J K}^{-1} \text{ mol}^{-1} \end{aligned}$$

It may be pointed here that the above standard entropy of formation of Cd^{2+} is not the absolute entropy of the Cd^{2+} ion in aqueous solution, but refers to a neutral combination of the given ion with H_3O^+ ion, i.e. $S_{\text{Cd}^{2+}}^\circ - S_{\text{H}^+}^\circ$.

Example 8.18.1

The emf of the cell



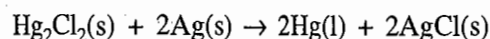
is 0.0455 V at 298 K and the temperature coefficient is $3.38 \times 10^{-4} \text{ V K}^{-1}$. What is the reaction taking place in the cell and what are free energy, enthalpy and entropy changes at 298 K ?

Solution

For the given cell, we have

Electrode	Reduction reaction	
Right	$\text{Hg}_2\text{Cl}_2\text{(s)} + 2\text{e}^- \rightarrow 2\text{Hg(l)} + 2\text{Cl}^-\text{(aq)}$	(i)
Left	$2\text{AgCl(s)} + 2\text{e}^- \rightarrow 2\text{Ag(s)} + 2\text{Cl}^-\text{(aq)}$	(ii)

Subtracting Eq. (ii) from Eq. (i), we get



The number of electrons involved at the electrode reactions is 2.

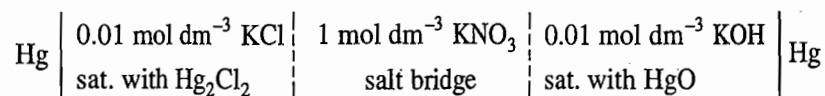
$$\begin{aligned} \text{Thus } \Delta G &= -nFE \\ &= -2(96\,500 \text{ C mol}^{-1})(0.0455 \text{ V}) = -8\,782 \text{ J mol}^{-1} \end{aligned}$$

$$\begin{aligned} \Delta H &= -nF \left[E - T \left(\frac{\partial E}{\partial T} \right)_p \right] \\ &= -2(96\,500 \text{ C mol}^{-1}) [0.0455 \text{ V} - (298 \text{ K})(3.38 \times 10^{-4} \text{ V K}^{-1})] \\ &= 2(96\,500 \text{ C mol}^{-1})(0.0552 \text{ V}) = 10\,650 \text{ J mol}^{-1} \end{aligned}$$

$$\begin{aligned} \text{and } \Delta S &= nF \left(\frac{\partial E}{\partial T} \right)_p = 2(96\,500 \text{ C mol}^{-1})(3.38 \times 10^{-4} \text{ V K}^{-1}) \\ &= 65.23 \text{ J K}^{-1} \text{ mol}^{-1} \end{aligned}$$

Example 8.18.2

At 298 K, the emf of the cell



is found to be 0.163 4 V and the temperature coefficient of the emf to be 0.000 837 V K⁻¹. Calculate the enthalpy and entropy changes of the reaction. What is the reaction that occurs in the cell?

Solution

For the given cell, we have

Electrode	Reduction reaction	
Right	$\text{HgO(s)} + \text{H}_2\text{O(l)} + 2\text{e}^- \rightarrow \text{Hg(l)} + 2\text{OH}^-(\text{aq})$	(i)
Left	$\text{Hg}_2\text{Cl}_2(\text{s}) + 2\text{e}^- \rightarrow 2\text{Hg(l)} + 2\text{Cl}^-(\text{aq})$	(ii)

Subtracting Eq. (ii) from Eq. (i), we get



The number of electrons involved in the electrode reactions is 2.

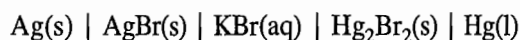
$$\text{Thus } \Delta G = -nFE = -2(96\,500 \text{ C mol}^{-1})(0.163\,4 \text{ V}) = -31\,536.2 \text{ J mol}^{-1}$$

$$\begin{aligned} \Delta H &= -nF \left[E - T \left(\frac{\partial E}{\partial T} \right)_p \right] \\ &= -2(96\,500 \text{ C mol}^{-1}) [(0.163\,4 \text{ V}) - (298 \text{ K} \times 0.000\,837 \text{ V K}^{-1})] \\ &= 16\,603 \text{ J mol}^{-1} \end{aligned}$$

$$\begin{aligned} \Delta S &= nF \left(\frac{\partial E}{\partial T} \right)_p \\ &= 2(96\,500 \text{ C mol}^{-1})(0.000\,837 \text{ V K}^{-1}) = 161.54 \text{ J K}^{-1} \text{ mol}^{-1} \end{aligned}$$

Example 8.18.3

For the cell



the emfs at several temperatures are

T/K	293	298	303
emf/V	0.066 3	0.0683 9	0.0704 8

- (a) Write the cell reaction for the passage of two-faraday of charge.
 (b) Calculate ΔG , ΔH and ΔS at 298 K.

Solution

First of all a graph between E and T was drawn and its slope was determined to yield the value of $(\partial E/\partial T)_p$ as shown in Fig. 8.18.1. The value was found to be 0.000 42 V K⁻¹

- (a) The cell reaction may be determined as follows:

Electrode	Reduction reaction	
Right	$\text{Hg}_2\text{Br}_2(\text{s}) + 2\text{e}^- \rightarrow 2\text{Hg(l)} + 2\text{Br}(\text{aq})$	(i)
Left	$2\text{AgBr(s)} + 2\text{e}^- \rightarrow 2\text{Ag(s)} + 2\text{Br}^-(\text{aq})$	(ii)

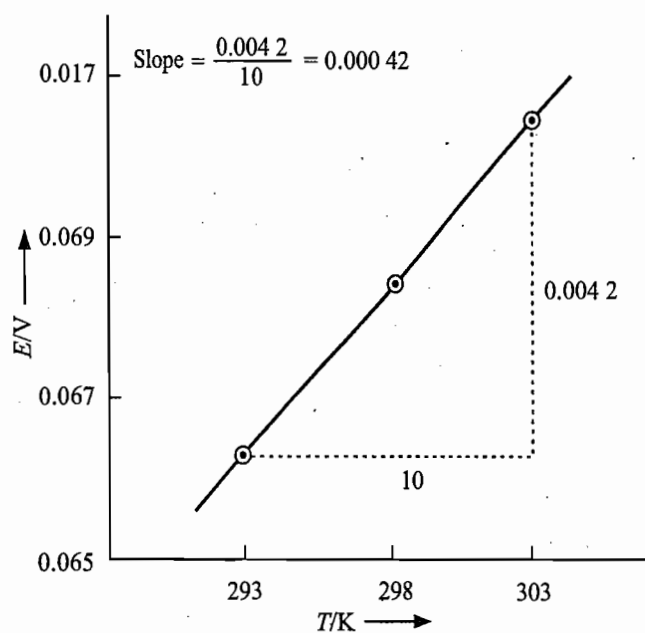
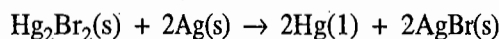


Fig. 8.18.1 The graph of E versus T

Subtracting Eq. (ii) from Eq. (i), we get



(b) Now

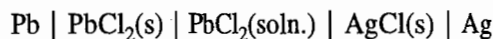
$$\Delta G = -nFE = -2(96\,500 \text{ C mol}^{-1})(0.068\,39 \text{ V}) = -13\,199.3 \text{ J mol}^{-1}$$

$$\begin{aligned} \Delta H &= -nF \left[E - T \left(\frac{\partial E}{\partial T} \right)_p \right] \\ &= -2(96\,500 \text{ C mol}^{-1}) [(0.068\,39 \text{ V}) - (298 \text{ K})(0.000\,42 \text{ V K}^{-1})] \\ &= 10\,956.6 \text{ J mol}^{-1} \end{aligned}$$

$$\begin{aligned} \Delta S &= nF \left(\frac{\partial E}{\partial T} \right)_p \\ &= 2(96\,500 \text{ C mol}^{-1})(0.000\,42 \text{ V K}^{-1}) = 81.06 \text{ J K}^{-1} \text{ mol}^{-1} \end{aligned}$$

Example 8.18.4

For the following cell



the potential at 298 K is 0.490 V and the variation of emf with temperature is given by

$$E = a - (1.86 \times 10^{-4} \text{ V K}^{-1})(T - 25 \text{ K})$$

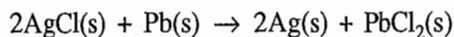
Write the equation for the cell reaction and calculate ΔG , ΔH and ΔS for the reaction at 298 K.

Solution

For the given cell, we have

Electrode	Reduction reaction	
Right	$2\text{AgCl}(\text{s}) + 2\text{e}^- \rightarrow 2\text{Ag}(\text{s}) + 2\text{Cl}^-(\text{aq})$	(i)
Left	$\text{PbCl}_2(\text{s}) + 2\text{e}^- \rightarrow \text{Pb}(\text{s}) + 2\text{Cl}^-(\text{aq})$	(ii)

Subtracting Eq. (ii) from Eq. (i), we get



Now since $E = a - (1.86 \times 10^{-4} \text{ V K}^{-1})(T - 25 \text{ K})$, therefore

$$\left(\frac{\partial E}{\partial T}\right)_p = -1.86 \times 10^{-4} \text{ V K}^{-1}$$

Hence $\Delta G = -nFE = -2(96\,500 \text{ C mol}^{-1})(0.490 \text{ V})$

$$= -94\,570 \text{ J mol}^{-1}$$

$$\Delta H = -nF \left[E - T \left(\frac{\partial E}{\partial T} \right)_p \right]$$

$$= -2(96\,500 \text{ C mol}^{-1}) [(0.490 \text{ V}) - (298 \text{ K})(-1.86 \times 10^{-4} \text{ V K}^{-1})]$$

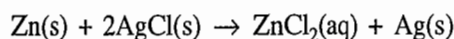
$$= -105\,267.6 \text{ J mol}^{-1}$$

$$\Delta S = nF \left(\frac{\partial E}{\partial T} \right)_p = 2(96\,500 \text{ C mol}^{-1})(-1.86 \times 10^{-4} \text{ V K}^{-1})$$

$$= -35.9 \text{ J K}^{-1} \text{ mol}^{-1}$$

Example 8.18.5

At 273 K, the calorimetric determination of ΔH for the reaction



yielded $-217.78 \text{ kJ mol}^{-1}$, while the emf of the corresponding cell was 1.015 V. What was $(\partial E/\partial T)_p$ of the cell?

Solution

From the expression

$$\Delta H = -nF \left[E - T \left(\frac{\partial E}{\partial T} \right)_p \right]$$

$$\text{we get } \left(\frac{\partial E}{\partial T} \right)_p = \frac{1}{T} \left[E + \frac{\Delta H}{nF} \right]$$

Substituting the given data, we get

$$\begin{aligned} \left(\frac{\partial E}{\partial T} \right)_p &= \frac{1}{(273 \text{ K})} \left[(1.015 \text{ V}) + \frac{(-217\,780 \text{ J mol}^{-1})}{2(96\,500 \text{ C mol}^{-1})} \right] \\ &= -4.154 \times 10^{-4} \text{ V K}^{-1} \end{aligned}$$

Example 8.18.6

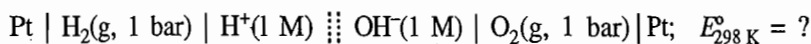
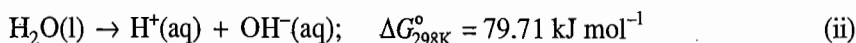
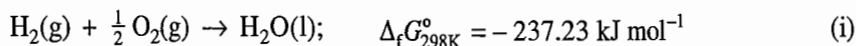
(a) At 298 K the standard free energy of formation of $\text{H}_2\text{O(1)}$ is $-237.23 \text{ kJ mol}^{-1}$, while that of its ionization to hydrogen and hydroxyl ions is $79.71 \text{ kJ mol}^{-1}$. What will be the reversible emf at 298 K of the cell



(b) The enthalpy of formation at 298 K of $\text{H}_2\text{O}(\text{l})$ is $-285.85 \text{ kJ mol}^{-1}$, while its enthalpy of ionization is $56.90 \text{ kJ mol}^{-1}$. Calculate the temperature coefficient of the standard emf at 298 K for the cell given in part (a).

Solution

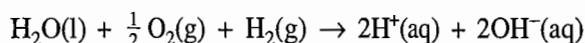
(a) The given data are



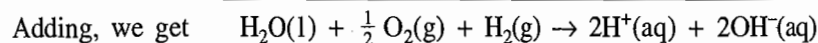
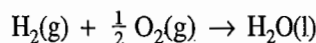
The cell reaction may be obtained as follows:

Electrode	Reduction reaction	
Right	$\text{H}_2\text{O}(\text{l}) + \frac{1}{2} \text{O}_2(\text{g}) + 2\text{e}^- \rightarrow 2\text{OH}^-(\text{aq})$	(iii)
Left	$2\text{H}^+(\text{aq}) + 2\text{e}^- \rightarrow \text{H}_2(\text{g})$	(iv)

Subtracting Eq. (iv) from Eq. (iii), we get



The above cell reaction can be obtained from the given reactions (i) and (ii) as follows.



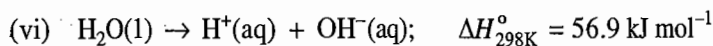
Hence, ΔG° of the cell reaction is given by

$$\Delta G^\circ = -237.23 \text{ kJ mol}^{-1} + 2(79.71 \text{ kJ mol}^{-1}) = -77.81 \text{ kJ mol}^{-1}$$

Since $\Delta G^\circ = -nFE$, it follows that

$$E = -\frac{\Delta G^\circ}{nF} = -\frac{(-77.810 \text{ kJ mol}^{-1})}{2(96500 \text{ C mol}^{-1})} = 0.403 \text{ J C}^{-1} = 0.403 \text{ V}$$

(b) The given data are



The ΔH° of the cell reaction is

$$\Delta H_{298\text{K}}^\circ = -285.85 \text{ kJ mol}^{-1} + 2(56.9 \text{ kJ mol}^{-1}) = -172.05 \text{ kJ mol}^{-1}$$

Now since

$$\Delta H^\circ = -nF \left[E^\circ - T \left(\frac{\partial E^\circ}{\partial T} \right)_p \right] = \Delta G^\circ + nFT \left(\frac{\partial E^\circ}{\partial T} \right)_p$$

therefore

$$\left(\frac{\partial E^\circ}{\partial T}\right)_p = \frac{\Delta H^\circ - \Delta G^\circ}{nFT}$$

Substituting the data, we get

$$\begin{aligned}\left(\frac{\partial E^\circ}{\partial T}\right)_p &= \frac{-172\,050\text{ J mol}^{-1} - (-77\,810\text{ J mol}^{-1})}{2(96\,500\text{ C mol}^{-1})(298\text{ K})} \\ &= -0.001\,64\text{ V K}^{-1}\end{aligned}$$

2. DETERMINATION OF EQUILIBRIUM CONSTANT FROM STANDARD CELL POTENTIAL

Derivation of the Expression

The standard equilibrium constant of a reaction is related to the standard free energy of the reaction by the relation

$$\Delta G^\circ = -RT \ln K_{\text{eq}}^\circ$$

Now since $\Delta G^\circ = -nFE_{\text{cell}}^\circ$, it follows that

$$-nFE_{\text{cell}}^\circ = -RT \ln K_{\text{eq}}^\circ$$

$$\text{or } E_{\text{cell}}^\circ = \frac{RT}{nF} \ln K_{\text{eq}}^\circ = \frac{2.303 RT}{nF} \log K_{\text{eq}}^\circ \quad (8.18.7)$$

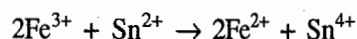
At 298 K, the above expression becomes

$$E_{\text{cell}}^\circ = \left(\frac{0.059\,13\text{ V}}{n}\right) \log K_{\text{eq}}^\circ \quad (8.18.8)$$

For a given chemical reaction, we can construct the appropriate cell and then determine its E° value from the tabulated values of standard half-cell potentials. The obtained value of E° can be substituted in Eq. (8.18.8) to give the value of the standard equilibrium constant K_{eq}° . The following problems illustrate the procedure.

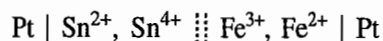
Example 8.18.7

Determine the standard equilibrium constant of the following reaction at 298 K.



Solution

In the given reaction, Fe^{3+} is reduced to Fe^{2+} (and hence constitutes right half-cell) and Sn^{2+} is oxidized to Sn^{4+} (constitutes left half-cell). Hence the cell producing the given reaction is



Its standard potential is

$$E_{\text{cell}}^\circ = E_{\text{Fe}^{3+}, \text{Fe}^{2+} \mid \text{Pt}}^\circ - E_{\text{Sn}^{4+}, \text{Sn}^{2+} \mid \text{Pt}}^\circ = 0.771\text{ V} - 0.150\text{ V} = 0.621\text{ V}$$

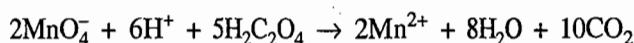
$$\begin{aligned}\text{Therefore } \log K_{\text{eq}}^{\circ} &= \frac{nFE_{\text{cell}}^{\circ}}{2.303 RT} = \frac{2(96\,500 \text{ C mol}^{-1})(0.621 \text{ V})}{2.303 (8.314 \text{ J K}^{-1} \text{ mol}^{-1})(298 \text{ K})} \\ &= 21.005\end{aligned}$$

$$\text{Hence } K_{\text{eq}}^{\circ} = 1.0 \times 10^{21}$$

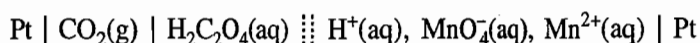
The above calculations show that the equilibrium constant of the given reaction has a very large value. It implies that Sn^{2+} can reduce Fe^{3+} quantitatively.

Example 8.18.8

Determine the standard equilibrium constant of the following reaction at 298 K.

**Solution**

In the given reaction, MnO_4^- is reduced to Mn^{2+} (and hence constitutes the right half-cell) and $\text{H}_2\text{C}_2\text{O}_4$ is oxidized to CO_2 (left half-cell). Thus, the cell producing the given reaction is



Its standard potential is

$$\begin{aligned}E_{\text{cell}}^{\circ} &= E_{\text{MnO}_4^-, \text{Mn}^{2+}, \text{H}^+ \mid \text{Pt}}^{\circ} - E_{\text{H}_2\text{C}_2\text{O}_4 \mid \text{CO}_2 \mid \text{Pt}}^{\circ} = 1.51 \text{ V} - (-0.49 \text{ V}) \\ &= 2.0 \text{ V}\end{aligned}$$

Now since $n = 10$, we have

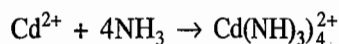
$$\begin{aligned}\log K_{\text{eq}}^{\circ} &= \frac{nFE_{\text{cell}}^{\circ}}{2.303 RT} = \frac{10 (96\,500 \text{ C mol}^{-1})(2.0 \text{ V})}{2.303 (8.314 \text{ J K}^{-1} \text{ mol}^{-1})(298 \text{ K})} \\ &= 331\end{aligned}$$

$$\text{Hence } K_{\text{eq}}^{\circ} = 10^{331}$$

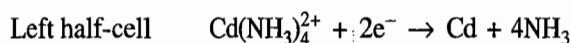
Thus, the oxidation of oxalic acid by permanganate occurs quantitatively.

Example 8.18.9

Determine the standard equilibrium constant of the following reaction at 298 K.

**Solution**

The two half-cell reactions of a cell producing the above reaction are



Hence the cell is



and its standard potential is

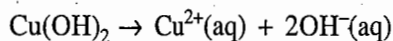
$$\begin{aligned}E_{\text{cell}}^{\circ} &= E_{\text{R}}^{\circ} - E_{\text{L}}^{\circ} = -0.40 \text{ V} - (-0.61 \text{ V}) \\ &= 0.21 \text{ V}\end{aligned}$$

$$\text{Thus } \log K_{\text{eq}}^{\circ} = \frac{nFE_{\text{cell}}^{\circ}}{2.303 RT} = \frac{2 (96\,500 \text{ C mol}^{-1})(0.21 \text{ V})}{2.303 (8.314 \text{ J K}^{-1} \text{ mol}^{-1})(298 \text{ K})} = 7.10$$

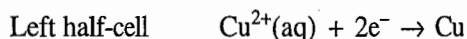
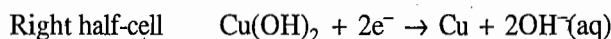
$$\text{Hence } K_{\text{eq}}^{\circ} = 1.26 \times 10^7$$

Example 8.18.10

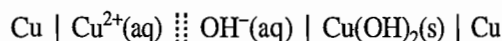
Determine the standard equilibrium constant of the following reaction at 298 K.

**Solution**

The two half-cell reactions of a cell producing the above reaction are:



Hence the cell is



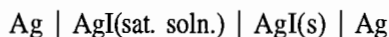
$$\begin{aligned} \text{with } E_{\text{cell}}^{\circ} &= E_{\text{R}}^{\circ} - E_{\text{L}}^{\circ} = -0.224 \text{ V} - (0.337 \text{ V}) \\ &= -0.561 \text{ V} \end{aligned}$$

$$\text{Thus } \log K_{\text{eq}}^{\circ} = \frac{nFE_{\text{cell}}^{\circ}}{2.303 RT} = \frac{2 (96\,500 \text{ C mol}^{-1})(-0.561 \text{ V})}{2.303 (8.314 \text{ J K}^{-1} \text{ mol})(298 \text{ K})} = -18.97$$

$$\text{Hence } K_{\text{eq}}^{\circ} = 1.1 \times 10^{-19}$$

Example 8.18.11

How would you use the arrangement



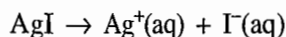
to measure the solubility product of silver iodide at 298 K?

Solution

The half-cell reactions are



The cell reaction is



The cell potential is given as

$$E_{\text{cell}} = E_{\text{cell}}^{\circ} - \frac{RT}{F} \ln (a_{\text{Ag}^{+}})(a_{\text{I}^{-}}) = E_{\text{cell}}^{\circ} - \frac{RT}{F} \ln K_{\text{sp}}^{\circ}(\text{AgI})$$

At equilibrium, we will have

$$\frac{RT}{F} \ln K_{\text{sp}}^{\circ}(\text{AgI}) = E_{\text{cell}}^{\circ}$$

At 298 K, we have

$$\begin{aligned} \log K_{\text{sp}}^{\circ}(\text{AgI}) &= \frac{E_{\text{cell}}^{\circ}}{(2.303 RT/F)} = \frac{(-0.151 \text{ V}) - (0.799 \text{ V})}{0.05913 \text{ V}} = \frac{-0.950 \text{ V}}{0.05913 \text{ V}} \\ &= -16.07 \end{aligned}$$

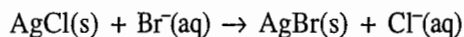
$$\text{Thus } K_{\text{sp}}^{\circ}(\text{AgI}) = 8.58 \times 10^{-17}$$

Example 8.18.12

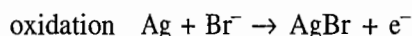
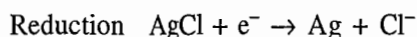
An excess of solid AgCl is added to a 0.1 mol dm^{-3} solution of Br^- ions. Assuming activity equal to ionic concentration, calculate the concentration of Cl^- and Br^- ions at equilibrium.

Solution

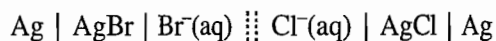
When AgCl is added to a solution containing Br^- ions, the possible reaction that can take place is



The two partial half-cell reactions of the above reaction are



Hence the above reaction will be produced by the cell



Its standard emf would be

$$E_{\text{cell}}^{\circ} = E_{\text{Cl}^- \mid \text{AgCl} \mid \text{Ag}}^{\circ} - E_{\text{Br}^- \mid \text{AgBr} \mid \text{Ag}}^{\circ}$$

Consulting the emfs table, we get

$$E_{\text{cell}}^{\circ} = 0.222 \text{ V} - 0.095 \text{ V} = 0.127 \text{ V}$$

Now since $\Delta G^{\circ} = -nFE_{\text{cell}}^{\circ} = -RT \ln K_{\text{eq}}^{\circ}$, we get

$$\log K_{\text{eq}}^{\circ} = \frac{nFE_{\text{cell}}^{\circ}}{2.303 RT}$$

Substituting the data, we get

$$\log K_{\text{eq}}^{\circ} = \frac{(1)(96\,500 \text{ C mol}^{-1})(0.127 \text{ V})}{(2.303)(8.134 \text{ J K}^{-1} \text{ mol}^{-1})(298 \text{ K})} = 2.148$$

Hence $K_{\text{eq}}^{\circ} = 140.6$

Let x be the concentration of Br^- that has converted to Cl^- at equilibrium. Thus, we will have

$$K_{\text{eq}}^{\circ} = \frac{a_{\text{Cl}^-}}{a_{\text{Br}^-}} = \frac{[\text{Cl}^-]}{[\text{Br}^-]} = \frac{x}{(0.1 \text{ mol dm}^{-3}) - x} = 140.6$$

Solving for x , we get

$$x = 0.009\,928 \text{ mol dm}^{-3}$$

Hence at equilibrium, we have

$$[\text{Cl}^-] = 0.009\,928 \text{ mol dm}^{-3}$$

$$[\text{Br}^-] = 0.1 \text{ mol dm}^{-3} - 0.009\,928 \text{ mol dm}^{-3} = 0.090\,072 \text{ mol dm}^{-3}$$

Alternative Method of Computing Equilibrium Constant

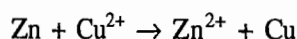
If no electrons flow when a cell is short-circuited, then its emf is zero. At this stage, the cell reaction is said to be at equilibrium. The emf of a cell can be zero only when the electrode potentials of the two electrodes are equal. Thus for a cell reaction at equilibrium, we have

$$E_R = E_L \quad (8.18.9)$$

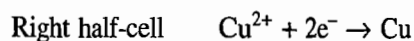
From the above equality, the value of K_{eq}° may be computed. The following example illustrates the procedure.

Example 8.18.13

Compute the equilibrium constant of the following reaction at 298 K:

**Solution**

The two half-cell reactions are



and the half-cell potentials are given as

$$E_{\text{Cu}^{2+}|\text{Cu}} = E_{\text{Cu}^{2+}|\text{Cu}}^\circ - \frac{RT}{2F} \ln \frac{1}{a_{\text{Cu}^{2+}}}$$

$$E_{\text{Zn}^{2+}|\text{Zn}} = E_{\text{Zn}^{2+}|\text{Zn}}^\circ - \frac{RT}{2F} \ln \frac{1}{a_{\text{Zn}^{2+}}}$$

To start with, let $a_{\text{Cu}^{2+}} > (a_{\text{Cu}^{2+}})_{\text{eq}}$ and $a_{\text{Zn}^{2+}} < (a_{\text{Zn}^{2+}})_{\text{eq}}$ where the subscript eq represents the activity prevailing at equilibrium. At this stage, the emf of the cell is positive indicating that $E_{\text{Cu}^{2+}|\text{Cu}} > E_{\text{Zn}^{2+}|\text{Zn}}$. If the cell is allowed to operate reversibly, $a_{\text{Cu}^{2+}}$ decreases whereas $a_{\text{Zn}^{2+}}$ is increased. Consequently, $E_{\text{Cu}^{2+}|\text{Cu}}$ decreases whereas $E_{\text{Zn}^{2+}|\text{Zn}}$ is increased. Eventually a stage will be reached where $E_{\text{Cu}^{2+}|\text{Cu}}$ becomes equal to $E_{\text{Zn}^{2+}|\text{Zn}}$ and the cell stops working. The cell reaction at this stage is at equilibrium. Hence equating the two reduction potentials, we get

$$E_{\text{Cu}^{2+}|\text{Cu}}^\circ - \frac{RT}{2F} \ln \frac{1}{(a_{\text{Cu}^{2+}})_{\text{eq}}} = E_{\text{Zn}^{2+}|\text{Zn}}^\circ - \frac{RT}{2F} \ln \frac{1}{(a_{\text{Zn}^{2+}})_{\text{eq}}}$$

On rearranging the above equation, we get

$$\frac{RT}{2F} \ln \frac{(a_{\text{Zn}^{2+}})_{\text{eq}}}{(a_{\text{Cu}^{2+}})_{\text{eq}}} = E_{\text{Cu}^{2+}|\text{Cu}}^\circ - E_{\text{Zn}^{2+}|\text{Zn}}^\circ$$

$$\text{or} \quad \log K^\circ = \frac{2F}{2.303 RT} E_{\text{cell}}^\circ$$

where K° is the required standard equilibrium constant and is given as

$$K^\circ = \left(\frac{a_{\text{Zn}^{2+}}}{a_{\text{Cu}^{2+}}} \right)_{\text{eq}}$$

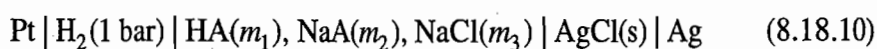
Substituting $E_{\text{Cu}^{2+}|\text{Cu}}^{\circ}$ and $E_{\text{Zn}^{2+}|\text{Zn}}^{\circ}$, we get

$$\log K^{\circ} = \frac{2 \times (96\,500 \text{ C mol}^{-1})(0.337 \text{ V} - (-0.763 \text{ V}))}{2.303 \times (8.314 \text{ J K}^{-1} \text{ mol}^{-1})(298 \text{ K})} = 37.207$$

Hence $K^{\circ} = 1.6 \times 10^{37}$

3. DETERMINATION OF ACCURATE VALUE OF DISSOCIATION CONSTANT OF A WEAK ACID

The accurate value of the dissociation constant of a weak acid HA can be determined by using the cell



where NaA is a salt formed from the given acid HA and the strong base NaOH. In addition to NaA, the electrolytic solution also contains a salt which contains same cation as the salt NaA and anion common with that of the electrode anion. In this particular case, the chosen salt is NaCl. The emf of the above cell is given by

$$E_{\text{cell}} = E_{\text{Cl}^- | \text{AgCl} | \text{Ag}} - E_{\text{H}^+ | \text{H}_2 | \text{Pt}}$$

$$\begin{aligned} \text{or} \quad E_{\text{cell}} &= E_{\text{Cl}^- | \text{AgCl} | \text{Ag}}^{\circ} - \frac{RT}{F} \ln a_{\text{Cl}^-} + \frac{RT}{F} \ln \frac{1}{a_{\text{H}^+}} \\ &= E_{\text{Cl}^- | \text{AgCl} | \text{Ag}}^{\circ} - \frac{RT}{F} \ln (a_{\text{H}^+})(a_{\text{Cl}^-}) \end{aligned}$$

Replacing the activities in terms of molalities and activity coefficients, we get

$$E_{\text{cell}} = E_{\text{Cl}^- | \text{AgCl} | \text{Ag}}^{\circ} - \frac{RT}{F} \ln (m'_{\text{H}^+} m'_{\text{Cl}^-})(\gamma_{\text{H}^+} \gamma_{\text{Cl}^-})$$

which on rearranging gives

$$\frac{F(E_{\text{cell}} - E_{\text{Cl}^- | \text{AgCl} | \text{Ag}}^{\circ})}{RT} = -\ln m'_{\text{H}^+} m'_{\text{Cl}^-} - \ln \gamma_{\text{H}^+} \gamma_{\text{Cl}^-} \quad (8.18.11)$$

$$\text{Now} \quad K_a^{\circ} = \frac{(a_{\text{H}^+})(a_{\text{A}^-})}{a_{\text{HA}}} = \frac{(m'_{\text{H}^+} \gamma_{\text{H}^+})(m'_{\text{A}^-} \gamma_{\text{A}^-})}{(m'_{\text{HA}} \gamma_{\text{HA}})}$$

Taking logarithm, we get

$$\ln K_a^{\circ} = \ln \frac{m'_{\text{H}^+} m'_{\text{A}^-}}{m'_{\text{HA}}} + \ln \frac{\gamma_{\text{H}^+} \gamma_{\text{A}^-}}{\gamma_{\text{HA}}} \quad (8.18.12)$$

Substituting Eq. (8.18.12) in Eq. (8.18.11), we get

$$\frac{F(E_{\text{cell}} - E_{\text{Cl}^- | \text{AgCl} | \text{Ag}}^{\circ})}{RT} = -\ln \frac{m'_{\text{HA}} m'_{\text{Cl}^-}}{m'_{\text{A}^-}} - \ln \frac{\gamma_{\text{HA}} \gamma_{\text{Cl}^-}}{\gamma_{\text{A}^-}} - \ln K_a^{\circ}$$

$$\text{or } \frac{F(E_{\text{cell}} - E_{\text{Cl}^-|\text{AgCl}|\text{Ag}}^\circ)}{RT} + \ln \frac{m'_{\text{HA}} m'_{\text{Cl}^-}}{m'_{\text{A}^-}} = - \ln \frac{\gamma_{\text{HA}} \gamma_{\text{Cl}^-}}{\gamma_{\text{A}^-}} - \ln K_a^\circ \quad (8.18.13)$$

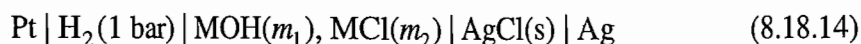
The emf of the cell is measured at various values of m_{HA} , m_{Cl^-} and m_{A^-} . The left side of Eq. (8.18.13) is evaluated and plotted as a function of the ionic strength μ of the solution. The latter can be calculated from the expression

$$\mu = \frac{1}{2} \sum_i c_i z_i^2$$

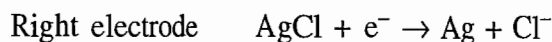
where the summation is to be carried over all ions in the solution. The graph obtained is extrapolated to zero ionic strength. As μ approaches zero, all activity coefficients approach unity. Now according to Eq. (8.18.13), the extrapolated value (or intercept) is equal to $-\ln K_a^\circ$ and hence K_a° can be determined.

4. DETERMINATION OF ACCURATE VALUE OF IONIC PRODUCT OF WATER

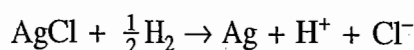
The accurate value of ionic product of water can be determined by using the cell



The two half-cell reduction reactions are



and thus the cell reaction is



The emf of the cell is given by

$$E = E^\circ - \frac{RT}{F} \ln (a_{\text{H}^+})(a_{\text{Cl}^-})$$

Replacing a_{H^+} by $K_w^\circ/a_{\text{OH}^-}$, we get

$$\begin{aligned} E &= E^\circ - \frac{RT}{F} \ln K_w^\circ - \frac{RT}{F} \ln \frac{a_{\text{Cl}^-}}{a_{\text{OH}^-}} \\ &= E^\circ - \frac{RT}{F} \ln K_w^\circ - \frac{RT}{F} \ln \frac{m'_{\text{Cl}^-}}{m'_{\text{OH}^-}} - \frac{RT}{F} \ln \frac{\gamma_{\text{Cl}^-}}{\gamma_{\text{OH}^-}} \end{aligned}$$

$$\text{or } \frac{E - E^\circ}{RT/F} + \ln \frac{m'_{\text{Cl}^-}}{m'_{\text{OH}^-}} = - \ln K_w^\circ - \ln \frac{\gamma_{\text{Cl}^-}}{\gamma_{\text{OH}^-}} \quad (8.18.15)$$

If the left side of Eq. (8.18.15) is plotted as a function of ionic strength (or $\sqrt{\text{ionic strength}}$, which gives a rather better plot) and $-\ln K_w^\circ$ is determined as the intercept at $\mu = 0$ where $\gamma_{\text{Cl}^-}/\gamma_{\text{OH}^-} = 1$. From the value obtained for $-\ln K_w^\circ$, K_w° can be determined.

Example 8.18.14

The following emfs refer to the cell at 298 K:

Pt H ₂ (1 bar) LiOH(0.01 mol dm ⁻³), LiCl(<i>m</i>) AgCl(s) Ag					
<i>m</i> /mol dm ⁻³	0.01	0.02	0.05	0.10	0.20
<i>E</i> /V	1.049 5	1.031 5	1.007 3	0.988 5	0.969 4

The standard potential of silver-silver chloride half-cell is 0.222 5 V. Determine the ionic product of water.

Solution

The emf of the given cell is

$$\begin{aligned} E_{\text{cell}} &= E_{\text{Cl}^- | \text{AgCl} | \text{Ag}} - E_{\text{H}^+ | \text{H}_2 | \text{Pt}} \\ &= E_{\text{Cl}^- | \text{AgCl} | \text{Ag}}^\circ - \frac{RT}{F} \ln (a_{\text{H}^+})(a_{\text{Cl}^-}) \end{aligned}$$

Since $K_w^\circ = (a_{\text{H}^+})(a_{\text{OH}^-})$, we have

$$E_{\text{cell}} = E_{\text{Cl}^- | \text{AgCl} | \text{Ag}}^\circ - \frac{RT}{F} \ln K_w^\circ - \frac{RT}{F} \ln \frac{a_{\text{Cl}^-}}{a_{\text{OH}^-}}$$

or
$$E_{\text{cell}} = E_{\text{Cl}^- | \text{AgCl} | \text{Ag}}^\circ - \frac{RT}{F} \ln K_w^\circ - \frac{RT}{F} \ln \frac{m'_{\text{Cl}^-}}{m'_{\text{OH}^-}} - \frac{RT}{F} \ln \frac{\gamma_{\text{Cl}^-}}{\gamma_{\text{OH}^-}}$$

On rearranging, we get

$$\frac{E_{\text{cell}} - E_{\text{Cl}^- | \text{AgCl} | \text{Ag}}^\circ}{2.303 RT/F} + \log \frac{m'_{\text{Cl}^-}}{m'_{\text{OH}^-}} = -\log K_w^\circ - \log \frac{\gamma_{\text{Cl}^-}}{\gamma_{\text{OH}^-}} \quad (8.18.16)$$

Thus if the left side of Eq. (8.18.16) is plotted against ionic strength and extrapolated to zero ionic strength (where γ_{Cl^-} and γ_{OH^-} approach unity), the extrapolated value will be equal to $-\log K_w^\circ$. Table 8.18.1 includes the values of left side of Eq. (8.18.16) and the corresponding ionic strengths for the given values of *m* of LiCl.

Table 8.18.1 Values of *m* and the left side of Eq. (8.18.16) For the Various Values of *m*

<i>m</i> /mol dm ⁻³	μ /mol dm ⁻³	$\frac{E_{\text{cell}} - E_{\text{Cl}^- \text{AgCl} \text{Ag}}^\circ}{0.05913 \text{ V}} + \log \left(\frac{m}{0.01 \text{ mol dm}^{-3}} \right)$
0.01	0.02	13.986 + 0.000 = 13.986
0.02	0.03	13.682 + 0.301 = 13.983
0.05	0.06	13.273 + 0.699 = 13.972
0.10	0.11	12.955 + 1.000 = 13.955
0.20	0.21	12.631 + 1.301 = 13.932

The graph between $(E_{\text{cell}} - E_{\text{Cl}^- | \text{AgCl} | \text{Ag}}^{\circ})/0.05913 \text{ V} + \log (m/0.01 \text{ mol dm}^{-3})$ and μ is shown in Fig. 8.18.2.

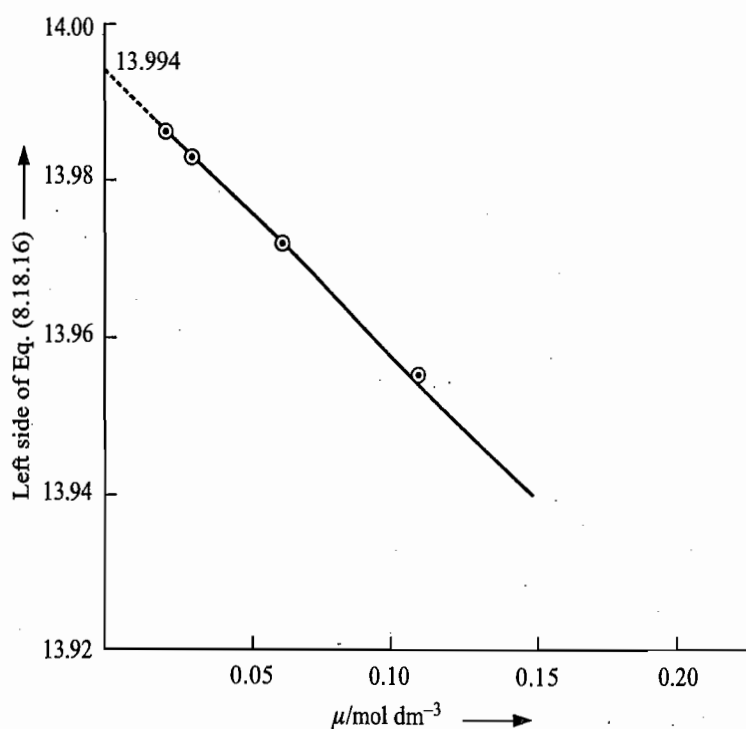


Fig. 8.18.2 Graph between $\{(E_{\text{cell}} - E_{\text{Cl}^- | \text{AgCl} | \text{Ag}}^{\circ})/0.05913 \text{ V}\} + \log (m/0.01 \text{ mol dm}^{-3})$ and μ

From the graph, we observe that

$$\text{Intercept} = -\log K_w^{\circ} = \text{p}K_w^{\circ} = 13.994$$

$$\text{Hence } K_w^{\circ} = 1.01 \times 10^{-14}$$

5. DETERMINATION OF pH OF A SOLUTION

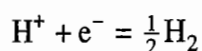
If the half-cell reaction involves either H^+ ion or OH^- ion, the electrode potential depends on the activity of H^+ ions in the solution. The latter is usually represented on the pH scale[†] which is defined as

$$\text{pH} = -\log a_{\text{H}^+} \approx -\log \{[\text{H}^+]/\text{mol dm}^{-3}\}$$

Alternatively, if the electrode potential and the activities (or fugacities if gases are involved) of species other than H^+ ions involved in the half-cell reaction are known, we can calculate the activity of H^+ ions or pH of the solution. Among the electrodes used to measure pH are the hydrogen electrode, the quinhydrone electrode and the glass electrode. We now describe these electrodes one by one.

Hydrogen Electrode

The equilibrium reaction at the electrode is



[†]In potentiometric method, we involve activities (or effective concentrations) rather than the concentrations. We can extend the definition to $\text{pH} = -\log a_{\text{H}^+}$ in spite of the fact that the activity of individual ions has no practical significance. For the operational definition of pH, See Annexure III.

The potential adopted is given by

$$E = -\frac{RT}{F} \ln \frac{(f_{\text{H}_2}/f^\circ)^{1/2}}{(a_{\text{H}^+})}$$

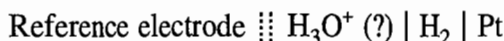
Assuming H_2 gas to be an ideal gas with its pressure equal to 1 bar, the potential of the electrode becomes

$$E = -\frac{RT}{F} \ln \frac{1}{a_{\text{H}^+}} = -\frac{2.303 RT}{F} \text{pH}$$

At 298 K, we have

$$E = -(0.05913 \text{ V}) \text{pH} \quad (8.18.17)$$

The hydrogen electrode is coupled with a reference electrode to form the cell.



and its emf, E_{cell} , is determined experimentally. At 298 K, we have

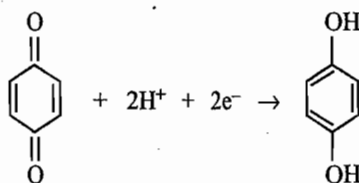
$$E_{\text{cell}} = E_{\text{R}} - E_{\text{L}} = -(0.05913 \text{ V}) \text{pH} - E_{\text{reference}}$$

Hence
$$\text{pH} = -\frac{E_{\text{cell}} + E_{\text{reference}}}{(0.05913 \text{ V})} \quad (8.18.18)$$

In practice, the use of hydrogen electrode for determination is severely limited in that it may not be used in solutions containing reducible materials and is easily poisoned by catalytic poisons. The latter hinders the establishment of the equilibrium at the surface and the electrode no longer behaves reversibly.

Quinhydrone Electrode

Quinhydrone is the name given to the molecular crystal formed between quinone (Q) and hydroquinone (QH_2). When dissolved in water, the crystal decomposes into its constituent compounds. The reduction reaction at the electrode is



The quinhydrone electrode consists of a spiral of gold wire immersed in the solution whose pH is to be determined. The solution is saturated with quinhydrone. The reduction potential of the electrode is given by

$$E_{\text{Q, QH}_2, \text{H}^+ | \text{Au}} = E_{\text{Q, QH}_2, \text{H}^+ | \text{Au}}^\circ - \frac{RT}{2F} \ln \frac{a_{\text{QH}_2}}{(a_{\text{Q}})(a_{\text{H}^+})^2} \quad (8.18.19)$$

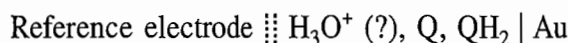
where $E_{\text{Q, QH}_2, \text{H}^+ | \text{Au}}^\circ$ has a value of 0.6996 V.

In solution, the activities of Q and QH₂ are equal. Thus Eq. (8.18.19) modifies to

$$E_{\text{Q, QH}_2, \text{H}^+ | \text{Au}} = E_{\text{Q, QH}_2, \text{H}^+ | \text{Au}}^{\circ} - \frac{RT}{2F} \ln \frac{1}{(a_{\text{H}^+})^2}$$

or
$$E_{\text{Q, QH}_2, \text{H}^+ | \text{Au}} = E_{\text{Q, QH}_2, \text{H}^+ | \text{Au}}^{\circ} - \frac{2.303 RT}{F} \text{pH} \quad (8.18.20)$$

The quinhydrone electrode can be coupled with a reference electrode to form a cell:



and its emf is determined experimentally. We have

$$E_{\text{cell}} = E_{\text{R}} - E_{\text{L}}$$

or
$$E_{\text{cell}} = E_{\text{Q, QH}_2, \text{H}^+ | \text{Au}}^{\circ} - \frac{2.303 RT}{F} \text{pH} - E_{\text{reference}}$$

Hence
$$\text{pH} = \frac{E_{\text{Q, QH}_2, \text{H}^+ | \text{Au}}^{\circ} - E_{\text{reference}} - E_{\text{cell}}}{2.303 RT/F}$$

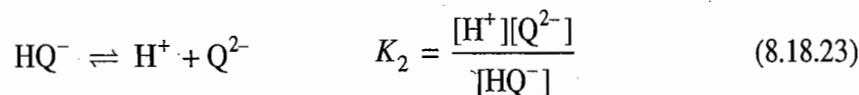
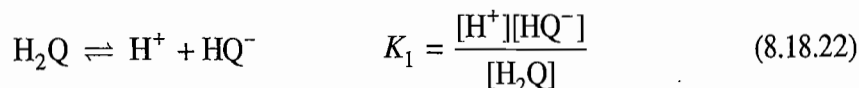
At 298 K, have

$$\text{pH} = \frac{E_{\text{Q, QH}_2, \text{H}^+ | \text{Au}}^{\circ} - E_{\text{reference}} - E_{\text{cell}}}{0.05913 \text{ V}} \quad (8.18.21)$$

Limitation of using Eq. (8.18.21)

The linear relation between electrode potential and pH of the solution (Eq. 8.18.20) holds good only up to certain pH value (\approx up to 8.5). Beyond this pH, the relation is no longer linear as may be seen from the following considerations.

The hydroquinone is a weak acid and it dissociates in a stepwise manner as shown below:



Mass-balance expression gives

$$[\text{H}_2\text{Q}]_0 = [\text{H}_2\text{Q}] + [\text{HQ}^-] + [\text{Q}^{2-}] \quad (8.18.24)$$

The [HQ⁻] and [Q²⁻] are related to [H₂Q] through the equilibrium constants K₁ and K₂. Thus

$$[\text{H}_2\text{Q}]_0 = [\text{H}_2\text{Q}] + \frac{K_1[\text{H}_2\text{Q}]}{[\text{H}^+]} + \frac{K_1K_2[\text{H}_2\text{Q}]}{[\text{H}^+]^2} \quad (8.18.25)$$

or

$$[\text{H}_2\text{Q}] = \frac{[\text{H}_2\text{Q}]_0}{\left(1 + \frac{K_1}{[\text{H}^+]} + \frac{K_1K_2}{[\text{H}^+]^2}\right)} = \frac{[\text{H}_2\text{Q}]_0[\text{H}^+]^2}{[\text{H}^+]^2 + K_1[\text{H}^+] + K_1K_2} \quad (8.18.26)$$

Since the solubility of quinhydrone is low, the activities of Q and QH_2 may be replaced by their concentrations, Substituting the concentration of QH_2 from Eq. (8.18.26) into Eq. (8.18.19), we get

$$E_{\text{Q, QH}_2, \text{H}^+ | \text{Au}} = E_{\text{Q, QH}_2, \text{H}^+ | \text{Au}}^\circ - \frac{RT}{2F} \ln \left[\frac{[\text{H}_2\text{Q}]_0 c^{\circ 2}}{[\text{Q}]_0([\text{H}^+]^2 + K_1[\text{H}^+] + K_1K_2)} \right] \quad (8.18.27)$$

where c° is the unit concentration. Since $[\text{H}_2\text{Q}]_0 = [\text{Q}]_0$, therefore

$$E_{\text{Q, QH}_2, \text{H}^+ | \text{Au}} = E_{\text{Q, QH}_2, \text{H}^+ | \text{Au}}^\circ + \frac{RT}{2F} \ln \left[\frac{[\text{H}^+]^2 + K_1[\text{H}^+] + K_1K_2}{c^{\circ 2}} \right] \quad (8.18.28)$$

Applicability of Eq. (8.18.28)

- In acid solution, we have

$$[\text{H}^+]^2 \gg K_1K_2 + K_1[\text{H}^+]$$

and thus Eq. (8.18.28) reduces to

$$E_{\text{Q, QH}_2, \text{H}^+ | \text{Au}} = E_{\text{Q, QH}_2, \text{H}^+ | \text{Au}}^\circ + \frac{RT}{F} \ln \left\{ \frac{[\text{H}^+]}{c^\circ} \right\}$$

or

$$E_{\text{Q, QH}_2, \text{H}^+ | \text{Au}} = E_{\text{Q, QH}_2, \text{H}^+ | \text{Au}}^\circ - \frac{2.303RT}{F} \text{pH} \quad (8.18.29)$$

If $K_1[\text{H}^+] \gg [\text{H}^+]^2 + K_1K_2$, then Eq. (8.18.28) becomes

$$E_{\text{Q, QH}_2, \text{H}^+ | \text{Au}} = E_{\text{Q, QH}_2, \text{H}^+ | \text{Au}}^\circ + \frac{RT}{2F} \ln K_1^\circ - \frac{2.303RT}{2F} \text{pH} \quad (8.18.30)$$

- In alkaline solution where

$$K_1K_2 \gg K_1[\text{H}^+] + [\text{H}^+]^2$$

we have

$$E_{\text{Q, QH}_2, \text{H}^+ | \text{Au}} = E_{\text{Q, QH}_2, \text{H}^+ | \text{Au}}^\circ + \frac{RT}{2F} \ln K_1^\circ K_2^\circ \quad (8.18.31)$$

that is, the potential is independent of pH.

Equation (8.18.29) holds for $\text{pH} < 7$; above this pH hydroquinone undergoes partial ionization and atmospheric oxidation. The quinhydrone electrode is not useful if the solution contains oxidizing or reducing substances.

Example 8.18.15

Determine at 298 K for the cell



- its emf when $\text{pH} = 5.0$,
- the pH when $E_{\text{cell}} = 0$,
- the positive electrode when $\text{pH} = 7.5$.

Solution

For the given cell, we have

Electrode	Reaction	Potential
Right (1 M calomel)		$E_{\text{calomel}} = E_{\text{calomel}}^{\circ}$
Left (quinhydrone)	$\frac{1}{2}\text{Q} + \text{H}^+ + \text{e}^- = \frac{1}{2}\text{QH}_2$	$E_{\text{Q, QH}_2, \text{H}^+ \text{Pt}} = E_{\text{Q, QH}_2, \text{H}^+ \text{Pt}}^{\circ} - \frac{RT}{F} \ln \frac{1}{a_{\text{H}^+}}$

The emf of the cell is

$$\begin{aligned} E_{\text{cell}} &= E_{\text{calomel}} - E_{\text{Q, QH}_2, \text{H}^+ | \text{Pt}} \\ &= (E_{\text{calomel}}^{\circ} - E_{\text{Q, QH}_2, \text{H}^+ | \text{Pt}}^{\circ}) + \frac{RT}{F} \ln \frac{1}{a_{\text{H}^+}} \end{aligned}$$

At 298 K, we have

$$\begin{aligned} E_{\text{cell}} &= (E_{\text{calomel}}^{\circ} - E_{\text{Q, QH}_2, \text{H}^+ | \text{Pt}}^{\circ}) + (0.05913 \text{ V}) \text{pH} \\ &= (0.280 \text{ V} - 0.6996 \text{ V}) + (0.05913 \text{ V}) \text{pH} \\ &= -0.4196 \text{ V} + (0.05913 \text{ V}) \text{pH} \end{aligned}$$

Thus, we have

$$(a) \quad E_{\text{cell}} = -0.4196 \text{ V} + (0.05913 \text{ V}) \times 5 = -0.1239 \text{ V}$$

$$(b) \quad \text{pH} = \frac{1}{(0.05913 \text{ V})} (E_{\text{cell}} + 0.4196 \text{ V}) = \frac{0.4196 \text{ V}}{0.05913 \text{ V}} = 7.1$$

$$(c) \quad E_{\text{cell}} = -0.4196 \text{ V} + (0.05913 \text{ V}) \times 7.5 = 0.0239 \text{ V}$$

Since E_{cell} is positive, the cell as written would give a spontaneous reaction. Hence the calomel electrode acts as the positive terminal of the cell.

Glass Electrode

The glass electrode consists of a glass tube terminating in a thin-walled bulb A as shown in Fig. 8.18.3. A special glass of relatively low melting point and high electrical conductance is used for this purpose. The bulb contains a solution of constant hydrogen-ion concentration and an electrode of definite potential. Usually either silver-silver chloride electrode dipped in 0.1 mol dm^{-3} solution of hydrochloric acid or a platinum wire inserted in a pH 4.0 buffer solution containing

a small quantity of quinhydrone is employed. The bulb is inserted in a solution whose pH is to be determined. The resulting half-cell is combined with a reference electrode (say, for example, the calomel electrode) through a salt bridge. This entire assembly constitutes a cell which may be represented as

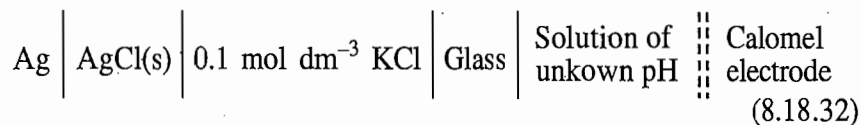
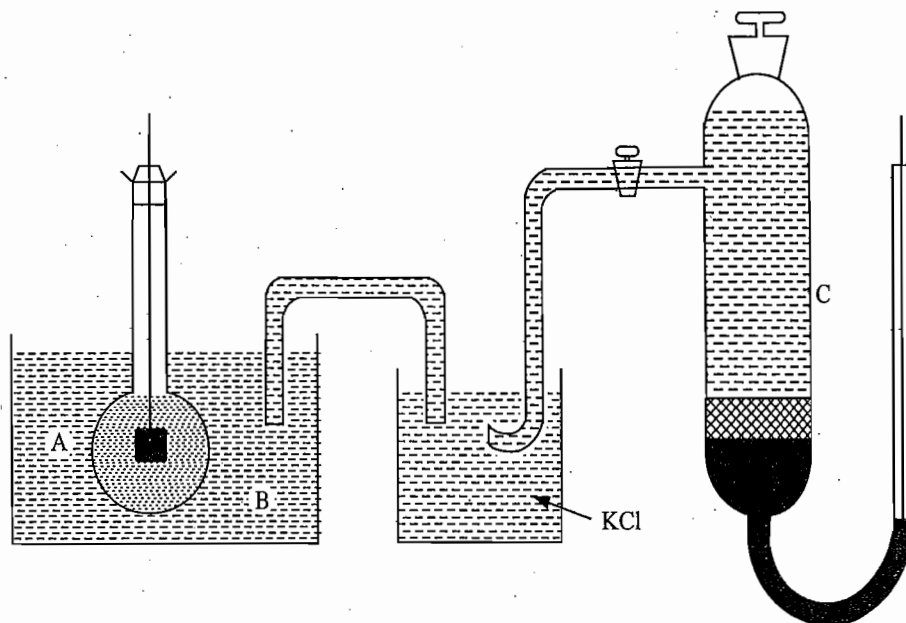


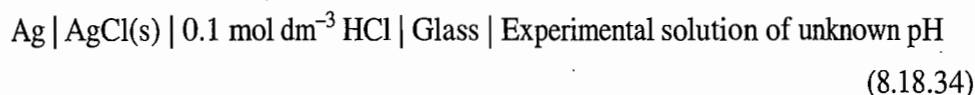
Fig. 8.18.3 Determination of pH of the solution with the cell containing glass electrode



The emf of the cell is given by

$$E_{\text{cell}} = E_{\text{R}} - E_{\text{L}} \quad (8.18.33)$$

where E_{R} is the reduction potential of the reference electrode and E_{L} is that of the rest of unit, i.e.



The value of E_{L} is experimentally found to be dependent on the difference of pH of solutions on either side of glass. Since pH of the solution within the bulb remains constant, the potential E_{L} depends on pH of the experimental solution. This dependence is given by

$$\begin{aligned} E_{\text{glass}} &= E_{\text{glass}}^{\circ} - \frac{RT}{F} \ln a_{\text{H}^+} \\ &= E_{\text{glass}}^{\circ} + \frac{2.303 RT}{F} \text{pH} \end{aligned} \quad (8.18.35)$$

where a_{H^+} is the activity of hydrogen-ions in the experimental solution. The standard reduction potential of the glass electrode is usually determined experimentally as all glass electrodes do not have the same value. For this, a buffer solution of known pH is taken and the glass electrode is dipped into this

and the emf of the cell (Eq. 8.18.32) is determined. From this emf, E_{glass} can be determined as follows:

$$\begin{aligned} E_{\text{cell}} &= E_{\text{calomel}} - E_{\text{glass}} \\ &= E_{\text{calomel}} - E_{\text{glass}}^{\circ} - \frac{2.303 RT}{F} \text{pH} \end{aligned}$$

$$\text{Thus } E_{\text{glass}}^{\circ} = E_{\text{calomel}} - E_{\text{cell}} - \frac{2.303 RT}{F} \text{pH}$$

After this, the glass electrode is dipped into the solution whose pH is to be determined and then pH is calculated with E_{glass}° found above.

Theory Underlying Glass Electrode

The theory of glass electrode has been explained on the basis of the transfer of hydrogen ions through the glass. The potential set up at the glass-solution interface is analogous to junction potential between two solutions containing hydrogen ions (Section 8.20), the value of such a potential is given by

$$E = (t_{-} - t_{\text{H}^{+}}) \frac{RT}{F} \ln \frac{a_2}{a_1} \quad (8.18.36)$$

where a_2 and a_1 are the hydrogen-ion activities of outer and inner solutions, respectively. Since in the glass electrode only hydrogen ions can move across the boundary, we have

$$t_{-} = 0 \text{ and } t_{\text{H}^{+}} = 1 \quad (8.18.37)$$

Thus, Eq. (8.18.36) reduces to

$$E = - \frac{RT}{F} \ln \frac{a_2}{a_1}$$

Since a_1 is constant (inner solution), it follows that

$$E = \text{constant} - \frac{RT}{F} \ln a_2$$

$$\text{or } E = \text{constant} + \frac{2.303 RT}{F} \text{pH} \quad (8.18.38)$$

Equation (8.18.38) is identical in form with the experimentally derived Eq. (8.18.35).

Limitations of Glass Electrode

Because of the high internal resistance of the glass electrode, which may amount to as much as 100 million ohms, ordinary potentiometers cannot be used to measure emf of cell. Instead, special vacuum tube potentiometers are employed. With the glass electrode, it is possible to measure with an accuracy of about 0.0005 volt or 0.01 pH unit.

The glass electrode can be used up to pH 9. It is unaffected by poisoning and oxidizing and reducing agents. If the solution pH is greater than 9, particularly when sodium ions are present, the experimentally obtained pH value is usually lower than the true value. This is probably due to infiltration of sodium ions into

the glass lattice. However, new glasses have been developed with which pH range can be extended up to 13 or 14.

Example 8.18.16

In a cell consisting of glass electrode in solution with pH of 7.0 and a calomel electrode, the emf of glass electrode at 298 K was 0.062 V. When a solution of unknown pH replaced the standard buffer, the glass electrode potential was 0.145 V with the glass electrode negative. Calculate the unknown pH if during calibration, the glass electrode was (a) negative, and (b) positive.

Solution

(a) *Glass electrode as the negative terminal* The emf of the glass electrode at 298 K is given by

$$E_{\text{glass}} = E_{\text{glass}}^{\circ} + (0.05913 \text{ V}) \text{pH}$$

where E_{glass}° is a constant. Its value can be determined from the given data that $E_{\text{glass}} = 0.062 \text{ V}$ at $\text{pH} = 7$. Thus

$$E_{\text{glass}}^{\circ} = E_{\text{glass}} - (0.05913 \text{ V}) \text{pH} = 0.062 \text{ V} - (0.05913 \text{ V}) \times 7 = -0.352 \text{ V}$$

Thus when $E_{\text{glass}} = 0.145 \text{ V}$

$$\text{pH} = \frac{(E_{\text{glass}} - E_{\text{glass}}^{\circ})}{0.05913 \text{ V}} = \frac{0.145 \text{ V} + 0.352 \text{ V}}{0.05913 \text{ V}} = 8.4$$

(b) *Glass electrode as the positive terminal* Here

$$E_{\text{glass}} = -0.062 \text{ V}$$

Therefore

$$\begin{aligned} E_{\text{glass}}^{\circ} &= E_{\text{glass}} - 0.05913 \text{ V pH} = -0.062 \text{ V} - (0.05913 \text{ V}) \times 7 \\ &= -0.476 \text{ V} \end{aligned}$$

$$\text{Hence } \text{pH} = \frac{(E_{\text{glass}} - E_{\text{glass}}^{\circ})}{0.05913 \text{ V}} = \frac{0.145 \text{ V} + 0.476 \text{ V}}{0.05913 \text{ V}} = 10.5$$

6. POTENTIOMETRIC TITRATIONS

Principle Underlying Potentiometric Titrations

The potential measurements provide one of the most important analytical techniques for carrying out acid-base, redox and precipitation titrations.[†] The equivalence point of titrations can be determined accurately without making use of any visual indicators. The principle underlying the potentiometric titrations is the Nernst equation according to which the potential of an electrode depends upon the activities of reduced and oxidized forms of the involved redox couple. During titration, the activities of these species vary, which in turn, varies the potential of the electrode. The variation in potential is gradual in the beginning but becomes faster as the equivalence point is reached. The variation is maximum at the equivalence point and becomes lesser and lesser beyond the equivalence point. Thus at the equivalence point, one observes a point of inflexion.

[†]See Section 8.19 for the construction of potentiometric titration curves.

The potential of the electrode under study (known as indicator electrode) is determined as usual by combining it with a reference electrode and then determining the emf of the cell. Calomel electrode is usually employed as the reference electrode. The equivalence point of titration is determined graphically. A plot between the potential of the electrode (or the emf of the constructed cell) and the volume of added titrant is drawn. Figure 8.18.4 displays a typical variation in the potential of electrode against the volume of added titrant. The equivalence point of the titration which corresponds to the point of inflexion can be determined from the graph and the corresponding abscissa gives the volume of added titrant at the equivalence point.

Location of Equivalence Point

A more exact method to locate the equivalence point is to construct a graph between $\Delta E/\Delta V$ and V , where V stands for the volume of titrant added. Figure 8.18.5 displays the typical graph of $\Delta E/\Delta V$ versus V . The maximum on the curve gives the equivalence point of the titration. In addition to the above procedure, a graph of $\Delta^2 E/\Delta V^2$ versus V or $(\Delta V/\Delta E)/\bar{V}$ versus \bar{V} , where \bar{V} is the mean volume at each point, may be drawn (Figs 8.18.6 and 8.18.7). In the graph of second derivative, the second derivative has a zero value at the equivalence point and has different signs before and after the equivalence point. In the graph between $(\Delta V/\Delta E)/\bar{V}$ and \bar{V} , two straight lines are observed whose intersection point gives the equivalence point.

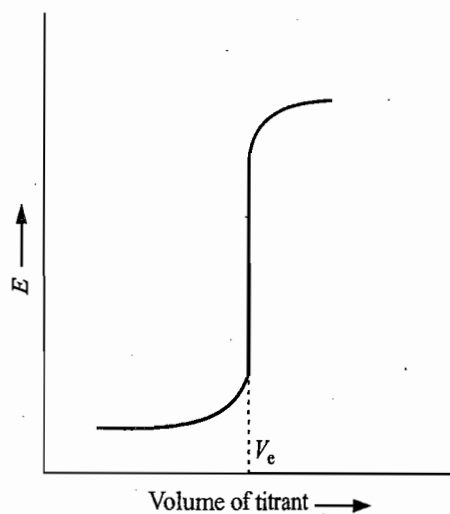


Fig. 8.18.4 A typical potentiometric titration curve

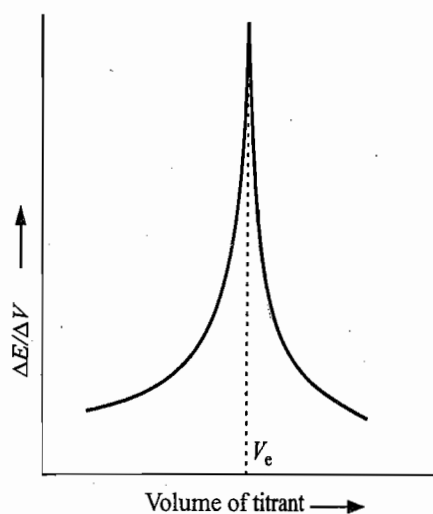


Fig. 8.18.5 A typical first derivative graph

Applicability of Potentiometric Titrations

Potentiometric titrations constitute the most versatile method of electrochemical analysis and practically every analytical determination of both inorganic and organic systems carried out with classical method could be performed potentiometrically. The technique offers notable advantages in extending the range of usefulness of conventional methods. For example, the titration between weak acid and weak base, titrations in coloured solutions, titrations in non-aqueous media (where indicators cannot be used), and differential determinations of two or more than two substances with different solubility products or with different redox potentials can be carried out by using the potentiometric method.

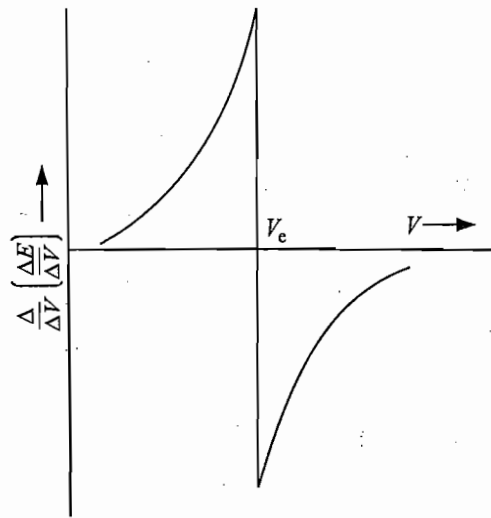


Fig. 8.18.6 A typical second derivative graph

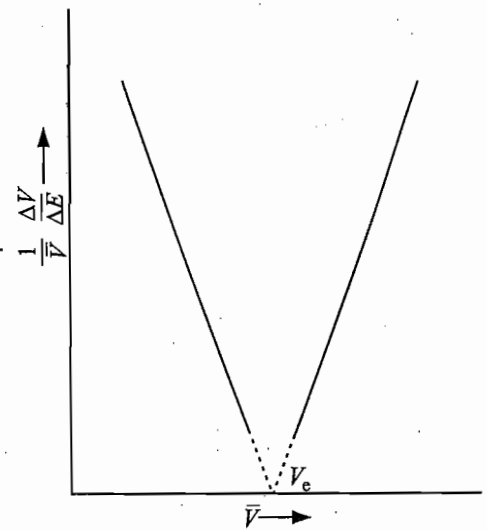


Fig. 8.18.7 A typical graph between $(\Delta V/\Delta E)/\bar{V}$ and \bar{V} (Gran's method)

8.19 CONSTRUCTION OF POTENTIOMETRIC TITRATION CURVES

In this section, we describe the procedure for constructing potentiometric titration curves for (1) acid-base titrations, (2) redox titrations, and (3) precipitation titrations.

Throughout this section, activity of an ion is replaced by the numerical value of its concentration.

ACID-BASE TITRATIONS

In acid-base titrations, the hydrogen-ion concentration varies during the course of titration. The indicator electrode employed in titration is either the quinhydrone electrode or the glass electrode. The potential of the electrode is given as follows.

Quinhydrone Electrode

$$E_{Q, QH_2, H^+ | Pt} = E_{Q, QH_2, H^+ | Pt}^{\circ} - \frac{2.303 RT}{F} \text{pH} \quad (8.19.1)$$

Glass Electrode

$$E_{\text{glass}} = E_{\text{glass}}^{\circ} + \frac{2.303 RT}{F} \text{pH} \quad (8.19.2)$$

Saturated calomel electrode is almost universally employed as the reference electrode. Thus, the assembly used in potentiometric acid-base titration is

Reference electrode \parallel Indicator electrode

i.e. Pt | Hg | Hg₂Cl₂ | Cl⁻ \parallel H⁺, Q, QH₂ | Pt

or Pt | Hg | Hg₂Cl₂ | Cl⁻ \parallel H⁺ | Glass electrode

The emf of the cell is measured at different volume V of added titrant and then graphs of E of indicator electrode versus V and $\Delta E/\Delta V$ versus V are drawn. From these graphs, the equivalence point of the titration is determined. From Eqs (8.19.1) and (8.19.2), it may be observed that the potential of either of electrodes depends linearly on pH of the solution. Thus, the general appearance of graphs of E_{cell} versus V and pH versus V will be identical and will differ only in the scaling factor on the y-axis. Since the titration curves of pH versus V have already been constructed in Chapter 4 of Vol. 1, construction of the corresponding potentiometric curves can be carried out following Eq. (8.19.1) or (8.19.2). For illustration, we construct the potentiometric titration curve of the titration of a strong acid with a strong base.

TITRATION OF HCl VERSUS NaOH

Let 50 cm^3 of 0.1 M HCl solution be titrated against 0.1 M NaOH . The pH of the solution at different stages of titration as calculated in Chapter 4 of Volume 1 are given in Table 8.19.1. It also includes the calculated values of $E_{\text{Q, QH}_2, \text{H}^+ | \text{Pt}}$ at 25°C , $\Delta E/\Delta V$, $\Delta^2 E/\Delta V^2$ and $(\Delta V/\Delta E)/\bar{V}$.

Table 8.19.1 Calculated Data of Potentiometric Titration of 50 cm^3 of 0.1 M HCl versus 0.1 M NaOH

Total volume of base added cm^3	pH	$E_{\text{Q, QH}_2, \text{H}^+ \text{Pt}}$ V	$(\Delta E/\Delta V) \times 10^2$ V cm^{-3}	\bar{V} cm^3	$(\Delta^2 E/\Delta V^2) \times 10^2$ $V^2 \text{ cm}^{-6}$	$(\Delta V/\Delta E) \times 10^3/\bar{V}$ V^{-1}
0	1.0	0.699 6			—	
10.0	1.18	0.639 8	0.60	5	—	33 400
20.0	1.37	0.618 6	0.21	15	—	31 400
30.0	1.60	0.605 0	0.14	25		29 400
40.0	1.95	0.583 9	0.21	35	0.007	13 500
49.0	2.99	0.522 7	0.68	44.5	0.050	3 306
49.9	4.00	0.462 9	6.64	49.45	0.202	304.6
49.99	5.0	0.403 8	66.00	49.945	120	30.3
49.999	6.00	0.344 6	656	49.994 5	11 920	3.05
49.9999	6.79	0.297 9	5200	49.999 45	918 000	0.38
50.0	7.0	0.285 5	12 400	49.999 95	14 400 000	0.16
50.0001	7.21	0.273 1	12 400	50.000 05	—14 400 000	0.16
50.001	8.00	0.226 3	5200	50.000 55	—918 000	0.38
50.01	9.00	0.167 2	656	50.005 5	—11 920	3.05
50.1	10.0	0.108 0	66	50.055	—120	30.3
51.0	10.99	0.049 5	6.5	50.55	—4.9	304.6
52.0	11.30	0.031 1	1.84	51.5	—0.84	1 055
53.0	11.47	0.021 1	1.00	52.5	—0.22	1 904
54.0	11.60	0.013 3	0.78	53.4		2 396

Figure 8.19.1 displays the graphs of E versus V , $\Delta E/\Delta V$ versus V and $\Delta^2 E/\Delta V^2$ versus V . All the three graphs give 50 cm^3 of base at the equivalence point of the titration.

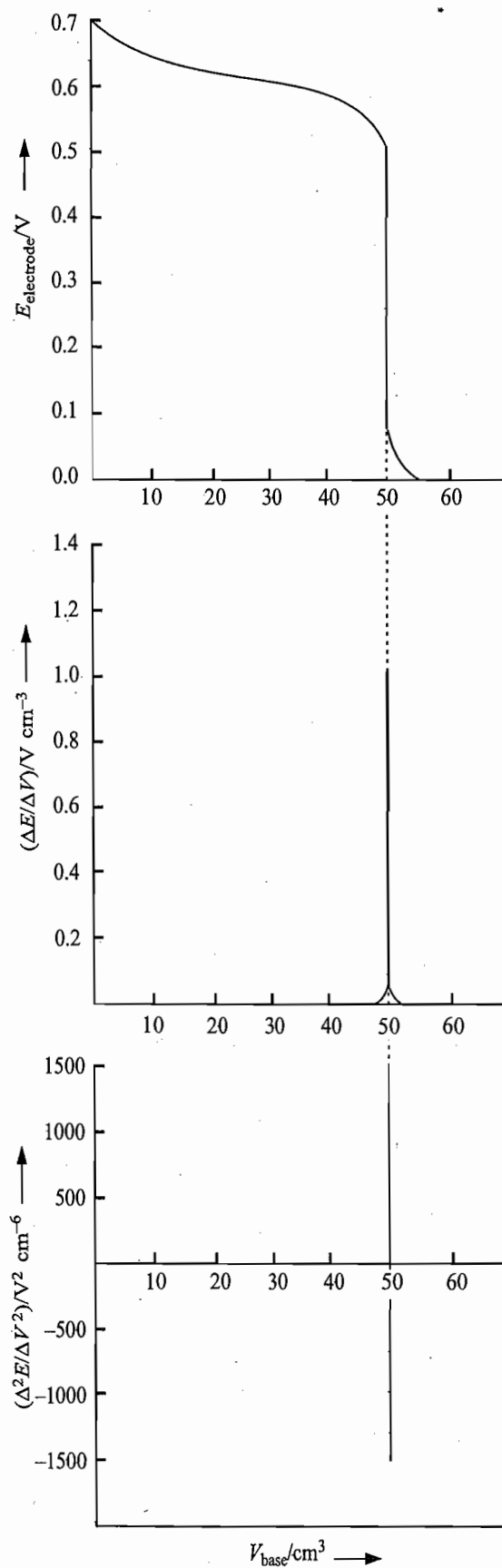


Fig. 8.19.1 Graphs of E versus V , $\Delta E/\Delta V$ versus V and $\Delta^2 E/\Delta V^2$ versus V

REDOX TITRATIONS

In redox titrations, the addition of titrant changes the concentrations of reduced and oxidized forms of reactant; the concentration of one of these increases while that of the other decreases. This results into the change in the potential of the electrode which can be determined experimentally or theoretically. The platinum electrode, which is usually employed as the indicator electrode, is dipped into the solution of reactant. The potential of the electrode relative to a reference electrode is measured at different stages of titration and then graphs between E versus V , $\Delta E/\Delta V$ versus V , etc., are plotted to determine the equivalence point. The above curves can also be drawn theoretically following the procedure given below.

At any stage of titration, the two half reactions for the given redox titration are separately at equilibrium and their reduction potentials are identical. The potential of the electrode at any point after the start and up to, but not including, the equivalence point can be conveniently determined by considering the reduction reaction involving reduced and oxidized forms of reactant. Beyond the equivalence point, potential can be determined by considering the reduction reaction involving the two redox species of titrant.

In order to illustrate the procedure for constructing the titration curve, we describe in detail two typical titrations, namely, (i) ferrous ions versus ceric ions, and (ii) acidified ferrous ions versus dichromate ions. These two titrations have been selected with specific objectives in mind. The titration of Fe^{2+} versus Ce^{4+} is perhaps the simplest titration for which the potential data can be calculated easily. The titration of Fe^{2+} with CrO_7^{2-} has been chosen to justify the use of diphenylamine in the presence of phosphoric acid and *N*-phenylanthranilic acid as the common redox indicators in volumetric analysis of ferrous ions. We now describe these titrations.

Titration of Ferrous Ions versus Ceric Ions

Let 50 cm^3 of 0.1 M Fe^{2+} be titrated against 0.1 M Ce^{4+} in a medium 0.5 M with respect to H_2SO_4 . The values of $E_{\text{Ce}^{4+}, \text{Ce}^{3+}|\text{Pt}}^\circ$ and $E_{\text{Fe}^{3+}, \text{Fe}^{2+}|\text{Pt}}^\circ$, at 25°C in this medium can be taken as 1.459 V and 0.700 V , respectively. The redox reaction is



Degree of conversion of Fe^{2+} to Fe^{3+} at the Equivalence Point

Before computing the potential of indicator electrode at various stages of titration, it is worthwhile to explore the degree of conversion of Fe^{2+} to Fe^{3+} at the equivalence point. This may be done as follows.

The equilibrium constant of the above redox reaction is given by

$$\begin{aligned} K_{\text{eq}} &= \frac{[\text{Fe}^{3+}][\text{Ce}^{3+}]}{[\text{Fe}^{2+}][\text{Ce}^{4+}]} = 10^{(E_{\text{Ce}^{4+}, \text{Ce}^{3+}|\text{Pt}}^\circ - E_{\text{Fe}^{3+}, \text{Fe}^{2+}|\text{Pt}}^\circ)/0.05913 \text{ V}} \\ &= 10^{(1.459 - 0.700)/0.05913} = 10^{12.84} = 6.9 \times 10^{12} \end{aligned} \quad (8.19.4)$$

At the equivalence point, we will have

$$[\text{Fe}^{3+}] = [\text{Ce}^{3+}] \quad (8.19.5)$$

$$\text{and } [\text{Fe}^{2+}] = [\text{Ce}^{4+}] \quad (8.19.6)$$

With these, Eq. (8.19.4) gives

$$\frac{[\text{Fe}^{3+}]^2}{[\text{Fe}^{2+}]^2} = 6.9 \times 10^{12} \quad \text{or} \quad \frac{[\text{Fe}^{3+}]}{[\text{Fe}^{2+}]} = 2.6 \times 10^6 \quad (8.19.7)$$

Since the volume of the solution at the equivalence point will be twice as the original volume of reactant, we will have

$$[\text{Fe}^{3+}] + [\text{Fe}^{2+}] = \frac{0.1 \text{ M}}{2} = 0.05 \text{ M} \quad (8.19.8)$$

From Eqs (8.19.7) and (8.19.8), we get

$$[\text{Fe}^{2+}] = 1.9 \times 10^{-8} \text{ M} \quad (8.19.9)$$

Thus, the concentration of Fe^{2+} is reduced from 0.1 M to 1.9×10^{-8} M indicating that the conversion is practically complete.

The potential of indicator electrode at various stages of titration may be computed as follows.

Potential at the Start of Titration

To start with, the concentration of Fe^{2+} in solution is given by

$$[\text{Fe}^{2+}] = 0.1 \text{ M}$$

Since the solution does not contain Fe^{3+} (or the concentration of Fe^{3+} which may have formed due to the aerial oxidation is not known), it is customary to leave undefined the value of $E_{\text{electrode}}$ at the start.

Potential Before the Equivalence Point

The concentration of Fe^{2+} and Fe^{3+} ions at any stage of titration before the equivalence point may be determined as follows.

The extent to which the reaction has proceeded may be represented in terms of fraction f given as

$$f = \frac{v}{V} \quad (8.19.10)$$

where v is the volume of 0.1 M solution of Ce^{4+} that has been added in the volume V ($= 50 \text{ cm}^3$) of 0.1 M solution of Fe^{2+} . The total volume of the solution will become $V + v$. The concentration of Fe^{3+} and Fe^{2+} will be given by

$$[\text{Fe}^{3+}] = (0.1 \text{ M}) \frac{V}{V + v} f \quad (8.19.11)$$

$$\text{and} \quad [\text{Fe}^{2+}] = (0.1 \text{ M}) \frac{V}{V + v} (1 - f) \quad (8.19.12)$$

The potential of indicator electrode will be given by

$$E_{\text{Fe}^{3+}, \text{Fe}^{2+} | \text{Pt}} = E_{\text{Fe}^{3+}, \text{Fe}^{2+} | \text{Pt}}^{\circ} - \frac{RT}{F} \ln \frac{[\text{Fe}^{2+}]}{[\text{Fe}^{3+}]} \quad (8.19.13)$$

Substituting $[\text{Fe}^{3+}]$ and $[\text{Fe}^{2+}]$ from Eqs (8.19.11) and (8.19.12), we have

$$E_{\text{Fe}^{3+}, \text{Fe}^{2+} | \text{Pt}} = E_{\text{Fe}^{3+}, \text{Fe}^{2+} | \text{Pt}}^{\circ} - \frac{RT}{F} \ln \frac{(0.1 \text{ M}) \frac{V}{V+u} (1-f)}{(0.1 \text{ M}) \frac{V}{V+u} f}$$

or
$$E_{\text{Fe}^{3+}, \text{Fe}^{2+} | \text{Pt}} = E_{\text{Fe}^{3+}, \text{Fe}^{2+} | \text{Pt}}^{\circ} - \frac{RT}{F} \ln \frac{1-f}{f} \quad (8.19.14)$$

From Eq. (8.19.14), it follows that the potential of electrode depends on the fraction of ferrous ion titrated and not on its initial concentration.

Potential at the Equivalence Point

The two half-cell potentials are given by

$$E_{\text{Fe}^{3+}, \text{Fe}^{2+} | \text{Pt}} = E_{\text{Fe}^{3+}, \text{Fe}^{2+} | \text{Pt}}^{\circ} - \frac{RT}{F} \ln \frac{[\text{Fe}^{2+}]}{[\text{Fe}^{3+}]} \quad (8.19.15)$$

$$E_{\text{Ce}^{4+}, \text{Ce}^{3+} | \text{Pt}} = E_{\text{Ce}^{4+}, \text{Ce}^{3+} | \text{Pt}}^{\circ} - \frac{RT}{F} \ln \frac{[\text{Ce}^{3+}]}{[\text{Ce}^{4+}]} \quad (8.19.16)$$

Adding Eqs (8.19.15) and (8.19.16), we get

$$E_{\text{Fe}^{3+}, \text{Fe}^{2+} | \text{Pt}} + E_{\text{Ce}^{4+}, \text{Ce}^{3+} | \text{Pt}} = E_{\text{Fe}^{3+}, \text{Fe}^{2+} | \text{Pt}}^{\circ} + E_{\text{Ce}^{4+}, \text{Ce}^{3+} | \text{Pt}}^{\circ} - \frac{RT}{F} \ln \frac{[\text{Fe}^{2+}][\text{Ce}^{3+}]}{[\text{Fe}^{3+}][\text{Ce}^{4+}]} \quad (8.19.17)$$

As indicated earlier, the two half-cell potentials will be identical at any stage of titration. Thus Eq. (8.21.17) becomes

$$E_{\text{electrode}} = \frac{1}{2} (E_{\text{Fe}^{3+}, \text{Fe}^{2+} | \text{Pt}}^{\circ} + E_{\text{Ce}^{4+}, \text{Ce}^{3+} | \text{Pt}}^{\circ}) - \frac{1}{2} \frac{RT}{F} \ln \frac{[\text{Fe}^{2+}][\text{Ce}^{3+}]}{[\text{Fe}^{3+}][\text{Ce}^{4+}]} \quad (8.19.18)$$

Now at the equivalence point, Eqs (8.19.5) and (8.19.6) will also hold good. With these, Eq. (8.19.18) becomes

$$E_{\text{equiv. point}} = \frac{1}{2} [E_{\text{Fe}^{3+}, \text{Fe}^{2+} | \text{Pt}}^{\circ} + E_{\text{Ce}^{4+}, \text{Ce}^{3+} | \text{Pt}}^{\circ}] \quad (8.19.19)$$

Potential After the Equivalence Point

The potential of the electrode may be determined from the expression

$$E_{\text{Ce}^{4+}, \text{Ce}^{3+} | \text{Pt}} = E_{\text{Ce}^{4+}, \text{Ce}^{3+} | \text{Pt}}^{\circ} - \frac{RT}{F} \ln \frac{[\text{Ce}^{3+}]}{[\text{Ce}^{4+}]} \quad (8.19.20)$$

Now the concentration of Ce^{3+} will vary only due to the dilution effect whereas that of Ce^{4+} will increase as more and more Ce^{4+} solution is added. Thus, we have

$$[\text{Ce}^{3+}] = [\text{Fe}^{2+}]_{\text{original}} \left(\frac{V}{2V+u} \right) = (0.1 \text{ M}) \left(\frac{V}{2V+u} \right) \quad (8.19.21)$$

$$\text{and } [\text{Ce}^{4+}] = (0.1 \text{ M}) \left(\frac{v}{2V + v} \right) \quad (8.19.22)$$

where v is the volume of Ce^{4+} solution added after the equivalence point and $V (= 50 \text{ cm}^3)$ is the initial volume of the reactant. Substituting Eqs (8.19.21) and (8.19.22) in Eq. (8.19.20), we get

$$E_{\text{Ce}^{4+}, \text{Ce}^{3+} | \text{Pt}} = E_{\text{Ce}^{4+}, \text{Ce}^{3+} | \text{Pt}}^{\circ} - \frac{RT}{F} \ln \frac{V}{v} \quad (8.19.23)$$

Display of Computed Potentials

Table 8.19.2 Shows the data obtained from Eqs (8.19.14), (8.19.19) and (8.19.23) at various stages of titration of Fe^{2+} versus Ce^{4+} .

Table 8.19.2 Calculated Data of Potentiometric Titration of 50 cm^3 of 0.1 M Fe^{2+} versus 0.1 M Ce^{4+}

Volume of $\text{Ce}^{4+}/\text{cm}^3$	f	$\frac{E_{\text{Electrode}}}{V}$	$\frac{(\Delta E/\Delta V) \times 10^2}{V \text{ cm}^{-3}}$	\bar{V}/cm^3	$\frac{(\Delta^2 E/\Delta V^2) \times 10^2}{V^2 \text{ cm}^{-6}}$
0.0					
10.0	0.2	0.66			
20.0	0.4	0.69			
			0.2	25	
30.0	0.6	0.71			0.01
			0.3	35	
40.0	0.8	0.74			0.013
			0.4	42.5	
45.0	0.9	0.76			0.13
			1.0	47.0	
49.0	0.98	0.80			1.3
			4.0	49.25	
49.5	0.99	0.82			13
			10	49.7	
49.90	0.998	0.86			140
			40	49.925	
49.95	0.999	0.88			7 200
			400	49.975	
50.00	1.0	1.08			0
			400	50.025	
50.05	—	1.28			-7 200
			40	50.075	
50.10	—	1.30			-140
			10	50.3	
50.50	—	1.34			-13
			4.0	50.75	
51.00	—	1.36			-1.3
			1.0	53.0	
55.00	—	1.40			-0.013
			0.4	57.5	
60.00	—	1.42			

Figure 8.19.2 displays the graphs obtained for E versus V , $\Delta E/\Delta V$ versus V and $\Delta^2 E/\Delta V^2$ versus V . Note that the graph of E versus V is symmetrical around the equivalence point.

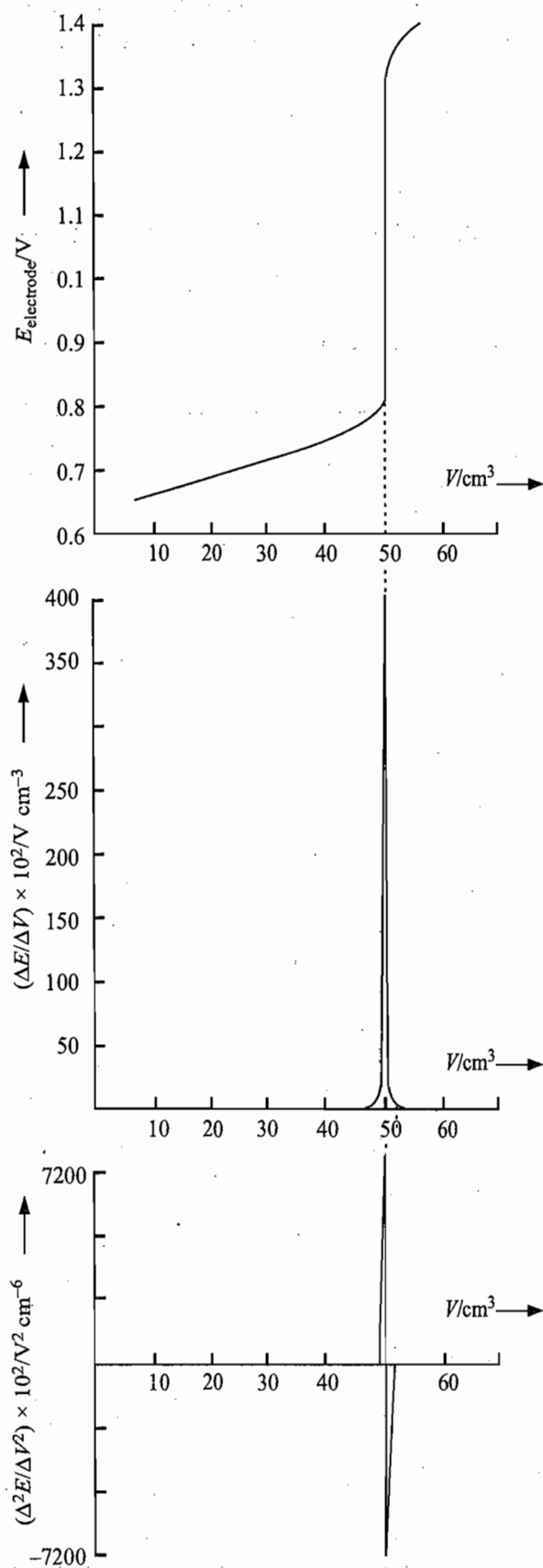
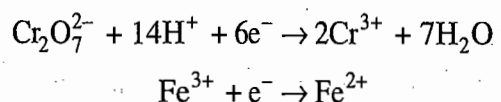


Fig. 8.19.2 Graphs of E versus V , $\Delta E/\Delta V$ versus V and $\Delta^2 E/\Delta V^2$ versus V

Titration of Ferrous Ions versus Dichromate Ions

Let 50 cm³ of an acid solution (pH = 1.0) of 0.1 M Fe²⁺ be titrated against (0.1 M/6), i.e. 0.1 N dichromate solution. The two half-cell reduction reactions are:



The values of $E_{\text{Fe}^{3+}, \text{Fe}^{2+} | \text{Pt}}^{\circ}$ and $E_{\text{CrO}_7^{2-}, \text{Cr}^{3+}, \text{H}^+ | \text{Pt}}^{\circ}$ are 0.770 V and 1.330 V, respectively.

The potential of the indicator electrode at various stages of titrations may be computed as follows.

Potential at the Start of Titration

To start with, the concentration of Fe²⁺ in solution is given by

$$[\text{Fe}^{2+}] = 0.1 \text{ M}$$

Since the solution does not contain Fe³⁺ (or the concentration of Fe³⁺ which may have formed due to the aerial oxidation is not known), it is customary to leave undefined the value of $E_{\text{electrode}}$ at the start

Potential Before the Equivalence Point

The concentration of Fe²⁺ and Fe³⁺ may be determined as follows.

The extent to which the reaction has proceeded may be represented in terms of fraction f given as

$$f = \frac{v}{V}$$

where v is the volume of 0.1 N solution of Cr₂O₇²⁻ that has been added in the volume $V (= 50 \text{ cm}^3)$ of 0.1 M solution of Fe²⁺. The total volume of the solution will become $V + v$. The concentrations of Fe³⁺ and Fe²⁺ will be given by

$$[\text{Fe}^{3+}] = (0.1 \text{ M}) \frac{V}{V + v} f \quad (8.19.24)$$

$$[\text{Fe}^{2+}] = (0.1 \text{ M}) \frac{V}{V + v} (1 - f) \quad (8.19.25)$$

The potential of indicator electrode will be given by

$$E_{\text{Fe}^{3+}, \text{Fe}^{2+} | \text{Pt}} = E_{\text{Fe}^{3+}, \text{Fe}^{2+} | \text{Pt}}^{\circ} - \frac{RT}{F} \ln \frac{[\text{Fe}^{2+}]}{[\text{Fe}^{3+}]} \quad (8.19.26)$$

Substituting [Fe³⁺] and [Fe²⁺] from Eqs (8.19.24) and (8.19.25), we have

$$E_{\text{Fe}^{3+}, \text{Fe}^{2+} | \text{Pt}} = E_{\text{Fe}^{3+}, \text{Fe}^{2+} | \text{Pt}}^{\circ} - \frac{RT}{F} \ln \frac{1 - f}{f} \quad (8.19.27)$$

From Eq. (8.19.27), it follows that the potential of electrode depends on the fraction of ferrous ions titrated and not on its initial concentration.

Potential at the Equivalence Point

The two half-cell potentials are given by

$$E_{\text{Fe}^{3+}, \text{Fe}^{2+} | \text{Pt}} = E_{\text{Fe}^{3+}, \text{Fe}^{2+} | \text{Pt}}^{\circ} - \frac{RT}{F} \ln \frac{[\text{Fe}^{2+}]}{[\text{Fe}^{3+}]} \quad (8.19.28)$$

$$E_{\text{Cr}_2\text{O}_7^{2-}, \text{Cr}^{3+}, \text{H}^+ | \text{Pt}} = E_{\text{Cr}_2\text{O}_7^{2-}, \text{Cr}^{3+}, \text{H}^+ | \text{Pt}}^\circ - \frac{RT}{6F} \ln \frac{[\text{Cr}^{3+}]^2 c^{0.13}}{[\text{Cr}_2\text{O}_7^{2-}][\text{H}^+]^{14}} \quad (8.19.29)$$

where $c^\circ = 1 \text{ mol cm}^{-3}$.

Multiplying Eq. (8.19.29) by 6 and then adding to it Eq. (8.19.28), we get

$$E_{\text{Fe}^{3+}, \text{Fe}^{2+} | \text{Pt}} + 6E_{\text{Cr}_2\text{O}_7^{2-}, \text{Cr}^{3+}, \text{H}^+ | \text{Pt}} = E_{\text{Fe}^{3+}, \text{Fe}^{2+} | \text{Pt}}^\circ + 6E_{\text{Cr}_2\text{O}_7^{2-}, \text{Cr}^{3+}, \text{H}^+ | \text{Pt}}^\circ - \frac{RT}{F} \ln \left(\frac{[\text{Fe}^{2+}][\text{Cr}^{3+}]^2 c^{0.13}}{[\text{Fe}^{3+}][\text{Cr}_2\text{O}_7^{2-}][\text{H}^+]^{14}} \right) \quad (8.19.30)$$

The two half-cell potentials will be identical at any stage of titration. Thus, Eq. (8.19.30) becomes

$$E_{\text{electrode}} = \frac{1}{7} [E_{\text{Fe}^{3+}, \text{Fe}^{2+} | \text{Pt}}^\circ + 6E_{\text{Cr}_2\text{O}_7^{2-}, \text{Cr}^{3+}, \text{H}^+ | \text{Pt}}^\circ] - \frac{1}{7} \frac{RT}{F} \ln \left(\frac{[\text{Fe}^{2+}][\text{Cr}^{3+}]^2 c^{0.13}}{[\text{Fe}^{3+}][\text{Cr}_2\text{O}_7^{2-}][\text{H}^+]^{14}} \right) \quad (8.19.31)$$

Now at the equivalence point, we will also have

$$[\text{Fe}^{2+}] = 6[\text{Cr}_2\text{O}_7^{2-}] \text{ and } [\text{Fe}^{3+}] = 3[\text{Cr}^{3+}]$$

Substituting these in Eq. (8.19.31), we get

$$E_{\text{equiv. point}} = \frac{1}{7} [E_{\text{Fe}^{3+}, \text{Fe}^{2+} | \text{Pt}}^\circ + 6E_{\text{Cr}_2\text{O}_7^{2-}, \text{Cr}^{3+}, \text{H}^+ | \text{Pt}}^\circ] + \frac{1}{7} \frac{RT}{F} \ln ([\text{H}^+]/c^\circ)^{14} - \frac{1}{7} \frac{RT}{F} \ln (2[\text{Cr}^{3+}]/c^\circ) \quad (8.19.32)$$

Potential After the Equivalence Point

The potential of the electrode may be determined from the expression

$$E_{\text{Cr}_2\text{O}_7^{2-}, \text{Cr}^{3+}, \text{H}^+ | \text{Pt}} = E_{\text{Cr}_2\text{O}_7^{2-}, \text{Cr}^{3+}, \text{H}^+ | \text{Pt}}^\circ - \frac{RT}{6F} \ln \frac{[\text{Cr}^{3+}]^2 c^{0.13}}{[\text{Cr}_2\text{O}_7^{2-}][\text{H}^+]^{14}} \quad (8.19.33)$$

Now the concentration of Cr^{3+} will vary only due to the dilution effect whereas that of $\text{Cr}_2\text{O}_7^{2-}$ will increase as more and more $\text{Cr}_2\text{O}_7^{2-}$ solution is added. Thus, we have

$$[\text{Cr}^{3+}] = \frac{1}{3} [\text{Fe}^{2+}]_{\text{original}} \left(\frac{V}{2V + v} \right) = \left(\frac{0.1 \text{ M}}{3} \right) \left(\frac{V}{2V + v} \right) \quad (8.19.34)$$

$$[\text{Cr}_2\text{O}_7^{2-}] = \left(\frac{0.1 \text{ M}}{6} \right) \left(\frac{v}{2V + v} \right) \quad (8.19.35)$$

where v is the volume of $\text{Cr}_2\text{O}_7^{2-}$ solution added after the equivalence point and $V (= 50 \text{ cm}^3)$ is the initial volume of reactant.

Substituting Eqs (8.19.34) and (8.19.35) in Eq. (8.19.33), we get

$$E_{\text{Cr}_2\text{O}_7^{2-}, \text{Cr}^{3+}, \text{H}^+ | \text{Pt}} = E_{\text{Cr}_2\text{O}_7^{2-}, \text{Cr}^{3+}, \text{H}^+ | \text{Pt}}^{\circ} - \frac{RT}{6F} \ln \left[\frac{\left(\frac{0.1}{3} \frac{V}{2V+v} \right)^2}{\left(\frac{0.1}{6} \frac{v}{2V+v} \right) ([\text{H}^+]/c^{\circ})^{14}} \right] \quad (8.19.36)$$

Display of Computed Potentials

Table 8.19.3 shows the data obtained from Eqs (8.19.27), (8.19.32) and (8.19.36) at various stages of titration of an acid solution of Fe^{2+} versus $\text{Cr}_2\text{O}_7^{2-}$.

Table 8.19.3 Calculated Data of Potentiometric Titration of 50 cm³ of an Acid Solution (pH = 1.0) of 0.1 M Fe^{2+} versus (0.1 M/6) $\text{Cr}_2\text{O}_7^{2-}$

Volume of $\text{Cr}_2\text{O}_7^{2-}$ cm ³	f	$E_{\text{electrode}}$ V	$(\Delta E/\Delta V) \times 10^2$ V cm ⁻³	\bar{V} cm ³	$(\Delta E^2/\Delta V^2) \times 10^2$ V ² cm ⁻⁶
0.0					
10.0	0.2	0.74		15	
20.0	0.4	0.76		25	
30.0	0.6	0.78		35	
40.0	0.8	0.80	0.20	42.5	0.053
45.0	0.9	0.83	0.60	47.0	0.088
49.0	0.98	0.87	1.0	49.25	1.3
49.5	0.99	0.89	4.0	49.7	13
49.9	0.998	0.93	10	49.75	130
49.95	0.999	0.95	40	49.925	6 800
50.0	1.0	1.14	380	49.975	-6 040
50.05	—	1.178	76	50.025	-1 400
50.10	—	1.18	4.0	50.075	-20.0
50.5	—	1.187	1.75	50.3	-2.0
51.0	—	1.190	0.60	50.75	-0.19
55.0	—	1.197	0.17	53.0	-0.024
60.0	—	1.200	0.06	57.5	

Figure 8.19.3 displays the graphs of E versus V , $\Delta E/\Delta V$ versus V and $\Delta^2 E/\Delta V^2$ versus V . Note that the graph of E versus V is not symmetrical around the equivalence point.

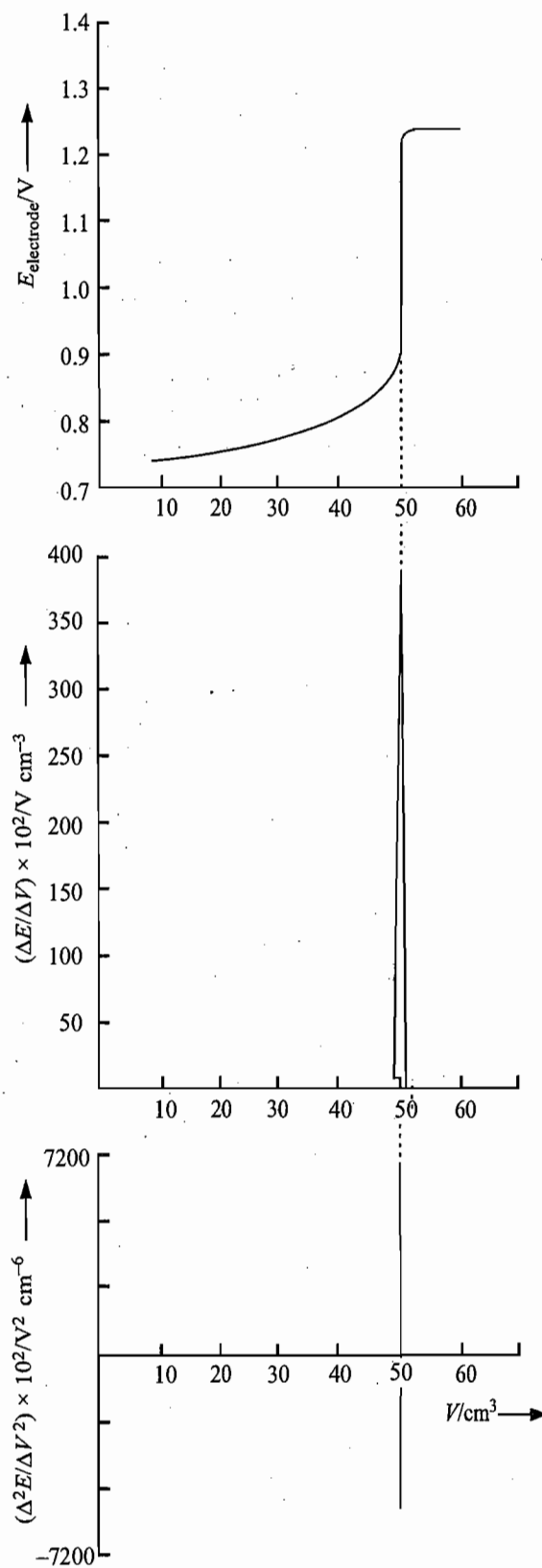
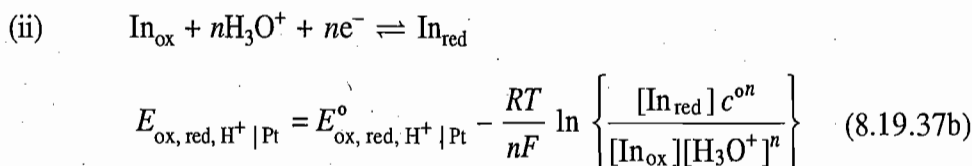
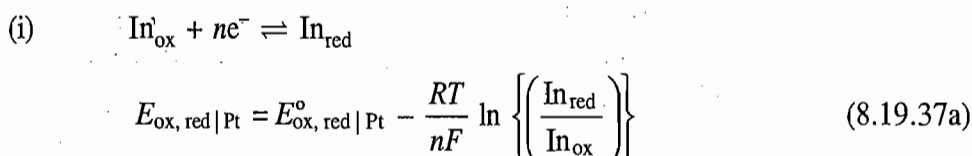


Fig. 8.19.3 Graphs of E versus V , $\Delta E/\Delta V$ versus V and $\Delta^2 E/\Delta V^2$ versus V

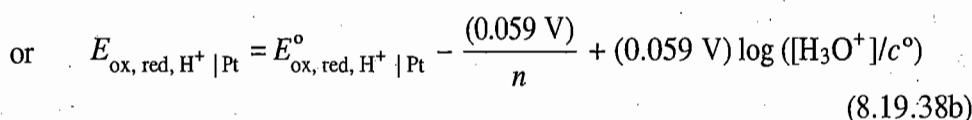
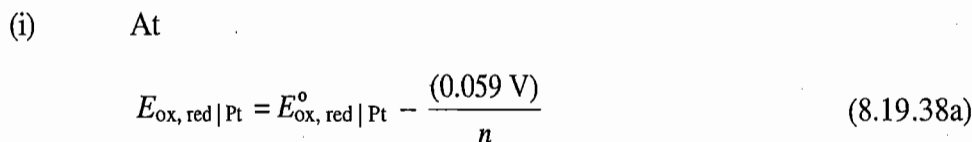
Use of Redox Indicators

In the routine volumetric titration of Fe^{2+} versus $\text{Cr}_2\text{O}_7^{2-}$ in laboratories, we make use of diphenylamine in the presence of phosphoric acid and *N*-phenylanthranilic acid as the internal indicators. It is worthwhile to consider here the theory underlying the use of internal indicators in the redox titrations.

In general, a redox indicator is an organic compound which can undergo oxidation-reduction reaction. The colours of oxidized and reduced forms of the indicator in solution differ significantly. For example, diphenylamine or diphenylbenzidine (reduced form) is colourless whereas diphenylbenzidine violet (oxidized form) is violet in colour. In general, we have two types of redox indicators depending upon whether H_3O^+ participates or does not participate in the indicator redox reaction. Thus, we have



The colour of the solution depends on the ratio $[\text{In}_{\text{red}}]/[\text{In}_{\text{ox}}]$. On an average, the solution acquires a distinct colour characteristic of In_{red} if concentration of the latter is approximately 10 times (or more) greater than that of In_{ox} and vice versa. Thus at 298 K, we have:



the ratio $[\text{In}_{\text{red}}]/[\text{In}_{\text{ox}}]$ in the solution is (10/1). For this potential, the percentage conversion of reduced form to oxidized form is

$$\frac{[\text{In}_{\text{ox}}]}{[\text{In}_{\text{ox}}] + [\text{In}_{\text{red}}]} = \frac{1}{(1 + 10)} \times 100 = 0.91$$

Thus, most of the indicator is present in the reduced form and the solution gets the colour characteristic of this form. In fact, the value of E as given by Eq. (8.19.38a) or (8.19.38b) is the maximum potential up to which the solution has a distinct colour characteristic of the reduced form of the indicator. At potentials smaller than this potential still more of the indicator is present in the reduced form. Thus at

$$E_1 \leq E_{\text{ox, red} | \text{Pt}} - \frac{(0.059 \text{ V})}{n}$$

$$\text{or } E_1 \leq E_{\text{ox, red, H}^+ | \text{Pt}} - \frac{(0.059 \text{ V})}{n} + (0.059 \text{ V}) \log ([\text{H}_3\text{O}^+]/c^\circ)$$

the solution has a colour characteristic of the reduced form of the indicator.

(ii) At

$$E_{\text{ox, red} | \text{Pt}} = E_{\text{ox, red} | \text{Pt}}^\circ + \frac{(0.059 \text{ V})}{n} \quad (8.19.39a)$$

$$\text{or } E_{\text{ox, red, H}^+ | \text{Pt}} = E_{\text{ox, red, H}^+ | \text{Pt}}^\circ + \frac{(0.059 \text{ V})}{n} + (0.059 \text{ V}) \log ([\text{H}_3\text{O}^+]/c^\circ) \quad (8.19.39b)$$

the ratio of $[\text{In}_{\text{red}}]/[\text{In}_{\text{ox}}]$ in the solution is (1/10). For this potential, the percentage conversion of reduced form to oxidized form is

$$\frac{[\text{In}_{\text{ox}}]}{[\text{In}_{\text{ox}}] + [\text{In}_{\text{red}}]} = \frac{10}{(10 + 1)} \times 100 = 91$$

Thus, most of the indicator is present in the oxidized form and the solution gets the colour characteristic of this form. In fact, the value of E as given by Eq. (8.19.39a) or (8.19.39b) is the minimum potential up to which the solution has a distinct colour characteristic of the oxidized form of the indicator. At potentials greater than this potential, still more of the indicator is present in the oxidized form. Thus at

$$E_2 \geq E_{\text{ox, red} | \text{Pt}} + \frac{(0.059 \text{ V})}{n}$$

$$\text{or } E_2 \geq E_{\text{ox, red, H}^+ | \text{Pt}} + \frac{(0.059 \text{ V})}{n} + (0.059 \text{ V}) \log ([\text{H}_3\text{O}^+]/c^\circ)$$

the solution has a colour characteristic of the oxidized form of the indicator.

Indicator Transition Range

The potential range E_1 to E_2 is known as *indicator transition range* and has a value of $(0.118/n)$ V. Within this range, transition of colour of the solution takes place. Since the transition interval is usually very small (it is maximum when $n = 1$), it is usually sufficient to know the value of $E_{\text{ox, red} | \text{Pt}}$, called the *transition potential*, around which the indicator changes colour. A list of indicators is given in Table 8.19.4, which includes the colours of reduced and oxidized forms of each indicator.

Selection of Indicators

At any stage of titration, the potential $E_{\text{red, ox} | \text{Pt}}$ will have the same value as that of the indicator electrode. This, in turn, will vary the ratio $[\text{red}]/[\text{ox}]$ in the solution.

We have seen earlier that the solution potential changes very rapidly near the equivalence point of the titration. The curve is almost steep near the equivalence point. Consequently, the ratio $[\text{red}]/[\text{ox}]$ also changes rapidly near the equivalence point of the titration. It is obvious that if the steep change in the potential of the solution near the equivalence point covers the transition potential of the indicator a change of colour of the solution is expected. Thus, the selection of indicator must satisfy the following requirement.

The transition potential of redox indicator must coincide with the steep portion of the titration curve.

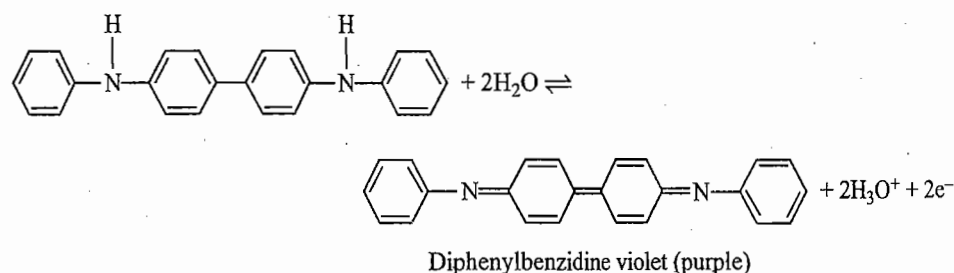
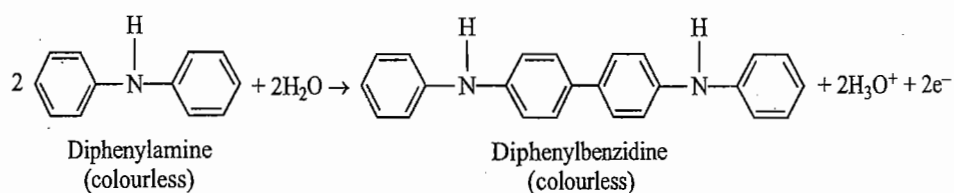
Table 8.19.4 Oxidation-Reduction Indicators

Indicator	Colour of		Transition potential at approximately pH = 0
	reduced form	oxidized form	
5-Nitro-1, 10-phenanthroline iron(II) (nitroferroin)	Red	Pale blue	1.25
1, 10-Phenanthroline iron(II) ferroin	Red	Pale blue	1.11
<i>N</i> -phenylanthranilic acid	Colourless	Pink	1.08
Erioglaucine A	Green	Red	1.02
2, 2'-Dipyridineiron(II)	Red	Pale blue	0.97
Sodium diphenylamine sulphonic acid and sodium diphenylbenzidine sulphonic acid	Colourless	Purple	0.85
Diphenylamine and diphenylbenzidine	Colourless	Violet	0.76
Methylene blue	Colourless	Blue	0.53
Nile blue	Colourless	Blue	0.41
Indigo tetrasulphonic acid	Colourless	Blue	0.36
Indigo monosulphonic acid	Colourless	Blue	0.26

Use of Diphenylamine or Diphenylbenzidine in the Volumetric Estimation of Ferrous Ions

Now the use of diphenylamine or diphenylbenzidine in the presence of phosphoric acid as the common indicator in the redox titration of Fe^{2+} versus $\text{Cr}_2\text{O}_7^{2-}$ may be explained as follows.

Diphenylamine undergoes the following oxidation reactions in strong oxidizing media:



The reaction transforming diphenylamine (DPA) to diphenylbenzidine (DPB) is irreversible, so that the use of diphenylbenzidine instead of diphenylamine eliminates this step and avoids the consumption of additional titrant. The indicator reaction is the transformation of diphenylbenzidine to diphenylbenzidine violet (DPVB). The transition potential in a solution of $\text{pH} = 0$ is 0.76 V at 298 K.

The potential of ferric-ferrous system is 0.77 V. Hence, ferric ions can oxidize diphenylbenzidine to diphenylbenzidine violet and thus result into a premature end point. What we want is a complete transformation of Fe^{2+} to Fe^{3+} by $\text{Cr}_2\text{O}_7^{2-}$ and then a slight excess of the latter should oxidize the indicator. This is achieved by adding phosphoric acid in the reactant solution. The ferric ion forms complex $\text{Fe}(\text{H}_2\text{PO}_4)^{2+}$ and thus its concentration in solution is very much diminished. This, in turn, lowers the potential of ferric-ferrous system as may be seen from the potential expression

$$E_{\text{Fe}^{3+}, \text{Fe}^{2+} | \text{Pt}} = E_{\text{Fe}^{3+}, \text{Fe}^{2+} | \text{Pt}}^{\circ} - \frac{RT}{F} \ln \frac{[\text{Fe}^{2+}]}{[\text{Fe}^{3+}]}$$

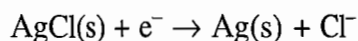
Thus, the ability of ferric ions to oxidize diphenylamine benzidine indicator is completely lost. When Fe^{2+} is completely oxidized to Fe^{3+} and a slight excess of $\text{Cr}_2\text{O}_7^{2-}$ is present, the potential of the solution suffers a steep change which encompasses the transition potential of the indicator, and hence a change of colour of the solution takes place.

PRECIPITATION TITRATIONS

In precipitation titrations, the concentration of reactant decreases as a result of formation of a precipitate with the titrant. If an electrode reversible with the reactant is dipped into the solution, its potential will vary during the course of titration. Hence precipitation titration can be carried out potentiometrically. In order to illustrate the procedure for constructing the titration curve, we describe below the precipitation titration involving chloride and silver ions.

Titration of Chloride Ions Versus Silver Ions

Let 50 cm^3 of 0.1 M Cl^- be titrated against 0.1 M Ag^+ . The silver-silver chloride electrode can be employed as the indicator electrode. This electrode is reversible with chloride ions according to the following reaction.



Its potential is given by the expression

$$E_{\text{Cl}^- | \text{AgCl} | \text{Ag}} = E_{\text{Cl}^- | \text{AgCl} | \text{Ag}}^{\circ} - \frac{RT}{F} \ln ([\text{Cl}^-]/c^{\circ}) \quad (8.19.40)$$

with $E_{\text{Cl}^- | \text{AgCl} | \text{Ag}}^{\circ} = 0.222 \text{ V}$

The potential of the electrode at various stages of titrations may be computed as follows.

Potential at the Start of Titration

To Start with, the concentration of Cl^- in solution is given by

$$[\text{Cl}^-] = 0.1 \text{ M}$$

Thus, the potential of electrode at 298 K as given by Eq. (8.19.40) is

$$\begin{aligned} E_{\text{Cl}^-|\text{AgCl}|\text{Ag}} &= 0.222 \text{ V} - (0.059 \text{ V}) \times \log (0.1) \\ &= 0.281 \text{ V} \end{aligned}$$

Potential Before the Equivalence Point

During titration, the concentration of Cl^- decreases. The progress of titration can be described by the fraction f which is given as

$$f = \frac{v}{V}$$

where v is the volume of 0.1 M solution of Ag^+ that has been added in $V (= 0.50 \text{ cm}^3)$ of 0.1 M solution of Cl^- . The total volume of the solution will become $V + v$. The concentration of Cl^- during the course of titration will be given as

$$[\text{Cl}^-] = (0.1 \text{ M}) \left(\frac{V}{V + v} \right) (1 - f)$$

The potential of the electrode will be given by

$$E_{\text{Cl}^-|\text{AgCl}|\text{Ag}} = E_{\text{Cl}^-|\text{AgCl}|\text{Ag}}^\circ - \frac{RT}{F} \ln \left\{ \frac{(0.1) V}{V + v} (1 - f) \right\}$$

Potential at the Equivalence Point

The concentration of Cl^- ions at the equivalence point may be calculated from the solubility product of silver chloride. At 25 °C, the latter has a value of $1.56 \times 10^{-10} (\text{mol dm}^{-3})^2$. Since at equivalence point, the $[\text{Cl}^-]$ is identical to $[\text{Ag}^+]$ it is obvious that

$$\begin{aligned} [\text{Cl}^-]_{\text{equiv. point}} &= \sqrt{K_{\text{sp}}(\text{AgCl})} = \sqrt{1.56 \times 10^{-10} \text{ M}^2} \\ &= 1.24 \times 10^{-5} \text{ M} \end{aligned}$$

The above concentration can be substituted in Eq. (8.19.40) to get the potential value at the equivalence point.

Potential Beyond the Equivalence Point

Beyond the equivalence point, the concentration of Cl^- ions can again be determined through the solubility product of silver chloride and is given by

$$[\text{Cl}^-] = \frac{K_{\text{sp}}}{[\text{Ag}^+]} = \frac{1.56 \times 10^{-10} \text{ M}^2}{[\text{Ag}^+]} \quad (8.19.41)$$

The concentration of Ag^+ will be given by

$$[\text{Ag}^+] = (0.1 \text{ M}) \left(\frac{v}{2V + v} \right) \quad (8.19.42)$$

where v is the volume of Ag^+ solution added after the equivalence point and $V (= 0.50 \text{ cm}^3)$ is the initial volume of reactant.

Alternatively, the potential of the electrode may be computed from the expression:

$$E_{\text{Ag}^+|\text{Ag}} = E_{\text{Ag}^+|\text{Ag}}^\circ - \frac{RT}{F} \ln \left(\frac{1}{([\text{Ag}^+]/c^\circ)} \right) \quad (8.19.43)$$

where $E_{\text{Ag}^+|\text{Ag}}^\circ = 0.799 \text{ V}$

Table 8.19.5 shows the data obtained from Eq. (8.19.40) at various stages of titration of 0.1 M Cl^- versus 0.1 M Ag^+ .

Table 8.19.5 The Calculated Data of Potentiometric Titration of 50 cm^3 of 0.1 M Cl^- versus 0.1 M Ag^+

Volume of Ag^+/cm^3	f	$\frac{E_{\text{electrode}}}{\text{V}}$	$\frac{(\Delta E/\Delta V) \times 10^2}{\text{V cm}^{-3}}$	\bar{V} cm^3	$\frac{(\Delta^2 E/\Delta V^2) \times 10^4}{\text{V}^2 \text{ cm}^{-6}}$
0.0	0	0.282			
10.0	0.2	0.292	0.10	5.0	0.10
20.0	0.4	0.303	0.11	15.0	0.30
30.0	0.6	0.317	0.14	25.0	0.7
40.0	0.8	0.338	0.21	35.0	2.3
45.0	0.9	0.357	0.38	42.5	10.5
48.0	0.96	0.381	0.80	46.5	50
49.0	0.98	0.399	1.8	48.5	240
49.5	0.99	0.417	3.6	49.25	1 100
49.8	0.996	0.441	8.0	49.65	4 500
49.9	0.998	0.458	17.0	49.85	37 000
50.0	1.0	0.512	54.0	49.95	0.0
50.10	—	0.566	54.0	50.05	-37 000
50.20	—	0.583	17.0	50.15	-4 500
50.50	—	0.607	8.0	50.35	-1 100
51.0	—	0.625	3.6	50.75	-240
52.0	—	0.643	1.8	51.5	

Figure 8.19.4 displays the graphs of E versus V , $(\Delta E/\Delta V)$ versus V and $(\Delta^2 E/\Delta V^2)$ versus V .

Titration Involving Multiple Redox-System

It is possible to titrate a solution containing two (or more) reductants with a standard solution of a suitable oxidant. The curve of $E_{\text{electrode}}$ versus volume of titrant will show two (or more) distinct breaks, one at each equivalence point, provided that the separation of the $E_{\text{red, ox}}^\circ | \text{Pt}$ values for the two reductants is large enough and that the $E_{\text{red, ox}}^\circ | \text{Pt}$ values for the oxidant is sufficiently higher than the larger $E_{\text{red, ox}}^\circ | \text{Pt}$ value of the reductant system. For example, an acid solution of Ti^{3+} and Fe^{2+} can be titrated against a standard solution of Ce^{4+} .

The values of $E_{\text{TiO}_2^+, \text{Ti}^{3+} | \text{Pt}}^\circ$, $E_{\text{Fe}^{3+}, \text{Fe}^{2+} | \text{Pt}}^\circ$ and $E_{\text{Ce}^{4+}, \text{Ce}^{3+} | \text{Pt}}^\circ$ at 25 °C in 2 M H_2SO_4 are 0.10, 0.70 and 1.459 V, respectively.

Thus, first of all, Ti^{3+} is oxidized to TiO_2^+ and when it is completely oxidized, Fe^{2+} starts oxidizing to Fe^{3+} . The entire potentiometric curve can be calculated following the procedure given above.

Similarly, multiple acid-base and precipitation titrations can be carried out potentiometrically. For example, a solution containing Cl^- and I^- ions can be titrated against a standard solution of silver nitrate. Two breaks in the potentiometric curve will be observed; the first break corresponds to the complete precipitation of I^- and the second one to that of Cl^- .

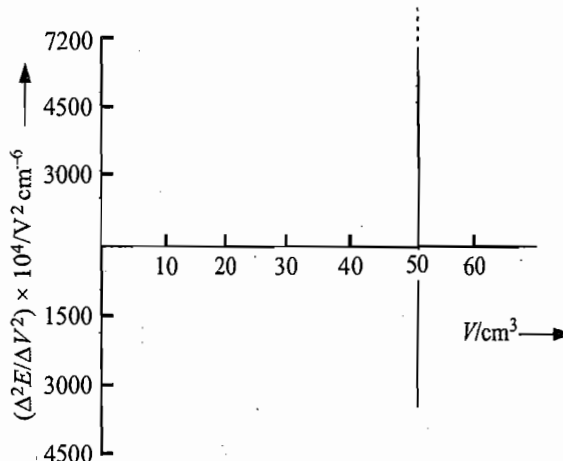
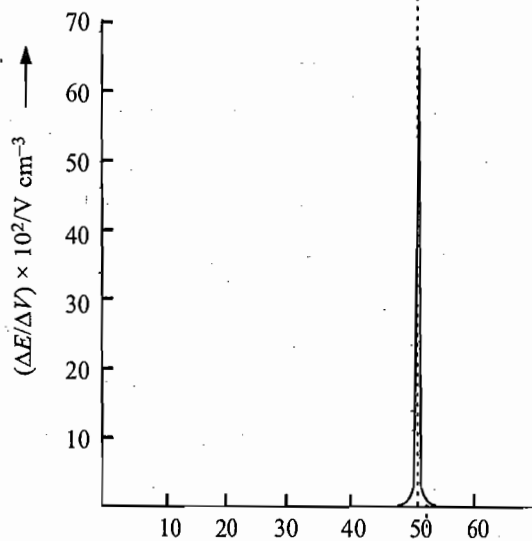
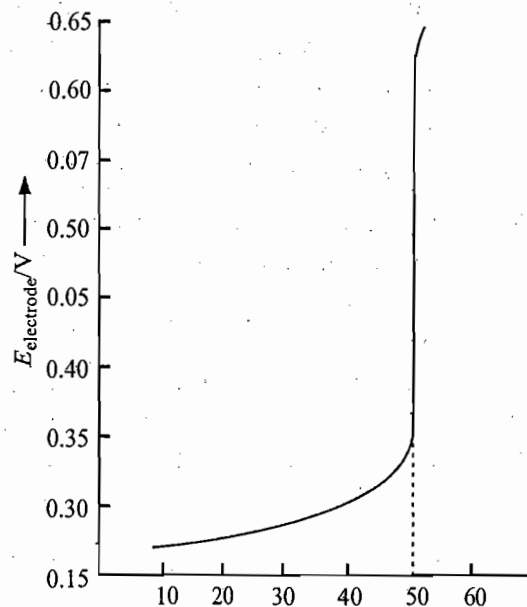


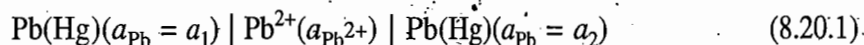
Fig. 8.19.4 Graphs of E versus V , $\Delta E/\Delta V$ versus V and $\Delta^2 E/\Delta V^2$ versus V

8.20 CONCENTRATION CELLS WITHOUT LIQUID JUNCTION POTENTIAL

Concentration cells are made up of two half-cells which are similar chemically but differ in the activity of some common component. The common component may be the electrode or the electrolytic solution. The emf of the cell is due to the difference in activity of the common component. We describe below three categories of concentration cells without liquid junction.

Cells with Amalgam Electrodes

Such a cell is formed by two metal amalgam electrodes of different metal activity dipping into a common solution of a soluble salt of the metal. For example, the cell



includes two lead amalgams with activities of lead equal to a_1 and a_2 immersed in a solution of lead ions of activity $a_{\text{Pb}^{2+}}$. For this cell, we have

Electrode	Reduction reaction	Reduction potential
Right	$\text{Pb}^{2+} + 2e^- \rightarrow \text{Pb(Hg)}(a_2)$	$E_R = E^\circ - \frac{RT}{2F} \ln \frac{a_2}{a_{\text{Pb}^{2+}}}$ (i)
Left	$\text{Pb}^{2+} + 2e^- \rightarrow \text{Pb(Hg)}(a_1)$	$E_L = E^\circ - \frac{RT}{2F} \ln \frac{a_1}{a_{\text{Pb}^{2+}}}$ (ii)

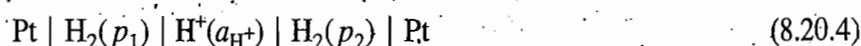
Subtracting Eq. (ii) from Eq. (i), we get



and
$$E_{\text{cell}} = \frac{RT}{2F} \ln \frac{a_1}{a_2} \quad (8.20.3)$$

Cells with Gas Electrodes Operating at Different Pressures

Consider a cell consisting of two hydrogen electrodes operating at different pressures dipping into a common solution of hydrochloric acid:



We have

Electrode	Reduction reaction	Reduction potential
Right	$2\text{H}^+ + 2e^- \rightarrow \text{H}_2(p_2)$	$E_R = -\frac{RT}{2F} \ln \frac{(p_2/p^\circ)}{a_{\text{H}^+}^2}$ (i)
Left	$2\text{H}^+ + 2e^- \rightarrow \text{H}_2(p_1)$	$E_L = -\frac{RT}{2F} \ln \frac{(p_1/p^\circ)}{a_{\text{H}^+}^2}$ (ii)

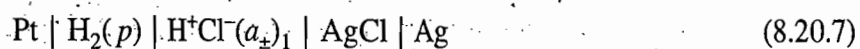
Subtracting Eq. (ii) from Eq. (i), we get



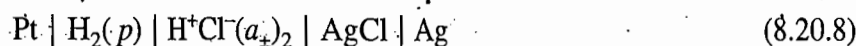
and
$$E_{\text{cell}} = \frac{RT}{F} \ln \frac{p_1}{p_2} \quad (8.20.6)$$

Cells with Different Electrolytic Activities

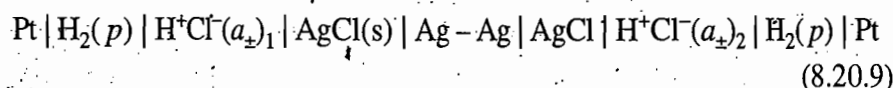
This type of cells can be formed by making a composite cell out of two cells differing only in the activity of the electrolytic solution. For example, the cell



may be combined with a cell



to give the following composite cell.



The emf of the above cell is the sum of the emfs of two cells separately, i.e. the emf of the left cell (L) plus the emf of the right cell (R). Thus

$$E_{\text{cell}} = E_L + E_R \quad (8.20.10)$$

$$= (E_{\text{Cl}^- | \text{AgCl} | \text{Ag}} - E_{\text{H}^+ | \text{H}_2 | \text{Pt}})_L + (E_{\text{H}^+ | \text{H}_2 | \text{Pt}} - E_{\text{Cl}^- | \text{AgCl} | \text{Ag}})_R \quad (8.20.11)$$

Writing the Nernst equation for each potential, we obtain

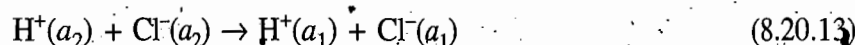
$$E_{\text{cell}} = \left[E_{\text{Cl}^- | \text{AgCl} | \text{Ag}}^\circ - \frac{RT}{F} \ln (a_{\text{Cl}^-})_1 + \frac{RT}{F} \ln \frac{(p/p^\circ)^{1/2}}{(a_{\text{H}^+})_1} \right] + \left[-\frac{RT}{F} \ln \frac{(p/p^\circ)^{1/2}}{(a_{\text{H}^+})_2} - E_{\text{Cl}^- | \text{AgCl} | \text{Ag}}^\circ + \frac{RT}{F} \ln (a_{\text{Cl}^-})_2 \right]$$

$$\text{or} \quad E_{\text{cell}} = \frac{RT}{F} \ln \frac{(a_{\text{H}^+})_2 (a_{\text{Cl}^-})_2}{(a_{\text{H}^+})_1 (a_{\text{Cl}^-})_1} = \frac{2RT}{F} \ln \frac{(a_{\pm})_2}{(a_{\pm})_1} \quad (8.20.12)$$

The net cell reaction is obtained by adding the individual cell reactions. Thus, we have

Cell	Cell reaction
Left	$\text{AgCl} + \frac{1}{2} \text{H}_2 \rightarrow \text{Ag} + \text{H}^+(a_1) + \text{Cl}^-(a_1)$ (i)
Right	$\text{Ag} + \text{H}^+(a_2) + \text{Cl}^-(a_2) \rightarrow \text{AgCl} + \frac{1}{2} \text{H}_2$ (ii)

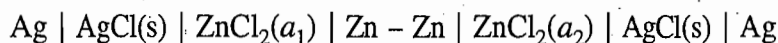
Adding Eqs (i) and (ii), we get



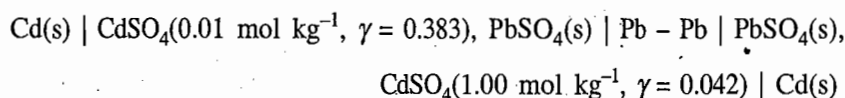
Note that the emf of the cell (Eq. 8.20.12) may be derived directly from the cell reaction (Eq. 8.20.13).

If one faraday of electricity is withdrawn from the cell, the net result that is produced is the transfer of 1 mol of each of hydrogen and chloride ions from the right-side cell to the left-side cell (Eq. 8.20.13). A cell of this type is called a *concentration cell without transference*. The operation of cell is not accompanied by the direct transfer of electrolyte from one solution to the other. The transference

occurs indirectly as the result of chemical reactions at the electrodes. A comparison of the concentration cell with transference (Section 8.21) with that for the same solutions without transference shows that the change of type is achieved by introducing an intermediate electrode $\text{AgCl(s)} \mid \text{Ag} \mid \text{AgCl(s)}$ between the two solutions. In general, a concentration cell with transference, in which the electrodes are reversible with respect to the cation, can be converted into one without transference by separating the two solutions by means of an electrode that is reversible with the anion of the electrolyte. If the end electrodes were the anion electrodes, then a cell without transference would be obtained by using a suitable cation electrode to separate the two solutions. One such example is

**Example 8.20.1**

Find the cell reaction and calculate the potential of the following cell at 298 K.

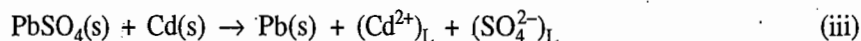
**Solution**

The cell reaction can be obtained by adding individual cell reactions.

Cell reaction of left cell We have

Electrode	Reduction reaction
Right	$\text{PbSO}_4(\text{s}) + 2\text{e}^- \rightarrow \text{Pb(s)} + (\text{SO}_4^{2-})_{\text{L}}$ (i)
Left	$(\text{Cd}^{2+})_{\text{L}} + 2\text{e}^- \rightarrow \text{Cd(s)}$ (ii)

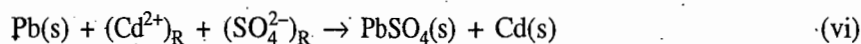
Subtracting Eq. (ii) from Eq. (i), we get



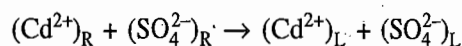
Cell reaction of right cell We have

Electrode	Reduction reaction
Right	$(\text{Cd}^{2+})_{\text{R}} + 2\text{e}^- \rightarrow \text{Cd(s)}$ (iv)
Left	$\text{PbSO}_4(\text{s}) + 2\text{e}^- \rightarrow \text{Pb(s)} + (\text{SO}_4^{2-})_{\text{R}}$ (v)

Subtracting Eq. (v) from Eq. (iv), we get



Adding Eqs (iii) and (vi), we get the overall reaction as given below.



The cell potential is given by

$$E_{\text{cell}} = -\frac{RT}{2F} \ln \left\{ \frac{(a_{\text{Cd}^{2+}})_{\text{L}} (a_{\text{SO}_4^{2-}})_{\text{L}}}{(a_{\text{Cd}^{2+}})_{\text{R}} (a_{\text{SO}_4^{2-}})_{\text{R}}} \right\} \\ = -\frac{RT}{F} \ln \frac{(a_{\pm})_{\text{L}}}{(a_{\pm})_{\text{R}}} = -\frac{RT}{F} \ln \frac{(m_{\pm})_{\text{L}} (\gamma_{\pm})_{\text{L}}}{(m_{\pm})_{\text{R}} (\gamma_{\pm})_{\text{R}}}$$

Substituting the given data, we get

$$E_{\text{cell}} = -(0.05913 \text{ V}) \log \left\{ \frac{(0.01)(0.383)}{(1.0)(0.042)} \right\} = 0.0615 \text{ V}$$

Example 8.20.2

Show that the emf of the cell



is given by

$$E = - \left(\frac{x+y}{x} \right) \frac{RT}{yF} \ln \left(\frac{a_{\pm 1}}{a_{\pm 2}} \right)$$

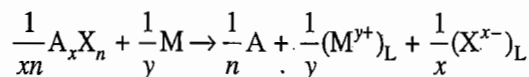
Solution

The cell reaction can be obtained by adding the individual cell reactions.

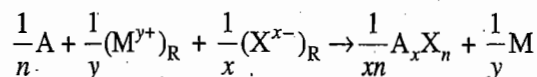
Cell reaction of left cell. We have

Cell	Cell reaction
Right	$\frac{1}{xn} \text{A}_x\text{X}_n + e^- \rightarrow \frac{1}{n} \text{A} + \frac{1}{x} (\text{X}^{x-})_{\text{L}}$ (i)
Left	$\frac{1}{y} (\text{M}^{y+})_{\text{L}} + e^- \rightarrow \frac{1}{y} \text{M}$ (ii)

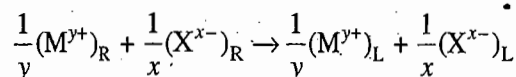
Subtracting Eq. (ii) from Eq. (i), we get the cell reaction



Cell reaction of right cell Here, the cell reaction will be just reverse of the above cell reaction, i.e.



Adding the two cell reactions, we get



The cell potential will be given by

$$E = - \frac{RT}{F} \ln \frac{(a_{\text{M}^{y+}})_{\text{L}}^{1/y} (a_{\text{X}^{x-}})_{\text{L}}^{1/x}}{(a_{\text{M}^{y+}})_{\text{R}}^{1/y} (a_{\text{X}^{x-}})_{\text{R}}^{1/x}}$$

Multiplying and dividing the right side of the above expression by xy , we get

$$E = - \frac{1}{x} \frac{RT}{yF} \ln \frac{(a_{\text{M}^{y+}})_{\text{L}}^x (a_{\text{X}^{x-}})_{\text{L}}^y}{(a_{\text{M}^{y+}})_{\text{R}}^x (a_{\text{X}^{x-}})_{\text{R}}^y}$$

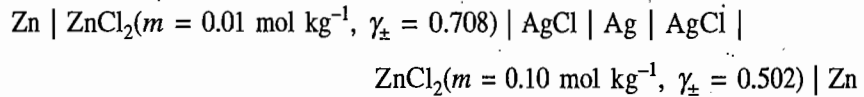
Now making use of the expression

$$a_{\pm}^{x+y}(M_x X_y) = (a_{M^{y+}})^x (a_{X^{x-}})^y$$

we get
$$E = - \left(\frac{x+y}{x} \right) \frac{RT}{yF} \ln \left(\frac{a_{\pm 1}}{a_{\pm 2}} \right)$$

Example 8.20.3

Calculate the potential at 298 K of the following cell.

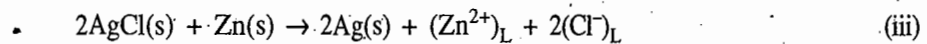
**Solution**

The cell reaction can be obtained by adding the individual cell reactions.

Cell reaction of left cell We have

Electrode	Reduction reaction	
Right	$2\text{AgCl(s)} + 2\text{e}^- \rightarrow 2\text{Ag(s)} + 2(\text{Cl}^-)_{\text{L}}$	(i)
Left	$(\text{Zn}^{2+})_{\text{L}} + 2\text{e}^- \rightarrow \text{Zn(s)}$	(ii)

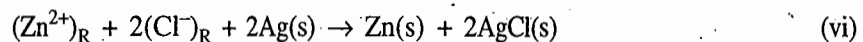
Subtracting Eq. (ii) from Eq. (i), we get



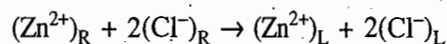
Cell reaction of right cell We have

Electrode	Reduction reaction	
Right	$(\text{Zn}^{2+})_{\text{R}} + 2\text{e}^- \rightarrow \text{Zn(s)}$	(iv)
Left	$2\text{AgCl(s)} + 2\text{e}^- \rightarrow 2\text{Ag(s)} + 2(\text{Cl}^-)_{\text{R}}$	(v)

Subtracting Eq. (v) from Eq. (iv), we get



Adding Eqs (iii) and (vi), we get the overall cell reaction:



The cell potential is given by

$$\begin{aligned} E_{\text{cell}} &= - \frac{RT}{2F} \ln \left\{ \frac{(a_{\text{Zn}^{2+}})_{\text{L}} (a_{\text{Cl}^-})_{\text{L}}^2}{(a_{\text{Zn}^{2+}})_{\text{R}} (a_{\text{Cl}^-})_{\text{R}}^2} \right\} = - \frac{RT}{2F} \ln \left\{ \frac{(a_{\pm})_{\text{L}}^3}{(a_{\pm})_{\text{R}}^3} \right\} \\ &= - \frac{RT}{2F} \ln \left\{ \frac{(4m')_{\text{L}} (\gamma_{\pm})_{\text{L}}^3}{(4m')_{\text{R}} (\gamma_{\pm})_{\text{R}}^3} \right\} = - \frac{3RT}{2F} \ln \left\{ \frac{(m')_{\text{L}} (\gamma_{\pm})_{\text{L}}}{(m')_{\text{R}} (\gamma_{\pm})_{\text{R}}} \right\} \end{aligned}$$

where $m' = m/m^\circ$. Substituting the given data, we get

$$\begin{aligned} E_{\text{cell}} &= - \frac{3}{2} \times (0.05913 \text{ V}) \times \log \left\{ \frac{(0.01)(0.708)}{(0.10)(0.502)} \right\} \\ &= 0.0755 \text{ V} \end{aligned}$$

0.075

8.21 CONCENTRATION CELLS WITH LIQUID JUNCTION POTENTIAL

Development of Liquid Junction Potential

In a cell if two electrolytic solutions of different concentrations are in contact with each other, a potential difference develops across the boundary of the two solutions. This potential difference is called the *liquid junction potential* or the *diffusion potential*. It arises because of the difference in the rates of diffusion of positive and negative ions from more concentrated solution to less concentrated solution. The rate of diffusion of an ion is determined by its transference number. To illustrate how the liquid junction potential arises, we consider two hydrochloric acid solutions of different concentrations separated from each other by a boundary. If the boundary between the two solutions is an open one, then H^+ and Cl^- ions will diffuse from more concentrated solution to less concentrated solution. Since H^+ ions can diffuse more rapidly than Cl^- ions, an electrical double layer is formed at the boundary. This gives rise to the liquid junction potential. Once the electrical double layer is formed, it has an effect of decreasing the speed of faster moving ion and increasing the speed of slower moving ion. A steady state is established where both the ions migrate with the same speed; the ion which moved faster initially leads the march.

Computation of Cell Potential

The emf $E_{\text{cell}(w\text{lj})}$ of a cell with liquid junction potential may be computed from the changes that take place in the cell when one faraday of electricity is withdrawn from the cell. We can determine the sum of the free-energy changes of various processes that take place in the cell and then equate it to $-FE_{\text{cell}(w\text{lj})}$, such that

$$-FE_{\text{cell}(w\text{lj})} = \sum_i \Delta G_i \quad (8.21.1)$$

Computation of Liquid Junction Potential

The liquid junction potential may be determined as follows.

The given cell with liquid junction potential is converted into a cell without liquid junction by connecting the two electrolytic solutions through a salt bridge. The emf $E_{\text{cell}(w\text{olj})}$ of the resultant cell without liquid junction potential is determined. The difference of $E_{\text{cell}(w\text{lj})}$ and $E_{\text{cell}(w\text{olj})}$ gives the value of liquid junction potential E_{lj} , i.e.

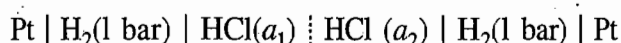
$$E_{\text{lj}} = E_{\text{cell}(w\text{lj})} - E_{\text{cell}(w\text{olj})} \quad (8.21.2)$$

We now consider the following two types of cells with liquid junction and derive the expressions of $E_{\text{cell}(w\text{lj})}$, $E_{\text{cell}(w\text{olj})}$ and E_{lj} .

1. CELL IN WHICH ELECTRODES ARE REVERSIBLE WITH RESPECT TO CATION

A Typical Example

Consider the cell



The above cell is also shown in Fig. 8.21.1.

Working of the Cell

We know that electrons are given out from the left electrode and are fed back at the right electrode, i.e. electrons flow externally from left to right. Inside the electrochemical cell, the current is carried by ions. In order to have a complete

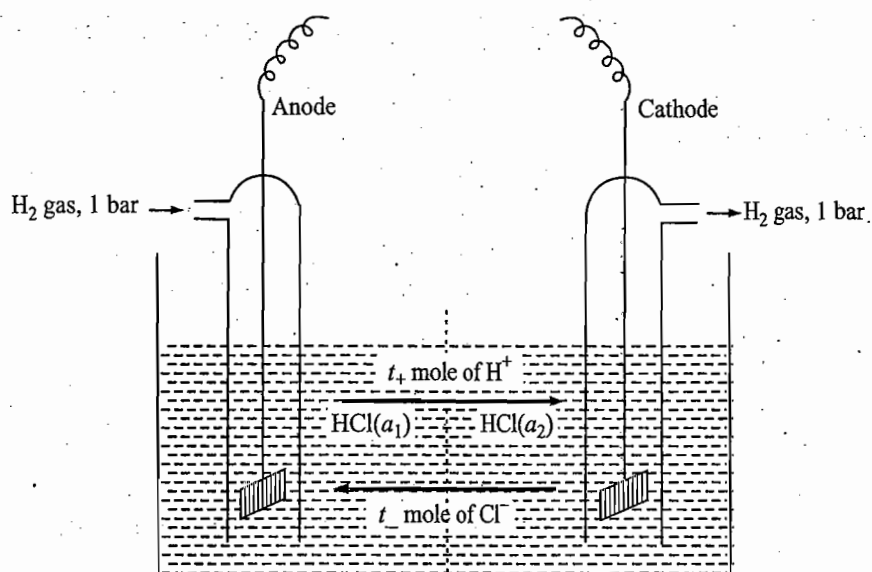
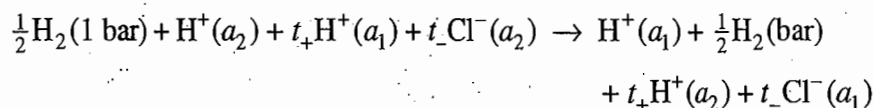


Fig. 8.21.1 Cell in which electrodes are reversible with respect to cations

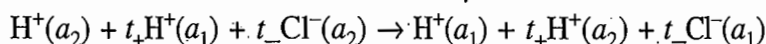
circuit of flow of electrons, it is obvious that negative ions (which carry the surplus electrons) will move from right to left and positive ions will move from left to right. Let t_+ and t_- be the transference numbers of positive and negative ions, respectively. If one faraday of electricity is withdrawn, it is obvious that t_+ mole of positive ions will migrate across the liquid junction from left to right and t_- mole of negative ions from right to left. The changes that take place when one faraday of electricity is withdrawn from the cell given in Fig. 8.21.1 are described below.

- | | |
|---|--|
| (i) Electrode reaction at anode | $\frac{1}{2}\text{H}_2(1 \text{ bar}) \rightarrow \text{H}^+(a_1) + e^-$ |
| (ii) Electrode reaction at cathode | $\text{H}^+(a_2) + e^- \rightarrow \frac{1}{2}\text{H}_2(1 \text{ bar})$ |
| (iii) Transfer of t_+ mole of H^+ from left to right | $t_+\text{H}^+(a_1) \rightarrow t_+\text{H}^+(a_2)$ |
| (iv) Transfer of t_- mole of Cl^- from right to left | $t_-\text{Cl}^-(a_2) \rightarrow t_-\text{Cl}^-(a_1)$ |

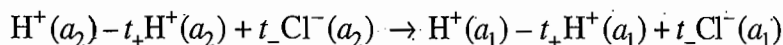
The net change in the cell is obtained by adding the above four changes. Thus, we have



Cancelling the common term, we get



which on rearranging gives



or $(1 - t_+)\text{H}^+(a_2) + t_-\text{Cl}^-(a_2) \rightarrow (1 - t_+)\text{H}^+(a_1) + t_-\text{Cl}^-(a_1)$

or $t_-\text{H}^+(a_2) + t_-\text{Cl}^-(a_2) \rightarrow t_-\text{H}^+(a_1) + t_-\text{Cl}^-(a_1)$

Thus, the net cell reaction is to transfer t_- mole of HCl from the solution of activity a_2 to that of activity a_1 .

Free-Energy of Cell Reaction

The total free energy change of the net cell reaction is

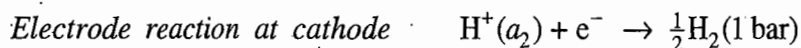
$$\begin{aligned}\Delta G &= t_- [\mu_{\text{H}^+(a_1)} + \mu_{\text{Cl}^-(a_1)} - \mu_{\text{H}^+(a_2)} - \mu_{\text{Cl}^-(a_2)}] \\ &= t_- \{ \mu_{\text{H}^+}^\circ + RT \ln (a_1)_{\text{H}^+} \} + \{ \mu_{\text{Cl}^-}^\circ + RT \ln (a_1)_{\text{Cl}^-} \} \\ &\quad - \{ \mu_{\text{H}^+}^\circ + RT \ln (a_2)_{\text{H}^+} \} - \{ \mu_{\text{Cl}^-}^\circ + RT \ln (a_2)_{\text{Cl}^-} \} \\ &= t_- RT \ln \left\{ \frac{(a_1)_{\text{H}^+} (a_1)_{\text{Cl}^-}}{(a_2)_{\text{H}^+} (a_2)_{\text{Cl}^-}} \right\} \\ &= 2t_- RT \ln \frac{(a_{\pm})_{\text{HCl}}}{(a_{\pm})_{\text{HCl}}}\end{aligned}\tag{8.21.3}$$

Substituting Eq. (8.21.3) in Eq. (8.21.1), we get

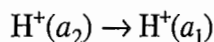
$$E_{\text{cell(wlj)}} = -2t_- \frac{RT}{F} \ln \frac{(a_{\pm})_{\text{HCl}}}{(a_{\pm})_{\text{HCl}}}\tag{8.21.4}$$

Cell Without Liquid Junction Potential

Now if the two solutions of the cell given in Fig. 8.21.1 are connected through a salt bridge, the liquid junction potential is eliminated. If now one faraday of electricity is withdrawn, the changes in the two half-cells will only be due to the electrode reactions. Thus, we have



The net cell reaction is



and the cell potential is

$$E_{\text{cell(wolj)}} = -\frac{RT}{F} \ln \frac{(a_1)_{\text{H}^+}}{(a_2)_{\text{H}^+}} = -\frac{RT}{F} \ln \frac{(a_{\pm})_{\text{HCl}}}{(a_{\pm})_{\text{HCl}}}\tag{8.21.5}$$

where a_{H^+} has been replaced by the mean ionic activity a_{\pm} .

Expression of Liquid Junction Potential

Making use of Eq. (8.21.2), we get

$$\begin{aligned}E_{\text{lj}} &= E_{\text{cell(wlj)}} - E_{\text{cell(wolj)}} \\ &= -2t_- \frac{RT}{F} \ln \frac{(a_{\pm})_{\text{HCl}}}{(a_{\pm})_{\text{HCl}}} + \frac{RT}{F} \ln \frac{(a_{\pm})_{\text{HCl}}}{(a_{\pm})_{\text{HCl}}}\end{aligned}$$

$$= (1 - 2t_-) \frac{RT}{F} \ln \frac{(a_{\pm 1})_{\text{HCl}}}{(a_{\pm 2})_{\text{HCl}}} \quad (8.21.6)$$

Since $t_+ + t_- = 1$, Eq. (8.21.6) may be written as

$$E_{\text{lj}} = (t_+ - t_-) \frac{RT}{F} \ln \frac{(a_{\pm 1})_{\text{HCl}}}{(a_{\pm 2})_{\text{HCl}}} \quad (8.21.7)$$

Comparing Eqs (8.21.4) and (8.21.5), we get

$$E_{\text{cell(wlj)}} = 2t_- E_{\text{cell(wolj)}} \quad (8.21.8)$$

If the cell without liquid junction is to function spontaneously, we must have

$$(a_{\pm 2})_{\text{HCl}} > (a_{\pm 1})_{\text{HCl}}$$

since only then $E_{\text{cell(wolj)}}$ as given by Eq. (8.21.5) will have a positive value. Since t_{H^+} is greater than t_{Cl^-} , it follows from Eq. (8.21.7) that the liquid junction potential E_{lj} will have a negative value.

Comment on Liquid Junction Potential

In general, the sign and magnitude of the liquid junction potential depends on the transport numbers of the involved cations and anions. In a cell with $(a_{\pm 2})_{\text{HCl}} > (a_{\pm 1})_{\text{HCl}}$, we will have

$$\begin{aligned} E_{\text{lj}} \text{ positive} & \quad \text{if } t_- > t_+ \\ E_{\text{lj}} \text{ negative} & \quad \text{if } t_- < t_+ \\ \text{and } E_{\text{lj}} \text{ zero} & \quad \text{if } t_- = t_+ \end{aligned} \quad (8.21.9)$$

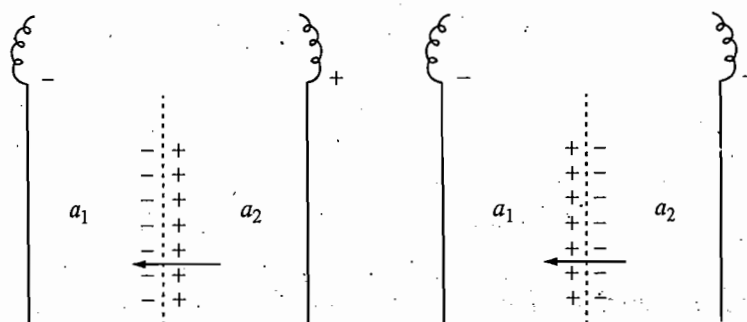
From Eq. (8.21.8), we get

$$\begin{aligned} E_{\text{cell(wlj)}} & > E_{\text{cell(wolj)}} \quad \text{if } t_- > t_+ \\ E_{\text{cell(wlj)}} & < E_{\text{cell(wolj)}} \quad \text{if } t_- < t_+ \\ \text{and } E_{\text{cell(wlj)}} & = E_{\text{cell(wolj)}} \quad \text{if } t_- = t_+ \end{aligned} \quad (8.21.10)$$

The results of Eq. (8.21.10) also follow from Fig. 8.21.2 where the separation of charges across the boundary of the two solutions is shown. The separation of charges results from the diffusion of ions from a more concentrated solution (right electrode) to a less concentrated solution (left electrode). When $t_- > t_+$, the separation of charges across the boundary matches with that of the electrodes and thus the two potentials, viz., liquid junction E_{lj} and cell potential $E_{\text{cell(wolj)}}$ have the same sign. Thus on adding the two potentials, we get $E_{\text{cell(wlj)}}$ which is greater than $E_{\text{cell(wolj)}}$. On the other hand, when $t_- < t_+$, the separation charges across the boundary is opposite to that of electrodes and thus the two potentials have different signs which on adding gives $E_{\text{cell(wlj)}} < E_{\text{cell(wolj)}}$.

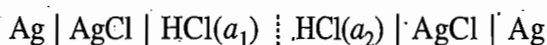
Fig. 8.21.2 Correlation of the sign of liquid junction potential with the separation of charges at the boundary;

- (i) $t_- > t_+$, E_{lj} is positive and $E_{cell(wlj)} > E_{cell(wolj)}$ and
- (ii) $t_- < t_+$, E_{lj} is negative and $E_{cell(wlj)} < E_{cell(wolj)}$



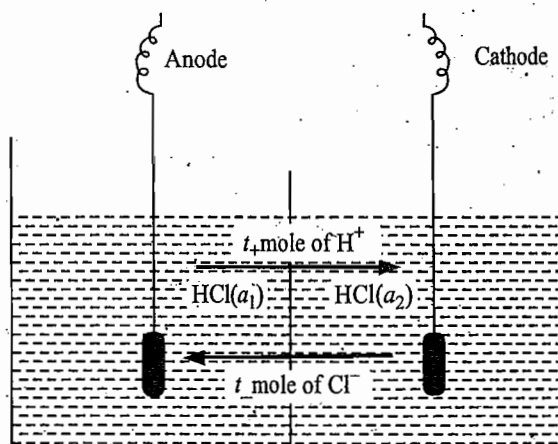
2. CELL IN WHICH ELECTRODES ARE REVERSIBLE WITH RESPECT TO ANIONS

A Typical Example Consider the cell



The above cell is also shown in Fig. 8.21.3.

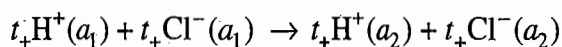
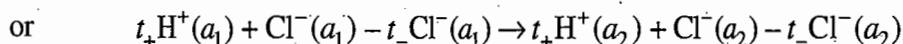
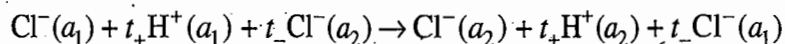
Fig. 8.21.3 A cell in which electrodes are reversible with respect to anions



Working of the Cell The changes that take place when one faraday of electricity is withdrawn from the cell are shown below:

- (i) Electrode reaction at anode $\text{Ag}(s) + \text{Cl}^-(a_1) \rightarrow \text{AgCl}(s) + e^-$
- (ii) Electrode reaction at cathode $\text{AgCl}(s) + e^- \rightarrow \text{Ag}(s) + \text{Cl}^-(a_2)$
- (iii) Migration of H^+ ions $t_+ \text{H}^+(a_1) \rightarrow t_+ \text{H}^+(a_2)$
- (iv) Migration of Cl^- ions $t_- \text{Cl}^-(a_2) \rightarrow t_- \text{Cl}^-(a_1)$

The net effect is obtained by adding the above four changes, which gives



Thus, the net cell reaction is to transfer t_+ mole of HCl from the solution of activity a_1 to that of activity a_2 .

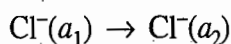
The free energy change of the net cell reaction is

$$\Delta G = t_+ RT \ln \frac{(a_2)_{\text{H}^+} (a_2)_{\text{Cl}^-}}{(a_1)_{\text{H}^+} (a_1)_{\text{Cl}^-}} = 2t_+ RT \ln \frac{(a_{\pm 2})_{\text{HCl}}}{(a_{\pm 1})_{\text{HCl}}}$$

Hence
$$E_{\text{cell(wlj)}} = -\frac{\Delta G}{F} = -2t_+ \frac{RT}{F} \ln \frac{(a_{\pm 2})_{\text{HCl}}}{(a_{\pm 1})_{\text{HCl}}} \quad (8.21.11)$$

Cell Without Liquid Junction Potential

If the cell given by Fig. 8.21.3 functions without liquid junction potential, its cell reaction would be



The cell potential would be

$$E_{\text{cell(wolj)}} = -\frac{RT}{F} \ln \frac{(a_2)_{\text{Cl}^-}}{(a_1)_{\text{Cl}^-}} = -\frac{RT}{F} \ln \frac{(a_{\pm 2})_{\text{HCl}}}{(a_{\pm 1})_{\text{HCl}}} \quad (8.21.12)$$

where a_{Cl^-} has been replaced by the mean ionic activity a_{\pm} .

Expression of Liquid Junction Potential

Now since

$$E_{\text{lj}} = E_{\text{cell(wlj)}} - E_{\text{cell(wolj)}}$$

we get

$$E_{\text{lj}} = -2t_+ \frac{RT}{F} \ln \frac{(a_{\pm 2})_{\text{HCl}}}{(a_{\pm 1})_{\text{HCl}}} + \frac{RT}{F} \ln \frac{(a_{\pm 2})_{\text{HCl}}}{(a_{\pm 1})_{\text{HCl}}}$$

or
$$E_{\text{lj}} = (1 - 2t_+) \frac{RT}{F} \ln \frac{(a_{\pm 2})_{\text{HCl}}}{(a_{\pm 1})_{\text{HCl}}} \quad (8.21.13)$$

or
$$E_{\text{lj}} = (t_- - t_+) \frac{RT}{F} \ln \frac{(a_{\pm 2})_{\text{HCl}}}{(a_{\pm 1})_{\text{HCl}}} \quad (8.21.14)$$

Combining Eqs (8.20.11) and (8.20.12), we get

$$E_{\text{cell(wlj)}} = 2t_+ E_{\text{cell(wolj)}} \quad (8.21.15)$$

If the cell without liquid junction is to function spontaneously, we must have

$$(a_{\pm 1})_{\text{HCl}} > (a_{\pm 2})_{\text{HCl}}$$

since only then $E_{\text{cell(wolj)}}$ as given by Eq. (8.21.12) will have a positive value.

Since t_{H^+} is greater than t_{Cl^-} , it follows from Eq. (8.21.14) that the liquid junction potential E_{lj} will have a positive value.

Comment on Liquid Junction Potential

In general, the sign and magnitude of the liquid junction potential depends on the transference numbers of involved cations and anions. In a cell with $(a_{\pm 1})_{\text{HCl}} > (a_{\pm 2})_{\text{HCl}}$, we will have

E_{lj} positive if $t_+ > t_-$

E_{lj} negative if $t_+ < t_-$

and E_{lj} zero if $t_+ = t_-$ (8.21.16)

From Eq. (8.21.15) we get

$E_{\text{cell}(wlj)} > E_{\text{cell}(wolj)}$ if $t_+ > t_-$

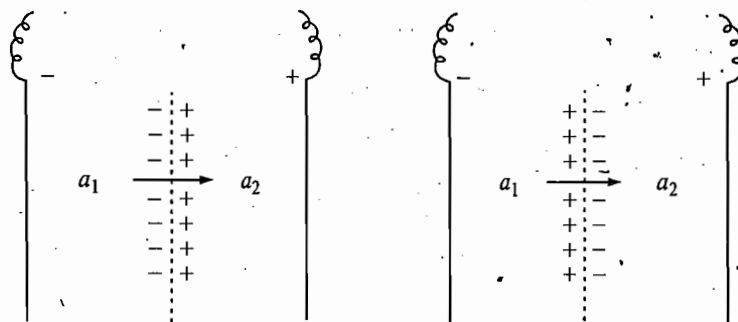
$E_{\text{cell}(wlj)} < E_{\text{cell}(wolj)}$ if $t_+ < t_-$

and $E_{\text{cell}(wlj)} = E_{\text{cell}(wolj)}$ if $t_+ = t_-$ (8.21.17)

The results of Eq. (8.21.17) also follows from Fig. 8.21.4 where the separation of charges across the boundary of the two solutions is shown as a result of migration ions.

Fig. 8.21.4 Correlation of the sign of liquid junction potential with the separation of charges at the boundary;

- (i) $t_+ > t_-$, E_{lj} is positive and $E_{\text{cell}(wlj)} > E_{\text{cell}(wolj)}$ and
 (ii) $t_+ < t_-$, E_{lj} is negative and $E_{\text{cell}(wlj)} < E_{\text{cell}(wolj)}$



Generalization of Results

From Eqs (8.21.4) and (8.21.11), it may be observed that the transference number which appears in expression of $E_{\text{cell}(wlj)}$ is that of the ionic species with respect to which the electrodes are not reversible. Expressions of $E_{\text{cell}(wlj)}$, $E_{\text{cell}(wolj)}$ and E_{lj} of both types of cells discussed above may be written together as shown below:

$$E_{\text{cell}(wlj)} = \pm 2t_{\mp} \frac{RT}{F} \ln \frac{(a_{\pm 2})_{\text{HCl}}}{(a_{\pm 1})_{\text{HCl}}} \quad (8.21.18)$$

$$E_{\text{cell}(wolj)} = \pm \frac{RT}{F} \ln \frac{(a_{\pm 2})_{\text{HCl}}}{(a_{\pm 1})_{\text{HCl}}} \quad (8.21.19)$$

$$E_{\text{cell}(wlj)} = 2t_{\mp} E_{\text{cell}(wolj)} \quad (8.21.20)$$

$$\begin{aligned} E_{lj} &= \pm (1 - 2t_{\pm}) \frac{RT}{F} \ln \frac{(a_{\pm 2})_{\text{HCl}}}{(a_{\pm 1})_{\text{HCl}}} \\ &= (t_- - t_+) \frac{RT}{F} \ln \frac{(a_{\pm 2})_{\text{HCl}}}{(a_{\pm 1})_{\text{HCl}}} \end{aligned} \quad (8.21.21)$$


where the upper and lower signs are meant for cells involving electrodes reversible with respect to cations and anions, respectively.

Use of KCl (or NH_4NO_3) in Salt Bridge

From Eqs (8.21.9) and (8.21.16), it may be observed that E_{ij} is zero if $t_+ = t_-$. This fact forms the basis of using potassium chloride (or ammonium nitrate) as a bridge in cell measurements involving liquid junction, since the two transport numbers are very nearly identical in this electrolyte.

Example 8.21.1

Show that the emf of cell



is given by

$$E = -t_- \left(\frac{x+y}{x} \right) \frac{RT}{yF} \ln \left(\frac{a_{\pm 1}}{a_{\pm 2}} \right)$$

Solution

Since the electrode reactions are reversible with respect to cation of charge number y we write, for the sake of simplicity, the cell reaction for the withdrawal of y faraday of electricity. The various reactions are:

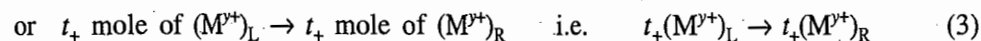
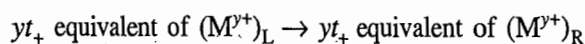
(i) Reaction at left cell



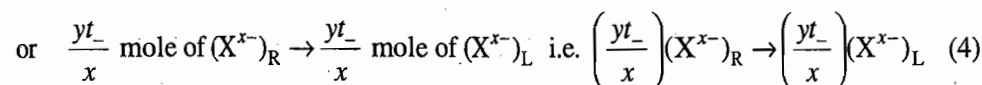
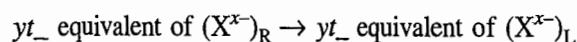
(ii) Reaction at right cell



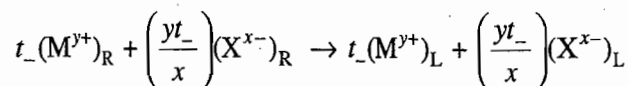
(iii) Transfer of cations from the left to right cell



(iv) Transfer of anions from the right to left cell



Adding Eqs (1) to (4) and rearranging, we get



The free energy change is given by

$$\Delta G = \left\{ t_-(\mu_{\text{M}^{y+}})_{\text{L}} + \left(\frac{yt_-}{x} \right) (\mu_{\text{X}^{x-}})_{\text{L}} \right\} - \left\{ t_-(\mu_{\text{M}^{y+}})_{\text{R}} + \left(\frac{yt_-}{x} \right) (\mu_{\text{X}^{x-}})_{\text{R}} \right\}$$

Writing μ in terms of μ° and activity and cancelling the μ° terms, we get

$$\Delta G = t_- RT \ln \frac{(a_{\text{M}^{y+}})_{\text{L}}}{(a_{\text{M}^{y+}})_{\text{R}}} + \frac{yt_-}{x} RT \ln \frac{(a_{\text{X}^{x-}})_{\text{L}}}{(a_{\text{X}^{x-}})_{\text{R}}}$$

Multiplying and dividing the first term by x and merging both the terms, we have

$$\Delta G = \frac{t_-}{x} RT \ln \frac{(a_{M^{y+}})_L (a_{X^{x-}})_L^y}{(a_{M^{y+}})_R (a_{X^{x-}})_R^y}$$

Making use of the expression

$$(a_{\pm})_{M_x M_y}^{x+y} = (a_{M^{y+}})^x (a_{X^{x-}})^y$$

we get
$$\Delta G = t_- \left(\frac{x+y}{x} \right) RT \ln \frac{a_{\pm 1}}{a_{\pm 2}}$$

Since y faraday of electricity has been withdrawn, we have

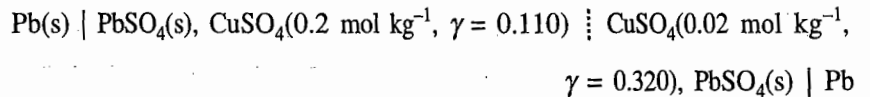
$$\Delta G = -yFE$$

and thus

$$E = -t_- \left(\frac{x+y}{x} \right) \frac{RT}{yF} \ln \left(\frac{a_{\pm 1}}{a_{\pm 2}} \right)$$

Example 8.21.2

Find the cell reaction and calculate the potential of following cell with transference at 298 K.

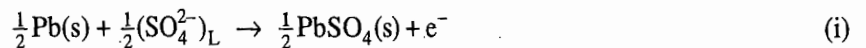


The transport number of Cu^{2+} is 0.370. Is the cell reaction spontaneous, as written? What would be the cell potential if the above cell is converted into one without liquid junction potential?

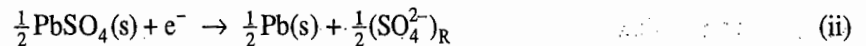
Solution

The cell reaction can be obtained by adding various reactions that take place when one faraday of electricity is withdrawn from the cell. The various reactions are:

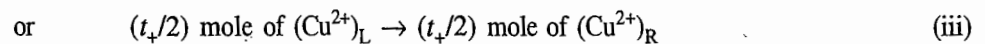
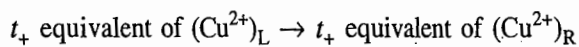
(i) Reaction at left electrode (anode)



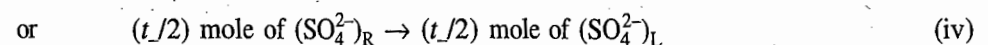
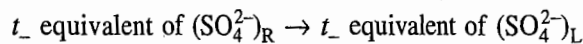
(ii) Reaction at right electrode (cathode)



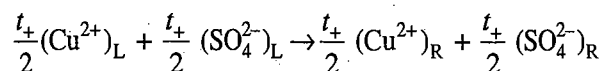
(iii) Transference of cations



(iv) Transference of anions



Adding Eqs (i) to (iv) and rearranging, we get



The cell potential is given by

$$\begin{aligned} E_{\text{cell(wlj)}} &= -\frac{t_+}{2} \frac{RT}{F} \ln \left\{ \frac{(a_{\text{Cu}^{2+}})_R (a_{\text{SO}_4^{2-}})_R}{(a_{\text{Cu}^{2+}})_L (a_{\text{SO}_4^{2-}})_L} \right\} = -t_+ \frac{RT}{F} \ln \left\{ \frac{(a_{\pm})_R}{(a_{\pm})_L} \right\} \\ &= -t_+ \frac{RT}{F} \ln \left\{ \frac{(m')_R (\gamma_{\pm})_R}{(m')_L (\gamma_{\pm})_L} \right\} = -t_+ \frac{RT}{F} \ln \left\{ \frac{(m')_R (\gamma_{\pm})_R}{(m')_L (\gamma_{\pm})_L} \right\} \end{aligned}$$

where $m' = m/m^\circ$. Substituting the given data, we get

$$\begin{aligned} E_{\text{cell(wlj)}} &= -(0.370)(0.05913 \text{ V}) \log \left\{ \frac{(0.02)(0.320)}{(0.2)(0.110)} \right\} \\ &= 0.0117 \text{ V} \end{aligned}$$

Since $E_{\text{cell(wlj)}}$ positive, the cell reaction will be spontaneous. Now since

$$E_{\text{cell(wlj)}} = 2t_+ E_{\text{cell(wolj)}}$$

it follows that

$$E_{\text{cell(wolj)}} = \frac{E_{\text{cell(wlj)}}}{2t_+} = \frac{0.0117 \text{ V}}{2 \times 0.370} = 0.01581 \text{ V}$$

8.22 COMMERCIAL CELLS

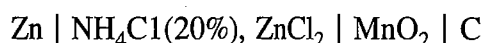
In this section, we describe some of the electrochemical cells which are commonly employed as sources of electrical energy. The electrochemical cells may be broadly classified into two categories as described below.

THE PRIMARY CELLS

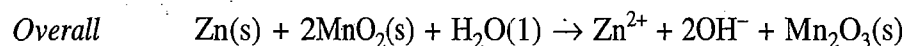
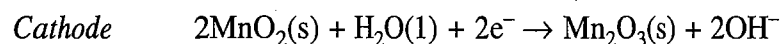
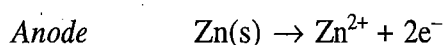
Such types of cells can be used only so long the active materials are present. Once these are consumed, the cell cannot be recharged by passage of current through it, and hence it has to be discarded.

Leclanche or Dry Cell

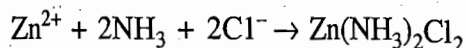
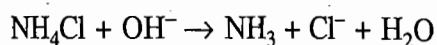
One of the examples is the Leclanche or dry cell represented as



The reactions involved are:



The OH^- generated in the above electrochemical reaction causes the following secondary reactions:



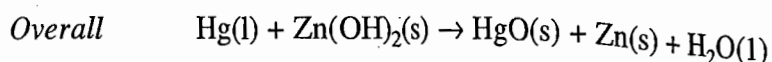
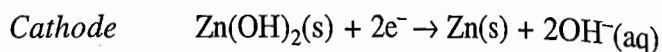
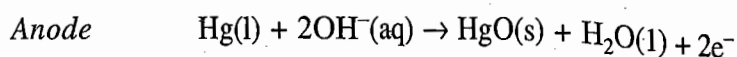
Since these reactions are not involved directly in the electrode reactions, they do not contribute anything towards the cell emf of 1.5 V. Since the cathode potential is a function of pH, the cell potential falls rapidly on continuous discharge.

Ruben-Mallory cell

Another example of the primary cell which provides more constant voltage is the Ruben-Mallory cell. Here the use of a large excess of hydroxyl ions makes the cell less sensitive to pH change. The cell is represented as



The reactions involved are:

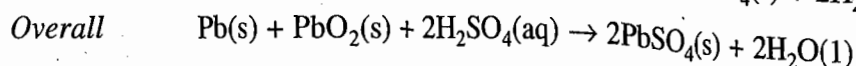
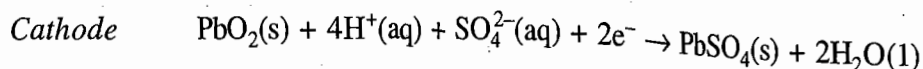
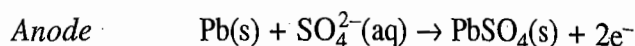


THE SECONDARY CELLS

Such types of cells can be used again and again by recharging the cell.

Load Storage cell

One of the examples is the lead storage cell where lead acts as anode and lead impregnated with lead dioxide acts as cathode. The electrolyte is a solution of approximately 20 per cent sulphuric acid with a specific gravity of about 1.15 at room temperature. The reactions involved are:

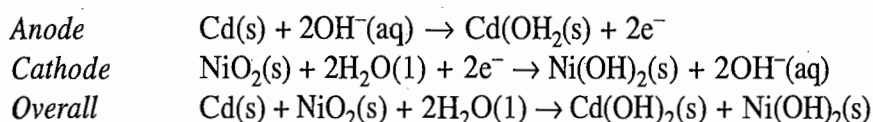


The emf of the cell depends on the activity of sulphuric acid in solution. At 25 °C, some of the values are 1.90 V at 7.4 per cent H_2SO_4 , 2.0 V at 21.4 per cent H_2SO_4 , and 2.14 V at 39.2 per cent H_2SO_4 .

To recharge the cell, it is connected with a cell of potential higher than that of the cell in such a way that the lead storage cell now acts as an electrolytic cell where lead is deposited on the cathode, lead dioxide is formed at the anode and H_2SO_4 is regenerated. The specific gravity of the solution rises due to the increase in H_2SO_4 concentration. The recharging is carried out only up to a certain specific gravity value.

Nicad cell

Another example of the secondary cell is the 'nicad' or nickel-cadmium battery. The anode and cathode are Cd and NiO_2 , respectively, and the electrolytic solution is KOH. The reactions are:



The emf of the cell is 1.4 V. This cell has comparatively longer life than a lead storage cell and can be packed in a sealed unit. This cell find its much applications in electronic calculators and electronic flash.

A Few More Examples

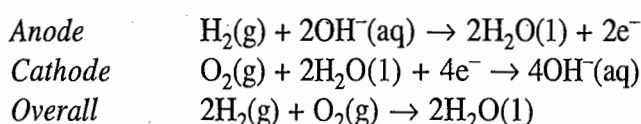
A few other examples of secondary cells are:

1. Edison cell (anode—iron, cathode—nickel oxide, electrolyte—KOH solution).
2. Silver-Zinc cell (anode—zinc, cathode—silver oxide, electrolyte—KOH solution).
3. Silver-Cadmium cell (anode—cadmium, cathode—silver oxide, electrolyte—KOH solution).

The term *battery* is used wherever a number of cells are connected in series or in series-parallel.

Fuel cell

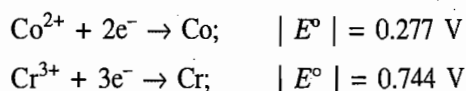
Fuel cells are another means by which chemical energy may be converted into electrical energy. Here the cathode and anode constituents are continually supplied and thus energy can be withdrawn indefinitely from a fuel cell as long as the outside supply of fuel is maintained. One of the examples is the hydrogen-oxygen fuel cell. The cell consists of three compartments separated from one another by porous electrodes. The hydrogen gas is fed into one compartment and the oxygen gas is fed into another compartment. These gases then diffuse slowly through the electrodes and react with an electrolyte that is in the central compartment. The electrodes are made of a conducting material, such as graphite, with a sprinkling of platinum to act as a catalyst, and the electrolyte is an aqueous solution of a base. The reactions are:



One of the advantages of the fuel cells is that the energy is extracted from the reactants under more nearly reversible conditions. This type of cell finds great importance in space vehicles.

8.23 SOLVED PROBLEMS

1. A half-cell A consisting of a strip of cobalt dipped into a 1 M solution of Co^{2+} and a half-cell B consisting of a strip of chromium dipped into a 1 M solution of Cr^{3+} . The magnitudes of the individual half-cell potentials were then determined as



Answer the following:

- (a) When both half-cells were connected separately with the standard hydrogen half-cell, the metallic electrode was found to be negative. What are the correct signs of the electrode potentials?

- (b) Will a reaction occur when metallic cobalt is placed in a 1 M solution of Cr^{3+} and when metallic chromium is dipped into a 1 M solution of Co^{2+} ?
- (c) Of the substances, Co, Co^{2+} , Cr and Cr^{3+} , which one is the strongest oxidant and the strongest reductant?
- (d) Cobaltous ion forms complex with ammonia $[\text{Co}(\text{NH}_3)_6]^{2+}$. If ammonium hydroxide were added to half-cell A, would its electrode potential become more positive, less positive or be unaffected?
- (e) If the half-cells A and B were connected together, which electrode would be negative? What would be the cell voltage? Suppose the above cell is connected with an external battery of voltage 1.0 V with (i) negative terminal of the cell attached to the negative terminal of the external battery, and (ii) negative terminal of the cell attached to the positive terminal of the external battery. What would be the cell reaction in the two cases?

Solution

(a) Since the metallic electrode was found to be negative, we may write the cell as



The emfs of the above two cells will be positive and are given by

$$E_{\text{cell(i)}}^{\circ} = E_{\text{H}^+ \mid \text{H}_2 \mid \text{Pt}}^{\circ} - E_{\text{Co}^{2+} \mid \text{Co}}^{\circ} = -E_{\text{Co}^{2+} \mid \text{Co}}^{\circ}$$

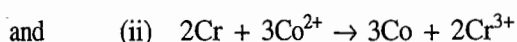
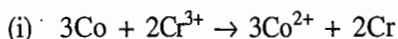
$$E_{\text{cell(ii)}}^{\circ} = E_{\text{H}^+ \mid \text{H}_2 \mid \text{Pt}}^{\circ} - E_{\text{Cr}^{3+} \mid \text{Cr}}^{\circ} = -E_{\text{Cr}^{3+} \mid \text{Cr}}^{\circ}$$

Since E_{cells}° are positive, it is obvious that the potentials $E_{\text{Co}^{2+} \mid \text{Co}}^{\circ}$ and $E_{\text{Cr}^{3+} \mid \text{Cr}}^{\circ}$ must be negative. Hence the values of these potentials are

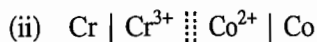
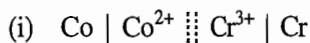
$$E_{\text{Co}^{2+} \mid \text{Co}}^{\circ} = -0.277 \text{ V}$$

$$E_{\text{Cr}^{3+} \mid \text{Cr}}^{\circ} = -0.744 \text{ V}$$

(b) The expected reactions would be



The cells giving these reactions would be



and the cell potentials would be

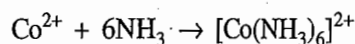
$$\begin{aligned} E_{\text{cell(i)}}^{\circ} &= E_{\text{Cr}^{3+} \mid \text{Cr}}^{\circ} - E_{\text{Co}^{2+} \mid \text{Co}}^{\circ} \\ &= -0.744 \text{ V} - (-0.277 \text{ V}) = -0.467 \text{ V} \end{aligned}$$

$$\begin{aligned} E_{\text{cell(ii)}}^{\circ} &= E_{\text{Co}^{2+} \mid \text{Co}}^{\circ} - E_{\text{Cr}^{3+} \mid \text{Cr}}^{\circ} \\ &= -0.277 \text{ V} - (-0.744 \text{ V}) = 0.467 \text{ V} \end{aligned}$$

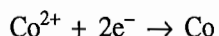
Since $E_{\text{cell(ii)}}$ is positive, it is obvious that Cr can react with Co^{2+} whereas Co cannot react with Cr^{3+} .

(c) Of the two potentials, $E_{\text{Co}^{2+}|\text{Co}}^{\circ}$ is more positive and thus Co^{2+} ions are more easily reducible than Cr^{3+} ions. Hence Co^{2+} ions act as a more powerful oxidizing agent (strongest oxidant). On the other hand, Cr will act as a more powerful reducing agent (strongest reductant).

(d) The reaction of Co^{2+} with NH_3 is



which reduces the concentration of free Co^{2+} ions in solution. The Nernst equation for the reaction



is given by
$$E_{\text{Co}^{2+}|\text{Co}} = E_{\text{Co}^{2+}|\text{Co}}^{\circ} - \frac{RT}{2F} \ln \frac{1}{a(\text{Co}^{2+})}$$

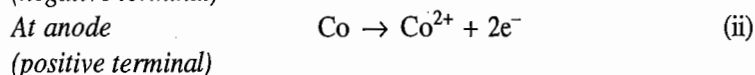
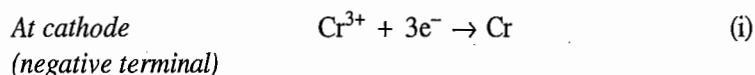
Thus, on decreasing the activity of Co^{2+} ions, the potential $E_{\text{Co}^{2+}|\text{Co}}$ will become less positive.

(e) If the half-cells A and B are connected to give a galvanic cell, then the more negative electrode will serve as the negative electrode, i.e. the chromium electrode. The potential would be

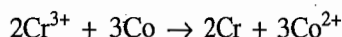
$$E_{\text{cell}} = E_{\text{Co}^{2+}|\text{Co}}^{\circ} - E_{\text{Cr}^{3+}|\text{Cr}}^{\circ} = -0.277 \text{ V} - (-0.744 \text{ V}) = 0.467 \text{ V}$$

If this cell is connected with an external battery of 1.0 V in the two given ways, we would have:

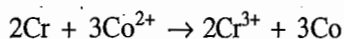
(i) *Negative terminal of the cell connected to the negative terminal of the external battery:* Since the potential of the external battery is larger than the emf of the cell, the electrons will flow from the external battery into the cell. Thus, the given cell will become an electrolytic cell with the following cell reaction:



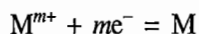
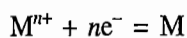
Multiplying Eq. (i) by 2 and Eq. (ii) by 3, then adding we get



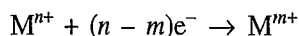
(ii) *Negative terminal of the cell connected to the positive terminal of the external battery:* In this case, the electrons flow from the negative terminal of the cell to its positive terminal through the external battery, i.e. the cell continues to serve as the galvanic cell with the cell reaction:



2. (a) The standard potentials of the two reactions



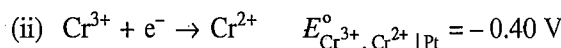
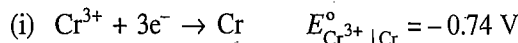
are $E_{\text{M}^{n+}|\text{M}}^{\circ}$ and $E_{\text{M}^{m+}|\text{M}}^{\circ}$, respectively. Assuming n to be greater than m , show that the standard potential of the reaction



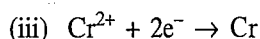
is given by

$$E_{M^{n+}, M^{m+} | Pt}^{\circ} = \frac{nE_{M^{n+} | M}^{\circ} - mE_{M^{m+} | M}^{\circ}}{n - m}$$

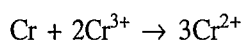
(b) From the data



Compute E° for the reaction



(c) A cell is to be constructed to give a reaction



show how it can be constructed by combining the half-cells $\text{Cr}^{3+} | \text{Cr}$ and $\text{Cr}^{3+}, \text{Cr}^{2+} | \text{Pt}$; $\text{Cr}^{3+} | \text{Cr}$ and $\text{Cr}^{2+} | \text{Cr}$; and $\text{Cr}^{3+}, \text{Cr}^{2+} | \text{Pt}$ and $\text{Cr}^{2+} | \text{Cr}$. Do you expect the same E° value in each case? If not, explain why. Calculate the equilibrium constant for the above reaction at 298 K.

Solution

(a) We have

Electrode reaction	Electrode potential	Free energy change
(i) $M^{n+} + ne^{-} \rightarrow M$	$E_{M^{n+} M}^{\circ}$	$\Delta G_1 = -nFE_{M^{n+} M}^{\circ}$
(ii) $M^{m+} + me^{-} \rightarrow M$	$E_{M^{m+} M}^{\circ}$	$\Delta G_2 = -mFE_{M^{m+} M}^{\circ}$
(iii) $M^{n+} + (n - m)e^{-} \rightarrow M^{m+}$	$E_{M^{n+}, M^{m+} Pt}^{\circ}$	$\Delta G_3 = -(n - m)FE_{M^{n+}, M^{m+} Pt}^{\circ}$

Now reaction (iii) can be obtained by subtracting reaction (ii) from reaction (i). Hence, we must have

$$\Delta G_3^{\circ} = \Delta G_1^{\circ} - \Delta G_2^{\circ}$$

$$-(n - m)FE_{M^{n+}, M^{m+} | Pt}^{\circ} = -nFE_{M^{n+} | M}^{\circ} - (-mFE_{M^{m+} | M}^{\circ})$$

$$\text{Thus } E_{M^{n+}, M^{m+} | Pt}^{\circ} = \frac{nE_{M^{n+} | M}^{\circ} - mE_{M^{m+} | M}^{\circ}}{(n - m)}$$

(b) We have:

Electrode reaction	Electrode potential	Free energy change
(i) $\text{Cr}^{3+} + 3e^{-} \rightarrow \text{Cr}$	$E_{\text{Cr}^{3+} \text{Cr}}^{\circ} = -0.74 \text{ V}$	$\Delta G_1^{\circ} = -3F(-0.74 \text{ V})$
(ii) $\text{Cr}^{3+} + e^{-} \rightarrow \text{Cr}^{2+}$	$E_{\text{Cr}^{3+}, \text{Cr}^{2+} \text{Pt}}^{\circ} = -0.40 \text{ V}$	$\Delta G_2^{\circ} = -F(-0.40 \text{ V})$
(iii) $\text{Cr}^{2+} + 2e^{-} \rightarrow \text{Cr}$	$E_{\text{Cr}^{2+} \text{Cr}}^{\circ} = ?$	$\Delta G_3^{\circ} = -2FE_{\text{Cr}^{2+} \text{Cr}}^{\circ}$

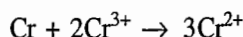
The reaction (iii) can be obtained by subtracting reaction (ii) from reaction (i) Hence, we must have

$$\Delta G_3^\circ = \Delta G_1^\circ - \Delta G_2^\circ$$

$$-2FE_{\text{Cr}^{2+}|\text{Cr}}^\circ = 3F(0.74 \text{ V}) - F(0.40 \text{ V})$$

$$\text{Thus } E_{\text{Cr}^{2+}|\text{Cr}}^\circ = -\frac{2.22 \text{ V} - 0.40 \text{ V}}{2} = -\frac{1.82 \text{ V}}{2} = -0.91 \text{ V}$$

(c) The given cell reaction is



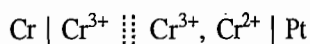
The cell giving the above reaction may be constructed as follows.

(i) Using half-cells $\text{Cr}^{3+} | \text{Cr}$ and $\text{Cr}^{3+}, \text{Cr}^{2+} | \text{Pt}$.

The given reaction may be split into the following half-cell reactions:



Multiplying the former reaction by 3 and then adding it to the latter reaction, we get the given cell reaction. Thus, the cell would be

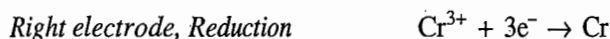


$$\text{with } E_{\text{cell}}^\circ = E_{\text{Cr}^{3+}, \text{Cr}^{2+} | \text{Pt}}^\circ - E_{\text{Cr}^{3+} | \text{Cr}}^\circ = -0.40 \text{ V} - (-0.74 \text{ V}) = 0.34 \text{ V}$$

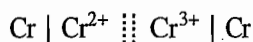
$$\text{and } \Delta G^\circ = -nFE_{\text{cell}}^\circ = -3F(0.34 \text{ V}) = -F(1.02 \text{ V})$$

(ii) Using half-cells $\text{Cr}^{3+} | \text{Cr}$ and $\text{Cr}^{2+} | \text{Cr}$.

In this, case, we will have



Multiplying the former reaction by 2 and the latter reaction by 3 and then on adding, we get the given cell reaction. Hence, the cell would be

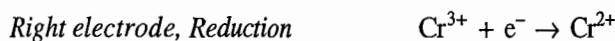


$$\text{with } E_{\text{cell}}^\circ = E_{\text{Cr}^{3+} | \text{Cr}}^\circ - E_{\text{Cr}^{2+} | \text{Cr}}^\circ = -0.74 \text{ V} - (-0.91 \text{ V}) = 0.17 \text{ V}$$

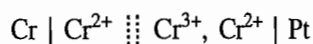
$$\text{and } \Delta G^\circ = -nFE_{\text{cell}}^\circ = -6F(0.17 \text{ V}) = -F(1.02 \text{ V})$$

(iii) Using half-cells $\text{Cr}^{3+}, \text{Cr}^{2+} | \text{Pt}$ and $\text{Cr}^{2+} | \text{Cr}$.

In this case, we have



Multiplying the former reaction by 2 and then adding to it the latter reaction, we get the given cell reaction. Hence, the cell would be



with $E_{\text{cell}}^{\circ} = E_{\text{Cr}^{3+}, \text{Cr}^{2+} \mid \text{Pt}}^{\circ} - E_{\text{Cr}^{2+} \mid \text{Cr}}^{\circ} = -0.40 \text{ V} - (-0.91 \text{ V}) = 0.51 \text{ V}$

and $\Delta G^{\circ} = -nFE_{\text{cell}}^{\circ} = -2F(0.51 \text{ V}) = -F(1.02 \text{ V})$

In all the three cases discussed above, E_{cell}° is different since it depends on the make up of the cell. It may be observed that the value of ΔG° is the same in all the three cases as it depends only on the cell reaction.

Calculation of Standard Equilibrium Constant This can be calculated using the expression


$$\Delta G^{\circ} = -RT \ln K^{\circ}$$

or $\ln K^{\circ} = -\frac{\Delta G^{\circ}}{RT} = -\frac{-F(1.02 \text{ V})}{RT} = \frac{F(1.02 \text{ V})}{RT}$

or $\log K^{\circ} = (1.02 \text{ V}) \left(\frac{F}{2.303RT} \right) = \frac{1.02}{0.05913} = 17.25$

Hence $K^{\circ} = 1.78 \times 10^{17}$

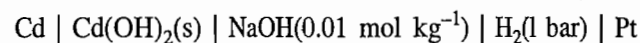
3. Given the cell



with $E_{\text{cell}} = 0.0 \text{ V}$ at 298 K. If $E_{\text{Cd}^{2+} \mid \text{Cd}}^{\circ} = -0.40 \text{ V}$. Calculate (a) K_{sp} for $\text{Cd}(\text{OH})_2$, and (b) ΔG , ΔS and ΔH for the cell reaction if $(\partial E/\partial T)_p = 0.002 \text{ V K}^{-1}$.

Solution

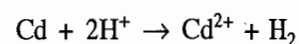
For the given cell



we have:

Electrode	Reduction reaction	
Right	$2\text{H}^+ + 2\text{e}^- \rightarrow \text{H}_2$	(i)
Left	$\text{Cd}^{2+} + 2\text{e}^- \rightarrow \text{Cd}$	(ii)

Subtraction of Eq. (ii) from Eq. (i) gives the cell reaction:



The emf of the cell is given by

$$E_{\text{cell}} = E^{\circ} - \frac{RT}{2F} \ln \frac{(a_{\text{Cd}^{2+}})(f_{\text{H}_2}/f^{\circ})}{(a_{\text{H}^+})^2}$$

Assuming $f_{\text{H}_2} = p(\text{H}_2)$ and the fact that $p(\text{H}_2) = 1 \text{ bar}$, we get

$$E_{\text{cell}} = E^{\circ} - \frac{RT}{2F} \ln \left(\frac{a_{\text{Cd}^{2+}}}{a_{\text{H}^+}^2} \right) \quad \text{(iii)}$$

(a) Equation (iii) may be written as

$$E_{\text{cell}} = E^{\circ} - \frac{RT}{2F} \ln \left(\frac{a_{\text{Cd}^{2+}} a_{\text{OH}^{-}}^2}{a_{\text{H}^{+}}^2 a_{\text{OH}^{-}}^2} \right)$$

$$= E^{\circ} - \frac{RT}{2F} \ln \frac{K_{\text{sp}}^{\circ}}{K_{\text{w}}^{\circ 2}}$$

Substituting the given data, we get

$$0 = \{0 - (-0.40 \text{ V})\} - \frac{0.05913 \text{ V}}{2} \log \left(\frac{K_{\text{sp}}^{\circ}}{K_{\text{w}}^{\circ 2}} \right)$$

or

$$\log \left(\frac{K_{\text{sp}}^{\circ}}{K_{\text{w}}^{\circ 2}} \right) = \frac{(0.40 \text{ V})}{(0.02957 \text{ V})} = 13.527$$

This gives $\frac{K_{\text{sp}}^{\circ}}{K_{\text{w}}^{\circ 2}} = 3.36 \times 10^{13}$

i.e. $\frac{K_{\text{sp}}/M^3}{K_{\text{w}}^2/M^4} = 3.36 \times 10^{13}$ or $\frac{K_{\text{sp}}}{K_{\text{w}}^2} = 3.36 \times 10^{13} \text{ M}^{-1}$

Hence $K_{\text{sp}} = (3.36 \times 10^{13} \text{ M}^{-1}) K_{\text{w}}^2 = (3.36 \times 10^{13} \text{ M}^{-1}) (10^{-28} \text{ M}^4)$
 $= 3.36 \times 10^{-15} \text{ M}^3$

(b) We have

$$\Delta G = -nFE = 0$$

$$\Delta S = nF \left(\frac{\partial E}{\partial T} \right)_p = 2(96500 \text{ C mol}^{-1})(0.002 \text{ V K}^{-1})$$

$$= 386 \text{ C V K}^{-1} \text{ mol}^{-1}, \text{ i.e. } 386 \text{ J K}^{-1} \text{ mol}^{-1}$$

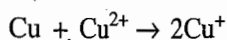
$$\Delta H = \Delta G + T\Delta S = T\Delta S = (298 \text{ K})(386 \text{ J K}^{-1} \text{ mol}^{-1})$$

$$= 115028 \text{ J mol}^{-1} = 115.028 \text{ kJ mol}^{-1}$$

4. When metallic copper is shaken with a solution of a copper salt, the reaction $\text{Cu} + \text{Cu}^{2+} \rightarrow 2\text{Cu}^+$ proceeds. When equilibrium is established at 298 K, $[\text{Cu}^{2+}]/[\text{Cu}^+]^2 = 1.66 \times 10^6 \text{ (mol dm}^{-3}\text{)}^{-1}$. If the standard potential of the $\text{Cu}^{2+} | \text{Cu}$ half-cell is +0.337 V, what is the standard (reduction) potential of $\text{Cu}^+ | \text{Cu}$ half-cell?

Solution

The cell producing the given reaction



is $\text{Cu} | \text{Cu}^+ || \text{Cu}^+, \text{Cu}^{2+} | \text{Pt}$

and its standard emf is given by

$$E_{\text{cell}}^{\circ} = E_{\text{Cu}^{2+}, \text{Cu}^+ | \text{Pt}}^{\circ} - E_{\text{Cu}^+ | \text{Cu}}^{\circ} \quad (1)$$

The equilibrium constant of the reaction is

$$K_{\text{eq}} = \frac{[\text{Cu}^+]^2}{[\text{Cu}^{2+}]} = \frac{1}{1.66 \times 10^6 \text{ mol}^{-1} \text{ dm}^3} = 6.024 \times 10^{-7} \text{ mol dm}^{-3}$$

From the relations

$$\Delta G^\circ = -nFE_{\text{cell}}^\circ \quad \text{and} \quad \Delta G^\circ = -RT \ln K_{\text{eq}}^\circ$$

we can determine E_{cell}° by using the expression

$$E_{\text{cell}}^\circ = \frac{RT}{nF} \ln K_{\text{eq}}^\circ = \frac{0.05913 \text{ V}}{n} \log K_{\text{eq}}^\circ; \quad (\text{at } 298 \text{ K})$$

Substituting the data, we get

$$\begin{aligned} E_{\text{cell}}^\circ &= \frac{0.05913 \text{ V}}{1} \log (6.024 \times 10^{-7}) = (0.05913 \text{ V}) (-6.22) \\ &= -0.3678 \text{ V} \end{aligned} \quad (2)$$

Now the standard potential of $\text{Cu}^{2+} | \text{Cu}$ will be related to the potentials of $\text{Cu}^+ | \text{Cu}$ and $\text{Cu}^{2+}, \text{Cu}^+ | \text{Pt}$. We have

Electrode	Reaction	Potential	ΔG°
(i) $\text{Cu}^+ \text{Cu}$	$\text{Cu}^+ + e^- \rightarrow \text{Cu}$	$E_{\text{Cu}^+ \text{Cu}}^\circ$	$-FE_{\text{Cu}^+ \text{Cu}}^\circ$
(ii) $\text{Cu}^{2+}, \text{Cu}^+ \text{Pt}$	$\text{Cu}^{2+} + e^- \rightarrow \text{Cu}^+$	$E_{\text{Cu}^{2+}, \text{Cu}^+ \text{Pt}}^\circ$	$-FE_{\text{Cu}^{2+}, \text{Cu}^+ \text{Pt}}^\circ$
(iii) $\text{Cu}^{2+} \text{Cu}$	$\text{Cu}^{2+} + 2e^- \rightarrow \text{Cu}$	$E_{\text{Cu}^{2+} \text{Cu}}^\circ$	$-2FE_{\text{Cu}^{2+} \text{Cu}}^\circ$

Adding reactions of Eqs (i) and (ii), we get the reaction of Eq. (iii). Therefore

$$-FE_{\text{Cu}^+ | \text{Cu}}^\circ - FE_{\text{Cu}^{2+}, \text{Cu}^+ | \text{Pt}}^\circ = -2FE_{\text{Cu}^{2+} | \text{Cu}}^\circ$$

$$\text{or} \quad E_{\text{Cu}^{2+} | \text{Cu}}^\circ = \frac{1}{2}[E_{\text{Cu}^+ | \text{Cu}}^\circ + E_{\text{Cu}^{2+}, \text{Cu}^+ | \text{Pt}}^\circ] \quad (3)$$

From Eqs (1), (2) and (3), we have

$$E_{\text{Cu}^{2+}, \text{Cu}^+ | \text{Pt}}^\circ - E_{\text{Cu}^+ | \text{Cu}}^\circ = -0.3678 \text{ V}$$

$$E_{\text{Cu}^{2+}, \text{Cu}^+ | \text{Pt}}^\circ + E_{\text{Cu}^+ | \text{Cu}}^\circ = 2E_{\text{Cu}^{2+} | \text{Cu}}^\circ = 2 \times 0.337 \text{ V} = 0.674 \text{ V}$$

Solving for $E_{\text{Cu}^{2+}, \text{Cu}^+ | \text{Pt}}^\circ$ and $E_{\text{Cu}^+ | \text{Cu}}^\circ$, we get

$$E_{\text{Cu}^{2+}, \text{Cu}^+ | \text{Pt}}^\circ = 0.153 \text{ V} \quad \text{and} \quad E_{\text{Cu}^+ | \text{Cu}}^\circ = 0.521 \text{ V}$$

5. When silver chloride is dissolved in a large excess of ammonia, practically all silver can be assumed to exist as $\text{Ag}_m(\text{NH}_3)_n^{m+}$. Compute the values of m and n using the following two cells:

$$\text{Ag} | 0.379 \times 10^{-3} \text{ M AgCl}, 1 \text{ M NH}_3 \parallel 37.9 \times 10^{-3} \text{ M AgCl}, 1 \text{ M NH}_3 | \text{Ag}$$

$$E_{\text{cell}} = 0.1185 \text{ V at } 298 \text{ K}$$

$$\text{Ag} | 3.4 \times 10^{-3} \text{ M AgCl}, 1 \text{ M NH}_3 \parallel 3.4 \times 10^{-3} \text{ M AgCl}, 0.1 \text{ M NH}_3 | \text{Ag}$$

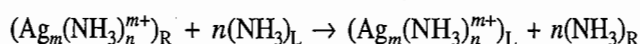
$$E_{\text{cell}} = 0.1263 \text{ V at } 298 \text{ K}$$

Solution

For the given cells, we have

<i>Electrode</i>	<i>Reduction reaction</i>	
Right	$(Ag_m(NH_3)_n^{m+})_R + me^- \rightarrow m Ag + n(NH_3)_R$	(i)
Left	$(Ag_m(NH_3)_n^{m+})_L + me^- \rightarrow m Ag + n(NH_3)_L$	(ii)

Subtraction of Eq. (ii) from Eq. (i) gives the cell reaction as



The emf of the cell is given by

$$E_{\text{cell}} = -\frac{RT}{mF} \ln \left(\frac{[Ag_m(NH_3)_n^{m+}]_L [NH_3]_R^n}{[Ag_m(NH_3)_n^{m+}]_R [NH_3]_L^n} \right)$$

For the first cell, we have

$$\begin{aligned} 0.1185 \text{ V} &= -\left(\frac{0.05913 \text{ V}}{m}\right) \log \left(\frac{0.379 \times 10^{-3}}{37.9 \times 10^{-3}}\right) \\ &= -\left(\frac{0.05913 \text{ V}}{m}\right) (-2) \end{aligned}$$

Hence $m = \frac{2 \times 0.05913}{0.1185} = 1$

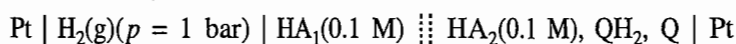
For the second cell, we have

$$0.1263 \text{ V} = -\left(\frac{0.05913 \text{ V}}{m}\right) \log \left(\frac{0.1}{1}\right)^n$$

Since $m = 1$, we have

$$n = \frac{0.1263}{0.059} \approx 2$$

Thus, the formula of the complex is $Ag(NH_3)_2^+$.

6. The emf of the cell

is found to be 0.7314 V at 298 K, where HA_1 and HA_2 are two monoprotic weak acids.

Answer the following:

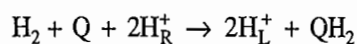
- Which of the two acids is stronger?
- How many times is it stronger?
- If the dissociation constant of the stronger acid is $2.1 \times 10^{-4} \text{ mol dm}^{-3}$, calculate the dissociation constant of the other.
- What are the values of pH of the two solutions?

Solution

(a) For the given cell, we have

Electrode	Reduction reaction	
Right	$Q + 2H_R^+ + 2e^- \rightarrow QH_2$	(i)
Left	$2H_L^+ + 2e^- \rightarrow H_2$	(ii)

Subtraction of Eq. (ii) from Eq. (i) gives the cell reaction as

Since $p(H_2) = 1$ bar, the emf of the cell is given by

$$E = E^\circ - \frac{RT}{2F} \ln \left\{ \frac{\left(\frac{a_{H^+}}{a_{H^+}} \right)_L^2 \left(\frac{a_{QH_2}}{a_Q} \right)}{\left(\frac{a_{H^+}}{a_{H^+}} \right)_R} \right\}$$

Assuming $a_{QH_2} = a_Q$, we get

$$E = E^\circ - \frac{RT}{F} \ln \left(\frac{a_{H^+}}{a_{H^+}} \right)_L$$

$$\text{Now } E^\circ = E_{QH_2, Q, H^+ | Pt}^\circ - E_{H^+ | H_2 | Pt}^\circ = E_{QH_2, Q, H^+ | Pt}^\circ = 0.6994 \text{ V}$$

With this, the previous expression becomes

$$E = 0.6994 \text{ V} - \frac{RT}{F} \ln \left(\frac{a_{H^+}}{a_{H^+}} \right)_L$$

At 298 K, we have

$$E = 0.6994 \text{ V} - (0.05913 \text{ V}) \log \left\{ \frac{a_{H^+}}{a_{H^+}} \right\}_L$$

$$\text{or } -\log \left\{ \frac{a_{H^+}}{a_{H^+}} \right\}_L = \frac{E - 0.6994 \text{ V}}{0.05913 \text{ V}}$$

Since $E = 0.7314 \text{ V}$, we get

$$-\log \left\{ \frac{a_{H^+}}{a_{H^+}} \right\}_L = \frac{0.7314 \text{ V} - 0.6994 \text{ V}}{0.05913 \text{ V}}$$

$$\text{or } \log \frac{a_{H^+}}{a_{H^+}}_R = 0.5412$$

$$\text{Hence } \frac{a_{H^+}}{a_{H^+}}_R = 3.477$$

Thus, the acid HA_2 is stronger than the acid HA_1 .(b) The acid HA_2 is 3.477 times stronger than the acid HA_1 .

(c) For the two acids, we have

$$K_1 = \frac{a_{H^+}}{a_{H^+}}_L \frac{a_{A_1^-}}{a_{HA_1}} \quad \text{and} \quad K_2 = \frac{a_{H^+}}{a_{H^+}}_R \frac{a_{A_2^-}}{a_{HA_2}}$$

Assuming

$$(a_{\text{H}^+})_{\text{L}} = a_{\text{A}_1^-}$$

$$(a_{\text{H}^+})_{\text{R}} = a_{\text{A}_2^-}$$

we get
$$K_1 = \frac{(a_{\text{H}^+})_{\text{L}}^2}{a_{\text{HA}_1}} \quad \text{or} \quad (a_{\text{H}^+})_{\text{L}} = (K_1 a_{\text{HA}_1})^{1/2}$$

$$K_2 = \frac{(a_{\text{H}^+})_{\text{R}}^2}{a_{\text{HA}_2}} \quad \text{or} \quad (a_{\text{H}^+})_{\text{R}} = (K_2 a_{\text{HA}_2})^{1/2}$$

Thus
$$\frac{(a_{\text{H}^+})_{\text{R}}}{(a_{\text{H}^+})_{\text{L}}} = \left(\frac{K_2}{K_1} \frac{a_{\text{HA}_2}}{a_{\text{HA}_1}} \right)^{1/2}$$

As the acids are weak, we may assume

$$a_{\text{HA}_1} = a_{\text{HA}_2}$$

Thus
$$\frac{(a_{\text{H}^+})_{\text{R}}}{(a_{\text{H}^+})_{\text{L}}} = \left(\frac{K_2}{K_1} \right)^{1/2}$$

Since $(a_{\text{H}^+})_{\text{R}}/(a_{\text{H}^+})_{\text{L}}$ is equal to 3.477, we get

$$\left(\frac{K_2}{K_1} \right)^{1/2} = 3.477$$

Now $K_2 = 2.1 \times 10^{-4} \text{ mol dm}^{-3}$, therefore

$$K_1 = \frac{K_2}{(3.477)^2} = \frac{2.1 \times 10^{-4} \text{ mol dm}^{-3}}{(3.477)^2} = 1.74 \times 10^{-5} \text{ mol dm}^{-3}$$

(d) Assuming activities equal to concentrations, we have

$$\begin{aligned} (c_{\text{H}^+})_{\text{R}} &= (K_2 c_{\text{HA}_2})^{1/2} = \{(2.1 \times 10^{-4} \text{ mol dm}^{-3}) (0.1 \text{ mol dm}^{-3})\}^{1/2} \\ &= 4.58 \times 10^{-3} \text{ mol dm}^{-3} \end{aligned}$$

$$(\text{pH})_{\text{R}} = -\log \{(c_{\text{H}^+})_{\text{R}} / \text{mol dm}^{-3}\} = 2.34$$

$$\begin{aligned} (c_{\text{H}^+})_{\text{L}} &= (K_1 c_{\text{HA}_1})^{1/2} = \{(1.74 \times 10^{-5} \text{ mol dm}^{-3}) (0.1 \text{ mol dm}^{-3})\}^{1/2} \\ &= 1.32 \times 10^{-3} \text{ mol dm}^{-3} \end{aligned}$$

$$(\text{pH})_{\text{L}} = -\log \{(c_{\text{H}^+})_{\text{L}} / \text{mol dm}^{-3}\} = 2.88$$

7. Determine the degree of hydrolysis and hydrolysis constant of anilinium hydrochloride in M/32 solution of salt at 298 K from the following cell data at 298 K:

$$\text{Pt} \mid \text{H}_2(1 \text{ bar}) \mid \text{H}^+(a = 1) \parallel \frac{\text{M}}{32} \text{C}_6\text{H}_5\text{NH}_2\text{HCl soln.} \mid \text{H}_2(1 \text{ bar}) \mid \text{Pt}$$

$$E_{\text{cell}} = -0.188 \text{ V.}$$

Solution

Since $E_{\text{cell}} = E_{\text{R}} - E_{\text{L}}$

therefore $E_{\text{R}} = E_{\text{cell}} = -0.188 \text{ V}$

Now
$$E_{\text{R}} = -\frac{RT}{F} \ln \frac{(p_{\text{H}_2}/p^\circ)^{1/2}}{([\text{H}^+]/c^\circ)}$$

$$= \frac{RT}{F} \ln ([\text{H}^+]/c^\circ); \quad (\text{as } p(\text{H}_2) = 1 \text{ bar})$$

Thus $\log \{[\text{H}^+]/c^\circ\} = E_{\text{R}} \left(\frac{F}{2.303RT} \right)$

At 298 K, we have

$$\log ([\text{H}^+]/c^\circ) = \frac{-0.188 \text{ V}}{(0.05913 \text{ V})} = -3.179$$

or $[\text{H}^+] = 6.62 \times 10^{-4} \text{ mol dm}^{-3}$

The hydrolysis reaction is



Let α be the degree of hydrolysis. It is obvious that

$$[\text{H}_3\text{O}^+] = c\alpha$$

where c is the concentration of anilinium hydrochloride solution.

Thus $\alpha = \frac{[\text{H}_3\text{O}^+]}{c}$

Substituting the values, we get

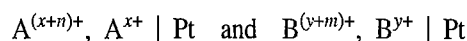
$$\alpha = \frac{6.62 \times 10^{-4} \text{ M}}{(1/32) \text{ M}} = 2.118 \times 10^{-2}$$

Now
$$K_{\text{h}} = \frac{[\text{C}_6\text{H}_5\text{NH}_2][\text{H}_3\text{O}^+]}{[\text{C}_6\text{H}_5\text{NH}_3^+]} = \frac{(c\alpha)(c\alpha)}{c(1-\alpha)} = \frac{c\alpha^2}{1-\alpha}$$

$$= \frac{(1 \text{ mol dm}^{-3}/32)(2.118 \times 10^{-2})^2}{(1-0.02118)}$$

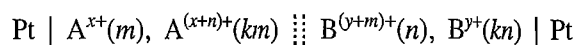
$$= 1.43 \times 10^{-5} \text{ mol dm}^{-3}$$

8. The standard potentials of the two half-cells



are E_1° and E_2° , respectively. If E_2° is greater than E_1° , answer the following.

(i) The cell



was constructed, where k has some constant value. The cell was operated reversibly up to its exhaustion point, i.e. to a point where no more reaction in the cell takes place and hence no more current can be withdrawn from the cell. Show that

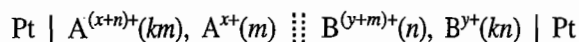
(a) the half-cell potentials at the exhaustion point are given by the expression

$$E = \frac{nE_L^\circ + mE_R^\circ}{(n+m)}$$

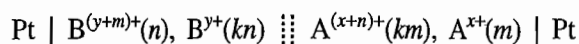
(b) The value of k at the exhaustion point at 298 K is given by the relation

$$\log k_e = \frac{nm(E_R^\circ - E_L^\circ)}{(0.05913 \text{ V})(m+n)}$$

(ii) Which of the following two cells will give a spontaneous cell reaction when $k < k_e$?



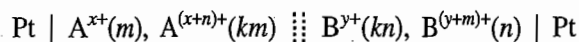
and



Which of the four species is more powerful oxidant and reductant?

Solution

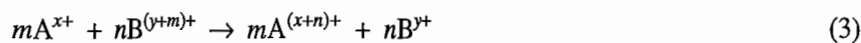
(i) The given cell is



Its cell reaction may be obtained as follows:

Electrode	Reduction reaction	
Right	$B^{(y+m)^+} + me^- \rightarrow B^{y^+}$	(i)
Left	$A^{(x+n)^+} + ne^- \rightarrow A^{x^+}$	(ii)

Multiplying Eq. (1) by n and Eq. (2) by m and then subtracting the latter from the former, we get



The cell potential would be

$$E_{\text{cell}} = E_{\text{cell}}^\circ - \frac{RT}{mF} \ln \left\{ \frac{[A^{(x+n)^+}]^m [B^{y^+}]^n}{[A^{x^+}]^m [B^{(y+m)^+}]^n} \right\} \quad (4)$$

Now as the cell operates, concentrations A^{x^+} and $B^{(y+m)^+}$ will decrease and those of $A^{(x+n)^+}$ and B^{y^+} will increase. If the concentration x of A^{x^+} disappear, concentrations of various species will be:

$$[A^{x^+}] = m - x$$

$$[B^{(y+m)^+}] = n - \frac{n}{m}x = n \left(\frac{m-x}{m} \right)$$

$$[A^{(x+n)^+}] = km + x$$

$$[B^{y^+}] = kn + \frac{n}{m}x = n \left(\frac{km+x}{m} \right)$$

From these concentrations, it follows that at any stage of the reaction, we will have

$$\frac{[A^{x+}]}{[B^{(y+m)+}]} = \frac{[A^{(x+n)+}]}{[B^{y+}]} = \frac{m}{n} \quad (5)$$

(a) The electrode potentials of the two half-cells are given by

$$E_R = E_R^\circ - \frac{RT}{mF} \ln \left(\frac{[B^{y+}]}{[B^{(y+m)+}]} \right) \quad (6)$$

$$E_L = E_L^\circ - \frac{RT}{nF} \ln \left(\frac{[A^{x+}]}{[A^{(x+n)+}]} \right) \quad (7)$$

At the exhaustion point (when no current can be withdrawn from the cell), the two potentials will become identical. The electrode potentials at the exhaustion point can be obtained by multiplying Eq. (6) by m , and Eq. (7) by n and then adding the resultant expressions. Thus, we have

$$(mE_R + nE_L) = (mE_R^\circ + nE_L^\circ) - \frac{RT}{F} \ln \left\{ \frac{[B^{y+}][A^{x+}]}{[B^{(y+m)+}][A^{(x+n)+}]} \right\}$$

or

$$(m+n)E_e = (mE_R^\circ + nE_L^\circ) - \frac{RT}{F} \ln \left\{ \frac{[A^{x+}][B^{y+}]}{[B^{(y+m)+}][A^{(x+n)+}]} \right\}$$

Making use of Eq. (5), we get

$$(m+n)E_e = mE_R^\circ + nE_L^\circ$$

or

$$E_e = \frac{mE_R^\circ + nE_L^\circ}{m+n} \quad (8)$$

(b) At the exhaustion point, E_{cell} will be zero. Thus from Eq. (4), we get

$$E_{\text{cell}}^\circ = \frac{RT}{mnF} \ln \left\{ \frac{[A^{(x+n)+}]^m [B^{y+}]^n}{[A^{x+}]^m [B^{(y+m)+}]^n} \right\}$$

Let k at the exhaustion point be represented as k_e . Substituting the concentrations of various species in the above expression, we get

$$\begin{aligned} E_{\text{cell}}^\circ &= \frac{RT}{mnF} \ln \left\{ \left(\frac{k_e m}{m} \right)^m \left(\frac{k_e n}{n} \right)^n \right\} \\ &= \frac{RT}{mnF} \ln (k_e)^{m+n} \\ &= \left(\frac{m+n}{mn} \right) \frac{RT}{F} \ln k_e \end{aligned} \quad (9)$$

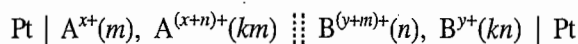
Hence

$$\ln k_e = \left(\frac{nm}{m+n} \right) \frac{F}{RT} E_{\text{cell}}^\circ$$

At 298 K, we have

$$\ln k_e = \frac{nm}{m+n} \frac{1}{(0.05913 \text{ V})} (E_R^\circ - E_L^\circ) \quad (10)$$

(ii) Let us take the cell



Its emf as given by Eq. (4) is

$$E_{\text{cell}} = E_{\text{cell}}^\circ - \frac{RT}{mnF} \ln \left\{ \frac{[\text{A}^{(x+n)+}]^m [\text{B}^{y+}]^n}{[\text{A}^{x+}]^m [\text{B}^{(y+m)+}]^n} \right\}$$

Substituting the given concentrations, we get

$$\begin{aligned} E_{\text{cell}} &= E_{\text{cell}}^\circ - \frac{RT}{mnF} \ln \left\{ \left(\frac{km}{m} \right)^m \left(\frac{kn}{n} \right)^n \right\} = E_{\text{cell}}^\circ - \frac{RT}{mnF} \ln k^{m+n} \\ &= E_{\text{cell}}^\circ - \left(\frac{m+n}{mn} \right) \frac{RT}{F} \ln k \end{aligned}$$

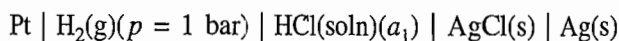
Making use of Eq. (9), we get

$$\begin{aligned} E_{\text{cell}} &= \left(\frac{m+n}{mn} \right) \frac{RT}{F} \ln k_e - \left(\frac{m+n}{mn} \right) \frac{RT}{F} \ln k \\ E_{\text{cell}} &= \left(\frac{m+n}{mn} \right) \frac{RT}{F} \ln \frac{k_e}{k} \quad (11) \end{aligned}$$

Now since $k < k_e$, it follows that k_e/k will be greater than one. Thus E_{cell} as given by Eq. (11) will be positive. Hence the cell reaction will be spontaneous. Obviously, the given second cell will not produce the spontaneous cell reaction. From Eq. (3), it follows that A^{x+} is the most powerful reducing agent and $\text{B}^{(y+m)+}$ is the most powerful oxidizing agent.

REVISIONARY PROBLEMS

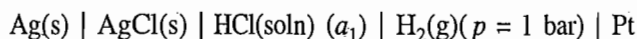
- 8.1 (a) What is the difference between a galvanic cell and an electrolytic cell? Set up galvanic cells for the following spontaneous reactions:
 (i) $\text{Zn(s)} + \text{Cu}^{2+}(\text{aq}) \rightarrow \text{Zn}^{2+}(\text{aq}) + \text{Cu(s)}$
 (ii) $\text{Zn(s)} + 2\text{AgCl(s)} \rightarrow 2\text{Ag(s)} + \text{Zn}^{2+}(\text{aq}) + 2\text{Cl}^{-}(\text{aq})$
 (b) What are the conventions of electrodes in galvanic and electrolytic cells? What types of reaction take place at these electrodes?
- 8.2 Illustrate with suitable examples, the distinction between a reversible and an irreversible cell. State the conditions for a thermodynamically reversible cell.
- 8.3 (a) Explain, why we cannot use a voltmeter for determining the electromotive force (emf) of a galvanic cell. Describe, briefly the potentiometric method for determining the emf of a cell.
 (b) Describe briefly the construction and working of Weston standard saturated cell.
- 8.4 (a) Illustrate by taking the example of Daniell cell, the conventions which are adopted while writing an electrochemical cell.
 (b) An electrochemical cell is written as



Answer the following:

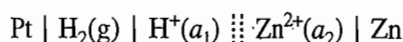
- (i) Which electrode serves as the negative terminal and which one as the positive terminal?
- (ii) In which direction the electrons flow in the external circuit (not shown)?
- (iii) What are the half-cell reactions occurring in the left and right half-cells?
- (iv) What is the overall cell reaction ?

Suppose now the cell is written in the reverse direction, i.e.,



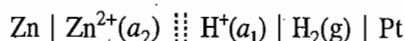
What would be the answers to the above four questions? How would you determine experimentally which of the above two cells lead to the spontaneous reaction?

- 8.5 Show by taking the typical example of the cell



that the cell reaction can be generated by subtracting the reduction reaction of the left half-cell (L) from that of the right half-cell (R). Correspondingly, the emf of the cell can be determined by subtracting the reduction potential of the left half-cell from that of the right half-cell.

Suppose that the above cell is written in the reverse direction, i.e.



Show that the value of emf of this cell is the same as that of the previous cell but with the opposite sign.

- 8.6 Derive the relation between the emf of a cell and the change in the free energy of its cell reaction. Hence show that the emf of the cell is an intensive property. How would you predict the nature of a cell reaction (whether spontaneous, or nonspontaneous or at equilibrium) from the sign of its emf value?
- 8.7 (a) The escaping tendency of a species carrying z_i charge from a phase is represented by the electrochemical potential $\tilde{\mu}$ defined as

$$\tilde{\mu} = \mu + z_i F \phi$$

where μ is the chemical potential and ϕ is the electrical potential of the phase. Derive the above expression.

- 8.8 Derive the Nernst equation for the following half-cells.

(1) Gas-ion half-cell:

- (i) The hydrogen-hydrogen ion half-cell.
- (ii) The chlorine-chloride ion half-cell.
- (iii) The oxygen-hydroxide ion half-cell.

(2) The metal-metal ion half-cell:

- (i) Zn-Zn²⁺ half-cell.
- (ii) M-Mⁿ⁺ half-cell where M can be any metal.

(3) Metal-insoluble salt-anion half-cell:

- (i) Silver-silver chloride-chloride half-cell.
- (ii) Mercury-mercuric oxide-hydroxide half-cell.
- (iii) The calomel half-cell.
- (iv) Antimony-antimony oxide-hydroxide half-cell.

- 8.9 (a) What do you understand by the term standard electrode potential?
- (b) Comment upon the statement: The absolute value of an electrode potential cannot be determined. However, its value relative to a reference electrode whose potential is taken to be zero may be determined.
- (c) Explain to which electrode this arbitrary zero potential is assigned and how are the values of other electrode potentials determined relative to this electrode?

8.10 Justify the following statements:

(a) If the standard potential $E_{M^{n+}|M}^{\circ}$ is positive, then M^{n+} ions can be reduced to M by hydrogen gas under standard conditions.

(b) If the standard potential $E_{M^{n+}|M}^{\circ}$ is negative, then M^{n+} ions cannot be reduced by hydrogen gas under standard conditions. In fact, reverse of the reaction, occurs, i.e. H^+ will be reduced to H_2 gas by the metal M.

(c) The compounds of active metals such as Zn, Na and Mg are not reducible by hydrogen gas under standard conditions while those of noble metals such as Cu and Ag are reducible by hydrogen gas.

(d) Sign of the electrode potential determines the nature of the electrode (whether a positive terminal or a negative terminal) of a cell constituted by combining the given electrode with the standard hydrogen-hydrogen ion electrode and having a positive emf.

(e) Comparison of the values of two electrode potentials is equivalent to comparing the relative easiness with which the two reduction reactions can be carried out.

(f) If the two half-cells are combined to make a voltaic cell, the half-cell of a more positive potential forms a positive terminal whereas the half-cell of lesser positive potential forms a negative terminal.

(g) Substance which forms the soluble complex (or precipitate) with the oxidized member of the couple (oxidized form + ne^- = reduced form) reduces the reduction potential of the electrode.

(h) The classification of a metal into noble or active is not absolute but very much dependent upon its environment. For example, ordinarily Ag is a noble metal but in the presence of I^- , S^{2-} or CN^- ions; it becomes an active metal.

8.11 What effect the change in the ionic activity has on the value of electrode potential involving a reaction $M^{n+} + ne^- \rightarrow M$? Show how can this change be utilized in determining the charge on the ion?

8.12 (a) Show that the metal-metal ion half-cell potential $E_{Ag^+|Ag}$ is related to the corresponding metal-insoluble salt-anion half-cell potential $E_{X^-|AgX|Ag}$ through the relation

$$E_{X^-|AgX|Ag}^{\circ} = E_{Ag^+|Ag}^{\circ} - \frac{2.303 RT}{F} pK_{sp}^{\circ}(AgX)$$

where X^- is the halide ion (Cl^- or Br^- or I^-).

(b) It is known that

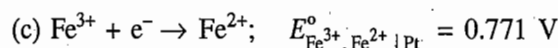
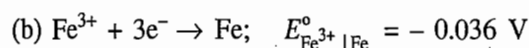
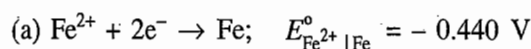
$$K_{sp}(AgCl) > K_{sp}(AgBr) > K_{sp}(AgI)$$

Arrange the potential $E_{X^-|AgX|Ag}$ (where X^- can be Cl^- , Br^- and I^-) in increasing order of magnitude.

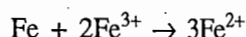
8.13 Justify the statement:

For a given overall reaction, the value of ΔG is a constant quantity but the emf of the cell which produces this overall reaction depends on the make up of the cell. Thus, various cells which produce the same cell reaction and which differ from each other may have different values of the emf.

Support your answer by constructing cells out of the following half-cells.



so as to produce the following cell reaction:



- 8.14 What is a reference half-cell? Outline its merits relative to that of the hydrogen-hydrogen ion half-cell. Describe the calomel half-cell and derive its Nernst equation.
- 8.15 Starting from the Gibbs-Helmholtz equation and the relation $\Delta G = -nFE$, derive the following expressions of ΔH and ΔS .

$$\Delta H = -nF \left[E - T \left(\frac{\partial E}{\partial T} \right)_p \right]$$

$$\Delta S = nF \left(\frac{\partial E}{\partial T} \right)_p$$

What are the units of ΔG , ΔH and ΔS if F is expressed in coulomb mole⁻¹ and E in volt?

- 8.16 (a) Show that the standard equilibrium constant of the cell reaction at 298 K can be computed from the relation

$$\log K^\circ = \frac{n(E^\circ/\text{volt})}{0.05913}$$

(b) Show that the essential condition for a cell reaction to be at equilibrium is

$$E_K = E_L$$

Show from the above equality, how the equilibrium constant of a reaction can be computed.

- 8.17 Explain, how can an accurate value of the standard half-cell potential be determined experimentally?
- 8.18 Set up an electrochemical cell which can determine accurately the dissociation constant of a given weak acid.
- 8.19 Set up an electrochemical cell with the help of which it is possible to determine accurately the ionic-product of water.
- 8.20 Explain by taking an example of AgCl, how solubility product of the latter can be determined from the emf measurement of a suitable electrochemical cell.
- 8.21 (a) Define the term pH of a solution. Explain, how the pH value of a solution is determined by employing the following half-cells.
- (i) The hydrogen-hydrogen ion half-cell
 - (ii) The quinhydrone half-cell.
 - (iii) The glass half-cell.
 - (iv) Antimony-antimony oxide-hydroxide half-cell.
- (b) Justify the statement that the linear relationship between the quinhydrone half-cell potential and pH of the solution, i.e.

$$E_{\text{Q, QH}_2, \text{H}^+ | \text{Pt}} = E_{\text{Q, QH}_2, \text{H}^+ | \text{Pt}}^\circ - \frac{2.303 RT}{F} \text{pH}$$

holds good only up to certain pH value (\approx up to 8.5). Beyond this pH, the half-cell potential is no longer linear and hence cannot be employed in determining the pH of highly alkaline solutions.

(c) Describe the glass electrode. Explain, how the pH of a solution is determined by using the glass electrode.

- 8.22 (a) What do you understand by the terms:
 (i) Concentration cell without liquid junction?
 (ii) Concentration cell with liquid junction?
- 8.23 Derive the following expressions as applicable to the appropriate concentration cell without transference.

$$(a) E_{\text{cell}} = \frac{RT}{2F} \ln \frac{a_1}{a_2} \text{ for a cell involving amalgam electrodes}$$

$$(b) E_{\text{cell}} = \frac{RT}{2F} \ln \frac{p_1}{p_2} \text{ for a cell involving two gas electrodes operating at different pressures}$$

$$(c) E_{\text{cell}} = \frac{2RT}{F} \ln \frac{(a_{\pm 2})}{(a_{\pm 1})} \text{ for a cell involving different electrolytic concentrations}$$

- 8.24 (a) Describe the factors which are responsible for the liquid junction potential. Derive the following expressions for a concentration cell with transference involving 1 : 1 electrolyte.

$$E_{\text{wlj}} = \pm 2t_{\mp} \frac{RT}{F} \ln \frac{(a_{\pm 2})}{(a_{\pm 1})}$$

$$E_{\text{woj}} = \pm \frac{RT}{F} \ln \frac{(a_{\pm 2})}{(a_{\pm 1})}$$

$$E_{\text{lj}} = 2t_{\mp} E_{\text{woj}}$$

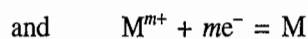
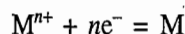
$$E_{\text{lj}} = \pm (1 - 2t_{\pm}) \frac{RT}{F} \ln \frac{(a_{\pm 2})}{(a_{\pm 1})}$$

where the upper and lower signs are meant for cells involving electrodes reversible with cations and anions, respectively, and $a_{\pm 2}$ and $a_{\pm 1}$ are the activities of the electrolytes in the right and left half cells, respectively.

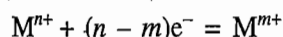
(b) Explain, how is the transport number of either cation or anion determined from the study of cells with and without transport?

(c) Justify the use of KCl (or NH_4NO_3) in the salt bridge.

- 8.25 The standard potentials of the two reactions



are $E_{\text{M}^{n+}|\text{M}}^{\circ}$ and $E_{\text{M}^{m+}|\text{M}}^{\circ}$, respectively, with $n > m$. Show that for reaction



the standard potential is given by

$$E_{\text{M}^{n+}, \text{M}^{m+}|\text{Pt}}^{\circ} = \frac{nE_{\text{M}^{n+}|\text{M}}^{\circ} - mE_{\text{M}^{m+}|\text{M}}^{\circ}}{(n - m)}$$

- 8.26 Explain the essential features on which the potentiometric titrations are based. Describe them with suitable examples.

- 8.27 Construct the curves of E versus V , $\Delta E/\Delta V$ versus V and $\Delta^2 E/\Delta V^2$ versus V for the following titrations:

(a) 50 cm³ of 0.1 M HCl versus 0.1 M NaOH.

(b) 50 cm³ of 0.1 M Fe²⁺ versus 0.1 M Ce⁴⁺.

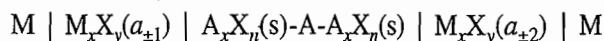
(c) 50 cm³ of an acid solution (pH = 1.0) of 0.1 M Fe²⁺ versus 0.016 67 M (= 0.1 N) Cr₂O₇²⁻.

(d) 50 cm³ of 0.1 M Cl⁻ versus 0.1 M Ag⁺.

8.28 What are redox indicators? Describe the working of redox indicators.

8.29 Discuss the role of phosphoric acid in the volumetric titration of Fe²⁺ versus Cr₂O₇²⁻ using diphenylamine as the internal indicator.

8.30 Show that the emf of the cell



is given by

$$E = - \left(\frac{x+y}{x} \right) \frac{RT}{yF} \ln \left(\frac{a_{\pm 1}}{a_{\pm 2}} \right)$$

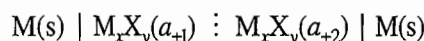
8.31 Show that the emf of the cell



is given by

$$E = - \left(\frac{x+y}{y} \right) \frac{RT}{xF} \ln \left(\frac{a_{\pm 2}}{a_{\pm 1}} \right)$$

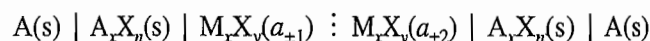
8.32 Show that the emf of the cell



is given by

$$E = -t_- \left(\frac{x+y}{x} \right) \frac{RT}{yF} \ln \left(\frac{a_{\pm 1}}{a_{\pm 2}} \right)$$

8.33 Show that the emf of the cell



is given by

$$E = -t_+ \left(\frac{x+y}{x} \right) \frac{RT}{xF} \ln \left(\frac{a_{\pm 2}}{a_{\pm 1}} \right)$$

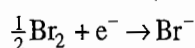
TRY YOURSELF PROBLEMS

8.1 From the standard potential values, predict that out of the members of Group 1 of the periodic table, lithium and sodium are, respectively, the best and poorest reducing agents.

8.2 Will the permanganate ion under standard conditions be stable in aqueous medium?

8.3 Compute the potential values given in Example 8.9.6 in an acidic solution having [H⁺] = 1 M. From the obtained values, show that:

(i) the reduction potential of the reaction



remains unchanged,

(ii) The BrO₃⁻ ion is a better oxidizing agent (more easily reduced) in an acidic solution than in a basic solution.

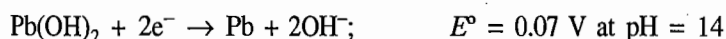
- 8.7 (i) Calculate the solubility product of the following (the required data are shown along with the reaction):

(a) $\text{Cd}(\text{OH})_2$



$$E^\circ = -0.40 \text{ V at pH} = 0$$

(b) $\text{Pb}(\text{OH})_2$



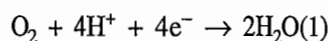
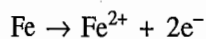
$$E^\circ = 0.09 \text{ V at pH} = 0$$

(ii) Calculate the potential of the $\text{Fe}^{2+} | \text{Fe}$ couple at pH 7.

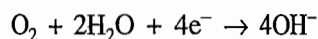
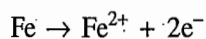
Given: $E^\circ = 0.036 \text{ V at pH} = 0$ and $K_{\text{sp}}(\text{Fe}(\text{OH})_2) = 6 \times 10^{-38}$.

- 8.8 (a) The commonly observed formation of rust when iron is exposed to moist air may be explained on the basis of reactions given below, followed by the conversion of Fe^{2+} to reddish brown Fe_2O_3 .

(i) In acidic medium:



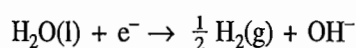
(ii) In neutral solutions:



Show that under standard conditions, the overall reactions given above will take place spontaneously.

(b) One way to prevent a buried iron pipe from rusting is to connect it with a piece of wire to a magnesium or zinc rod. What is the electrochemical principle for this action?

- 8.9 Justify the value -0.828 V for E° of the following half-cell in basic solution:



- 8.10 What will be the potential of standard hydrogen electrode at 323 K?
- 8.11 In the metal amalgam-metal ion electrode, if the amalgam is saturated with the solute metal, the electrode is equivalent to the pure metal-metal ion electrode. Explain, why is it so?
- 8.12 Can you employ potassium chloride salt bridge as a connecting device to connect silver nitrate solution?
- 8.13 The emf of a cell is found to be 0.30 V. What would happen if this cell is connected to a 1.5 V battery with its negative terminal connected to the (a) negative terminal of the battery, and (b) positive terminal of the battery?
- 8.14 In the titration of Fe^{2+} versus $\text{Cr}_2\text{O}_7^{2-}$, the internal indicator *N*-phenylanthranilic acid is usually used in the presence of larger amount of H^+ ions. Discuss, what effect the latter has on the transition potential of the indicator and how far it is helpful in locating the end point.
- 8.15 Derive the following expressions:

(a) For 1 : 1 electrolyte (e.g., HCl)

$$m_+ = m_- = m_{\pm}$$

(b) For 1 : 2 electrolyte (e.g., SnCl_2)

$$m_+ = \frac{1}{(2)^{2/3}} m_{\pm} \quad \text{and} \quad m_- = (2)^{1/3} m_{\pm}$$

(c) For 1 : 3 electrolyte (e.g., FeCl₃)

$$m_+ = \frac{1}{(3)^{3/4}} m_{\pm} \quad \text{and} \quad m_- = (3)^{1/4} m_{\pm}$$

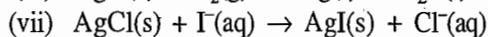
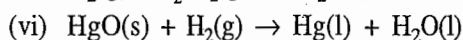
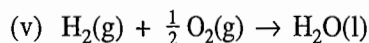
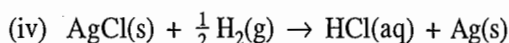
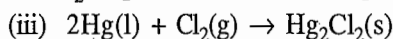
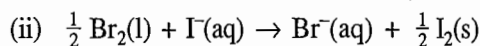
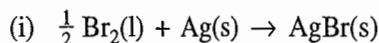
(d) For 1 : 4 electrolyte (e.g., SnCl₄)

$$m_+ = \frac{1}{(4)^{4/5}} m_{\pm} \quad \text{and} \quad m_- = (4)^{1/5} m_{\pm}$$

NUMERICAL PROBLEMS

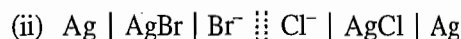
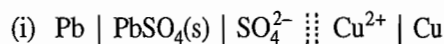
Construction of Galvanic Cell

8.1 Construct the galvanic cell for each of the following reactions. Draw the diagram of the cell indicating clearly the anode, cathode and the direction of flow of electrons in the external circuit.

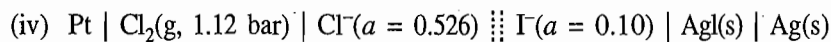
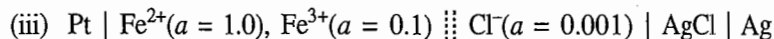
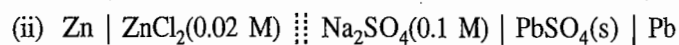
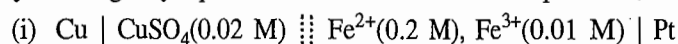


Cell Reaction and Cell Potential

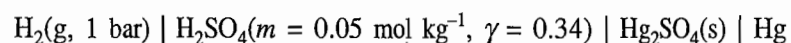
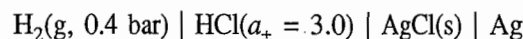
8.2 Write the cell reactions for the following cells and determine the emfs of the cells under standard conditions.



8.3 Determine the cell reaction, E_{cell}° and E_{cell} for the following cells at 298 K. Assume activity and fugacity equal to molar concentration and pressure, respectively.

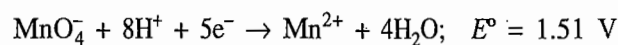


8.4 Write the cell reactions and potentials of the following cells:

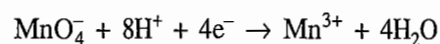


Computation of Cell Potential

8.5 Given are the following data.



Calculate the standard potential for

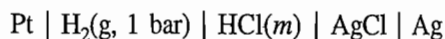


(Ans. 1.51 V)

- 8.6 (a) For a 1 : 1 electrolyte in aqueous solution the extended Debye-Hückel law is given as

$$\log \gamma_{\pm} = -0.509 m'^{1/2} + Bm'$$

where B is constant and $m' = m/m^{\circ}$ (here m° is 1 mol kg⁻¹). Show that emf of the cell



is given by

$$E_{\text{cell}} + (0.1183 \text{ V}) \log m' - (0.06 \text{ V}) \sqrt{m'} = E_{\text{Cl}^- \mid \text{AgCl} \mid \text{Ag}}^{\circ} - 0.1183 \text{ V} Bm'$$

(b) If a plot is drawn between $E_{\text{cell}} + (0.1183 \text{ V}) \log m' - (0.06 \text{ V}) \sqrt{m'}$ and m' , what will be its slope and intercept?

(c) Given the following data for the cell



$m/\text{mol kg}^{-1}$	0.009	0.014	0.025	0.055
E/V	0.469 5	0.447 8	0.419 6	0.381 2

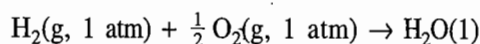
Compute $E_{\text{Cl}^- \mid \text{AgCl} \mid \text{Ag}}^{\circ}$

(d) What will be the mean activity coefficient of 0.02 mol kg⁻¹ HCl at 298 K?

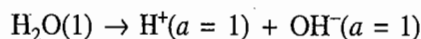
(e) The emf of the cell given in part (c) is 0.352 4 V at 298 K when the HCl is at a concentration of 0.1 mol kg⁻¹. What is (i) the activity of the HCl, (ii) the mean activity coefficient of the HCl at this concentration, and (iii) the pH of the acid?

(Ans. (c) 0.225 V, (d) 0.875, (e) 0.080, 0.795, 1.10)

- 8.7 The standard free energy change for the reaction



is $-237.19 \text{ kJ mol}^{-1}$ at 298 K. (i) Write the electrode reactions if the reaction is to occur in a galvanic cell. (ii) Calculate the standard electrode potential for the electrodes $\text{OH}^- \mid \text{O}_2 \mid \text{Pt}$ and $\text{H}^+ \mid \text{O}_2 \mid \text{Pt}$. The cell potential producing the reaction

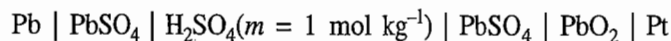


is -0.8277 V .

(Ans. 0.403 V, 1.229 V)

Computation of Thermodynamic Data

- 8.8 For the lead storage cell



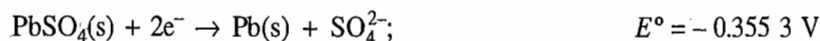
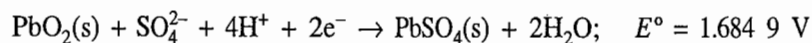
the emf is found to vary

$$E_{\text{cell}}/\text{V} = 1.91731 + 51.1 \times 10^{-6}(t/^{\circ}\text{C}) + 108 \times 10^{-8}(t/^{\circ}\text{C})^2$$

in the temperature range 0 to 60 °C

(a) Calculate ΔG , ΔH and ΔS for the cell reaction at 273 K and 298 K.

(b) For the half-cells at 298 K

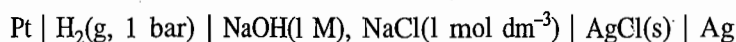


Calculate the mean ionic activity coefficient in 1 molal H_2SO_4 at 298 K. Assume that the activity of water is unity.

$$\begin{aligned} \text{(Ans. (a) at } 0^\circ\text{C: } \Delta G &= -370.03 \text{ kJ mol}^{-1}; \Delta H = -366.80 \text{ kJ mol}^{-1}; \\ &\Delta S = 10.83 \text{ J K}^{-1} \text{ mol}^{-1} \\ \text{at } 25^\circ\text{C: } \Delta G &= -370.43 \text{ kJ mol}^{-1}; \Delta H = -364.11 \text{ kJ mol}^{-1}; \\ &\Delta S = 21.23 \text{ kJ mol}^{-1} \end{aligned}$$

(b) 0.130).

8.9 For the cell



the potentials at different temperatures are

$t/^\circ\text{C}$	20	25	30
E/V	1.047 68	1.051 88	1.056 08

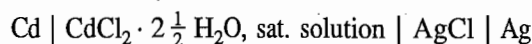
(a) Calculate the values of $\text{p}K_w^\circ$ at these temperatures.

(b) Calculate the enthalpy and entropy of ionization of water at 298 K.

Given: $E_{\text{Cl}^- | \text{AgCl} | \text{Ag}}^\circ = 0.222 5 \text{ V}$

(Ans. 14.185, 14.018, 13.858, 55.86 kJ mol^{-1} , $-81.049 \text{ J K}^{-1} \text{ mol}^{-1}$)

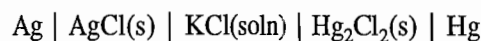
8.10 The emf of the cell



at 298 K is 0.675 33 V and $(\partial E/\partial T)_p$ is $-6.5 \times 10^{-4} \text{ V K}^{-1}$. Calculate ΔG , ΔH and ΔS for the cell reaction at 298 K.

(Ans. $-130.33 \text{ kJ mol}^{-1}$, $-167.74 \text{ kJ mol}^{-1}$ and $-125.52 \text{ J K}^{-1} \text{ mol}^{-1}$)

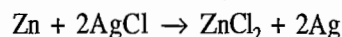
8.11 The emf of the cell



is 0.045 5 V at 298 K and the temperature coefficient is $3.38 \times 10^{-4} \text{ V K}^{-1}$. What is reaction that takes place in the cell and what are free energy, enthalpy and entropy changes at 298 K?

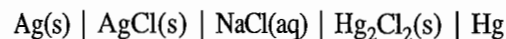
(Ans. $-8.81 \text{ kJ mol}^{-1}$, $10.66 \text{ kJ mol}^{-1}$ and $63.43 \text{ J K}^{-1} \text{ mol}^{-1}$)

8.12 At 273 K, a calorimetric determination of ΔH for the reaction



yielded $-217.78 \text{ kJ mol}^{-1}$, while the emf of the corresponding cell was 1.015 4 V. What was $(\partial E/\partial T)_p$ of the cell? (Ans. $-4.14 \times 10^{-4} \text{ V K}^{-1}$)

8.13 Consider the following cell arrangement.

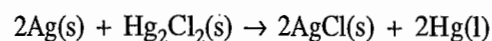


(a) Write down the half-cell reactions.

(b) The standard emfs of the cell at various temperatures are as follows:

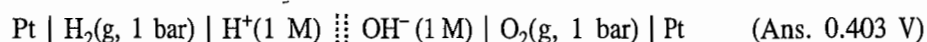
T/K	291	298	303	311
E°/mV	43.0	45.4	47.1	50.1

Calculate ΔG , ΔS and ΔH for the reaction

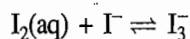


**Computation of
Equilibrium
Constant**

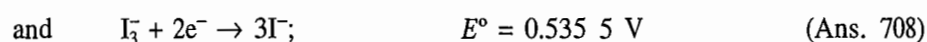
- 8.14 At 298 K the free energy of formation of $\text{H}_2\text{O}(1)$ is $-237.23 \text{ kJ mol}^{-1}$, while that of its ionization to hydrogen and hydroxyl ions is $79.71 \text{ kJ mol}^{-1}$. Determine the emf at 298 K of the cell



- 8.15 Evaluate the standard equilibrium constant for the formation of the triiodide ion



from the knowledge that



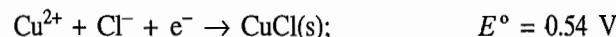
- 8.16 Given that



Calculate the standard equilibrium constant for the reaction



- 8.17 Given the information that

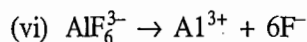
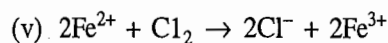
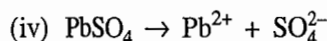
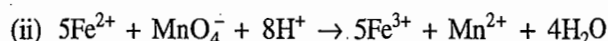
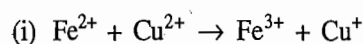


Calculate the standard solubility product of CuCl . (Ans. 3.6×10^{-7})

- 8.18 Calculate the partial equilibrium pressure of O_2 above H_2O_2 at 298 K.

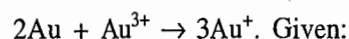
(Ans. $2.758 \times 10^{-12} \text{ atm}$)

- 8.19 Calculate the standard equilibrium constant for each of the following reactions:



(Ans. (i) 3.6×10^{-11} , (ii) 8.0×10^{61} ,
(iii) 8.0×10^{-16} , (iv) 1.7×10^{-8} , (vi) 1.6×10^{-21})

- 8.20 Compute the standard equilibrium constant of the reaction at 298 K



(Ans. 7.37×10^{-10})

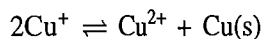
8.21 The emf of the cell



is -0.45 V at 298 K . Calculate the solubility product and solubility of AgCl in water. Given that 0.1 M KCl is 85% and 0.1 M AgNO_3 is 82% dissociated.

(Ans. 1.707×10^{-10} , $1.875 \times 10^{-5} \text{ mol dm}^{-3}$)

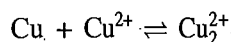
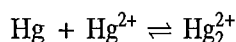
8.22 The standard equilibrium constant for the reaction



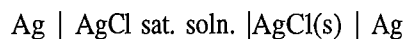
at 298 K is 1.646×10^6 . (a) Construct a cell in which the reaction could occur. (b) Calculate the standard emf of the cell. (c) Evaluate the standard potential of $\text{Cu}^+ \mid \text{Cu}$ electrode.

(Ans. (b) 0.368 V , (c) -0.521 V)

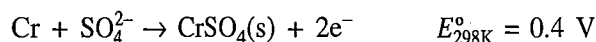
8.23 Calculate the equilibrium constants of the reactions



8.24 How would you use the arrangement



to determine the solubility product of silver chloride at 298 K .

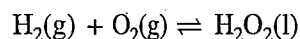
8.25 (a) Calculate K_{sp}° for CrSO_4 from the following data:

(b) Given E° is 0.152 V for $\text{Ag} + \text{I}^- = \text{AgI} + \text{e}^-$ at 298 K and E° for $\text{Ag} \rightarrow \text{Ag}^+ + \text{e}^-$ is -0.80 V at 298 K , calculate K_{sp}° for AgI .

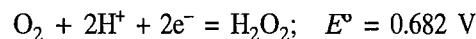
(Ans. (a) 10^{-6} , (b) 1.2×10^{-17})

8.26 The solubility of AgBr is $2.1 \times 10^{-6} \text{ mol kg}^{-1}$ at 298 K . Find the emf of the cell8.27 Calculate ideally the free energy change upon diluting 1 mol NaCl from $0.020 \text{ mol kg}^{-1}$ to $0.001 \text{ mol kg}^{-1}$ at 298 K .

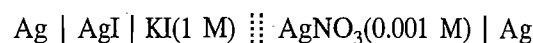
(Ans. -148.40 J)

8.28 Calculate ΔG° and the standard equilibrium constant for the reaction

at 298 K . At what pressure would ΔG be equal to zero? Given that:



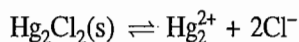
(Ans. $-131.26 \text{ kJ mol}^{-1}$, 1.148×10^{23} , $5.9 \times 10^{-12} \text{ atm}$)

8.29 At 298 K , the potential of the cell

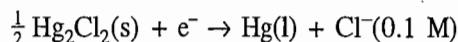
is 0.72 V . The mean ionic activity coefficient of 1 M KI may be taken as 0.65 , and of 0.001 M AgNO_3 as 0.98 . (a) What is the solubility of AgI ? (b) What is the solubility of AgI in pure water?

(Ans. $6.59 \times 10^{-16} \text{ M}$, $2.07 \times 10^{-8} \text{ M}$)

8.30 If the standard solubility product of Hg_2Cl_2 is 4.2×10^{-18} for the reaction



and if the decimolar calomel electrode with half-cell reaction



has electrode potential of 0.334 V, find E° of the half reaction



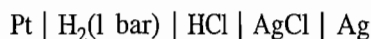
8.31 (a) Excess solid silver is placed in a solution of 0.1 M ferric ion. Calculate the equilibrium concentration of Ag^+ and Fe^{3+} ions.

(b) Finely divided Ni is added to a solution in which the activity of Sn^{2+} is 0.1. What will be the activities of Ni^{2+} and Sn^{2+} when equilibrium is established.

(Ans. (a) $[\text{Ag}^+] = 0.08 \text{ M}$ (b) $a_{\text{Ni}^{2+}} = 0.1$, $a_{\text{Sn}^{2+}} = 5.7 \times 10^{-5}$)

Computation of pH

8.32 For the cell



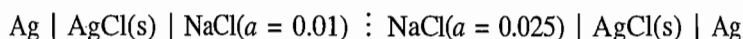
$E^\circ = 0.222 \text{ V}$ and $E = 0.332 \text{ V}$ at 298 K. What is the pH of the HCl solution?

(Ans. 0.93)

8.33 A hydrogen electrode and calomel cell are used to determine the pH of a solution on a mountain where the barometric pressure is 500 Torr. The hydrogen is allowed to bubble out of the electrode at the atmospheric pressure prevailing there. If the pH is calculated to be 4.0, what is the correct pH of the solution?

Liquid Junction Potential

8.34 Calculate the emf of the following cell at 298 K.

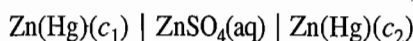


The transport number of Na^+ is 0.39.

(Ans. -0.0184 V)

Concentration Cell

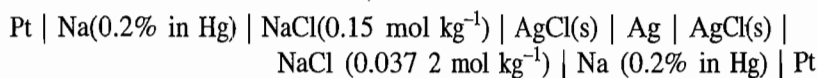
8.35 Calculate the emf of the amalgam concentration cell at 333 K:



when c_1 and c_2 are 6.08×10^{-5} and $2.28 \times 10^{-3} \text{ mol dm}^{-3}$, respectively. The amalgams may be considered ideal.

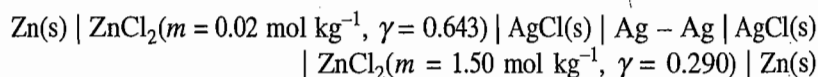
(Ans. -0.0466 V)

8.36 If activities equal concentrations, what is the potential at 298 K of



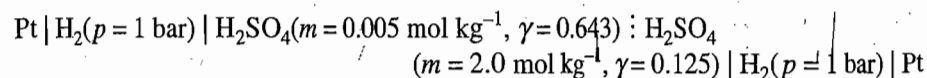
(Ans. -0.072 V)

8.37 Determine the cell reaction and potential of the cell



(Ans. 0.093 V)

8.38 For the cell with transference



$E = 0.03 \text{ V}$ at 298 K. Find the cell reaction and the transport number of the hydrogen ions.

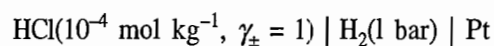
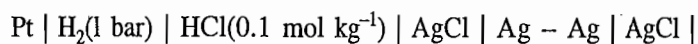
(Ans. 0.82)

8.39 The concentration cell



has an emf of -0.1074 V at 298 K. (a) Formulate the corresponding cell with transference, (b) Write the equations for the cell reactions for the withdrawal of $2F$ of electricity, (c) The emf of the cell in (a) is 0.05357 V. Calculate $t(\text{Cl}^-)$.

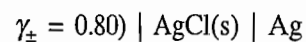
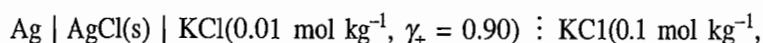
(Ans. 0.55)

8.40 The emf at 298 K is -0.335 V for the cell

Calculate (a) ΔG for the cell reaction at 298 K (write down the cell reaction), (b) the mean activity coefficient of 0.1 mol kg^{-1} HCl, and (c) ΔG for the cell reaction at 273 K, assuming ΔH to be zero and ΔS independent of temperature.

(Ans. $\Delta G = 32200 \text{ J mol}^{-1}$, $\gamma_{\pm} = 0.69$, $\Delta G^\circ(273 \text{ K}) = 29600 \text{ J mol}^{-1}$)

8.41 Given the cell



(a) Write the cell reaction and (b) Calculate the emf of the cell at 298 K. Given $t_- = 0.60$.

(Ans. $t_+ \text{K}^+(0.01 \text{ mol kg}^{-1}) + t_+ \text{Cl}^-(0.01 \text{ mol kg}^{-1}) \rightarrow t_+ \text{K}^+(0.1 \text{ mol kg}^{-1}) + t_+ \text{Cl}^-(0.1 \text{ mol kg}^{-1}); E = -0.045 \text{ V}$)

Annexure I

Concept of Activity

Definition of Activity The variation of chemical potential with pressure of an ideal gas is given by

$$\mu_i = \mu_i^\circ + RT \ln \left(\frac{p_i}{p^\circ} \right) \quad (1)$$

where μ_i° is the standard chemical potential of the i th gas at the standard-state pressure (p°) of 1 bar. To have the same type of dependence of any substance (gas, liquid, solid), G.N. Lewis modified Eq. (1) as

$$\mu_i = \mu_i^\circ + RT \ln a_i \quad (2)$$

where a_i , a dimensionless quantity, is known as activity of the i th substance.

The activity of a substance existing in different conditions may be defined as follows.

For a Substance in the Gaseous Phase

We have

$$\text{Ideal gas} \quad a_i = \frac{p_i}{p^\circ} \quad (3)$$

$$\text{Real gas} \quad a_i = \frac{f_i}{f^\circ} \quad (\text{where } f \text{ is fugacity of the gas}) \quad (4)$$

For a Substance in Solid or Liquid Phase

The variation of chemical potential of a liquid or solid with pressure is given by

$$\mu_i = \mu_i^\circ + V_{m,i}(p - p^\circ) \quad (5)$$

Comparing this with Eq. (2), we get

$$RT \ln a_i = V_{m,i}(p - p^\circ) \quad (6)$$

$$\text{or} \quad a_i = \exp\{V_{m,i}(p - p^\circ)/RT\}$$

Small variations in pressure do not have a significant effect on the activity.

For Components in an Ideal Liquid Solution

Since each component of liquid solution is in equilibrium with its vapour, we will have

$$\mu_i(l) = \mu_i(g)$$

The expressions of $\mu_i(l)$ and $\mu_i(g)$ are

$$\mu_i(l) = \mu_i^\circ(l) + RT \ln a_i$$

$$\mu_i(g) = \mu_i^\circ(g) + RT \ln \left(\frac{p_i}{p^\circ} \right) \quad (\text{assuming vapour to behave ideally})$$

$$\text{Hence } \mu_i^\circ(l) + RT \ln a_i = \mu_i^\circ(g) + RT \ln \left(\frac{p_i}{p^\circ} \right)$$

For a pure liquid, $a_i = 1$ and $p_i = p_i^*$. Thus

$$\mu_i^\circ(l) = \mu_i^\circ(g) + RT \ln \left(\frac{p_i^*}{p^\circ} \right)$$

Substituting this in previous expression, we get

$$RT \ln a_i = RT \ln \left(\frac{p_i}{p_i^*} \right)$$

$$\text{or } a_i = \left(\frac{p_i}{p_i^*} \right) \quad (7)$$

Since the liquid solution behaves ideally, $p_i = x_i p_i^*$ (Raoult's law), we get

$$a_i = x_i \quad (8)$$

For Components in Nonideal Liquid Solution

The components of a nonideal solution exhibit deviations from Raoult's law. To account for the nonideality, the activity is defined as

$$a_i = x_i \gamma_i \quad (9)$$

where γ_i , known as activity coefficient, is a measure of deviations from Raoult's law. Since the activity of a component approaches its amount fraction as x_i approaches unity, we will have

$$\gamma_i \rightarrow 1 \quad \text{as } x_i \rightarrow 1 \quad (10)$$

The components exhibiting positive deviations from Raoult's law, γ_i is greater than unity, and those exhibiting negative deviations, γ_i is less than unity.

Since $a_i = (p_i/p_i^*)$, we will have

$$x_i \gamma_i = \frac{p_i}{p_i^*}$$

$$\text{or } \gamma_i = \frac{p_i}{x_i p_i^*} \quad (11)$$

For Components in Dilute Real Solutions

In dilute real solutions, solute follows Henry's law whereas solvent follows Raoult's law, i.e.

$$\text{For solvent} \quad p_i = x_i p_i^* \quad (\text{Raoult's law})$$

$$\text{For solute} \quad p_i = x_i K_H \quad (\text{Henry's law})$$

Proceeding similarly to nonideal solution, it can be shown that

$$\text{For solvent} \quad \gamma_i = \frac{p_i}{x_i p_i^*} \quad (12)$$

$$\text{For solute} \quad \gamma'_i = \frac{p_i}{x_i K_H} \quad (13)$$

The activity coefficient for solute follows the following characteristics.

- (i) $\gamma'_i \rightarrow 1$ as $x_i \rightarrow 0$
- (ii) $\gamma'_i > 1$ if there are positive deviations from Henry's law
- (iii) $\gamma'_i < 1$ if there are negative deviations from Henry's law

For Electrolytes in Solution

The chemical potential of a completely dissociated electrolyte is given by

$$\mu(M_x X_y) = x\mu(M^{y+}) + y\mu(X^{x-})$$

Since $\mu = \mu^\circ + RT \ln a$, we get

$$\begin{aligned} \mu(M_x X_y) &= x[\mu^\circ(M^{y+}) + RT \ln a_{M^{y+}}] + y[\mu^\circ(X^{x-}) + RT \ln a_{X^{x-}}] \\ &= x\mu^\circ(M^{y+}) + y\mu^\circ(X^{x-}) + RT \ln \{(a_{M^{y+}})^x (a_{X^{x-}})^y\} \\ &= \mu^\circ(M_x X_y) + RT \ln a_{M_x X_y} \end{aligned} \quad (14)$$

$$\text{where} \quad a_{M_x X_y} = (a_{M^{y+}})^x (a_{X^{x-}})^y \quad (15)$$

written simply as

$$a = (a_+)^x (a_-)^y \quad (16)$$

Activity in Terms of Molality

While dealing with electrolytic solution, it is customary to use the molality. The expressions relating activities of ions with the corresponding molalities are

$$a_+ = \left(\frac{m_+}{m^\circ} \right) \gamma_+ \quad (17)$$

$$a_- = \left(\frac{m_-}{m^\circ} \right) \gamma_- \quad (18)$$

where m° is the standard state molality and is equal to 1 mol kg⁻¹. Here after, Eqs (17) and (18) are simply written as

$$a_+ = m'_+ \gamma_+ \quad \text{and} \quad a_- = m'_- \gamma_- \quad (19)$$

where $m'_+ = m_+/m^\circ$ and $m'_- = m_-/m^\circ$.

Expressions of Mean Activity

Since individual activities cannot be determined, it is more appropriate to express the activity of an ion in terms of mean activity of the electrolyte. The expression is

$$(a_{\pm})^{\nu} = (a_{+})^x (a_{-})^y \quad (20)$$

where $\nu = x + y$ is the total number of ions produced due to the dissociation of 1 molecule of electrolyte $M_x X_y$. Comparing Eqs (16) and (20), we get

$$a = (a_{\pm})^{\nu}$$

Now since $a_{+} = m'_{+} \gamma_{+}$ and $a_{-} = m'_{-} \gamma_{-}$, it follows that

$$(a_{\pm})^{\nu} = (m'_{+} \gamma_{+})^x (m'_{-} \gamma_{-})^y = (m'^x_{+} m'^y_{-}) (\gamma^x_{+} \gamma^y_{-}) = m'^{\nu}_{\pm} \gamma^{\nu}_{\pm}$$

or
$$a_{\pm} = m'_{\pm} \gamma_{\pm} \quad (21)$$

To write mean molality m'_{\pm} of the electrolyte $M_x X_y$ in terms of its molality, we proceed as follows.

$$m'^{x+y}_{\pm} = m'^x_{+} m'^y_{-} = (x m')^x (y m')^y = x^x y^y m'^{x+y}$$

Thus
$$m'_{\pm} = (x^x y^y)^{1/(x+y)} m' \quad (22)$$

The above relations may be supplemented by the following examples.

$$a(\text{MX}) = a_{\pm}^2 = m'^2_{\pm} \gamma^2_{\pm} = (m'_{+} m'_{-}) \gamma^2_{\pm} = m'^2 \gamma^2_{\pm}$$

$$a(\text{MX}_2) = a_{\pm}^3 = m'^3_{\pm} \gamma^3_{\pm} = (m'_{+} m'^2_{-}) \gamma^3_{\pm} = (m')(2m')^2 \gamma^3_{\pm} = 4m'^3 \gamma^3_{\pm}$$

$$a(\text{MX}_3) = a_{\pm}^4 = m'^4_{\pm} \gamma^4_{\pm} = (m'_{+} m'^3_{-}) \gamma^4_{\pm} = (m')(3m')^3 \gamma^4_{\pm} = 27m'^4 \gamma^4_{\pm}$$

$$a(\text{M}_2\text{X}_3) = a_{\pm}^5 = m'^5_{\pm} \gamma^5_{\pm} = (m'^2_{+} m'^3_{-}) \gamma^5_{\pm} = (2m')^2 (3m')^3 \gamma^5_{\pm}$$

$$= 108m'^5 \gamma^5_{\pm}$$

Annexure II

Derivation of Debye-Hückel Law

Because of ionic interactions, many of bulk properties of a solution containing an electrolyte are not related directly with the actual concentration of electrolyte but with the effective concentration or activity of the electrolyte.

Depending on the way the concentration is expressed, the actual concentration c and the activity a are related to each other through the expression

$$\begin{aligned} a &= (c/c^\circ)\gamma_c \\ a &= (m/m^\circ)\gamma_m \\ a &= x\gamma_x \end{aligned} \tag{1}$$

where γ_x is known as the rational activity coefficient whereas γ_c and γ_m are practical activity coefficients.

The individual ion activities and activity coefficients cannot be determined experimentally. Since both the positively- and negatively-charged ions produced from a given electrolyte determine the bulk properties of a system, mean ion activity (a_{\pm}) and mean ion activity coefficients (γ_{\pm}) are used instead of individual ion activities and activity coefficients. These are defined by

$$(a_{\pm})^{\nu} = (a_{+})^{\nu_{+}}(a_{-})^{\nu_{-}} \tag{2}$$

and
$$(\gamma_{\pm})^{\nu} = (\gamma_{+})^{\nu_{+}}(\gamma_{-})^{\nu_{-}} \tag{3}$$

where ν_{+} and ν_{-} are the number of cations and anions, respectively, derived from each molecule of the electrolyte and $\nu = \nu_{+} + \nu_{-}$.

The chemical potential μ_i of an ion i in an ideal solution is given by

$$\mu_i = \mu_i^* + RT \ln x_i \tag{4}$$

For nonideal solution, Eq. (4) is written as

$$\mu_i = \mu_i^* + RT \ln a_i$$

or
$$\mu_i = \mu_i^* + RT \ln x_i + RT \ln \gamma_i \tag{5}$$

Physical Significance of Activity Coefficient

The activity coefficient can theoretically be predicted on the basis of the Debye-Hückel theory of ionic atmosphere. According to the latter, each ion in a solution is surrounded by a spherical and symmetrical ionic atmosphere consisting of other ions whose net charge is opposite to that of the central ion. The activity

coefficient expression in Eq. (5) may be considered as the contribution of this ionic atmosphere. Since μ_i represents the change in free energy of the system which would occur if 1 mol of the i th ions were added to a large quantity of it, the term $RT \ln \gamma_i$ in Eq. (5) may be regarded as the contribution of ion atmosphere towards the total energy of the ion. The contribution per ion is $kT \ln \gamma_i$ and may be equated to the work which must be performed to give an ion of electrical potential ϕ_i (due to its atmosphere) its charge $z_i e$. The work done in this process is given by

$$w = \int_0^{z_i e} \phi_i d(z_i e)$$

Equating this with $kT \ln \gamma_i$, we get

$$kT \ln \gamma_i = \int_0^{z_i e} \phi_i d(z_i e) \quad (6)$$

Electrical Potential of an Ion Due to Its Ionic Atmosphere

The electrostatic potential ϕ at a given point in the vicinity of a positive (or negative ion) is related to the charge density ρ at the given point by the Poisson equation, viz.,

$$\frac{\partial^2 \phi}{\partial x^2} + \frac{\partial^2 \phi}{\partial y^2} + \frac{\partial^2 \phi}{\partial z^2} = -\frac{\rho}{\epsilon} \quad (7)$$

where x , y and z are the rectangular coordinates of the given point and ϵ is the permittivity of the solvent. In terms of polar coordinates, Eq. (7) is given by

$$\frac{1}{r^2} \frac{\partial}{\partial r} \left(r^2 \frac{\partial \phi}{\partial r} \right) = -\frac{\rho}{\epsilon} \quad (8)^\dagger$$

Charge Density at the Given Point

Let the charge density per unit volume at some point in the vicinity of an ion (positive or negative ion) be required. On the average there will be more ions of opposite charge in the vicinity of a given ion. The concentrations of positive and negative ions (N_+ , N_-) in terms of the total concentrations of these ions (N_+^0 , N_-^0) may be written following the Boltzmann distribution law as

$$N_+ = N_+^0 \exp(-z_+ e \phi / kT) \quad (9a)$$

$$N_- = N_-^0 \exp(-z_- e \phi / kT) \quad (9b)$$

where ϕ is the electrical potential at the point under study and z_+ and z_- are the charge numbers (including sign) of positive and negative ions, respectively. If it be assumed that kT is much larger than $z_+ e \phi$ or $|z_-| e \phi$, Eqs. (9) may be simplified by expanding the two exponential terms and ignoring all but the first terms in the expansion. Thus, we get

$$N_+ = N_+^0 (1 - z_+ e \phi / kT) \quad (10a)$$

$$N_- = N_-^0 (1 - z_- e \phi / kT) \quad (10b)$$

[†]There is no angular dependence in Eq. (8) as the charge density is spherical symmetrical in the vicinity of a positive ion.

The charge density at the given point will be given by

$$\rho = N_+ z_+ e + N_- z_- e$$

where e is the elementary charge (i.e. magnitude of electronic charge).

Substituting for N_+ and N_- from Eqs. (10), we get

$$\rho = z_+ e N_+^0 (1 - z_+ e \phi / kT) + z_- e N_-^0 (1 - z_- e \phi / kT)$$

Making use of electroneutrality condition

$$N_+^0 z_+ e + N_-^0 z_- e = 0$$

in the above expression, we get

$$\rho = - (N_+^0 z_+^2 e^2 \phi / kT) - (N_-^0 z_-^2 e^2 \phi / kT)$$

that is
$$\rho = - \sum_i N_i^0 z_i^2 e^2 \phi / kT \quad (11)$$

where the summation is to be carried over all the ions.

Expression of Electrical Potential ϕ

Substituting Eq. (11) in Eq. (8), we get

$$\frac{1}{r^2} \frac{\partial}{\partial r} \left(r^2 \frac{\partial \phi}{\partial r} \right) = \frac{1}{\epsilon} \left\{ \sum_i N_i^0 z_i^2 e^2 \phi / kT \right\} \quad (12a)$$

or
$$\frac{1}{r^2} \frac{\partial}{\partial r} \left(r^2 \frac{\partial \phi}{\partial r} \right) = \kappa^2 \phi \quad (12b)$$

where
$$\kappa = \left\{ \frac{1}{\epsilon} \left(\frac{e^2}{kT} \right) (\sum N_i^0 z_i^2) \right\}^{1/2} \quad (13a)$$

The expression of κ in terms of molar concentrations of ions is

$$\kappa = \left[\frac{1}{\epsilon} \left(\frac{e^2}{kT} \right) \{ \sum (N_A c_i) z_i^2 \} \right]^{1/2} = \left[\frac{2}{\epsilon} \left(\frac{e^2 N_A}{kT} \right) \mu \right]^{1/2} \quad (13b)$$

where N_A is the Avogadro's constant and μ is the ionic strength of the solution defined as $\frac{1}{2} \sum c_i z_i^2$.

The general solution of Eq. (12b) is given by

$$\phi = \frac{A \exp(-\kappa r)}{r} + \frac{A' \exp(\kappa r)}{r}$$

where A and A' are constants. In order to have finite value of ϕ for larger value of r and the fact that $\phi \rightarrow 0$ as $r \rightarrow \infty$, the constant A' must be set equal to zero. Thus, we have

$$\phi = \frac{A \exp(-\kappa r)}{r} \quad (14)$$

Expression of the Constant A

The condition of electroneutrality requires that the total charge of the atmosphere around a given charged ion ($z_i e$) must be equal and of opposite sign of the charge of the ion itself, i.e. $-z_i e$. The charge around the ion can be determined by considering the charge carried by a spherical shell of thickness dr at a distance r from the ion and then integrating the expression from the closest distance a that atmosphere and central ion may approach to a distance of infinity. Thus, we have

$$-z_i e = \int_a^{\infty} \rho(4\pi r^2) dr \quad (15)$$

The dependence of ρ on r can be found by substituting the expression of ϕ from Eq. (14) in Eq. (11). Thus, we have

$$\begin{aligned} \rho &= - \sum_i N_i^0 z_i^2 (e^2 / kT) \phi \\ &= - \sum_i N_i^0 z_i^2 (e^2 / kT) \left\{ \frac{A \exp(-\kappa r)}{r} \right\} \end{aligned}$$

which on making use of Eq. (13a) becomes

$$\rho = -A \kappa^2 \epsilon \frac{\exp(-\kappa r)}{r} \quad (16)$$

Substituting Eq. (16) in Eq. (15), we get

$$\begin{aligned} -z_i e &= - \int_a^{\infty} (4\pi A \kappa^2 \epsilon) r \exp(-\kappa r) dr \\ &= - (4\pi A \kappa^2 \epsilon) \left[r \frac{\exp(-\kappa r)}{(-\kappa)} - \frac{\exp(-\kappa r)}{\kappa^2} \right]_a^{\infty} \\ &= - (4\pi A \kappa^2 \epsilon) \left(\frac{\kappa a + 1}{\kappa^2} \right) \exp(-\kappa a) \\ &= -4\pi A \epsilon (\kappa a + 1) \exp(-\kappa a) \end{aligned}$$

$$\text{or} \quad A = \frac{z_i e}{4\pi \epsilon} \frac{\exp(\kappa a)}{\kappa a + 1} \quad (17)$$

Substituting Eq. (17) in Eq. (14), we get

$$\phi = \frac{z_i e}{4\pi \epsilon} \frac{\exp(\kappa a)}{1 + \kappa a} \frac{\exp(-\kappa r)}{r} \quad (18)$$

For the distance a of closest approach to the given ion, Eq. (18) becomes

$$\phi = \frac{z_i e}{4\pi\epsilon a} \frac{1}{1 + \kappa a} \quad \text{or} \quad \phi = \frac{z_i e}{4\pi\epsilon a} - \frac{z_i e}{4\pi\epsilon} \frac{\kappa}{1 + \kappa a} \quad (19)$$

Equation (19) indicates that the electrical potential is composed of two terms; the first term represents the potential due to the given ion itself and the second term represents the potential on the ion due to its ionic atmosphere, i.e.

$$\phi = \phi(\text{ion}) + \phi(\text{atmosphere}) \quad (20)$$

where
$$\phi(\text{ion}) = \frac{z_i e}{4\pi\epsilon a} \quad (21)$$

$$\phi(\text{atmosphere}) = - \frac{z_i e}{4\pi\epsilon} \frac{\kappa}{1 + \kappa a} \quad (22)$$

Relation between γ_i and μ

Substituting the expression of ϕ from Eq. (22) in Eq. (6), we get

$$kT \ln \gamma_i = - \int_0^{z_i e} \frac{(z_i e)}{4\pi\epsilon} \frac{\kappa}{1 + \kappa a} d(z_i e)$$

or
$$\ln \gamma_i = - \frac{z_i^2 e^2}{2kT(4\pi\epsilon)} \frac{\kappa}{1 + \kappa a} \quad (23a)$$

or
$$\log \gamma_i = - \frac{z_i^2 e^2}{(2.303)(2kT)(4\pi\epsilon)} \frac{\kappa}{1 + \kappa a}$$

Substituting the expression of κ (Eq. 13b), we get

$$\begin{aligned} \log \gamma_i &= - \frac{z_i^2 e^2}{(2.303)(2kT)(4\pi\epsilon)} \frac{\{(2e^2 N_A / \epsilon kT) \mu\}^{1/2}}{1 + \{(2e^2 N_A / \epsilon kT) \mu\}^{1/2} a} \\ &= - \frac{z_i^2 A \sqrt{\mu}}{1 + B a \sqrt{\mu}} \end{aligned} \quad (24)$$

where
$$A = \frac{e^2}{(2.303)(2kT)(4\pi\epsilon)} \left(\frac{2e^2 N_A}{\epsilon kT} \right)^{1/2} \quad (25)$$

$$B = \left(\frac{2e^2 N_A}{\epsilon kT} \right)^{1/2} \quad (26)$$

Expression of Mean Ionic Activity Coefficient

Since $\gamma_{\pm}^v = \gamma_+^{v_+} \gamma_-^{v_-}$, we get

$$v \log \gamma_{\pm} = v_+ \log \gamma_+ + v_- \log \gamma_-$$

Substituting $\log \gamma_+$ and $\log \gamma_-$ from Eq. (24), we get

$$v \log \gamma_{\pm} = - \frac{(v_+ z_+^2 + v_- z_-^2) A \sqrt{\mu}}{1 + B a \sqrt{\mu}} \quad (27)$$

Using the condition of electroneutrality $v_+ z_+ = -v_- z_-$, we get

$$\begin{aligned} v_+ z_+^2 + v_- z_-^2 &= v_+ \left(-\frac{v_- z_-}{v_+} \right)^2 + v_- z_-^2 = v_- z_-^2 \left(\frac{v_-}{v_+} + 1 \right) \\ &= \left(\frac{v_-}{v_+} \right) z_-^2 (v_+ + v_-) = -z_+ z_- (v_+ + v_-) \end{aligned}$$

With this Eq. (27) becomes

$$\log \gamma_{\pm} = \frac{(z_+ z_-) A \sqrt{\mu}}{1 + B a \sqrt{\mu}} \quad (\text{since } v = v_+ + v_-) \quad (28)$$

Numerical Values of the Constants A and B

The values of A and B for water at 298 K are as follows.

$$\begin{aligned} A &= \left[\frac{(1.6 \times 10^{-19} \text{ C})^2}{(2.303)(2)(1.38 \times 10^{-23} \text{ J K}^{-1})(298 \text{ K})(4)(3.14)(78 \times 8.854 \times 10^{-12} \text{ C}^2 \text{ s}^2 \text{ kg}^{-1} \text{ m}^{-3})} \right] \\ &\times \left[\frac{2(1.6 \times 10^{-19} \text{ C})^2 (6.023 \times 10^{23} \text{ mol}^{-1})}{(78 \times 8.854 \times 10^{-12} \text{ C}^2 \text{ s}^2 \text{ kg}^{-1} \text{ m}^{-3})(1.38 \times 10^{-23} \text{ J K}^{-1})(298 \text{ K})} \right]^{1/2} \\ &= (1.558 \times 10^{-10} \text{ m})(1.042 \times 10^8 \text{ m}^{1/2} \text{ mol}^{1/2}) \\ &= 0.01624 \text{ m}^{3/2} \text{ mol}^{-1/2} = (0.01624)(10^{3/2} \text{ dm}^{3/2} \text{ mol}^{-1/2}) \\ &= 0.514 \text{ mol}^{-1/2} \text{ dm}^{3/2} \\ B &= \left[\frac{2(1.6 \times 10^{-19} \text{ C})^2 (6.023 \times 10^{23} \text{ mol}^{-1})}{(78 \times 8.854 \times 10^{-12} \text{ C}^2 \text{ s}^2 \text{ kg}^{-1} \text{ m}^{-3})(1.38 \times 10^{-23} \text{ J K}^{-1})(298 \text{ K})} \right]^{1/2} \\ &= 1.042 \times 10^8 \text{ m}^{1/2} \text{ mol}^{-1/2} = 1.042 \times 10^8 (10 \text{ dm})^{1/2} \text{ mol}^{-1/2} \\ &= 3.30 \times 10^8 \text{ dm}^{1/2} \text{ mol}^{-1/2} \end{aligned}$$

Limiting and Extended Forms of the Debye-Hückel Equation

For a very dilute solution $B a \sqrt{\mu} \ll 1$, hence Eq. (28) simplifies to

$$\log \gamma_{\pm} = -z_+ |z_-| A \sqrt{\mu} \quad (29)$$

Equation (29) is known as the limiting form of the Debye-Hückel equation. According to Eq. (28), $\log \gamma_{\pm}$ decreases with increase in the ionic strength of the solution. In actual practice, activity coefficients first decrease and show a turning

point at some value of μ , after which they progressively increase. Equation (28) may be modified by adding a term which increases with increase in ionic strength such as

$$\log \gamma_{\pm} = - \frac{A z_+ |z_-| \sqrt{\mu}}{1 + Ba\sqrt{\mu}} + b\mu \quad (30)$$

Equation (30) is usually referred to as extended Debye-Hückel equation.

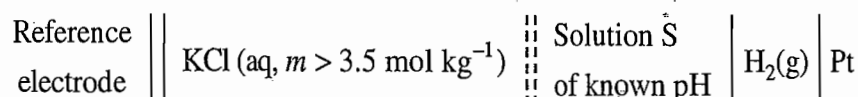
Annexure III

Operation of Definition of pH

The defining equation $\text{pH} = -\log a_{\text{H}}$ (or commonly used definition $\text{pH} = -\log \{[\text{H}^+]/\text{mol dm}^{-3}\}$ in dilute solution) is replaced by the following operational definition.

$$\text{pH}(X) = \text{pH}(S) - \frac{E_S - E_X}{(RT \ln 10)/F}$$

where E_S is the emf of the cell



and E_X is the emf of the cell in which the solution S in the above cell is replaced by the solution X of unknown pH.

The various solutions S at different temperatures are available. For example, the following aqueous solutions at 25 °C may be used

- | | |
|--|------------|
| (i) KH tartrate (saturated solution) | pH = 3.557 |
| (ii) KH phthalate ($m = 0.05 \text{ mol kg}^{-1}$) | pH = 4.008 |
| (ii) KH_2PO_4 ($m = 0.025 \text{ mol kg}^{-1}$) | |
| + Na_2HPO_4 ($m = 0.25 \text{ mol kg}^{-1}$) | pH = 6.865 |
| (iv) KH_2PO_4 ($m = 0.008695 \text{ mol kg}^{-1}$) | |
| + Na_2HPO_4 ($m = 0.03043 \text{ mol kg}^{-1}$) | pH = 7.413 |
| (v) $\text{Na}_2\text{B}_4\text{O}_7$ ($m = 0.01 \text{ mol kg}^{-1}$) | pH = 9.180 |

The reference electrode is usually a calomel electrode, silver | silver chloride electrode or a thallium amalgam | thalious chloride electrode. In practice, a glass electrode is used in place of hydrogen electrode.

In the restricted range of dilute aqueous solution (concentration $< 0.1 \text{ mol dm}^{-3}$) which is neither strongly acidic or alkaline ($2 < \text{pH} < 12$), the above procedure yields pH which lies in the range

$$\text{pH} = -\log \{([\text{H}^+]/\text{mol dm}^{-3}) \gamma_{\pm}\} \pm 0.02$$

where γ_{\pm} denotes the mean ionic activity coefficient of a typical unit-univalent electrolyte in the solution.

Appendix I

Units and Conversion Factors

CGS Units vis-à-vis SI Units

<i>Physical quantity</i>	<i>CGS units</i>		<i>SI units</i>	
	<i>Name</i>	<i>Symbol</i>	<i>Name</i>	<i>Symbol</i>
length	centimetre	cm	metre	m
	Angstrom (10^{-8} cm)	Å		
mass	gram	g	kilogram	kg
time	second	s	second	s
temperature	{ celsius	{ °C	kelvin	K
	{ kelvin			
energy	calorie	cal	joule	J
	kilocalorie	kcal	kilojoule	kJ
	litre-atmosphere	lit-atm		
	ergs	erg		
electric current	ampere	A	ampere	A

Units Derived From the Basic SI Units

<i>Physical quantity</i>	<i>Name of unit</i>	<i>Symbol and definition</i>
force	newton	$N = \text{kg m s}^{-2}$ or J m^{-1}
energy	joule	$J = \text{kg m}^2 \text{s}^{-2}$ or N m
electric charge	coulomb	$C = \text{A s}$
potential difference	volt	$V = \text{kg m}^2 \text{s}^{-3} \text{A}^{-1}$ or $\text{J A}^{-1} \text{s}^{-1}$
resistance	ohm	$\Omega = \text{kg m}^2 \text{s}^{-3} \text{A}^{-2}$ or V A^{-1}
frequency	hertz = cycle per second	Hz
area	square metre	m^2
volume	cubic metre	m^3
density	kilogramme per cubic metre	kg m^{-3}
velocity	metre per second	m s^{-1}
angular velocity	radian per second	rad s^{-1}
acceleration	metre per square second	m s^{-2}
pressure	newton per square metre or pascal	N m^{-2} or Pa

Conversion of CGS Units to SI Units

Quantity	Unit	Equivalent*
length	Å	10^{-10} m = 10^{-1} nm = 10^2 pm
volume	litre	10^{-3} m ³ = dm ³
force	dyne	10^{-5} N
energy	erg	10^{-7} J
	cal	4.184 J
	eV	1.602×10^{-19} J
	eV/mole	96.5 kJ mol ⁻¹
pressure	atmosphere	101.325 kN m ⁻²
	mmHg (or Torr)	133.322 N m ⁻²
	bar (10 ⁶ dynes/cm ²)	10^5 N m ⁻²
viscosity	poise	10^{-1} kg m ⁻¹ s ⁻¹

* Symbols used for fractions and multiples are as follows.

Fraction	Prefix	Symbol	Multiples	Prefix	Symbol
10^{-1}	deci	d	10	deca	da
10^{-2}	centi	c	10^2	hecto	h
10^{-3}	milli	m	10^3	kilo	k
10^{-6}	micro	μ	10^6	mega	M
10^{-9}	nano	n	10^9	giga	G
10^{-12}	pico	p	10^{12}	tera	T
10^{-15}	femto	f	10^{15}	peta	P

Values of Some Physico-Chemical Constants

Constant	SI units
Acceleration of gravity, g	9.806 65 m s ⁻²
Avogadro's constant, N_A	$6.022 \ 05 \times 10^{23}$ mol ⁻¹
Bohr magneton, μ_B	$9.274 \ 08 \times 10^{-24}$ A m ²
Bohr radius, a_0	$5.2971 \ 77 \times 10^{-11}$ m
Boltzmann constant, k	$1.380 \ 66 \times 10^{-23}$ J K ⁻¹
Elementary charge, e	$1.602 \ 19 \times 10^{-19}$ C
Electronic rest mass, m_e	$9.109 \ 53 \times 10^{-31}$ kg
Faraday constant, F	$9.648 \ 46 \times 10^4$ C mol ⁻¹
Gas constant, R	8.314 J K ⁻¹ mol ⁻¹
Molar volume of ideal gas at 0 °C and 1 atm, V_m	$2.241 \ 4 \times 10^{-2}$ m ³ mol ⁻¹
Planck's constant, h	$6.626 \ 18 \times 10^{-34}$ J s
Proton rest mass, m_p	$1.672 \ 65 \times 10^{-27}$ kg
Vacuum speed of light, c	$2.997 \ 925 \times 10^8$ m s ⁻¹
Standard atmospheric pressure	101.325 kPa
Permittivity of vacuum, ϵ_0	$8.854 \ 188 \times 10^{-12}$ C ² s ² kg ⁻¹ m ⁻²
Relative permittivity of water at 25 °C	78

Index

- Absorption coefficient, 114
- Activity, 559
- Activity coefficient, 560
- Amalgam electrode, 422
- Amount fraction, 35
- Anode, 410
- Ascending type solid solution, 287
- Azeotrope, 175

- Benzoic acid distribution, 196
- Binary liquid solution
 - fractional distillation of, 144, 151
 - temperature versus amount fraction curves of, 155
 - vapour pressure versus composition curves of, 135, 163
- Binodal curve, 347
- Boiling point
 - diagram, 155
 - elevation constant, 52
 - elevation of, 50
 - pressure dependence of, 5
- Bubble-cap column, 161

- Calomel half-cell, 425, 463
- Cast iron, 334
- Cathode, 409
- Cell
 - classification of, 409
 - concentration, 514
 - diagram, 417, 427
 - electromotive force of a, 414
 - electrochemical, 409
 - electrolytic, 409
 - formulation of a, 409
 - fuel, 530
 - galvanic, 410
 - reaction, 426
 - reversible and irreversible, 413
 - sign convention, 412
 - with liquid junction, 519
 - without liquid junction, 514

- Chemical potential
 - and criterion of equilibrium, 3
 - in ideal solution, 45
 - pressure dependence of, 4
 - temperature dependence of, 3
- Clapeyron equation, 6
 - applied to liquid-vapour equilibrium, 11
 - applied to solid-liquid equilibrium, 8
 - applied to solid-solid equilibrium, 20
 - applied to solid-vapour equilibrium, 11
 - integrated form of, 9, 12
- Clapeyron-Clausius equation, 12
- Coefficient of solubility, 114
- Colligative properties, 34
 - of electrolytic solution, 77
 - of strong and weak electrolytes, 75
 - origin, 47
- Component
 - definition of, 95
- Composition-pressure diagram, 135, 163
- Composition-temperature diagram, 155
- Compound
 - congruent, 267
 - incongruent, 273
- Concentration cell
 - with liquid junction potential, 519
 - without liquid junction potential, 514
- Congruent melting point, 267
- Conjugate solutions, 179
- Consolute temperature, 182
 - effect of impurity on, 187
 - effect of pressure on, 186
 - lower, 184
 - upper, 182
- Critical solution temperature, 182
- Cryohydrate, 311
- Cryoscopic constant, 59

- Daniell cell, 410
- Debye-Hückel law, 563, 569
- Degree of freedom, 97

- Depression of freezing point, 57
- Distillation
 - fractional, 157
 - steam, 192
- Distribution coefficient, 194
- Distribution law
 - application of phase rule, 194
 - definition, 194
 - thermodynamic derivation of, 195
 - limitation of, 196
- Donnan membrane equilibrium, 90
- Dry cell, 528
- Duhem-Margules equation, 124, 167

- Ebullioscopic constant, 52
- Edison cell, 530
- Electrical and electrochemical
 - potentials, 418
- Electrochemical cells
 - classification of, 409
 - sign convention of, 412
 - standard state of, 421
- Electrode
 - gas-ion, 419
 - glass, 490
 - mercury-mercurous chloride-chloride ion, 463
 - mercury-mercuric oxide-hydroxide ion, 424, 464
 - mercury-mercurous sulphate-sulphate ion, 464
 - metal amalgam-metal ion, 422
 - metal-insoluble salt-anion, 423
 - metal-metal ion, 421
 - oxidation-reduction, 425
 - potential, 436
 - silver-silver chloride-chloride, 423, 463
 - types of, 419
- Electrolytic cell
 - sign convention, 409
- Electromotive force
 - definition, 414
 - determination of, 414
 - equilibrium constant from, 478
 - ionic product from, 484
 - measurement of, 415
 - Nernst equation and, 426
 - pH from, 486
 - solubility product from, 480
 - temperature coefficient of, 470
 - thermodynamic data from, 470
- Elevation of boiling point, 50
- Enantiotropy, 225

- Equilibrium between phases, 1
- Eutectic
 - point, 255
 - phase diagram, 250

- Ferric-ferrous half-cell, 425
- First-order phase transition, 23
- Fractional crystallization, 290
- Fractional distillation, 157
 - isobaric, 157
 - isothermal, 144
- Fractionating column, 161
- Freezing point
 - depression constant, 59
 - depression of, 57
- Fuel cell, 530

- Galvanic cell, 410
- Gas-ion half-cell, 419
- Gibbs-Duhem equation, 167
- Glass electrode, 490

- Half-cell, 417
 - potentials, 436
- Henry's law, 115
 - and distribution law, 118
 - and Raoult's law, 120
 - constant, 121
 - derivation from kinetic-molecular theory, 126
 - for solute, 124
 - temperature dependence of, 129
 - thermodynamic derivation of, 117
- Hydrogen-hydrogen ion half-cell, 420

- Ideal law of solubility, 84
- Ideal solution, 130
 - boiling point, 153
 - isobaric fractional distillation, 157
 - isothermal fractional distillation, 144
 - temperature-composition curve of, 152
 - thermodynamic of, 130
 - vapour pressure curves of, 135
 - vapour pressure of, 134
- Ideally dilute solution, 164
- Ideal solubility of gases, 112
- Immiscible liquids, 192
- Incongruent fusion, 273
- Ionic product of water from emf, 490
- Ionic strength, 565
- Isobaric fractional distillation, 157
- Isopleth, 251

- Isothermal fractional distillation, 144
 Konowaloff's rule, 170, 175
 Lambda transition, 25
 Lead storage cell, 529
 Leclanche cell, 528
 Lever rule, 141, 182, 259
 Liquidus curve, 140, 253
 Liquid junction potential, 521
 Lower consolute temperature, 184
 Lowering of vapour pressure, 41

 Maximum type solid solution, 294
 Mean activity, 562
 Mean activity coefficient, 562
 Melting point
 congruent, 267
 incongruent, 273
 Mercury-mercuric oxide-hydroxide half-cell, 424, 464
 Mercury-mercurous sulphate half-cell, 464
 Metal amalgam-metal ion half-cell, 422
 Metal-insoluble salt-anion half-cell, 423
 Metal-metal ion half-cell, 421
 Minimum type solid solution, 293
 Molality, 35
 Molarity, 35
 Molar mass determination
 mass average, 69
 number average, 69
 from elevation of boiling point, 57
 from osmotic pressure, 68
 from relative lowering of vapour pressure, 44
 Monotropy, 230

 Nernst distribution law, 194
 Nernst equation, 420
 Nicad cell, 529
 Nonideal solution, 162
 fractional distillation of, 173
 positive and negative deviations, 162, 163
 temperature-composition diagram of, 172
 Number of components, 95

 One-component system, 217
 Osmosis, 64
 Osmotic pressure, 49, 64
 Oxidation-reduction half-cell, 425

 Partially miscible liquids, 179
 Critical solution temperature, 182
 distillation of, 188
 lower consolute temperature, 184
 phase rule applied to, 183
 temperature-composition diagram, 181
 theoretical consideration, 179
 Peritectic
 reaction, 273
 temperature, 273
 pH determination, 486
 Phase, 95
 Phase diagram of
 auric-lead system, 281
 calcium-aluminium system, 282
 calcium chloride-water system, 319
 carbon dioxide, 12
 congruently melting compound, 267
 cupric nitrate-water system, 320
 ferric chloride-water system, 312
 ferrous sulphate-water system, 320
 incongruently melting compound, 272
 iron system, 333
 lead-antimony system, 260
 one-component systems, 217
 peritectic system, 273
 potassium bromide-water system, 255
 phosphorus system, 232
 potassium iodide-water system, 311
 silicone-germanium system, 292
 sodium chloride-water system, 319
 sodium hydroxide-water system, 322
 sodium iodide-water system, 320
 sodium-potassium system, 277
 sodium sulphate-water system, 317
 solid solution, 284
 sulphur, 227
 sulphuric acid-water system, 315
 three-component systems, 336
 two-component systems, 245
 water, 220
 Phase equilibria
 thermodynamic criterion of, 1
 Phase rule
 derivation for nonreactive system, 98
 derivation for reactive system, 101
 Phase transition first-order, 23
 second-order, 25
 Plait point, 347
 Polymorphism, 225
 Potential
 chemical, 2
 electrical, 418

- electrochemical, 418
- half-cell table of, 437
- Potentiometric titrations, 493
 - acid-base, 495
 - precipitation, 510
 - redox, 498
- Primary cells, 528

- Quinhydrone electrode, 487

- Raoult's law, 42
 - and Henry's law, 120
 - for solvent, 124
 - kinetic-molecular treatment of, 126
- Rast method, 89
- Redox indicators, 507
- Reduction potentials, 415
- Reference half-cell, 435, 462
- Relative lowering of vapour pressure, 43
- Reversible cells, 413
- Retrograde solubility, 349
- Ruben-Mallory cell, 529

- Salt bridge, 411, 526
- Salting out, 396
- Schreinemakers residue method, 398
- Secondary cells, 529
- Second-order phase transition, 23, 25
- SI units, 571
- Silver-cadmium cell, 530
- Silver-silver chloride half-cell, 423, 463
- Silver-zinc cell, 530
- Solid solution
 - ascending type, 287
 - maximum type, 294
 - minimum type, 293
- Solidus curve, 253
- Solubility of
 - gases in liquids, 84
 - solute in ideal solution, 83
- Solubility of gases
 - pressure dependence of, 115
 - temperature dependence of, 113
- Solubility product from emf data, 455, 480
- Solute, 34
- Solutions
 - dilute, 36
 - ideal, 128
 - ideally dilute, 164
 - nonideal, 162
 - solid, 284
- Solvent extraction, 203
- Standard
 - half-cell potentials, table of, 437
 - potential, 434
 - state, 421
- Stannic-stannous half cell, 426
- Steam distillation, 192
- Steel, 335
- Study of equilibria by distribution measurement, 200
- Systems
 - nonreactive, 98
 - one-component, 217
 - reactive, 101
 - three-component, 336
 - two-component, 245

- Theoretical plate, 158
- Thermal analysis, 246
- Thermodynamic criterion of phase equilibria, 1
- Thermodynamic data from emf measurements, 470
- Thermodynamics of an ideal solution, 130
- Three-component systems, 336
- Tie line, 140
- Transference number, 520
- Triangle plot, 336
- Triple point, 221
- Trouton's rule, 15
- Two-component systems, 245

- Van't Hoff equation, 67
- Van't Hoff factor, 75
- Vapour pressure
 - effect of pressure on, 26
 - lowering of, 41
 - of an ideal binary liquid system, 134
 - of a nonideal solution, 162
 - relative lowering of, 43
- Vaporous curve, 173
- Variance of a system, 97

- Water, phase diagram of, 220
- Weston standard cell, 416

- Zone refining, 291